

# National Testing Agency

**Question Paper Name :** BDES 05th Feb 2024 Shift 1  
**Subject Name :** BDES  
**Creation Date :** 2024-02-05 17:53:42  
**Duration :** 120  
**Total Marks :** 100  
**Display Marks:** Yes

## BDES

**Group Number :** 1  
**Group Id :** 40585921  
**Group Maximum Duration :** 0  
**Group Minimum Duration :** 120  
**Show Attended Group? :** No  
**Edit Attended Group? :** No  
**Break time :** 0  
**Group Marks :** 100  
**Is this Group for Examiner? :** No  
**Examiner permission :** Cant View  
**Show Progress Bar? :** No

## Communication Ability And English Comprehension

**Section Id :** 405859113  
**Section Number :** 1

<b>Section type :</b>	Online
<b>Mandatory or Optional :</b>	Mandatory
<b>Number of Questions :</b>	31
<b>Number of Questions to be attempted :</b>	31
<b>Section Marks :</b>	40
<b>Enable Mark as Answered Mark for Review and Clear Response :</b>	Yes
<b>Maximum Instruction Time :</b>	0
<b>Sub-Section Number :</b>	1
<b>Sub-Section Id :</b>	405859133
<b>Question Shuffling Allowed :</b>	No
<b>Is Section Default? :</b>	null

**Question Id : 4058591998 Question Type : COMPREHENSION Sub Question Shuffling Allowed :  
Yes Group Comprehension Questions : No Question Pattern Type : NonMatrix Calculator :  
None Response Time : N.A Think Time : N.A Minimum Instruction Time : 0**

**Question Numbers : (1 to 5)**

Question Label : Comprehension

Read the following passage and answer the questions given below:

As cricket fever sweeps the nation, restaurants and cinemas are bracing for a surge in revenues and full houses this Sunday when India takes on Australia in the cricket World Cup final. Eateries are pulling out all the stops to make the most of the high-stakes event, with special menus, discounts, and games planned alongside the match. A restaurant in Delhi is already fielding calls from eager fans trying to book a spot in advance. "Everybody at the restaurant is excited because India is in the final. We are putting up massive LED screen at many points in the unit, which will make it a lovely destination to enjoy the match in a group."

Another restaurant in Gurugram's Cyberhub is offering a 15 per cent discount to customers who come in wearing the Indian cricket jersey to the screening and will also have a dhol waala on the spot. The sponsors created excitement not only for consumers but also for the team. We witnessed a massive jump in footfall during all the World Cup matches and needless to say that all India matches were housefull.

We are expecting a 100 per cent rise in footfall over usual Sundays, and queries have already started pouring in since last Friday. A rise of 100 per cent in revenue on the night of the World Cup final is also expected.

Eateries in Mumbai are organising "Powerplay at the Dining Table", where patrons can predict team India's runs during key overs and savour victory with exclusive dishes.

Embrace the sporting spirit as you cover the cost of your wagered item if luck doesn't swing your way.

The restaurant is also offering exclusive desserts for the occasion: 'The King Kohli', a tart shell field with caramelised white chocolate ganache, and roasted macadamia nuts, topped with a coffee mousse, and an almond and cocoa sponge, vanilla bean mascarpone cream, and 64 per cent manjari dark chocolate mousse, all encased in a red glaze.

Cafe C is offering exclusive match-day deals of 3+1 on soft drinks. "We aren't sold out, but we are getting reservations at a high speed for the screening on Sunday. We are expecting a 30-40 per cent increase in revenue on the day."

A cinema chain, too, is hoping to recreate a stadium-like atmosphere for fans by screening the final match at its cinemas in more than 45 cities. "Since the second semifinal between Australia and South Africa was held on November 2016, we opened advances for the finals only late Thursday night; over 45 per cent advance tickets have already been sold out our theatres," says the executive director.

"This will be a grand festival taking the thrill of the World Cup to newer heights. Fans can enjoy the unlimited refills of popcorn and soft drink while cheering for India," adds the director.

### Sub questions

Question Number : 1 Question Id : 4058591999 Question Type : MCQ Option Shuffling : Yes Is

Question Mandatory : No Calculator : None Response Time : N.A Think Time : N.A Minimum

Instruction Time : 0

Correct Marks : 1 Wrong Marks : 0.25

Choose the correct statement from the following :

**Options :**

4058596531. Eateries are pulling out all the stops to prepare themselves for surge in revenues and full houses owing to World Cup final.
4058596532. A restaurant is fielding eager calls for cricket match tickets.
4058596533. Another restaurant is offering 3+1 offer on cricket match tickets.
4058596534. A cinema chain is preparing to host the final match.

**Question Number : 2 Question Id : 4058592000 Question Type : MCQ Option Shuffling : Yes Is Question Mandatory : No Calculator : None Response Time : N.A Think Time : N.A Minimum Instruction Time : 0**

**Correct Marks : 1 Wrong Marks : 0.25**

Choose the correct option that means the same as :

"Pulling out all the stops"

**Options :**

4058596535. keep separately
4058596536. no holds barred
4058596537. to pull something or somebody in a particular way
4058596538. sell by date

**Question Number : 3 Question Id : 4058592001 Question Type : MCQ Option Shuffling : Yes Is Question Mandatory : No Calculator : None Response Time : N.A Think Time : N.A Minimum Instruction Time : 0**

**Correct Marks : 1 Wrong Marks : 0.25**

Choose the word that means :

"Sound of the steps made by somebody walking"

**Options :**

4058596539. patrons

4058596540. powerplay

4058596541. macadamia

4058596542. footfall

**Question Number : 4 Question Id : 4058592002 Question Type : MCQ Option Shuffling : Yes Is  
Question Mandatory : No Calculator : None Response Time : N.A Think Time : N.A Minimum  
Instruction Time : 0**

**Correct Marks : 1 Wrong Marks : 0.25**

Choose the word that means the same as :

'to relish something'

**Options :**

4058596543. savour

4058596544. sporting

4058596545. embrace

4058596546. desserts

**Question Number : 5 Question Id : 4058592003 Question Type : MCQ Option Shuffling : Yes Is  
Question Mandatory : No Calculator : None Response Time : N.A Think Time : N.A Minimum  
Instruction Time : 0**

**Correct Marks : 1 Wrong Marks : 0.25**

Identify the odd one out

**Options :**

4058596547. mascarpone

4058596548. sponsor

4058596549. ganache

4058596550. cocoa

**Question Id : 4058591998 Question Type : COMPREHENSION Sub Question Shuffling Allowed :**

**Yes Group Comprehension Questions : No Question Pattern Type : NonMatrix Calculator :**

**None Response Time : N.A Think Time : N.A Minimum Instruction Time : 0**

**Question Numbers : (1 to 5)**

Question Label : Comprehension

Read the following passage and answer the questions given below:

As cricket fever sweeps the nation, restaurants and cinemas are bracing for a surge in revenues and full houses this Sunday when India takes on Australia in the cricket World Cup final. Eateries are pulling out all the stops to make the most of the high-stakes event, with special menus, discounts, and games planned alongside the match. A restaurant in Delhi is already fielding calls from eager fans trying to book a spot in advance. "Everybody at the restaurant is excited because India is in the final. We are putting up massive LED screen at many points in the unit, which will make it a lovely destination to enjoy the match in a group."

Another restaurant in Gurugram's Cyberhub is offering a 15 per cent discount to customers who come in wearing the Indian cricket jersey to the screening and will also have a dhol waala on the spot. The sponsors created excitement not only for consumers but also for the team. We witnessed a massive jump in footfall during all the World Cup matches and needless to say that all India matches were housefull.

We are expecting a 100 per cent rise in footfall over usual Sundays, and queries have already started pouring in since last Friday. A rise of 100 per cent in revenue on the night of the World Cup final is also expected.

Eateries in Mumbai are organising "Powerplay at the Dining Table", where patrons can predict team India's runs during key overs and savour victory with exclusive dishes.

Embrace the sporting spirit as you cover the cost of your wagered item if luck doesn't swing your way.

The restaurant is also offering exclusive desserts for the occasion: 'The King Kohli', a tart shell field with caramelised white chocolate ganache, and roasted macadamia nuts, topped with a coffee mousse, and an almond and cocoa sponge, vanilla bean mascarpone cream, and 64 per cent manjari dark chocolate mousse, all encased in a red glaze.

Cafe C is offering exclusive match-day deals of 3+1 on soft drinks. "We aren't sold out, but we are getting reservations at a high speed for the screening on Sunday. We are expecting a 30-40 per cent increase in revenue on the day."

A cinema chain, too, is hoping to recreate a stadium-like atmosphere for fans by screening the final match at its cinemas in more than 45 cities. "Since the second semifinal between Australia and South Africa was held on November 2016, we opened advances for the finals only late Thursday night; over 45 per cent advance tickets have already been sold out our theatres," says the executive director.

"This will be a grand festival taking the thrill of the World Cup to newer heights. Fans can enjoy the unlimited refills of popcorn and soft drink while cheering for India," adds the director.

### Sub questions

Question Number : 1 Question Id : 4058591999 Question Type : MCQ Option Shuffling : Yes Is

Question Mandatory : No Calculator : None Response Time : N.A Think Time : N.A Minimum

Instruction Time : 0

Correct Marks : 1 Wrong Marks : 0.25

Choose the correct statement from the following :

**Options :**

4058596531. Eateries are pulling out all the stops to prepare themselves for surge in revenues and full houses owing to World Cup final.
4058596532. A restaurant is fielding eager calls for cricket match tickets.
4058596533. Another restaurant is offering 3+1 offer on cricket match tickets.
4058596534. A cinema chain is preparing to host the final match.

**Question Number : 2 Question Id : 4058592000 Question Type : MCQ Option Shuffling : Yes Is Question Mandatory : No Calculator : None Response Time : N.A Think Time : N.A Minimum Instruction Time : 0**

**Correct Marks : 1 Wrong Marks : 0.25**

Choose the correct option that means the same as :

"Pulling out all the stops"

**Options :**

4058596535. keep separately
4058596536. no holds barred
4058596537. to pull something or somebody in a particular way
4058596538. sell by date

**Question Number : 3 Question Id : 4058592001 Question Type : MCQ Option Shuffling : Yes Is Question Mandatory : No Calculator : None Response Time : N.A Think Time : N.A Minimum Instruction Time : 0**

**Correct Marks : 1 Wrong Marks : 0.25**



Choose the word that means :

"Sound of the steps made by somebody walking"

**Options :**

4058596539. patrons

4058596540. powerplay

4058596541. macadamia

4058596542. footfall

**Question Number : 4 Question Id : 4058592002 Question Type : MCQ Option Shuffling : Yes Is  
Question Mandatory : No Calculator : None Response Time : N.A Think Time : N.A Minimum  
Instruction Time : 0**

**Correct Marks : 1 Wrong Marks : 0.25**

Choose the word that means the same as :

'to relish something'

**Options :**

4058596543. savour

4058596544. sporting

4058596545. embrace

4058596546. desserts

**Question Number : 5 Question Id : 4058592003 Question Type : MCQ Option Shuffling : Yes Is  
Question Mandatory : No Calculator : None Response Time : N.A Think Time : N.A Minimum  
Instruction Time : 0**

**Correct Marks : 1 Wrong Marks : 0.25**

Identify the odd one out

**Options :**

4058596547. mascarpone

4058596548. sponsor

4058596549. ganache

4058596550. cocoa

<b>Sub-Section Number :</b>	2
<b>Sub-Section Id :</b>	405859134
<b>Question Shuffling Allowed :</b>	No
<b>Is Section Default? :</b>	null

**Question Id : 4058592004 Question Type : COMPREHENSION Sub Question Shuffling Allowed :**

**Yes Group Comprehension Questions : No Question Pattern Type : NonMatrix Calculator :**

**None Response Time : N.A Think Time : N.A Minimum Instruction Time : 0**

**Question Numbers : (6 to 11)**

**Question Label : Comprehension**

Assam, lying between 89° 42' E and 96° E longitudes and 24° 8' N and 28° 2' N latitudes, occupies the central location in north-east India. With its western border directly connected to West Bengal, the State is also regarded as the gateway to the north-eastern States. During the epic period, the State was known as Pragjyotisha. It meant, 'the land of eastern astronomy'. Subsequently, the State came to be known as Kamarupa as testified to by the Allahabad Pillar Inscription of King Samudragupta. This name remained in vogue till about the 12th century CE. From the 13th century CE the State came to be ruled by the Ahoms. According to some scholars, the State owes its present name to them. However, going by another interpretation, the State may have drawn its current name from the Sanskrit word asoma, which means 'peerless' or 'unparalleled'. The Ahoms remained in power for about six hundred years. Thereafter, the State passed into the hands of the Burmese. However, the British seized it from them through the Treaty of Yandaboo signed in 1826 CE. Finally, the State was incorporated into the Indian Union. The present State of Assam, covering an area of 78,438 square kilometers, mainly consists of two extensive river valleys: the valley formed by the River Brahmaputra and its tributaries in the north; and the valley formed by the River Barak and its tributaries in the south. Between these two valleys run the long range of hills (Karbi, North Cachar and Barail), which account for much of the State's greenery and wildlife. It is because of this unique topographical feature that the State is also known as the 'Land of Red River and Blue Hills'.

### Sub questions

**Question Number : 6 Question Id : 4058592005 Question Type : MCQ Option Shuffling : Yes Is Question Mandatory : No Calculator : None Response Time : N.A Think Time : N.A Minimum Instruction Time : 0**

**Correct Marks : 1 Wrong Marks : 0.25**

Assam is regarded as the gateway to north - eastern states as -

**Options :**

4058596551. it occupies the central location in North - East India.

4058596552. its western border is directly connected to West - Bengal.

4058596553. during the epic period it was known as Pragjyotisha.

4058596554. it is a unique state in the whole of India.

**Question Number : 7 Question Id : 4058592006 Question Type : MCQ Option Shuffling : Yes Is**

**Question Mandatory : No Calculator : None Response Time : N.A Think Time : N.A Minimum**

**Instruction Time : 0**

**Correct Marks : 1 Wrong Marks : 0.25**

The testimony that Assam was known as Kamarupa comes from -

**Options :**

4058596555. Pragjyotisha

4058596556. Allahabad Pillar Inscription

4058596557. 12<sup>th</sup> Century CE

4058596558. Ahoms

**Question Number : 8 Question Id : 4058592007 Question Type : MCQ Option Shuffling : Yes Is**

**Question Mandatory : No Calculator : None Response Time : N.A Think Time : N.A Minimum**

**Instruction Time : 0**

**Correct Marks : 1 Wrong Marks : 0.25**

Assam owes its present name to -

**Options :**

4058596559. King Samudragupta

4058596560. Epic Period

4058596561. Ahoms

4058596562. Scholars

**Question Number : 9 Question Id : 4058592008 Question Type : MCQ Option Shuffling : Yes Is**

**Question Mandatory : No Calculator : None Response Time : N.A Think Time : N.A Minimum**

**Instruction Time : 0**

**Correct Marks : 1 Wrong Marks : 0.25**

A Sanskrit word for 'peerless' is -

**Options :**

4058596563. Pragjyotisha

4058596564. Kamarupa

4058596565. Ahom

4058596566. Asoma

**Question Number : 10 Question Id : 4058592009 Question Type : MCQ Option Shuffling : Yes Is**

**Question Mandatory : No Calculator : None Response Time : N.A Think Time : N.A Minimum**

**Instruction Time : 0**

**Correct Marks : 1 Wrong Marks : 0.25**

The treaty of Yandaboo resulted in

**Options :**

4058596567. British taking over West Bengal from the Burmese

4058596568. Indian Union taking over Assam from the British

4058596569. Indian Union taking over Assam from the Burmese

4058596570. British taking over Assam from the Burmese

**Question Number : 11 Question Id : 4058592010 Question Type : MCQ Option Shuffling : Yes Is**

**Question Mandatory : No Calculator : None Response Time : N.A Think Time : N.A Minimum**

**Instruction Time : 0**

**Correct Marks : 1 Wrong Marks : 0.25**

Find one word from the passage for the given group of words 'a stream that flows into a larger river or a lake'.

**Options :**

4058596571. longitude

4058596572. incorporate

4058596573. valley

4058596574. tributary

**Question Id : 4058592004 Question Type : COMPREHENSION Sub Question Shuffling Allowed :**

**Yes Group Comprehension Questions : No Question Pattern Type : NonMatrix Calculator :**

**None Response Time : N.A Think Time : N.A Minimum Instruction Time : 0**

**Question Numbers : (6 to 11)**

Question Label : Comprehension

Assam, lying between  $89^{\circ} 42'$  E and  $96^{\circ}$  E longitudes and  $24^{\circ} 8'$  N and  $28^{\circ} 2'$  N latitudes, occupies the central location in north-east India. With its western border directly connected to West Bengal, the State is also regarded as the gateway to the north-eastern States. During the epic period, the State was known as Pragjyotisha. It meant, 'the land of eastern astronomy'. Subsequently, the State came to be known as Kamarupa as testified to by the Allahabad Pillar Inscription of King Samudragupta. This name remained in vogue till about the 12th century CE. From the 13th century CE the State came to be ruled by the Ahoms. According to some scholars, the State owes its present name to them. However, going by another interpretation, the State may have drawn its current name from the Sanskrit word asoma, which means 'peerless' or 'unparalleled'. The Ahoms remained in power for about six hundred years. Thereafter, the State passed into the hands of the Burmese. However, the British seized it from them through the Treaty of Yandaboo signed in 1826 CE. Finally, the State was incorporated into the Indian Union. The present State of Assam, covering an area of 78,438 square kilometers, mainly consists of two extensive river valleys: the valley formed by the River Brahmaputra and its tributaries in the north; and the valley formed by the River Barak and its tributaries in the south. Between these two valleys run the long range of hills (Karbi, North Cachar and Barail), which account for much of the State's greenery and wildlife. It is because of this unique topographical feature that the State is also known as the 'Land of Red River and Blue Hills'.

## Sub questions

Question Number : 6 Question Id : 4058592005 Question Type : MCQ Option Shuffling : Yes Is

Question Mandatory : No Calculator : None Response Time : N.A Think Time : N.A Minimum

Instruction Time : 0

Correct Marks : 1 Wrong Marks : 0.25

Assam is regarded as the gateway to north - eastern states as -

Options :

4058596551. it occupies the central location in North - East India.

4058596552. its western border is directly connected to West - Bengal.

4058596553. during the epic period it was known as Pragjyotisha.

4058596554. it is a unique state in the whole of India.

Question Number : 7 Question Id : 4058592006 Question Type : MCQ Option Shuffling : Yes Is

Question Mandatory : No Calculator : None Response Time : N.A Think Time : N.A Minimum

Instruction Time : 0

Correct Marks : 1 Wrong Marks : 0.25

The testimony that Assam was known as Kamarupa comes from -

Options :

4058596555. Pragjyotisha

4058596556. Allahabad Pillar Inscription

4058596557. 12<sup>th</sup> Century CE

4058596558. Ahoms

**Question Number : 8 Question Id : 4058592007 Question Type : MCQ Option Shuffling : Yes Is Question Mandatory : No Calculator : None Response Time : N.A Think Time : N.A Minimum Instruction Time : 0**

**Correct Marks : 1 Wrong Marks : 0.25**

Assam owes its present name to -

**Options :**

4058596559. King Samudragupta

4058596560. Epic Period

4058596561. Ahoms

4058596562. Scholars

**Question Number : 9 Question Id : 4058592008 Question Type : MCQ Option Shuffling : Yes Is Question Mandatory : No Calculator : None Response Time : N.A Think Time : N.A Minimum Instruction Time : 0**

**Correct Marks : 1 Wrong Marks : 0.25**

A Sanskrit word for 'peerless' is -

**Options :**

4058596563. Pragjyotisha

4058596564. Kamarupa

4058596565. Ahom

4058596566. Asoma



**Question Number : 10 Question Id : 4058592009 Question Type : MCQ Option Shuffling : Yes Is**

**Question Mandatory : No Calculator : None Response Time : N.A Think Time : N.A Minimum**

**Instruction Time : 0**

**Correct Marks : 1 Wrong Marks : 0.25**

The treaty of Yandaboo resulted in

**Options :**

4058596567. British taking over West Bengal from the Burmese

4058596568. Indian Union taking over Assam from the British

4058596569. Indian Union taking over Assam from the Burmese

4058596570. British taking over Assam from the Burmese

**Question Number : 11 Question Id : 4058592010 Question Type : MCQ Option Shuffling : Yes Is**

**Question Mandatory : No Calculator : None Response Time : N.A Think Time : N.A Minimum**

**Instruction Time : 0**

**Correct Marks : 1 Wrong Marks : 0.25**

Find one word from the passage for the given group of words 'a stream that flows into a larger river or a lake'.

**Options :**

4058596571. longitude

4058596572. incorporate

4058596573. valley

4058596574. tributary

**Sub-Section Id :** 405859135

**Question Shuffling Allowed :** Yes

**Is Section Default? :** null

**Question Number : 12 Question Id : 4058592011 Question Type : MCQ Option Shuffling : Yes Is**

**Question Mandatory : No Calculator : None Response Time : N.A Think Time : N.A Minimum**

**Instruction Time : 0**

**Correct Marks : 1 Wrong Marks : 0.25**

The study of worms and insects is called \_\_\_\_\_.

**Options :**

4058596575. taxidermy

4058596576. entomology

4058596577. ornithology

4058596578. paleontology

**Question Number : 12 Question Id : 4058592011 Question Type : MCQ Option Shuffling : Yes Is**

**Question Mandatory : No Calculator : None Response Time : N.A Think Time : N.A Minimum**

**Instruction Time : 0**

**Correct Marks : 1 Wrong Marks : 0.25**

The study of worms and insects is called \_\_\_\_\_.

**Options :**

4058596575. taxidermy

4058596576. entomology

4058596577. ornithology

4058596578. paleontology

**Question Number : 13 Question Id : 4058592012 Question Type : MCQ Option Shuffling : Yes Is Question Mandatory : No Calculator : None Response Time : N.A Think Time : N.A Minimum Instruction Time : 0**

**Correct Marks : 1 Wrong Marks : 0.25**

Fill in the blank with the correct word.

\_\_\_\_\_ broke out when the news was announced.

**Options :**

4058596579. Pandamonium

4058596580. Pandemonium

4058596581. Pandamoneum

4058596582. Pandemoneum

**Question Number : 13 Question Id : 4058592012 Question Type : MCQ Option Shuffling : Yes Is Question Mandatory : No Calculator : None Response Time : N.A Think Time : N.A Minimum Instruction Time : 0**

**Correct Marks : 1 Wrong Marks : 0.25**

Fill in the blank with the correct word.

\_\_\_\_\_ broke out when the news was announced.

**Options :**

4058596579. Pandamonium

4058596580. Pandemonium

4058596581. Pandamoneum

4058596582. Pandemoneum

**Question Number : 14 Question Id : 4058592013 Question Type : MCQ Option Shuffling : Yes Is Question Mandatory : No Calculator : None Response Time : N.A Think Time : N.A Minimum Instruction Time : 0**

**Correct Marks : 1 Wrong Marks : 0.25**

Fill in the blank with the correct words.

Her \_\_\_\_\_ is very endearing.

**Options :**

4058596583. panashe

4058596584. panache

4058596585. panach

4058596586. panash

**Question Number : 14 Question Id : 4058592013 Question Type : MCQ Option Shuffling : Yes Is Question Mandatory : No Calculator : None Response Time : N.A Think Time : N.A Minimum Instruction Time : 0**

**Correct Marks : 1 Wrong Marks : 0.25**

Fill in the blank with the correct words.

Her \_\_\_\_\_ is very endearing.

**Options :**

4058596583. panashe

4058596584. panache

4058596585. panach

4058596586. panash

**Question Number : 15 Question Id : 4058592014 Question Type : MCQ Option Shuffling : Yes Is Question Mandatory : No Calculator : None Response Time : N.A Think Time : N.A Minimum Instruction Time : 0**

**Correct Marks : 1 Wrong Marks : 0.25**

Fill in the blank -

This misinformation would have gone around \_\_\_\_\_ who knows how long.

**Options :**

4058596587. since

4058596588. for

4058596589. by

4058596590. from

**Question Number : 15 Question Id : 4058592014 Question Type : MCQ Option Shuffling : Yes Is Question Mandatory : No Calculator : None Response Time : N.A Think Time : N.A Minimum Instruction Time : 0**

**Correct Marks : 1 Wrong Marks : 0.25**

Fill in the blank -

This misinformation would have gone around \_\_\_\_\_ who knows how long.

**Options :**

4058596587. since

4058596588. for

4058596589. by

4058596590. from

**Question Number : 16 Question Id : 4058592015 Question Type : MCQ Option Shuffling : Yes Is Question Mandatory : No Calculator : None Response Time : N.A Think Time : N.A Minimum Instruction Time : 0**

**Correct Marks : 1 Wrong Marks : 0.25**

Fill in the blank:

I \_\_\_\_\_ like you to do as I tell you.

**Options :**

4058596591. shall

4058596592. should

4058596593. will

4058596594. could

**Question Number : 16 Question Id : 4058592015 Question Type : MCQ Option Shuffling : Yes Is Question Mandatory : No Calculator : None Response Time : N.A Think Time : N.A Minimum Instruction Time : 0**

**Correct Marks : 1 Wrong Marks : 0.25**

Fill in the blank:

I \_\_\_\_\_ like you to do as I tell you.

**Options :**

4058596591. shall

4058596592. should

4058596593. will

4058596594. could

**Question Number : 17 Question Id : 4058592016 Question Type : MCQ Option Shuffling : Yes Is Question Mandatory : No Calculator : None Response Time : N.A Think Time : N.A Minimum Instruction Time : 0**

**Correct Marks : 1 Wrong Marks : 0.25**

Fill in the blank:

\_\_\_\_\_ Mr. Verma wait any longer?

**Options :**

4058596595. Need

4058596596. Does

4058596597. Had

4058596598. Might

**Question Number : 17 Question Id : 4058592016 Question Type : MCQ Option Shuffling : Yes Is Question Mandatory : No Calculator : None Response Time : N.A Think Time : N.A Minimum Instruction Time : 0**

**Correct Marks : 1 Wrong Marks : 0.25**

Fill in the blank:

\_\_\_\_\_ Mr. Verma wait any longer?

**Options :**

4058596595. Need

4058596596. Does

4058596597. Had

4058596598. Might

**Question Number : 18 Question Id : 4058592017 Question Type : MCQ Option Shuffling : Yes Is Question Mandatory : No Calculator : None Response Time : N.A Think Time : N.A Minimum Instruction Time : 0**

**Correct Marks : 1 Wrong Marks : 0.25**

Choose the appropriate phrase to replace the underlined part -

You have come here with a view to insult me.

**Options :**

4058596599. for insulting me

4058596600. of insulting me

4058596601. on insulting me

4058596602. to insulting me

**Question Number : 18 Question Id : 4058592017 Question Type : MCQ Option Shuffling : Yes Is Question Mandatory : No Calculator : None Response Time : N.A Think Time : N.A Minimum Instruction Time : 0**

**Correct Marks : 1 Wrong Marks : 0.25**

Choose the appropriate phrase to replace the underlined part -

You have come here with a view to insult me.

**Options :**



4058596599. for insulting me

4058596600. of insulting me

4058596601. on insulting me

4058596602. to insulting me

**Question Number : 19 Question Id : 4058592018 Question Type : MCQ Option Shuffling : Yes Is  
Question Mandatory : No Calculator : None Response Time : N.A Think Time : N.A Minimum  
Instruction Time : 0**

**Correct Marks : 1 Wrong Marks : 0.25**

Choose the correct spelling.

**Options :**

4058596603. RESCISSION

4058596604. RISCESSION

4058596605. RESCESSION

4058596606. RESCISSEON

**Question Number : 19 Question Id : 4058592018 Question Type : MCQ Option Shuffling : Yes Is  
Question Mandatory : No Calculator : None Response Time : N.A Think Time : N.A Minimum  
Instruction Time : 0**

**Correct Marks : 1 Wrong Marks : 0.25**

Choose the correct spelling.

**Options :**

4058596603. RESCISSION

4058596604. RISCESSION

4058596605. RESCESSION

4058596606. RESCISSEON

**Question Number : 20 Question Id : 4058592019 Question Type : MCQ Option Shuffling : Yes Is  
Question Mandatory : No Calculator : None Response Time : N.A Think Time : N.A Minimum  
Instruction Time : 0**

**Correct Marks : 1 Wrong Marks : 0.25**

Choose the correct spelling:

**Options :**

4058596607. MONUMENTALLY

4058596608. MONUMANTALLY

4058596609. MONUMENTALY

4058596610. MONUMANTALY

**Question Number : 20 Question Id : 4058592019 Question Type : MCQ Option Shuffling : Yes Is  
Question Mandatory : No Calculator : None Response Time : N.A Think Time : N.A Minimum  
Instruction Time : 0**

**Correct Marks : 1 Wrong Marks : 0.25**

Choose the correct spelling:

**Options :**

4058596607. MONUMENTALLY

4058596608. MONUMANTALLY

4058596609. MONUMENTALY

4058596610. MONUMANTALY

**Question Number : 21 Question Id : 4058592020 Question Type : MCQ Option Shuffling : Yes Is  
Question Mandatory : No Calculator : None Response Time : N.A Think Time : N.A Minimum  
Instruction Time : 0**

**Correct Marks : 1 Wrong Marks : 0.25**

Choose the correct spelling :

**Options :**

4058596611. MONSTROCIEITY

4058596612. MONSTROSITY

4058596613. MONSTROSIETY

4058596614. MONSTROCITY

**Question Number : 21 Question Id : 4058592020 Question Type : MCQ Option Shuffling : Yes Is  
Question Mandatory : No Calculator : None Response Time : N.A Think Time : N.A Minimum  
Instruction Time : 0**

**Correct Marks : 1 Wrong Marks : 0.25**

Choose the correct spelling :

**Options :**

4058596611. MONSTROCIEITY

4058596612. MONSTROSITY

4058596613. MONSTROSIETY

4058596614. MONSTROCITY

**Question Number : 22 Question Id : 4058592021 Question Type : MCQ Option Shuffling : Yes Is  
Question Mandatory : No Calculator : None Response Time : N.A Think Time : N.A Minimum  
Instruction Time : 0**

**Correct Marks : 1 Wrong Marks : 0.25**

Choose the correct spelling :

**Options :**

4058596615. CONSPICIOUS

4058596616. CONSPICEOUS

4058596617. CONSPICUOUS

4058596618. CONSPICIOUS

**Question Number : 22 Question Id : 4058592021 Question Type : MCQ Option Shuffling : Yes Is  
Question Mandatory : No Calculator : None Response Time : N.A Think Time : N.A Minimum  
Instruction Time : 0**

**Correct Marks : 1 Wrong Marks : 0.25**

Choose the correct spelling :

**Options :**

4058596615. CONSPICIOUS

4058596616. CONSPICEOUS

4058596617. CONSPICUOUS

4058596618. CONSPICIOUS

**Question Number : 23 Question Id : 4058592022 Question Type : MCQ Option Shuffling : Yes Is Question Mandatory : No Calculator : None Response Time : N.A Think Time : N.A Minimum Instruction Time : 0**

**Correct Marks : 1 Wrong Marks : 0.25**

Change into Indirect Speech -

He said, "My God! I am ruined."

**Options :**

4058596619. He exclaimed sadly that he was ruined.

4058596620. He exclaimed that he has ruined.

4058596621. He explained sadly that he had been ruined.

4058596622. He exclaimed sadly that he ruined.

**Question Number : 23 Question Id : 4058592022 Question Type : MCQ Option Shuffling : Yes Is Question Mandatory : No Calculator : None Response Time : N.A Think Time : N.A Minimum Instruction Time : 0**

**Correct Marks : 1 Wrong Marks : 0.25**

Change into Indirect Speech -

He said, "My God! I am ruined."

**Options :**

4058596619. He exclaimed sadly that he was ruined.

4058596620. He exclaimed that he has ruined.

4058596621. He explained sadly that he had been ruined.

4058596622. He exclaimed sadly that he ruined.

**Question Number : 24 Question Id : 4058592023 Question Type : MCQ Option Shuffling : Yes Is Question Mandatory : No Calculator : None Response Time : N.A Think Time : N.A Minimum Instruction Time : 0**

**Correct Marks : 1 Wrong Marks : 0.25**

Change into Direct Speech -

He exclaimed that the scene was very lovely.

**Options :**

4058596623. He said, "How lovely the scene was!"

4058596624. He said, "The scene was lovely".

4058596625. He said, "How lovely the scene is !"

4058596626. He said, "How was lovely scene".

**Question Number : 24 Question Id : 4058592023 Question Type : MCQ Option Shuffling : Yes Is Question Mandatory : No Calculator : None Response Time : N.A Think Time : N.A Minimum Instruction Time : 0**

**Correct Marks : 1 Wrong Marks : 0.25**

Change into Direct Speech -

He exclaimed that the scene was very lovely.

**Options :**

4058596623. He said, "How lovely the scene was!"

4058596624. He said, "The scene was lovely".

4058596625. He said, "How lovely the scene is !"

4058596626. He said, "How was lovely scene".

**Question Number : 25 Question Id : 4058592024 Question Type : MCQ Option Shuffling : Yes Is Question Mandatory : No Calculator : None Response Time : N.A Think Time : N.A Minimum Instruction Time : 0**

**Correct Marks : 1 Wrong Marks : 0.25**

Change into Direct Speech :

Anjana asked Nitin if he could solve that sum.

**Options :**

4058596627. Anjana asked Nitin, "Can you solve this sum.

4058596628. Anjana asked Nitin, "You can solve this sum.

4058596629. Anjana said to Nitin, "Can you solve this sum?"

4058596630. Anjana said Nitin, "Can you solve this sum.

**Question Number : 25 Question Id : 4058592024 Question Type : MCQ Option Shuffling : Yes Is Question Mandatory : No Calculator : None Response Time : N.A Think Time : N.A Minimum Instruction Time : 0**

**Correct Marks : 1 Wrong Marks : 0.25**

Change into Direct Speech :

Anjana asked Nitin if he could solve that sum.

**Options :**

4058596627. Anjana asked Nitin, "Can you solve this sum.

4058596628. Anjana asked Nitin, "You can solve this sum.

4058596629. Anjana said to Nitin, "Can you solve this sum?"

4058596630. Anjana said Nitin, "Can you solve this sum.

**Question Number : 26 Question Id : 4058592025 Question Type : MCQ Option Shuffling : Yes Is Question Mandatory : No Calculator : None Response Time : N.A Think Time : N.A Minimum Instruction Time : 0**

**Correct Marks : 1 Wrong Marks : 0.25**

Change into Passive Voice :

Don't touch this switch.

**Options :**

4058596631. This switch does not be touched.

4058596632. This switch don't be touched.

4058596633. This switch need not be touched.

4058596634. This switch must not be touched.

**Question Number : 26 Question Id : 4058592025 Question Type : MCQ Option Shuffling : Yes Is Question Mandatory : No Calculator : None Response Time : N.A Think Time : N.A Minimum Instruction Time : 0**

**Correct Marks : 1 Wrong Marks : 0.25**

Change into Passive Voice :

Don't touch this switch.

**Options :**

4058596631. This switch does not be touched.



4058596632. This switch don't be touched.

4058596633. This switch need not be touched.

4058596634. This switch must not be touched.

**Question Number : 27 Question Id : 4058592026 Question Type : MCQ Option Shuffling : Yes Is Question Mandatory : No Calculator : None Response Time : N.A Think Time : N.A Minimum Instruction Time : 0**

**Correct Marks : 1 Wrong Marks : 0.25**

Change into Passive Voice :

The farmer prepared the field.

**Options :**

4058596635. The field was being prepared by the farmer.

4058596636. The field was prepared by the farmer.

4058596637. The field were prepared by the farmer.

4058596638. The field were being prepared by the farmer.

**Question Number : 27 Question Id : 4058592026 Question Type : MCQ Option Shuffling : Yes Is Question Mandatory : No Calculator : None Response Time : N.A Think Time : N.A Minimum Instruction Time : 0**

**Correct Marks : 1 Wrong Marks : 0.25**

Change into Passive Voice :

The farmer prepared the field.

**Options :**

4058596635. The field was being prepared by the farmer.

4058596636. The field was prepared by the farmer.

4058596637. The field were prepared by the farmer.

4058596638. The field were being prepared by the farmer.

**Question Number : 28 Question Id : 4058592027 Question Type : MCQ Option Shuffling : Yes Is Question Mandatory : No Calculator : None Response Time : N.A Think Time : N.A Minimum Instruction Time : 0**

**Correct Marks : 1 Wrong Marks : 0.25**

Change into Passive Voice :

Tiny houses dot the landscape.

**Options :**

4058596639. The landscape is being dotted by tiny houses.

4058596640. The landscape has dotted by tiny houses.

4058596641. The landscape is dotted by tiny houses.

4058596642. The landscape has been dotted by tiny houses.

**Question Number : 28 Question Id : 4058592027 Question Type : MCQ Option Shuffling : Yes Is Question Mandatory : No Calculator : None Response Time : N.A Think Time : N.A Minimum Instruction Time : 0**

**Correct Marks : 1 Wrong Marks : 0.25**

Change into Passive Voice :

Tiny houses dot the landscape.

**Options :**

4058596639. The landscape is being dotted by tiny houses.

4058596640. The landscape has dotted by tiny houses.

4058596641. The landscape is dotted by tiny houses.

4058596642. The landscape has been dotted by tiny houses.

**Question Number : 29 Question Id : 4058592028 Question Type : MCQ Option Shuffling : Yes Is**

**Question Mandatory : No Calculator : None Response Time : N.A Think Time : N.A Minimum**

**Instruction Time : 0**

**Correct Marks : 1 Wrong Marks : 0.25**

Choose the appropriate idiom to fill in the blank -

Poverty among the public is the \_\_\_\_\_ of all the crimes.

**Options :**

4058596643. rank and file

4058596644. pins and needles

4058596645. part and parcel

4058596646. root and branch

**Question Number : 29 Question Id : 4058592028 Question Type : MCQ Option Shuffling : Yes Is**

**Question Mandatory : No Calculator : None Response Time : N.A Think Time : N.A Minimum**

**Instruction Time : 0**

**Correct Marks : 1 Wrong Marks : 0.25**

Choose the appropriate idiom to fill in the blank -

Poverty among the public is the \_\_\_\_\_ of all the crimes.

**Options :**

4058596643. rank and file

4058596644. pins and needles

4058596645. part and parcel

4058596646. root and branch

**Question Number : 30 Question Id : 4058592029 Question Type : MCQ Option Shuffling : Yes Is**

**Question Mandatory : No Calculator : None Response Time : N.A Think Time : N.A Minimum**

**Instruction Time : 0**

**Correct Marks : 1 Wrong Marks : 0.25**

Choose the appropriate idiom to fill in the blank -

The \_\_\_\_\_ of the paragraph must be reflected in a good precis.

**Options :**

4058596647. sum and substance

4058596648. thick and thin

4058596649. to and fro

4058596650. tooth and nail

**Question Number : 30 Question Id : 4058592029 Question Type : MCQ Option Shuffling : Yes Is**

**Question Mandatory : No Calculator : None Response Time : N.A Think Time : N.A Minimum**

**Instruction Time : 0**

**Correct Marks : 1 Wrong Marks : 0.25**

Choose the appropriate idiom to fill in the blank -

The \_\_\_\_\_ of the paragraph must be reflected in a good precis.

**Options :**

4058596647. sum and substance

4058596648. thick and thin

4058596649. to and fro

4058596650. tooth and nail

**Question Number : 31 Question Id : 4058592030 Question Type : MCQ Option Shuffling : Yes Is**

**Question Mandatory : No Calculator : None Response Time : N.A Think Time : N.A Minimum**

**Instruction Time : 0**

**Correct Marks : 1 Wrong Marks : 0.25**

Choose the appropriate idiom to fill in the blank -

I will abide by you in all \_\_\_\_\_.

**Options :**

4058596651. warp and woof

4058596652. weal and woe

4058596653. whips and spur

4058596654. willy nilly

**Question Number : 31 Question Id : 4058592030 Question Type : MCQ Option Shuffling : Yes Is**

**Question Mandatory : No Calculator : None Response Time : N.A Think Time : N.A Minimum**

**Instruction Time : 0**

**Correct Marks : 1 Wrong Marks : 0.25**

Choose the appropriate idiom to fill in the blank -

I will abide by you in all \_\_\_\_\_.

**Options :**

4058596651. warp and woof

4058596652. weal and woe

4058596653. whips and spur

4058596654. willy nilly

**Question Number : 32 Question Id : 4058592031 Question Type : MCQ Option Shuffling : Yes Is**

**Question Mandatory : No Calculator : None Response Time : N.A Think Time : N.A Minimum**

**Instruction Time : 0**

**Correct Marks : 1 Wrong Marks : 0.25**

Select the correct option which is the most opposite in meaning to the underlined word :

"Everybody was astonished when he used such a profane language."

**Options :**

4058596655. sacred

4058596656. pure

4058596657. profound

4058596658. high

**Question Number : 32 Question Id : 4058592031 Question Type : MCQ Option Shuffling : Yes Is Question Mandatory : No Calculator : None Response Time : N.A Think Time : N.A Minimum Instruction Time : 0**

**Correct Marks : 1 Wrong Marks : 0.25**

Select the correct option which is the most opposite in meaning to the underlined word :

"Everybody was astonished when he used such a profane language."

**Options :**

4058596655. sacred

4058596656. pure

4058596657. profound

4058596658. high

**Question Number : 33 Question Id : 4058592032 Question Type : MCQ Option Shuffling : Yes Is Question Mandatory : No Calculator : None Response Time : N.A Think Time : N.A Minimum Instruction Time : 0**

**Correct Marks : 1 Wrong Marks : 0.25**

Select the correct option which is the most opposite in meaning to the underlined word :

"His writings have been much eulogised by Indian scholars".

**Options :**

4058596659. laud

4058596660. extol

4058596661. ballyhoo

4058596662. disparaged

**Question Number : 33 Question Id : 4058592032 Question Type : MCQ Option Shuffling : Yes Is Question Mandatory : No Calculator : None Response Time : N.A Think Time : N.A Minimum Instruction Time : 0**

**Correct Marks : 1 Wrong Marks : 0.25**

Select the correct option which is the most opposite in meaning to the underlined word :

"His writings have been much eulogised by Indian scholars".

**Options :**

4058596659. laud

4058596660. extol

4058596661. ballyhoo

4058596662. disparaged

**Question Number : 34 Question Id : 4058592033 Question Type : MCQ Option Shuffling : Yes Is Question Mandatory : No Calculator : None Response Time : N.A Think Time : N.A Minimum Instruction Time : 0**

**Correct Marks : 1 Wrong Marks : 0.25**

Select the word which is most opposite in meaning to the underlined word :

"My uncle is very wealthy, but rather parsimonious in his habit."

**Options :**

4058596663. extravagant

4058596664. generous



4058596665. careless

4058596666. strict

**Question Number : 34 Question Id : 4058592033 Question Type : MCQ Option Shuffling : Yes Is Question Mandatory : No Calculator : None Response Time : N.A Think Time : N.A Minimum Instruction Time : 0**

**Correct Marks : 1 Wrong Marks : 0.25**

Select the word which is most opposite in meaning to the underlined word :

"My uncle is very wealthy, but rather parsimonious in his habit."

**Options :**

4058596663. extravagant

4058596664. generous

4058596665. careless

4058596666. strict

**Question Number : 35 Question Id : 4058592034 Question Type : MCQ Option Shuffling : Yes Is Question Mandatory : No Calculator : None Response Time : N.A Think Time : N.A Minimum Instruction Time : 0**

**Correct Marks : 1 Wrong Marks : 0.25**

Choose the word similar in meaning to the given word :

'TEETOTAL'

**Options :**

4058596667. PSYCHIC

4058596668. ABSOLUTE

4058596669. APPRISE

4058596670. CRAFT

**Question Number : 35 Question Id : 4058592034 Question Type : MCQ Option Shuffling : Yes Is Question Mandatory : No Calculator : None Response Time : N.A Think Time : N.A Minimum Instruction Time : 0**

**Correct Marks : 1 Wrong Marks : 0.25**

Choose the word similar in meaning to the given word :

'TEETOTAL'

**Options :**

4058596667. PSYCHIC

4058596668. ABSOLUTE

4058596669. APPRISE

4058596670. CRAFT

**Question Number : 36 Question Id : 4058592035 Question Type : MCQ Option Shuffling : Yes Is Question Mandatory : No Calculator : None Response Time : N.A Think Time : N.A Minimum Instruction Time : 0**

**Correct Marks : 1 Wrong Marks : 0.25**

Choose the word similar in meaning to the given word :

'SPECK'

**Options :**

4058596671. STAMP

4058596672. MACULA

4058596673. GHOST

4058596674. NAME

**Question Number : 36 Question Id : 4058592035 Question Type : MCQ Option Shuffling : Yes Is Question Mandatory : No Calculator : None Response Time : N.A Think Time : N.A Minimum Instruction Time : 0**

**Correct Marks : 1 Wrong Marks : 0.25**

Choose the word similar in meaning to the given word :

'SPECK'

**Options :**

4058596671. STAMP

4058596672. MACULA

4058596673. GHOST

4058596674. NAME

**Question Number : 37 Question Id : 4058592036 Question Type : MCQ Option Shuffling : Yes Is Question Mandatory : No Calculator : None Response Time : N.A Think Time : N.A Minimum Instruction Time : 0**

**Correct Marks : 1 Wrong Marks : 0.25**

Of the four alternatives, choose the one which best expresses the meaning of the given word.

"Colossal"

**Options :**

4058596675. famous

4058596676. vigorous

4058596677. energetic

4058596678. enormous

**Question Number : 37 Question Id : 4058592036 Question Type : MCQ Option Shuffling : Yes Is Question Mandatory : No Calculator : None Response Time : N.A Think Time : N.A Minimum Instruction Time : 0**

**Correct Marks : 1 Wrong Marks : 0.25**

Of the four alternatives, choose the one which best expresses the meaning of the given word.

"Colossal"

**Options :**

4058596675. famous

4058596676. vigorous

4058596677. energetic

4058596678. enormous

**Question Number : 38 Question Id : 4058592037 Question Type : MCQ Option Shuffling : Yes Is Question Mandatory : No Calculator : None Response Time : N.A Think Time : N.A Minimum Instruction Time : 0**

**Correct Marks : 1 Wrong Marks : 0.25**

Give one word for the given expression :

One who is incharge of a museum.

**Options :**

4058596679. supervision

4058596680. curator

4058596681. collector

4058596682. caretaker

**Question Number : 38 Question Id : 4058592037 Question Type : MCQ Option Shuffling : Yes Is Question Mandatory : No Calculator : None Response Time : N.A Think Time : N.A Minimum Instruction Time : 0**

**Correct Marks : 1 Wrong Marks : 0.25**

Give one word for the given expression :

One who is incharge of a museum.

**Options :**

4058596679. supervision

4058596680. curator

4058596681. collector

4058596682. caretaker

**Question Number : 39 Question Id : 4058592038 Question Type : MCQ Option Shuffling : Yes Is Question Mandatory : No Calculator : None Response Time : N.A Think Time : N.A Minimum Instruction Time : 0**

**Correct Marks : 1 Wrong Marks : 0.25**

Choose one word for the given group of words -

'Extremely ugly in a strange way that is often frightening or funny'.

**Options :**

4058596683. ostentatious

4058596684. eerie

4058596685. grotesque

4058596686. scary

**Question Number : 39 Question Id : 4058592038 Question Type : MCQ Option Shuffling : Yes Is Question Mandatory : No Calculator : None Response Time : N.A Think Time : N.A Minimum Instruction Time : 0**

**Correct Marks : 1 Wrong Marks : 0.25**

Choose one word for the given group of words -

'Extremely ugly in a strange way that is often frightening or funny'.

**Options :**

4058596683. ostentatious

4058596684. eerie

4058596685. grotesque

4058596686. scary

**Question Number : 40 Question Id : 4058592039 Question Type : MCQ Option Shuffling : Yes Is Question Mandatory : No Calculator : None Response Time : N.A Think Time : N.A Minimum Instruction Time : 0**

**Correct Marks : 1 Wrong Marks : 0.25**

Choose one word for the given group of words :

'bad or criminal behaviour, usually of young people'.

**Options :**

4058596687. criminality

4058596688. delinquency

4058596689. homicide

4058596690. felony

**Question Number : 40 Question Id : 4058592039 Question Type : MCQ Option Shuffling : Yes Is**

**Question Mandatory : No Calculator : None Response Time : N.A Think Time : N.A Minimum**

**Instruction Time : 0**

**Correct Marks : 1 Wrong Marks : 0.25**

Choose one word for the given group of words :

'bad or criminal behaviour, usually of young people'.

**Options :**

4058596687. criminality

4058596688. delinquency

4058596689. homicide

4058596690. felony

<b>Section Id :</b>	405859114
<b>Section Number :</b>	2
<b>Section type :</b>	Online
<b>Mandatory or Optional :</b>	Mandatory
<b>Number of Questions :</b>	20
<b>Number of Questions to be attempted :</b>	20
<b>Section Marks :</b>	20
<b>Enable Mark as Answered Mark for Review and Clear Response :</b>	Yes
<b>Maximum Instruction Time :</b>	0
<b>Sub-Section Number :</b>	1
<b>Sub-Section Id :</b>	405859136
<b>Question Shuffling Allowed :</b>	Yes
<b>Is Section Default? :</b>	null

**Question Number : 41 Question Id : 4058592040 Question Type : MCQ Option Shuffling : Yes Is Question Mandatory : No Calculator : None Response Time : N.A Think Time : N.A Minimum Instruction Time : 0**

**Correct Marks : 1 Wrong Marks : 0.25**

A shopkeeper bought 25 chairs from a manufacturer for ₹ 37,500 and sold them at a profit equal to selling price of 5 chairs. The selling price of one chair, is:

**Options :**

4058596691. ₹ 1875

4058596692. ₹ 1500

4058596693. ₹ 1250

4058596694. ₹ 1200



**Question Number : 41 Question Id : 4058592040 Question Type : MCQ Option Shuffling : Yes Is**

**Question Mandatory : No Calculator : None Response Time : N.A Think Time : N.A Minimum**

**Instruction Time : 0**

**Correct Marks : 1 Wrong Marks : 0.25**

किसी दुकानदार ने निर्माता से ₹ 37,500 में 25 कुर्सियां खरीदीं और उन्हें 5 कुर्सियों के विक्रय मूल्य के बराबर लाभ पर बेच दिया। एक कुर्सी का विक्रय मूल्य कितना है?

**Options :**

4058596691. ₹ 1875

4058596692. ₹ 1500

4058596693. ₹ 1250

4058596694. ₹ 1200

**Question Number : 42 Question Id : 4058592041 Question Type : MCQ Option Shuffling : Yes Is**

**Question Mandatory : No Calculator : None Response Time : N.A Think Time : N.A Minimum**

**Instruction Time : 0**

**Correct Marks : 1 Wrong Marks : 0.25**

A sum of money borrowed on simple interest amounts to ₹ 720 after 2 years and ₹ 1020 after a further period of 5 years. The borrowed sum of money is:

**Options :**

4058596695. ₹ 500

4058596696. ₹ 520

4058596697. ₹ 600

4058596698. ₹ 640

**Question Number : 42 Question Id : 4058592041 Question Type : MCQ Option Shuffling : Yes Is**

**Question Mandatory : No Calculator : None Response Time : N.A Think Time : N.A Minimum**

**Instruction Time : 0**

**Correct Marks : 1 Wrong Marks : 0.25**

साधारण ब्याज पर उधार ली गयी एक धनराशि 2 वर्षों के पश्चात् ₹ 720 तथा 5 और वर्षों के पश्चात् ₹ 1020 हो जाती है। उधार ली गयी धनराशि है:

**Options :**

4058596695. ₹ 500

4058596696. ₹ 520

4058596697. ₹ 600

4058596698. ₹ 640

**Question Number : 43 Question Id : 4058592042 Question Type : MCQ Option Shuffling : Yes Is**

**Question Mandatory : No Calculator : None Response Time : N.A Think Time : N.A Minimum**

**Instruction Time : 0**

**Correct Marks : 1 Wrong Marks : 0.25**

If 20% of A = 15% of B =  $\frac{1}{4}$  C, then A : B : C is

**Options :**

4058596699. 4:3:5

4058596700. 15:20:12

4058596701. 12:20:15

4058596702. 5:3:4

Question Number : 43 Question Id : 4058592042 Question Type : MCQ Option Shuffling : Yes Is

Question Mandatory : No Calculator : None Response Time : N.A Think Time : N.A Minimum

Instruction Time : 0

Correct Marks : 1 Wrong Marks : 0.25

यदि A का 20% = B का 15% =  $\frac{1}{4}$  C है, तो A : B : C है ।

Options :

4058596699. 4:3:5

4058596700. 15:20:12

4058596701. 12:20:15

4058596702. 5:3:4

Question Number : 44 Question Id : 4058592043 Question Type : MCQ Option Shuffling : Yes Is

Question Mandatory : No Calculator : None Response Time : N.A Think Time : N.A Minimum

Instruction Time : 0

Correct Marks : 1 Wrong Marks : 0.25

$7.038 + 27.3 + 1.0079 + 3.035 + 0.8 + 14 = \underline{\hspace{2cm}}$

Options :

4058596703. 52.2059

4058596704. 53.1809

4058596705. 52.3529

4058596706. 54.0539

Question Number : 44 Question Id : 4058592043 Question Type : MCQ Option Shuffling : Yes Is

**Question Mandatory : No Calculator : None Response Time : N.A Think Time : N.A Minimum**

**Instruction Time : 0**

**Correct Marks : 1 Wrong Marks : 0.25**

$7.038 + 27.3 + 1.0079 + 3.035 + 0.8 + 14 = \underline{\hspace{2cm}}$

**Options :**

4058596703. 52.2059

4058596704. 53.1809

4058596705. 52.3529

4058596706. 54.0539

**Question Number : 45 Question Id : 4058592044 Question Type : MCQ Option Shuffling : Yes Is**

**Question Mandatory : No Calculator : None Response Time : N.A Think Time : N.A Minimum**

**Instruction Time : 0**

**Correct Marks : 1 Wrong Marks : 0.25**

The average of all the numbers between 8 and 33, and which are divisible by 5 is :

**Options :**

4058596707. 18

4058596708. 16

4058596709. 20

4058596710. 25

**Question Number : 45 Question Id : 4058592044 Question Type : MCQ Option Shuffling : Yes Is**

**Question Mandatory : No Calculator : None Response Time : N.A Think Time : N.A Minimum**

**Instruction Time : 0**

**Correct Marks : 1 Wrong Marks : 0.25**

5 से विभाज्य तथा 8 और 33 के मध्य की सभी संख्याओं का औसत है:

**Options :**

4058596707. 18

4058596708. 16

4058596709. 20

4058596710. 25

**Question Number : 46 Question Id : 4058592045 Question Type : MCQ Option Shuffling : Yes Is**

**Question Mandatory : No Calculator : None Response Time : N.A Think Time : N.A Minimum**

**Instruction Time : 0**

**Correct Marks : 1 Wrong Marks : 0.25**

In an election between two candidates, 30% of the voters voted for candidate A whereas 60% of the remaining voters voted for candidate B. The rest of the voters did not cast their vote. If the difference between those who voted for candidate A and those who did not cast their vote is 2500, then how many voters were there in the voters list?

**Options :**

4058596711. 125000

4058596712. 130000

4058596713. 132000

4058596714. 135000

**Question Number : 46 Question Id : 4058592045 Question Type : MCQ Option Shuffling : Yes Is**

**Question Mandatory : No Calculator : None Response Time : N.A Think Time : N.A Minimum**

**Instruction Time : 0**

**Correct Marks : 1 Wrong Marks : 0.25**

किसी चुनाव में दो उम्मीदवार खड़े हैं। इस चुनाव में 30% मतदाताओं ने उम्मीदवार A को अपने मत दिये जबकि शेष के 60% मतदाताओं ने उम्मीदवार B को अपना मत दिया। शेष बचे मतदाताओं ने मतदान नहीं किया। यदि A को मत देने वाले तथा मतदान न करने वालों का अंतर 2500 हो तो मतदाता सूची में कितने मतदाता थे?

**Options :**

4058596711. 125000

4058596712. 130000

4058596713. 132000

4058596714. 135000

**Question Number : 47 Question Id : 4058592046 Question Type : MCQ Option Shuffling : Yes Is**

**Question Mandatory : No Calculator : None Response Time : N.A Think Time : N.A Minimum**

**Instruction Time : 0**

**Correct Marks : 1 Wrong Marks : 0.25**

Three numbers are in the ratio  $\frac{3}{4} : \frac{5}{6} : \frac{1}{2}$  and the difference between the greatest and the smallest numbers is 12. What is the difference between the squares of the largest and the smallest numbers?

**Options :**

4058596715. 144

4058596716. 576

4058596717. 64

4058596718. 16

Question Number : 47 Question Id : 4058592046 Question Type : MCQ Option Shuffling : Yes Is

Question Mandatory : No Calculator : None Response Time : N.A Think Time : N.A Minimum

Instruction Time : 0

Correct Marks : 1 Wrong Marks : 0.25

तीन संख्याएँ  $\frac{3}{4} : \frac{5}{6} : \frac{1}{2}$  के अनुपात में हैं और सबसे बड़ी एवं सबसे छोटी संख्या में अंतर 12 है। सबसे बड़ी संख्या तथा सबसे छोटी संख्या के वर्गों में क्या अन्तर है?

Options :

4058596715. 144

4058596716. 576

4058596717. 64

4058596718. 16

Question Number : 48 Question Id : 4058592047 Question Type : MCQ Option Shuffling : Yes Is

Question Mandatory : No Calculator : None Response Time : N.A Think Time : N.A Minimum

Instruction Time : 0

Correct Marks : 1 Wrong Marks : 0.25

68% of a number is more than its 52% by 64. What is 75% of this number?

Options :

4058596719. 270

4058596720. 291

4058596721. 300

4058596722. 312

**Question Number : 48 Question Id : 4058592047 Question Type : MCQ Option Shuffling : Yes Is**

**Question Mandatory : No Calculator : None Response Time : N.A Think Time : N.A Minimum**

**Instruction Time : 0**

**Correct Marks : 1 Wrong Marks : 0.25**

किसी संख्या का 68%, उसके 52% से 64 अधिक है। इस संख्या का 75% क्या है?

**Options :**

4058596719. 270

4058596720. 291

4058596721. 300

4058596722. 312

**Question Number : 49 Question Id : 4058592048 Question Type : MCQ Option Shuffling : Yes Is**

**Question Mandatory : No Calculator : None Response Time : N.A Think Time : N.A Minimum**

**Instruction Time : 0**

**Correct Marks : 1 Wrong Marks : 0.25**

In a class of 40 students, the average marks scored by 10 students is 22, whereas the average marks scored by the remaining students is 62. The average marks scored by all the students of the class, is:

**Options :**

4058596723. 50

4058596724. 51

4058596725. 52

4058596726. 53



**Question Number : 49 Question Id : 4058592048 Question Type : MCQ Option Shuffling : Yes Is**

**Question Mandatory : No Calculator : None Response Time : N.A Think Time : N.A Minimum**

**Instruction Time : 0**

**Correct Marks : 1 Wrong Marks : 0.25**

किसी कक्षा में 40 विद्यार्थी हैं जिनमें से 10 विद्यार्थियों का औसत प्राप्तांक 22 है, जबकि शेष विद्यार्थियों का औसत प्राप्तांक 62 है। कक्षा के सभी विद्यार्थियों का औसत प्राप्तांक है:

**Options :**

4058596723. 50

4058596724. 51

4058596725. 52

4058596726. 53

**Question Number : 50 Question Id : 4058592049 Question Type : MCQ Option Shuffling : Yes Is**

**Question Mandatory : No Calculator : None Response Time : N.A Think Time : N.A Minimum**

**Instruction Time : 0**

**Correct Marks : 1 Wrong Marks : 0.25**

Two identical cups have milk in them up to  $\frac{2}{3}$  and  $\frac{4}{5}$  of their volumes, respectively.

Water is poured to fill the cups. Then the mixtures of the two cups are mixed. What is the ratio of water to milk in the new mixture?

**Options :**

4058596727. 11:4

4058596728. 1:4

4058596729. 4:1

4058596730. 4:11

**Question Number : 50 Question Id : 4058592049 Question Type : MCQ Option Shuffling : Yes Is Question Mandatory : No Calculator : None Response Time : N.A Think Time : N.A Minimum Instruction Time : 0**

**Correct Marks : 1 Wrong Marks : 0.25**

दो एक समान प्यालों में उनके आयतन के क्रमशः  $\frac{2}{3}$  तथा  $\frac{4}{5}$  स्तर तक दूध भरा है। प्यालों को पूरा भरने के लिए पानी डाला जाता है। फिर दोनों प्यालों के मिश्रण को मिश्रित किया जाता है। नए मिश्रण में पानी व दूध का अनुपात क्या है?

**Options :**

4058596727. 11:4

4058596728. 1:4

4058596729. 4:1

4058596730. 4:11

**Question Number : 51 Question Id : 4058592050 Question Type : MCQ Option Shuffling : Yes Is Question Mandatory : No Calculator : None Response Time : N.A Think Time : N.A Minimum Instruction Time : 0**

**Correct Marks : 1 Wrong Marks : 0.25**

A and B invested in a business in the ratio 3:2. If 5% of the total profit goes to charity and the share of B in the remaining profit is ₹1425, then the total profit is

**Options :**

4058596731. ₹ 3150

4058596732. ₹ 3900

4058596733. ₹ 3750

4058596734. ₹ 3650

**Question Number : 51 Question Id : 4058592050 Question Type : MCQ Option Shuffling : Yes Is Question Mandatory : No Calculator : None Response Time : N.A Think Time : N.A Minimum Instruction Time : 0**

**Correct Marks : 1 Wrong Marks : 0.25**

A तथा B ने एक व्यापार में 3:2 के अनुपात में निवेश किया। यदि कुल लाभ का 5% दान में दिया गया तथा शेष लाभ में B का हिस्सा ₹1425 है तो कुल लाभ है:

**Options :**

4058596731. ₹ 3150

4058596732. ₹ 3900

4058596733. ₹ 3750

4058596734. ₹ 3650

**Question Number : 52 Question Id : 4058592051 Question Type : MCQ Option Shuffling : Yes Is Question Mandatory : No Calculator : None Response Time : N.A Think Time : N.A Minimum Instruction Time : 0**

**Correct Marks : 1 Wrong Marks : 0.25**

A retailer bought shirts at the rate of ₹ 200 per shirt and marked them at ₹ 300 each. He allowed some discount and earned a profit of 35% on the cost price. What is the percentage of discount?

**Options :**

4058596735. 9%

4058596736. 10%

4058596737. 14%

4058596738. 16%

Question Number : 52 Question Id : 4058592051 Question Type : MCQ Option Shuffling : Yes Is

Question Mandatory : No Calculator : None Response Time : N.A Think Time : N.A Minimum

Instruction Time : 0

Correct Marks : 1 Wrong Marks : 0.25

एक खुदरा विक्रेता ने प्रति कमीज 200 रुपए की दर से कमीजें खरीदीं और प्रत्येक कमीज पर ₹ 300 मूल्य अंकित किया। उसने उन पर कुछ छूट दी और क्रय मूल्य पर 35% लाभ कमाया। छूट का प्रतिशत क्या है?

Options :

4058596735. 9%

4058596736. 10%

4058596737. 14%

4058596738. 16%

Question Number : 53 Question Id : 4058592052 Question Type : MCQ Option Shuffling : Yes Is

Question Mandatory : No Calculator : None Response Time : N.A Think Time : N.A Minimum

Instruction Time : 0

Correct Marks : 1 Wrong Marks : 0.25

If 50% of  $(x+2y) = 40%$  of  $(x+5y)$ , then what percentage of  $x$  is  $y$ ?

Options :

4058596739.  $33\frac{1}{3}\%$

4058596740. 25%

4058596741. 15%

4058596742. 10%

**Question Number : 53 Question Id : 4058592052 Question Type : MCQ Option Shuffling : Yes Is**

**Question Mandatory : No Calculator : None Response Time : N.A Think Time : N.A Minimum**

**Instruction Time : 0**

**Correct Marks : 1 Wrong Marks : 0.25**

यदि  $(x+2y)$  का  $50\% = (x+5y)$  का  $40\%$  हो, तो  $y$ ,  $x$  का कितना प्रतिशत है?

**Options :**

4058596739.  $33\frac{1}{3}\%$

4058596740. 25%

4058596741. 15%

4058596742. 10%

**Question Number : 54 Question Id : 4058592053 Question Type : MCQ Option Shuffling : Yes Is**

**Question Mandatory : No Calculator : None Response Time : N.A Think Time : N.A Minimum**

**Instruction Time : 0**

**Correct Marks : 1 Wrong Marks : 0.25**

A can do a piece of work in 20 days, while A and B together can do it in 12 days and A, B and C all together can do it in 10 days. In how many days will the work be done if they work for a day in the pattern (A, A and B, A and C, A, .....)?

**Options :**

4058596743. 12 days

4058596744. 15 days

4058596745. 16 days

4058596746. 18 days

**Question Number : 54 Question Id : 4058592053 Question Type : MCQ Option Shuffling : Yes Is**

**Question Mandatory : No Calculator : None Response Time : N.A Think Time : N.A Minimum**

**Instruction Time : 0**

**Correct Marks : 1 Wrong Marks : 0.25**

A एक काम को 20 दिनों में कर सकता है। जबकि A, B के साथ उस काम को 12 दिनों में कर सकता है तथा A, B और C सभी एक साथ मिलकर उसी काम को 10 दिनों में कर सकते हैं। यदि वे पैटर्न (A, A और B, A और C, A, ....) के अनुसार एक-एक दिन काम करें तो वह काम कितने दिनों में पूरा हो जाएगा?

**Options :**

4058596743. 12 दिन

4058596744. 15 दिन

4058596745. 16 दिन

4058596746. 18 दिन

**Question Number : 55 Question Id : 4058592054 Question Type : MCQ Option Shuffling : Yes Is**

**Question Mandatory : No Calculator : None Response Time : N.A Think Time : N.A Minimum**

**Instruction Time : 0**

**Correct Marks : 1 Wrong Marks : 0.25**

Profit earned by selling an item for ₹ 2650 is 20% more than the loss incurred by selling the same item for ₹ 2375. At what price should the item be sold to earn 20% profit?

**Options :**

4058596747. ₹ 3000

4058596748. ₹ 3100

4058596749. ₹ 3125

4058596750. ₹ 3140

**Question Number : 55 Question Id : 4058592054 Question Type : MCQ Option Shuffling : Yes Is Question Mandatory : No Calculator : None Response Time : N.A Think Time : N.A Minimum Instruction Time : 0**

**Correct Marks : 1 Wrong Marks : 0.25**

किसी वस्तु को ₹ 2650 में बेचने पर अर्जित लाभ उसी वस्तु को ₹ 2375 में बेचने से होने वाली हानि से 20% अधिक है। 20% लाभ अर्जित करने के लिए उस वस्तु को किस मूल्य पर बेचना चाहिए?

**Options :**

4058596747. ₹ 3000

4058596748. ₹ 3100

4058596749. ₹ 3125

4058596750. ₹ 3140

**Question Number : 56 Question Id : 4058592055 Question Type : MCQ Option Shuffling : Yes Is Question Mandatory : No Calculator : None Response Time : N.A Think Time : N.A Minimum Instruction Time : 0**

**Correct Marks : 1 Wrong Marks : 0.25**

If  $13^{100}$  is divided by 14, the remainder is:

**Options :**

4058596751. 1

4058596752. 3

4058596753. 7

4058596754. 9

**Question Number : 56 Question Id : 4058592055 Question Type : MCQ Option Shuffling : Yes Is Question Mandatory : No Calculator : None Response Time : N.A Think Time : N.A Minimum Instruction Time : 0**

**Correct Marks : 1 Wrong Marks : 0.25**

यदि  $13^{100}$  को 14 से विभाजित किया जाए, तो शेषफल है:

**Options :**

4058596751. 1

4058596752. 3

4058596753. 7

4058596754. 9

**Question Number : 57 Question Id : 4058592056 Question Type : MCQ Option Shuffling : Yes Is Question Mandatory : No Calculator : None Response Time : N.A Think Time : N.A Minimum Instruction Time : 0**

**Correct Marks : 1 Wrong Marks : 0.25**

If the difference between the simple interest received from two different sources on ₹ 1000 for 3 years is ₹ 90, then the difference between their rates of interest is :

**Options :**

4058596755. 2%

4058596756. 3%



4058596757. 2.5%

4058596758. 3.5%

**Question Number : 57 Question Id : 4058592056 Question Type : MCQ Option Shuffling : Yes Is Question Mandatory : No Calculator : None Response Time : N.A Think Time : N.A Minimum Instruction Time : 0**

**Correct Marks : 1 Wrong Marks : 0.25**

₹ 1000 पर 3 वर्षों के लिए दो भिन्न स्रोतों से प्राप्त साधारण ब्याज में अन्तर ₹ 90 है, तो उनके ब्याज की दरों में अन्तर है:

**Options :**

4058596755. 2%

4058596756. 3%

4058596757. 2.5%

4058596758. 3.5%

**Question Number : 58 Question Id : 4058592057 Question Type : MCQ Option Shuffling : Yes Is Question Mandatory : No Calculator : None Response Time : N.A Think Time : N.A Minimum Instruction Time : 0**

**Correct Marks : 1 Wrong Marks : 0.25**

What is the smallest number which leaves no remainder when divided by numbers 1, 2, 3, ....., 9?

**Options :**

4058596759. 1820

4058596760. 2520

4058596761. 3280

4058596762. 4020

**Question Number : 58 Question Id : 4058592057 Question Type : MCQ Option Shuffling : Yes Is Question Mandatory : No Calculator : None Response Time : N.A Think Time : N.A Minimum Instruction Time : 0**

**Correct Marks : 1 Wrong Marks : 0.25**

ऐसी सबसे छोटी संख्या क्या है जिसे 1, 2, 3, ....., 9 संख्याओं से भाग करने पर कोई शेषफल नहीं बचता है ?

**Options :**

4058596759. 1820

4058596760. 2520

4058596761. 3280

4058596762. 4020

**Question Number : 59 Question Id : 4058592058 Question Type : MCQ Option Shuffling : Yes Is Question Mandatory : No Calculator : None Response Time : N.A Think Time : N.A Minimum Instruction Time : 0**

**Correct Marks : 1 Wrong Marks : 0.25**

If  $K = 5 + 2\sqrt{6}$ , then  $\frac{(K-1)}{\sqrt{K}}$  is equal to:

**Options :**

4058596763. 1

4058596764.  $2\sqrt{2}$

4058596765.  $3\sqrt{2}$

4058596766. 2

**Question Number : 59 Question Id : 4058592058 Question Type : MCQ Option Shuffling : Yes Is Question Mandatory : No Calculator : None Response Time : N.A Think Time : N.A Minimum Instruction Time : 0**

**Correct Marks : 1 Wrong Marks : 0.25**

यदि  $K = 5 + 2\sqrt{6}$ , तो  $\frac{(K-1)}{\sqrt{K}}$  किसके बराबर है?

**Options :**

4058596763. 1

4058596764.  $2\sqrt{2}$

4058596765.  $3\sqrt{2}$

4058596766. 2

**Question Number : 60 Question Id : 4058592059 Question Type : MCQ Option Shuffling : Yes Is Question Mandatory : No Calculator : None Response Time : N.A Think Time : N.A Minimum Instruction Time : 0**

**Correct Marks : 1 Wrong Marks : 0.25**

$6.\bar{3} \times 0.0\bar{6} =$

**Options :**

4058596767.  $0.\bar{32}$

4058596768.  $0.\bar{38}$

4058596769.  $0.\overline{32}$

4058596770.  $0.\overline{38}$

**Question Number : 60 Question Id : 4058592059 Question Type : MCQ Option Shuffling : Yes Is Question Mandatory : No Calculator : None Response Time : N.A Think Time : N.A Minimum Instruction Time : 0**

**Correct Marks : 1 Wrong Marks : 0.25**

$$6.\overline{3} \times 0.\overline{06} =$$

**Options :**

4058596767.  $0.\overline{32}$

4058596768.  $0.\overline{38}$

4058596769.  $0.\overline{32}$

4058596770.  $0.\overline{38}$

## **Analytical & Logical Ability**

<b>Section Id :</b>	405859115
<b>Section Number :</b>	3
<b>Section type :</b>	Online
<b>Mandatory or Optional :</b>	Mandatory
<b>Number of Questions :</b>	15
<b>Number of Questions to be attempted :</b>	15
<b>Section Marks :</b>	15

<b>Enable Mark as Answered Mark for Review and Clear Response :</b>	Yes
<b>Maximum Instruction Time :</b>	0
<b>Sub-Section Number :</b>	1
<b>Sub-Section Id :</b>	405859137
<b>Question Shuffling Allowed :</b>	Yes
<b>Is Section Default? :</b>	null

**Question Number : 61 Question Id : 4058592060 Question Type : MCQ Option Shuffling : Yes Is Question Mandatory : No Calculator : None Response Time : N.A Think Time : N.A Minimum Instruction Time : 0**

**Correct Marks : 1 Wrong Marks : 0.25**

A solid cube has been painted red, blue and black on pairs of opposite faces. It is then cut into 64 cubical blocks of equal size. How many cubes have two faces painted red and black and all other faces unpainted?

**Options :**

4058596771. 12

4058596772. 4

4058596773. 8

4058596774. 16

**Question Number : 61 Question Id : 4058592060 Question Type : MCQ Option Shuffling : Yes Is Question Mandatory : No Calculator : None Response Time : N.A Think Time : N.A Minimum Instruction Time : 0**

**Correct Marks : 1 Wrong Marks : 0.25**

एक ठोस घन के विपरीत फलकों के युग्मों को लाल, नीले तथा काले रंग से रंगा गया है। फिर ईन्हें समान आकर के 64 घनीय खंडों में काटा जाता है। बताइए कि कितने घनों के दोनों फलक लाल तथा काले रंगे है तथा अन्य सभी फलक रंगे हुए नहीं है ?

**Options :**

4058596771. 12

4058596772. 4

4058596773. 8

4058596774. 16

**Question Number : 62 Question Id : 4058592061 Question Type : MCQ Option Shuffling : Yes Is  
Question Mandatory : No Calculator : None Response Time : N.A Think Time : N.A Minimum  
Instruction Time : 0**

**Correct Marks : 1 Wrong Marks : 0.25**

A, B, C, D, E, F and G are playing cards sitting around a circular table. D is not neighbour of C or E and A is neighbour of B and C. G, who is second to the left of D, is the neighbour of E and F. Which of the following options shows the correct order?

**Options :**

4058596775. DAB

4058596776. GCE

4058596777. BCA

4058596778. GFD

**Question Number : 62 Question Id : 4058592061 Question Type : MCQ Option Shuffling : Yes Is  
Question Mandatory : No Calculator : None Response Time : N.A Think Time : N.A Minimum  
Instruction Time : 0**

**Correct Marks : 1 Wrong Marks : 0.25**

एक वृत्ताकार मेज के चारों ओर बैठकर A, B, C, D, E, F और G ताश खेल रहे हैं। D, C या E का पड़ोसी नहीं है और A, B और C का पड़ोसी है। G जो कि D के बायीं ओर दूसरे स्थान पर है वह E और F का पड़ोसी है। निम्नलिखित विकल्पों में से कौन सा क्रम सही है?

**Options :**

4058596775. DAB

4058596776. GCE

4058596777. BCA

4058596778. GFD

**Question Number : 63 Question Id : 4058592062 Question Type : MCQ Option Shuffling : Yes Is**

**Question Mandatory : No Calculator : None Response Time : N.A Think Time : N.A Minimum**

**Instruction Time : 0**

**Correct Marks : 1 Wrong Marks : 0.25**

Introducing a man, Meera said that he is the brother of the daughter of the wife of my husband. How is the man related to Meera?

**Options :**

4058596779. Son

4058596780. Husband

4058596781. Brother

4058596782. Nephew

**Question Number : 63 Question Id : 4058592062 Question Type : MCQ Option Shuffling : Yes Is**

**Question Mandatory : No Calculator : None Response Time : N.A Think Time : N.A Minimum**

**Instruction Time : 0**

**Correct Marks : 1 Wrong Marks : 0.25**

एक व्यक्ति का परिचय देते हुए, मीरा ने कहा कि वह मेरे पति की पत्नी की पुत्री का भाई है।  
उस व्यक्ति का मीरा से क्या संबंध है?

**Options :**

4058596779. पुत्र

4058596780. पति

4058596781. भाई

4058596782. भतीजा

**Question Number : 64 Question Id : 4058592063 Question Type : MCQ Option Shuffling : Yes Is**

**Question Mandatory : No Calculator : None Response Time : N.A Think Time : N.A Minimum**

**Instruction Time : 0**

**Correct Marks : 1 Wrong Marks : 0.25**

If  $\div$  means  $+$ ,  $-$  means  $\div$ ,  $\times$  means  $-$  and  $+$  means  $\times$ , then  $\frac{(36 \times 4) - 8 \times 4}{4 + 8 \times 2 + 16 \div 1} = ?$

**Options :**

4058596783. 8

4058596784. 6

4058596785. 16

4058596786. 0

**Question Number : 64 Question Id : 4058592063 Question Type : MCQ Option Shuffling : Yes Is**

**Question Mandatory : No Calculator : None Response Time : N.A Think Time : N.A Minimum**



**Instruction Time : 0**

**Correct Marks : 1 Wrong Marks : 0.25**

यदि  $\div$  का अर्थ  $+$ ,  $-$  का अर्थ  $\div$ ,  $\times$  का अर्थ  $-$  और  $+$  का अर्थ  $\times$  है, तो  $\frac{(36 \times 4) - 8 \times 4}{4 + 8 \times 2 + 16 \div 1} = ?$

**Options :**

4058596783. 8

4058596784. 6

4058596785. 16

4058596786. 0

**Question Number : 65 Question Id : 4058592064 Question Type : MCQ Option Shuffling : Yes Is**

**Question Mandatory : No Calculator : None Response Time : N.A Think Time : N.A Minimum**

**Instruction Time : 0**

**Correct Marks : 1 Wrong Marks : 0.25**

How many such 5s are there in the following number sequence each of which is immediately preceded by 2 or 3, but not immediately followed by 7 or 8?

4 5 9 5 3 5 9 4 5 8 2 5 6 7 2 5 4 8 5 3 5 9 5 1 0

**Options :**

4058596787. 6

4058596788. 4

4058596789. 5

4058596790. 3

**Question Number : 65 Question Id : 4058592064 Question Type : MCQ Option Shuffling : Yes Is**

**Question Mandatory : No Calculator : None Response Time : N.A Think Time : N.A Minimum**

**Instruction Time : 0**

**Correct Marks : 1 Wrong Marks : 0.25**

निम्नलिखित संख्या अनुक्रम में ऐसे कितने 5 हैं जिसके तुरंत पहले 2 अथवा 3 है किन्तु तुरंत बाद 7 अथवा 8 नहीं है?

4 5 9 5 3 5 9 4 5 8 2 5 6 7 2 5 4 8 5 3 5 9 5 1 0

**Options :**

4058596787. 6

4058596788. 4

4058596789. 5

4058596790. 3

**Question Number : 66 Question Id : 4058592065 Question Type : MCQ Option Shuffling : Yes Is**

**Question Mandatory : No Calculator : None Response Time : N.A Think Time : N.A Minimum**

**Instruction Time : 0**

**Correct Marks : 1 Wrong Marks : 0.25**

A boy rode his bicycle northwards, then turned left and rode 1 km and again turned left and rode 2 km. He found himself exactly one km west of his starting point. How far did he ride northwards initially?

**Options :**

4058596791. 1 km

4058596792. 2 km

4058596793. 3 km

4058596794. 5 km

Question Number : 66 Question Id : 4058592065 Question Type : MCQ Option Shuffling : Yes Is

Question Mandatory : No Calculator : None Response Time : N.A Think Time : N.A Minimum

Instruction Time : 0

Correct Marks : 1 Wrong Marks : 0.25

एक लड़का अपनी साईकिल उत्तर की ओर ले जाता है, फिर बायीं ओर मुड़कर 1 कि.मी. जाता है और पुनः बायीं ओर मुड़कर 2 कि.मी. जाता है। वह अपने आरम्भिक बिन्दु के पश्चिम में ठीक 1 कि.मी. पर अपने आपको खड़ा पाता है। प्रारंभ में वह उत्तर दिशा में कितनी दूर तक गया?

Options :

4058596791. 1 कि.मी.

4058596792. 2 कि.मी.

4058596793. 3 कि.मी.

4058596794. 5 कि.मी.

Question Number : 67 Question Id : 4058592066 Question Type : MCQ Option Shuffling : Yes Is

Question Mandatory : No Calculator : None Response Time : N.A Think Time : N.A Minimum

Instruction Time : 0

Correct Marks : 1 Wrong Marks : 0.25

Find the missing term in the following number series:

0, 3, 12, 27, 48, 75, \_\_\_\_, 147

Options :

4058596795. 105

4058596796. 116

4058596797. 108

4058596798. 128

**Question Number : 67 Question Id : 4058592066 Question Type : MCQ Option Shuffling : Yes Is Question Mandatory : No Calculator : None Response Time : N.A Think Time : N.A Minimum Instruction Time : 0**

**Correct Marks : 1 Wrong Marks : 0.25**

निम्नलिखित संख्या श्रृंखला में लुप्त संख्या का पता लगाइए:

0, 3, 12, 27, 48, 75, ?, 147

**Options :**

4058596795. 105

4058596796. 116

4058596797. 108

4058596798. 128

**Question Number : 68 Question Id : 4058592067 Question Type : MCQ Option Shuffling : Yes Is Question Mandatory : No Calculator : None Response Time : N.A Think Time : N.A Minimum Instruction Time : 0**

**Correct Marks : 1 Wrong Marks : 0.25**

If 453945 is code for DECIDE, then 8978 is code for which word?

**Options :**

4058596799. BHEF

4058596800. CDEH

4058596801. GHEE

4058596802. HIGH

**Question Number : 68 Question Id : 4058592067 Question Type : MCQ Option Shuffling : Yes Is Question Mandatory : No Calculator : None Response Time : N.A Think Time : N.A Minimum Instruction Time : 0**

**Correct Marks : 1 Wrong Marks : 0.25**

यदि 453945 का कूट है DECIDE का, तो 8978 किस शब्द का कूट है?

**Options :**

4058596799. BHEF

4058596800. CDEH

4058596801. GHEE

4058596802. HIGH

**Question Number : 69 Question Id : 4058592068 Question Type : MCQ Option Shuffling : Yes Is Question Mandatory : No Calculator : None Response Time : N.A Think Time : N.A Minimum Instruction Time : 0**

**Correct Marks : 1 Wrong Marks : 0.25**

Given below is a statement followed by two assumptions number I and II. Consider the statement and decide which of the assumptions is/are implicit in the statement?

Statement :

His recent investment in the shares of company A is only a gamble.

Assumptions :

I. He may incur loss on his investment.

II. He may gain from his investment.

**Options :**

4058596803. If only assumption I is implicit.

4058596804. If only assumption II is implicit.

4058596805. If either I or II is implicit.

4058596806. If neither I nor II is implicit.

**Question Number : 69 Question Id : 4058592068 Question Type : MCQ Option Shuffling : Yes Is**

**Question Mandatory : No Calculator : None Response Time : N.A Think Time : N.A Minimum**

**Instruction Time : 0**

**Correct Marks : 1 Wrong Marks : 0.25**

नीचे एक कथन दिया गया है। उसके पश्चात दो धारणाएँ I व II दी गई हैं। कथन पर विचार कीजिए तथा सुनिश्चित कीजिए कि दिए गए कथन में कौन-सी धारणा / धारणाएँ अंतर्निहित हैं?

कथन : कंपनी A के शेयरों में उसका हाल ही में किया निवेश केवल जुआ है।

धारणाएँ :

I. उसे अपने निवेश में हानी हो सकती है।

II. उसे अपने निवेश में लाभ हो सकता है।

उत्तर दीजिए:

**Options :**

4058596803. केवल धारणा I अंतर्निहित है।

4058596804. केवल धारणा II अंतर्निहित है।

4058596805. I अथवा II अंतर्निहित है।

4058596806. I अथवा II कोई अंतर्निहित नहीं है।

**Question Number : 70 Question Id : 4058592069 Question Type : MCQ Option Shuffling : Yes Is**

**Question Mandatory : No Calculator : None Response Time : N.A Think Time : N.A Minimum**

**Instruction Time : 0**

**Correct Marks : 1 Wrong Marks : 0.25**

Given below is a statement, followed by two arguments numbered I and II. You have to decide which of the arguments is/are a 'strong' argument.

Statement:

Should students take part in politics?

Arguments:

I. Yes, it inculcates in them qualities of leadership.

II. No, they should study and build up their career.

**Options :**

4058596807. If only argument I is strong.

4058596808. If only argument II is strong.

4058596809. If either I or II is strong.

4058596810. If neither I nor II is strong.

**Question Number : 70 Question Id : 4058592069 Question Type : MCQ Option Shuffling : Yes Is**

**Question Mandatory : No Calculator : None Response Time : N.A Think Time : N.A Minimum**

**Instruction Time : 0**

**Correct Marks : 1 Wrong Marks : 0.25**

नीचे एक कथन दिया गया है। उसके आधार पर दो तर्क I व II दिए गए हैं। कथन पर विचार कीजिए तथा सुनिश्चित कीजिए कि कौन-सा/से तर्क प्रभावशाली है/हैं?

कथन : क्या छात्रों को राजनीति में भाग लेना चाहिए?

तर्क: I. हाँ, यह उन्हें नेतृत्व की क्षमता प्रदान करेगी।

II. नहीं, उन्हें पढ़-लिख कर अपना भविष्य बनाना चाहिए।

उत्तर दीजिए:

**Options :**

4058596807. यदि केवल तर्क I सशक्त है।

4058596808. यदि केवल तर्क II सशक्त है।

4058596809. यदि I अथवा II सशक्त है।

4058596810. यदि I अथवा II कोई सशक्त नहीं है।

**Question Number : 71 Question Id : 4058592070 Question Type : MCQ Option Shuffling : Yes Is**

**Question Mandatory : No Calculator : None Response Time : N.A Think Time : N.A Minimum**

**Instruction Time : 0**

**Correct Marks : 1 Wrong Marks : 0.25**

How many days will there be from 26<sup>th</sup> January 2004 to 15<sup>th</sup> May 2004 (both days included)?

**Options :**

4058596811. 110

4058596812. 111

4058596813. 112

4058596814. 113



**Question Number : 71 Question Id : 4058592070 Question Type : MCQ Option Shuffling : Yes Is Question Mandatory : No Calculator : None Response Time : N.A Think Time : N.A Minimum Instruction Time : 0**

**Correct Marks : 1 Wrong Marks : 0.25**

26 जनवरी 2004 से 15 मई 2004 तक कुल कितने दिन होंगे? (दिए गए दोनों दिनों को गिन कर चले)

**Options :**

4058596811. 110

4058596812. 111

4058596813. 112

4058596814. 113

**Question Number : 72 Question Id : 4058592071 Question Type : MCQ Option Shuffling : Yes Is Question Mandatory : No Calculator : None Response Time : N.A Think Time : N.A Minimum Instruction Time : 0**

**Correct Marks : 1 Wrong Marks : 0.25**

A class of boys stands in a single line. One boy is nineteenth in order from both the ends. How many boys are there in the class?

**Options :**

4058596815. 27

4058596816. 37

4058596817. 38

4058596818. 39

**Question Number : 72 Question Id : 4058592071 Question Type : MCQ Option Shuffling : Yes Is Question Mandatory : No Calculator : None Response Time : N.A Think Time : N.A Minimum Instruction Time : 0**

**Correct Marks : 1 Wrong Marks : 0.25**

एक कक्षा के लड़के एक कतार में खड़े हैं। एक लड़के का क्रम दोनों सिरों से 19वाँ है। कक्षा में कुल कितने लड़के हैं?

**Options :**

4058596815. 27

4058596816. 37

4058596817. 38

4058596818. 39

**Question Number : 73 Question Id : 4058592072 Question Type : MCQ Option Shuffling : Yes Is Question Mandatory : No Calculator : None Response Time : N.A Think Time : N.A Minimum Instruction Time : 0**

**Correct Marks : 1 Wrong Marks : 0.25**

Given below are two statements labelled as Assertion (A) and Reason (R). Choose the correct option as per the codes provided below:

Assertion (A): In winter, a glass tumbler breaks when hot water is poured into it.

Reason (R): The outer surface of glass expands when hot water is poured into it.

**Options :**

4058596819. Both (A) and (R) are true and (R) is the correct explanation of (A).

4058596820. Both (A) and (R) are true but (R) is not the correct explanation of (A).

4058596821. (A) is true but (R) is false.

4058596822. (A) is false but (R) is true.

**Question Number : 73 Question Id : 4058592072 Question Type : MCQ Option Shuffling : Yes Is Question Mandatory : No Calculator : None Response Time : N.A Think Time : N.A Minimum Instruction Time : 0**

**Correct Marks : 1 Wrong Marks : 0.25**

निम्नलिखित दो कथन अभिकथन (A) और कारण (R) के रूप में अंकित है। नीचे दिए गए कूटों के अनुसार सही विकल्प चुनिए:

अभिकथन (A): सर्दी में कांच के ग्लास में गर्म पानी डालने पर वह टूट जाता है।

कारण (R): ग्लास की बाह्य सतह गर्म पानी डालने पर बड़ जाती है।

**Options :**

4058596819. (A) और (R) दोनों सही हैं और (R), (A) की सही व्याख्या है।

4058596820. (A) और (R) दोनों सही हैं और (R), (A) की सही व्याख्या नहीं है।

4058596821. (A) सही है किन्तु (R) गलत है।

4058596822. (A) गलत है किन्तु (R) सही है।

**Question Number : 74 Question Id : 4058592073 Question Type : MCQ Option Shuffling : Yes Is Question Mandatory : No Calculator : None Response Time : N.A Think Time : N.A Minimum Instruction Time : 0**

**Correct Marks : 1 Wrong Marks : 0.25**

Answer the question based on the set of numbers given below:

738 429 156 273 894

Which of the following will be the last digit of the second highest number after the positions of the digits in each number are reversed?

**Options :**

4058596823. 1

4058596824. 7

4058596825. 4

4058596826. 2

**Question Number : 74 Question Id : 4058592073 Question Type : MCQ Option Shuffling : Yes Is**

**Question Mandatory : No Calculator : None Response Time : N.A Think Time : N.A Minimum**

**Instruction Time : 0**

**Correct Marks : 1 Wrong Marks : 0.25**

नीचे दिए गए अंक-समूहों के आधार पर प्रश्न का उत्तर दीजिए:

738 429 156 273 894

प्रत्येक संख्या के अंको की अवस्थिति उलट देने पर द्वितीय उच्चतम संख्या का अंतिम अंक निम्नलिखित में से क्या होगा?

**Options :**

4058596823. 1

4058596824. 7

4058596825. 4

4058596826. 2

**Question Number : 75 Question Id : 4058592074 Question Type : MCQ Option Shuffling : Yes Is**

**Question Mandatory : No Calculator : None Response Time : N.A Think Time : N.A Minimum**

**Instruction Time : 0**

**Correct Marks : 1 Wrong Marks : 0.25**

In the question below are given three statements followed by three conclusions numbered I, II and III. You have to take the given statements to be true even if they seem to be at variance from the commonly known facts. Read all the conclusions and then decide which of the given conclusions logically follows from the given statements?

Statements:

Some blades are hammers. Some hammers are knives. Some knives are axes.

Conclusions:

I. Some axes are hammers.

II. Some knives are blades.

III. Some axes are blades.

**Options :**

4058596827. None follows

4058596828. Only I follows

4058596829. Only II follows

4058596830. Only III follows

**Question Number : 75 Question Id : 4058592074 Question Type : MCQ Option Shuffling : Yes Is**

**Question Mandatory : No Calculator : None Response Time : N.A Think Time : N.A Minimum**

**Instruction Time : 0**

**Correct Marks : 1 Wrong Marks : 0.25**

नीचे दिए गए प्रश्न में तीन कथन दिए गए हैं। उनके आधार पर I, II व III तीन निष्कर्ष निकाले गए हैं। सामान्य तः ज्ञात तथ्यों के अनुसार भिन्न लगने की स्थिति में भी आप इन सभी कथनों को सत्य मानें। निष्कर्ष पढ़ें और तय करें कि दिए गए कथनों से कौन-सा निष्कर्ष तार्किक रूप से सही निकलता है?

कथन:

कुछ ब्लेड हथौड़े हैं। कुछ हथौड़े चाकू हैं। कुछ चाकू कुल्हाड़ियाँ हैं।

निष्कर्ष:

I. कुछ कुल्हाड़ियाँ हथौड़े हैं।

II. कुछ चाकू ब्लेड हैं।

III. कुछ कुल्हाड़ियाँ ब्लेड हैं।

उत्तर दीजिए:

**Options :**

4058596827. कोई निष्कर्ष नहीं निकलता है

4058596828. केवल I निकलता है

4058596829. केवल II निकलता है

4058596830. केवल III निकलता है

## General Knowledge and Current Affairs

**Section Id :** 405859116

**Section Number :** 4

**Section type :** Online

**Mandatory or Optional :** Mandatory

**Number of Questions :** 25

**Number of Questions to be attempted :** 25

<b>Section Marks :</b>	25
<b>Enable Mark as Answered Mark for Review and Clear Response :</b>	Yes
<b>Maximum Instruction Time :</b>	0
<b>Sub-Section Number :</b>	1
<b>Sub-Section Id :</b>	405859138
<b>Question Shuffling Allowed :</b>	Yes
<b>Is Section Default? :</b>	null

**Question Number : 76 Question Id : 4058592075 Question Type : MCQ Option Shuffling : Yes Is Question Mandatory : No Calculator : None Response Time : N.A Think Time : N.A Minimum Instruction Time : 0**

**Correct Marks : 1 Wrong Marks : 0.25**

Which of the following countries is NOT a part of Group of Twenty (G20)?

**Options :**

4058596831. Argentina

4058596832. Mexico

4058596833. Peru

4058596834. Saudi Arabia

**Question Number : 76 Question Id : 4058592075 Question Type : MCQ Option Shuffling : Yes Is Question Mandatory : No Calculator : None Response Time : N.A Think Time : N.A Minimum Instruction Time : 0**

**Correct Marks : 1 Wrong Marks : 0.25**

निम्नलिखित में से कौन-सा देश G20 (ग्रुप ऑफ ट्वेंटी) का सदस्य नहीं है?

**Options :**

4058596831. अर्जेंटीना

4058596832. मैक्सिको

4058596833. पेरू

4058596834. सऊदी अरब

**Question Number : 77 Question Id : 4058592076 Question Type : MCQ Option Shuffling : Yes Is Question Mandatory : No Calculator : None Response Time : N.A Think Time : N.A Minimum Instruction Time : 0**

**Correct Marks : 1 Wrong Marks : 0.25**

Who amongst the following is NOT one of the Ramon Magsaysay Awardees 2023?

**Options :**

4058596835. Rakshand, Korvi

4058596836. Lemos, Eugenio

4058596837. Ballon, Roberto

4058596838. Coronel-Ferrer, Miriam

**Question Number : 77 Question Id : 4058592076 Question Type : MCQ Option Shuffling : Yes Is Question Mandatory : No Calculator : None Response Time : N.A Think Time : N.A Minimum Instruction Time : 0**

**Correct Marks : 1 Wrong Marks : 0.25**

निम्नलिखित में से कौन रेमन मैग्सेसे पुरस्कार विजेता 2023 नहीं है?

**Options :**

4058596835. रक्षंद, कोरवी



4058596836. लेमोस, यूजेनियो

4058596837. बेलोन, रोबर्टो

4058596838. कोरोनेल - फेरर, मरियम

**Question Number : 78 Question Id : 4058592077 Question Type : MCQ Option Shuffling : Yes Is Question Mandatory : No Calculator : None Response Time : N.A Think Time : N.A Minimum Instruction Time : 0**

**Correct Marks : 1 Wrong Marks : 0.25**

Who amongst the following has been awarded with Arjuna Award 2022 for Para Swimming?

**Options :**

4058596839. Swapnil Sanjay Patil

4058596840. Sarita

4058596841. Tarun Dhillon

4058596842. Jerlin Anika J.

**Question Number : 78 Question Id : 4058592077 Question Type : MCQ Option Shuffling : Yes Is Question Mandatory : No Calculator : None Response Time : N.A Think Time : N.A Minimum Instruction Time : 0**

**Correct Marks : 1 Wrong Marks : 0.25**

निम्नलिखित में से किसे पैरा तैराकी के लिए 2022 का अर्जुन पुरस्कार प्रदान किया गया?

**Options :**

4058596839. स्वप्निल संजय पाटिल

4058596840. सरिता

4058596841. तरुण ढिल्लो

4058596842. जेरलिन अनिका जे.

**Question Number : 79 Question Id : 4058592078 Question Type : MCQ Option Shuffling : Yes Is Question Mandatory : No Calculator : None Response Time : N.A Think Time : N.A Minimum Instruction Time : 0**

**Correct Marks : 1 Wrong Marks : 0.25**

Place the following kingdoms after Mauryan Empire in chronological order.

- A. Shakas
- B. Indo-Greeks
- C. Kushanas

Choose the correct answer from the options given below:

**Options :**

4058596843. B, C, A

4058596844. C, B, A

4058596845. C, A, B

4058596846. B, A, C

**Question Number : 79 Question Id : 4058592078 Question Type : MCQ Option Shuffling : Yes Is Question Mandatory : No Calculator : None Response Time : N.A Think Time : N.A Minimum Instruction Time : 0**

**Correct Marks : 1 Wrong Marks : 0.25**

मौर्य साम्राज्य के बाद निम्नांकित साम्राज्यों को कालक्रमानुसार व्यवस्थित कीजिए:

- A. शक
- B. भारत-यूनानी (इन्डो-ग्रीक)
- C. कुषाण

नीचे दिए गए विकल्पों में से सही उत्तर चुनिए:

**Options :**

4058596843. B, C, A

4058596844. C, B, A

4058596845. C, A, B

4058596846. B, A, C

**Question Number : 80 Question Id : 4058592079 Question Type : MCQ Option Shuffling : Yes Is**

**Question Mandatory : No Calculator : None Response Time : N.A Think Time : N.A Minimum**

**Instruction Time : 0**

**Correct Marks : 1 Wrong Marks : 0.25**

Statement A : Mahatma Gandhi returned to India in January 1918.

Statement B : He had come from South Africa where he had successfully fought the racist regime with a method of mass agitation, called Satyagraha.

Choose the correct answer from the options given below:

**Options :**

4058596847. Statements A and B are correct.

4058596848. Statements A and B are incorrect.

4058596849. Statement A is correct, but Statement B is incorrect.

4058596850. Statement A is incorrect, but Statement B is correct.

**Question Number : 80 Question Id : 4058592079 Question Type : MCQ Option Shuffling : Yes Is Question Mandatory : No Calculator : None Response Time : N.A Think Time : N.A Minimum Instruction Time : 0**

**Correct Marks : 1 Wrong Marks : 0.25**

कथन A : महात्मा गाँधी जनवरी 1918 में भारत लौटे।

कथन B : वे दक्षिण अफ्रिका से आए थे जहाँ उन्होंने जन आंदोलन अर्थात् सत्याग्रह के माध्यम से नस्ली तंत्र व्यवस्था के विरुद्ध सफलतापूर्वक संघर्ष किया था।

नीचे दिए गए विकल्पों में से सही उत्तर चुनिए:

**Options :**

4058596847. कथन A और B सही हैं।

4058596848. कथन A और B दोनों गलत हैं।

4058596849. कथन A सही है किन्तु B गलत है।

4058596850. कथन A गलत है किन्तु B सही है।

**Question Number : 81 Question Id : 4058592080 Question Type : MCQ Option Shuffling : Yes Is Question Mandatory : No Calculator : None Response Time : N.A Think Time : N.A Minimum Instruction Time : 0**

**Correct Marks : 1 Wrong Marks : 0.25**

In which year Alexander Cunningham published a set of Ashokan inscriptions?

**Options :**

4058596851. 1784

4058596852. 1810

4058596853. 1956

4058596854. 1877

**Question Number : 81 Question Id : 4058592080 Question Type : MCQ Option Shuffling : Yes Is Question Mandatory : No Calculator : None Response Time : N.A Think Time : N.A Minimum Instruction Time : 0**

**Correct Marks : 1 Wrong Marks : 0.25**

अलेक्जेंडर कनिंघम ने किस वर्ष अशोक के शिलालेखों का एक सेट प्रकाशित किया था?

**Options :**

4058596851. 1784

4058596852. 1810

4058596853. 1956

4058596854. 1877

**Question Number : 82 Question Id : 4058592081 Question Type : MCQ Option Shuffling : Yes Is Question Mandatory : No Calculator : None Response Time : N.A Think Time : N.A Minimum Instruction Time : 0**

**Correct Marks : 1 Wrong Marks : 0.25**

Match List I with List II

LIST I (Years)		LIST II (incidents occurred)	
A.	1801	I.	Nawab Wajid Ali Shah deposed
B.	1858	II.	Rani Jhansi killed in Battle
C.	1856	III.	Mutiny starts in Meerut
D.	1857	IV.	Subsidiary Alliance introduced by Wellesley in Awadh

Choose the correct answer from the options given below:

**Options :**

4058596855. A-II, B-IV, C-I, D-III

4058596856. A-IV, B-II, C-I, D-III

4058596857. A-IV, B-II, C-III, D-I

4058596858. A-II, B-IV, C-III, D-I

Question Number : 82 Question Id : 4058592081 Question Type : MCQ Option Shuffling : Yes Is

Question Mandatory : No Calculator : None Response Time : N.A Think Time : N.A Minimum

Instruction Time : 0

Correct Marks : 1 Wrong Marks : 0.25

सूची I और सूची II को सुमेलित करें:

सूची I (वर्ष)		सूची II (घटनाक्रम)	
A.	1801	I.	नवाब वाजिद अली शाह का समर्पण
B.	1858	II.	रानी झांसी की युद्ध में मृत्यु
C.	1856	III.	मेरठ में विद्रोह का आरंभ
D.	1857	IV.	वेल्लेस्ली द्वारा अवध में सहायक संधिक का आरंभ

नीचे दिए गए विकल्पों में से सही उत्तर चुनिए:

**Options :**

4058596855. A-II, B-IV, C-I, D-III

4058596856. A-IV, B-II, C-I, D-III

4058596857. A-IV, B-II, C-III, D-I

4058596858. A-II, B-IV, C-III, D-I

**Question Number : 83 Question Id : 4058592082 Question Type : MCQ Option Shuffling : Yes Is Question Mandatory : No Calculator : None Response Time : N.A Think Time : N.A Minimum Instruction Time : 0**

**Correct Marks : 1 Wrong Marks : 0.25**

Which one of the following has not been written by Kalidasa?

**Options :**

4058596859. Kumarsambhava

4058596860. Uttaramcharita

4058596861. Raghuvansa

4058596862. Mughaduta

**Question Number : 83 Question Id : 4058592082 Question Type : MCQ Option Shuffling : Yes Is Question Mandatory : No Calculator : None Response Time : N.A Think Time : N.A Minimum Instruction Time : 0**

**Correct Marks : 1 Wrong Marks : 0.25**

निम्न में से क्या कालिदास द्वारा रचित नहीं है?

**Options :**

4058596859. कुमारसंभव

4058596860. उत्तररामचरित

4058596861. रघुवंश

4058596862. मेघदूत

**Question Number : 84 Question Id : 4058592083 Question Type : MCQ Option Shuffling : Yes Is Question Mandatory : No Calculator : None Response Time : N.A Think Time : N.A Minimum Instruction Time : 0**

**Correct Marks : 1 Wrong Marks : 0.25**

The ancient rock-cut caves of Karla and Bhaja are situated here. Identify the place:

**Options :**

4058596863. Nashik

4058596864. Khandala

4058596865. Solapur

4058596866. Aurangabad

**Question Number : 84 Question Id : 4058592083 Question Type : MCQ Option Shuffling : Yes Is Question Mandatory : No Calculator : None Response Time : N.A Think Time : N.A Minimum Instruction Time : 0**

**Correct Marks : 1 Wrong Marks : 0.25**

कार्ला तथा भाजा की प्राचीन रॉक-कट (चट्टानों को काटकर बनाई गई) गुफाएँ यहाँ स्थित हैं। स्थान को पहचानिए:

**Options :**

4058596863. नासिक

4058596864. खंडाला



4058596865. सोलापुर

4058596866. औरंगाबाद

**Question Number : 85 Question Id : 4058592084 Question Type : MCQ Option Shuffling : Yes Is Question Mandatory : No Calculator : None Response Time : N.A Think Time : N.A Minimum Instruction Time : 0**

**Correct Marks : 1 Wrong Marks : 0.25**

Which crop needs well drained fertile soils, moderate temperatures and lots of sunshine?

**Options :**

4058596867. Rice

4058596868. Wheat

4058596869. Millets

4058596870. Maize

**Question Number : 85 Question Id : 4058592084 Question Type : MCQ Option Shuffling : Yes Is Question Mandatory : No Calculator : None Response Time : N.A Think Time : N.A Minimum Instruction Time : 0**

**Correct Marks : 1 Wrong Marks : 0.25**

किस फसल को सुवाहित उर्वर मृदा, मध्यम तापमान और भरपूर धूप की आवश्यकता होती है?

**Options :**

4058596867. धान

4058596868. गेहूँ

4058596869. श्री अन्न / मोटे अनाज

4058596870. मक्का

**Question Number : 86 Question Id : 4058592085 Question Type : MCQ Option Shuffling : Yes Is**

**Question Mandatory : No Calculator : None Response Time : N.A Think Time : N.A Minimum**

**Instruction Time : 0**

**Correct Marks : 1 Wrong Marks : 0.25**

The largest salt water lake in India lies in Odisha is:

**Options :**

4058596871. Pulicat

4058596872. Chilika

4058596873. Loktak

4058596874. Barapani

**Question Number : 86 Question Id : 4058592085 Question Type : MCQ Option Shuffling : Yes Is**

**Question Mandatory : No Calculator : None Response Time : N.A Think Time : N.A Minimum**

**Instruction Time : 0**

**Correct Marks : 1 Wrong Marks : 0.25**

ओड़िशा में स्थित भारत की बृहत्तम लवणीय जल वाली ओड़िशा स्थित झील है-

**Options :**

4058596871. पुलिकट

4058596872. चिल्का

4058596873. लोकटक

4058596874. बड़ापानी

**Question Number : 87 Question Id : 4058592086 Question Type : MCQ Option Shuffling : Yes Is Question Mandatory : No Calculator : None Response Time : N.A Think Time : N.A Minimum Instruction Time : 0**

**Correct Marks : 1 Wrong Marks : 0.25**

The remains of the dead plants and animals trapped in the layers of rocks are called

**Options :**

4058596875. Fossils

4058596876. Sediments

4058596877. Ore

4058596878. Minerals

**Question Number : 87 Question Id : 4058592086 Question Type : MCQ Option Shuffling : Yes Is Question Mandatory : No Calculator : None Response Time : N.A Think Time : N.A Minimum Instruction Time : 0**

**Correct Marks : 1 Wrong Marks : 0.25**

चट्टानों की परतों में फँसे हुए मृत पादपों एवं जन्तुओं का अवशेष कहलाता है:

**Options :**

4058596875. जीवाश्म

4058596876. अवसाद

4058596877. अयस्क

4058596878. खनिज

**Question Number : 88 Question Id : 4058592087 Question Type : MCQ Option Shuffling : Yes Is Question Mandatory : No Calculator : None Response Time : N.A Think Time : N.A Minimum Instruction Time : 0**

**Correct Marks : 1 Wrong Marks : 0.25**

Typhoid and tuberculosis are:

**Options :**

4058596879. viral diseases

4058596880. bacterial diseases

4058596881. fungal infections

4058596882. lifestyle diseases

**Question Number : 88 Question Id : 4058592087 Question Type : MCQ Option Shuffling : Yes Is Question Mandatory : No Calculator : None Response Time : N.A Think Time : N.A Minimum Instruction Time : 0**

**Correct Marks : 1 Wrong Marks : 0.25**

Typhoid and tuberculosis are:

**Options :**

4058596879. वायरल (विषाणुकारित)

4058596880. बैक्टीरियल (जीवाणुकारित)

4058596881. कवक-संक्रमण से कारित

4058596882. जीवनशैली से संबंधित

**Question Number : 89 Question Id : 4058592088 Question Type : MCQ Option Shuffling : Yes Is Question Mandatory : No Calculator : None Response Time : N.A Think Time : N.A Minimum Instruction Time : 0**

**Correct Marks : 1 Wrong Marks : 0.25**

Which law of motion is applied when, a high jump athlete is made to fall either on a cushioned bed or on a sand bed?

**Options :**

4058596883. Second law of motion

4058596884. First law of motion

4058596885. Third law of motion

4058596886. Both Second law of motion and First law of motion

**Question Number : 89 Question Id : 4058592088 Question Type : MCQ Option Shuffling : Yes Is Question Mandatory : No Calculator : None Response Time : N.A Think Time : N.A Minimum Instruction Time : 0**

**Correct Marks : 1 Wrong Marks : 0.25**

जब ऊँची कूद वाले एथलीट को गद्देदार बिस्तर पर अथवा बालू के विस्तार पर गिराया जाता है तो गति का कौन सा नियम लागू होता है?

**Options :**

4058596883. गति का द्वितीय नियम

4058596884. गति का पहला नियम

4058596885. गति का तीसरा नियम

4058596886. गति का द्वितीय नियम और गतिका पहला नियम; दोनों

**Question Number : 90 Question Id : 4058592089 Question Type : MCQ Option Shuffling : Yes Is**

**Question Mandatory : No Calculator : None Response Time : N.A Think Time : N.A Minimum**

**Instruction Time : 0**

**Correct Marks : 1 Wrong Marks : 0.25**

Common cold and influenza are caused by:

**Options :**

4058596887. Viruses

4058596888. Bacteria

4058596889. Protozoans

4058596890. Fungi

**Question Number : 90 Question Id : 4058592089 Question Type : MCQ Option Shuffling : Yes Is**

**Question Mandatory : No Calculator : None Response Time : N.A Think Time : N.A Minimum**

**Instruction Time : 0**

**Correct Marks : 1 Wrong Marks : 0.25**

सामान्य सर्दी और इन्फ्लुएंजा निम्नांकित में से किसके कारण होता है?

**Options :**

4058596887. विषाणु

4058596888. जीवाणु

4058596889. प्रोटोजोआ

4058596890. कवक

**Question Number : 91 Question Id : 4058592090 Question Type : MCQ Option Shuffling : Yes Is Question Mandatory : No Calculator : None Response Time : N.A Think Time : N.A Minimum Instruction Time : 0**

**Correct Marks : 1 Wrong Marks : 0.25**

"Autosum" button is available on

**Options :**

4058596891. MS Word file

4058596892. MS Power Point file

4058596893. Excel Work Sheet

4058596894. Any PDF file

**Question Number : 91 Question Id : 4058592090 Question Type : MCQ Option Shuffling : Yes Is Question Mandatory : No Calculator : None Response Time : N.A Think Time : N.A Minimum Instruction Time : 0**

**Correct Marks : 1 Wrong Marks : 0.25**

"ऑटोसम" बटन निम्नांकित में से किसमें उपलब्ध है:

**Options :**

4058596891. एम एस वर्ड फाइल

4058596892. एम एस पावर प्वाइंट फाइल

4058596893. एक्सेल वर्कशीट

4058596894. कोई भी पीडीएफ फाइल

**Question Number : 92 Question Id : 4058592091 Question Type : MCQ Option Shuffling : Yes Is Question Mandatory : No Calculator : None Response Time : N.A Think Time : N.A Minimum Instruction Time : 0**

**Correct Marks : 1 Wrong Marks : 0.25**

Consider the following statements:

- A. Sorting of data can be done in MS Excel.
- B. Duplicates in data cannot be removed in MS Excel.

Which of the above statements is/are true?

**Options :**

4058596895. Only A is correct.

4058596896. Only B is correct.

4058596897. Both A and B are correct.

4058596898. Neither A nor B is correct.

**Question Number : 92 Question Id : 4058592091 Question Type : MCQ Option Shuffling : Yes Is Question Mandatory : No Calculator : None Response Time : N.A Think Time : N.A Minimum Instruction Time : 0**

**Correct Marks : 1 Wrong Marks : 0.25**



निम्नांकित कथनों पर विचार कीजिए:

A. एम एस एक्सेल में डाटा की सोर्टिंग की जा सकती है।

B. एम एस एक्सेल में डाटा का दौहरीकरण नहीं हटाया जा सकता है।

निम्नांकित में कौन सा/से कथन उपर्युक्त के संदर्भ में सही है/हैं:

**Options :**

4058596895. केवल A सही है।

4058596896. केवल B सही है।

4058596897. A और B दोनों सही है।

4058596898. न तो A न B सही है।

**Question Number : 93 Question Id : 4058592092 Question Type : MCQ Option Shuffling : Yes Is**

**Question Mandatory : No Calculator : None Response Time : N.A Think Time : N.A Minimum**

**Instruction Time : 0**

**Correct Marks : 1 Wrong Marks : 0.25**

In India, High Courts were first established in 1862 in which of the following three Presidency cities?

- A. Hyderabad
- B. Calcutta
- C. Bombay
- D. Madras

Choose the correct answer from the options given below:

**Options :**

4058596899. A, B and C only

4058596900. A, C and D only

4058596901. B, C and D only

4058596902. A, B and D only

**Question Number : 93 Question Id : 4058592092 Question Type : MCQ Option Shuffling : Yes Is**

**Question Mandatory : No Calculator : None Response Time : N.A Think Time : N.A Minimum**

**Instruction Time : 0**

**Correct Marks : 1 Wrong Marks : 0.25**

भारत में सबसे पहले 1862 में उच्च न्यायालयों की स्थापना निम्नलिखित प्रेजिडेन्सियों में से किन तीन प्रेजिडेन्सियों में हुई थी?

- A. हैदराबाद
- B. कलकत्ता
- C. बम्बई
- D. मद्रास

नीचे दिए गए विकल्पों में से सही उत्तर चुनिए:

**Options :**

4058596899. केवल A, B और C

4058596900. केवल A, C और D

4058596901. केवल B, C और D

4058596902. केवल A, B और D

**Question Number : 94 Question Id : 4058592093 Question Type : MCQ Option Shuffling : Yes Is**

**Question Mandatory : No Calculator : None Response Time : N.A Think Time : N.A Minimum**

**Instruction Time : 0**

**Correct Marks : 1 Wrong Marks : 0.25**

Consider the following statements:

- A. Legal dispute between the Union and the States can be resolved only by the Supreme Court of India.
- B. Legal dispute between the States themselves can be resolved by the High Courts.

Which of the above statements is/are correct?

**Options :**

4058596903. Only A is correct.

4058596904. Only B is correct.

4058596905. Both A and B are correct.

4058596906. Neither A nor B is correct.

**Question Number : 94 Question Id : 4058592093 Question Type : MCQ Option Shuffling : Yes Is**

**Question Mandatory : No Calculator : None Response Time : N.A Think Time : N.A Minimum**

**Instruction Time : 0**

**Correct Marks : 1 Wrong Marks : 0.25**

निम्नलिखित कथनों पर विचार कीजिए:

- A. संघ और राज्यों के मध्य कानूनी विवाद केवल भारत के उच्चतम न्यायालय द्वारा सुलझाया जा सकता है।
- B. राज्यों के मध्य कानूनी विवाद उच्च न्यायालयों द्वारा सुलझाए जा सकते हैं।

उपर्युक्त कथनों में से कौन सा कथन सही है/हैं?

**Options :**

4058596903. केवल A सही है।

4058596904. केवल B सही है।

4058596905. A और B दोनों सही है।

4058596906. न तो A, न B सही है।

**Question Number : 95 Question Id : 4058592094 Question Type : MCQ Option Shuffling : Yes Is Question Mandatory : No Calculator : None Response Time : N.A Think Time : N.A Minimum Instruction Time : 0**

**Correct Marks : 1 Wrong Marks : 0.25**

Consider the following statements:

- A. The term judicial review is mentioned in the Constitution of India.
- B. High Court in India do not have the power to issue writs of Habeas Corpus.

Which of the above statements is/are correct?

**Options :**

4058596907. Only A is correct.

4058596908. Only B is correct.

4058596909. Both A and B are correct.

4058596910. Neither A nor B is correct.

**Question Number : 95 Question Id : 4058592094 Question Type : MCQ Option Shuffling : Yes Is Question Mandatory : No Calculator : None Response Time : N.A Think Time : N.A Minimum Instruction Time : 0**

**Correct Marks : 1 Wrong Marks : 0.25**

निम्नलिखित कथनों पर विचार कीजिए:

- A. न्यायिक पुनरवलोकन शब्द भारत के संविधान में उल्लिखित है।
- B. भारत में उच्च न्यायालयों को बन्दी प्रत्यक्षीकरण रिट जारी करने की शक्ति प्राप्त नहीं है।

निम्नलिखित कथनों में से कौन सा सही है/हैं?

**Options :**

4058596907. केवल A सही है।

4058596908. केवल B सही है।

4058596909. A और B दोनो सही है।

4058596910. न तो A न ही B सही है।

**Question Number : 96 Question Id : 4058592095 Question Type : MCQ Option Shuffling : Yes Is Question Mandatory : No Calculator : None Response Time : N.A Think Time : N.A Minimum Instruction Time : 0**

**Correct Marks : 1 Wrong Marks : 0.25**

The provision of Directive Principles of State Policy of the Constitution of India is inspired by the constitution of which of the following countries?

**Options :**

4058596911. British Constitution

4058596912. Irish Constitution

4058596913. French Constitution

4058596914. Canadian Constitution

**Question Number : 96 Question Id : 4058592095 Question Type : MCQ Option Shuffling : Yes Is Question Mandatory : No Calculator : None Response Time : N.A Think Time : N.A Minimum Instruction Time : 0**

**Correct Marks : 1 Wrong Marks : 0.25**

भारत के संविधान में राज्य के नीति निर्देशक तत्व के प्रावधान निम्नलिखित में से किस देश के संविधान से प्रेरित हैं?

**Options :**

4058596911. ब्रिटिश संविधान

4058596912. आयरलैंड का संविधान

4058596913. फ्रांस का संविधान

4058596914. कनाडा का संविधान

**Question Number : 97 Question Id : 4058592096 Question Type : MCQ Option Shuffling : Yes Is Question Mandatory : No Calculator : None Response Time : N.A Think Time : N.A Minimum Instruction Time : 0**

**Correct Marks : 1 Wrong Marks : 0.25**

'The Gold Standard' which was the prevailing system from around 1870 to 1914, was the epitome of which of the following?

**Options :**

4058596915. Managed Floating Exchange Rate System

4058596916. Flexible Exchange Rate System

4058596917. Autonomous Transactions

4058596918. Fixed Exchange rate System

**Question Number : 97 Question Id : 4058592096 Question Type : MCQ Option Shuffling : Yes Is Question Mandatory : No Calculator : None Response Time : N.A Think Time : N.A Minimum Instruction Time : 0**

**Correct Marks : 1 Wrong Marks : 0.25**

"स्वर्णिम मानक / द गोल्ड स्टैण्डर्ड" जो लगभग 1870 से 1914 तक विद्यमान प्रणाली थी, वह निम्नलिखित में से किसका निष्कर्ष थी?

**Options :**

4058596915. प्रबन्धित अस्थायी विनिमय दर प्रणाली

4058596916. नम्य विनिमय दर प्रणाली

4058596917. स्वायत्त संव्यवहार

4058596918. नियम विनिमय दर प्रणाली

**Question Number : 98 Question Id : 4058592097 Question Type : MCQ Option Shuffling : Yes Is**

**Question Mandatory : No Calculator : None Response Time : N.A Think Time : N.A Minimum**

**Instruction Time : 0**

**Correct Marks : 1 Wrong Marks : 0.25**

What do you understand by Infant mortality rate?

**Options :**

4058596919. It is the death of children below 2 years of age.

4058596920. It is the death of children below 1 year of age.

4058596921. It is the death of children below 6 months of age.

4058596922. It is the death of children of 3 months of age.

**Question Number : 98 Question Id : 4058592097 Question Type : MCQ Option Shuffling : Yes Is**

**Question Mandatory : No Calculator : None Response Time : N.A Think Time : N.A Minimum**

**Instruction Time : 0**

**Correct Marks : 1 Wrong Marks : 0.25**

शिशु मृत्यु दर से आप क्या समझते हैं?

**Options :**

4058596919. यह दो वर्षों से कम आयु के शिशुओं की मृत्यु से सम्बन्धित है।

4058596920. यह एक वर्ष से कम आयु के शिशुओं की मृत्यु से सम्बन्धित है।

4058596921. यह छः महीने से कम आयु के शिशुओं की मृत्यु से सम्बन्धित है।

4058596922. यह तीन महीने से कम आयु के शिशुओं की मृत्यु से सम्बन्धित है।

**Question Number : 99 Question Id : 4058592098 Question Type : MCQ Option Shuffling : Yes Is**

**Question Mandatory : No Calculator : None Response Time : N.A Think Time : N.A Minimum**

**Instruction Time : 0**

**Correct Marks : 1 Wrong Marks : 0.25**

Which of the following are components of Capital Account?

- A. External Borrowings
- B. Transfer Payments
- C. External Assistance
- D. Investments

Choose the correct answer from the options given below:

**Options :**

4058596923. A, B and C only

4058596924. A, C and D only

4058596925. B, C and D only

4058596926. A, B and D only



**Question Number : 99 Question Id : 4058592098 Question Type : MCQ Option Shuffling : Yes Is Question Mandatory : No Calculator : None Response Time : N.A Think Time : N.A Minimum Instruction Time : 0**

**Correct Marks : 1 Wrong Marks : 0.25**

निम्नलिखित में से क्या पूँजी खाते के अवयव हैं?

- A. बाह्य ऋणदान
- B. भुगतान अन्तरण
- C. बाह्य सहायता
- D. निवेश

नीचे दिए गए विकल्पों में से सही उत्तर का चयन कीजिए:

**Options :**

4058596923. केवल A, B और C

4058596924. केवल A, C और D

4058596925. केवल B, C और D

4058596926. केवल A, B और D

**Question Number : 100 Question Id : 4058592099 Question Type : MCQ Option Shuffling : Yes Is Question Mandatory : No Calculator : None Response Time : N.A Think Time : N.A Minimum Instruction Time : 0**

**Correct Marks : 1 Wrong Marks : 0.25**

Variables differ on the basis of specific criterion, which are broadly classified into which of the following two types?

**Options :**

4058596927. Continuous and discrete

4058596928. Chronological and Spatial

4058596929. Standard deviation and mean deviation

4058596930. Mode and Range

**Question Number : 100 Question Id : 4058592099 Question Type : MCQ Option Shuffling : Yes**

**Is Question Mandatory : No Calculator : None Response Time : N.A Think Time : N.A**

**Minimum Instruction Time : 0**

**Correct Marks : 1 Wrong Marks : 0.25**

विशिष्ट मानदण्ड के आधार पर चर भिन्न होते हैं जिन्हें मोटे तौर पर निम्नलिखित किन दो प्रकारों में वर्गीकृत किया जाता है?

**Options :**

4058596927. निरन्तर और असतत

4058596928. कालानुक्रमिक और स्थानिक

4058596929. मानक विचलन और माध्य विचलन

4058596930. बहुलक और परास

# National Testing Agency

**Question Paper Name :** BDES CAT 05th Feb 2024 Shift 2  
**Subject Name :** BDES CAT  
**Creation Date :** 2024-02-05 21:32:49  
**Duration :** 180  
**Total Marks :** 100  
**Display Marks:** Yes

## BDES CAT

**Group Number :** 1  
**Group Id :** 95617724  
**Group Maximum Duration :** 0  
**Group Minimum Duration :** 180  
**Show Attended Group? :** No  
**Edit Attended Group? :** No  
**Break time :** 0  
**Group Marks :** 100  
**Is this Group for Examiner? :** No  
**Examiner permission :** Cant View  
**Show Progress Bar? :** No

## BDES CAT

**Section Id :** 95617780  
**Section Number :** 1

<b>Section type :</b>	Offline
<b>Mandatory or Optional :</b>	Mandatory
<b>Number of Questions :</b>	3
<b>Number of Questions to be attempted :</b>	3
<b>Section Marks :</b>	100
<b>Enable Mark as Answered Mark for Review and Clear Response :</b>	Yes
<b>Maximum Instruction Time :</b>	0
<b>Sub-Section Number :</b>	1
<b>Sub-Section Id :</b>	95617783
<b>Question Shuffling Allowed :</b>	No
<b>Is Section Default? :</b>	null

**Question Number : 1 Question Id : 9561771306 Question Type : SUBJECTIVE Consider As Subjective : Yes Calculator : None Response Time : N.A Think Time : N.A Minimum Instruction Time : 0**

**Correct Marks : 30**

Select any 3 numbers between 0-9 in Roman/English/Hindi/regional language and create any **ONE** of the following using the selected numbers. Mention the numbers on top of the answer sheet.

- (a) An entertainment zone
- (b) A play school
- (c) A public park

**Question Number : 1 Question Id : 9561771306 Question Type : SUBJECTIVE Consider As Subjective : Yes Calculator : None Response Time : N.A Think Time : N.A Minimum Instruction Time : 0**

**Correct Marks : 30**

रोमन/ अंग्रेजी/हिन्दी/क्षेत्रीय भाषा के अंक 0-9 के बीच में से किन्हीं 3 संख्याओं का चयन कीजिए और चयनित संख्याओं से निम्नलिखित में से किसी एक को डिजाइन (चित्रित) कीजिए। संख्याओं को उत्तर पुस्तिका के शीर्ष भाग में लिखिए।

- (a) एक मनोरंजन का क्षेत्र
- (b) एक प्लेस्कूल
- (c) एक सार्वजनिक पार्क

**Sub-Section Number :** 2  
**Sub-Section Id :** 95617784  
**Question Shuffling Allowed :** No  
**Is Section Default? :** null

**Question Number : 2 Question Id : 9561771307 Question Type : SUBJECTIVE Consider As Subjective : Yes Calculator : None Response Time : N.A Think Time : N.A Minimum Instruction Time : 0**

**Correct Marks : 40**

Illustrate four creative ways to use any **ONE** of the following :

- (a) A leaking tea cup
- (b) A non-repairable wall clock
- (c) A set of 4 compact discs

**Question Number : 2 Question Id : 9561771307 Question Type : SUBJECTIVE Consider As Subjective : Yes Calculator : None Response Time : N.A Think Time : N.A Minimum Instruction Time : 0**

**Correct Marks : 40**

निम्नलिखित में से किसी एक का उपयोग करने के चार रचनात्मक तरीकों को चित्रित कीजिए :

- (a) एक रिसता/टपकता हुआ चाय का प्याला
- (b) एक ठीक नहीं हो सकने वाली दीवार घड़ी
- (c) चार कॉम्पैक्ट डिस्क का सेट

**Sub-Section Number :** 3  
**Sub-Section Id :** 95617785

**Question Shuffling Allowed :**

No

**Is Section Default? :**

null

**Question Number : 3 Question Id : 9561771308 Question Type : SUBJECTIVE Consider As Subjective : Yes Calculator : None Response Time : N.A Think Time : N.A Minimum Instruction Time : 0**

**Correct Marks : 30**

Imagine and illustrate any ONE of the following which is artificially developed in future :

- (a) Insect
- (b) Bird
- (c) Fruit

Name it suitably and write its 3 unique properties.

**Question Number : 3 Question Id : 9561771308 Question Type : SUBJECTIVE Consider As Subjective : Yes Calculator : None Response Time : N.A Think Time : N.A Minimum Instruction Time : 0**

**Correct Marks : 30**

निम्नलिखित में से किसी एक की भविष्य में कृत्रिम रूप से विकसित किए जाने की कल्पना कीजिए और उसको चित्रित कीजिए :

- (a) कीट
- (b) पक्षी
- (c) फल

इसको उपयुक्त नाम दीजिए और इसके तीन विशिष्ट गुणों को लिखिए।

# National Testing Agency

<b>Question Paper Name :</b>	BFTECH 05th Feb 2024 Shift 1
<b>Subject Name :</b>	BFTECH
<b>Creation Date :</b>	2024-02-05 17:53:43
<b>Duration :</b>	180
<b>Total Marks :</b>	150
<b>Display Marks:</b>	Yes

## Section-A

<b>Group Number :</b>	1
<b>Group Id :</b>	40585924
<b>Group Maximum Duration :</b>	0
<b>Group Minimum Duration :</b>	0
<b>Show Attended Group? :</b>	Yes
<b>Edit Attended Group? :</b>	Yes
<b>Break time :</b>	0
<b>Group Marks :</b>	100
<b>Is this Group for Examiner? :</b>	No
<b>Examiner permission :</b>	Cant View
<b>Show Progress Bar? :</b>	No

## A-Communication Ability and English Comprehension

<b>Section Id :</b>	405859119
<b>Section Number :</b>	1

<b>Section type :</b>	Online
<b>Mandatory or Optional :</b>	Mandatory
<b>Number of Questions :</b>	31
<b>Number of Questions to be attempted :</b>	31
<b>Section Marks :</b>	40
<b>Enable Mark as Answered Mark for Review and Clear Response :</b>	Yes
<b>Maximum Instruction Time :</b>	0
<b>Sub-Section Number :</b>	1
<b>Sub-Section Id :</b>	405859145
<b>Question Shuffling Allowed :</b>	No
<b>Is Section Default? :</b>	null

**Question Id : 4058592106 Question Type : COMPREHENSION Sub Question Shuffling Allowed :  
Yes Group Comprehension Questions : No Question Pattern Type : NonMatrix Calculator :  
None Response Time : N.A Think Time : N.A Minimum Instruction Time : 0**

**Question Numbers : (1 to 5)**

Question Label : Comprehension



Read the passage and answer the following questions:

British luxury carmaker Rolls-Royce has successfully tested its new, experimental airliner engine UltraFan technology demonstrator to maximum power in its facility in Derby, UK, the firm has announced.

The initial stage of the test was conducted using 100 per cent Sustainable Aviation Fuel (SAF), it said.

"UltraFan demonstrator engine's run to full power took place in the world's largest and smartest indoor aero-engine testing facility - Testbed 80, in Derby, UK," the company said in a media release on Tuesday. The new UltraFan is 10 per cent more efficient than Rolls-Royce's Trent XWB, which is already the most efficient large aero-engine in service anywhere. In total, that is a 25 per cent efficiency gain since the launch of the first Trent engine, it said.

UltraFan's scalable technology - from 25,000-110,000 pounds of thrust -allows the new engine to power the narrow-body airliners that form the bulk of commercial airline fleets. Currently, Rolls-Royce only produces the large engines needed for powering twin engine, wide-body passenger airlines.

That leaves it out of the larger, more lucrative market for the smaller engines that power single-aisle aircraft. That market is dominated by its rivals - engine-makers Pratt & Whitney, General Electric and Safran. "As part of the UltraFan development programme, we have identified a number of technologies that are potentially transferable to our current Trent engines... The results of the test will provide us with valuable learning and data, which our teams will now take away and continue to analyse," said the company.

Besides wide-body commercial airliners, Rolls-Royce has a major presence in military aero engines and maritime engines that power warships. This test is an important milestone for the UltraFan demonstrator, which was tested successfully for the first time earlier this year. Since then, the UltraFan team has gradually increased power as part of the testing regime.

"This fantastic milestone puts us in a strong position to support plans of our customers as they develop the next generation of super efficient aircraft,' said the CEO, of Rolls-Royce.

### Sub questions

**Question Number : 1 Question Id : 4058592107 Question Type : MCQ Option Shuffling : Yes Is Question Mandatory : No Calculator : None Response Time : N.A Think Time : N.A Minimum Instruction Time : 0**

**Correct Marks : 1 Wrong Marks : 0.25**

Which is the old engine of Rolls-Royce?

**Options :**

4058596931. UltraFan

4058596932. Testbed 80

4058596933. Trent XWB

4058596934. None of the above

**Question Number : 2 Question Id : 4058592108 Question Type : MCQ Option Shuffling : Yes Is Question Mandatory : No Calculator : None Response Time : N.A Think Time : N.A Minimum Instruction Time : 0**

**Correct Marks : 1 Wrong Marks : 0.25**

Choose the incorrect statement from the following:

**Options :**

4058596935. UltraFan technology is 100% sustainable.

4058596936. UltraFan is 10% more efficient than Trent XWB.

4058596937. UltraFan can power narrow-body airliners.

4058596938. Trent XWB is the most efficient large aero-engine service anywhere.

**Question Number : 3 Question Id : 4058592109 Question Type : MCQ Option Shuffling : Yes Is Question Mandatory : No Calculator : None Response Time : N.A Think Time : N.A Minimum Instruction Time : 0**

**Correct Marks : 1 Wrong Marks : 0.25**

Choose the correct statement from the following:

**Options :**

4058596939. Rolls-Royce has minor presence military aero engines.

4058596940. Rolls-Royce has done major contribution to maritime engine that power warships.

4058596941. UltraFan is a customer support development designed for next generation.

4058596942. Rolls-Royce is responsible only for new engines that power narrow body airlines.

**Question Number : 4 Question Id : 4058592110 Question Type : MCQ Option Shuffling : Yes Is Question Mandatory : No Calculator : None Response Time : N.A Think Time : N.A Minimum Instruction Time : 0**

**Correct Marks : 1 Wrong Marks : 0.25**

Choose the word that nearly means the same as:

'The one who corroborates'.

**Options :**

4058596943. demonstrator

4058596944. generation

4058596945. learning

4058596946. super-efficient

**Question Number : 5 Question Id : 4058592111 Question Type : MCQ Option Shuffling : Yes Is Question Mandatory : No Calculator : None Response Time : N.A Think Time : N.A Minimum Instruction Time : 0**

**Correct Marks : 1 Wrong Marks : 0.25**

Choose the word that means:

'a very important stage or event in the development of something'.

**Options :**

4058596947. scalable

4058596948. lucrative

4058596949. milestone

4058596950. regime

**Question Id : 4058592106 Question Type : COMPREHENSION Sub Question Shuffling Allowed :**

**Yes Group Comprehension Questions : No Question Pattern Type : NonMatrix Calculator :**

**None Response Time : N.A Think Time : N.A Minimum Instruction Time : 0**

**Question Numbers : (1 to 5)**

Question Label : Comprehension

Read the passage and answer the following questions:

British luxury carmaker Rolls-Royce has successfully tested its new, experimental airliner engine UltraFan technology demonstrator to maximum power in its facility in Derby, UK, the firm has announced.

The initial stage of the test was conducted using 100 per cent Sustainable Aviation Fuel (SAF), it said.

"UltraFan demonstrator engine's run to full power took place in the world's largest and smartest indoor aero-engine testing facility - Testbed 80, in Derby, UK," the company said in a media release on Tuesday. The new UltraFan is 10 per cent more efficient than Rolls-Royce's Trent XWB, which is already the most efficient large aero-engine in service anywhere. In total, that is a 25 per cent efficiency gain since the launch of the first Trent engine, it said.

UltraFan's scalable technology - from 25,000-110,000 pounds of thrust -allows the new engine to power the narrow-body airliners that form the bulk of commercial airline fleets. Currently, Rolls-Royce only produces the large engines needed for powering twin engine, wide-body passenger airlines.

That leaves it out of the larger, more lucrative market for the smaller engines that power single-aisle aircraft. That market is dominated by its rivals - engine-makers Pratt & Whitney, General Electric and Safran. "As part of the UltraFan development programme, we have identified a number of technologies that are potentially transferable to our current Trent engines... The results of the test will provide us with valuable learning and data, which our teams will now take away and continue to analyse," said the company.

Besides wide-body commercial airliners, Rolls-Royce has a major presence in military aero engines and maritime engines that power warships. This test is an important milestone for the UltraFan demonstrator, which was tested successfully for the first time earlier this year. Since then, the UltraFan team has gradually increased power as part of the testing regime.

"This fantastic milestone puts us in a strong position to support plans of our customers as they develop the next generation of super efficient aircraft,' said the CEO, of Rolls-Royce.

### Sub questions

**Question Number : 1 Question Id : 4058592107 Question Type : MCQ Option Shuffling : Yes Is Question Mandatory : No Calculator : None Response Time : N.A Think Time : N.A Minimum Instruction Time : 0**

**Correct Marks : 1 Wrong Marks : 0.25**

Which is the old engine of Rolls-Royce?

**Options :**

4058596931. UltraFan

4058596932. Testbed 80

4058596933. Trent XWB

4058596934. None of the above

**Question Number : 2 Question Id : 4058592108 Question Type : MCQ Option Shuffling : Yes Is Question Mandatory : No Calculator : None Response Time : N.A Think Time : N.A Minimum Instruction Time : 0**

**Correct Marks : 1 Wrong Marks : 0.25**

Choose the incorrect statement from the following:

**Options :**

4058596935. UltraFan technology is 100% sustainable.

4058596936. UltraFan is 10% more efficient than Trent XWB.

4058596937. UltraFan can power narrow-body airliners.

4058596938. Trent XWB is the most efficient large aero-engine service anywhere.

**Question Number : 3 Question Id : 4058592109 Question Type : MCQ Option Shuffling : Yes Is Question Mandatory : No Calculator : None Response Time : N.A Think Time : N.A Minimum Instruction Time : 0**

**Correct Marks : 1 Wrong Marks : 0.25**

Choose the correct statement from the following:

**Options :**

4058596939. Rolls-Royce has minor presence military aero engines.

4058596940. Rolls-Royce has done major contribution to maritime engine that power warships.

4058596941. UltraFan is a customer support development designed for next generation.

4058596942. Rolls-Royce is responsible only for new engines that power narrow body airlines.

**Question Number : 4 Question Id : 4058592110 Question Type : MCQ Option Shuffling : Yes Is Question Mandatory : No Calculator : None Response Time : N.A Think Time : N.A Minimum Instruction Time : 0**

**Correct Marks : 1 Wrong Marks : 0.25**

Choose the word that nearly means the same as:

'The one who corroborates'.

**Options :**

4058596943. demonstrator

4058596944. generation

4058596945. learning

4058596946. super-efficient

**Question Number : 5 Question Id : 4058592111 Question Type : MCQ Option Shuffling : Yes Is Question Mandatory : No Calculator : None Response Time : N.A Think Time : N.A Minimum Instruction Time : 0**

**Correct Marks : 1 Wrong Marks : 0.25**

Choose the word that means:

'a very important stage or event in the development of something'.

**Options :**

4058596947. scalable

4058596948. lucrative

4058596949. milestone

4058596950. regime

<b>Sub-Section Number :</b>	2
<b>Sub-Section Id :</b>	405859146
<b>Question Shuffling Allowed :</b>	No
<b>Is Section Default? :</b>	null

**Question Id : 4058592112 Question Type : COMPREHENSION Sub Question Shuffling Allowed :**

**Yes Group Comprehension Questions : No Question Pattern Type : NonMatrix Calculator :**

**None Response Time : N.A Think Time : N.A Minimum Instruction Time : 0**

**Question Numbers : (6 to 11)**

Question Label : Comprehension

Read the passage and answer the following questions:

Temples often have some pillars portraying human figures playing musical instruments, but seldom do these pillars themselves produce music. At the Nelliappar temple in Tamil Nadu, gentle taps on a cluster of pillars carved out of a single piece of rock produce the basic notes of Indian classical music, viz, Sa, Re, Ga, Ma, Pa, Dha, Ni, Sa. Vibrations of these pillars depend on elasticity of the stone used, its density and shape.

Musical pillars are categorized into three types: The first is called the Shruti Pillar, as it can produce the basic notes - the 'swaras'. The second type is the Gana Thoongal, which generates the basic tunes that make up the "ragas". The third variety is the Laya Thoongal pillars that produce "taal" (beats) when tapped. The pillars at the Nallaiappar temple are a combination of the Shruti and Laya types.

Archaeologists date the Nelliappar temple to the 7th century and claim it was built by successive rulers of the Pandyan dynasty.

The musical pillars of Nelliappar and several other temples in Southern India like those at Hampi, Kanyakumari and Thiruvananthapuram are unique to the country and have no parallel in any other part of the world.

**Sub questions**



**Question Number : 6 Question Id : 4058592113 Question Type : MCQ Option Shuffling : Yes Is Question Mandatory : No Calculator : None Response Time : N.A Think Time : N.A Minimum Instruction Time : 0**

**Correct Marks : 1 Wrong Marks : 0.25**

A unique feature of Nellaiappar temple in Tamil Nadu is -

**Options :**

4058596951. it has pillars portraying human figures playing musical instruments.

4058596952. it has pillars carved out of a single piece of rock.

4058596953. it has pillars producing basic notes of Indian classical music.

4058596954. it has pillars that vibrate.

**Question Number : 7 Question Id : 4058592114 Question Type : MCQ Option Shuffling : Yes Is Question Mandatory : No Calculator : None Response Time : N.A Think Time : N.A Minimum Instruction Time : 0**

**Correct Marks : 1 Wrong Marks : 0.25**

The musical note produced by a pillar depends upon -

**Options :**

4058596955. the shape of the pillar.

4058596956. the vibrations of the pillar.

4058596957. the force of the tap on the pillar.

4058596958. the elasticity of the stone, its density and shape.

**Question Number : 8 Question Id : 4058592115 Question Type : MCQ Option Shuffling : Yes Is**

**Question Mandatory : No Calculator : None Response Time : N.A Think Time : N.A Minimum**

**Instruction Time : 0**

**Correct Marks : 1 Wrong Marks : 0.25**

The pillars producing the sound 'Sa, Re, Ga, Ma, Pa, Dha, Ni, Sa' are known as -

**Options :**

4058596959. musical pillars

4058596960. Shruti pillars

4058596961. Gana Thoongal

4058596962. Laya Thoongal

**Question Number : 9 Question Id : 4058592116 Question Type : MCQ Option Shuffling : Yes Is**

**Question Mandatory : No Calculator : None Response Time : N.A Think Time : N.A Minimum**

**Instruction Time : 0**

**Correct Marks : 1 Wrong Marks : 0.25**

The pillars at Nellaiappar temple are a combination of -

**Options :**

4058596963. Shruti and Laya

4058596964. Swara and Taal

4058596965. Gana and Laya

4058596966. Raagas and Taal Thoongal

**Question Number : 10 Question Id : 4058592117 Question Type : MCQ Option Shuffling : Yes Is**

**Question Mandatory : No Calculator : None Response Time : N.A Think Time : N.A Minimum**

**Instruction Time : 0**

**Correct Marks : 1 Wrong Marks : 0.25**

The passage mentions \_\_\_\_\_ places where musical pillars are found.

**Options :**

4058596967. 2

4058596968. 3

4058596969. 4

4058596970. 5

**Question Number : 11 Question Id : 4058592118 Question Type : MCQ Option Shuffling : Yes Is**

**Question Mandatory : No Calculator : None Response Time : N.A Think Time : N.A Minimum**

**Instruction Time : 0**

**Correct Marks : 1 Wrong Marks : 0.25**

A synonym of 'consecutive' from the passage is -

**Options :**

4058596971. Seldom

4058596972. Cluster

4058596973. Successive

4058596974. Parallel

**Question Id : 4058592112 Question Type : COMPREHENSION Sub Question Shuffling Allowed :**

**Yes Group Comprehension Questions : No Question Pattern Type : NonMatrix Calculator :**

**None Response Time : N.A Think Time : N.A Minimum Instruction Time : 0**

## Question Numbers : (6 to 11)

Question Label : Comprehension

Read the passage and answer the following questions:

Temples often have some pillars portraying human figures playing musical instruments, but seldom do these pillars themselves produce music. At the Nelliappar temple in Tamil Nadu, gentle taps on a cluster of pillars carved out of a single piece of rock produce the basic notes of Indian classical music, viz, Sa, Re, Ga, Ma, Pa, Dha, Ni, Sa. Vibrations of these pillars depend on elasticity of the stone used, its density and shape.

Musical pillars are categorized into three types: The first is called the Shruti Pillar, as it can produce the basic notes - the 'swaras'. The second type is the Gana Thoongal, which generates the basic tunes that make up the "ragas". The third variety is the Laya Thoongal pillars that produce "taal" (beats) when tapped. The pillars at the Nelliappar temple are a combination of the Shruti and Laya types.

Archaeologists date the Nelliappar temple to the 7th century and claim it was built by successive rulers of the Pandyan dynasty.

The musical pillars of Nelliappar and several other temples in Southern India like those at Hampi, Kanyakumari and Thiruvananthapuram are unique to the country and have no parallel in any other part of the world.

### Sub questions

Question Number : 6 Question Id : 4058592113 Question Type : MCQ Option Shuffling : Yes Is

Question Mandatory : No Calculator : None Response Time : N.A Think Time : N.A Minimum

Instruction Time : 0

Correct Marks : 1 Wrong Marks : 0.25

A unique feature of Nelliappar temple in Tamil Nadu is -

Options :

4058596951. it has pillars portraying human figures playing musical instruments.

4058596952. it has pillars carved out of a single piece of rock.

4058596953. it has pillars producing basic notes of Indian classical music.

4058596954. it has pillars that vibrate.

**Question Number : 7 Question Id : 4058592114 Question Type : MCQ Option Shuffling : Yes Is Question Mandatory : No Calculator : None Response Time : N.A Think Time : N.A Minimum Instruction Time : 0**

**Correct Marks : 1 Wrong Marks : 0.25**

The musical note produced by a pillar depends upon -

**Options :**

4058596955. the shape of the pillar.

4058596956. the vibrations of the pillar.

4058596957. the force of the tap on the pillar.

4058596958. the elasticity of the stone, its density and shape.

**Question Number : 8 Question Id : 4058592115 Question Type : MCQ Option Shuffling : Yes Is Question Mandatory : No Calculator : None Response Time : N.A Think Time : N.A Minimum Instruction Time : 0**

**Correct Marks : 1 Wrong Marks : 0.25**

The pillars producing the sound 'Sa, Re, Ga, Ma, Pa, Dha, Ni, Sa' are known as -

**Options :**

4058596959. musical pillars

4058596960. Shruti pillars

4058596961. Gana Thoongal

4058596962. Laya Thoongal

**Question Number : 9 Question Id : 4058592116 Question Type : MCQ Option Shuffling : Yes Is**

**Question Mandatory : No Calculator : None Response Time : N.A Think Time : N.A Minimum**

**Instruction Time : 0**

**Correct Marks : 1 Wrong Marks : 0.25**

The pillars at Nellaiappar temple are a combination of -

**Options :**

4058596963. Shruti and Laya

4058596964. Swara and Taal

4058596965. Gana and Laya

4058596966. Raagas and Taal Thoongal

**Question Number : 10 Question Id : 4058592117 Question Type : MCQ Option Shuffling : Yes Is**

**Question Mandatory : No Calculator : None Response Time : N.A Think Time : N.A Minimum**

**Instruction Time : 0**

**Correct Marks : 1 Wrong Marks : 0.25**

The passage mentions \_\_\_\_\_ places where musical pillars are found.

**Options :**

4058596967. 2

4058596968. 3

4058596969. 4

4058596970. 5

**Question Number : 11 Question Id : 4058592118 Question Type : MCQ Option Shuffling : Yes Is**

**Question Mandatory : No Calculator : None Response Time : N.A Think Time : N.A Minimum**

**Instruction Time : 0**

**Correct Marks : 1 Wrong Marks : 0.25**

A synonym of 'consecutive' from the passage is -

**Options :**

4058596971. Seldom

4058596972. Cluster

4058596973. Successive

4058596974. Parallel

<b>Sub-Section Number :</b>	3
<b>Sub-Section Id :</b>	405859147
<b>Question Shuffling Allowed :</b>	Yes
<b>Is Section Default? :</b>	null

**Question Number : 12 Question Id : 4058592119 Question Type : MCQ Option Shuffling : Yes Is**

**Question Mandatory : No Calculator : None Response Time : N.A Think Time : N.A Minimum**

**Instruction Time : 0**

**Correct Marks : 1 Wrong Marks : 0.25**

Fill in the blank with the correct word -

An accomplice is a partner in \_\_\_\_\_.

**Options :**

4058596975. business

4058596976. crime

4058596977. construction

4058596978. gambling

**Question Number : 12 Question Id : 4058592119 Question Type : MCQ Option Shuffling : Yes Is Question Mandatory : No Calculator : None Response Time : N.A Think Time : N.A Minimum Instruction Time : 0**

**Correct Marks : 1 Wrong Marks : 0.25**

Fill in the blank with the correct word -

An accomplice is a partner in \_\_\_\_\_.

**Options :**

4058596975. business

4058596976. crime

4058596977. construction

4058596978. gambling

**Question Number : 13 Question Id : 4058592120 Question Type : MCQ Option Shuffling : Yes Is Question Mandatory : No Calculator : None Response Time : N.A Think Time : N.A Minimum Instruction Time : 0**

**Correct Marks : 1 Wrong Marks : 0.25**

Fill in the blank with the correct word -

There has been a \_\_\_\_\_ of books and articles on the subject over the last year.

**Options :**

4058596979. Prolifration

4058596980. Proliferation

4058596981. Proliferasion



4058596982. Poliferasion

**Question Number : 13 Question Id : 4058592120 Question Type : MCQ Option Shuffling : Yes Is Question Mandatory : No Calculator : None Response Time : N.A Think Time : N.A Minimum Instruction Time : 0**

**Correct Marks : 1 Wrong Marks : 0.25**

Fill in the blank with the correct word -

There has been a \_\_\_\_\_ of books and articles on the subject over the last year.

**Options :**

4058596979. Prolifration

4058596980. Proliferation

4058596981. Proliferasion

4058596982. Poliferasion

**Question Number : 14 Question Id : 4058592121 Question Type : MCQ Option Shuffling : Yes Is Question Mandatory : No Calculator : None Response Time : N.A Think Time : N.A Minimum Instruction Time : 0**

**Correct Marks : 1 Wrong Marks : 0.25**

Fill in the blank with the correct word -

The gang was caught in \_\_\_\_\_ of stolen goods.

**Options :**

4058596983. Posecsion

4058596984. Possecion

4058596985. Possescion

4058596986. Possession

**Question Number : 14 Question Id : 4058592121 Question Type : MCQ Option Shuffling : Yes Is Question Mandatory : No Calculator : None Response Time : N.A Think Time : N.A Minimum Instruction Time : 0**

**Correct Marks : 1 Wrong Marks : 0.25**

Fill in the blank with the correct word -

The gang was caught in \_\_\_\_\_ of stolen goods.

**Options :**

4058596983. Posecsion

4058596984. Posseccion

4058596985. Possescion

4058596986. Possession

**Question Number : 15 Question Id : 4058592122 Question Type : MCQ Option Shuffling : Yes Is Question Mandatory : No Calculator : None Response Time : N.A Think Time : N.A Minimum Instruction Time : 0**

**Correct Marks : 1 Wrong Marks : 0.25**

Fill in the blank -

Hiring local people \_\_\_\_\_ jobs in tourism is a beneficial practice.

**Options :**

4058596987. to

4058596988. in

4058596989. for

4058596990. into

**Question Number : 15 Question Id : 4058592122 Question Type : MCQ Option Shuffling : Yes Is Question Mandatory : No Calculator : None Response Time : N.A Think Time : N.A Minimum Instruction Time : 0**

**Correct Marks : 1 Wrong Marks : 0.25**

Fill in the blank -

Hiring local people \_\_\_\_\_ jobs in tourism is a beneficial practice.

**Options :**

4058596987. to

4058596988. in

4058596989. for

4058596990. into

**Question Number : 16 Question Id : 4058592123 Question Type : MCQ Option Shuffling : Yes Is Question Mandatory : No Calculator : None Response Time : N.A Think Time : N.A Minimum Instruction Time : 0**

**Correct Marks : 1 Wrong Marks : 0.25**

Fill in the blanks:

The poet \_\_\_\_\_ the beauty of the courtesan with his lyrical melodies.

**Options :**

4058596991. disparaged

4058596992. extolled

4058596993. condemned

4058596994. scorned

**Question Number : 16 Question Id : 4058592123 Question Type : MCQ Option Shuffling : Yes Is**

**Question Mandatory : No Calculator : None Response Time : N.A Think Time : N.A Minimum**

**Instruction Time : 0**

**Correct Marks : 1 Wrong Marks : 0.25**

Fill in the blanks:

The poet \_\_\_\_\_ the beauty of the courtesan with his lyrical melodies.

**Options :**

4058596991. disparaged

4058596992. extolled

4058596993. condemned

4058596994. scorned

**Question Number : 17 Question Id : 4058592124 Question Type : MCQ Option Shuffling : Yes Is**

**Question Mandatory : No Calculator : None Response Time : N.A Think Time : N.A Minimum**

**Instruction Time : 0**

**Correct Marks : 1 Wrong Marks : 0.25**

Fill in the blanks:

The bandits \_\_\_\_\_ the traveller of his wallet, watch and \_\_\_\_\_ him grievously.

**Options :**

4058596995. stole, injured

4058596996. **snatched, hurt**

4058596997. **robbed, wounded**

4058596998. **hit, killed**

**Question Number : 17 Question Id : 4058592124 Question Type : MCQ Option Shuffling : Yes Is Question Mandatory : No Calculator : None Response Time : N.A Think Time : N.A Minimum Instruction Time : 0**

**Correct Marks : 1 Wrong Marks : 0.25**

**Fill in the blanks:**

The bandits \_\_\_\_\_ the traveller of his wallet, watch and \_\_\_\_\_ him grievously.

**Options :**

4058596995. **stole, injured**

4058596996. **snatched, hurt**

4058596997. **robbed, wounded**

4058596998. **hit, killed**

**Question Number : 18 Question Id : 4058592125 Question Type : MCQ Option Shuffling : Yes Is Question Mandatory : No Calculator : None Response Time : N.A Think Time : N.A Minimum Instruction Time : 0**

**Correct Marks : 1 Wrong Marks : 0.25**

Spot the error in the given sentence :

The king was perturbed to found evidence against his own queen.

A

B

C

D

**Options :**

4058596999. A

4058597000. B

4058597001. C

4058597002. D

**Question Number : 18 Question Id : 4058592125 Question Type : MCQ Option Shuffling : Yes Is Question Mandatory : No Calculator : None Response Time : N.A Think Time : N.A Minimum Instruction Time : 0**

**Correct Marks : 1 Wrong Marks : 0.25**

Spot the error in the given sentence :

The king was perturbed to found evidence against his own queen.

A

B

C

D

**Options :**

4058596999. A

4058597000. B

4058597001. C

4058597002. D

**Question Number : 19 Question Id : 4058592126 Question Type : MCQ Option Shuffling : Yes Is**

**Question Mandatory : No Calculator : None Response Time : N.A Think Time : N.A Minimum**

**Instruction Time : 0**

**Correct Marks : 1 Wrong Marks : 0.25**

Choose the correct spelling:

**Options :**

4058597003. COMMITTED

4058597004. COMMITTED

4058597005. COMMITTEED

4058597006. COMMITTEED

**Question Number : 19 Question Id : 4058592126 Question Type : MCQ Option Shuffling : Yes Is**

**Question Mandatory : No Calculator : None Response Time : N.A Think Time : N.A Minimum**

**Instruction Time : 0**

**Correct Marks : 1 Wrong Marks : 0.25**

Choose the correct spelling:

**Options :**

4058597003. COMMITTED

4058597004. COMMITTED

4058597005. COMMITTEED

4058597006. COMMITTEED

**Question Number : 20 Question Id : 4058592127 Question Type : MCQ Option Shuffling : Yes Is**

**Question Mandatory : No Calculator : None Response Time : N.A Think Time : N.A Minimum**

**Instruction Time : 0**

**Correct Marks : 1 Wrong Marks : 0.25**

Choose the correct spelling:

**Options :**

4058597007. SUPERFLUOUS

4058597008. SUPERSILIOUS

4058597009. PROFESIONALISM

4058597010. PROGISTERONE

**Question Number : 20 Question Id : 4058592127 Question Type : MCQ Option Shuffling : Yes Is**

**Question Mandatory : No Calculator : None Response Time : N.A Think Time : N.A Minimum**

**Instruction Time : 0**

**Correct Marks : 1 Wrong Marks : 0.25**

Choose the correct spelling:

**Options :**

4058597007. SUPERFLUOUS

4058597008. SUPERSILIOUS

4058597009. PROFESIONALISM

4058597010. PROGISTERONE

**Question Number : 21 Question Id : 4058592128 Question Type : MCQ Option Shuffling : Yes Is**

**Question Mandatory : No Calculator : None Response Time : N.A Think Time : N.A Minimum**

**Instruction Time : 0**

**Correct Marks : 1 Wrong Marks : 0.25**

Choose the correct spelling:



**Options :**

4058597011. MERITRICIOUS

4058597012. PROFFER

4058597013. HARRASS

4058597014. DUTYFUL

**Question Number : 21 Question Id : 4058592128 Question Type : MCQ Option Shuffling : Yes Is Question Mandatory : No Calculator : None Response Time : N.A Think Time : N.A Minimum Instruction Time : 0**

**Correct Marks : 1 Wrong Marks : 0.25**

Choose the correct spelling:

**Options :**

4058597011. MERITRICIOUS

4058597012. PROFFER

4058597013. HARRASS

4058597014. DUTYFUL

**Question Number : 22 Question Id : 4058592129 Question Type : MCQ Option Shuffling : Yes Is Question Mandatory : No Calculator : None Response Time : N.A Think Time : N.A Minimum Instruction Time : 0**

**Correct Marks : 1 Wrong Marks : 0.25**

Fill in the blank with the correct word -

There was an air of easy \_\_\_\_\_ about him.

**Options :**

4058597015. assurance

4058597016. assurance

4058597017. assurance

4058597018. assurance

**Question Number : 22 Question Id : 4058592129 Question Type : MCQ Option Shuffling : Yes Is Question Mandatory : No Calculator : None Response Time : N.A Think Time : N.A Minimum Instruction Time : 0**

**Correct Marks : 1 Wrong Marks : 0.25**

Fill in the blank with the correct word -

There was an air of easy \_\_\_\_\_ about him.

**Options :**

4058597015. assurance

4058597016. assurance

4058597017. assurance

4058597018. assurance

**Question Number : 23 Question Id : 4058592130 Question Type : MCQ Option Shuffling : Yes Is Question Mandatory : No Calculator : None Response Time : N.A Think Time : N.A Minimum Instruction Time : 0**

**Correct Marks : 1 Wrong Marks : 0.25**

Change into indirect speech -

He said, "Need I send an e-mail?"

**Options :**

4058597019. He asked me if he had to send an e-mail.

4058597020. He asked me if I need send an e-mail.

4058597021. He asked me that I need send an e-mail.

4058597022. He asked me if he need to send an e-mail.

**Question Number : 23 Question Id : 4058592130 Question Type : MCQ Option Shuffling : Yes Is Question Mandatory : No Calculator : None Response Time : N.A Think Time : N.A Minimum Instruction Time : 0**

**Correct Marks : 1 Wrong Marks : 0.25**

Change into indirect speech -

He said, "Need I send an e-mail?"

**Options :**

4058597019. He asked me if he had to send an e-mail.

4058597020. He asked me if I need send an e-mail.

4058597021. He asked me that I need send an e-mail.

4058597022. He asked me if he need to send an e-mail.

**Question Number : 24 Question Id : 4058592131 Question Type : MCQ Option Shuffling : Yes Is Question Mandatory : No Calculator : None Response Time : N.A Think Time : N.A Minimum Instruction Time : 0**

**Correct Marks : 1 Wrong Marks : 0.25**

Change into indirect speech -

The teacher said to the student, "Why were you absent yesterday?"

**Options :**

4058597023. The teacher asked the student why had been he absent the previous day.
4058597024. The teacher asked the student why he had been absent the previous day.
4058597025. The teacher informed the student that why he had been absent the next day.
4058597026. The teacher asked the student why had he been absent the previous day.

**Question Number : 24 Question Id : 4058592131 Question Type : MCQ Option Shuffling : Yes Is Question Mandatory : No Calculator : None Response Time : N.A Think Time : N.A Minimum Instruction Time : 0**

**Correct Marks : 1 Wrong Marks : 0.25**

Change into indirect speech -

The teacher said to the student, "Why were you absent yesterday?"

**Options :**

4058597023. The teacher asked the student why had been he absent the previous day.
4058597024. The teacher asked the student why he had been absent the previous day.
4058597025. The teacher informed the student that why he had been absent the next day.
4058597026. The teacher asked the student why had he been absent the previous day.

**Question Number : 25 Question Id : 4058592132 Question Type : MCQ Option Shuffling : Yes Is Question Mandatory : No Calculator : None Response Time : N.A Think Time : N.A Minimum Instruction Time : 0**

**Correct Marks : 1 Wrong Marks : 0.25**

Change into indirect speech -

"Many happy returns of your birthday", we said.

**Options :**

4058597027. We greeted him on his birthday.

4058597028. We said that many happy returns of your birthday.

4058597029. We prayed for many happy returns of the day.

4058597030. We wished him many happy returns of his birthday.

**Question Number : 25 Question Id : 4058592132 Question Type : MCQ Option Shuffling : Yes Is**

**Question Mandatory : No Calculator : None Response Time : N.A Think Time : N.A Minimum**

**Instruction Time : 0**

**Correct Marks : 1 Wrong Marks : 0.25**

Change into indirect speech -

"Many happy returns of your birthday", we said.

**Options :**

4058597027. We greeted him on his birthday.

4058597028. We said that many happy returns of your birthday.

4058597029. We prayed for many happy returns of the day.

4058597030. We wished him many happy returns of his birthday.

**Question Number : 26 Question Id : 4058592133 Question Type : MCQ Option Shuffling : Yes Is**

**Question Mandatory : No Calculator : None Response Time : N.A Think Time : N.A Minimum**

**Instruction Time : 0**

**Correct Marks : 1 Wrong Marks : 0.25**

Change into Active voice -

Let the police be called at once.

**Options :**

4058597031. Once call the police.

4058597032. Call the police at once.

4058597033. Call the police.

4058597034. Call once the police.

**Question Number : 26 Question Id : 4058592133 Question Type : MCQ Option Shuffling : Yes Is**

**Question Mandatory : No Calculator : None Response Time : N.A Think Time : N.A Minimum**

**Instruction Time : 0**

**Correct Marks : 1 Wrong Marks : 0.25**

Change into Active voice -

Let the police be called at once.

**Options :**

4058597031. Once call the police.

4058597032. Call the police at once.

4058597033. Call the police.

4058597034. Call once the police.

**Question Number : 27 Question Id : 4058592134 Question Type : MCQ Option Shuffling : Yes Is**

**Question Mandatory : No Calculator : None Response Time : N.A Think Time : N.A Minimum**

**Instruction Time : 0**

**Correct Marks : 1 Wrong Marks : 0.25**

Change into Active voice -

By whom was it painted?

**Options :**

4058597035. Who painted it?

4058597036. Who paint it?

4058597037. Who had painted it?

4058597038. Who has painted it?

**Question Number : 27 Question Id : 4058592134 Question Type : MCQ Option Shuffling : Yes Is**

**Question Mandatory : No Calculator : None Response Time : N.A Think Time : N.A Minimum**

**Instruction Time : 0**

**Correct Marks : 1 Wrong Marks : 0.25**

Change into Active voice -

By whom was it painted?

**Options :**

4058597035. Who painted it?

4058597036. Who paint it?

4058597037. Who had painted it?

4058597038. Who has painted it?

**Question Number : 28 Question Id : 4058592135 Question Type : MCQ Option Shuffling : Yes Is Question Mandatory : No Calculator : None Response Time : N.A Think Time : N.A Minimum Instruction Time : 0**

**Correct Marks : 1 Wrong Marks : 0.25**

Change into Active voice -

We were told about the new project by the M.D.

**Options :**

4058597039. The MD was telling us the new project.

4058597040. The MD had told us about the new project.

4058597041. The MD has told us about the new project.

4058597042. The MD told us about the new project.

**Question Number : 28 Question Id : 4058592135 Question Type : MCQ Option Shuffling : Yes Is Question Mandatory : No Calculator : None Response Time : N.A Think Time : N.A Minimum Instruction Time : 0**

**Correct Marks : 1 Wrong Marks : 0.25**

Change into Active voice -

We were told about the new project by the M.D.

**Options :**

4058597039. The MD was telling us the new project.

4058597040. The MD had told us about the new project.

4058597041. The MD has told us about the new project.



4058597042. The MD told us about the new project.

**Question Number : 29 Question Id : 4058592136 Question Type : MCQ Option Shuffling : Yes Is Question Mandatory : No Calculator : None Response Time : N.A Think Time : N.A Minimum Instruction Time : 0**

**Correct Marks : 1 Wrong Marks : 0.25**

Choose the most appropriate option for the following idiomatic expression :

Rita is really up in the creek without her family members.

**Options :**

4058597043. Shy and modest

4058597044. bold and rowdy

4058597045. forced to do hard labor

4058597046. in serious difficulties

**Question Number : 29 Question Id : 4058592136 Question Type : MCQ Option Shuffling : Yes Is Question Mandatory : No Calculator : None Response Time : N.A Think Time : N.A Minimum Instruction Time : 0**

**Correct Marks : 1 Wrong Marks : 0.25**

Choose the most appropriate option for the following idiomatic expression :

Rita is really up in the creek without her family members.

**Options :**

4058597043. Shy and modest

4058597044. bold and rowdy

4058597045. forced to do hard labor

4058597046. in serious difficulties

**Question Number : 30 Question Id : 4058592137 Question Type : MCQ Option Shuffling : Yes Is Question Mandatory : No Calculator : None Response Time : N.A Think Time : N.A Minimum Instruction Time : 0**

**Correct Marks : 1 Wrong Marks : 0.25**

Choose the most appropriate option from the following:

'To gild the pill'

**Options :**

4058597047. to revive matters

4058597048. to have no effect

4058597049. to cover an unpleasant thing by a pleasant one

4058597050. to behave cowardly

**Question Number : 30 Question Id : 4058592137 Question Type : MCQ Option Shuffling : Yes Is Question Mandatory : No Calculator : None Response Time : N.A Think Time : N.A Minimum Instruction Time : 0**

**Correct Marks : 1 Wrong Marks : 0.25**

Choose the most appropriate option from the following:

'To gild the pill'

**Options :**

4058597047. to revive matters

4058597048. to have no effect

4058597049. to cover an unpleasant thing by a pleasant one

4058597050. to behave cowardly

**Question Number : 31 Question Id : 4058592138 Question Type : MCQ Option Shuffling : Yes Is Question Mandatory : No Calculator : None Response Time : N.A Think Time : N.A Minimum Instruction Time : 0**

**Correct Marks : 1 Wrong Marks : 0.25**

Choose the correct option for the following:

'To give chapter and verse for a thing'

**Options :**

4058597051. to succeed slowly

4058597052. to submit proof

4058597053. to tarnish

4058597054. to give a good show

**Question Number : 31 Question Id : 4058592138 Question Type : MCQ Option Shuffling : Yes Is Question Mandatory : No Calculator : None Response Time : N.A Think Time : N.A Minimum Instruction Time : 0**

**Correct Marks : 1 Wrong Marks : 0.25**

Choose the correct option for the following:

'To give chapter and verse for a thing'

**Options :**

4058597051. to succeed slowly

4058597052. to submit proof

4058597053. to tarnish

4058597054. to give a good show

**Question Number : 32 Question Id : 4058592139 Question Type : MCQ Option Shuffling : Yes Is  
Question Mandatory : No Calculator : None Response Time : N.A Think Time : N.A Minimum  
Instruction Time : 0**

**Correct Marks : 1 Wrong Marks : 0.25**

Choose the word opposite in meaning to the given word:

"REPOSE"

**Options :**

4058597055. LYCEUM

4058597056. SCION

4058597057. MOTION

4058597058. REPERTORY

**Question Number : 32 Question Id : 4058592139 Question Type : MCQ Option Shuffling : Yes Is  
Question Mandatory : No Calculator : None Response Time : N.A Think Time : N.A Minimum  
Instruction Time : 0**

**Correct Marks : 1 Wrong Marks : 0.25**

Choose the word opposite in meaning to the given word:

"REPOSE"

**Options :**

4058597055. LYCEUM

4058597056. SCION

4058597057. MOTION

4058597058. REPERTORY

**Question Number : 33 Question Id : 4058592140 Question Type : MCQ Option Shuffling : Yes Is  
Question Mandatory : No Calculator : None Response Time : N.A Think Time : N.A Minimum  
Instruction Time : 0**

**Correct Marks : 1 Wrong Marks : 0.25**

In the following question, four words are given of which two words are most nearly the same or opposite in meanings. Find the correct option showing the correct letter combination.

- A. Mitigate
- B. Acquiesce
- C. Relinquish
- D. Duplicate

**Options :**

4058597059. A-C

4058597060. B-C

4058597061. A-B

4058597062. C-D

**Question Number : 33 Question Id : 4058592140 Question Type : MCQ Option Shuffling : Yes Is  
Question Mandatory : No Calculator : None Response Time : N.A Think Time : N.A Minimum  
Instruction Time : 0**

**Correct Marks : 1 Wrong Marks : 0.25**

In the following question, four words are given of which two words are most nearly the same or opposite in meanings. Find the correct option showing the correct letter combination.

- A. Mitigate
- B. Acquiesce
- C. Relinquish
- D. Duplicate

**Options :**

4058597059. A-C

4058597060. B-C

4058597061. A-B

4058597062. C-D

**Question Number : 34 Question Id : 4058592141 Question Type : MCQ Option Shuffling : Yes Is Question Mandatory : No Calculator : None Response Time : N.A Think Time : N.A Minimum Instruction Time : 0**

**Correct Marks : 1 Wrong Marks : 0.25**

In the following question, four words are given of which two words are most nearly the same or opposite in meanings. Find the correct option showing the correct letter combination.

- A. Vivacious
- B. Weird
- C. Rabid
- D. Fanatical

**Options :**

4058597063. A-B

4058597064. B-C

4058597065. B-D

4058597066. C-D

**Question Number : 34 Question Id : 4058592141 Question Type : MCQ Option Shuffling : Yes Is Question Mandatory : No Calculator : None Response Time : N.A Think Time : N.A Minimum Instruction Time : 0**

**Correct Marks : 1 Wrong Marks : 0.25**

In the following question, four words are given of which two words are most nearly the same or opposite in meanings. Find the correct option showing the correct letter combination.

- A. Vivacious
- B. Weird
- C. Rabid
- D. Fanatical

**Options :**

4058597063. A-B

4058597064. B-C

4058597065. B-D

4058597066. C-D

**Question Number : 35 Question Id : 4058592142 Question Type : MCQ Option Shuffling : Yes Is Question Mandatory : No Calculator : None Response Time : N.A Think Time : N.A Minimum Instruction Time : 0**

**Correct Marks : 1 Wrong Marks : 0.25**

Of the given alternatives, select the one which is most nearly the same in meaning to the word which is underlined -

"Dr. S. Radhakrishnan has written an erudite commentary on the Bhagwad Gita."

**Options :**

4058597067. scholarly

4058597068. inspiring

4058597069. effective

4058597070. perfect

**Question Number : 35 Question Id : 4058592142 Question Type : MCQ Option Shuffling : Yes Is**

**Question Mandatory : No Calculator : None Response Time : N.A Think Time : N.A Minimum**

**Instruction Time : 0**

**Correct Marks : 1 Wrong Marks : 0.25**

Of the given alternatives, select the one which is most nearly the same in meaning to the word which is underlined -

"Dr. S. Radhakrishnan has written an erudite commentary on the Bhagwad Gita."

**Options :**

4058597067. scholarly

4058597068. inspiring

4058597069. effective

4058597070. perfect

**Question Number : 36 Question Id : 4058592143 Question Type : MCQ Option Shuffling : Yes Is**

**Question Mandatory : No Calculator : None Response Time : N.A Think Time : N.A Minimum**

**Instruction Time : 0**

**Correct Marks : 1 Wrong Marks : 0.25**

Of the given alternatives, select the one which is most nearly the same in meaning to the underlined word:

"The base of Indian politicians is the group of sycophants around them who earn bad name for the leaders".



**Options :**

4058597071. critics

4058597072. flatterers

4058597073. foppish

4058597074. jargon

**Question Number : 36 Question Id : 4058592143 Question Type : MCQ Option Shuffling : Yes Is Question Mandatory : No Calculator : None Response Time : N.A Think Time : N.A Minimum Instruction Time : 0**

**Correct Marks : 1 Wrong Marks : 0.25**

Of the given alternatives, select the one which is most nearly the same in meaning to the underlined word:

"The base of Indian politicians is the group of sycophants around them who earn bad name for the leaders".

**Options :**

4058597071. critics

4058597072. flatterers

4058597073. foppish

4058597074. jargon

**Question Number : 37 Question Id : 4058592144 Question Type : MCQ Option Shuffling : Yes Is Question Mandatory : No Calculator : None Response Time : N.A Think Time : N.A Minimum Instruction Time : 0**

**Correct Marks : 1 Wrong Marks : 0.25**

Of the four alternatives, choose the one which best expresses the meaning of the given word:

"Accoutrements"

**Options :**

4058597075. relatives

4058597076. companions

4058597077. calculations

4058597078. equipments

**Question Number : 37 Question Id : 4058592144 Question Type : MCQ Option Shuffling : Yes Is**

**Question Mandatory : No Calculator : None Response Time : N.A Think Time : N.A Minimum**

**Instruction Time : 0**

**Correct Marks : 1 Wrong Marks : 0.25**

Of the four alternatives, choose the one which best expresses the meaning of the given word:

"Accoutrements"

**Options :**

4058597075. relatives

4058597076. companions

4058597077. calculations

4058597078. equipments

**Question Number : 38 Question Id : 4058592145 Question Type : MCQ Option Shuffling : Yes Is**

**Question Mandatory : No Calculator : None Response Time : N.A Think Time : N.A Minimum**

**Instruction Time : 0**

**Correct Marks : 1 Wrong Marks : 0.25**

Give one word for the given expression :

Allowance paid to wife on legal separation.

**Options :**

4058597079. alimony

4058597080. dowry

4058597081. pension

4058597082. gratuity

**Question Number : 38 Question Id : 4058592145 Question Type : MCQ Option Shuffling : Yes Is**

**Question Mandatory : No Calculator : None Response Time : N.A Think Time : N.A Minimum**

**Instruction Time : 0**

**Correct Marks : 1 Wrong Marks : 0.25**

Give one word for the given expression :

Allowance paid to wife on legal separation.

**Options :**

4058597079. alimony

4058597080. dowry

4058597081. pension

4058597082. gratuity

**Question Number : 39 Question Id : 4058592146 Question Type : MCQ Option Shuffling : Yes Is**

**Question Mandatory : No Calculator : None Response Time : N.A Think Time : N.A Minimum**

**Instruction Time : 0**

**Correct Marks : 1 Wrong Marks : 0.25**

Give one word for the given expression :

A rearrangement of a group of letters, especially a word that can be formed by rearranging the letters in another word.

**Options :**

4058597083. acronym

4058597084. acrostic

4058597085. anadiplosis

4058597086. anagram

**Question Number : 39 Question Id : 4058592146 Question Type : MCQ Option Shuffling : Yes Is**

**Question Mandatory : No Calculator : None Response Time : N.A Think Time : N.A Minimum**

**Instruction Time : 0**

**Correct Marks : 1 Wrong Marks : 0.25**

Give one word for the given expression :

A rearrangement of a group of letters, especially a word that can be formed by rearranging the letters in another word.

**Options :**

4058597083. acronym

4058597084. acrostic

4058597085. anadiplosis

4058597086. anagram

**Question Number : 40 Question Id : 4058592147 Question Type : MCQ Option Shuffling : Yes Is Question Mandatory : No Calculator : None Response Time : N.A Think Time : N.A Minimum Instruction Time : 0**

**Correct Marks : 1 Wrong Marks : 0.25**

Give one word for the given expression -

Inability to read, usually caused by brain lesions; word blindness.

**Options :**

4058597087. **dyscalculia**

4058597088. **alexia**

4058597089. **ambigraphia**

4058597090. **dysgraphia**

**Question Number : 40 Question Id : 4058592147 Question Type : MCQ Option Shuffling : Yes Is Question Mandatory : No Calculator : None Response Time : N.A Think Time : N.A Minimum Instruction Time : 0**

**Correct Marks : 1 Wrong Marks : 0.25**

Give one word for the given expression -

Inability to read, usually caused by brain lesions; word blindness.

**Options :**

4058597087. **dyscalculia**

4058597088. **alexia**

4058597089. **ambigraphia**

## A-Quantitative Ability

<b>Section Id :</b>	405859120
<b>Section Number :</b>	2
<b>Section type :</b>	Online
<b>Mandatory or Optional :</b>	Mandatory
<b>Number of Questions :</b>	20
<b>Number of Questions to be attempted :</b>	20
<b>Section Marks :</b>	20
<b>Enable Mark as Answered Mark for Review and Clear Response :</b>	Yes
<b>Maximum Instruction Time :</b>	0
<b>Sub-Section Number :</b>	1
<b>Sub-Section Id :</b>	405859148
<b>Question Shuffling Allowed :</b>	Yes
<b>Is Section Default? :</b>	null

**Question Number : 41 Question Id : 4058592148 Question Type : MCQ Option Shuffling : Yes Is Question Mandatory : No Calculator : None Response Time : N.A Think Time : N.A Minimum Instruction Time : 0**

**Correct Marks : 1 Wrong Marks : 0.25**

The average of 11 consecutive odd numbers is 15. What is the sum of the second and the tenth number?

**Options :**

4058597091. 12

4058597092. 24

4058597093. 26

4058597094. 30

**Question Number : 41 Question Id : 4058592148 Question Type : MCQ Option Shuffling : Yes Is Question Mandatory : No Calculator : None Response Time : N.A Think Time : N.A Minimum Instruction Time : 0**

**Correct Marks : 1 Wrong Marks : 0.25**

11 क्रमागत विषम संख्याओं का औसत 15 है। दूसरी तथा दसवीं संख्या का योग क्या है?

**Options :**

4058597091. 12

4058597092. 24

4058597093. 26

4058597094. 30

**Question Number : 42 Question Id : 4058592149 Question Type : MCQ Option Shuffling : Yes Is Question Mandatory : No Calculator : None Response Time : N.A Think Time : N.A Minimum Instruction Time : 0**

**Correct Marks : 1 Wrong Marks : 0.25**

The average weight of a group of five friends is 52 kg. Another friend joined the group and the average weight of the group increased by 1.5 kg. What is the weight of the new member of the group?

**Options :**

4058597095. 57 kg

4058597096. 58 kg

4058597097. 60 kg

4058597098. 61 kg

**Question Number : 42 Question Id : 4058592149 Question Type : MCQ Option Shuffling : Yes Is Question Mandatory : No Calculator : None Response Time : N.A Think Time : N.A Minimum Instruction Time : 0**

**Correct Marks : 1 Wrong Marks : 0.25**

पाँच मित्रों के एक समूह का औसत वजन 52 किलोग्राम है। एक अन्य मित्र समूह में जुड़ता है और समूह का औसत वजन 1.5 किलोग्राम बढ़ जाता है। समूह के नए सदस्य का वजन कितना है?

**Options :**

4058597095. 57 किग्रा

4058597096. 58 किग्रा

4058597097. 60 किग्रा

4058597098. 61 किग्रा

**Question Number : 43 Question Id : 4058592150 Question Type : MCQ Option Shuffling : Yes Is Question Mandatory : No Calculator : None Response Time : N.A Think Time : N.A Minimum Instruction Time : 0**

**Correct Marks : 1 Wrong Marks : 0.25**

Cost price of an article for a shopkeeper is Rs. 3000. Shopkeeper marked it for Rs. 4000. He allows some discount on the marked price and still gains 20%. The percentage of discount given to the customer, is :

**Options :**

4058597099. 8%



4058597100. 9%

4058597101. 10%

4058597102. 12%

**Question Number : 43 Question Id : 4058592150 Question Type : MCQ Option Shuffling : Yes Is Question Mandatory : No Calculator : None Response Time : N.A Think Time : N.A Minimum Instruction Time : 0**

**Correct Marks : 1 Wrong Marks : 0.25**

एक दुकानदार के लिए एक वस्तु का लागत मूल्य ₹ 3000 है। दुकानदार ने उस पर ₹ 4000 मूल्य अंकित किया। वह अंकित मूल्य पर कुछ छूट देता है और फिर भी 20% का लाभ प्राप्त करता है। ग्राहक को दी गई छूट का प्रतिशत है:

**Options :**

4058597099. 8%

4058597100. 9%

4058597101. 10%

4058597102. 12%

**Question Number : 44 Question Id : 4058592151 Question Type : MCQ Option Shuffling : Yes Is Question Mandatory : No Calculator : None Response Time : N.A Think Time : N.A Minimum Instruction Time : 0**

**Correct Marks : 1 Wrong Marks : 0.25**

The average of five numbers is 21. If one number is excluded, their average is 19. What is the excluded number?

**Options :**

4058597103. 27

4058597104. 29

4058597105. 31

4058597106. 25

**Question Number : 44 Question Id : 4058592151 Question Type : MCQ Option Shuffling : Yes Is Question Mandatory : No Calculator : None Response Time : N.A Think Time : N.A Minimum Instruction Time : 0**

**Correct Marks : 1 Wrong Marks : 0.25**

पांच संख्याओं का औसत 21 है। यदि एक संख्या हटा दी जाए तो उनका औसत 19 हो जाता है। हटाई गई संख्या क्या है?

**Options :**

4058597103. 27

4058597104. 29

4058597105. 31

4058597106. 25

**Question Number : 45 Question Id : 4058592152 Question Type : MCQ Option Shuffling : Yes Is Question Mandatory : No Calculator : None Response Time : N.A Think Time : N.A Minimum Instruction Time : 0**

**Correct Marks : 1 Wrong Marks : 0.25**

If  $0.006 \div K = 0.02$ , then value of K, is :

**Options :**

4058597107. 0.0003

4058597108. 0.003

4058597109. 0.03

4058597110. 0.3

**Question Number : 45 Question Id : 4058592152 Question Type : MCQ Option Shuffling : Yes Is Question Mandatory : No Calculator : None Response Time : N.A Think Time : N.A Minimum Instruction Time : 0**

**Correct Marks : 1 Wrong Marks : 0.25**

यदि  $0.006 \div K = 0.02$ , तो K का मान है:

**Options :**

4058597107. 0.0003

4058597108. 0.003

4058597109. 0.03

4058597110. 0.3

**Question Number : 46 Question Id : 4058592153 Question Type : MCQ Option Shuffling : Yes Is Question Mandatory : No Calculator : None Response Time : N.A Think Time : N.A Minimum Instruction Time : 0**

**Correct Marks : 1 Wrong Marks : 0.25**

The H.C.F. of  $\frac{2}{3}$ ,  $\frac{8}{27}$ ,  $\frac{10}{9}$  and  $\frac{62}{21}$  is:

**Options :**

4058597111.  $\frac{62}{3}$

$$4058597112. \frac{3}{62}$$

$$4058597113. \frac{81}{2}$$

$$4058597114. \frac{2}{81}$$

**Question Number : 46 Question Id : 4058592153 Question Type : MCQ Option Shuffling : Yes Is  
Question Mandatory : No Calculator : None Response Time : N.A Think Time : N.A Minimum  
Instruction Time : 0**

**Correct Marks : 1 Wrong Marks : 0.25**

$\frac{2}{3}, \frac{8}{27}, \frac{10}{9}$  और  $\frac{62}{21}$  का महत्तम समापवर्तक है:

**Options :**

$$4058597111. \frac{62}{3}$$

$$4058597112. \frac{3}{62}$$

$$4058597113. \frac{81}{2}$$

$$4058597114. \frac{2}{81}$$

**Question Number : 47 Question Id : 4058592154 Question Type : MCQ Option Shuffling : Yes Is  
Question Mandatory : No Calculator : None Response Time : N.A Think Time : N.A Minimum  
Instruction Time : 0**

**Correct Marks : 1 Wrong Marks : 0.25**

In an alloy, the ratio of copper and zinc is 5:2. If 3.75 kg of zinc is mixed in 52 kg 500g of alloy, then the ratio of copper and zinc in the alloy will be:

**Options :**

4058597115. 1:2

4058597116. 2:3

4058597117. 3:2

4058597118. 2:1

**Question Number : 47 Question Id : 4058592154 Question Type : MCQ Option Shuffling : Yes Is Question Mandatory : No Calculator : None Response Time : N.A Think Time : N.A Minimum Instruction Time : 0**

**Correct Marks : 1 Wrong Marks : 0.25**

किसी मिश्रधातु में ताँबे तथा जस्ते का अनुपात 5:2 है। यदि 3.75 kg जस्ते को 52 kg 500g मिश्रधातु में मिलाया जाय, तो इस मिश्रधातु में ताँबे तथा जस्ते का अनुपात होगा:

**Options :**

4058597115. 1:2

4058597116. 2:3

4058597117. 3:2

4058597118. 2:1

**Question Number : 48 Question Id : 4058592155 Question Type : MCQ Option Shuffling : Yes Is Question Mandatory : No Calculator : None Response Time : N.A Think Time : N.A Minimum Instruction Time : 0**

**Correct Marks : 1 Wrong Marks : 0.25**

Find the value of  $x$  in  $60.06 \div 0.3 = x \times 0.05$

**Options :**

4058597119. 400.4

4058597120. 4004

4058597121. 200.4

4058597122. 2004

**Question Number : 48 Question Id : 4058592155 Question Type : MCQ Option Shuffling : Yes Is**

**Question Mandatory : No Calculator : None Response Time : N.A Think Time : N.A Minimum**

**Instruction Time : 0**

**Correct Marks : 1 Wrong Marks : 0.25**

$60.06 \div 0.3 = x \times 0.05$  में  $x$  का मान ज्ञात कीजिए:

**Options :**

4058597119. 400.4

4058597120. 4004

4058597121. 200.4

4058597122. 2004

**Question Number : 49 Question Id : 4058592156 Question Type : MCQ Option Shuffling : Yes Is**

**Question Mandatory : No Calculator : None Response Time : N.A Think Time : N.A Minimum**

**Instruction Time : 0**

**Correct Marks : 1 Wrong Marks : 0.25**

A, B and C in a partnership invested ₹ 52,000, ₹ 56,000 and ₹ 70,000, respectively.

At the end of the year, B received ₹ 12,250 less than C as his share in the profit.

What is the total profit?

**Options :**

4058597123. ₹ 1,52,750

4058597124. ₹ 1,55,500

4058597125. ₹ 1,55,750

4058597126. ₹ 1,62,000

**Question Number : 49 Question Id : 4058592156 Question Type : MCQ Option Shuffling : Yes Is**

**Question Mandatory : No Calculator : None Response Time : N.A Think Time : N.A Minimum**

**Instruction Time : 0**

**Correct Marks : 1 Wrong Marks : 0.25**

A, B और C साझे में क्रमशः ₹ 52,000, ₹ 56,000 और ₹ 70,000 का निवेश करते हैं। वर्ष के अंत में लाभ के रूप में B को C के हिस्से से ₹ 12,250 कम प्राप्त होता है। कुल लाभ कितना है?

**Options :**

4058597123. ₹ 1,52,750

4058597124. ₹ 1,55,500

4058597125. ₹ 1,55,750

4058597126. ₹ 1,62,000

**Question Number : 50 Question Id : 4058592157 Question Type : MCQ Option Shuffling : Yes Is**

**Question Mandatory : No Calculator : None Response Time : N.A Think Time : N.A Minimum**

**Instruction Time : 0**

**Correct Marks : 1 Wrong Marks : 0.25**

In a certain journey, a man covered one-third of the total distance on bicycle at the speed of 20 km/h, one-fourth on bike at the speed of 30 km/h and remaining distance at the speed of 50 km/h with car. What is his average speed during the entire journey?

**Options :**

4058597127. 30 km/h

4058597128. 40 km/h

4058597129. 50 km/h

4058597130. 60 km/h

**Question Number : 50 Question Id : 4058592157 Question Type : MCQ Option Shuffling : Yes Is**

**Question Mandatory : No Calculator : None Response Time : N.A Think Time : N.A Minimum**

**Instruction Time : 0**

**Correct Marks : 1 Wrong Marks : 0.25**

एक कतिपय यात्रा में, एक व्यक्ति ने साईकिल से 20 किमी/घण्टा की गति से कुल दूरी का एक तिहाई पूरा किया, एक चौथाई दूरी को मोटर-साईकिल से 30 किमी/घण्टा की गति से और शेष दूरी को कार से 50 किमी/घण्टा की गति से पूरा किया। पूरी यात्रा में उसकी औसत गति क्या है?

**Options :**

4058597127. 30 किमी/घण्टा

4058597128. 40 किमी/घण्टा

4058597129. 50 किमी/घण्टा

4058597130. 60 किमी/घण्टा

**Question Number : 51 Question Id : 4058592158 Question Type : MCQ Option Shuffling : Yes Is**



**Question Mandatory : No Calculator : None Response Time : N.A Think Time : N.A Minimum**

**Instruction Time : 0**

**Correct Marks : 1 Wrong Marks : 0.25**

The sum of the salaries of A and B is ₹ 81,000. A spends 80% of his salary and B spends 70% of his salary. If their savings are in the ratio 4:3, then what is the salary of B?

**Options :**

4058597131. ₹ 25,400

4058597132. ₹ 27,000

4058597133. ₹ 26,500

4058597134. ₹ 54,000

**Question Number : 51 Question Id : 4058592158 Question Type : MCQ Option Shuffling : Yes Is**

**Question Mandatory : No Calculator : None Response Time : N.A Think Time : N.A Minimum**

**Instruction Time : 0**

**Correct Marks : 1 Wrong Marks : 0.25**

A और B के वेतनों का कुल योग ₹ 81,000 है। A अपने वेतन का 80% तथा B अपने वेतन का 70% खर्च करता है। यदि उनकी बचतें 4:3 के अनुपात में हों, तो B का वेतन कितना है?

**Options :**

4058597131. ₹ 25,400

4058597132. ₹ 27,000

4058597133. ₹ 26,500

4058597134. ₹ 54,000

**Question Number : 52 Question Id : 4058592159 Question Type : MCQ Option Shuffling : Yes Is**

**Question Mandatory : No Calculator : None Response Time : N.A Think Time : N.A Minimum**

**Instruction Time : 0**

**Correct Marks : 1 Wrong Marks : 0.25**

In an organization, 40% employees are matriculates, 50% of the rest are graduates and the remaining 225 are post-graduates. What is the number of matriculate employees?

**Options :**

4058597135. 225

4058597136. 280

4058597137. 300

4058597138. 320

**Question Number : 52 Question Id : 4058592159 Question Type : MCQ Option Shuffling : Yes Is**

**Question Mandatory : No Calculator : None Response Time : N.A Think Time : N.A Minimum**

**Instruction Time : 0**

**Correct Marks : 1 Wrong Marks : 0.25**

किसी संगठन में 40% कर्मचारी मैट्रिक-पास, शेष के 50% स्नातक तथा बचे हुए 225 स्नातकोत्तर हैं। मैट्रिक-पास कर्मचारियों की संख्या कितनी है?

**Options :**

4058597135. 225

4058597136. 280

4058597137. 300

4058597138. 320

**Question Number : 53 Question Id : 4058592160 Question Type : MCQ Option Shuffling : Yes Is**

**Question Mandatory : No Calculator : None Response Time : N.A Think Time : N.A Minimum**

**Instruction Time : 0**

**Correct Marks : 1 Wrong Marks : 0.25**

The average expenditure of a person for the first five months of a year is ₹ 50,000 and for the next seven months it is ₹ 54,000. He saved ₹ 23,000 during the year.

His average monthly income is:

**Options :**

4058597139. ₹ 55,000

4058597140. ₹ 54,250

4058597141. ₹ 54,460

4058597142. ₹ 56,000

**Question Number : 53 Question Id : 4058592160 Question Type : MCQ Option Shuffling : Yes Is**

**Question Mandatory : No Calculator : None Response Time : N.A Think Time : N.A Minimum**

**Instruction Time : 0**

**Correct Marks : 1 Wrong Marks : 0.25**

किसी व्यक्ति का एक वर्ष के पहले पाँच महीने का औसत व्यय ₹ 50,000 है और अगले सात महीनों का ₹ 54,000 है। उस व्यक्ति ने वर्ष में ₹ 23,000 की बचत की। उसकी औसत मासिक आय है:

**Options :**

4058597139. ₹ 55,000

4058597140. ₹ 54,250

4058597141. ₹ 54,460

4058597142. ₹ 56,000

**Question Number : 54 Question Id : 4058592161 Question Type : MCQ Option Shuffling : Yes Is Question Mandatory : No Calculator : None Response Time : N.A Think Time : N.A Minimum Instruction Time : 0**

**Correct Marks : 1 Wrong Marks : 0.25**

A vessel is filled with liquid, 3 parts of which is water and 5 parts syrup. What part of the mixture should be drawn off and replaced with water so that the mixture contains half water and half syrup?

**Options :**

4058597143.  $\frac{1}{4}$

4058597144.  $\frac{1}{5}$

4058597145.  $\frac{1}{6}$

4058597146.  $\frac{1}{7}$

**Question Number : 54 Question Id : 4058592161 Question Type : MCQ Option Shuffling : Yes Is Question Mandatory : No Calculator : None Response Time : N.A Think Time : N.A Minimum Instruction Time : 0**

**Correct Marks : 1 Wrong Marks : 0.25**

एक बर्तन में द्रव भरा है, जिसका तीन भाग पानी तथा 5 भाग सीरप है। इस मिश्रण का कितना हिस्सा निकाल कर उसकी जगह पानी डाला जाये ताकि मिश्रण का आधा भाग पानी तथा आधा भाग सीरप हो?

**Options :**

4058597143.  $\frac{1}{4}$

4058597144.

$\frac{1}{5}$

4058597145.  $\frac{1}{6}$

4058597146.  $\frac{1}{7}$

**Question Number : 55 Question Id : 4058592162 Question Type : MCQ Option Shuffling : Yes Is Question Mandatory : No Calculator : None Response Time : N.A Think Time : N.A Minimum Instruction Time : 0**

**Correct Marks : 1 Wrong Marks : 0.25**

A and B are partners in a business. A invested ₹ 42,000 for 10 months and B invested ₹ 35,000 for 8 months. Out of a profit of ₹ 31,570, B's share is

**Options :**

4058597147. ₹ 12,648

4058597148. ₹ 12,682

4058597149. ₹ 12,684

4058597150. ₹ 12,628

**Question Number : 55 Question Id : 4058592162 Question Type : MCQ Option Shuffling : Yes Is Question Mandatory : No Calculator : None Response Time : N.A Think Time : N.A Minimum Instruction Time : 0**

**Correct Marks : 1 Wrong Marks : 0.25**

A तथा B एक व्यापार में साझेदार हैं। A ने 10 महीनों के लिए ₹ 42,000 का निवेश किया तथा B ने 8 महीनों के लिए ₹ 35,000 का निवेश किया। ₹ 31,570 के लाभ में से B का हिस्सा है -

**Options :**

4058597147. ₹ 12,648

4058597148. ₹ 12,682

4058597149. ₹ 12,684

4058597150. ₹ 12,628

**Question Number : 56 Question Id : 4058592163 Question Type : MCQ Option Shuffling : Yes Is Question Mandatory : No Calculator : None Response Time : N.A Think Time : N.A Minimum Instruction Time : 0**

**Correct Marks : 1 Wrong Marks : 0.25**

After getting two successive discounts of 12.5% and  $x\%$ , an item with marked price ₹ 750 is available at ₹ 525. Find the value of  $x$  :

**Options :**

4058597151. 16

4058597152. 18

4058597153. 20

4058597154. 22

**Question Number : 56 Question Id : 4058592163 Question Type : MCQ Option Shuffling : Yes Is Question Mandatory : No Calculator : None Response Time : N.A Think Time : N.A Minimum Instruction Time : 0**

**Correct Marks : 1 Wrong Marks : 0.25**

12.5% और  $x\%$  के दो क्रमिक बट्टों की प्राप्ति के पश्चात् ₹ 750 अंकित मूल्य वाली वस्तु ₹ 525 में उपलब्ध है।  $x$  का मान ज्ञात कीजिए:

**Options :**

4058597151. 16

4058597152. 18

4058597153. 20

4058597154. 22

**Question Number : 57 Question Id : 4058592164 Question Type : MCQ Option Shuffling : Yes Is Question Mandatory : No Calculator : None Response Time : N.A Think Time : N.A Minimum Instruction Time : 0**

**Correct Marks : 1 Wrong Marks : 0.25**

Two numbers A and B are less than a third number C by 15% and 32%, respectively. By what percent (%) is number B less than the number A?

**Options :**

4058597155. 32

4058597156. 26

4058597157. 17

4058597158. 20

**Question Number : 57 Question Id : 4058592164 Question Type : MCQ Option Shuffling : Yes Is Question Mandatory : No Calculator : None Response Time : N.A Think Time : N.A Minimum Instruction Time : 0**

**Correct Marks : 1 Wrong Marks : 0.25**

दो संख्याएँ A और B, तीसरी संख्या C से क्रमशः 15% और 32% कम हैं। ज्ञात करें कि संख्या B, A से कितने प्रतिशत कम है?

**Options :**

4058597155. 32

4058597156. 26

4058597157. 17

4058597158. 20

**Question Number : 58 Question Id : 4058592165 Question Type : MCQ Option Shuffling : Yes Is Question Mandatory : No Calculator : None Response Time : N.A Think Time : N.A Minimum Instruction Time : 0**

**Correct Marks : 1 Wrong Marks : 0.25**

B can do a work in 48 days. If A starts the work and after 10 days he left, then B alone finishes the remaining work in 42 days. In how many days A and B, together will finish the work?

**Options :**

4058597159. 30

4058597160. 25

4058597161. 35

4058597162. 28

**Question Number : 58 Question Id : 4058592165 Question Type : MCQ Option Shuffling : Yes Is Question Mandatory : No Calculator : None Response Time : N.A Think Time : N.A Minimum Instruction Time : 0**

**Correct Marks : 1 Wrong Marks : 0.25**



B एक काम को 48 दिनों में कर सकता है। यदि A वह काम शुरू करता है और 10 दिनों के बाद छोड़ देता है तो अकेले B शेष बचे काम को 42 दिनों में पूरा करता है। A और B एक साथ उस काम को कितने दिनों में पूरा करेंगे?

**Options :**

4058597159. 30

4058597160. 25

4058597161. 35

4058597162. 28

**Question Number : 59 Question Id : 4058592166 Question Type : MCQ Option Shuffling : Yes Is**

**Question Mandatory : No Calculator : None Response Time : N.A Think Time : N.A Minimum**

**Instruction Time : 0**

**Correct Marks : 1 Wrong Marks : 0.25**

A sells an item at a loss of 10%. If he had sold it for ₹ 120 more, he would have gained 5%. What is the cost price of the item?

**Options :**

4058597163. ₹ 680

4058597164. ₹ 720

4058597165. ₹ 800

4058597166. ₹ 850

**Question Number : 59 Question Id : 4058592166 Question Type : MCQ Option Shuffling : Yes Is**

**Question Mandatory : No Calculator : None Response Time : N.A Think Time : N.A Minimum**

**Instruction Time : 0**

**Correct Marks : 1 Wrong Marks : 0.25**

A. किसी वस्तु का विक्रय 10% हानि पर करता है। यदि वह उसे ₹ 120 अधिक मूल्य पर बेचता तो 5% लाभ प्राप्त करता। वस्तु का लागत मूल्य क्या है?

**Options :**

4058597163. ₹ 680

4058597164. ₹ 720

4058597165. ₹ 800

4058597166. ₹ 850

**Question Number : 60 Question Id : 4058592167 Question Type : MCQ Option Shuffling : Yes Is**

**Question Mandatory : No Calculator : None Response Time : N.A Think Time : N.A Minimum**

**Instruction Time : 0**

**Correct Marks : 1 Wrong Marks : 0.25**

If  $10^k = 128 \times (16 \times 10^{-4})^3 \div (2^{19} \times 10^{-11})$ , then the value of k is :

**Options :**

4058597167. 2

4058597168. 1

4058597169. 0

4058597170. -1

**Question Number : 60 Question Id : 4058592167 Question Type : MCQ Option Shuffling : Yes Is**

**Question Mandatory : No Calculator : None Response Time : N.A Think Time : N.A Minimum**

**Instruction Time : 0**

**Correct Marks : 1 Wrong Marks : 0.25**

यदि  $10^k = 128 \times (16 \times 10^{-4})^3 \div (2^{19} \times 10^{-11})$ , तो k का मान है:

**Options :**

4058597167. 2

4058597168. 1

4058597169. 0

4058597170. -1

## A-Analytical & Logical Ability

<b>Section Id :</b>	405859121
<b>Section Number :</b>	3
<b>Section type :</b>	Online
<b>Mandatory or Optional :</b>	Mandatory
<b>Number of Questions :</b>	15
<b>Number of Questions to be attempted :</b>	15
<b>Section Marks :</b>	15
<b>Enable Mark as Answered Mark for Review and Clear Response :</b>	Yes
<b>Maximum Instruction Time :</b>	0
<b>Sub-Section Number :</b>	1
<b>Sub-Section Id :</b>	405859149
<b>Question Shuffling Allowed :</b>	Yes
<b>Is Section Default? :</b>	null

**Question Number : 61 Question Id : 4058592168 Question Type : MCQ Option Shuffling : Yes Is Question Mandatory : No Calculator : None Response Time : N.A Think Time : N.A Minimum**

**Instruction Time : 0**

**Correct Marks : 1 Wrong Marks : 0.25**

In the following letter series, some of the letters are missing which are given in that order as one of the alternatives . Choose the correct alternative:

a \_bcdd \_ab \_ccda \_b \_cda.

**Options :**

4058597171. abcda

4058597172. adcba

4058597173. abcedd

4058597174. adcb

**Question Number : 61 Question Id : 4058592168 Question Type : MCQ Option Shuffling : Yes Is**

**Question Mandatory : No Calculator : None Response Time : N.A Think Time : N.A Minimum**

**Instruction Time : 0**

**Correct Marks : 1 Wrong Marks : 0.25**

वर्णों की निम्नलिखित श्रृंखला में कुछ वर्ण लुप्त हैं, उन्हें नीचे दिए गए विकल्पों में से किसी एक के क्रम में दिया गया है। सही विकल्प का चयन कीजिए:

a \_bcdd \_ab \_ccda \_b \_cda.

**Options :**

4058597171. abcda

4058597172. adcba

4058597173. abcedd

4058597174. adcb

**Question Number : 62 Question Id : 4058592169 Question Type : MCQ Option Shuffling : Yes Is Question Mandatory : No Calculator : None Response Time : N.A Think Time : N.A Minimum Instruction Time : 0**

**Correct Marks : 1 Wrong Marks : 0.25**

Find the missing term in the following letter series :

ANGV, WJCR, SFYN \_\_\_\_ ? \_\_\_\_

**Options :**

4058597175. QBVJ

4058597176. OAUk

4058597177. OBUJ

4058597178. PCVK

**Question Number : 62 Question Id : 4058592169 Question Type : MCQ Option Shuffling : Yes Is Question Mandatory : No Calculator : None Response Time : N.A Think Time : N.A Minimum Instruction Time : 0**

**Correct Marks : 1 Wrong Marks : 0.25**

निम्नलिखित वर्ण श्रृंखला में लुप्त पद ज्ञात कीजिए:

ANGV, WJCR, SFYN \_\_\_\_ ? \_\_\_\_

**Options :**

4058597175. QBVJ

4058597176. OAUk

4058597177. OBUJ

4058597178. PCVK

**Question Number : 63 Question Id : 4058592170 Question Type : MCQ Option Shuffling : Yes Is Question Mandatory : No Calculator : None Response Time : N.A Think Time : N.A Minimum Instruction Time : 0**

**Correct Marks : 1 Wrong Marks : 0.25**

Find the wrong term in the following number series :

3, 8, 12, 16, 48, 38, 192, 64

**Options :**

4058597179. 64

4058597180. 48

4058597181. 38

4058597182. 192

**Question Number : 63 Question Id : 4058592170 Question Type : MCQ Option Shuffling : Yes Is Question Mandatory : No Calculator : None Response Time : N.A Think Time : N.A Minimum Instruction Time : 0**

**Correct Marks : 1 Wrong Marks : 0.25**

निम्नलिखित संख्या श्रृंखला में गलत पद को ज्ञात कीजिए:

3, 8, 12, 16, 48, 38, 192, 64

**Options :**

4058597179. 64

4058597180. 48

4058597181. 38

4058597182. 192

**Question Number : 64 Question Id : 4058592171 Question Type : MCQ Option Shuffling : Yes Is Question Mandatory : No Calculator : None Response Time : N.A Think Time : N.A Minimum Instruction Time : 0**

**Correct Marks : 1 Wrong Marks : 0.25**

In a certain code language 'nik mik sik' means 'I am beautiful', 'mik rik' means 'beautiful painting' and 'rik sik tik' means 'I love painting'. Then how will you write 'beautiful love' in the same language?

**Options :**

4058597183. mik nik

4058597184. tik sik

4058597185. mik tik

4058597186. rik tik

**Question Number : 64 Question Id : 4058592171 Question Type : MCQ Option Shuffling : Yes Is Question Mandatory : No Calculator : None Response Time : N.A Think Time : N.A Minimum Instruction Time : 0**

**Correct Marks : 1 Wrong Marks : 0.25**

एक सुनिश्चित कूट भाषा में 'nik mik sik' का अर्थ है 'I am beautiful', 'mik rik' का अर्थ है 'beautiful painting' और 'rik sik tik' का अर्थ है 'I love painting' तो आप उसी भाषा में 'beautiful love' को कैसे लिखेंगे?

**Options :**

4058597183. mik nik

4058597184. tik sik

4058597185. mik tik

4058597186. rik tik

**Question Number : 65 Question Id : 4058592172 Question Type : MCQ Option Shuffling : Yes Is Question Mandatory : No Calculator : None Response Time : N.A Think Time : N.A Minimum Instruction Time : 0**

**Correct Marks : 1 Wrong Marks : 0.25**

If "BEAUTIFUL" is coded as 'D215V3H5N' in a certain code language, then how will you write "UNIVERSAL" in the same code language?

**Options :**

4058597187. 5P3Y2UT1M

4058597188. 5P3X2UT1M

4058597189. 5P3X2UT1N

4058597190. 5P3X2TU1N

**Question Number : 65 Question Id : 4058592172 Question Type : MCQ Option Shuffling : Yes Is Question Mandatory : No Calculator : None Response Time : N.A Think Time : N.A Minimum Instruction Time : 0**

**Correct Marks : 1 Wrong Marks : 0.25**

यदि "BEAUTIFUL" को किसी सुनिश्चित कूट भाषा में 'D215V3H5N' के रूप में कूटबद्ध किया गया है तो आप उसी कूट भाषा में "UNIVERSAL" को किस प्रकार लिखेंगे?

**Options :**

4058597187. 5P3Y2UT1M

4058597188. 5P3X2UT1M

4058597189. 5P3X2UT1N

4058597190. 5P3X2TU1N



**Question Number : 66 Question Id : 4058592173 Question Type : MCQ Option Shuffling : Yes Is Question Mandatory : No Calculator : None Response Time : N.A Think Time : N.A Minimum Instruction Time : 0**

**Correct Marks : 1 Wrong Marks : 0.25**

Vinay walks 7 km southward, then turns left and walks 5 km, then turns right and walks 2 km. Finally he turns right and walks 5 km. How far is Vinay from his starting point?

**Options :**

4058597191. 19 km

4058597192. 12 km

4058597193. 10 km

4058597194. 9 km

**Question Number : 66 Question Id : 4058592173 Question Type : MCQ Option Shuffling : Yes Is Question Mandatory : No Calculator : None Response Time : N.A Think Time : N.A Minimum Instruction Time : 0**

**Correct Marks : 1 Wrong Marks : 0.25**

विनय दक्षिण दिशा की ओर 7 कि.मी. जाता है, फिर बायीं ओर मुड़ जाता है और 5 कि.मी. जाता है, फिर दांयी ओर मुड़कर 2 कि.मी. जाता है। अन्ततः वह दायीं ओर मुड़कर 5 कि.मी. जाता है। विनय अपने आरम्भिक बिन्दु से कितनी दूर है?

**Options :**

4058597191. 19 किमी

4058597192. 12 किमी

4058597193. 10 किमी

4058597194. 9 किमी

**Question Number : 67 Question Id : 4058592174 Question Type : MCQ Option Shuffling : Yes Is**

**Question Mandatory : No Calculator : None Response Time : N.A Think Time : N.A Minimum**

**Instruction Time : 0**

**Correct Marks : 1 Wrong Marks : 0.25**

A square field ABCD of side 90 m has its diagonal AC from North to South and corner B is to the East of D. Person 'X' crosses the field diagonally starting from corner D. After walking half the distance, he turns right, walks some distance and turns left. Which direction is X facing now?

**Options :**

4058597195. South

4058597196. North

4058597197. West

4058597198. East

**Question Number : 67 Question Id : 4058592174 Question Type : MCQ Option Shuffling : Yes Is**

**Question Mandatory : No Calculator : None Response Time : N.A Think Time : N.A Minimum**

**Instruction Time : 0**

**Correct Marks : 1 Wrong Marks : 0.25**

90 मी. भुजावाले एक वर्गाकार क्षेत्र का विकर्ण AC उत्तर से दक्षिण की ओर है और कोना B, D के पूर्व में है। कोना D से प्रारम्भ करके व्यक्ति 'X' विकर्णतः क्षेत्र पार करता है। आधी दूरी तय कर लेने के बाद वह दायीं ओर मुड़ जाता है, कुछ दूर जाता है और बायीं ओर मुड़ जाता है। X किस दिशा की ओर उन्मुख है?

**Options :**

4058597195. दक्षिण

4058597196. उत्तर

4058597197. पश्चिम

4058597198. पूर्व

**Question Number : 68 Question Id : 4058592175 Question Type : MCQ Option Shuffling : Yes Is Question Mandatory : No Calculator : None Response Time : N.A Think Time : N.A Minimum Instruction Time : 0**

**Correct Marks : 1 Wrong Marks : 0.25**

A clock is placed such that at 12 noon its hour hand points towards North-East. In which direction does its minute hand point at 3.45 p.m.?

**Options :**

4058597199. North-West

4058597200. East

4058597201. West

4058597202. South-East

**Question Number : 68 Question Id : 4058592175 Question Type : MCQ Option Shuffling : Yes Is Question Mandatory : No Calculator : None Response Time : N.A Think Time : N.A Minimum Instruction Time : 0**

**Correct Marks : 1 Wrong Marks : 0.25**

कोई दीवार घड़ी इस प्रकार टंगी हुई है कि 12 बजे दोपहर में इसके घण्टे की सूई उत्तर-पूर्व की ओर संकेत करती है। 3.45 बजे अपराह्न को इसकी मिनट की सूई किस दिशा की ओर संकेत करेगी?

**Options :**

4058597199. उत्तर-पश्चिम

4058597200. पूर्व

4058597201. पश्चिम

4058597202. दक्षिण-पूर्व

**Question Number : 69 Question Id : 4058592176 Question Type : MCQ Option Shuffling : Yes Is Question Mandatory : No Calculator : None Response Time : N.A Think Time : N.A Minimum Instruction Time : 0**

**Correct Marks : 1 Wrong Marks : 0.25**

A cube is coloured blue from three adjacent faces and yellow from other three faces and then cut into 729 smaller cubes of equal size. How many cubes have only one face coloured yellow and other faces uncoloured?

**Options :**

4058597203. 49

4058597204. 196

4058597205. 147

4058597206. 294

**Question Number : 69 Question Id : 4058592176 Question Type : MCQ Option Shuffling : Yes Is Question Mandatory : No Calculator : None Response Time : N.A Think Time : N.A Minimum Instruction Time : 0**

**Correct Marks : 1 Wrong Marks : 0.25**

एक घन के तीन संलग्न फलकों को नीले रंग से तथा अन्य तीन फलकों को पीले रंग से रंगा जाता है। फिर उसे बराबर आकार के 729 छोटे घनों में काटा जाता है। कितने घनों का एक फलक पीला रंगा है तथा अन्य फलक रंगहीन हैं?

**Options :**

4058597203. 49

4058597204. 196

4058597205. 147

4058597206. 294

**Question Number : 70 Question Id : 4058592177 Question Type : MCQ Option Shuffling : Yes Is Question Mandatory : No Calculator : None Response Time : N.A Think Time : N.A Minimum Instruction Time : 0**

**Correct Marks : 1 Wrong Marks : 0.25**

A cube of 7 cm sides is painted black from all the side and then cut into 1 cm sides small indential cubes. How many cubes have the three faces painted?

**Options :**

4058597207. 4

4058597208. 8

4058597209. 49

4058597210. 72

**Question Number : 70 Question Id : 4058592177 Question Type : MCQ Option Shuffling : Yes Is Question Mandatory : No Calculator : None Response Time : N.A Think Time : N.A Minimum Instruction Time : 0**

**Correct Marks : 1 Wrong Marks : 0.25**

7 सेमी फलक वाले एक घन को सभी ओर से काले रंग से रंगा गया है और फिर 1 से.मी. फलक वाले समरूप घनों में काटा गया है। कितने घनों के तीन फलक रंगीन होंगे?

**Options :**

4058597207. 4

4058597208. 8

4058597209. 49

4058597210. 72

**Question Number : 71 Question Id : 4058592178 Question Type : MCQ Option Shuffling : Yes Is Question Mandatory : No Calculator : None Response Time : N.A Think Time : N.A Minimum Instruction Time : 0**

**Correct Marks : 1 Wrong Marks : 0.25**

By applying which of the following meanings of letters, will the expression  $8 R 8 P 8 S 8 Q 8 = 57$  be true?

**Options :**

4058597211. P means  $\times$ , Q means  $-$ , R means  $\div$ , S means  $+$

4058597212. P means  $\div$ , Q means  $\times$ , R means  $+$ , S means  $-$

4058597213. P means  $+$ , Q means  $-$ , R means  $\times$ , S means  $\div$

4058597214. P means  $-$ , Q means  $\times$ , R means  $\div$ , S means  $+$

**Question Number : 71 Question Id : 4058592178 Question Type : MCQ Option Shuffling : Yes Is Question Mandatory : No Calculator : None Response Time : N.A Think Time : N.A Minimum Instruction Time : 0**

**Correct Marks : 1 Wrong Marks : 0.25**

निम्नलिखित वर्णों के अर्थों में से किसके प्रयोग के द्वारा व्यंजक  $8 R 8 P 8 S 8 Q 8 = 57$  सत्य हो जाएगा?

**Options :**

4058597211. P का अर्थ  $\times$ , Q का अर्थ  $-$ , R का अर्थ  $\div$ , S का अर्थ  $+$  है।

4058597212. P का अर्थ  $\div$ , Q का अर्थ  $\times$ , R का अर्थ  $+$ , S का अर्थ  $-$  है।

4058597213. P का अर्थ  $+$ , Q का अर्थ  $-$ , R का अर्थ  $\times$ , S का अर्थ  $\div$  है।

4058597214. P का अर्थ  $-$ , Q का अर्थ  $\times$ , R का अर्थ  $\div$ , S का अर्थ  $+$  है।

**Question Number : 72 Question Id : 4058592179 Question Type : MCQ Option Shuffling : Yes Is Question Mandatory : No Calculator : None Response Time : N.A Think Time : N.A Minimum Instruction Time : 0**

**Correct Marks : 1 Wrong Marks : 0.25**

A statement is followed by two conclusions numbered I and II. Assume everything in the statement to be true, consider the two conclusions and decide which of them logically follow(s) beyond a reasonable doubt from the information given in the statement.

Statement : According to a study, in the third world countries, more emphasis should be given on hygiene and nutritious food to young children.

Conclusions : (I) Most young children do not get nutritious food in the third world countries.

(II) Unhygienic conditions are prevalent in these countries.

**Options :**

4058597215. If both I and II follow.

4058597216. If either I or II follows.

4058597217. If only conclusion (I) follows.

4058597218. If only conclusion (II) follows.

**Question Number : 72 Question Id : 4058592179 Question Type : MCQ Option Shuffling : Yes Is Question Mandatory : No Calculator : None Response Time : N.A Think Time : N.A Minimum Instruction Time : 0**

**Correct Marks : 1 Wrong Marks : 0.25**

एक कथन के पश्चात् दो निष्कर्ष I और II दिए गए हैं। मान लीजिए कि कथन में दी गई सभी बातें सत्य हैं, दोनों निष्कर्षों पर एक साथ विचार करें और निर्णय करें कि कथन में दी गई सूचना से उनमें से कौन तर्कसंगत रूप से संदेह से परे निकलता है।

कथन : तीसरे विश्व के देशों में, एक अध्ययन के अनुसार, छोटे बच्चों में स्वास्थ्य और पोषक आहार पर अधिक बल देना चाहिए।

निष्कर्ष : (I) तीसरे विश्व के देशों में अधिकांश छोटे बच्चों को पोषक आहार नहीं मिलता है।

(II) इन देशों में अस्वास्थ्यकर दशाएँ व्याप्त हैं।

**Options :**

4058597215. यदि दोनों I और II निकलते हैं।

4058597216. यदि या तो I या II निकलता है।

4058597217. यदि केवल निष्कर्ष I निकलता है।

4058597218. यदि केवल निष्कर्ष II निकलता है।

**Question Number : 73 Question Id : 4058592180 Question Type : MCQ Option Shuffling : Yes Is Question Mandatory : No Calculator : None Response Time : N.A Think Time : N.A Minimum Instruction Time : 0**

**Correct Marks : 1 Wrong Marks : 0.25**



In the following question, examine the given statements carefully and find out which two of the statements can not be true simultaneously, but can both be false.

- (i) All children are inquisitive.
- (ii) Some children are inquisitive.
- (iii) No children are inquisitive.
- (iv) Some children are not inquisitive.

**Options :**

4058597219. (i) and (iii)

4058597220. (i) and (iv)

4058597221. (ii) and (iii)

4058597222. (iii) and (iv)

**Question Number : 73 Question Id : 4058592180 Question Type : MCQ Option Shuffling : Yes Is**

**Question Mandatory : No Calculator : None Response Time : N.A Think Time : N.A Minimum**

**Instruction Time : 0**

**Correct Marks : 1 Wrong Marks : 0.25**

निम्नलिखित प्रश्न में दिए गए कथनों का ध्यानपूर्वक परीक्षण कीजिए और ज्ञात कीजिए कि कौन से दो कथन एक साथ सत्य नहीं हो सकते हैं परन्तु दोनों असत्य हो सकते हैं ।

- (i) सारे बच्चे जिज्ञासु होते हैं।
- (ii) कुछ बच्चे जिज्ञासु होते हैं।
- (iii) कोई बच्चे जिज्ञासु नहीं होते हैं।
- (iv) कुछ बच्चे जिज्ञासु नहीं होते हैं।

**Options :**

4058597219. (i) और (iii)

4058597220. (i) और (iv)

4058597221. (ii) और (iii)

4058597222. (iii) और (iv)

**Question Number : 74 Question Id : 4058592181 Question Type : MCQ Option Shuffling : Yes Is Question Mandatory : No Calculator : None Response Time : N.A Think Time : N.A Minimum Instruction Time : 0**

**Correct Marks : 1 Wrong Marks : 0.25**

Given below are two statements labelled as Assertion (A) and Reason (R). Choose the correct option as per the codes provided below:

Assertion (A) : India is a democratic country.

Reason (R) : India has its own Constitution.

**Options :**

4058597223. (A) is true but (R) is false.

4058597224. (A) is false but (R) is true.

4058597225. Both (A) and (R) are true but (R) is not the correct explanation of (A).

4058597226. Both (A) and (R) are true and (R) is the correct explanation of (A).

**Question Number : 74 Question Id : 4058592181 Question Type : MCQ Option Shuffling : Yes Is Question Mandatory : No Calculator : None Response Time : N.A Think Time : N.A Minimum Instruction Time : 0**

**Correct Marks : 1 Wrong Marks : 0.25**

निम्नलिखित दो कथन अभिकथन (A) और कारण (R) के रूप में अंकित हैं। नीचे दिए गए कूटों के अनुसार सही विकल्प का चयन करें:

अभिकथन (A) : भारत एक लोकतांत्रिक देश है।

कारण (R) : भारत का अपना संविधान है।

**Options :**

4058597223. (A) सही है किन्तु (R) गलत है।

4058597224. (A) गलत है किन्तु (R) सही है।

4058597225. (A) और (R) दोनों सही हैं किन्तु (R) (A) की सही व्याख्या नहीं हैं।

4058597226. (A) और (R) दोनों सही हैं और (R) (A) की सही व्याख्या हैं।

**Question Number : 75 Question Id : 4058592182 Question Type : MCQ Option Shuffling : Yes Is**

**Question Mandatory : No Calculator : None Response Time : N.A Think Time : N.A Minimum**

**Instruction Time : 0**

**Correct Marks : 1 Wrong Marks : 0.25**

How many odd numbers are there in the sequence each of which is immediately followed by an odd number?

5 3 4 7 1 9 6 5 3 4 6 9 3 7 6 4 1 6 5 2 4 4 3 6 9 4.

**Options :**

4058597227. 4

4058597228. 6

4058597229. 5

4058597230. 3

Question Number : 75 Question Id : 4058592182 Question Type : MCQ Option Shuffling : Yes Is  
Question Mandatory : No Calculator : None Response Time : N.A Think Time : N.A Minimum  
Instruction Time : 0

Correct Marks : 1 Wrong Marks : 0.25

शृंखला में कितनी ऐसी विषम संख्याएँ हैं जिनका निकटतम उत्तरवर्ती एक विषम संख्या है?

5 3 4 7 1 9 6 5 3 4 6 9 3 7 6 4 1 6 5 2 4 4 3 6 9 4.

Options :

4058597227. 4

4058597228. 6

4058597229. 5

4058597230. 3

## A-General Knowledge and Current Affairs

Section Id :	405859122
Section Number :	4
Section type :	Online
Mandatory or Optional :	Mandatory
Number of Questions :	25
Number of Questions to be attempted :	25
Section Marks :	25
Enable Mark as Answered Mark for Review and Clear Response :	Yes
Maximum Instruction Time :	0
Sub-Section Number :	1
Sub-Section Id :	405859150
Question Shuffling Allowed :	Yes

Is Section Default? :

null

Question Number : 76 Question Id : 4058592183 Question Type : MCQ Option Shuffling : Yes Is  
Question Mandatory : No Calculator : None Response Time : N.A Think Time : N.A Minimum  
Instruction Time : 0

Correct Marks : 1 Wrong Marks : 0.25

Where was the Gaj Utsav-2023, inaugurated by the President of India - Smt.  
Droupadi Murmu in April-2023?

Options :

4058597231. Simlipal National Park

4058597232. Nanda Devi National Park

4058597233. Corbett National Park

4058597234. Kaziranga National Park

Question Number : 76 Question Id : 4058592183 Question Type : MCQ Option Shuffling : Yes Is  
Question Mandatory : No Calculator : None Response Time : N.A Think Time : N.A Minimum  
Instruction Time : 0

Correct Marks : 1 Wrong Marks : 0.25

भारत की राष्ट्रपति श्रीमती द्रौपदी मुर्मू द्वारा अप्रैल-2023 में गज उत्सव-2023 का उद्घाटन  
कहाँ किया गया?

Options :

4058597231. सिमलीपाल राष्ट्रीय पार्क

4058597232. नन्दा देवी राष्ट्रीय पार्क

4058597233. कॉर्बेट राष्ट्रीय पार्क

4058597234. काजीरंगा राष्ट्रीय पार्क

**Question Number : 77 Question Id : 4058592184 Question Type : MCQ Option Shuffling : Yes Is Question Mandatory : No Calculator : None Response Time : N.A Think Time : N.A Minimum Instruction Time : 0**

**Correct Marks : 1 Wrong Marks : 0.25**

Where did COP 28, held in 2023, take place?

**Options :**

4058597235. Dubai, UAE

4058597236. Chicago, USA

4058597237. Tokyo, Japan

4058597238. Liverpool, UK

**Question Number : 77 Question Id : 4058592184 Question Type : MCQ Option Shuffling : Yes Is Question Mandatory : No Calculator : None Response Time : N.A Think Time : N.A Minimum Instruction Time : 0**

**Correct Marks : 1 Wrong Marks : 0.25**

2023 में COP 28 कहाँ हुआ था?

**Options :**

4058597235. दुबई, यूएई

4058597236. शिकागो, यूएसए

4058597237. तोक्यो, जापान

4058597238. लिवरपूल, यू.के.

**Question Number : 78 Question Id : 4058592185 Question Type : MCQ Option Shuffling : Yes Is Question Mandatory : No Calculator : None Response Time : N.A Think Time : N.A Minimum Instruction Time : 0**

**Correct Marks : 1 Wrong Marks : 0.25**

Which one of the following States does NOT share border with Manipur?

**Options :**

4058597239. Nagaland

4058597240. Assam

4058597241. Arunachal Pradesh

4058597242. Mizoram

**Question Number : 78 Question Id : 4058592185 Question Type : MCQ Option Shuffling : Yes Is Question Mandatory : No Calculator : None Response Time : N.A Think Time : N.A Minimum Instruction Time : 0**

**Correct Marks : 1 Wrong Marks : 0.25**

निम्नलिखित में से कौन-से राज्य की सीमा मणिपुर के साथ **नहीं** लगती है?

**Options :**

4058597239. नागालैंड

4058597240. असम

4058597241. अरुणाचल प्रदेश

4058597242. मिज़ोरम

**Question Number : 79 Question Id : 4058592186 Question Type : MCQ Option Shuffling : Yes Is Question Mandatory : No Calculator : None Response Time : N.A Think Time : N.A Minimum Instruction Time : 0**

**Correct Marks : 1 Wrong Marks : 0.25**

Bhimbetka, an old site with caves and shelters, is located in which State of India?

**Options :**

4058597243. Madhya Pradesh

4058597244. Uttar Pradesh

4058597245. Andhra Pradesh

4058597246. Arunachal Pradesh

**Question Number : 79 Question Id : 4058592186 Question Type : MCQ Option Shuffling : Yes Is Question Mandatory : No Calculator : None Response Time : N.A Think Time : N.A Minimum Instruction Time : 0**

**Correct Marks : 1 Wrong Marks : 0.25**

भीमबेटका, गुफा और आश्रययुक्त पुरास्थल भारत के किस राज्य में अवस्थित है?

**Options :**

4058597243. मध्यप्रदेश

4058597244. उत्तर प्रदेश

4058597245. आंध्रप्रदेश

4058597246.



Question Number : 80 Question Id : 4058592187 Question Type : MCQ Option Shuffling : Yes Is  
Question Mandatory : No Calculator : None Response Time : N.A Think Time : N.A Minimum  
Instruction Time : 0

Correct Marks : 1 Wrong Marks : 0.25

Match List I with List II

LIST I		LIST II	
A.	Thomas Macaulay	I.	Serampore Mission
B.	William Jones	II.	Promotion of English education
C.	Rabindranath Tagore	III.	Asiatic Society of Bengal
D.	William Carey	IV.	Abode of Peace

Choose the correct answer from the options given below:

Options :

4058597247. A-II, B-I, C-IV, D-III

4058597248. A-II, B-IV, C-I, D-III

4058597249. A-I, B-IV, C-III, D-II

4058597250. A-II, B-III, C-IV, D-I

Question Number : 80 Question Id : 4058592187 Question Type : MCQ Option Shuffling : Yes Is  
Question Mandatory : No Calculator : None Response Time : N.A Think Time : N.A Minimum  
Instruction Time : 0

Correct Marks : 1 Wrong Marks : 0.25

सूची I और सूची II को सुमेलित कीजिए:

सूची I		सूची II	
A.	थॉमस मेकाले	I.	सीरमपुर मिशन
B.	विलियम जोन्स	II.	अंग्रेजी शिक्षा का प्रगामी प्रयोग
C.	रवीन्द्रनाथ टैगोर	III.	एशियाटिक सोसाइटी
D.	विलियम कैरी	IV.	अबोड ऑफ पीस

नीचे दिए गए विकल्पों में से सही उत्तर चुनिए:

**Options :**

4058597247. A-II, B-I, C-IV, D-III

4058597248. A-II, B-IV, C-I, D-III

4058597249. A-I, B-IV, C-III, D-II

4058597250. A-II, B-III, C-IV, D-I

**Question Number : 81 Question Id : 4058592188 Question Type : MCQ Option Shuffling : Yes Is**

**Question Mandatory : No Calculator : None Response Time : N.A Think Time : N.A Minimum**

**Instruction Time : 0**

**Correct Marks : 1 Wrong Marks : 0.25**

Who amongst the following helped to establish the Serampore Mission?

**Options :**

4058597251. Warren Hastings

4058597252. William Jones

4058597253. Henry Thomas Colebrooke

4058597254. William Carey

**Question Number : 81 Question Id : 4058592188 Question Type : MCQ Option Shuffling : Yes Is Question Mandatory : No Calculator : None Response Time : N.A Think Time : N.A Minimum Instruction Time : 0**

**Correct Marks : 1 Wrong Marks : 0.25**

निम्नांकित में से किसने सीरमपुर मिशन की स्थापना में सहायता की थी?

**Options :**

4058597251. वारेन हेस्टिंग्स

4058597252. विलियम जोन्स

4058597253. हेनरी थॉमस कोलब्रुक

4058597254. विलियम कैरी

**Question Number : 82 Question Id : 4058592189 Question Type : MCQ Option Shuffling : Yes Is Question Mandatory : No Calculator : None Response Time : N.A Think Time : N.A Minimum Instruction Time : 0**

**Correct Marks : 1 Wrong Marks : 0.25**

Sangam literature, composed around 2300 years ago, belongs to which Indian State?

**Options :**

4058597255. Madhya Pradesh

4058597256. Karnataka

4058597257. Tamil Nadu

4058597258. Kerala

**Question Number : 82 Question Id : 4058592189 Question Type : MCQ Option Shuffling : Yes Is Question Mandatory : No Calculator : None Response Time : N.A Think Time : N.A Minimum Instruction Time : 0**

**Correct Marks : 1 Wrong Marks : 0.25**

संगम साहित्य जिसकी रचना लगभग 2300 वर्ष पूर्व हुई थी, भारत के किस राज्य से संबंधित है?

**Options :**

4058597255. मध्य प्रदेश

4058597256. कर्नाटक

4058597257. तमिलनाडु

4058597258. केरल

**Question Number : 83 Question Id : 4058592190 Question Type : MCQ Option Shuffling : Yes Is Question Mandatory : No Calculator : None Response Time : N.A Think Time : N.A Minimum Instruction Time : 0**

**Correct Marks : 1 Wrong Marks : 0.25**

Which of the following Islands do NOT fall under Amindivi group in Lakshadweep?

- A. Minicoy
- B. Amini
- C. Kalpeni
- D. Bitra
- E. Kattan

Choose the correct answer from the options given below:

**Options :**

4058597259. B and C only

4058597260. A and D only

4058597261. C and D only

4058597262. A and C only

**Question Number : 83 Question Id : 4058592190 Question Type : MCQ Option Shuffling : Yes Is Question Mandatory : No Calculator : None Response Time : N.A Think Time : N.A Minimum Instruction Time : 0**

**Correct Marks : 1 Wrong Marks : 0.25**

निम्न में से कौन-से द्वीप लक्षद्वीप के अमिनदीवी समूह के अंतर्गत नहीं आते हैं?

- A. मिनिकॉय
- B. अमिनी
- C. कल्पेनी
- D. बितरा
- E. कित्तान

नीचे दिए गए विकल्पों में से सही विकल्प का चयन कीजिए:

**Options :**

4058597259. केवल B तथा C

4058597260. केवल A तथा D

4058597261. केवल C तथा D

4058597262. केवल A तथा C

**Question Number : 84 Question Id : 4058592191 Question Type : MCQ Option Shuffling : Yes Is Question Mandatory : No Calculator : None Response Time : N.A Think Time : N.A Minimum Instruction Time : 0**

**Correct Marks : 1 Wrong Marks : 0.25**

Who is the author of the work 'Him Tarangini' the first ever Sahitya Akademi awarded book written in Hindi?

**Options :**

4058597263. Sumitranandan Pant

4058597264. Makhanlal Chaturvedi

4058597265. Mahadevi Verma

4058597266. Upendranath Ashq

**Question Number : 84 Question Id : 4058592191 Question Type : MCQ Option Shuffling : Yes Is**

**Question Mandatory : No Calculator : None Response Time : N.A Think Time : N.A Minimum**

**Instruction Time : 0**

**Correct Marks : 1 Wrong Marks : 0.25**

हिंदी में प्रथम साहित्य अकादमी पुरस्कार से सम्मानित पुस्तक 'हिम तरंगिनी' के लेखक कौन हैं ?

**Options :**

4058597263. सुमित्रानंदन पंत

4058597264. माखनलाल चतुर्वेदी

4058597265. महादेवी वर्मा

4058597266. उपेन्द्रनाथ अशक

**Question Number : 85 Question Id : 4058592192 Question Type : MCQ Option Shuffling : Yes Is**

**Question Mandatory : No Calculator : None Response Time : N.A Think Time : N.A Minimum**

**Instruction Time : 0**

**Correct Marks : 1 Wrong Marks : 0.25**

Indian Standard Time ( $82^{\circ} 30'E$ ) is ahead of Greenwich mean time by :

**Options :**

4058597267. 2 hours

4058597268. 2 hours and 30 minutes

4058597269. 5 hours

4058597270. 5 hours and 30 minutes

**Question Number : 85 Question Id : 4058592192 Question Type : MCQ Option Shuffling : Yes Is**

**Question Mandatory : No Calculator : None Response Time : N.A Think Time : N.A Minimum**

**Instruction Time : 0**

**Correct Marks : 1 Wrong Marks : 0.25**

ग्रीनविच मानक से भारतीय मानक समय कितना आगे है?

**Options :**

4058597267. 2 घण्टे

4058597268. 2 घण्टे और 30 मिनट

4058597269. 5 घण्टे

4058597270. 5 घण्टे और 30 मिनट

**Question Number : 86 Question Id : 4058592193 Question Type : MCQ Option Shuffling : Yes Is**

**Question Mandatory : No Calculator : None Response Time : N.A Think Time : N.A Minimum**

**Instruction Time : 0**

**Correct Marks : 1 Wrong Marks : 0.25**

The Barak river is an important river in :

**Options :**

4058597271. Assam

4058597272. Arunachal Pradesh

4058597273. Manipur

4058597274. Meghalaya

**Question Number : 86 Question Id : 4058592193 Question Type : MCQ Option Shuffling : Yes Is**

**Question Mandatory : No Calculator : None Response Time : N.A Think Time : N.A Minimum**

**Instruction Time : 0**

**Correct Marks : 1 Wrong Marks : 0.25**

महत्वपूर्ण बराक नदी कहाँ है?

**Options :**

4058597271. असम

4058597272. अरुणाचल प्रदेश

4058597273. मणिपुर

4058597274. मेघालय

**Question Number : 87 Question Id : 4058592194 Question Type : MCQ Option Shuffling : Yes Is**

**Question Mandatory : No Calculator : None Response Time : N.A Think Time : N.A Minimum**

**Instruction Time : 0**



**Correct Marks : 1 Wrong Marks : 0.25**

Choose the country which is **NOT** touched by Sahara desert?

**Options :**

4058597275. Egypt

4058597276. Mali

4058597277. Morocco

4058597278. Kenya

**Question Number : 87 Question Id : 4058592194 Question Type : MCQ Option Shuffling : Yes Is**

**Question Mandatory : No Calculator : None Response Time : N.A Think Time : N.A Minimum**

**Instruction Time : 0**

**Correct Marks : 1 Wrong Marks : 0.25**

उस देश का चयन कीजिए जिसकी सीमाएँ सहारा मरुभूमि से **नहीं** लगती है?

**Options :**

4058597275. मिस्र

4058597276. माली

4058597277. मोरक्को

4058597278. केन्या

**Question Number : 88 Question Id : 4058592195 Question Type : MCQ Option Shuffling : Yes Is**

**Question Mandatory : No Calculator : None Response Time : N.A Think Time : N.A Minimum**

**Instruction Time : 0**

**Correct Marks : 1 Wrong Marks : 0.25**

Which of the following is not a compound?

**Options :**

4058597279. Ammonia

4058597280. Water

4058597281. Oxygen

4058597282. Carbon dioxide

**Question Number : 88 Question Id : 4058592195 Question Type : MCQ Option Shuffling : Yes Is**

**Question Mandatory : No Calculator : None Response Time : N.A Think Time : N.A Minimum**

**Instruction Time : 0**

**Correct Marks : 1 Wrong Marks : 0.25**

निम्नांकित में से क्या यौगिक नहीं है?

**Options :**

4058597279. अमोनिया

4058597280. जल

4058597281. ऑक्सीजन

4058597282. कार्बन डाइऑक्साइड

**Question Number : 89 Question Id : 4058592196 Question Type : MCQ Option Shuffling : Yes Is**

**Question Mandatory : No Calculator : None Response Time : N.A Think Time : N.A Minimum**

**Instruction Time : 0**

**Correct Marks : 1 Wrong Marks : 0.25**

Diseases like Dysentery and Malaria are caused by

**Options :**

4058597283. Viruses

4058597284. Bacteria

4058597285. Protozoans

4058597286. Fungi

**Question Number : 89 Question Id : 4058592196 Question Type : MCQ Option Shuffling : Yes Is Question Mandatory : No Calculator : None Response Time : N.A Think Time : N.A Minimum Instruction Time : 0**

**Correct Marks : 1 Wrong Marks : 0.25**

अतिसार और मलेरिया जैसे रोग निम्नांकित में से किससे कारित होते हैं:

**Options :**

4058597283. विषाणु

4058597284. जीवाणु

4058597285. प्रोटोजोआ

4058597286. कवक

**Question Number : 90 Question Id : 4058592197 Question Type : MCQ Option Shuffling : Yes Is Question Mandatory : No Calculator : None Response Time : N.A Think Time : N.A Minimum Instruction Time : 0**

**Correct Marks : 1 Wrong Marks : 0.25**

The transformation of the larva into adult through drastic changes is called :

**Options :**

4058597287. A-sexual reproduction

4058597288. Vivipary

4058597289. Metamorphosis

4058597290. External fertilisation

**Question Number : 90 Question Id : 4058592197 Question Type : MCQ Option Shuffling : Yes Is**

**Question Mandatory : No Calculator : None Response Time : N.A Think Time : N.A Minimum**

**Instruction Time : 0**

**Correct Marks : 1 Wrong Marks : 0.25**

लार्वा का व्यापक परिवर्तन के माध्यम से वयस्क में रूपांतरण कहलाता है:

**Options :**

4058597287. अलैंगिक प्रजनन

4058597288. सजीव प्रजकता

4058597289. कायांतरण

4058597290. बाह्य निषेचन

**Question Number : 91 Question Id : 4058592198 Question Type : MCQ Option Shuffling : Yes Is**

**Question Mandatory : No Calculator : None Response Time : N.A Think Time : N.A Minimum**

**Instruction Time : 0**

**Correct Marks : 1 Wrong Marks : 0.25**

Match the vegetation zones of column I with the characteristics given in column II.

Column I		Column II	
A.	Alpine	I.	Snow
B.	Temperate	II.	Frost is rare
C.	Tropical	III.	Frost some snow
D.	Subtropical	IV.	No frost

**Options :**

4058597291. A-II, B-I, C-III, D-IV

4058597292. A-I, B-II, C-IV, D-III

4058597293. A-IV, B-III, C-I, D-II

4058597294. A-I, B-III, C-IV, D-II

**Question Number : 91 Question Id : 4058592198 Question Type : MCQ Option Shuffling : Yes Is**

**Question Mandatory : No Calculator : None Response Time : N.A Think Time : N.A Minimum**

**Instruction Time : 0**

**Correct Marks : 1 Wrong Marks : 0.25**

कॉलम-I में उल्लिखित वनस्पति क्षेत्र को कॉलम-II से सुमेलित कीजिए:

कॉलम I		कॉलम II	
A.	अल्पाइन	I.	बर्फ/हिम
B.	समशीतोष्ण	II.	तुषार विरल होता है
C.	कटिबंधीय	III.	तुषार, कुछ बर्फ पड़ती है।
D.	उष्णकटिबंधीय	IV.	कोई तुषार नहीं

**Options :**

4058597291. A-II, B-I, C-III, D-IV

4058597292. A-I, B-II, C-IV, D-III

4058597293. A-IV, B-III, C-I, D-II

4058597294. A-I, B-III, C-IV, D-II

**Question Number : 92 Question Id : 4058592199 Question Type : MCQ Option Shuffling : Yes Is**

**Question Mandatory : No Calculator : None Response Time : N.A Think Time : N.A Minimum**

**Instruction Time : 0**

**Correct Marks : 1 Wrong Marks : 0.25**

Who is the father of modern digital computers?

**Options :**

4058597295. Howard H. Aiken

4058597296. Charles Babbage

4058597297. John-W-Mauchly

4058597298. Wilhelm Schickhard

**Question Number : 92 Question Id : 4058592199 Question Type : MCQ Option Shuffling : Yes Is**

**Question Mandatory : No Calculator : None Response Time : N.A Think Time : N.A Minimum**

**Instruction Time : 0**

**Correct Marks : 1 Wrong Marks : 0.25**

आधुनिक डिजिटल कम्प्यूटर्स के जनक कौन हैं?

**Options :**

4058597295. होवार्ड एच. ऐकेन

4058597296. चार्ल्स बैबेज

4058597297. जॉन डब्ल्यू. मॉकली

4058597298. विल्हेम स्किकार्ड

**Question Number : 93 Question Id : 4058592200 Question Type : MCQ Option Shuffling : Yes Is**

**Question Mandatory : No Calculator : None Response Time : N.A Think Time : N.A Minimum**

**Instruction Time : 0**

**Correct Marks : 1 Wrong Marks : 0.25**

The practice of untouchability has been abolished and made a punishable crime by which Article of the Constitution of India?

**Options :**

4058597299. Article 15

4058597300. Article 17

4058597301. Article 21

4058597302. Article 32

**Question Number : 93 Question Id : 4058592200 Question Type : MCQ Option Shuffling : Yes Is**

**Question Mandatory : No Calculator : None Response Time : N.A Think Time : N.A Minimum**

**Instruction Time : 0**

**Correct Marks : 1 Wrong Marks : 0.25**

भारत के संविधान के किस अनुच्छेद के द्वारा अस्पृश्यता की प्रथा का उन्मूलन किया गया है और इसे दंडनीय अपराध बनाया गया है?

**Options :**

4058597299. अनुच्छेद 15

4058597300. अनुच्छेद 17

4058597301. अनुच्छेद 21

4058597302. अनुच्छेद 32

**Question Number : 94 Question Id : 4058592201 Question Type : MCQ Option Shuffling : Yes Is Question Mandatory : No Calculator : None Response Time : N.A Think Time : N.A Minimum Instruction Time : 0**

**Correct Marks : 1 Wrong Marks : 0.25**

Consider the following statements:

According to 91<sup>st</sup> Amendment Act of the Constitution of India;

(A) The Council of Ministers shall not exceed 15% of the total number of members of the house of the people.

(B) The Council of Ministers shall not exceed 20% of the total number of members of the Legislative Assembly for a State.

Which of the statements given above is/are correct:

**Options :**

4058597303. Only A is correct

4058597304. Only B is correct

4058597305. A and B are correct

4058597306. Neither A nor B is correct

**Question Number : 94 Question Id : 4058592201 Question Type : MCQ Option Shuffling : Yes Is Question Mandatory : No Calculator : None Response Time : N.A Think Time : N.A Minimum Instruction Time : 0**

**Correct Marks : 1 Wrong Marks : 0.25**



निम्नलिखित कथनों पर विचार कीजिए:

भारत के संविधान के 91वें संशोधन अधिनियम के अनुसार -

(ए) मंत्री परिषद के सदस्यों की संख्या लोकसभा के कुल सदस्यों के 15% से प्रतिशत से अधिक नहीं होगी।

(बी) मंत्री परिषद के सदस्यों की संख्या किसी राज्य की कुल सदस्य संख्या के 20% से अधिक नहीं होगी।

ऊपर दिए गए कथनों में से कौन-सा/से कथन सही है/हैं?

**Options :**

4058597303. केवल A सही है।

4058597304. केवल B सही है।

4058597305. A और B दोनों सही हैं।

4058597306. न तो A और न B सही हैं।

**Question Number : 95 Question Id : 4058592202 Question Type : MCQ Option Shuffling : Yes Is**

**Question Mandatory : No Calculator : None Response Time : N.A Think Time : N.A Minimum**

**Instruction Time : 0**

**Correct Marks : 1 Wrong Marks : 0.25**

Which one among the following subjects is NOT included in the "Union List"?

**Options :**

4058597307. Banking

4058597308. Railway

4058597309. Trade and Commerce

4058597310. Post and Telegraph

**Question Number : 95 Question Id : 4058592202 Question Type : MCQ Option Shuffling : Yes Is Question Mandatory : No Calculator : None Response Time : N.A Think Time : N.A Minimum Instruction Time : 0**

**Correct Marks : 1 Wrong Marks : 0.25**

निम्नलिखित विषयों में से क्या "संघ सूची" में सम्मिलित नहीं है?

**Options :**

4058597307. बैंकिंग

4058597308. रेलवे

4058597309. व्यापार और वाणिज्य

4058597310. डाक और तार

**Question Number : 96 Question Id : 4058592203 Question Type : MCQ Option Shuffling : Yes Is Question Mandatory : No Calculator : None Response Time : N.A Think Time : N.A Minimum Instruction Time : 0**

**Correct Marks : 1 Wrong Marks : 0.25**

Consider the following statements about power sharing:

A. Power sharing is the very spirit of democracy.

B. Power sharing is good because it helps to reduce the possibility of conflict between social groups.

Choose the correct answer from the options given below:

**Options :**

4058597311. A is true and B is false.

4058597312. Both A and B are true

4058597313. A is false and B is true

4058597314. Both A and B are false.

**Question Number : 96 Question Id : 4058592203 Question Type : MCQ Option Shuffling : Yes Is**

**Question Mandatory : No Calculator : None Response Time : N.A Think Time : N.A Minimum**

**Instruction Time : 0**

**Correct Marks : 1 Wrong Marks : 0.25**

शक्ति के बँटवारे के संबंध में निम्नलिखित कथनों पर विचार कीजिए:

A. शक्ति का बँटवारा लोकतंत्र की आत्मा है।

B. शक्ति का बँटवारा अच्छा है क्योंकि इससे सामाजिक समूहों के बीच संघर्ष की संभावना कम करने में सहायता मिलती है।

निम्नलिखित विकल्पों में से सही उत्तर चुनिए:

**Options :**

4058597311. A सही है और B गलत है।

4058597312. A और B दोनों सही हैं।

4058597313. A गलत है और B सही है।

4058597314. A और B दोनों गलत हैं।

**Question Number : 97 Question Id : 4058592204 Question Type : MCQ Option Shuffling : Yes Is**

**Question Mandatory : No Calculator : None Response Time : N.A Think Time : N.A Minimum**

**Instruction Time : 0**

**Correct Marks : 1 Wrong Marks : 0.25**

Statement A : The Food Corporation of India (FCI) purchases wheat and rice from the farmers in states where there is surplus production.

Statement B : The farmers are paid minimum support price which is declared by the Government every year before the sowing season.

Choose the correct answer from the options given below:

**Options :**

4058597315. Both statements A and B, are correct.

4058597316. Both statements A and B, are incorrect.

4058597317. Statement A is correct, B is incorrect.

4058597318. Statement A is incorrect, B is correct.

**Question Number : 97 Question Id : 4058592204 Question Type : MCQ Option Shuffling : Yes Is Question Mandatory : No Calculator : None Response Time : N.A Think Time : N.A Minimum Instruction Time : 0**

**Correct Marks : 1 Wrong Marks : 0.25**

कथन A : भारतीय खाद्य निगम (FCI) उन राज्यों के किसानों से गेहूँ और चावल खरीदता है जहाँ अधिशेष उत्पादन होता है।

कथन B : किसानों को न्यूनतम समर्थन मूल्य का भुगतान किया जाता है जिसे प्रतिवर्ष सरकार के द्वारा बुआई के मौसम के पहले घोषित किया जाता है।

नीचे दिए गए विकल्पों में से सही उत्तर का चयन कीजिए :

**Options :**

4058597315. कथन A और B दोनों सही हैं।

4058597316. कथन A और B दोनों गलत हैं।

4058597317. कथन A सही है परन्तु B गलत है।

4058597318. कथन A गलत है परन्तु B सही है।

**Question Number : 98 Question Id : 4058592205 Question Type : MCQ Option Shuffling : Yes Is Question Mandatory : No Calculator : None Response Time : N.A Think Time : N.A Minimum Instruction Time : 0**

**Correct Marks : 1 Wrong Marks : 0.25**

Consider the following statements about Flexible Exchange Rate System:

A. The Governments do not need to maintain large stocks of foreign exchange reserves.

B. The Governments will have to intervene to take care of a deficit in the balance of payment by use of its official reserves.

Choose the correct answer from the options given below:

**Options :**

4058597319. A is true and B is false.

4058597320. Both A and B are true.

4058597321. A is false and B is true.

4058597322. Both A and B are false.

**Question Number : 98 Question Id : 4058592205 Question Type : MCQ Option Shuffling : Yes Is Question Mandatory : No Calculator : None Response Time : N.A Think Time : N.A Minimum Instruction Time : 0**

**Correct Marks : 1 Wrong Marks : 0.25**

नम्य विनिमय दर पद्धति के बारे में निम्नलिखित कथनों पर विचार कीजिए:

A. सरकार को विदेशी मुद्रा आरक्षित निधि के बृहत् संचय के रख-रखाव की आवश्यकता नहीं होती है।

B. सरकार को अपने आधिकारिक आरक्षित निधि के प्रयोग के द्वारा भुगतान के सन्तुलन में किसी घाटे का ध्यान रखने के लिए हस्तक्षेप करना होगा।

नीचे दिए गए विकल्पों में से सही उत्तर का चयन कीजिए:

**Options :**

4058597319. A सत्य है और B असत्य है।

4058597320. A और B दोनों सत्य हैं।

4058597321. A असत्य है और B सत्य है।

4058597322. A और B दोनों असत्य हैं।

**Question Number : 99 Question Id : 4058592206 Question Type : MCQ Option Shuffling : Yes Is**

**Question Mandatory : No Calculator : None Response Time : N.A Think Time : N.A Minimum**

**Instruction Time : 0**

**Correct Marks : 1 Wrong Marks : 0.25**

Identify, which one of the following is wrongly matched.

**Options :**

4058597323. Foreign exchange - Currency or bonds of another country.

4058597324. HYV seeds - Seeds that give large proportion of output.

4058597325. Equity - Shares in the paid up capital or stock of a company whose holders are considered as owners with certain rights.

4058597326. Gratuity - The use of taxation and government expenditure to regulate the economic activities.

**Question Number : 99 Question Id : 4058592206 Question Type : MCQ Option Shuffling : Yes Is Question Mandatory : No Calculator : None Response Time : N.A Think Time : N.A Minimum Instruction Time : 0**

**Correct Marks : 1 Wrong Marks : 0.25**

निम्नलिखित में से कौन-सा सुमेलित नहीं है, पहचानिए:

**Options :**

4058597323. विदेशी विनिमय - दूसरे देश के बन्धपत्र या मुद्रा।

4058597324. HYV बीज - बीज जो भारी मात्रा में निर्गत प्रदान करती है।

4058597325. एक्विटी - किसी कम्पनी के स्टॉक या भुगतान किए गए शेयर जिसके धारक निश्चित अधिकार के साथ उसके स्वामी समझे जाते हैं।

4058597326. उपदान - कराधान एवं सरकारी व्यय का आर्थिक गतिविधियों के विनियमन हेतु प्रयोग।

**Question Number : 100 Question Id : 4058592207 Question Type : MCQ Option Shuffling : Yes Is Question Mandatory : No Calculator : None Response Time : N.A Think Time : N.A Minimum Instruction Time : 0**

**Correct Marks : 1 Wrong Marks : 0.25**

Which one among the following was NOT a regulatory mechanism of the industrial sector?

**Options :**

4058597327. Industrial licensing

4058597328. Private sector was allowed to operate in majority industries.

4058597329. Some goods could be produced only in small-scale industries.

4058597330. Controls on price fixation and distribution of selected industrial products.

**Question Number : 100 Question Id : 4058592207 Question Type : MCQ Option Shuffling : Yes**

**Is Question Mandatory : No Calculator : None Response Time : N.A Think Time : N.A**

**Minimum Instruction Time : 0**

**Correct Marks : 1 Wrong Marks : 0.25**

निम्नलिखित में से क्या औद्योगिक क्षेत्र की एक नियमन प्रणाली नहीं थी?

**Options :**

4058597327. औद्योगिक अनुज्ञप्तिकरण

4058597328. बहुसंख्यक उद्योगों में निजी क्षेत्र को संक्रिया या प्रचालन का अधिकार था।

4058597329. कुछ वस्तुओं का उत्पादन लघु उद्योगों में ही किया जा सकता था।

4058597330. मूल्य निर्धारण पर नियंत्रण और चयनित औद्योगिक उत्पादों का वितरण।

## Section-B

<b>Group Number :</b>	2
<b>Group Id :</b>	40585925
<b>Group Maximum Duration :</b>	0
<b>Group Minimum Duration :</b>	180
<b>Show Attended Group? :</b>	No
<b>Edit Attended Group? :</b>	No
<b>Break time :</b>	0
<b>Group Marks :</b>	50
<b>Is this Group for Examiner? :</b>	No



Examiner permission : Cant View  
Show Progress Bar? : No

## B-Quantitative Ability

Section Id : 405859123  
Section Number : 1  
Section type : Online  
Mandatory or Optional : Mandatory  
Number of Questions : 15  
Number of Questions to be attempted : 15  
Section Marks : 15  
Enable Mark as Answered Mark for Review and Clear Response : Yes  
Maximum Instruction Time : 0  
Sub-Section Number : 1  
Sub-Section Id : 405859151  
Question Shuffling Allowed : Yes  
Is Section Default? : null

Question Number : 101 Question Id : 4058592208 Question Type : MCQ Option Shuffling : Yes

Is Question Mandatory : No Calculator : None Response Time : N.A Think Time : N.A

Minimum Instruction Time : 0

Correct Marks : 1 Wrong Marks : 0.25

A certain sum of money is invested at an interest rate of 5% P.A. and a Second sum of money which is twice as large as the first, is invested at 5.5% P.A.

The total interest on investments together is ₹ 1000 per year. The first sum of money invested is

Options :

4058597331. ₹ 6250

4058597332. ₹12500

4058597333. ₹10500

4058597334. ₹11500

**Question Number : 101 Question Id : 4058592208 Question Type : MCQ Option Shuffling : Yes**

**Is Question Mandatory : No Calculator : None Response Time : N.A Think Time : N.A**

**Minimum Instruction Time : 0**

**Correct Marks : 1 Wrong Marks : 0.25**

एक सुनिश्चित धनराशि 5% प्रतिवर्ष के ब्याज दर पर निवेश की गयी और एक दूसरी धनराशि जो कि पहली से दोगुनी है उसको 5.5% प्रतिवर्ष के दर पर निवेश किया गया है। दोनों निवेशों पर एक साथ कुल ब्याज ₹ 1000 प्रतिवर्ष है। निवेश की गयी पहली धनराशि है :

**Options :**

4058597331. ₹ 6250

4058597332. ₹12500

4058597333. ₹10500

4058597334. ₹11500

**Question Number : 102 Question Id : 4058592209 Question Type : MCQ Option Shuffling : Yes**

**Is Question Mandatory : No Calculator : None Response Time : N.A Think Time : N.A**

**Minimum Instruction Time : 0**

**Correct Marks : 1 Wrong Marks : 0.25**

A pendulum strikes 7 times in 4 seconds and another pendulum strikes 5 times in 3 seconds. If both pendulums start striking at the same time, how many clear strikes can be listened in one minute ?

**Options :**

4058597335. 207

4058597336. 205

4058597337. 197

4058597338. 199

**Question Number : 102 Question Id : 4058592209 Question Type : MCQ Option Shuffling : Yes**

**Is Question Mandatory : No Calculator : None Response Time : N.A Think Time : N.A**

**Minimum Instruction Time : 0**

**Correct Marks : 1 Wrong Marks : 0.25**

एक लोलक 4 सेकंड में 7 बार बजता है और एक अन्य लोलक 3 सेकंड में 5 बार बजता है। यदि दोनों लोलक एक ही समय पर बजते हैं तो एक मिनट में कितनी बार लोलक बजने की आवाज स्पष्ट सुनाई देगी ?

**Options :**

4058597335. 207

4058597336. 205

4058597337. 197

4058597338. 199

**Question Number : 103 Question Id : 4058592210 Question Type : MCQ Option Shuffling : Yes**

**Is Question Mandatory : No Calculator : None Response Time : N.A Think Time : N.A**

**Minimum Instruction Time : 0**

**Correct Marks : 1 Wrong Marks : 0.25**

If  $7^{\frac{x}{3}} = 2401$ , Then the value of  $x$  is :

**Options :**

4058597339. 9

4058597340. 10

4058597341. 12

4058597342. 15

**Question Number : 103 Question Id : 4058592210 Question Type : MCQ Option Shuffling : Yes**

**Is Question Mandatory : No Calculator : None Response Time : N.A Think Time : N.A**

**Minimum Instruction Time : 0**

**Correct Marks : 1 Wrong Marks : 0.25**

यदि  $7^x = 2401$ , तो  $x$  का मान है :

**Options :**

4058597339. 9

4058597340. 10

4058597341. 12

4058597342. 15

**Question Number : 104 Question Id : 4058592211 Question Type : MCQ Option Shuffling : Yes**

**Is Question Mandatory : No Calculator : None Response Time : N.A Think Time : N.A**

**Minimum Instruction Time : 0**

**Correct Marks : 1 Wrong Marks : 0.25**

$3.\overline{783} =$  \_\_\_\_\_

**Options :**

4058597343.  $3\frac{21}{29}$

$$4058597344. \quad {}^3\frac{23}{29}$$

$$4058597345. \quad {}^3\frac{29}{37}$$

$$4058597346. \quad {}^3\frac{31}{37}$$

**Question Number : 104 Question Id : 4058592211 Question Type : MCQ Option Shuffling : Yes**

**Is Question Mandatory : No Calculator : None Response Time : N.A Think Time : N.A**

**Minimum Instruction Time : 0**

**Correct Marks : 1 Wrong Marks : 0.25**

$$\overline{3.783} = \underline{\hspace{2cm}}$$

**Options :**

$$4058597343. \quad {}^3\frac{21}{29}$$

$$4058597344. \quad {}^3\frac{23}{29}$$

$$4058597345. \quad {}^3\frac{29}{37}$$

$$4058597346. \quad {}^3\frac{31}{37}$$

**Question Number : 105 Question Id : 4058592212 Question Type : MCQ Option Shuffling : Yes**

**Is Question Mandatory : No Calculator : None Response Time : N.A Think Time : N.A**

**Minimum Instruction Time : 0**

**Correct Marks : 1 Wrong Marks : 0.25**

P completes  $\frac{13}{20}$  of a work in 9 days. Then he completes the remaining work with the help of Q in 4 days. The time required for P and Q together to complete the entire work is:

**Options :**

4058597347.  $11\frac{2}{7}$  days

4058597348.  $11\frac{3}{7}$  days

4058597349.  $12\frac{4}{7}$  days

4058597350.  $12\frac{5}{7}$  days

**Question Number : 105 Question Id : 4058592212 Question Type : MCQ Option Shuffling : Yes**

**Is Question Mandatory : No Calculator : None Response Time : N.A Think Time : N.A**

**Minimum Instruction Time : 0**

**Correct Marks : 1 Wrong Marks : 0.25**

P किसी कार्य का  $\frac{13}{20}$  भाग 9 दिन में पूरा करता है। फिर वह Q की सहायता से शेष कार्य 4 दिन में पूरा करता है। P और Q एक साथ मिलकर सम्पूर्ण कार्य को कितने समय में पूरा करेंगे ?

**Options :**

4058597347.  $11\frac{2}{7}$  दिनों

4058597348.  $11\frac{3}{7}$  दिनों

4058597349.  $12\frac{4}{7}$  दिनों

4058597350.  $12\frac{5}{7}$  दिनों

**Question Number : 106 Question Id : 4058592213 Question Type : MCQ Option Shuffling : Yes**

**Is Question Mandatory : No Calculator : None Response Time : N.A Think Time : N.A**

**Minimum Instruction Time : 0**

**Correct Marks : 1 Wrong Marks : 0.25**

The length of the train, which is travelling with a speed of 45 kmph, and can cross a 100 m long bridge in 30 sec., is :

**Options :**

4058597351. 225m

4058597352. 245m

4058597353. 275m

4058597354. 200m

**Question Number : 106 Question Id : 4058592213 Question Type : MCQ Option Shuffling : Yes**

**Is Question Mandatory : No Calculator : None Response Time : N.A Think Time : N.A**

**Minimum Instruction Time : 0**

**Correct Marks : 1 Wrong Marks : 0.25**

रेलगाड़ी, जो 45 कि.मी./प्रति घंटा की गति से चल कर 100 मीटर लम्बा पुल 30 सेकंड में पार कर सकती है, की लम्बाई है:

**Options :**

4058597351. 225m

4058597352. 245m

4058597353. 275m

4058597354. 200m

**Question Number : 107 Question Id : 4058592214 Question Type : MCQ Option Shuffling : Yes**

**Is Question Mandatory : No Calculator : None Response Time : N.A Think Time : N.A**

**Minimum Instruction Time : 0**

**Correct Marks : 1 Wrong Marks : 0.25**

The smallest fraction which should be subtracted from the sum of the following numbers :

$$4\frac{1}{4}, 2\frac{1}{2}, 5\frac{9}{12}, 3\frac{1}{3}, 2\frac{3}{4} \text{ so as to make it}$$

a whole number is :

**Options :**

4058597355.  $\frac{5}{12}$

4058597356.  $\frac{7}{12}$

4058597357.  $\frac{1}{2}$

4058597358.  $\frac{3}{4}$

**Question Number : 107 Question Id : 4058592214 Question Type : MCQ Option Shuffling : Yes**

**Is Question Mandatory : No Calculator : None Response Time : N.A Think Time : N.A**

**Minimum Instruction Time : 0**

**Correct Marks : 1 Wrong Marks : 0.25**

लघुत्तम भिन्न जिसे निम्नलिखित संख्याओं के योग से घटाना चाहिये

$$4\frac{1}{4}, 2\frac{1}{2}, 5\frac{9}{12}, 3\frac{1}{3}, 2\frac{3}{4} \text{ ताकि यह योग एक पूर्ण संख्या बन जाये, है :}$$



**Options :**

4058597355.  $\frac{5}{12}$

4058597356.  $\frac{7}{12}$

4058597357.  $\frac{1}{2}$

4058597358.  $\frac{3}{4}$

**Question Number : 108 Question Id : 4058592215 Question Type : MCQ Option Shuffling : Yes**

**Is Question Mandatory : No Calculator : None Response Time : N.A Think Time : N.A**

**Minimum Instruction Time : 0**

**Correct Marks : 1 Wrong Marks : 0.25**

A canteen requires 847 bananas in a week. How many bananas did it require for the months of January, February and March 2024 together ?

**Options :**

4058597359. 10,890

4058597360. 10,374

4058597361. 11,011

4058597362. 10,586

**Question Number : 108 Question Id : 4058592215 Question Type : MCQ Option Shuffling : Yes**

**Is Question Mandatory : No Calculator : None Response Time : N.A Think Time : N.A**

**Minimum Instruction Time : 0**

**Correct Marks : 1 Wrong Marks : 0.25**

एक कैटीन को एक सप्ताह में 847 केलों की जरूरत होती है। कैटीन को जनवरी, फरवरी और मार्च, 2024 में एक साथ मिलाकर कितने केलों की जरूरत थी?

**Options :**

4058597359. 10,890

4058597360. 10,374

4058597361. 11,011

4058597362. 10,586

**Question Number : 109 Question Id : 4058592216 Question Type : MCQ Option Shuffling : Yes**

**Is Question Mandatory : No Calculator : None Response Time : N.A Think Time : N.A**

**Minimum Instruction Time : 0**

**Correct Marks : 1 Wrong Marks : 0.25**

A, B and C enter into a business partnership by making investments in the ratio 3:5:7. After a year, C invests ₹33760 more while A withdraws ₹4560. The ratio of investments then changes to 24:59:167. How much does B invest ?

**Options :**

4058597363. ₹ 22,000

4058597364. ₹ 22,400

4058597365. ₹ 22,980

4058597366. ₹ 23,600

**Question Number : 109 Question Id : 4058592216 Question Type : MCQ Option Shuffling : Yes**

**Is Question Mandatory : No Calculator : None Response Time : N.A Think Time : N.A**

**Minimum Instruction Time : 0**

**Correct Marks : 1 Wrong Marks : 0.25**

तीन व्यक्ति A, B तथा C 3:5:7 के अनुपात में निवेश कर किसी साझे का व्यवसाय शुरू करते हैं। एक वर्ष बाद C ₹33,760 का और निवेश करता है जबकि A ₹4560 निकाल लेता है। तब इनके निवेश का अनुपात बदलकर 24:59:167 हो जाता है। B का निवेश कितना है ?

**Options :**

4058597363. ₹ 22,000

4058597364. ₹ 22,400

4058597365. ₹ 22,980

4058597366. ₹ 23,600

**Question Number : 110 Question Id : 4058592217 Question Type : MCQ Option Shuffling : Yes**

**Is Question Mandatory : No Calculator : None Response Time : N.A Think Time : N.A**

**Minimum Instruction Time : 0**

**Correct Marks : 1 Wrong Marks : 0.25**

What will be the least number which when doubled will be exactly divisible by 10, 18, 21 and 27?

**Options :**

4058597367. 1820

4058597368. 1830

4058597369. 945

4058597370. 1890

**Question Number : 110 Question Id : 4058592217 Question Type : MCQ Option Shuffling : Yes**

**Is Question Mandatory : No Calculator : None Response Time : N.A Think Time : N.A**

**Minimum Instruction Time : 0**

**Correct Marks : 1 Wrong Marks : 0.25**

वह सबसे छोटी संख्या क्या होगी जिसे जब द्विगुणित किया जाए तो वह 10, 18, 21 और 27 से पूर्णतया विभाज्य होगी ?

**Options :**

4058597367. 1820

4058597368. 1830

4058597369. 945

4058597370. 1890

**Question Number : 111 Question Id : 4058592218 Question Type : MCQ Option Shuffling : Yes**

**Is Question Mandatory : No Calculator : None Response Time : N.A Think Time : N.A**

**Minimum Instruction Time : 0**

**Correct Marks : 1 Wrong Marks : 0.25**

Anupam, a trader, sells an item to Suraj at 20% discount, but he charges 10% on the discounted price, for packaging and delivery. Suraj sells it for ₹ 1782 more, thereby earning a profit of 25%. At what price had the trader marked the item?

**Options :**

4058597371. ₹ 1620

4058597372. ₹ 7450

4058597373. ₹ 7800

4058597374. ₹ 8100

**Question Number : 111 Question Id : 4058592218 Question Type : MCQ Option Shuffling : Yes**

**Is Question Mandatory : No Calculator : None Response Time : N.A Think Time : N.A**

**Minimum Instruction Time : 0**

**Correct Marks : 1 Wrong Marks : 0.25**

एक व्यापारी- अनुपम एक वस्तु सूरज को 20% छूट पर बिक्रय करता है लेकिन वह इसे पिक करने ओर पहुंचाने के लिए छूट दिए गए मूल्य पर 10% भाड़ा लगाता है। सूरज इस वस्तु को ₹1782 अधिक पर बेचता है जिससे उसे 25% का लाभ होता है। व्यापारी ने उस वस्तु पर कितना मूल्य अंकित किया था?

**Options :**

4058597371. ₹ 1620

4058597372. ₹ 7450

4058597373. ₹ 7800

4058597374. ₹ 8100

**Question Number : 112 Question Id : 4058592219 Question Type : MCQ Option Shuffling : Yes**

**Is Question Mandatory : No Calculator : None Response Time : N.A Think Time : N.A**

**Minimum Instruction Time : 0**

**Correct Marks : 1 Wrong Marks : 0.25**

The arithmetic mean of few numbers is 40. If each number is increased by 7, and then multiplied by 12, then the new mean will be :

**Options :**

4058597375. 47

4058597376. 480

4058597377. 84

4058597378. 564

**Question Number : 112 Question Id : 4058592219 Question Type : MCQ Option Shuffling : Yes**

**Is Question Mandatory : No Calculator : None Response Time : N.A Think Time : N.A**

**Minimum Instruction Time : 0**

**Correct Marks : 1 Wrong Marks : 0.25**

कुछ संख्याओ का अंकगणित माध्य 40 है। यदि प्रत्येक संख्या को 7 से बढ़ाया जाता है और फिर 12 से गुणा किया जाता है, तो नया माध्य होगा:

**Options :**

4058597375. 47

4058597376. 480

4058597377. 84

4058597378. 564

**Question Number : 113 Question Id : 4058592220 Question Type : MCQ Option Shuffling : Yes**

**Is Question Mandatory : No Calculator : None Response Time : N.A Think Time : N.A**

**Minimum Instruction Time : 0**

**Correct Marks : 1 Wrong Marks : 0.25**

The greatest possible number for which 38% of that number will be less than 54, is

**Options :**

4058597379. 138

4058597380. 139

4058597381. 142

4058597382. 143

Question Number : 113 Question Id : 4058592220 Question Type : MCQ Option Shuffling : Yes

Is Question Mandatory : No Calculator : None Response Time : N.A Think Time : N.A

Minimum Instruction Time : 0

Correct Marks : 1 Wrong Marks : 0.25

महत्तम संभवित संख्या , जिस के लिए उस संख्या का 38%, 54 से कम होगा, है:

Options :

4058597379. 138

4058597380. 139

4058597381. 142

4058597382. 143

Question Number : 114 Question Id : 4058592221 Question Type : MCQ Option Shuffling : Yes

Is Question Mandatory : No Calculator : None Response Time : N.A Think Time : N.A

Minimum Instruction Time : 0

Correct Marks : 1 Wrong Marks : 0.25

Two places P and Q are 120 km apart from each other on a highway. A car starts from P and another from Q at the same time. If they move in the same direction they meet each other in 8 hours. If they move in opposite directions towards each other, they meet in 2 hours 40 minutes. What are the respective speeds of the cars in km/hour ?

Options :

4058597383. 30, 15

4058597384. 25, 20

4058597385. 45, 25

4058597386. 45, 30

**Question Number : 114 Question Id : 4058592221 Question Type : MCQ Option Shuffling : Yes**

**Is Question Mandatory : No Calculator : None Response Time : N.A Think Time : N.A**

**Minimum Instruction Time : 0**

**Correct Marks : 1 Wrong Marks : 0.25**

एक राजमार्ग पर दो स्थान P ओर Q एक दूसरे से 120 कि.मी. की दूरी पर है। एक कार P स्थान से तथा दूसरी कार Q स्थान से एक साथ चलती हैं। यदि वे एक ही दिशा में चलती हैं तो 8 घंटे में एक दूसरे से मिलती हैं। यदि वे एक दूसरे से विपरीत दिशा में चलती हैं तो वे 2 घंटे 40 मिनट में मिलती हैं। कारों की क्रमशः गतियाँ (किमी/ घंटा) कितनी हैं?

**Options :**

4058597383. 30, 15

4058597384. 25, 20

4058597385. 45, 25

4058597386. 45, 30

**Question Number : 115 Question Id : 4058592222 Question Type : MCQ Option Shuffling : Yes**

**Is Question Mandatory : No Calculator : None Response Time : N.A Think Time : N.A**

**Minimum Instruction Time : 0**

**Correct Marks : 1 Wrong Marks : 0.25**

In an election between 3 candidates A, B and C, 10% registered voters did not cast their votes and 5% votes were declared invalid. A obtained 834 votes more than B and 1254 votes more than C. If 1,78,800 voters were registered for the election then find the number of votes obtained by the winner.

**Options :**

4058597387. 51,580

4058597388. 51,624

4058597389. 51,644



4058597390. 51,654

**Question Number : 115 Question Id : 4058592222 Question Type : MCQ Option Shuffling : Yes**

**Is Question Mandatory : No Calculator : None Response Time : N.A Think Time : N.A**

**Minimum Instruction Time : 0**

**Correct Marks : 1 Wrong Marks : 0.25**

तीन उम्मीदवारों A, B और C की बीच किसी चुनाव में 10% पंजीकृत मतदाताओं ने मतदान में भाग नहीं लिया एवं 5% मत अमान्य घोषित किए गए। B की तुलना में A को 834 मत अधिक प्राप्त हुए तथा C की तुलना में उसे 1254 मत अधिक प्राप्त हुए। यदि चुनाव के लिए 1,78,800 मतदाता पंजीकृत थे, तो विजेता को कुल कितने मत प्राप्त हुए ?

**Options :**

4058597387. 51,580

4058597388. 51,624

4058597389. 51,644

4058597390. 51,654

## **B-Analytical & Logical Ability**

<b>Section Id :</b>	405859124
<b>Section Number :</b>	2
<b>Section type :</b>	Online
<b>Mandatory or Optional :</b>	Mandatory
<b>Number of Questions :</b>	15
<b>Number of Questions to be attempted :</b>	15
<b>Section Marks :</b>	15

<b>Enable Mark as Answered Mark for Review and Clear Response :</b>	Yes
<b>Maximum Instruction Time :</b>	0
<b>Sub-Section Number :</b>	1
<b>Sub-Section Id :</b>	405859152
<b>Question Shuffling Allowed :</b>	Yes
<b>Is Section Default? :</b>	null

**Question Number : 116 Question Id : 4058592223 Question Type : MCQ Option Shuffling : Yes**

**Is Question Mandatory : No Calculator : None Response Time : N.A Think Time : N.A**

**Minimum Instruction Time : 0**

**Correct Marks : 1 Wrong Marks : 0.25**

In a certain code language 'ORANGE' is coded as 30-36-02-28-14-10. Then how will 'FRUITS' be coded in the same language ?

**Options :**

4058597391. 12-36-40-18-42-36

4058597392. 12-36-42-18-40-38

4058597393. 12-36-42-16-40-38

4058597394. 12-36-40-18-42-38

**Question Number : 116 Question Id : 4058592223 Question Type : MCQ Option Shuffling : Yes**

**Is Question Mandatory : No Calculator : None Response Time : N.A Think Time : N.A**

**Minimum Instruction Time : 0**

**Correct Marks : 1 Wrong Marks : 0.25**

एक निश्चित कूट भाषा में 'ORANGE' का कूट शब्द 30-36-02-28-14-10 है तो उसी भाषा में 'FRUITS' का कूट शब्द क्या होगा ?

**Options :**

4058597391. 12-36-40-18-42-36

4058597392. 12-36-42-18-40-38

4058597393. 12-36-42-16-40-38

4058597394. 12-36-40-18-42-38

**Question Number : 117 Question Id : 4058592224 Question Type : MCQ Option Shuffling : Yes**

**Is Question Mandatory : No Calculator : None Response Time : N.A Think Time : N.A**

**Minimum Instruction Time : 0**

**Correct Marks : 1 Wrong Marks : 0.25**

Manik is fourteenth from the right end in a row of 40 boys. What is his position from the left end ?

**Options :**

4058597395. 24<sup>th</sup>

4058597396. 27<sup>th</sup>

4058597397. 25<sup>th</sup>

4058597398. 26<sup>th</sup>

**Question Number : 117 Question Id : 4058592224 Question Type : MCQ Option Shuffling : Yes**

**Is Question Mandatory : No Calculator : None Response Time : N.A Think Time : N.A**

**Minimum Instruction Time : 0**

**Correct Marks : 1 Wrong Marks : 0.25**

माणिक 40 बच्चों की एक कतार में दायें सिरे से 14 वें स्थान पर है। बायें सिरे से उसकी अवस्थिति क्या है?

**Options :**

4058597395. 24 वीं

4058597396. 27 वीं

4058597397. 25 वीं

4058597398. 26 वीं

**Question Number : 118 Question Id : 4058592225 Question Type : MCQ Option Shuffling : Yes**

**Is Question Mandatory : No Calculator : None Response Time : N.A Think Time : N.A**

**Minimum Instruction Time : 0**

**Correct Marks : 1 Wrong Marks : 0.25**

There are 4 members A, B, C and D in a family. B is the father of A and son of C. C is the father of D. A is a female. How is A related to C ?

**Options :**

4058597399. Sister

4058597400. Wife

4058597401. Grand daughter

4058597402. Daughter

**Question Number : 118 Question Id : 4058592225 Question Type : MCQ Option Shuffling : Yes**

**Is Question Mandatory : No Calculator : None Response Time : N.A Think Time : N.A**

**Minimum Instruction Time : 0**

**Correct Marks : 1 Wrong Marks : 0.25**

एक परिवार में A, B, C तथा D 4 सदस्य हैं। B, A का पिता है तथा C का पुत्र है। C, D का पिता है। A एक महिला है। A, C से किस प्रकार संबंधित हैं ?

**Options :**

4058597399. बहन

4058597400. पत्नी

4058597401. पौत्री

4058597402. पुत्री

**Question Number : 119 Question Id : 4058592226 Question Type : MCQ Option Shuffling : Yes**

**Is Question Mandatory : No Calculator : None Response Time : N.A Think Time : N.A**

**Minimum Instruction Time : 0**

**Correct Marks : 1 Wrong Marks : 0.25**

How many such consonants are there in the following sequence each of which is immediately preceded by a vowel and immediately followed by a number ?

PQ2ED2SA925EAG5EF629

**Options :**

4058597403. 0

4058597404. 1

4058597405. 2

4058597406. 3

**Question Number : 119 Question Id : 4058592226 Question Type : MCQ Option Shuffling : Yes**

**Is Question Mandatory : No Calculator : None Response Time : N.A Think Time : N.A**

**Minimum Instruction Time : 0**

**Correct Marks : 1 Wrong Marks : 0.25**

नीचे दी गई श्रृंखला में ऐसे कितने वर्ण हैं जिनके ठीक पहले एक स्वर तथा ठीक बाद एक अंक आता है ?

PQ2ED2SA925EAG5EF629

**Options :**

4058597403. 0

4058597404. 1

4058597405. 2

4058597406. 3

**Question Number : 120 Question Id : 4058592227 Question Type : MCQ Option Shuffling : Yes**

**Is Question Mandatory : No Calculator : None Response Time : N.A Think Time : N.A**

**Minimum Instruction Time : 0**

**Correct Marks : 1 Wrong Marks : 0.25**

Which of the following terms is given in options will replace the question mark (?) in the following Series ?

AGW31, DIV35, GKU39, JMT43, ?

**Options :**

4058597407. NOS37

4058597408. MPR43

4058597409. LOT45

4058597410. MOS47

**Question Number : 120 Question Id : 4058592227 Question Type : MCQ Option Shuffling : Yes**

**Is Question Mandatory : No Calculator : None Response Time : N.A Think Time : N.A**

**Minimum Instruction Time : 0**

**Correct Marks : 1 Wrong Marks : 0.25**

नीचे दिए गए विकल्पों में से कौन-सा पद नीचे दी गई श्रृंखला में प्रश्नवाचक चिह्न का स्थान लेगा ?

AGW31, DIV35, GKU39, JMT43, ?

**Options :**

4058597407. NOS37

4058597408. MPR43

4058597409. LOT45

4058597410. MOS47

**Question Number : 121 Question Id : 4058592228 Question Type : MCQ Option Shuffling : Yes**

**Is Question Mandatory : No Calculator : None Response Time : N.A Think Time : N.A**

**Minimum Instruction Time : 0**

**Correct Marks : 1 Wrong Marks : 0.25**

Seven persons M, N, O, P, Q, R and T are sitting around a circle facing towards the centre but not necessarily in the same order. N and R are not the intermediate neighbours of P. O is sitting second to the right of R and third to the left of P. M is sitting in near left of T. who is sitting second to the right of Q?

**Options :**

4058597411. O

4058597412. M

4058597413. T

4058597414. N

**Question Number : 121 Question Id : 4058592228 Question Type : MCQ Option Shuffling : Yes**

**Is Question Mandatory : No Calculator : None Response Time : N.A Think Time : N.A**

**Minimum Instruction Time : 0**

**Correct Marks : 1 Wrong Marks : 0.25**

सात व्यक्ति M, N, O, P, Q, R एवं T एक घेरे में केंद्र की ओर मुह करके बैठे है तथा उनका निश्चित क्रम यह नहीं है। N और R, P के ठीक अगले पड़ोसी नहीं हैं। O,R के दायीं और दूसरे स्थान पर है। M, T के ठीक बायीं और बैठा है। Q के दायीं और दूसरे स्थान पर कौन है?

**Options :**

4058597411. O

4058597412. M

4058597413. T

4058597414. N

**Question Number : 122 Question Id : 4058592229 Question Type : MCQ Option Shuffling : Yes**

**Is Question Mandatory : No Calculator : None Response Time : N.A Think Time : N.A**

**Minimum Instruction Time : 0**

**Correct Marks : 1 Wrong Marks : 0.25**

Seven children F, G, P, K, N, T and S are sitting around a circle facing away from the centre but not necessarily in the same order. F is sitting immediate left of G and third to the right of K. N is sitting second to the left of T and immediate right of P. Who is sitting second to the left of G ?

**Options :**

4058597415. K

4058597416. T

4058597417. S

4058597418. N



**Question Number : 122 Question Id : 4058592229 Question Type : MCQ Option Shuffling : Yes**

**Is Question Mandatory : No Calculator : None Response Time : N.A Think Time : N.A**

**Minimum Instruction Time : 0**

**Correct Marks : 1 Wrong Marks : 0.25**

सात बच्चे F, G, P, K, N, T और S एक वृत् के चारों ओर केन्द्र के बाहरी ओर मुहँ कर के बैठे हैं, एवं उनका यह निश्चित क्रम नहीं है। F, G के ठीक बाँयी ओर तथा K के दाँयी ओर तीसरे स्थान पर है। N, T के बाँयी ओर दूसरे स्थान पर तथा P के ठीक दाँयी ओर है। G के बाँयी ओर दूसरे स्थान पर कौन है ?

**Options :**

4058597415. K

4058597416. T

4058597417. S

4058597418. N

**Question Number : 123 Question Id : 4058592230 Question Type : MCQ Option Shuffling : Yes**

**Is Question Mandatory : No Calculator : None Response Time : N.A Think Time : N.A**

**Minimum Instruction Time : 0**

**Correct Marks : 1 Wrong Marks : 0.25**

In a row of students, Tanuja is 9<sup>th</sup> from the left and Anuj is 19<sup>th</sup> from the right. If they interchange their positions, Tanuja becomes 16<sup>th</sup> from the left. How many students are there in the row ?

**Options :**

4058597419. 32

4058597420. 33

4058597421. 34

4058597422. 35

**Question Number : 123 Question Id : 4058592230 Question Type : MCQ Option Shuffling : Yes**

**Is Question Mandatory : No Calculator : None Response Time : N.A Think Time : N.A**

**Minimum Instruction Time : 0**

**Correct Marks : 1 Wrong Marks : 0.25**

विद्यार्थियों की एक पंक्ति में, तनुजा बाँये से 9 वें स्थान पर है तथा अनुज दाँये से 19 वें स्थान पर है। यदि वे अपना स्थान अदल-बदल करते हैं तो तनुजा बाँये से 16 वें स्थान पर आ जाती है। पंक्ति में कुल कितने विद्यार्थी हैं?

**Options :**

4058597419. 32

4058597420. 33

4058597421. 34

4058597422. 35

**Question Number : 124 Question Id : 4058592231 Question Type : MCQ Option Shuffling : Yes**

**Is Question Mandatory : No Calculator : None Response Time : N.A Think Time : N.A**

**Minimum Instruction Time : 0**

**Correct Marks : 1 Wrong Marks : 0.25**

A+B means A is the son of B

A-B means A is the brother of B

A×B means A is the mother of B

A÷B means A is the father of B

if 'B+S×T-L+G-M÷Q', How is M related to B ?

**Options :**

4058597423. Brother

4058597424. Father

4058597425. Father's brother

4058597426. Mother's father

**Question Number : 124 Question Id : 4058592231 Question Type : MCQ Option Shuffling : Yes**

**Is Question Mandatory : No Calculator : None Response Time : N.A Think Time : N.A**

**Minimum Instruction Time : 0**

**Correct Marks : 1 Wrong Marks : 0.25**

A+B का अर्थ है कि A, B का पुत्र है।

A-B का अर्थ है कि A, B का भाई है।

A×B का अर्थ है कि A, B की माँ है।

A÷B का अर्थ है कि A, B का पिता है।

यदि 'B+S×T-L+G-M÷Q' है, तो M का B से क्या संबंध है ?

**Options :**

4058597423. भाई

4058597424. पिता

4058597425. पिता का भाई

4058597426. माँ का पिता

**Question Number : 125 Question Id : 4058592232 Question Type : MCQ Option Shuffling : Yes**

**Is Question Mandatory : No Calculator : None Response Time : N.A Think Time : N.A**

**Minimum Instruction Time : 0**

**Correct Marks : 1 Wrong Marks : 0.25**

A statement is followed by two assumptions numbers (I) and (II). Consider the statement and the given assumptions and decide which of the assumptions is implicit in the statement ?

**Statement :** We must discourage wars even if it is known that the majority of the victims might have been creating a lot of trouble for the peace loving people.

**Assumptions :** (I) Some people create a lot of trouble for the remaining people who love peace and prosperity.

(II) Majority of the trouble creating people got killed in the wars.

**Options :**

4058597427. If only assumption (I) is implicit

4058597428. If only assumption (II) is implicit

4058597429. If both (I) and (II) are implicit

4058597430. If neither (I) nor (II) is implicit

**Question Number : 125 Question Id : 4058592232 Question Type : MCQ Option Shuffling : Yes**

**Is Question Mandatory : No Calculator : None Response Time : N.A Think Time : N.A**

**Minimum Instruction Time : 0**

**Correct Marks : 1 Wrong Marks : 0.25**

एक कथन के पश्चात् दो मान्यताएं (I) और (II) दी गई हैं। कथन और दी गई मान्यताओं पर विचार करे और निर्णय करें कि कौन सी मान्यता कथन में अंतर्निहित है ?

**कथन :** यह ज्ञात होते हुए भी कि अधिसंख्य पीड़ित शांति प्रिय लोगों के लिए अत्यधिक अशांति उत्पन्न कर रहे हैं, हमें युद्ध को हतोत्साहित करना चाहिए।

**मान्यता :** (I) कुछ लोग शांति और समृद्धि पसंद करने वाले शेष लोगों के लिए अत्यधिक अशांति उत्पन्न करते हैं।

(II) अशांति उत्पन्न करने वाले अधिसंख्य लोग युद्धों में मारे गए ।

**Options :**

4058597427. यदि केवल मान्यता (I) अंतर्निहित हैं।

4058597428. यदि केवल मान्यता (II) अंतर्निहित हैं।

4058597429. यदि दोनों मान्यताएं (I) और (II) अंतर्निहित हैं।

4058597430. यदि न तो मान्यता (I) और न ही मान्यता (II) अंतर्निहित है।

**Question Number : 126 Question Id : 4058592233 Question Type : MCQ Option Shuffling : Yes**

**Is Question Mandatory : No Calculator : None Response Time : N.A Think Time : N.A**

**Minimum Instruction Time : 0**

**Correct Marks : 1 Wrong Marks : 0.25**

A Statement is followed by three arguments (I), (II) and (III). Decide which of the following arguments is/are strong argument (s) :

**Statement :** Should road repair work in big cities be carried out only at night ?

**Arguments :** (I) No, this way the work will never get completed.

(II) Yes, the commuters will face a lot of problems due to repair work during the day.

(III) No, there will be unnecessary use of 'electricity' which will increase the cost of repair.

**Options :**

4058597431. Only (I) and (II) are strong

4058597432. Only (III) is strong

4058597433. Only (II) is strong

4058597434. Only (II) and (III) are strong

**Question Number : 126 Question Id : 4058592233 Question Type : MCQ Option Shuffling : Yes**

**Is Question Mandatory : No Calculator : None Response Time : N.A Think Time : N.A**

**Minimum Instruction Time : 0**

**Correct Marks : 1 Wrong Marks : 0.25**

एक कथन के पश्चात् तीन तर्क (I), (II) और (III) दिए गए हैं। निर्णय करें कि निम्नलिखित तर्कों में से कौन सशक्त तर्क है?

**कथन :** क्या बड़े नगरों में सड़क मरम्मत का कार्य केवल रात्रि में किया जाना चाहिए ?

**तर्क :** (I) नहीं, इस तरह मरम्मत कार्य कभी भी पूरा नहीं होगा।

(II) हाँ, दिन में मरम्मत कार्य के कारण यात्रियों को कई कठिनाइयों का सामना करना पड़ेगा।

(III) नहीं, बिजली का अनावश्यक उपयोग होगा जिससे मरम्मत की लागत बढ़ेगी ।

**Options :**

4058597431. केवल तर्क (I) और (II) सशक्त हैं।

4058597432. केवल तर्क (III) सशक्त है।

4058597433. केवल तर्क (II) सशक्त है।

4058597434. केवल तर्क (II) और (III) सशक्त हैं।

**Question Number : 127 Question Id : 4058592234 Question Type : MCQ Option Shuffling : Yes**

**Is Question Mandatory : No Calculator : None Response Time : N.A Think Time : N.A**

**Minimum Instruction Time : 0**

**Correct Marks : 1 Wrong Marks : 0.25**

In the question given below a statement is followed by two courses of action numbered (I) and (II). You have to assume everything in the statement to be true and on the basis of the information given in the statement, decide which of the suggested courses of action logically follow(s) for pursuing.

**Statement :** Some serious blunders were detected in the accounts section of a factory.

**Courses of action :** I. An efficient team of auditors should be appointed to check the accounts.

II. A show-cause notice should be issued to all the employees involved in the irregularity.

**Options :**

4058597435. If only I follows

4058597436. If only II follows

4058597437. If neither I nor II follows

4058597438. If both I and II follows

**Question Number : 127 Question Id : 4058592234 Question Type : MCQ Option Shuffling : Yes**

**Is Question Mandatory : No Calculator : None Response Time : N.A Think Time : N.A**

**Minimum Instruction Time : 0**

**Correct Marks : 1 Wrong Marks : 0.25**

नीचे दिए गए प्रश्न में एक कथन दिया गया है। उसके आधार पर I व II, दो कार्यावाइयाँ दी गई हैं। कथन को सत्य मानिए तथा दी गई जानकारी के आधार पर तय कीजिए कि दिए गए कार्यावाइयों में से कौन-सी तार्किक रूप से अनुपालन हेतु उचित है।

**कथन :** फैक्ट्री के लेखा अनुभाग में कुछ बेहद गंभीर चूकों का पता लगा है।

**कार्यावाइयाँ :** I लेखा की जाँच हेतु लेखा - परीक्षकों की एक सक्षम टीम को नियुक्त किया जाना चाहिए।

II. अनियमितता में शामिल सभी कर्मियों को कारण बताओ नोटिस जारी किया जाना चाहिए।

**Options :**

4058597435.

केवल I अनुपालन हेतु उचित है।

4058597436. केवल II अनुपालन हेतु उचित है।

4058597437. न I न ही II अनुपालन हेतु उचित है।

4058597438. I व II दोनों अनुपालन हेतु उचित हैं।

**Question Number : 128 Question Id : 4058592235 Question Type : MCQ Option Shuffling : Yes**

**Is Question Mandatory : No Calculator : None Response Time : N.A Think Time : N.A**

**Minimum Instruction Time : 0**

**Correct Marks : 1 Wrong Marks : 0.25**

In the given question below, which one of the interchanges in signs and numbers would make the given equation correct ?

$$(3 \div 4) + 2 = 2$$

**Options :**

4058597439. + and  $\div$ , 2 and 3

4058597440. + and  $\div$ , 2 and 4

4058597441. + and  $\div$ , 3 and 4

4058597442. No interchange, 3 and 4

**Question Number : 128 Question Id : 4058592235 Question Type : MCQ Option Shuffling : Yes**

**Is Question Mandatory : No Calculator : None Response Time : N.A Think Time : N.A**

**Minimum Instruction Time : 0**

**Correct Marks : 1 Wrong Marks : 0.25**



नीचे दिए गए प्रश्न में, कौन से प्रतीकों और संख्याओं में स्थान परिवर्तनों से दिया गया समीकरण सही हो जाएगा ?

$$(3 \div 4) + 2 = 2$$

**Options :**

4058597439. + और  $\div$ , 2 और 3

4058597440. + और  $\div$ , 2 और 4

4058597441. + और  $\div$ , 3 और 4

4058597442. कोई प्रतीक परिवर्तन नहीं, 3 एवं 4

**Question Number : 129 Question Id : 4058592236 Question Type : MCQ Option Shuffling : Yes**

**Is Question Mandatory : No Calculator : None Response Time : N.A Think Time : N.A**

**Minimum Instruction Time : 0**

**Correct Marks : 1 Wrong Marks : 0.25**

If 10<sup>th</sup> January 2012 is a Saturday, then what is the day on 26<sup>th</sup> March 2012 ?

**Options :**

4058597443. Monday

4058597444. Wednesday

4058597445. Friday

4058597446. Sunday

**Question Number : 129 Question Id : 4058592236 Question Type : MCQ Option Shuffling : Yes**

**Is Question Mandatory : No Calculator : None Response Time : N.A Think Time : N.A**

**Minimum Instruction Time : 0**

**Correct Marks : 1 Wrong Marks : 0.25**

यदि 10 जनवरी 2012 शनिवार है तो 26 मार्च 2012 को कौन सा दिन होगा ?

**Options :**

4058597443. सोमवार

4058597444. बुधवार

4058597445. शुक्रवार

4058597446. रविवार

**Question Number : 130 Question Id : 4058592237 Question Type : MCQ Option Shuffling : Yes**

**Is Question Mandatory : No Calculator : None Response Time : N.A Think Time : N.A**

**Minimum Instruction Time : 0**

**Correct Marks : 1 Wrong Marks : 0.25**

Find the wrong term in the following number series :

6, 15, 35, 77, 143, 231

**Options :**

4058597447. 143

4058597448. 231

4058597449. 35

4058597450. 77

**Question Number : 130 Question Id : 4058592237 Question Type : MCQ Option Shuffling : Yes**

**Is Question Mandatory : No Calculator : None Response Time : N.A Think Time : N.A**

**Minimum Instruction Time : 0**

**Correct Marks : 1 Wrong Marks : 0.25**

नीचे दी गई संख्या श्रृंखला में से गलत संख्या का पता लगाइए :

6, 15, 35, 77, 143, 231

**Options :**

4058597447. 143

4058597448. 231

4058597449. 35

4058597450. 77

## **B-Case Study**

<b>Section Id :</b>	405859125
<b>Section Number :</b>	3
<b>Section type :</b>	Online
<b>Mandatory or Optional :</b>	Mandatory
<b>Number of Questions :</b>	4
<b>Number of Questions to be attempted :</b>	4
<b>Section Marks :</b>	20
<b>Enable Mark as Answered Mark for Review and Clear Response :</b>	Yes
<b>Maximum Instruction Time :</b>	0
<b>Sub-Section Number :</b>	1
<b>Sub-Section Id :</b>	405859153
<b>Question Shuffling Allowed :</b>	No
<b>Is Section Default? :</b>	null

**Question Id : 4058592238 Question Type : COMPREHENSION Sub Question Shuffling Allowed :  
Yes Group Comprehension Questions : No Question Pattern Type : NonMatrix Calculator :  
None Response Time : N.A Think Time : N.A Minimum Instruction Time : 0**

**Question Numbers : (131 to 135)**

Question Label : Comprehension

Read the following passage and answer the questions that follow –

Private equity funds Argan Mauritius and TA Associates-backed Atria Convergence Technologies (ACT) has reported an operating revenue of ₹2,273 crore in FY23, up 5.4% from ₹2,156 crore in the previous fiscal.

The company's net profit increased 3.5% to ₹353 crore amid a 6% jump in expenses to ₹1,826 crore. Employee benefit expenses rose 15% to ₹556 crore.

ACT provides broadband and cable TV services in cities and towns in Karnataka, Andhra Pradesh, Telangana, Tamil Nadu and Delhi - NCR.

The company, which operates in over 20 cities with a dominant presence in southern India, has been expanding its presence in northern India in the last few years. Its revenue from the broadband segment jumped 6.4% to ₹2,081 crore while revenue from the cable TV segment decreased 3.5% to ₹192 crore.

The Bengaluru headquartered company's operating profit from the broadband segment surged 31% to ₹479 crore. It recorded an operating loss of ₹102 crore from the cable TV segment against an operating profit of ₹3.9 crore a year ago.

The company didn't provide any comment for the story.

It incurred a capital expenditure of ₹347 crore, down almost 20% from ₹467 crore. ACT's revenue has been expanding as a result of increased customer demand for data for entertainment, education and work-from-home purposes.

It has a strategic partnership with Netflix, allowing its users to access Netflix subscriptions as part of their internet bundles at no extra cost.

**Sub questions**

**Question Number : 131 Question Id : 4058592239 Question Type : MCQ Option Shuffling : Yes  
Is Question Mandatory : No Calculator : None Response Time : N.A Think Time : N.A  
Minimum Instruction Time : 0**

**Correct Marks : 1 Wrong Marks : 0.25**

The only place in north India where ACT has its presence currently is :

**Options :**

4058597451. Karnataka

4058597452. Telangana

4058597453. Bengaluru

4058597454. Delhi – NCR

**Question Number : 132 Question Id : 4058592240 Question Type : MCQ Option Shuffling : Yes**

**Is Question Mandatory : No Calculator : None Response Time : N.A Think Time : N.A**

**Minimum Instruction Time : 0**

**Correct Marks : 1 Wrong Marks : 0.25**

The Company which has dominant presence in southern India in broadband services is :

**Options :**

4058597455. Argan Mauritius

4058597456. TA Associates

4058597457. Atria Convergence Technologies

4058597458. Netflix

**Question Number : 133 Question Id : 4058592241 Question Type : MCQ Option Shuffling : Yes**

**Is Question Mandatory : No Calculator : None Response Time : N.A Think Time : N.A**

**Minimum Instruction Time : 0**

**Correct Marks : 1 Wrong Marks : 0.25**

ACT's broadband segment operating profit increased by :

**Options :**

4058597459. 5.4%

4058597460. 3.5%

4058597461. 6.4%

4058597462. 31%

**Question Number : 134 Question Id : 4058592242 Question Type : MCQ Option Shuffling : Yes**

**Is Question Mandatory : No Calculator : None Response Time : N.A Think Time : N.A**

**Minimum Instruction Time : 0**

**Correct Marks : 1 Wrong Marks : 0.25**

surge : increase :: fiscal : \_\_\_\_\_

**Options :**

4058597463. equity fund

4058597464. financial year

4058597465. employee benefit

4058597466. operating profit

**Question Number : 135 Question Id : 4058592243 Question Type : MCQ Option Shuffling : Yes**

**Is Question Mandatory : No Calculator : None Response Time : N.A Think Time : N.A**

**Minimum Instruction Time : 0**

**Correct Marks : 1 Wrong Marks : 0.25**

ACT is continually showing an increase in its revenue due to :

**Options :**

4058597467. increase in employee benefit expenses.

4058597468. its dominant presence in southern India and expansion in northern India.

4058597469. increase in its operating profit from the broadband segment.

4058597470. increased customer demand for data.

**Question Id : 4058592238 Question Type : COMPREHENSION Sub Question Shuffling Allowed :**

**Yes Group Comprehension Questions : No Question Pattern Type : NonMatrix Calculator :**

**None Response Time : N.A Think Time : N.A Minimum Instruction Time : 0**

**Question Numbers : (131 to 135)**

Question Label : Comprehension

Read the following passage and answer the questions that follow –

Private equity funds Argan Mauritius and TA Associates-backed Atria Convergence Technologies (ACT) has reported an operating revenue of ₹2,273 crore in FY23, up 5.4% from ₹2,156 crore in the previous fiscal.

The company's net profit increased 3.5% to ₹353 crore amid a 6% jump in expenses to ₹1,826 crore. Employee benefit expenses rose 15% to ₹556 crore.

ACT provides broadband and cable TV services in cities and towns in Karnataka, Andhra Pradesh, Telangana, Tamil Nadu and Delhi - NCR.

The company, which operates in over 20 cities with a dominant presence in southern India, has been expanding its presence in northern India in the last few years. Its revenue from the broadband segment jumped 6.4% to ₹2,081 crore while revenue from the cable TV segment decreased 3.5% to ₹192 crore.

The Bengaluru headquartered company's operating profit from the broadband segment surged 31% to ₹479 crore. It recorded an operating loss of ₹102 crore from the cable TV segment against an operating profit of ₹3.9 crore a year ago.

The company didn't provide any comment for the story.

It incurred a capital expenditure of ₹347 crore, down almost 20% from ₹467 crore. ACT's revenue has been expanding as a result of increased customer demand for data for entertainment, education and work-from-home purposes.

It has a strategic partnership with Netflix, allowing its users to access Netflix subscriptions as part of their internet bundles at no extra cost.

**Sub questions**

**Question Number : 131 Question Id : 4058592239 Question Type : MCQ Option Shuffling : Yes**

**Is Question Mandatory : No Calculator : None Response Time : N.A Think Time : N.A**

**Minimum Instruction Time : 0**

**Correct Marks : 1 Wrong Marks : 0.25**

The only place in north India where ACT has its presence currently is :

**Options :**

4058597451. Karnataka

4058597452. Telangana

4058597453. Bengaluru

4058597454. Delhi – NCR

**Question Number : 132 Question Id : 4058592240 Question Type : MCQ Option Shuffling : Yes**

**Is Question Mandatory : No Calculator : None Response Time : N.A Think Time : N.A**

**Minimum Instruction Time : 0**

**Correct Marks : 1 Wrong Marks : 0.25**

The Company which has dominant presence in southern India in broadband services is :

**Options :**

4058597455. Argan Mauritius

4058597456. TA Associates

4058597457. Atria Convergence Technologies

4058597458. Netflix

**Question Number : 133 Question Id : 4058592241 Question Type : MCQ Option Shuffling : Yes**



**Is Question Mandatory : No Calculator : None Response Time : N.A Think Time : N.A**

**Minimum Instruction Time : 0**

**Correct Marks : 1 Wrong Marks : 0.25**

ACT's broadband segment operating profit increased by :

**Options :**

4058597459. 5.4%

4058597460. 3.5%

4058597461. 6.4%

4058597462. 31%

**Question Number : 134 Question Id : 4058592242 Question Type : MCQ Option Shuffling : Yes**

**Is Question Mandatory : No Calculator : None Response Time : N.A Think Time : N.A**

**Minimum Instruction Time : 0**

**Correct Marks : 1 Wrong Marks : 0.25**

surge : increase :: fiscal : \_\_\_\_\_

**Options :**

4058597463. equity fund

4058597464. financial year

4058597465. employee benefit

4058597466. operating profit

**Question Number : 135 Question Id : 4058592243 Question Type : MCQ Option Shuffling : Yes**

**Is Question Mandatory : No Calculator : None Response Time : N.A Think Time : N.A**

**Minimum Instruction Time : 0**

**Correct Marks : 1 Wrong Marks : 0.25**

ACT is continually showing an increase in its revenue due to :

**Options :**

4058597467. increase in employee benefit expenses.

4058597468. its dominant presence in southern India and expansion in northern India.

4058597469. increase in its operating profit from the broadband segment.

4058597470. increased customer demand for data.

<b>Sub-Section Number :</b>	2
<b>Sub-Section Id :</b>	405859154
<b>Question Shuffling Allowed :</b>	No
<b>Is Section Default? :</b>	null

**Question Id : 4058592244 Question Type : COMPREHENSION Sub Question Shuffling Allowed :**

**Yes Group Comprehension Questions : No Question Pattern Type : NonMatrix Calculator :**

**None Response Time : N.A Think Time : N.A Minimum Instruction Time : 0**

**Question Numbers : (136 to 140)**

Question Label : Comprehension

Read the given passage and answer the questions that follow :-

### FEDBANK FINANCIAL SERVICES :

(Fedfina) on Friday said it plans to raise up to ₹1,092-crore through an initial public offering opening on November 22.

The Reserve Bank's circular increasing the risk weights on unsecured lending will increase the borrowing costs, but the negative market sentiment will not impact the offering, managing director and chief executive officer Anil Kothuri told reporters.

Fedfina, a subsidiary of south based Federal Bank, has set a price band of ₹133-140 per share for the issue which comes amid a raft of other issuances before the holiday season and the next year's general elections. The issue will open for three days starting November 22.

The offer consists of fresh issue of ₹600 crore, while the rest is offer for sale under which existing shareholders, including Federal Bank and homegrown private equity fund True North are exiting.

Kothuri said that post issue, Federal Bank's overall holding will come down to 61% from the present 73%, while True North's holding will come down to 8.5% from the present 25%.

The new investors will hold over 31% of shares post - issue. True North had first invested the company in November 2018 at ₹42 per share, while the last fund raising by the company was a rights issue in November 2021, when shares were subscribed at ₹70, Kothuri said.

### Sub questions

**Question Number : 136 Question Id : 4058592245 Question Type : MCQ Option Shuffling : Yes**

**Is Question Mandatory : No Calculator : None Response Time : N.A Think Time : N.A**

**Minimum Instruction Time : 0**

**Correct Marks : 1 Wrong Marks : 0.25**

Fedfina is hopeful that :-

**Options :**

4058597471. the Reserve Bank's circular increasing the risk weights on unsecured lending will increase the borrowing cost.

4058597472. the negative market sentiment will not impact the initial public offering.

4058597473. post issue, Federal Bank's overall holding will come down to 61%.

4058597474. the issue will open for three days starting November 22.

**Question Number : 137 Question Id : 4058592246 Question Type : MCQ Option Shuffling : Yes**

**Is Question Mandatory : No Calculator : None Response Time : N.A Think Time : N.A**

**Minimum Instruction Time : 0**

**Correct Marks : 1 Wrong Marks : 0.25**

The factors that have contributed towards companies taking out IPOs are –

**Options :**

4058597475. The Reserve Bank's circular

4058597476. Nil impact of the negative market sentiment.

4058597477. Holding season and next year's general elections.

4058597478. A desire to get new investors.

**Question Number : 138 Question Id : 4058592247 Question Type : MCQ Option Shuffling : Yes**

**Is Question Mandatory : No Calculator : None Response Time : N.A Think Time : N.A**

**Minimum Instruction Time : 0**

**Correct Marks : 1 Wrong Marks : 0.25**

Post the issue, Federal Bank's overall holding –

**Options :**

4058597479. will reduce by 12%.

4058597480. will come down to 73%

4058597481. will come down to 61%

4058597482. will amount to ₹ 600 crore

**Question Number : 139 Question Id : 4058592248 Question Type : MCQ Option Shuffling : Yes**

**Is Question Mandatory : No Calculator : None Response Time : N.A Think Time : N.A**

**Minimum Instruction Time : 0**

**Correct Marks : 1 Wrong Marks : 0.25**

Choose the appropriate antonym for 'UNSECURED' as it appears in context.

**Options :**

4058597483. secret

4058597484. pledged

4058597485. gallant

4058597486. concealed

**Question Number : 140 Question Id : 4058592249 Question Type : MCQ Option Shuffling : Yes**

**Is Question Mandatory : No Calculator : None Response Time : N.A Think Time : N.A**

**Minimum Instruction Time : 0**

**Correct Marks : 1 Wrong Marks : 0.25**

Give one word for the following group of words –

'a business company that is owned or controlled by another larger company.'

**Options :**

4058597487. subsidiary

4058597488. private equity

4058597489. holding

4058597490. raft

**Question Id : 4058592244 Question Type : COMPREHENSION Sub Question Shuffling Allowed :**

**Yes Group Comprehension Questions : No Question Pattern Type : NonMatrix Calculator :**

**None Response Time : N.A Think Time : N.A Minimum Instruction Time : 0**

**Question Numbers : (136 to 140)**

Question Label : Comprehension

Read the given passage and answer the questions that follow :-

**FEDBANK FINANCIAL SERVICES :**

(Fedfina) on Friday said it plans to raise up to ₹1,092-crore through an initial public offering opening on November 22.

The Reserve Bank's circular increasing the risk weights on unsecured lending will increase the borrowing costs, but the negative market sentiment will not impact the offering, managing director and chief executive officer Anil Kothuri told reporters.

Fedfina, a subsidiary of south based Federal Bank, has set a price band of ₹133-140 per share for the issue which comes amid a raft of other issuances before the holiday season and the next year's general elections. The issue will open for three days starting November 22.

The offer consists of fresh issue of ₹600 crore, while the rest is offer for sale under which existing shareholders, including Federal Bank and homegrown private equity fund True North are exiting.

Kothuri said that post issue, Federal Bank's overall holding will come down to 61% from the present 73%, while True North's holding will come down to 8.5% from the present 25%.

The new investors will hold over 31% of shares post - issue. True North had first invested the company in November 2018 at ₹42 per share, while the last fund raising by the company was a rights issue in November 2021, when shares were subscribed at ₹70, Kothuri said.

**Sub questions**

**Question Number : 136 Question Id : 4058592245 Question Type : MCQ Option Shuffling : Yes**

**Is Question Mandatory : No Calculator : None Response Time : N.A Think Time : N.A**

**Minimum Instruction Time : 0**

**Correct Marks : 1 Wrong Marks : 0.25**

Fedfina is hopeful that :-

**Options :**

4058597471. the Reserve Bank's circular increasing the risk weights on unsecured lending will increase the borrowing cost.

4058597472. the negative market sentiment will not impact the initial public offering.

4058597473. post issue, Federal Bank's overall holding will come down to 61%.

4058597474. the issue will open for three days starting November 22.

**Question Number : 137 Question Id : 4058592246 Question Type : MCQ Option Shuffling : Yes**

**Is Question Mandatory : No Calculator : None Response Time : N.A Think Time : N.A**

**Minimum Instruction Time : 0**

**Correct Marks : 1 Wrong Marks : 0.25**

The factors that have contributed towards companies taking out IPOs are –

**Options :**

4058597475. The Reserve Bank's circular

4058597476. Nil impact of the negative market sentiment.

4058597477. Holding season and next year's general elections.

4058597478. A desire to get new investors.

**Question Number : 138 Question Id : 4058592247 Question Type : MCQ Option Shuffling : Yes**

**Is Question Mandatory : No Calculator : None Response Time : N.A Think Time : N.A**

**Minimum Instruction Time : 0**

**Correct Marks : 1 Wrong Marks : 0.25**

Post the issue, Federal Bank's overall holding –

**Options :**

4058597479. will reduce by 12%.

4058597480. will come down to 73%

4058597481. will come down to 61%

4058597482. will amount to ₹ 600 crore

**Question Number : 139 Question Id : 4058592248 Question Type : MCQ Option Shuffling : Yes**

**Is Question Mandatory : No Calculator : None Response Time : N.A Think Time : N.A**

**Minimum Instruction Time : 0**

**Correct Marks : 1 Wrong Marks : 0.25**

Choose the appropriate antonym for 'UNSECURED' as it appears in context.

**Options :**

4058597483. secret

4058597484. pledged

4058597485. gallant

4058597486. concealed

**Question Number : 140 Question Id : 4058592249 Question Type : MCQ Option Shuffling : Yes**

**Is Question Mandatory : No Calculator : None Response Time : N.A Think Time : N.A**

**Minimum Instruction Time : 0**

**Correct Marks : 1 Wrong Marks : 0.25**

Give one word for the following group of words –

'a business company that is owned or controlled by another larger company.'

**Options :**



4058597487. subsidiary

4058597488. private equity

4058597489. holding

4058597490. raft

**Sub-Section Number :** 3  
**Sub-Section Id :** 405859155  
**Question Shuffling Allowed :** No  
**Is Section Default? :** null

**Question Id : 4058592250 Question Type : COMPREHENSION Sub Question Shuffling Allowed :  
Yes Group Comprehension Questions : No Question Pattern Type : NonMatrix Calculator :  
None Response Time : N.A Think Time : N.A Minimum Instruction Time : 0**

**Question Numbers : (141 to 145)**

Question Label : Comprehension

Read the following passage and answer the questions that follow –

In a boost for Swiggy, its US-based investor Invesco has yet again marked up the startup's valuation. Regulatory filings made with the US SEC showed that the asset manager valued the food delivery company at about \$8.3 billion as of October 31, 2023. This is higher than the valuation of \$7.8 billion that Invesco had ascribed the Bengaluru-based firm in its earlier mark up at the end of July.

With this recent mark up, Invesco has raised the startup's valuation for a second straight time. The firm held about 2% stake in Swiggy as of November 2023, data sourced from market research firm Tracxn showed. The valuation boost is a positive development for Swiggy which is understood be preparing for public market debut. The latest valuation, is however, lower than the firm's peak valuation of \$10.7 billion at which it had raised \$700 million from investors led by Invesco in January 2022.

Amid a funding winter and strict investor vigilance, Swiggy had faced valuation mark downs by investors last year with Invesco having slashed its valuation to \$5.5 billion (as of January 2023).

**Sub questions**

**Question Number : 141 Question Id : 4058592251 Question Type : MCQ Option Shuffling : Yes**

**Is Question Mandatory : No Calculator : None Response Time : N.A Think Time : N.A**

**Minimum Instruction Time : 0**

**Correct Marks : 1 Wrong Marks : 0.25**

The factor that will contribute positively to Swiggy's public market debut is –

**Options :**

4058597491. raising funds from investors

4058597492. regulatory filings made with the US SEC.

4058597493. strict investor vigilance

4058597494. valuation mark up

**Question Number : 142 Question Id : 4058592252 Question Type : MCQ Option Shuffling : Yes**

**Is Question Mandatory : No Calculator : None Response Time : N.A Think Time : N.A**

**Minimum Instruction Time : 0**

**Correct Marks : 1 Wrong Marks : 0.25**

Another term used for Invesco is the passage is –

**Options :**

4058597495. food delivery company

4058597496. startup

4058597497. asset manager

4058597498. market research firm

**Question Number : 143 Question Id : 4058592253 Question Type : MCQ Option Shuffling : Yes**

**Is Question Mandatory : No Calculator : None Response Time : N.A Think Time : N.A**

**Minimum Instruction Time : 0**

**Correct Marks : 1 Wrong Marks : 0.25**

Invesco invested in Swiggy in –

**Options :**

4058597499. October 2023

4058597500. November 2023

4058597501. January 2022

4058597502. January 2023

**Question Number : 144 Question Id : 4058592254 Question Type : MCQ Option Shuffling : Yes**

**Is Question Mandatory : No Calculator : None Response Time : N.A Think Time : N.A**

**Minimum Instruction Time : 0**

**Correct Marks : 1 Wrong Marks : 0.25**

The valuation of Swiggy when it took investments was –

**Options :**

4058597503. \$ 8.3 billion

4058597504. \$ 7.8 billion

4058597505. \$ 10.7 billion

4058597506. \$ 5.5 billion

**Question Number : 145 Question Id : 4058592255 Question Type : MCQ Option Shuffling : Yes**

**Is Question Mandatory : No Calculator : None Response Time : N.A Think Time : N.A**

**Minimum Instruction Time : 0**

**Correct Marks : 1 Wrong Marks : 0.25**

The closest synonym for 'vigilance' is –

**Options :**

4058597507. watchfulness

4058597508. valuation

4058597509. interest

4058597510. resilience

**Question Id : 4058592250 Question Type : COMPREHENSION Sub Question Shuffling Allowed :**

**Yes Group Comprehension Questions : No Question Pattern Type : NonMatrix Calculator :**

**None Response Time : N.A Think Time : N.A Minimum Instruction Time : 0**

**Question Numbers : (141 to 145)**

Question Label : Comprehension

Read the following passage and answer the questions that follow –

In a boost for Swiggy, its US-based investor Invesco has yet again marked up the startup's valuation. Regulatory filings made with the US SEC showed that the asset manager valued the food delivery company at about \$8.3 billion as of October 31, 2023. This is higher than the valuation of \$7.8 billion that Invesco had ascribed the Bengaluru-based firm in its earlier mark up at the end of July.

With this recent mark up, Invesco has raised the startup's valuation for a second straight time. The firm held about 2% stake in Swiggy as of November 2023, data sourced from market research firm Tracxn showed. The valuation boost is a positive development for Swiggy which is understood be preparing for public market debut. The latest valuation, is however, lower than the firm's peak valuation of \$10.7 billion at which it had raised \$700 million from investors led by Invesco in January 2022.

Amid a funding winter and strict investor vigilance, Swiggy had faced valuation mark downs by investors last year with Invesco having slashed its valuation to \$5.5 billion (as of January 2023).

**Sub questions**

**Question Number : 141 Question Id : 4058592251 Question Type : MCQ Option Shuffling : Yes**

**Is Question Mandatory : No Calculator : None Response Time : N.A Think Time : N.A**

**Minimum Instruction Time : 0**

**Correct Marks : 1 Wrong Marks : 0.25**

The factor that will contribute positively to Swiggy's public market debut is –

**Options :**

4058597491. raising funds from investors

4058597492. regulatory filings made with the US SEC.

4058597493. strict investor vigilance

4058597494. valuation mark up

**Question Number : 142 Question Id : 4058592252 Question Type : MCQ Option Shuffling : Yes**

**Is Question Mandatory : No Calculator : None Response Time : N.A Think Time : N.A**

**Minimum Instruction Time : 0**

**Correct Marks : 1 Wrong Marks : 0.25**

Another term used for Invesco is the passage is –

**Options :**

4058597495. food delivery company

4058597496. startup

4058597497. asset manager

4058597498. market research firm

**Question Number : 143 Question Id : 4058592253 Question Type : MCQ Option Shuffling : Yes**

**Is Question Mandatory : No Calculator : None Response Time : N.A Think Time : N.A**

**Minimum Instruction Time : 0**

**Correct Marks : 1 Wrong Marks : 0.25**

Invesco invested in Swiggy in –

**Options :**

4058597499. October 2023

4058597500. November 2023

4058597501. January 2022

4058597502. January 2023

**Question Number : 144 Question Id : 4058592254 Question Type : MCQ Option Shuffling : Yes**

**Is Question Mandatory : No Calculator : None Response Time : N.A Think Time : N.A**

**Minimum Instruction Time : 0**

**Correct Marks : 1 Wrong Marks : 0.25**

The valuation of Swiggy when it took investments was –

**Options :**

4058597503. \$ 8.3 billion

4058597504. \$ 7.8 billion

4058597505. \$ 10.7 billion

4058597506. \$ 5.5 billion

**Question Number : 145 Question Id : 4058592255 Question Type : MCQ Option Shuffling : Yes**

**Is Question Mandatory : No Calculator : None Response Time : N.A Think Time : N.A**

**Minimum Instruction Time : 0**

**Correct Marks : 1 Wrong Marks : 0.25**

The closest synonym for 'vigilance' is –

**Options :**

4058597507. watchfulness

4058597508. valuation

4058597509. interest

4058597510. resilience

<b>Sub-Section Number :</b>	4
<b>Sub-Section Id :</b>	405859156
<b>Question Shuffling Allowed :</b>	No
<b>Is Section Default? :</b>	null

**Question Id : 4058592256 Question Type : COMPREHENSION Sub Question Shuffling Allowed :**

**Yes Group Comprehension Questions : No Question Pattern Type : NonMatrix Calculator :**

**None Response Time : N.A Think Time : N.A Minimum Instruction Time : 0**

**Question Numbers : (146 to 150)**

**Question Label : Comprehension**

Read the given passage and answer the question that follow -

## ARCHIES KNOWN FOR

popularising greeting cards in the 90's, is now banking on quick commerce platforms such as Zepto, Swiggy's Instamart and Zomato's Blinkit to drive a revival in sales. The pandemic had pushed the gifting retailer into losses.

"It's going to be a game changer for our brand. We are already available on Blinkit and expect to finalise talks with other quick commerce players by the fourth quarter." Varun Moolchandani, executive director, Archies, said.

Archies began listing its products on Blinkit about two–three months ago and has so far seen strong sales on the platform, particularly for its paper products such as wrapping paper, gifting envelopes and bags, and greeting cards. "We have never seen this kind of sales numbers for our products," he added.

With competition intensifying in the sector, quick commerce players are aggressively expanding their category offerings to attract more users. Legacy brands such as Archies are cashing in on this rivalry and getting their products closer and faster to customers.

Once famous for its Valentine's Day greeting cards, Archies has been struggling for many years to attract the younger generation to its stores, who prefer social media posts and other digital alternatives. Moreover, the pandemic had worsened the company's financials as lockdowns had forced it to shut stores, some even permanently.

Archies now runs about 300 physical stores across India, including company owned ones and franchises. Prior to the pandemic, it had 450 retail stores.

Between FY20 and FY22 the company had posted a total net loss of ₹ 12.2 crore, while the revenue had nearly halved during the period.

The company is also making investments to increase the number of retail stores and franchises. "Our major focus will be high street and north India for at least a year and a half. For both company - owned stores and franchises, our idea is to capture the tier 2 and 3 markets," Moolchandani said.

The company plans to add at least 25-30 physical stores a year and increase its partnerships with third-party brands, which sell their gifting category products through Archies. At present, personal care brands such as Mamaearth and mCaffeine sell their gift packs through Archies outlets and their website.

"We will not achieve the numbers which we had 15 years ago, but we will try to innovate to have new and unique greeting cards so that people are excited to see our products," he added.

## Sub questions

Question Number : 146 Question Id : 4058592257 Question Type : MCQ Option Shuffling : Yes

Is Question Mandatory : No Calculator : None Response Time : N.A Think Time : N.A

Minimum Instruction Time : 0

Correct Marks : 1 Wrong Marks : 0.25

Archies cards can be purchased presently at –



**Options :**

4058597511. Zepto

4058597512. Instamart

4058597513. Swiggy

4058597514. Blinkit

**Question Number : 147 Question Id : 4058592258 Question Type : MCQ Option Shuffling : Yes**

**Is Question Mandatory : No Calculator : None Response Time : N.A Think Time : N.A**

**Minimum Instruction Time : 0**

**Correct Marks : 1 Wrong Marks : 0.25**

Archies wants to take advantage of –

**Options :**

4058597515. strong sales of its paper products.

4058597516. rivalry between quick commerce players.

4058597517. its status as a legacy brand.

4058597518. its investments to increase the number of retail stores and franchises.

**Question Number : 148 Question Id : 4058592259 Question Type : MCQ Option Shuffling : Yes**

**Is Question Mandatory : No Calculator : None Response Time : N.A Think Time : N.A**

**Minimum Instruction Time : 0**

**Correct Marks : 1 Wrong Marks : 0.25**

Archies will be available on many quick commerce platforms by –

**Options :**

4058597519. January onwards

4058597520. April onwards

4058597521. July onwards

4058597522. October onwards

**Question Number : 149 Question Id : 4058592260 Question Type : MCQ Option Shuffling : Yes**

**Is Question Mandatory : No Calculator : None Response Time : N.A Think Time : N.A**

**Minimum Instruction Time : 0**

**Correct Marks : 1 Wrong Marks : 0.25**

Archies has a third party brand partnership with

**Options :**

4058597523. Blinkit and Zepto

4058597524. Instamart and Blinkit

4058597525. Retail stores and franchises

4058597526. Mamaearth and mCaffeine

**Question Number : 150 Question Id : 4058592261 Question Type : MCQ Option Shuffling : Yes**

**Is Question Mandatory : No Calculator : None Response Time : N.A Think Time : N.A**

**Minimum Instruction Time : 0**

**Correct Marks : 1 Wrong Marks : 0.25**

Choose one word for the given group of words :

‘done as part of a plan that is meant to achieve a particular purpose or to gain an advantage.’

**Options :**

4058597527. equity

4058597528. strategic

4058597529. benefit

4058597530. subscription

**Question Id : 4058592256 Question Type : COMPREHENSION Sub Question Shuffling Allowed :**

**Yes Group Comprehension Questions : No Question Pattern Type : NonMatrix Calculator :**

**None Response Time : N.A Think Time : N.A Minimum Instruction Time : 0**

**Question Numbers : (146 to 150)**

Question Label : Comprehension

Read the given passage and answer the question that follow -

## ARCHIES KNOWN FOR

popularising greeting cards in the 90's, is now banking on quick commerce platforms such as Zepto, Swiggy's Instamart and Zomato's Blinkit to drive a revival in sales. The pandemic had pushed the gifting retailer into losses.

"It's going to be a game changer for our brand. We are already available on Blinkit and expect to finalise talks with other quick commerce players by the fourth quarter." Varun Moolchandani, executive director, Archies, said.

Archies began listing its products on Blinkit about two–three months ago and has so far seen strong sales on the platform, particularly for its paper products such as wrapping paper, gifting envelopes and bags, and greeting cards. "We have never seen this kind of sales numbers for our products," he added.

With competition intensifying in the sector, quick commerce players are aggressively expanding their category offerings to attract more users. Legacy brands such as Archies are cashing in on this rivalry and getting their products closer and faster to customers.

Once famous for its Valentine's Day greeting cards, Archies has been struggling for many years to attract the younger generation to its stores, who prefer social media posts and other digital alternatives. Moreover, the pandemic had worsened the company's financials as lockdowns had forced it to shut stores, some even permanently.

Archies now runs about 300 physical stores across India, including company owned ones and franchises. Prior to the pandemic, it had 450 retail stores.

Between FY20 and FY22 the company had posted a total net loss of ₹ 12.2 crore, while the revenue had nearly halved during the period.

The company is also making investments to increase the number of retail stores and franchises. "Our major focus will be high street and north India for at least a year and a half. For both company - owned stores and franchises, our idea is to capture the tier 2 and 3 markets," Moolchandani said.

The company plans to add at least 25-30 physical stores a year and increase its partnerships with third-party brands, which sell their gifting category products through Archies. At present, personal care brands such as Mamaearth and mCaffeine sell their gift packs through Archies outlets and their website.

"We will not achieve the numbers which we had 15 years ago, but we will try to innovate to have new and unique greeting cards so that people are excited to see our products," he added.

## Sub questions

Question Number : 146 Question Id : 4058592257 Question Type : MCQ Option Shuffling : Yes

Is Question Mandatory : No Calculator : None Response Time : N.A Think Time : N.A

Minimum Instruction Time : 0

Correct Marks : 1 Wrong Marks : 0.25

Archies cards can be purchased presently at –

**Options :**

4058597511. Zepto

4058597512. Instamart

4058597513. Swiggy

4058597514. Blinkit

**Question Number : 147 Question Id : 4058592258 Question Type : MCQ Option Shuffling : Yes**

**Is Question Mandatory : No Calculator : None Response Time : N.A Think Time : N.A**

**Minimum Instruction Time : 0**

**Correct Marks : 1 Wrong Marks : 0.25**

Archies wants to take advantage of –

**Options :**

4058597515. strong sales of its paper products.

4058597516. rivalry between quick commerce players.

4058597517. its status as a legacy brand.

4058597518. its investments to increase the number of retail stores and franchises.

**Question Number : 148 Question Id : 4058592259 Question Type : MCQ Option Shuffling : Yes**

**Is Question Mandatory : No Calculator : None Response Time : N.A Think Time : N.A**

**Minimum Instruction Time : 0**

**Correct Marks : 1 Wrong Marks : 0.25**

Archies will be available on many quick commerce platforms by –

**Options :**

4058597519. January onwards

4058597520. April onwards

4058597521. July onwards

4058597522. October onwards

**Question Number : 149 Question Id : 4058592260 Question Type : MCQ Option Shuffling : Yes**

**Is Question Mandatory : No Calculator : None Response Time : N.A Think Time : N.A**

**Minimum Instruction Time : 0**

**Correct Marks : 1 Wrong Marks : 0.25**

Archies has a third party brand partnership with

**Options :**

4058597523. Blinkit and Zepto

4058597524. Instamart and Blinkit

4058597525. Retail stores and franchises

4058597526. Mamaearth and mCaffeine

**Question Number : 150 Question Id : 4058592261 Question Type : MCQ Option Shuffling : Yes**

**Is Question Mandatory : No Calculator : None Response Time : N.A Think Time : N.A**

**Minimum Instruction Time : 0**

**Correct Marks : 1 Wrong Marks : 0.25**

Choose one word for the given group of words :

‘done as part of a plan that is meant to achieve a particular purpose or to gain an advantage.’

**Options :**

4058597527. equity

4058597528. strategic

4058597529. benefit

4058597530. subscription

# National Testing Agency

**Question Paper Name :** MDES 05th Feb 2024 Shift 1  
**Subject Name :** MDES  
**Creation Date :** 2024-02-05 17:53:44  
**Duration :** 120  
**Total Marks :** 120  
**Display Marks:** Yes

## MDES

**Group Number :** 1  
**Group Id :** 40585918  
**Group Maximum Duration :** 0  
**Group Minimum Duration :** 120  
**Show Attended Group? :** No  
**Edit Attended Group? :** No  
**Break time :** 0  
**Group Marks :** 120  
**Is this Group for Examiner? :** No  
**Examiner permission :** Cant View  
**Show Progress Bar? :** No

## Communication Ability

**Section Id :** 40585998  
**Section Number :** 1



<b>Section type :</b>	Online
<b>Mandatory or Optional :</b>	Mandatory
<b>Number of Questions :</b>	30
<b>Number of Questions to be attempted :</b>	30
<b>Section Marks :</b>	30
<b>Enable Mark as Answered Mark for Review and Clear Response :</b>	Yes
<b>Maximum Instruction Time :</b>	0
<b>Sub-Section Number :</b>	1
<b>Sub-Section Id :</b>	40585998
<b>Question Shuffling Allowed :</b>	Yes
<b>Is Section Default? :</b>	null

**Question Number : 1 Question Id : 4058591555 Question Type : MCQ Option Shuffling : Yes Is Question Mandatory : No Calculator : None Response Time : N.A Think Time : N.A Minimum Instruction Time : 0**

**Correct Marks : 1 Wrong Marks : 0.25**

Choose the appropriate phrase to replace the underlined part -

If you are thinking about investing, isn't make sense to find an experienced financial advisor?

**Options :**

4058594851. is it not making

4058594852. doesn't it make

4058594853. does it make

4058594854. is it making

**Question Number : 1 Question Id : 4058591555 Question Type : MCQ Option Shuffling : Yes Is**

**Question Mandatory : No Calculator : None Response Time : N.A Think Time : N.A Minimum**

**Instruction Time : 0**

**Correct Marks : 1 Wrong Marks : 0.25**

Choose the appropriate phrase to replace the underlined part -

If you are thinking about investing, isn't make sense to find an experienced financial advisor?

**Options :**

4058594851. is it not making

4058594852. doesn't it make

4058594853. does it make

4058594854. is it making

**Question Number : 2 Question Id : 4058591556 Question Type : MCQ Option Shuffling : Yes Is**

**Question Mandatory : No Calculator : None Response Time : N.A Think Time : N.A Minimum**

**Instruction Time : 0**

**Correct Marks : 1 Wrong Marks : 0.25**

Choose the appropriate phrase to replace the underlined part -

The old man looked with caution before he crossed the busy street.

**Options :**

4058594855. cautiously before

4058594856. cautiously when

4058594857. at cautiously when

4058594858. with caution on

**Question Number : 2 Question Id : 4058591556 Question Type : MCQ Option Shuffling : Yes Is Question Mandatory : No Calculator : None Response Time : N.A Think Time : N.A Minimum Instruction Time : 0**

**Correct Marks : 1 Wrong Marks : 0.25**

Choose the appropriate phrase to replace the underlined part -

The old man looked with caution before he crossed the busy street.

**Options :**

4058594855. cautiously before

4058594856. cautiously when

4058594857. at cautiously when

4058594858. with caution on

**Question Number : 3 Question Id : 4058591557 Question Type : MCQ Option Shuffling : Yes Is Question Mandatory : No Calculator : None Response Time : N.A Think Time : N.A Minimum Instruction Time : 0**

**Correct Marks : 1 Wrong Marks : 0.25**

Choose the appropriate phrase to replace the underlined part.

The new bank clerk kicked up a row with a senior colleague.

**Options :**

4058594859. out a

4058594860. on to a

4058594861. off a

4058594862. in a

**Question Number : 3 Question Id : 4058591557 Question Type : MCQ Option Shuffling : Yes Is Question Mandatory : No Calculator : None Response Time : N.A Think Time : N.A Minimum Instruction Time : 0**

**Correct Marks : 1 Wrong Marks : 0.25**

Choose the appropriate phrase to replace the underlined part.

The new bank clerk kicked up a row with a senior colleague.

**Options :**

4058594859. out a

4058594860. on to a

4058594861. off a

4058594862. in a

**Question Number : 4 Question Id : 4058591558 Question Type : MCQ Option Shuffling : Yes Is Question Mandatory : No Calculator : None Response Time : N.A Think Time : N.A Minimum Instruction Time : 0**

**Correct Marks : 1 Wrong Marks : 0.25**

Choose the word with nearly the same meaning as the given word :

NADIR

**Options :**

4058594863. asylum

4058594864. heaven

4058594865. depth

4058594866. hell

**Question Number : 4 Question Id : 4058591558 Question Type : MCQ Option Shuffling : Yes Is**

**Question Mandatory : No Calculator : None Response Time : N.A Think Time : N.A Minimum**

**Instruction Time : 0**

**Correct Marks : 1 Wrong Marks : 0.25**

Choose the word with nearly the same meaning as the given word :

NADIR

**Options :**

4058594863. asylum

4058594864. heaven

4058594865. depth

4058594866. hell

**Question Number : 5 Question Id : 4058591559 Question Type : MCQ Option Shuffling : Yes Is**

**Question Mandatory : No Calculator : None Response Time : N.A Think Time : N.A Minimum**

**Instruction Time : 0**

**Correct Marks : 1 Wrong Marks : 0.25**

Choose the word with nearly the same meaning as the given word :

ABSTRUSE

**Options :**

4058594867. dangerous

4058594868. obscure

4058594869. impracticable

4058594870. irrational

**Question Number : 5 Question Id : 4058591559 Question Type : MCQ Option Shuffling : Yes Is Question Mandatory : No Calculator : None Response Time : N.A Think Time : N.A Minimum Instruction Time : 0**

**Correct Marks : 1 Wrong Marks : 0.25**

Choose the word with nearly the same meaning as the given word :

ABSTRUSE

**Options :**

4058594867. dangerous

4058594868. obscure

4058594869. impracticable

4058594870. irrational

**Question Number : 6 Question Id : 4058591560 Question Type : MCQ Option Shuffling : Yes Is Question Mandatory : No Calculator : None Response Time : N.A Think Time : N.A Minimum Instruction Time : 0**

**Correct Marks : 1 Wrong Marks : 0.25**

Choose the word with nearly the same meaning as the given word :

PARANOID

**Options :**

4058594871. flattered by

4058594872. influenced by

4058594873. obsessed with

4058594874. upset by

**Question Number : 6 Question Id : 4058591560 Question Type : MCQ Option Shuffling : Yes Is  
Question Mandatory : No Calculator : None Response Time : N.A Think Time : N.A Minimum  
Instruction Time : 0**

**Correct Marks : 1 Wrong Marks : 0.25**

Choose the word with nearly the same meaning as the given word :

PARANOID

**Options :**

4058594871. flattered by

4058594872. influenced by

4058594873. obsessed with

4058594874. upset by

**Question Number : 7 Question Id : 4058591561 Question Type : MCQ Option Shuffling : Yes Is  
Question Mandatory : No Calculator : None Response Time : N.A Think Time : N.A Minimum  
Instruction Time : 0**

**Correct Marks : 1 Wrong Marks : 0.25**

Choose the correct spelling :

**Options :**

4058594875. RABBLEROUSER

4058594876. RABLERouser

4058594877. RABELROUSER

4058594878. RABELROUSER

**Question Number : 7 Question Id : 4058591561 Question Type : MCQ Option Shuffling : Yes Is  
Question Mandatory : No Calculator : None Response Time : N.A Think Time : N.A Minimum  
Instruction Time : 0**

**Correct Marks : 1 Wrong Marks : 0.25**

Choose the correct spelling :

**Options :**

4058594875. RABBLEROUSER

4058594876. RABLEROUSER

4058594877. RABELROUSER

4058594878. RABELROUSER

**Question Number : 8 Question Id : 4058591562 Question Type : MCQ Option Shuffling : Yes Is  
Question Mandatory : No Calculator : None Response Time : N.A Think Time : N.A Minimum  
Instruction Time : 0**

**Correct Marks : 1 Wrong Marks : 0.25**

Choose the correct spelling :

**Options :**

4058594879. AQUUITAL

4058594880. AQUEITTAL

4058594881. AQUIETTAL



4058594882. ACQUITTAL

**Question Number : 8 Question Id : 4058591562 Question Type : MCQ Option Shuffling : Yes Is**

**Question Mandatory : No Calculator : None Response Time : N.A Think Time : N.A Minimum**

**Instruction Time : 0**

**Correct Marks : 1 Wrong Marks : 0.25**

Choose the correct spelling :

**Options :**

4058594879. AQUUITAL

4058594880. AQUEITTAL

4058594881. AQUIETTAL

4058594882. ACQUITTAL

**Question Number : 9 Question Id : 4058591563 Question Type : MCQ Option Shuffling : Yes Is**

**Question Mandatory : No Calculator : None Response Time : N.A Think Time : N.A Minimum**

**Instruction Time : 0**

**Correct Marks : 1 Wrong Marks : 0.25**

Choose the correct spelling :

**Options :**

4058594883. ENOUNCIATION

4058594884. ENUNCIATION

4058594885. ENOUNSIATION

4058594886. ENUNSIASION

**Question Number : 9 Question Id : 4058591563 Question Type : MCQ Option Shuffling : Yes Is Question Mandatory : No Calculator : None Response Time : N.A Think Time : N.A Minimum Instruction Time : 0**

**Correct Marks : 1 Wrong Marks : 0.25**

Choose the correct spelling :

**Options :**

4058594883. ENOUNCIATION

4058594884. ENUNCIATION

4058594885. ENOUNSIATION

4058594886. ENUNSIASION

**Question Number : 10 Question Id : 4058591564 Question Type : MCQ Option Shuffling : Yes Is Question Mandatory : No Calculator : None Response Time : N.A Think Time : N.A Minimum Instruction Time : 0**

**Correct Marks : 1 Wrong Marks : 0.25**

Give one word for the given expression

High-flown and pretentious speech.

**Options :**

4058594887. vituperative

4058594888. bombastic

4058594889. austere

4058594890. untruthful

**Question Number : 10 Question Id : 4058591564 Question Type : MCQ Option Shuffling : Yes Is Question Mandatory : No Calculator : None Response Time : N.A Think Time : N.A Minimum Instruction Time : 0**

**Correct Marks : 1 Wrong Marks : 0.25**

Give one word for the given expression

High-flown and pretentious speech.

**Options :**

4058594887. vituperative

4058594888. bombastic

4058594889. austere

4058594890. untruthful

**Question Number : 11 Question Id : 4058591565 Question Type : MCQ Option Shuffling : Yes Is Question Mandatory : No Calculator : None Response Time : N.A Think Time : N.A Minimum Instruction Time : 0**

**Correct Marks : 1 Wrong Marks : 0.25**

Give one word for the given expression :

One who deserts his religion.

**Options :**

4058594891. deserter

4058594892. apostate

4058594893. opportunist

4058594894. reticent

**Question Number : 11 Question Id : 4058591565 Question Type : MCQ Option Shuffling : Yes Is**

**Question Mandatory : No Calculator : None Response Time : N.A Think Time : N.A Minimum**

**Instruction Time : 0**

**Correct Marks : 1 Wrong Marks : 0.25**

Give one word for the given expression :

One who deserts his religion.

**Options :**

4058594891. deserter

4058594892. apostate

4058594893. opportunist

4058594894. reticent

**Question Number : 12 Question Id : 4058591566 Question Type : MCQ Option Shuffling : Yes Is**

**Question Mandatory : No Calculator : None Response Time : N.A Think Time : N.A Minimum**

**Instruction Time : 0**

**Correct Marks : 1 Wrong Marks : 0.25**

Give one word for the given expression :

List of matters to be transacted at a meeting.

**Options :**

4058594895. minutes

4058594896. agenda

4058594897. excerpts

4058594898. proceedings

**Question Number : 12 Question Id : 4058591566 Question Type : MCQ Option Shuffling : Yes Is Question Mandatory : No Calculator : None Response Time : N.A Think Time : N.A Minimum Instruction Time : 0**

**Correct Marks : 1 Wrong Marks : 0.25**

Give one word for the given expression :

List of matters to be transacted at a meeting.

**Options :**

4058594895. minutes

4058594896. agenda

4058594897. excerpts

4058594898. proceedings

**Question Number : 13 Question Id : 4058591567 Question Type : MCQ Option Shuffling : Yes Is Question Mandatory : No Calculator : None Response Time : N.A Think Time : N.A Minimum Instruction Time : 0**

**Correct Marks : 1 Wrong Marks : 0.25**

Fill in the blank with the appropriate word.

We saw a wounded tiger while passing \_\_\_\_\_ the forest.

**Options :**

4058594899. from

4058594900. through

4058594901. along

4058594902. among

**Question Number : 13 Question Id : 4058591567 Question Type : MCQ Option Shuffling : Yes Is Question Mandatory : No Calculator : None Response Time : N.A Think Time : N.A Minimum Instruction Time : 0**

**Correct Marks : 1 Wrong Marks : 0.25**

Fill in the blank with the appropriate word.

We saw a wounded tiger while passing \_\_\_\_\_ the forest.

**Options :**

4058594899. from

4058594900. through

4058594901. along

4058594902. among

**Question Number : 14 Question Id : 4058591568 Question Type : MCQ Option Shuffling : Yes Is Question Mandatory : No Calculator : None Response Time : N.A Think Time : N.A Minimum Instruction Time : 0**

**Correct Marks : 1 Wrong Marks : 0.25**

Fill in the blank with the appropriate word.

The temperature falls \_\_\_\_\_  $4^{\circ}\text{C}$  in the month of December in Delhi.

**Options :**

4058594903. from

4058594904. below

4058594905. at

4058594906. into

**Question Number : 14 Question Id : 4058591568 Question Type : MCQ Option Shuffling : Yes Is Question Mandatory : No Calculator : None Response Time : N.A Think Time : N.A Minimum Instruction Time : 0**

**Correct Marks : 1 Wrong Marks : 0.25**

Fill in the blank with the appropriate word.

The temperature falls \_\_\_\_\_ 4°C in the month of December in Delhi.

**Options :**

4058594903. from

4058594904. below

4058594905. at

4058594906. into

**Question Number : 15 Question Id : 4058591569 Question Type : MCQ Option Shuffling : Yes Is Question Mandatory : No Calculator : None Response Time : N.A Think Time : N.A Minimum Instruction Time : 0**

**Correct Marks : 1 Wrong Marks : 0.25**

Fill in the blank with the appropriate word.

Books are very often compared \_\_\_\_\_ a granary.

**Options :**

4058594907. and

4058594908. to

4058594909. by

4058594910. at

**Question Number : 15 Question Id : 4058591569 Question Type : MCQ Option Shuffling : Yes Is Question Mandatory : No Calculator : None Response Time : N.A Think Time : N.A Minimum Instruction Time : 0**

**Correct Marks : 1 Wrong Marks : 0.25**

Fill in the blank with the appropriate word.

Books are very often compared \_\_\_\_\_ a granary.

**Options :**

4058594907. and

4058594908. to

4058594909. by

4058594910. at

**Question Number : 16 Question Id : 4058591570 Question Type : MCQ Option Shuffling : Yes Is Question Mandatory : No Calculator : None Response Time : N.A Think Time : N.A Minimum Instruction Time : 0**

**Correct Marks : 1 Wrong Marks : 0.25**

Choose the word opposite in meaning to the given word :

'EFFECT'

**Options :**

4058594911. EDUCE



4058594912. CAUSE

4058594913. SIDLE

4058594914. REDACT

**Question Number : 16 Question Id : 4058591570 Question Type : MCQ Option Shuffling : Yes Is  
Question Mandatory : No Calculator : None Response Time : N.A Think Time : N.A Minimum  
Instruction Time : 0**

**Correct Marks : 1 Wrong Marks : 0.25**

Choose the word opposite in meaning to the given word :

'EFFECT'

**Options :**

4058594911. EDUCE

4058594912. CAUSE

4058594913. SIDLE

4058594914. REDACT

**Question Number : 17 Question Id : 4058591571 Question Type : MCQ Option Shuffling : Yes Is  
Question Mandatory : No Calculator : None Response Time : N.A Think Time : N.A Minimum  
Instruction Time : 0**

**Correct Marks : 1 Wrong Marks : 0.25**

Choose the word opposite in meaning to the given word :

'INSOLENCE'

**Options :**

4058594915. SERVILITY

4058594916. INSIPIDITY

4058594917. OBOE

4058594918. INFUSE

**Question Number : 17 Question Id : 4058591571 Question Type : MCQ Option Shuffling : Yes Is  
Question Mandatory : No Calculator : None Response Time : N.A Think Time : N.A Minimum  
Instruction Time : 0**

**Correct Marks : 1 Wrong Marks : 0.25**

Choose the word opposite in meaning to the given word :

'INSOLENT'

**Options :**

4058594915. SERVILITY

4058594916. INSIPIDITY

4058594917. OBOE

4058594918. INFUSE

**Question Number : 18 Question Id : 4058591572 Question Type : MCQ Option Shuffling : Yes Is  
Question Mandatory : No Calculator : None Response Time : N.A Think Time : N.A Minimum  
Instruction Time : 0**

**Correct Marks : 1 Wrong Marks : 0.25**

Choose the word opposite in meaning to the given word :

'PROPULSION'

**Options :**

4058594919. EXPEL

4058594920. FULMINATE

4058594921. DRIVER

4058594922. TRACTION

**Question Number : 18 Question Id : 4058591572 Question Type : MCQ Option Shuffling : Yes Is  
Question Mandatory : No Calculator : None Response Time : N.A Think Time : N.A Minimum  
Instruction Time : 0**

**Correct Marks : 1 Wrong Marks : 0.25**

Choose the word opposite in meaning to the given word :

'PROPULSION'

**Options :**

4058594919. EXPEL

4058594920. FULMINATE

4058594921. DRIVER

4058594922. TRACTION

**Question Number : 19 Question Id : 4058591573 Question Type : MCQ Option Shuffling : Yes Is  
Question Mandatory : No Calculator : None Response Time : N.A Think Time : N.A Minimum  
Instruction Time : 0**

**Correct Marks : 1 Wrong Marks : 0.25**

Choose the word similar in meaning to the given word :

'RIPOFF'

**Options :**

4058594923. MANTLE

4058594924. RITZY

4058594925. ROISTER

4058594926. SWINDLE

**Question Number : 19 Question Id : 4058591573 Question Type : MCQ Option Shuffling : Yes Is  
Question Mandatory : No Calculator : None Response Time : N.A Think Time : N.A Minimum  
Instruction Time : 0**

**Correct Marks : 1 Wrong Marks : 0.25**

Choose the word similar in meaning to the given word :

'RIPPOFF'

**Options :**

4058594923. MANTLE

4058594924. RITZY

4058594925. ROISTER

4058594926. SWINDLE

**Question Number : 20 Question Id : 4058591574 Question Type : MCQ Option Shuffling : Yes Is  
Question Mandatory : No Calculator : None Response Time : N.A Think Time : N.A Minimum  
Instruction Time : 0**

**Correct Marks : 1 Wrong Marks : 0.25**

Choose the word similar in meaning to the given word :

'ADMENISH'

**Options :**

4058594927. SPURN

4058594928. MANIKIN

4058594929. REPROVE

4058594930. QUELL

**Question Number : 20 Question Id : 4058591574 Question Type : MCQ Option Shuffling : Yes Is Question Mandatory : No Calculator : None Response Time : N.A Think Time : N.A Minimum Instruction Time : 0**

**Correct Marks : 1 Wrong Marks : 0.25**

Choose the word similar in meaning to the given word :

'ADMONISH'

**Options :**

4058594927. SPURN

4058594928. MANIKIN

4058594929. REPROVE

4058594930. QUELL

**Question Number : 21 Question Id : 4058591575 Question Type : MCQ Option Shuffling : Yes Is Question Mandatory : No Calculator : None Response Time : N.A Think Time : N.A Minimum Instruction Time : 0**

**Correct Marks : 1 Wrong Marks : 0.25**

Choose the word similar in meaning to the given word :

'PASTY'

**Options :**

4058594931. MOLD

4058594932. ASPHALT

4058594933. PALLID

4058594934. SPOT

**Question Number : 21 Question Id : 4058591575 Question Type : MCQ Option Shuffling : Yes Is**

**Question Mandatory : No Calculator : None Response Time : N.A Think Time : N.A Minimum**

**Instruction Time : 0**

**Correct Marks : 1 Wrong Marks : 0.25**

Choose the word similar in meaning to the given word :

'PASTY'

**Options :**

4058594931. MOLD

4058594932. ASPHALT

4058594933. PALLID

4058594934. SPOT

**Question Number : 22 Question Id : 4058591576 Question Type : MCQ Option Shuffling : Yes Is**

**Question Mandatory : No Calculator : None Response Time : N.A Think Time : N.A Minimum**

**Instruction Time : 0**

**Correct Marks : 1 Wrong Marks : 0.25**

Spot the error in the given sentence -

In early India there has been very little to read except for the books sent from Britain

A

B

C

D

**Options :**

4058594935. A

4058594936. B

4058594937. C

4058594938. D

**Question Number : 22 Question Id : 4058591576 Question Type : MCQ Option Shuffling : Yes Is Question Mandatory : No Calculator : None Response Time : N.A Think Time : N.A Minimum Instruction Time : 0**

**Correct Marks : 1 Wrong Marks : 0.25**

Spot the error in the given sentence -

In early India there has been very little to read except for the books sent from Britain

A

B

C

D

**Options :**

4058594935. A

4058594936. B

4058594937. C

4058594938. D

**Question Number : 23 Question Id : 4058591577 Question Type : MCQ Option Shuffling : Yes Is Question Mandatory : No Calculator : None Response Time : N.A Think Time : N.A Minimum Instruction Time : 0**

**Correct Marks : 1 Wrong Marks : 0.25**

Spot the error in the given sentence :

I am not hungry beside I do not like eggs.

A B C D

**Options :**

4058594939. A

4058594940. B

4058594941. C

4058594942. D

**Question Number : 23 Question Id : 4058591577 Question Type : MCQ Option Shuffling : Yes Is Question Mandatory : No Calculator : None Response Time : N.A Think Time : N.A Minimum Instruction Time : 0**

**Correct Marks : 1 Wrong Marks : 0.25**

Spot the error in the given sentence :

I am not hungry beside I do not like eggs.

A B C D

**Options :**

4058594939. A

4058594940. B

4058594941. C

4058594942. D

**Question Number : 24 Question Id : 4058591578 Question Type : MCQ Option Shuffling : Yes Is**



**Question Mandatory : No Calculator : None Response Time : N.A Think Time : N.A Minimum**

**Instruction Time : 0**

**Correct Marks : 1 Wrong Marks : 0.25**

Spot the error in the given sentence :

Me picked up the books and put it on the table in a heap.

A

B

C

D

**Options :**

4058594943. A

4058594944. B

4058594945. C

4058594946. D

**Question Number : 24 Question Id : 4058591578 Question Type : MCQ Option Shuffling : Yes Is**

**Question Mandatory : No Calculator : None Response Time : N.A Think Time : N.A Minimum**

**Instruction Time : 0**

**Correct Marks : 1 Wrong Marks : 0.25**

Spot the error in the given sentence :

Me picked up the books and put it on the table in a heap.

A

B

C

D

**Options :**

4058594943. A

4058594944. B

4058594945. C

4058594946. D

**Question Number : 25 Question Id : 4058591579 Question Type : MCQ Option Shuffling : Yes Is Question Mandatory : No Calculator : None Response Time : N.A Think Time : N.A Minimum Instruction Time : 0**

**Correct Marks : 1 Wrong Marks : 0.25**

Choose the most appropriate option for the underlined idiomatic expression :

The family's fight for the property was a patriarchal decision that poured oil on troubled water.

**Options :**

4058594947. to blame each other

4058594948. to understand the hidden meaning

4058594949. to revive forgotten quarrel

4058594950. to rectify the matter

**Question Number : 25 Question Id : 4058591579 Question Type : MCQ Option Shuffling : Yes Is Question Mandatory : No Calculator : None Response Time : N.A Think Time : N.A Minimum Instruction Time : 0**

**Correct Marks : 1 Wrong Marks : 0.25**

Choose the most appropriate option for the underlined idiomatic expression :

The family's fight for the property was a patriarchal decision that poured oil on troubled water.

**Options :**

4058594947. to blame each other

4058594948. to understand the hidden meaning

4058594949. to revive forgotten quarrel

4058594950. to rectify the matter

**Question Number : 26 Question Id : 4058591580 Question Type : MCQ Option Shuffling : Yes Is Question Mandatory : No Calculator : None Response Time : N.A Think Time : N.A Minimum Instruction Time : 0**

**Correct Marks : 1 Wrong Marks : 0.25**

Choose the most appropriate option from the following :

'To burn candle at both ends'

**Options :**

4058594951. to succeed slowly

4058594952. to work hard continuously

4058594953. to strive hard

4058594954. to spend lavishly

**Question Number : 26 Question Id : 4058591580 Question Type : MCQ Option Shuffling : Yes Is Question Mandatory : No Calculator : None Response Time : N.A Think Time : N.A Minimum Instruction Time : 0**

**Correct Marks : 1 Wrong Marks : 0.25**

Choose the most appropriate option from the following :

'To burn candle at both ends'

**Options :**

4058594951. to succeed slowly

4058594952. to work hard continuously

4058594953. to strive hard

4058594954. to spend lavishly

**Question Number : 27 Question Id : 4058591581 Question Type : MCQ Option Shuffling : Yes Is Question Mandatory : No Calculator : None Response Time : N.A Think Time : N.A Minimum Instruction Time : 0**

**Correct Marks : 1 Wrong Marks : 0.25**

Choose the correct option for the following :

'To catch a tartar'

**Options :**

4058594955. to catch a flatterer red - handed

4058594956. to catch someone in a compromising situation

4058594957. to catch a person who is more powerful than the catcher

4058594958. to come out of conflict brilliantly

**Question Number : 27 Question Id : 4058591581 Question Type : MCQ Option Shuffling : Yes Is Question Mandatory : No Calculator : None Response Time : N.A Think Time : N.A Minimum Instruction Time : 0**

**Correct Marks : 1 Wrong Marks : 0.25**

Choose the correct option for the following :

'To catch a tartar'

**Options :**

4058594955. to catch a flatterer red - handed

4058594956. to catch someone in a compromising situation

4058594957. to catch a person who is more powerful than the catcher

4058594958. to come out of conflict brilliantly

**Question Number : 28 Question Id : 4058591582 Question Type : MCQ Option Shuffling : Yes Is Question Mandatory : No Calculator : None Response Time : N.A Think Time : N.A Minimum Instruction Time : 0**

**Correct Marks : 1 Wrong Marks : 0.25**

Fill in the blank with the correct word :

\_\_\_\_\_ is the most critical stage of life according to some psychologists.

**Options :**

4058594959. adoloscence

4058594960. adolesence

4058594961. adolescense

4058594962. adolescence

**Question Number : 28 Question Id : 4058591582 Question Type : MCQ Option Shuffling : Yes Is Question Mandatory : No Calculator : None Response Time : N.A Think Time : N.A Minimum Instruction Time : 0**

**Correct Marks : 1 Wrong Marks : 0.25**

Fill in the blank with the correct word :

\_\_\_\_\_ is the most critical stage of life according to some psychologists.

**Options :**

4058594959. adoloscence

4058594960. adolesence

4058594961. adolescence

4058594962. adolescence

**Question Number : 29 Question Id : 4058591583 Question Type : MCQ Option Shuffling : Yes Is**

**Question Mandatory : No Calculator : None Response Time : N.A Think Time : N.A Minimum**

**Instruction Time : 0**

**Correct Marks : 1 Wrong Marks : 0.25**

Fill in the blank with the correct word :

She has some lovely pieces of \_\_\_\_\_

**Options :**

4058594963. jewellery

4058594964. jewellery

4058594965. jewelery

4058594966. jesellery

**Question Number : 29 Question Id : 4058591583 Question Type : MCQ Option Shuffling : Yes Is**

**Question Mandatory : No Calculator : None Response Time : N.A Think Time : N.A Minimum**

**Instruction Time : 0**

**Correct Marks : 1 Wrong Marks : 0.25**

Fill in the blank with the correct word :

She has some lovely pieces of \_\_\_\_\_

**Options :**

4058594963. jewellery

4058594964. jewellery

4058594965. jewelery

4058594966. jesellery

**Question Number : 30 Question Id : 4058591584 Question Type : MCQ Option Shuffling : Yes Is Question Mandatory : No Calculator : None Response Time : N.A Think Time : N.A Minimum Instruction Time : 0**

**Correct Marks : 1 Wrong Marks : 0.25**

Fill in the blank with the correct word

He was \_\_\_\_\_ as team coach after the defeat

**Options :**

4058594967. jetisoned

4058594968. jetissoned

4058594969. jettisoned

4058594970. jettissoned

**Question Number : 30 Question Id : 4058591584 Question Type : MCQ Option Shuffling : Yes Is Question Mandatory : No Calculator : None Response Time : N.A Think Time : N.A Minimum Instruction Time : 0**

**Correct Marks : 1 Wrong Marks : 0.25**

Fill in the blank with the correct word

He was \_\_\_\_\_ as team coach after the defeat

**Options :**

4058594967. jettisoned

4058594968. jettisoned

4058594969. jettisoned

4058594970. jettisoned

## English Comprehension

<b>Section Id :</b>	40585999
<b>Section Number :</b>	2
<b>Section type :</b>	Online
<b>Mandatory or Optional :</b>	Mandatory
<b>Number of Questions :</b>	5
<b>Number of Questions to be attempted :</b>	5
<b>Section Marks :</b>	30
<b>Enable Mark as Answered Mark for Review and Clear Response :</b>	Yes
<b>Maximum Instruction Time :</b>	0
<b>Sub-Section Number :</b>	1
<b>Sub-Section Id :</b>	40585999
<b>Question Shuffling Allowed :</b>	No
<b>Is Section Default? :</b>	null

**Question Id : 4058591585 Question Type : COMPREHENSION Sub Question Shuffling Allowed :**

**Yes Group Comprehension Questions : No Question Pattern Type : NonMatrix Calculator :**

**None Response Time : N.A Think Time : N.A Minimum Instruction Time : 0**

**Question Numbers : (31 to 36)**



## Question Label : Comprehension

Read the passage and answer to the question that follows:

Somehow, Ramdas Korwa of Rachketha village was not overjoyed to learn that he was worth ₹ 17.44 lakh to the government. Late in 1993, the authorities decided to lay a three km road leading to Rachketha village in the name of tribal development by allocating ₹ 17.44 lakh towards the project.

Tribals constitute a 55 per cent majority in Surguja, one of India's poorest districts. And the Pahadi or Hill Korwas, who have been listed as a primitive tribe by the government, fall in the bottom 5 per cent. Special efforts are underway for their development which often involves large sums of money. Just one centrally funded scheme, the Pahadi Korwa project, is worth ₹ 42 crores over a five-year period.

There are around 15,000 Pahadi Krowas, the largest number of these in Surguja. However, for political reasons, the main base of the project is in Raigad district. There was just one small problem about building the Pahadi Korwa Marg in Rachketha-the village is almost completely devoid of Pahadi Korwas. Ramdas's family is the only real exception.

'It doesn't matter if these don't benefit the Pahadi Krowas in the least and are completely useless. Out here, even if you put up a swimming pool and a bungalow, you do it in the name of tribal development,' says an NGO activist. 'Nobody bothered to check whether there were really any Pahadi Korwas living in Rachketha village' and 'there was already a kutchra road here,' says Ramavatar Korwa, son of Ramdas. 'They just added lal mitti (red earth) to it. Even today, after spending ₹ 17.44 lakh, it is not a pucca road.'

Ramdas's own demands are touchingly simple. 'All I want is a little water,' he says. 'How can we have agriculture without water?' When repeatedly pressed, he adds: 'Instead of spending ₹ 17.44 lakh on that road, if they had spent a few thousand on improving that damaged well on my land, wouldn't that have been better? Some improvement in the land is also necessary, but let them start by giving us a little water.'

Ramdas's problems were ignored. The government's problem was 'fulfilling a target.' 'If the money were simply put into bank fixed deposits, none of these Pahadi Korwa families would ever have to work again. The interest alone would make them very well off by Surguja's standards,' says an official mockingly.

Nobody thought of asking Ramdas what he really needed, what his problems were, or involving him in their solution. Instead, in his name, they built a road he does not use, at a cost of ₹ 17.44 lakh. 'Please do something about my water problem, sir,' says Ramdas Korwa as we set off across the plain, journeying two kilometres to reach his road nowhere.

### Sub questions

Question Number : 31 Question Id : 4058591586 Question Type : MCQ Option Shuffling : Yes Is Question Mandatory : No Calculator : None Response Time : N.A Think Time : N.A Minimum Instruction Time : 0

**Correct Marks : 1 Wrong Marks : 0.25**

Choose the incorrect statement :

**Options :**

4058594971. Ramdas wanted water issues to be tackled.

4058594972. Pahadi Korwas were minority in Rachktha.

4058594973. Pahadi Korwas project is worth ₹ 42 crores over a five-year period

4058594974. Lal mitti was used to make pucca road, and swimming pool.

**Question Number : 32 Question Id : 4058591587 Question Type : MCQ Option Shuffling : Yes Is**

**Question Mandatory : No Calculator : None Response Time : N.A Think Time : N.A Minimum**

**Instruction Time : 0**

**Correct Marks : 1 Wrong Marks : 0.25**

Choose the correct statement :

**Options :**

4058594975. 45% minority villagers were rich in Rachktha.

4058594976. Swimming pool and bungalow were a tribal development project.

4058594977. ₹. 17.44 lakhs were spent on pucca road.

4058594978. The government fulfilled its target of tribal development.

**Question Number : 33 Question Id : 4058591588 Question Type : MCQ Option Shuffling : Yes Is**

**Question Mandatory : No Calculator : None Response Time : N.A Think Time : N.A Minimum**

**Instruction Time : 0**

**Correct Marks : 1 Wrong Marks : 0.25**

Choose the correct statement :

**Options :**

4058594979. Ramdas Korwa was not overjoyed because he was worth more than ₹. 17.44 lakh.

4058594980. The project of laying three kms road helped 15,000 Pahadi Korwas of Surguja and the local officials of Rachktha.

4058594981. The government would deposit the money as fixed deposit for the villagers.

4058594982. The village had water problem that was the main issue with the villagers as well as Ramdas.

**Question Number : 34 Question Id : 4058591589 Question Type : MCQ Option Shuffling : Yes Is Question Mandatory : No Calculator : None Response Time : N.A Think Time : N.A Minimum Instruction Time : 0**

**Correct Marks : 1 Wrong Marks : 0.25**

Choose the word similar in meaning to : 'improvement'

**Options :**

4058594983. efforts

4058594984. fulfilling

4058594985. development

4058594986. overjoyed

**Question Number : 35 Question Id : 4058591590 Question Type : MCQ Option Shuffling : Yes Is Question Mandatory : No Calculator : None Response Time : N.A Think Time : N.A Minimum Instruction Time : 0**

**Correct Marks : 1 Wrong Marks : 0.25**

Choose the word similar in meaning to :

'Lacking'

**Options :**

4058594987. scheme

4058594988. devoid

4058594989. bottom

4058594990. little

**Question Number : 36 Question Id : 4058591591 Question Type : MCQ Option Shuffling : Yes Is**

**Question Mandatory : No Calculator : None Response Time : N.A Think Time : N.A Minimum**

**Instruction Time : 0**

**Correct Marks : 1 Wrong Marks : 0.25**

Choose the word opposite in meaning :

'ignored'

**Options :**

4058594991. Poorest

4058594992. taken care of

4058594993. Devoid

4058594994. Simple

**Question Id : 4058591585 Question Type : COMPREHENSION Sub Question Shuffling Allowed :**

**Yes Group Comprehension Questions : No Question Pattern Type : NonMatrix Calculator :**

**None Response Time : N.A Think Time : N.A Minimum Instruction Time : 0**

## Question Numbers : (31 to 36)

Question Label : Comprehension

Read the passage and answer to the question that follows:

Somehow, Ramdas Korwa of Rachketha village was not overjoyed to learn that he was worth ₹ 17.44 lakh to the government. Late in 1993, the authorities decided to lay a three km road leading to Rachketha village in the name of tribal development by allocating ₹ 17.44 lakh towards the project.

Tribals constitute a 55 per cent majority in Surguja, one of India's poorest districts. And the Pahadi or Hill Korwas, who have been listed as a primitive tribe by the government, fall in the bottom 5 per cent. Special efforts are underway for their development which often involves large sums of money. Just one centrally funded scheme, the Pahadi Korwa project, is worth ₹ 42 crores over a five-year period.

There are around 15,000 Pahadi Krowas, the largest number of these in Surguja. However, for political reasons, the main base of the project is in Raigad district. There was just one small problem about building the Pahadi Korwa Marg in Rachketha-the village is almost completely devoid of Pahadi Korwas. Ramdas's family is the only real exception.

'It doesn't matter if these don't benefit the Pahadi Krowas in the least and are completely useless. Out here, even if you put up a swimming pool and a bungalow, you do it in the name of tribal development,' says an NGO activist. 'Nobody bothered to check whether there were really any Pahadi Korwas living in Rachketha village' and 'there was already a kutchra road here,' says Ramavatar Korwa, son of Ramdas. 'They just added lal mitti (red earth) to it. Even today, after spending ₹ 17.44 lakh, it is not a pucca road.'

Ramdas's own demands are touchingly simple. 'All I want is a little water,' he says. 'How can we have agriculture without water?' When repeatedly pressed, he adds: 'Instead of spending ₹ 17.44 lakh on that road, if they had spent a few thousand on improving that damaged well on my land, wouldn't that have been better? Some improvement in the land is also necessary, but let them start by giving us a little water.'

Ramdas's problems were ignored. The government's problem was 'fulfilling a target.' 'If the money were simply put into bank fixed deposits, none of these Pahadi Korwa families would ever have to work again. The interest alone would make them very well off by Surguja's standards,' says an official mockingly.

Nobody thought of asking Ramdas what he really needed, what his problems were, or involving him in their solution. Instead, in his name, they built a road he does not use, at a cost of ₹ 17.44 lakh. 'Please do something about my water problem, sir,' says Ramdas Korwa as we set off across the plain, journeying two kilometres to reach his road nowhere.

### Sub questions

Question Number : 31 Question Id : 4058591586 Question Type : MCQ Option Shuffling : Yes Is

Question Mandatory : No Calculator : None Response Time : N.A Think Time : N.A Minimum

**Instruction Time : 0**

**Correct Marks : 1 Wrong Marks : 0.25**

Choose the incorrect statement :

**Options :**

4058594971. Ramdas wanted water issues to be tackled.

4058594972. Pahadi Korwas were minority in Rachktha.

4058594973. Pahadi Korwas project is worth ₹ 42 crores over a five-year period

4058594974. Lal mitti was used to make pucca road, and swimming pool.

**Question Number : 32 Question Id : 4058591587 Question Type : MCQ Option Shuffling : Yes Is**

**Question Mandatory : No Calculator : None Response Time : N.A Think Time : N.A Minimum**

**Instruction Time : 0**

**Correct Marks : 1 Wrong Marks : 0.25**

Choose the correct statement :

**Options :**

4058594975. 45% minority villagers were rich in Rachktha.

4058594976. Swimming pool and bungalow were a tribal development project.

4058594977. ₹. 17.44 lakhs were spent on pucca road.

4058594978. The government fulfilled its target of tribal development.

**Question Number : 33 Question Id : 4058591588 Question Type : MCQ Option Shuffling : Yes Is**

**Question Mandatory : No Calculator : None Response Time : N.A Think Time : N.A Minimum**

**Instruction Time : 0**

**Correct Marks : 1 Wrong Marks : 0.25**

Choose the correct statement :

**Options :**

4058594979. Ramdas Korwa was not overjoyed because he was worth more than ₹. 17.44 lakh.

4058594980. The project of laying three kms road helped 15,000 Pahadi Korwas of Surguja and the local officials of Rachktha.

4058594981. The government would deposit the money as fixed deposit for the villagers.

4058594982. The village had water problem that was the main issue with the villagers as well as Ramdas.

**Question Number : 34 Question Id : 4058591589 Question Type : MCQ Option Shuffling : Yes Is**

**Question Mandatory : No Calculator : None Response Time : N.A Think Time : N.A Minimum**

**Instruction Time : 0**

**Correct Marks : 1 Wrong Marks : 0.25**

Choose the word similar in meaning to : 'improvement'

**Options :**

4058594983. efforts

4058594984. fulfilling

4058594985. development

4058594986. overjoyed

**Question Number : 35 Question Id : 4058591590 Question Type : MCQ Option Shuffling : Yes Is**

**Question Mandatory : No Calculator : None Response Time : N.A Think Time : N.A Minimum**

**Instruction Time : 0**

**Correct Marks : 1 Wrong Marks : 0.25**

Choose the word similar in meaning to :

'Lacking'

**Options :**

4058594987. scheme

4058594988. devoid

4058594989. bottom

4058594990. little

**Question Number : 36 Question Id : 4058591591 Question Type : MCQ Option Shuffling : Yes Is**

**Question Mandatory : No Calculator : None Response Time : N.A Think Time : N.A Minimum**

**Instruction Time : 0**

**Correct Marks : 1 Wrong Marks : 0.25**

Choose the word opposite in meaning :

'ignored'

**Options :**

4058594991. Poorest

4058594992. taken care of

4058594993. Devoid

4058594994. Simple

**Sub-Section Number :**

2

**Sub-Section Id :**

405859100

**Question Shuffling Allowed :**

No



**Is Section Default? :**

null

**Question Id : 4058591592 Question Type : COMPREHENSION Sub Question Shuffling Allowed :**

**Yes Group Comprehension Questions : No Question Pattern Type : NonMatrix Calculator :**

**None Response Time : N.A Think Time : N.A Minimum Instruction Time : 0**

**Question Numbers : (37 to 42)**

Question Label : Comprehension

Read the passage and answer to the question that follows:

Under the colonial regime, basic infrastructure such as railways, ports, water transport, posts and telegraphs did develop. However, the real motive behind this development was not to provide basic amenities to the people but to subserve various colonial interests. Roads constructed in India prior to the advent of the British rule were not fit for modern transport. The roads that were built primarily served the purposes of mobilising the army within India and drawing out raw materials from the countryside to the nearest railway station or the port to send these to far away England or other lucrative foreign destinations. There always remained an acute shortage of all weather roads to reach out to the rural areas during the rainy season. Naturally, therefore, people mostly living in these areas suffered grievously during natural calamities and famines.

The British introduced the railways in India in 1850 and it is considered as one of their most important contributions. The railways affected the structure of the Indian economy in two important ways. On the one hand it enabled people to undertake long distance travel and thereby break geographical and cultural barriers while, on the other hand, it fostered commercialisation of Indian agriculture which adversely affected the self-sufficiency of the village economies in India. The volume of India's exports undoubtedly expanded, but its benefits rarely accrued to the Indians. The social benefits, which the Indians gained owing to the introduction of the railways, were thus outweighed by the country's huge economic loss.

Along with the development of roads and railways, the colonial dispensation also took measures for developing the inland trade and sea lanes. However, these measures were far from satisfactory. The inland waterways, at times, also proved uneconomical as in the case of the canal on the Odisha coast. Though the canal was built at a huge cost to the government exchequer, yet, it failed to compete with the region running parallel to the canal, and had to be ultimately abandoned. The introduction of the expensive system of electric telegraph in India, similarly, served the purpose of maintaining law and order. The postal services, on the other hand, despite serving a useful public purpose, remained all through inadequate.

**Sub questions**

**Question Number : 37 Question Id : 4058591593 Question Type : MCQ Option Shuffling : Yes Is**

**Question Mandatory : No Calculator : None Response Time : N.A Think Time : N.A Minimum**

**Instruction Time : 0**

**Correct Marks : 1 Wrong Marks : 0.25**

Choose the correct option :

**Options :**

4058594995. Under the colonial regime basic infrastructure were developed to benefit the colonized people.

4058594996. Under the colonial regime infrastructure was developed to serve the purposes to expand colonialism.

4058594997. Under the colonial regime basic infrastructure to benefit transportation of the goods to boost Indian economy.

4058594998. Under the colonial regime, basic infrastructure was built to facilitate trade and commerce in India.

**Question Number : 38 Question Id : 4058591594 Question Type : MCQ Option Shuffling : Yes Is Question Mandatory : No Calculator : None Response Time : N.A Think Time : N.A Minimum Instruction Time : 0**

**Correct Marks : 1 Wrong Marks : 0.25**

Identify the purpose of railways in British India :

**Options :**

4058594999. to transport people during rainy season.

4058595000. to transport goods to the interiors during famine.

4058595001. to boost the economic structure of India.

4058595002. to exploit Indians and expand British regime.

**Question Number : 39 Question Id : 4058591595 Question Type : MCQ Option Shuffling : Yes Is Question Mandatory : No Calculator : None Response Time : N.A Think Time : N.A Minimum**

**Instruction Time : 0**

**Correct Marks : 1 Wrong Marks : 0.25**

The colonial project was centered on :

**Options :**

4058595003. people, economy and culture

4058595004. roads, railways and posts

4058595005. vehicles, flights and posts

4058595006. People, economy, culture, roads, railways and posts

**Question Number : 40 Question Id : 4058591596 Question Type : MCQ Option Shuffling : Yes Is**

**Question Mandatory : No Calculator : None Response Time : N.A Think Time : N.A Minimum**

**Instruction Time : 0**

**Correct Marks : 1 Wrong Marks : 0.25**

Which of the following served the dual purpose of maintaining law and order :

**Options :**

4058595007. canal and government exchequer

4058595008. electric telegraph

4058595009. Postal services

4058595010. Roads and Railways

**Question Number : 41 Question Id : 4058591597 Question Type : MCQ Option Shuffling : Yes Is**

**Question Mandatory : No Calculator : None Response Time : N.A Think Time : N.A Minimum**

**Instruction Time : 0**

**Correct Marks : 1 Wrong Marks : 0.25**

Which of the following adversely affected the village economies in India :

**Options :**

4058595011. railways and commercialisation of agriculture in India.

4058595012. shortage of all weather roads.

4058595013. roads unfit for modern transports.

4058595014. the inadequate postal services.

**Question Number : 42 Question Id : 4058591598 Question Type : MCQ Option Shuffling : Yes Is**

**Question Mandatory : No Calculator : None Response Time : N.A Think Time : N.A Minimum**

**Instruction Time : 0**

**Correct Marks : 1 Wrong Marks : 0.25**

Which of the following was the most under developed in British India ?

**Options :**

4058595015. Roads and Railways

4058595016. Posts and Telegraphs

4058595017. Water transport and Electric telegraph

4058595018. Ports and Water transport

**Question Id : 4058591592 Question Type : COMPREHENSION Sub Question Shuffling Allowed :**

**Yes Group Comprehension Questions : No Question Pattern Type : NonMatrix Calculator :**

**None Response Time : N.A Think Time : N.A Minimum Instruction Time : 0**

**Question Numbers : (37 to 42)**

## Question Label : Comprehension

Read the passage and answer to the question that follows:

Under the colonial regime, basic infrastructure such as railways, ports, water transport, posts and telegraphs did develop. However, the real motive behind this development was not to provide basic amenities to the people but to subserve various colonial interests. Roads constructed in India prior to the advent of the British rule were not fit for modern transport. The roads that were built primarily served the purposes of mobilising the army within India and drawing out raw materials from the countryside to the nearest railway station or the port to send these to far away England or other lucrative foreign destinations. There always remained an acute shortage of all weather roads to reach out to the rural areas during the rainy season. Naturally, therefore, people mostly living in these areas suffered grievously during natural calamities and famines.

The British introduced the railways in India in 1850 and it is considered as one of their most important contributions. The railways affected the structure of the Indian economy in two important ways. On the one hand it enabled people to undertake long distance travel and thereby break geographical and cultural barriers while, on the other hand, it fostered commercialisation of Indian agriculture which adversely affected the self-sufficiency of the village economies in India. The volume of India's exports undoubtedly expanded, but its benefits rarely accrued to the Indians. The social benefits, which the Indians gained owing to the introduction of the railways, were thus outweighed by the country's huge economic loss.

Along with the development of roads and railways, the colonial dispensation also took measures for developing the inland trade and sea lanes. However, these measures were far from satisfactory. The inland waterways, at times, also proved uneconomical as in the case of the canal on the Odisha coast. Though the canal was built at a huge cost to the government exchequer, yet, it failed to compete with the region running parallel to the canal, and had to be ultimately abandoned. The introduction of the expensive system of electric telegraph in India, similarly, served the purpose of maintaining law and order. The postal services, on the other hand, despite serving a useful public purpose, remained all through inadequate.

### Sub questions

**Question Number : 37 Question Id : 4058591593 Question Type : MCQ Option Shuffling : Yes Is**

**Question Mandatory : No Calculator : None Response Time : N.A Think Time : N.A Minimum**

**Instruction Time : 0**

**Correct Marks : 1 Wrong Marks : 0.25**

Choose the correct option :

**Options :**

Under the colonial regime basic infrastructure were developed to benefit the colonized people.

4058594995.

4058594996. Under the colonial regime infrastructure was developed to serve the purposes to expand colonialism.

4058594997. Under the colonial regime basic infrastructure to benefit transportation of the goods to boost Indian economy.

4058594998. Under the colonial regime, basic infrastructure was built to facilitate trade and commerce in India.

**Question Number : 38 Question Id : 4058591594 Question Type : MCQ Option Shuffling : Yes Is Question Mandatory : No Calculator : None Response Time : N.A Think Time : N.A Minimum Instruction Time : 0**

**Correct Marks : 1 Wrong Marks : 0.25**

Identify the purpose of railways in British India :

**Options :**

4058594999. to transport people during rainy season.

4058595000. to transport goods to the interiors during famine.

4058595001. to boost the economic structure of India.

4058595002. to exploit Indians and expand British regime.

**Question Number : 39 Question Id : 4058591595 Question Type : MCQ Option Shuffling : Yes Is Question Mandatory : No Calculator : None Response Time : N.A Think Time : N.A Minimum Instruction Time : 0**

**Correct Marks : 1 Wrong Marks : 0.25**

The colonial project was centered on :

**Options :**

4058595003. people, economy and culture

4058595004. roads, railways and posts

4058595005. vehicles, flights and posts

4058595006. People, economy, culture, roads, railways and posts

**Question Number : 40 Question Id : 4058591596 Question Type : MCQ Option Shuffling : Yes Is Question Mandatory : No Calculator : None Response Time : N.A Think Time : N.A Minimum Instruction Time : 0**

**Correct Marks : 1 Wrong Marks : 0.25**

Which of the following served the dual purpose of maintaining law and order :

**Options :**

4058595007. canal and government exchequer

4058595008. electric telegraph

4058595009. Postal services

4058595010. Roads and Railways

**Question Number : 41 Question Id : 4058591597 Question Type : MCQ Option Shuffling : Yes Is Question Mandatory : No Calculator : None Response Time : N.A Think Time : N.A Minimum Instruction Time : 0**

**Correct Marks : 1 Wrong Marks : 0.25**

Which of the following adversely affected the village economies in India :

**Options :**

4058595011. railways and commercialisation of agriculture in India.

4058595012. shortage of all weather roads.

4058595013. roads unfit for modern transports.

4058595014. the inadequate postal services.

**Question Number : 42 Question Id : 4058591598 Question Type : MCQ Option Shuffling : Yes Is Question Mandatory : No Calculator : None Response Time : N.A Think Time : N.A Minimum Instruction Time : 0**

**Correct Marks : 1 Wrong Marks : 0.25**

Which of the following was the most under developed in British India ?

**Options :**

4058595015. Roads and Railways

4058595016. Posts and Telegraphs

4058595017. Water transport and Electric telegraph

4058595018. Ports and Water transport

<b>Sub-Section Number :</b>	3
<b>Sub-Section Id :</b>	405859101
<b>Question Shuffling Allowed :</b>	No
<b>Is Section Default? :</b>	null

**Question Id : 4058591599 Question Type : COMPREHENSION Sub Question Shuffling Allowed : Yes Group Comprehension Questions : No Question Pattern Type : NonMatrix Calculator : None Response Time : N.A Think Time : N.A Minimum Instruction Time : 0**  
**Question Numbers : (43 to 48)**



Question Label : Comprehension

Read the passage and answer to the question that follows:

Chola temples often became the nuclei of settlements which grew around them. These were centers of craft production. Temples were also endowed with land by rulers as well as by others. The produce of this land went into maintaining all the specialists who worked at the temple and very often lived near it - priests, garland makers, cooks, sweepers, musicians, dancers, etc. In other words, temples were not only places of worship; they were the centers of economic, social and cultural life.

Amongst the crafts associated with temples, the making of bronze images was the most distinctive. Chola bronze images are considered amongst the finest in the world. While most images were of deities, sometimes images were made of devotees as well.

### Sub questions

**Question Number : 43 Question Id : 4058591600 Question Type : MCQ Option Shuffling : Yes Is Question Mandatory : No Calculator : None Response Time : N.A Think Time : N.A Minimum Instruction Time : 0**

**Correct Marks : 1 Wrong Marks : 0.25**

\_\_\_\_\_ were the centres of craft production.

**Options :**

4058595019. Temples with land

4058595020. Nuclei

4058595021. Settlements

4058595022. Chola temples

**Question Number : 44 Question Id : 4058591601 Question Type : MCQ Option Shuffling : Yes Is Question Mandatory : No Calculator : None Response Time : N.A Think Time : N.A Minimum Instruction Time : 0**

**Correct Marks : 1 Wrong Marks : 0.25**

The priests and the other specialists were maintained by -

**Options :**

4058595023. the endowments by the rulers

4058595024. the income from the crops grown on the temples land

4058595025. the crafts produced in temple's

4058595026. making of bronze statues

**Question Number : 45 Question Id : 4058591602 Question Type : MCQ Option Shuffling : Yes Is**

**Question Mandatory : No Calculator : None Response Time : N.A Think Time : N.A Minimum**

**Instruction Time : 0**

**Correct Marks : 1 Wrong Marks : 0.25**

The importance of Chola temples is best described by the statement:

**Options :**

4058595027. These were centres of craft production and nuclei of settlements.

4058595028. These were endowed with land by rulers and were places of worship

4058595029. All the specialists who worked at the temple lived near it.

4058595030. These were places of worship as well as centers of economic, social and cultural life.

**Question Number : 46 Question Id : 4058591603 Question Type : MCQ Option Shuffling : Yes Is**

**Question Mandatory : No Calculator : None Response Time : N.A Think Time : N.A Minimum**

**Instruction Time : 0**

**Correct Marks : 1 Wrong Marks : 0.25**

Substitute one word for the underlined group of words -

There were many gods and goddesses in the inner sanctum of the temple

**Options :**

4058595031. specialists

4058595032. images

4058595033. deities

4058595034. devotees

**Question Number : 47 Question Id : 4058591604 Question Type : MCQ Option Shuffling : Yes Is Question Mandatory : No Calculator : None Response Time : N.A Think Time : N.A Minimum Instruction Time : 0**

**Correct Marks : 1 Wrong Marks : 0.25**

School : Student : Temple :

**Options :**

4058595035. Priest

4058595036. Sweeper

4058595037. Deity

4058595038. Devotee

**Question Number : 48 Question Id : 4058591605 Question Type : MCQ Option Shuffling : Yes Is Question Mandatory : No Calculator : None Response Time : N.A Think Time : N.A Minimum Instruction Time : 0**

**Correct Marks : 1 Wrong Marks : 0.25**

Give one word for the given phrase -

"Cash or kind given to a school, a college or another institution to provide it with an income."

**Options :**

4058595039. settlement

4058595040. endowment

4058595041. produce

4058595042. distinctions

**Question Id : 4058591599 Question Type : COMPREHENSION Sub Question Shuffling Allowed :  
Yes Group Comprehension Questions : No Question Pattern Type : NonMatrix Calculator :  
None Response Time : N.A Think Time : N.A Minimum Instruction Time : 0**

**Question Numbers : (43 to 48)**

Question Label : Comprehension

Read the passage and answer to the question that follows:

Chola temples often became the nuclei of settlements which grew around them. These were centers of craft production. Temples were also endowed with land by rulers as well as by others. The produce of this land went into maintaining all the specialists who worked at the temple and very often lived near it - priests, garland makers, cooks, sweepers, musicians, dancers, etc. In other words, temples were not only places of worship; they were the centers of economic, social and cultural life.

Amongst the crafts associated with temples, the making of bronze images was the most distinctive. Chola bronze images are considered amongst the finest in the world. While most images were of deities, sometimes images were made of devotees as well.

**Sub questions**

**Question Number : 43 Question Id : 4058591600 Question Type : MCQ Option Shuffling : Yes Is  
Question Mandatory : No Calculator : None Response Time : N.A Think Time : N.A Minimum  
Instruction Time : 0**

**Correct Marks : 1 Wrong Marks : 0.25**

\_\_\_\_\_ were the centres of craft production.

**Options :**

4058595019. Temples with land

4058595020. Nuclei

4058595021. Settlements

4058595022. Chola temples

**Question Number : 44 Question Id : 4058591601 Question Type : MCQ Option Shuffling : Yes Is Question Mandatory : No Calculator : None Response Time : N.A Think Time : N.A Minimum Instruction Time : 0**

**Correct Marks : 1 Wrong Marks : 0.25**

The priests and the other specialists were maintained by -

**Options :**

4058595023. the endowments by the rulers

4058595024. the income from the crops grown on the temples land

4058595025. the crafts produced in temple's

4058595026. making of bronze statues

**Question Number : 45 Question Id : 4058591602 Question Type : MCQ Option Shuffling : Yes Is Question Mandatory : No Calculator : None Response Time : N.A Think Time : N.A Minimum Instruction Time : 0**

**Correct Marks : 1 Wrong Marks : 0.25**

The importance of Chola temples is best described by the statement:

**Options :**

4058595027. These were centres of craft production and nuclei of settlements.

4058595028. These were endowed with land by rulers and were places of worship

4058595029. All the specialists who worked at the temple lived near it.

4058595030. These were places of worship as well as centers of economic, social and cultural life.

**Question Number : 46 Question Id : 4058591603 Question Type : MCQ Option Shuffling : Yes Is Question Mandatory : No Calculator : None Response Time : N.A Think Time : N.A Minimum Instruction Time : 0**

**Correct Marks : 1 Wrong Marks : 0.25**

Substitute one word for the underlined group of words -

There were many gods and goddesses in the inner sanctum of the temple

**Options :**

4058595031. specialists

4058595032. images

4058595033. deities

4058595034. devotees

**Question Number : 47 Question Id : 4058591604 Question Type : MCQ Option Shuffling : Yes Is Question Mandatory : No Calculator : None Response Time : N.A Think Time : N.A Minimum Instruction Time : 0**

**Correct Marks : 1 Wrong Marks : 0.25**

School : Student : Temple :

**Options :**

4058595035. Priest

4058595036. Sweeper

4058595037. Deity

4058595038. Devotee

**Question Number : 48 Question Id : 4058591605 Question Type : MCQ Option Shuffling : Yes Is Question Mandatory : No Calculator : None Response Time : N.A Think Time : N.A Minimum Instruction Time : 0**

**Correct Marks : 1 Wrong Marks : 0.25**

Give one word for the given phrase -

"Cash or kind given to a school, a college or another institution to provide it with an income."

**Options :**

4058595039. settlement

4058595040. endowment

4058595041. produce

4058595042. distinctions

<b>Sub-Section Number :</b>	4
<b>Sub-Section Id :</b>	405859102
<b>Question Shuffling Allowed :</b>	No
<b>Is Section Default? :</b>	null

**Question Id : 4058591606 Question Type : COMPREHENSION Sub Question Shuffling Allowed : Yes Group Comprehension Questions : No Question Pattern Type : NonMatrix Calculator :**

**None Response Time : N.A Think Time : N.A Minimum Instruction Time : 0**

**Question Numbers : (49 to 54)**

Question Label : Comprehension

Read the passage and answer to the question that follows:

Box 5.5 : Organically Produced Cotton in Maharashtra

In 1955, when Kisan Mehta of Prakruti (an NGO) first suggested that cotton, the biggest user of chemical pesticides, could be grown organically, the then Director of the Central Institute for Cotton Research, Nagpur, famously remarked, "Do you want India to go naked?" At present, as many as 130 farmers have committed 1,200 hectares of land to grow cotton organically on the International Federation of Organic Agriculture Movement's standards. The produce was later tested by the German Accredited Agency, AGRECO, and found to be of high quality. Kisan Mehta feels that about 78 per cent of Indian farmers are marginal farmers owning about less than 0.8 hectare but accounting for 20 per cent of India's cultivable land. For such farmers, organic agriculture is more profitable in terms of money and soil conservation in the long run.

**Sub questions**

**Question Number : 49 Question Id : 4058591607 Question Type : MCQ Option Shuffling : Yes Is Question Mandatory : No Calculator : None Response Time : N.A Think Time : N.A Minimum Instruction Time : 0**

**Correct Marks : 1 Wrong Marks : 0.25**

Choose the correct statement :

**Options :**

4058595043. Cotton uses a largest amount of water

4058595044. Cotton is the largest user of pesticides.

4058595045. Cotton can be grown organically too

4058595046. Cotton was grown artificially by many farmers over 1200 hectares of land.

**Question Number : 50 Question Id : 4058591608 Question Type : MCQ Option Shuffling : Yes Is Question Mandatory : No Calculator : None Response Time : N.A Think Time : N.A Minimum**



**Instruction Time : 0**

**Correct Marks : 1 Wrong Marks : 0.25**

Choose the word similar in meaning to :

'known by many people'

**Options :**

4058595047. committed

4058595048. famous

4058595049. marginal

4058595050. associated

**Question Number : 51 Question Id : 4058591609 Question Type : MCQ Option Shuffling : Yes Is**

**Question Mandatory : No Calculator : None Response Time : N.A Think Time : N.A Minimum**

**Instruction Time : 0**

**Correct Marks : 1 Wrong Marks : 0.25**

Choose the word similar in meaning to :

'officially recognized as something'

**Options :**

4058595051. federation

4058595052. standards

4058595053. profitable

4058595054. accredited

**Question Number : 52 Question Id : 4058591610 Question Type : MCQ Option Shuffling : Yes Is**

**Question Mandatory : No Calculator : None Response Time : N.A Think Time : N.A Minimum**

**Instruction Time : 0**

**Correct Marks : 1 Wrong Marks : 0.25**

Choose the incorrect statement :

**Options :**

4058595055. Currently, 130 farmers have decided to grow cotton organically over 1200 hectares of land.

4058595056. The cotton grown organically was of high quality.

4058595057. 22% of India farmers account for over 60% of India's cultivable land, as per Prakruti.

4058595058. Organic agriculture is profitable for farmers.

**Question Number : 53 Question Id : 4058591611 Question Type : MCQ Option Shuffling : Yes Is**

**Question Mandatory : No Calculator : None Response Time : N.A Think Time : N.A Minimum**

**Instruction Time : 0**

**Correct Marks : 1 Wrong Marks : 0.25**

Choose the correct statement :

**Options :**

4058595059. 78% of Indian farmers are marginal farmers, as per AGRECO.

4058595060. 22% of India farmers are rich according to Central Institute of Cotton Research.

4058595061. AGRECO is a farming body

4058595062. Organic farming helps in soil conservation.

**Question Number : 54 Question Id : 4058591612 Question Type : MCQ Option Shuffling : Yes Is**

**Question Mandatory : No Calculator : None Response Time : N.A Think Time : N.A Minimum**

**Instruction Time : 0**

**Correct Marks : 1 Wrong Marks : 0.25**

Choose the word apposite in meaning to :

'Not consisting of or coming from any living substance'

**Options :**

4058595063. Chemical

4058595064. Pesticides

4058595065. Organic

4058595066. Agriculture

**Question Id : 4058591606 Question Type : COMPREHENSION Sub Question Shuffling Allowed :**

**Yes Group Comprehension Questions : No Question Pattern Type : NonMatrix Calculator :**

**None Response Time : N.A Think Time : N.A Minimum Instruction Time : 0**

**Question Numbers : (49 to 54)**

Question Label : Comprehension

Read the passage and answer to the question that follows:

Box 5.5 : Organically Produced Cotton in Maharashtra

In 1955, when Kisan Mehta of Prakruti (an NGO) first suggested that cotton, the biggest user of chemical pesticides, could be grown organically, the then Director of the Central Institute for Cotton Research, Nagpur, famously remarked, "Do you want India to go naked?" At present, as many as 130 farmers have committed 1,200 hectares of land to grow cotton organically on the International Federation of Organic Agriculture Movement's standards. The produce was later tested by the German Accredited Agency, AGRECO, and found to be of high quality. Kisan Mehta feels that about 78 per cent of Indian farmers are marginal farmers owning about less than 0.8 hectare but accounting for 20 per cent of India's cultivable land. For such farmers, organic agriculture is more profitable in terms of money and soil conservation in the long run.

**Sub questions**

**Question Number : 49 Question Id : 4058591607 Question Type : MCQ Option Shuffling : Yes Is**

**Question Mandatory : No Calculator : None Response Time : N.A Think Time : N.A Minimum**

**Instruction Time : 0**

**Correct Marks : 1 Wrong Marks : 0.25**

Choose the correct statement :

**Options :**

4058595043. Cotton uses a largest amount of water

4058595044. Cotton is the largest user of pesticides.

4058595045. Cotton can be grown organically too

4058595046. Cotton was grown artificially by many farmers over 1200 hectares of land.

**Question Number : 50 Question Id : 4058591608 Question Type : MCQ Option Shuffling : Yes Is**

**Question Mandatory : No Calculator : None Response Time : N.A Think Time : N.A Minimum**

**Instruction Time : 0**

**Correct Marks : 1 Wrong Marks : 0.25**

Choose the word similar in meaning to :

'known by many people'

**Options :**

4058595047. committed

4058595048. famous

4058595049. marginal

4058595050. associated

**Question Number : 51 Question Id : 4058591609 Question Type : MCQ Option Shuffling : Yes Is**

**Question Mandatory : No Calculator : None Response Time : N.A Think Time : N.A Minimum**

**Instruction Time : 0**

**Correct Marks : 1 Wrong Marks : 0.25**

Choose the word similar in meaning to :

'officially recognized as something'

**Options :**

4058595051. federation

4058595052. standards

4058595053. profitable

4058595054. accredited

**Question Number : 52 Question Id : 4058591610 Question Type : MCQ Option Shuffling : Yes Is**

**Question Mandatory : No Calculator : None Response Time : N.A Think Time : N.A Minimum**

**Instruction Time : 0**

**Correct Marks : 1 Wrong Marks : 0.25**

Choose the incorrect statement :

**Options :**

4058595055. Currently, 130 farmers have decided to grow cotton organically over 1200 hectares of land.

4058595056. The cotton grown organically was of high quality.

4058595057. 22% of India farmers account for over 60% of India's cultivable land, as per Prakruti.

4058595058. Organic agriculture is profitable for farmers.

**Question Number : 53 Question Id : 4058591611 Question Type : MCQ Option Shuffling : Yes Is Question Mandatory : No Calculator : None Response Time : N.A Think Time : N.A Minimum Instruction Time : 0**

**Correct Marks : 1 Wrong Marks : 0.25**

Choose the correct statement :

**Options :**

4058595059. 78% of Indian farmers are marginal farmers, as per AGRECO.

4058595060. 22% of India farmers are rich according to Central Institute of Cotton Research.

4058595061. AGRECO is a farming body

4058595062. Organic farming helps in soil conservation.

**Question Number : 54 Question Id : 4058591612 Question Type : MCQ Option Shuffling : Yes Is Question Mandatory : No Calculator : None Response Time : N.A Think Time : N.A Minimum Instruction Time : 0**

**Correct Marks : 1 Wrong Marks : 0.25**

Choose the word apposite in meaning to :

'Not consisting of or coming from any living substance'

**Options :**

4058595063. Chemical

4058595064. Pesticides

4058595065. Organic

4058595066. Agriculture

**Sub-Section Number :** 5  
**Sub-Section Id :** 405859103  
**Question Shuffling Allowed :** No  
**Is Section Default? :** null

**Question Id : 4058591613 Question Type : COMPREHENSION Sub Question Shuffling Allowed :  
Yes Group Comprehension Questions : No Question Pattern Type : NonMatrix Calculator :  
None Response Time : N.A Think Time : N.A Minimum Instruction Time : 0**

**Question Numbers : (55 to 60)**

Question Label : Comprehension

Read the passage and answer the following questions :

Organic agriculture offers a means to substitute costlier agricultural inputs (such as HYV seeds, chemical fertilisers, pesticides etc.) with locally produced organic inputs that are cheaper and thereby generate good returns on investment. Organic agriculture also generates income through exports as the demand for organically grown crops is on a rise. Studies across countries have shown that organically grown food has more nutritional value than chemical farming thus providing us with healthy foods. Since organic farming requires more labour input than conventional farming, India will find organic farming an attractive proposition. Finally, the produce is pesticide-free and produced in an environmentally sustainable way.

Popularising organic farming requires awareness and willingness on the part of farmers to adapt to new technology. Inadequate infrastructure and the problem of marketing the products are major concerns which need to be addressed apart from an appropriate agriculture policy to promote organic farming. It has been observed that the yields from organic farming are less than modern agricultural farming in the initial years. Therefore, small and marginal farmers may find it difficult to adapt to large-scale production. Organic produce may also have more blemishes and a shorter shelf life than sprayed produce. Moreover choice in production of off-season crops is quite limited in organic farming. Nevertheless, organic farming helps in sustainable development of agriculture and India has a clear advantage in producing organic products for both domestic and international markets. Do you think food and non-food items cultivated using organic farming methods will be cheaper?

**Sub questions**

**Question Number : 55 Question Id : 4058591614 Question Type : MCQ Option Shuffling : Yes Is  
Question Mandatory : No Calculator : None Response Time : N.A Think Time : N.A Minimum  
Instruction Time : 0**

**Correct Marks : 1 Wrong Marks : 0.25**

Which one of the following is not a disadvantage of organic farming ?

**Options :**

4058595067. Organic farming yields lesser crops compared to modern agricultural farming.

4058595068. Organic farming generates marginal returns on investment.

4058595069. Organic farming requires more labour input than conventional farming.

4058595070. Organic farming produces are blemished with shorter shelf life

**Question Number : 56 Question Id : 4058591615 Question Type : MCQ Option Shuffling : Yes Is**

**Question Mandatory : No Calculator : None Response Time : N.A Think Time : N.A Minimum**

**Instruction Time : 0**

**Correct Marks : 1 Wrong Marks : 0.25**

Choose the word from the option that means :

'Small and not important'

**Options :**

4058595071. labour

4058595072. inadequate

4058595073. marginal

4058595074. domestic

**Question Number : 57 Question Id : 4058591616 Question Type : MCQ Option Shuffling : Yes Is**

**Question Mandatory : No Calculator : None Response Time : N.A Think Time : N.A Minimum**

**Instruction Time : 0**



**Correct Marks : 1 Wrong Marks : 0.25**

Identify the word that means :

"involving the use of natural products and energy in a way that does not harm the environment."

**Options :**

4058595075. Sustainable

4058595076. Organic

4058595077. Nutritional

4058595078. Locally

**Question Number : 58 Question Id : 4058591617 Question Type : MCQ Option Shuffling : Yes Is Question Mandatory : No Calculator : None Response Time : N.A Think Time : N.A Minimum Instruction Time : 0**

**Correct Marks : 1 Wrong Marks : 0.25**

Small and marginal farmers find it difficult to adapt large-scale production because :

**Options :**

4058595079. they do not use HYV seeds.

4058595080. they do not use modern technology.

4058595081. the yield is limited in the initial years.

4058595082. Organic produce has blemishes and shorter shelf life.

**Question Number : 59 Question Id : 4058591618 Question Type : MCQ Option Shuffling : Yes Is Question Mandatory : No Calculator : None Response Time : N.A Think Time : N.A Minimum**

**Instruction Time : 0**

**Correct Marks : 1 Wrong Marks : 0.25**

Which of the following statements is true :

**Options :**

4058595083. Organic farming is free from agricultural policy.

4058595084. Organic farming products have shorter shelf life.

4058595085. Organic farming is inexpensive.

4058595086. Organic farming is free from marketing problems.

**Question Number : 60 Question Id : 4058591619 Question Type : MCQ Option Shuffling : Yes Is**

**Question Mandatory : No Calculator : None Response Time : N.A Think Time : N.A Minimum**

**Instruction Time : 0**

**Correct Marks : 1 Wrong Marks : 0.25**

Which of the following statements is false :

**Options :**

4058595087. Organic agriculture uses locally produced inputs.

4058595088. Organic agriculture is technology free.

4058595089. Organic agriculture generates income.

4058595090. Organic food is more nutritious than chemically farmed foods.

**Question Id : 4058591613 Question Type : COMPREHENSION Sub Question Shuffling Allowed :**

**Yes Group Comprehension Questions : No Question Pattern Type : NonMatrix Calculator :**

**None Response Time : N.A Think Time : N.A Minimum Instruction Time : 0**

## Question Numbers : (55 to 60)

Question Label : Comprehension

Read the passage and answer the following questions :

Organic agriculture offers a means to substitute costlier agricultural inputs (such as HYV seeds, chemical fertilisers, pesticides etc.) with locally produced organic inputs that are cheaper and thereby generate good returns on investment. Organic agriculture also generates income through exports as the demand for organically grown crops is on a rise. Studies across countries have shown that organically grown food has more nutritional value than chemical farming thus providing us with healthy foods. Since organic farming requires more labour input than conventional farming, India will find organic farming an attractive proposition. Finally, the produce is pesticide-free and produced in an environmentally sustainable way.

Popularising organic farming requires awareness and willingness on the part of farmers to adapt to new technology. Inadequate infrastructure and the problem of marketing the products are major concerns which need to be addressed apart from an appropriate agriculture policy to promote organic farming. It has been observed that the yields from organic farming are less than modern agricultural farming in the initial years. Therefore, small and marginal farmers may find it difficult to adapt to large-scale production. Organic produce may also have more blemishes and a shorter shelf life than sprayed produce. Moreover choice in production of off-season crops is quite limited in organic farming. Nevertheless, organic farming helps in sustainable development of agriculture and India has a clear advantage in producing organic products for both domestic and international markets. Do you think food and non-food items cultivated using organic farming methods will be cheaper?

### Sub questions

Question Number : 55 Question Id : 4058591614 Question Type : MCQ Option Shuffling : Yes Is

Question Mandatory : No Calculator : None Response Time : N.A Think Time : N.A Minimum

Instruction Time : 0

Correct Marks : 1 Wrong Marks : 0.25

Which one of the following is not a disadvantage of organic farming ?

Options :

4058595067. Organic farming yields lesser crops compared to modern agricultural farming.

4058595068. Organic farming generates marginal returns on investement.

4058595069. Organic farming requires more labour input than conventional farming.

4058595070. Organic farming produces are blemished with shorter shelf life

**Question Number : 56 Question Id : 4058591615 Question Type : MCQ Option Shuffling : Yes Is Question Mandatory : No Calculator : None Response Time : N.A Think Time : N.A Minimum Instruction Time : 0**

**Correct Marks : 1 Wrong Marks : 0.25**

Choose the word from the option that means :

'Small and not important'

**Options :**

4058595071. labour

4058595072. inadequate

4058595073. marginal

4058595074. domestic

**Question Number : 57 Question Id : 4058591616 Question Type : MCQ Option Shuffling : Yes Is Question Mandatory : No Calculator : None Response Time : N.A Think Time : N.A Minimum Instruction Time : 0**

**Correct Marks : 1 Wrong Marks : 0.25**

Identify the word that means :

"involving the use of natural products and energy in a way that does not harm the environment."

**Options :**

4058595075. Sustainable

4058595076. Organic

4058595077. Nutritional

4058595078. Locally

**Question Number : 58 Question Id : 4058591617 Question Type : MCQ Option Shuffling : Yes Is Question Mandatory : No Calculator : None Response Time : N.A Think Time : N.A Minimum Instruction Time : 0**

**Correct Marks : 1 Wrong Marks : 0.25**

Small and marginal farmers find it difficult to adapt large-scale production because :

**Options :**

4058595079. they do not use HYV seeds.

4058595080. they do not use modern technology.

4058595081. the yield is limited in the initial years.

4058595082. Organic produce has blemishes and shorter shelf life.

**Question Number : 59 Question Id : 4058591618 Question Type : MCQ Option Shuffling : Yes Is Question Mandatory : No Calculator : None Response Time : N.A Think Time : N.A Minimum Instruction Time : 0**

**Correct Marks : 1 Wrong Marks : 0.25**

Which of the following statements is true :

**Options :**

4058595083. Organic farming is free from agricultural policy.

4058595084. Organic farming products have shorter shelf life.

4058595085. Organic farming is inexpensive.

4058595086. Organic farming is free from marketing problems.

**Question Number : 60 Question Id : 4058591619 Question Type : MCQ Option Shuffling : Yes Is Question Mandatory : No Calculator : None Response Time : N.A Think Time : N.A Minimum Instruction Time : 0**

**Correct Marks : 1 Wrong Marks : 0.25**

Which of the following statements is false :

**Options :**

4058595087. Organic agriculture uses locally produced inputs.

4058595088. Organic agriculture is technology free.

4058595089. Organic agriculture generates income.

4058595090. Organic food is more nutritious than chemically farmed foods.

## Quantitative Ability

<b>Section Id :</b>	405859100
<b>Section Number :</b>	3
<b>Section type :</b>	Online
<b>Mandatory or Optional :</b>	Mandatory
<b>Number of Questions :</b>	20
<b>Number of Questions to be attempted :</b>	20
<b>Section Marks :</b>	20
<b>Enable Mark as Answered Mark for Review and</b>	Yes

**Clear Response :**

**Maximum Instruction Time :** 0

**Sub-Section Number :** 1

**Sub-Section Id :** 405859104

**Question Shuffling Allowed :** Yes

**Is Section Default? :** null

**Question Number : 61 Question Id : 4058591620 Question Type : MCQ Option Shuffling : Yes Is**

**Question Mandatory : No Calculator : None Response Time : N.A Think Time : N.A Minimum**

**Instruction Time : 0**

**Correct Marks : 1 Wrong Marks : 0.25**

Ajay buys an article with 20% discount on the marked price and sells at 8% discount on the marked price. What is his profit or loss percentage (%)?

**Options :**

4058595091. 12% profit

4058595092. 12% loss

4058595093. 15% loss

4058595094. 15% profit

**Question Number : 61 Question Id : 4058591620 Question Type : MCQ Option Shuffling : Yes Is**

**Question Mandatory : No Calculator : None Response Time : N.A Think Time : N.A Minimum**

**Instruction Time : 0**

**Correct Marks : 1 Wrong Marks : 0.25**

अजय किसी वस्तु का अंकित मूल्य से 20% बट्टे पर क्रय करता है और अंकित मूल्य से 8% बट्टे पर विक्रय करता है तो उसकी हानि या लाभ प्रतिशतता क्या है?

**Options :**

4058595091. 12% लाभ

4058595092. 12% हानि

4058595093. 15% हानि

4058595094. 15% लाभ

**Question Number : 62 Question Id : 4058591621 Question Type : MCQ Option Shuffling : Yes Is Question Mandatory : No Calculator : None Response Time : N.A Think Time : N.A Minimum Instruction Time : 0**

**Correct Marks : 1 Wrong Marks : 0.25**

A sum becomes ₹ 720 after 2 years and ₹ 1020 after 7 years at simple interest. The rate of interest per annum is :

**Options :**

4058595095. 10%

4058595096. 9%

4058595097. 8%

4058595098. 11%

**Question Number : 62 Question Id : 4058591621 Question Type : MCQ Option Shuffling : Yes Is Question Mandatory : No Calculator : None Response Time : N.A Think Time : N.A Minimum Instruction Time : 0**

**Correct Marks : 1 Wrong Marks : 0.25**

एक धनराशि साधारण ब्याज पर 2 वर्षों के पश्चात् ₹ 720 और 7 वर्षों के पश्चात् ₹ 1020 हो जाती है । प्रति वर्ष ब्याज की दर है :

**Options :**

4058595095. 10%



4058595096. 9%

4058595097. 8%

4058595098. 11%

**Question Number : 63 Question Id : 4058591622 Question Type : MCQ Option Shuffling : Yes Is Question Mandatory : No Calculator : None Response Time : N.A Think Time : N.A Minimum Instruction Time : 0**

**Correct Marks : 1 Wrong Marks : 0.25**

A and B divided a sum of ₹ 84,000 in the ratio 4:3. If ₹ X is added to each of their shares, the ratio becomes 5:4, then the value of X is

**Options :**

4058595099. 10,000

4058595100. 12,000

4058595101. 11,000

4058595102. 10,500

**Question Number : 63 Question Id : 4058591622 Question Type : MCQ Option Shuffling : Yes Is Question Mandatory : No Calculator : None Response Time : N.A Think Time : N.A Minimum Instruction Time : 0**

**Correct Marks : 1 Wrong Marks : 0.25**

A तथा B ने ₹ 84,000 की राशि को 4:3 के अनुपात में विभाजित किया। यदि उन दोनों के प्रत्येक के हिस्से में ₹ X जोड़ा जाता है तो अनुपात 5:4 का हो जाता है। X का मान है:

**Options :**

4058595099. 10,000

4058595100. 12,000

4058595101. 11,000

4058595102. 10,500

**Question Number : 64 Question Id : 4058591623 Question Type : MCQ Option Shuffling : Yes Is Question Mandatory : No Calculator : None Response Time : N.A Think Time : N.A Minimum Instruction Time : 0**

**Correct Marks : 1 Wrong Marks : 0.25**

If  $\frac{x}{y} = 0.45$ , then the value of

$\frac{3y-x}{3y+x} + \frac{6}{23}$ , is :

**Options :**

4058595103. 0.85

4058595104. 1.0

4058595105. 1.95

4058595106. 2.05

**Question Number : 64 Question Id : 4058591623 Question Type : MCQ Option Shuffling : Yes Is Question Mandatory : No Calculator : None Response Time : N.A Think Time : N.A Minimum Instruction Time : 0**

**Correct Marks : 1 Wrong Marks : 0.25**

यदि  $\frac{x}{y} = 0.45$ , तो

$\frac{3y-x}{3y+x} + \frac{6}{23}$  का मान है :

**Options :**

4058595103. 0.85

4058595104. 1.0

4058595105. 1.95

4058595106. 2.05

**Question Number : 65 Question Id : 4058591624 Question Type : MCQ Option Shuffling : Yes Is Question Mandatory : No Calculator : None Response Time : N.A Think Time : N.A Minimum Instruction Time : 0**

**Correct Marks : 1 Wrong Marks : 0.25**

A and B started a business in partnership by investing ₹ 20,000 and ₹ 15,000, respectively. After 6 months, C joined them with ₹ 20,000. What is the share of B in the total profit of ₹ 33,000 earned at the end of 2 years from the starting of the business?

**Options :**

4058595107. ₹ 11,000

4058595108. ₹ 9,600

4058595109. ₹ 9,900

4058595110. ₹ 10,000

**Question Number : 65 Question Id : 4058591624 Question Type : MCQ Option Shuffling : Yes Is Question Mandatory : No Calculator : None Response Time : N.A Think Time : N.A Minimum Instruction Time : 0**

**Correct Marks : 1 Wrong Marks : 0.25**

A और B ने क्रमशः ₹ 20,000 तथा ₹ 15,000 का निवेश कर साझे का एक व्यवसाय शुरू किया। C उनके साथ 6 माह बाद शामिल होता है तथा ₹ 20,000 का निवेश करता है। व्यवसाय शुरू किये जाने से 2 वर्ष के अंत में ₹ 33,000 के कुल मुनाफे में B का हिस्सा कितना है ?

**Options :**

4058595107. ₹ 11,000

4058595108. ₹ 9,600

4058595109. ₹ 9,900

4058595110. ₹ 10,000

**Question Number : 66 Question Id : 4058591625 Question Type : MCQ Option Shuffling : Yes Is**

**Question Mandatory : No Calculator : None Response Time : N.A Think Time : N.A Minimum**

**Instruction Time : 0**

**Correct Marks : 1 Wrong Marks : 0.25**

A dog takes 4 leaps for every 7 leaps of a cat but 4 leaps of a dog are equal to the 6 leaps of the cat. The ratio of speeds of dog and cat is :

**Options :**

4058595111. 16:15

4058595112. 5:7

4058595113. 6:7

4058595114. 8:5

**Question Number : 66 Question Id : 4058591625 Question Type : MCQ Option Shuffling : Yes Is**

**Question Mandatory : No Calculator : None Response Time : N.A Think Time : N.A Minimum**

**Instruction Time : 0**

**Correct Marks : 1 Wrong Marks : 0.25**

एक कुत्ता, बिल्ली के हर 7 छलाँगों के लिए 4 बार छलाँगें लगाता है, लेकिन कुत्ते की 4 छलाँगें बिल्ली के 6 छलाँगों के बराबर हैं। कुत्ते और बिल्ली की गतियों का अनुपात है :

**Options :**

4058595111. 16:15

4058595112. 5:7

4058595113. 6:7

4058595114. 8:5

**Question Number : 67 Question Id : 4058591626 Question Type : MCQ Option Shuffling : Yes Is**

**Question Mandatory : No Calculator : None Response Time : N.A Think Time : N.A Minimum**

**Instruction Time : 0**

**Correct Marks : 1 Wrong Marks : 0.25**

The sum of three numbers is 1600. The second number and the third number are in the ratio 11:18. While the first number and the third number are in the ratio 1:6. The second number is

**Options :**

4058595115. 500

4058595116. 850

4058595117. 550

4058595118. 880

**Question Number : 67 Question Id : 4058591626 Question Type : MCQ Option Shuffling : Yes Is**

**Question Mandatory : No Calculator : None Response Time : N.A Think Time : N.A Minimum**

**Instruction Time : 0**

**Correct Marks : 1 Wrong Marks : 0.25**

तीन संख्याओं का योग 1600 है। दूसरी और तीसरी संख्याएँ 11:18 के अनुपात में हैं। जबकि पहली और तीसरी संख्याएँ 1:6 के अनुपात में हैं। दूसरी संख्या है

**Options :**

4058595115. 500

4058595116. 850

4058595117. 550

4058595118. 880

**Question Number : 68 Question Id : 4058591627 Question Type : MCQ Option Shuffling : Yes Is**

**Question Mandatory : No Calculator : None Response Time : N.A Think Time : N.A Minimum**

**Instruction Time : 0**

**Correct Marks : 1 Wrong Marks : 0.25**

What number should be added to the terms of 3:7 to make the ratio 2:3?

**Options :**

4058595119. 3

4058595120. 4

4058595121. 5

4058595122. 6

**Question Number : 68 Question Id : 4058591627 Question Type : MCQ Option Shuffling : Yes Is**

**Question Mandatory : No Calculator : None Response Time : N.A Think Time : N.A Minimum**

**Instruction Time : 0**

**Correct Marks : 1 Wrong Marks : 0.25**

3:7 के पदों में कौन-सी संख्या जोड़ें कि अनुपात 2:3 हो जाए ?

**Options :**

4058595119. 3

4058595120. 4

4058595121. 5

4058595122. 6

**Question Number : 69 Question Id : 4058591628 Question Type : MCQ Option Shuffling : Yes Is Question Mandatory : No Calculator : None Response Time : N.A Think Time : N.A Minimum Instruction Time : 0**

**Correct Marks : 1 Wrong Marks : 0.25**

There are two sections A and B of a class, consisting of 36 and 44 students, respectively. If the average weight of students of section A is 44 kg and those of section B is 39 kg, then the average weight of students of both the sections (in kg) is

**Options :**

4058595123. 41.5

4058595124. 41.25

4058595125. 40.75

4058595126. 40.25

**Question Number : 69 Question Id : 4058591628 Question Type : MCQ Option Shuffling : Yes Is Question Mandatory : No Calculator : None Response Time : N.A Think Time : N.A Minimum Instruction Time : 0**

**Correct Marks : 1 Wrong Marks : 0.25**

किसी कक्षा में दो सेक्शन A और B हैं जिनमें क्रमशः 36 तथा 44 विद्यार्थी हैं। यदि सेक्शन A के विद्यार्थियों का औसत वजन 44 कि.ग्रा. हो, तथा सेक्शन B के विद्यार्थियों का औसत वजन 39 कि.ग्रा. हो, तो दोनों सेक्शनों के विद्यार्थियों का औसत वजन (कि.ग्रा. में) है :

**Options :**

4058595123. 41.5

4058595124. 41.25

4058595125. 40.75

4058595126. 40.25

**Question Number : 70 Question Id : 4058591629 Question Type : MCQ Option Shuffling : Yes Is**

**Question Mandatory : No Calculator : None Response Time : N.A Think Time : N.A Minimum**

**Instruction Time : 0**

**Correct Marks : 1 Wrong Marks : 0.25**

The milk and water in a mixture are in the ratio 7:5. When 15 litres of water is added to it, the ratio of milk and water in the new mixture becomes 7:8. The total quantity of water in the new mixture is

**Options :**

4058595127. 30 litres

4058595128. 60 litres

4058595129. 48 litres

4058595130. 40 litres

**Question Number : 70 Question Id : 4058591629 Question Type : MCQ Option Shuffling : Yes Is**

**Question Mandatory : No Calculator : None Response Time : N.A Think Time : N.A Minimum**

**Instruction Time : 0**



**Correct Marks : 1 Wrong Marks : 0.25**

एक मिश्रण में दूध और पानी का अनुपात 7:5 है। जब इसमें 15 लीटर पानी मिलाया जाता है तो नए मिश्रण में दूध और पानी का अनुपात 7:8 हो जाता है। नए मिश्रण में पानी की कुल मात्रा है

**Options :**

4058595127. 30 लीटर

4058595128. 60 लीटर

4058595129. 48 लीटर

4058595130. 40 लीटर

**Question Number : 71 Question Id : 4058591630 Question Type : MCQ Option Shuffling : Yes Is**

**Question Mandatory : No Calculator : None Response Time : N.A Think Time : N.A Minimum**

**Instruction Time : 0**

**Correct Marks : 1 Wrong Marks : 0.25**

A, B and C are three partners. They all together invested ₹ 42,000 in a business. At the end of the year, A received ₹ 377.50, B ₹ 1085 and C ₹ 637.50 as profit. The difference between the investments of B and C is

**Options :**

4058595131. ₹ 8,950

4058595132. ₹ 671.25

4058595133. ₹ 895

4058595134. ₹ 1118.75

**Question Number : 71 Question Id : 4058591630 Question Type : MCQ Option Shuffling : Yes Is**

**Question Mandatory : No Calculator : None Response Time : N.A Think Time : N.A Minimum**

**Instruction Time : 0**

**Correct Marks : 1 Wrong Marks : 0.25**

A, B तथा C तीन साझेदार हैं। उन्होंने मिलकर कुल ₹ 42,000 की पूँजी व्यापार में निवेश की। A को ₹ 377.50, B ₹ 1085 और C को ₹ 637.50 लाभ के रूप में प्राप्त हुए। B तथा C के निवेश का अंतर बताइए।

**Options :**

4058595131. ₹ 8,950

4058595132. ₹ 671.25

4058595133. ₹ 895

4058595134. ₹ 1118.75

**Question Number : 72 Question Id : 4058591631 Question Type : MCQ Option Shuffling : Yes Is**

**Question Mandatory : No Calculator : None Response Time : N.A Think Time : N.A Minimum**

**Instruction Time : 0**

**Correct Marks : 1 Wrong Marks : 0.25**

After allowing a discount of 12% on the marked price, a shopkeeper still gains 21%. How much (in percentage) is the marked price above the cost price?

**Options :**

4058595135. 9%

4058595136. 37.5%

4058595137. 33%

4058595138. 16.5%

**Question Number : 72 Question Id : 4058591631 Question Type : MCQ Option Shuffling : Yes Is**

**Question Mandatory : No Calculator : None Response Time : N.A Think Time : N.A Minimum**

**Instruction Time : 0**

**Correct Marks : 1 Wrong Marks : 0.25**

एक दुकानदार अंकित मूल्य पर 12% बट्टे की अनुमति देने के पश्चात् भी 21% कमाता है ।  
लागत मूल्य से कितना ऊपर (प्रतिशत में) अंकित मूल्य है ?

**Options :**

4058595135. 9%

4058595136. 37.5%

4058595137. 33%

4058595138. 16.5%

**Question Number : 73 Question Id : 4058591632 Question Type : MCQ Option Shuffling : Yes Is**

**Question Mandatory : No Calculator : None Response Time : N.A Think Time : N.A Minimum**

**Instruction Time : 0**

**Correct Marks : 1 Wrong Marks : 0.25**

The average of the following numbers

132, 148, 156, 126, 112, 136, is :

**Options :**

4058595139. 810

4058595140. 405

4058595141. 135

4058595142. 125

**Question Number : 73 Question Id : 4058591632 Question Type : MCQ Option Shuffling : Yes Is Question Mandatory : No Calculator : None Response Time : N.A Think Time : N.A Minimum Instruction Time : 0**

**Correct Marks : 1 Wrong Marks : 0.25**

निम्नलिखित संख्याओं

132, 148, 156, 126, 112, 136 का औसत मान है।

**Options :**

4058595139. 810

4058595140. 405

4058595141. 135

4058595142. 125

**Question Number : 74 Question Id : 4058591633 Question Type : MCQ Option Shuffling : Yes Is Question Mandatory : No Calculator : None Response Time : N.A Think Time : N.A Minimum Instruction Time : 0**

**Correct Marks : 1 Wrong Marks : 0.25**

45 men can complete a work in 16 days. After working for some days, 30 more men joined the work. As a result work now finished in 6 days. How many days after the commencement of the work, did the 30 persons join?

**Options :**

4058595143. 6

4058595144. 10

4058595145. 12

4058595146. 8

**Question Number : 74 Question Id : 4058591633 Question Type : MCQ Option Shuffling : Yes Is Question Mandatory : No Calculator : None Response Time : N.A Think Time : N.A Minimum Instruction Time : 0**

**Correct Marks : 1 Wrong Marks : 0.25**

किसी काम को 45 आदमी 16 दिनों में पूरा कर सकते हैं। कुछ दिन काम करने के बाद 30 और आदमी काम में जुड़ते हैं जिसके फलस्वरूप काम अब 6 दिनों में पूरा हो गया। काम शुरू होने के कितने दिनों के बाद वे 30 लोग काम में जुड़े थे ?

**Options :**

4058595143. 6

4058595144. 10

4058595145. 12

4058595146. 8

**Question Number : 75 Question Id : 4058591634 Question Type : MCQ Option Shuffling : Yes Is Question Mandatory : No Calculator : None Response Time : N.A Think Time : N.A Minimum Instruction Time : 0**

**Correct Marks : 1 Wrong Marks : 0.25**

A shopkeeper sells an item with a loss of 5%. If he had sold it for ₹ 120 more, he would have gained 15%. Find the cost price of the item.

**Options :**

4058595147. ₹ 550

4058595148. ₹ 600

4058595149. ₹ 580

4058595150. ₹ 520

**Question Number : 75 Question Id : 4058591634 Question Type : MCQ Option Shuffling : Yes Is Question Mandatory : No Calculator : None Response Time : N.A Think Time : N.A Minimum Instruction Time : 0**

**Correct Marks : 1 Wrong Marks : 0.25**

एक दुकानदार किसी वस्तु का विक्रय 5% हानि पर करता है। यदि वह उसे ₹ 120 अधिक मूल्य पर बेचता तो उसे 15% का लाभ प्राप्त होता। वस्तु का लागत मूल्य ज्ञात कीजिये।

**Options :**

4058595147. ₹ 550

4058595148. ₹ 600

4058595149. ₹ 580

4058595150. ₹ 520

**Question Number : 76 Question Id : 4058591635 Question Type : MCQ Option Shuffling : Yes Is Question Mandatory : No Calculator : None Response Time : N.A Think Time : N.A Minimum Instruction Time : 0**

**Correct Marks : 1 Wrong Marks : 0.25**

If the numerator of a rational number is decreased by 20% and the denominator is increased by 150%, the resultant number becomes  $\frac{1}{2}$ . What is the original number ?

**Options :**

4058595151.  $\frac{5}{4}$

4058595152.  $\frac{4}{5}$

4058595153.  $\frac{16}{25}$

4058595154.  $\frac{25}{16}$

**Question Number : 76 Question Id : 4058591635 Question Type : MCQ Option Shuffling : Yes Is Question Mandatory : No Calculator : None Response Time : N.A Think Time : N.A Minimum Instruction Time : 0**

**Correct Marks : 1 Wrong Marks : 0.25**

यदि एक परिमेय संख्या के अंश को 20% कम कर दिया जाए तथा हर में 150% की वृद्धि कर दी जाए तो परिणामी संख्या  $\frac{1}{2}$  बन जाती है तो मूल संख्या क्या है ?

**Options :**

4058595151.  $\frac{5}{4}$

4058595152.  $\frac{4}{5}$

4058595153.  $\frac{16}{25}$

4058595154.  $\frac{25}{16}$

**Question Number : 77 Question Id : 4058591636 Question Type : MCQ Option Shuffling : Yes Is Question Mandatory : No Calculator : None Response Time : N.A Think Time : N.A Minimum Instruction Time : 0**

**Correct Marks : 1 Wrong Marks : 0.25**

A man borrowed ₹ 500 at the rate of 3% p.a. and ₹ 600 @ 4.5% p.a. on simple interest, with an agreement that the whole sum will be returned only if the total sum becomes ₹ 1520. The number of years, after which the borrowed sum is to be returned is :

**Options :**

4058595155. 5

4058595156. 7

4058595157. 10

4058595158. 12

**Question Number : 77 Question Id : 4058591636 Question Type : MCQ Option Shuffling : Yes Is**

**Question Mandatory : No Calculator : None Response Time : N.A Think Time : N.A Minimum**

**Instruction Time : 0**

**Correct Marks : 1 Wrong Marks : 0.25**

एक व्यक्ति ने 3% प्रति वर्ष की दर से ₹ 500 और 4.5% प्रति वर्ष की दर से ₹ 600 साधारण ब्याज पर इस शर्त पर उधार लिए कि सम्पूर्ण राशि केवल तभी लौटायी जाएगी जब कुल राशि ₹ 1520 हो जाएगी। वर्षों की संख्या, जिसके बाद उधार ली गयी राशि लौटायी जानी होगी, है।

**Options :**

4058595155. 5

4058595156. 7

4058595157. 10

4058595158. 12

**Question Number : 78 Question Id : 4058591637 Question Type : MCQ Option Shuffling : Yes Is**

**Question Mandatory : No Calculator : None Response Time : N.A Think Time : N.A Minimum**

**Instruction Time : 0**

**Correct Marks : 1 Wrong Marks : 0.25**

The greatest number of 5 digits which when divided by 4, 5, 6, 7 and 8 leaves 1, 2, 3, 4 and 5, respectively as remainders, is :



**Options :**

4058595159. 99313

4058595160. 99117

4058595161. 99691

4058595162. 99957

**Question Number : 78 Question Id : 4058591637 Question Type : MCQ Option Shuffling : Yes Is Question Mandatory : No Calculator : None Response Time : N.A Think Time : N.A Minimum Instruction Time : 0**

**Correct Marks : 1 Wrong Marks : 0.25**

5 अंको की अधिकतम संख्या को जब 4, 5, 6, 7 तथा 8 से विभाजित किया जाता है तो शेषफल क्रमशः 1, 2, 3, 4 तथा 5 बचता है। वह संख्या है -

**Options :**

4058595159. 99313

4058595160. 99117

4058595161. 99691

4058595162. 99957

**Question Number : 79 Question Id : 4058591638 Question Type : MCQ Option Shuffling : Yes Is Question Mandatory : No Calculator : None Response Time : N.A Think Time : N.A Minimum Instruction Time : 0**

**Correct Marks : 1 Wrong Marks : 0.25**

If  $\frac{1}{7.247} = 0.138$ , then the value of  $\frac{1}{0.0007247}$ , is :

**Options :**

4058595163. 10.38

4058595164. 138

4058595165. 1380

4058595166. 13.80

**Question Number : 79 Question Id : 4058591638 Question Type : MCQ Option Shuffling : Yes Is Question Mandatory : No Calculator : None Response Time : N.A Think Time : N.A Minimum Instruction Time : 0**

**Correct Marks : 1 Wrong Marks : 0.25**

यदि  $\frac{1}{7.247} = 0.138$ , तो  $\frac{1}{0.0007247}$  का मान है :

**Options :**

4058595163. 10.38

4058595164. 138

4058595165. 1380

4058595166. 13.80

**Question Number : 80 Question Id : 4058591639 Question Type : MCQ Option Shuffling : Yes Is Question Mandatory : No Calculator : None Response Time : N.A Think Time : N.A Minimum Instruction Time : 0**

**Correct Marks : 1 Wrong Marks : 0.25**

The value of  $0.\overline{18}$  is equal to :

**Options :**

$$4058595167.\overline{11}^2$$

$$4058595168.\overline{33}^2$$

$$4058595169.\overline{99}^2$$

$$4058595170.\overline{33}^8$$

**Question Number : 80 Question Id : 4058591639 Question Type : MCQ Option Shuffling : Yes Is**

**Question Mandatory : No Calculator : None Response Time : N.A Think Time : N.A Minimum**

**Instruction Time : 0**

**Correct Marks : 1 Wrong Marks : 0.25**

**0. $\overline{18}$  का मान किसके समान है ?**

**Options :**

$$4058595167.\overline{11}^2$$

$$4058595168.\overline{33}^2$$

$$4058595169.\overline{99}^2$$

$$4058595170.\overline{33}^8$$

<b>Section Id :</b>	405859101
<b>Section Number :</b>	4
<b>Section type :</b>	Online
<b>Mandatory or Optional :</b>	Mandatory
<b>Number of Questions :</b>	25
<b>Number of Questions to be attempted :</b>	25
<b>Section Marks :</b>	25
<b>Enable Mark as Answered Mark for Review and Clear Response :</b>	Yes
<b>Maximum Instruction Time :</b>	0
<b>Sub-Section Number :</b>	1
<b>Sub-Section Id :</b>	405859105
<b>Question Shuffling Allowed :</b>	Yes
<b>Is Section Default? :</b>	null

**Question Number : 81 Question Id : 4058591640 Question Type : MCQ Option Shuffling : Yes Is Question Mandatory : No Calculator : None Response Time : N.A Think Time : N.A Minimum Instruction Time : 0**

**Correct Marks : 1 Wrong Marks : 0.25**

P × Q means P is the mother of Q, P @ Q means P is son of Q, P # Q means P is the daughter of Q, P \$ Q means P is the brother of Q, P % Q means P is the father of Q.

If H \$ T # P × G @ M % F % R, How is F related to H?

**Options :**

4058595171. Son

4058595172. Brother

4058595173. Father's brother

4058595174. Brother's son

**Question Number : 81 Question Id : 4058591640 Question Type : MCQ Option Shuffling : Yes Is Question Mandatory : No Calculator : None Response Time : N.A Think Time : N.A Minimum Instruction Time : 0**

**Correct Marks : 1 Wrong Marks : 0.25**

$P \times Q$  का अर्थ P, Q की माँ है,  $P @ Q$  का अर्थ है P, Q का बेटा है,  $P \# Q$  का अर्थ P, Q की बेटी है,  $P \$ Q$  का अर्थ है P, Q का भाई है,  $P \% Q$  का अर्थ P, Q का पिता है।

यदि  $H \$ T \# P \times G @ M \% F \% R$ , है, तो F, H से किस प्रकार सम्बन्धित है ?

**Options :**

4058595171. बेटा

4058595172. भाई

4058595173. पिता का भाई

4058595174. भाई का बेटा

**Question Number : 82 Question Id : 4058591641 Question Type : MCQ Option Shuffling : Yes Is Question Mandatory : No Calculator : None Response Time : N.A Think Time : N.A Minimum Instruction Time : 0**

**Correct Marks : 1 Wrong Marks : 0.25**

A cube is painted yellow on two adjacent faces, blue on the two faces opposite to the yellow faces and Black on the remaining faces. It is then cut into 216 smaller cubes of equal size.

How many cubes are painted on all faces?

**Options :**

4058595175. 36

4058595176. 25

4058595177. 20

4058595178. 0

**Question Number : 82 Question Id : 4058591641 Question Type : MCQ Option Shuffling : Yes Is**

**Question Mandatory : No Calculator : None Response Time : N.A Think Time : N.A Minimum**

**Instruction Time : 0**

**Correct Marks : 1 Wrong Marks : 0.25**

यदि किसी घन के दो पार्श्वस्थ फलकों को पीला रंग दिया गया है, पीले फलकों के सामने के दो फलकों को नीला और शेष फलकों को काला रंग दिया गया। इसे समान आकार के 216 छोटे घनों के रूप में काट दिया गया। कितने घनों के सभी पृष्ठ रंगे हुए होंगे ?

**Options :**

4058595175. 36

4058595176. 25

4058595177. 20

4058595178. 0

**Question Number : 83 Question Id : 4058591642 Question Type : MCQ Option Shuffling : Yes Is**

**Question Mandatory : No Calculator : None Response Time : N.A Think Time : N.A Minimum**

**Instruction Time : 0**

**Correct Marks : 1 Wrong Marks : 0.25**

Which of the following terms given in options will replace the question mark in the following series?

AZ26, DV88, GS133, JQ170, ?

**Options :**

4058595179. MQ 201

4058595180. NQ 204

4058595181. MP 197

4058595182. MP 208

**Question Number : 83 Question Id : 4058591642 Question Type : MCQ Option Shuffling : Yes Is**

**Question Mandatory : No Calculator : None Response Time : N.A Think Time : N.A Minimum**

**Instruction Time : 0**

**Correct Marks : 1 Wrong Marks : 0.25**

निम्नलिखित श्रृंखला में प्रश्न चिह्न को विकल्पों में प्रदत्त निम्नलिखित पदों में से कौन प्रतिस्थापित करेगा ?

AZ26, DV88, GS133, JQ170, ?

**Options :**

4058595179. MQ 201

4058595180. NQ 204

4058595181. MP 197

4058595182. MP 208

**Question Number : 84 Question Id : 4058591643 Question Type : MCQ Option Shuffling : Yes Is**

**Question Mandatory : No Calculator : None Response Time : N.A Think Time : N.A Minimum**

**Instruction Time : 0**

**Correct Marks : 1 Wrong Marks : 0.25**

Seven friends N, T, P, R, Q, G and H are sitting in a row facing towards north but not necessarily in the same order. There are only two friends between T and R. G is sitting second to the left of N and R is sitting third to the right of T. H is sitting third to right of P. Who is sitting immediate left of R?

**Options :**

4058595183. T

4058595184. H

4058595185. P

4058595186. Q

**Question Number : 84 Question Id : 4058591643 Question Type : MCQ Option Shuffling : Yes Is**

**Question Mandatory : No Calculator : None Response Time : N.A Think Time : N.A Minimum**

**Instruction Time : 0**

**Correct Marks : 1 Wrong Marks : 0.25**

उत्तर दिशा की ओर अभिमुख सात मित्र N, T, P, R, Q, G और H एक पंक्ति में बैठे हैं, पर यह आवश्यक नहीं है कि वे एक ही क्रम में बैठे हुए हैं। T और R के मध्य केवल दो मित्र हैं। N के बायीं ओर दूसरे स्थान पर G बैठा है और T के दायीं ओर तीसरे स्थान पर R बैठा है। P के दायीं ओर तीसरे स्थान पर H बैठा है। R के निकटतम बायीं ओर कौन बैठा है ?

**Options :**

4058595183. T

4058595184. H

4058595185. P

4058595186. Q

**Question Number : 85 Question Id : 4058591644 Question Type : MCQ Option Shuffling : Yes Is**

**Question Mandatory : No Calculator : None Response Time : N.A Think Time : N.A Minimum**

**Instruction Time : 0**

**Correct Marks : 1 Wrong Marks : 0.25**

Bharti is 8 ranks ahead of Divya who ranks twenty sixth in a class of 42. What is Bharti's rank from the last?



**Options :**

4058595187. 9<sup>th</sup>

4058595188. 24<sup>th</sup>

4058595189. 25<sup>th</sup>

4058595190. 34<sup>th</sup>

**Question Number : 85 Question Id : 4058591644 Question Type : MCQ Option Shuffling : Yes Is Question Mandatory : No Calculator : None Response Time : N.A Think Time : N.A Minimum Instruction Time : 0**

**Correct Marks : 1 Wrong Marks : 0.25**

42 बच्चों की कक्षा में दिव्या 26 वें स्थान पर है तथा भारती दिव्या से 8 स्थान आगे है । अंत से भारती कौनसे स्थान पर है ?

**Options :**

4058595187. 9 वें

4058595188. 24 वें

4058595189. 25 वें

4058595190. 34 वें

**Question Number : 86 Question Id : 4058591645 Question Type : MCQ Option Shuffling : Yes Is Question Mandatory : No Calculator : None Response Time : N.A Think Time : N.A Minimum Instruction Time : 0**

**Correct Marks : 1 Wrong Marks : 0.25**

P, Q, R, S, T, U and V are sitting around a circular table facing the centre S is not neighbour of R and T. P is the neighbour of Q and R. V, Who is second to the left of S, is the neighbour of T and U. Which of the following is not true?

**Options :**

4058595191. R is to the immediate right of P

4058595192. U is between T and S

4058595193. S is between Q and U

4058595194. Q is third left of T

**Question Number : 86 Question Id : 4058591645 Question Type : MCQ Option Shuffling : Yes Is**

**Question Mandatory : No Calculator : None Response Time : N.A Think Time : N.A Minimum**

**Instruction Time : 0**

**Correct Marks : 1 Wrong Marks : 0.25**

किसी वृत्ताकार मेज पर केन्द्र की ओर अभिमुख होकर P, Q, R, S, T, U और V बैठे हुए हैं । S, R और T का पड़ोसी नहीं है। P, Q और R का पड़ोसी है । V, जो कि S के बायीं ओर दूसरे स्थान पर है, वह T और U का पड़ोसी है । निम्नलिखित में से कौन सत्य नहीं है ?

**Options :**

4058595191. R, P के निकटतम दायीं ओर है ।

4058595192. T और S के मध्य U है ।

4058595193. Q और U के मध्य S है ।

4058595194. T के बायीं ओर तीसरे स्थान पर Q है ।

**Question Number : 87 Question Id : 4058591646 Question Type : MCQ Option Shuffling : Yes Is**

**Question Mandatory : No Calculator : None Response Time : N.A Think Time : N.A Minimum**

**Instruction Time : 0**

**Correct Marks : 1 Wrong Marks : 0.25**

What will be the difference between the sum of the odd digits and sum of the even digits in the number 857423?

**Options :**

4058595195. 0

4058595196. 1

4058595197. 2

4058595198. 3

**Question Number : 87 Question Id : 4058591646 Question Type : MCQ Option Shuffling : Yes Is**

**Question Mandatory : No Calculator : None Response Time : N.A Think Time : N.A Minimum**

**Instruction Time : 0**

**Correct Marks : 1 Wrong Marks : 0.25**

संख्या 857423 में सम अंकों के योग और विषम अंकों के योग के बीच कितना अन्तर होगा ?

**Options :**

4058595195. 0

4058595196. 1

4058595197. 2

4058595198. 3

**Question Number : 88 Question Id : 4058591647 Question Type : MCQ Option Shuffling : Yes Is**

**Question Mandatory : No Calculator : None Response Time : N.A Think Time : N.A Minimum**

**Instruction Time : 0**

**Correct Marks : 1 Wrong Marks : 0.25**

Find the next term in the series

BMO, EOQ, HQS, ?

**Options :**

4058595199. SOV

4058595200. KSU

4058595201. SOW

4058595202. LMN

**Question Number : 88 Question Id : 4058591647 Question Type : MCQ Option Shuffling : Yes Is**

**Question Mandatory : No Calculator : None Response Time : N.A Think Time : N.A Minimum**

**Instruction Time : 0**

**Correct Marks : 1 Wrong Marks : 0.25**

श्रृंखला में आगामी पद ज्ञात कीजिए :

BMO, EOQ, HQS, ?

**Options :**

4058595199. SOV

4058595200. KSU

4058595201. SOW

4058595202. LMN

**Question Number : 89 Question Id : 4058591648 Question Type : MCQ Option Shuffling : Yes Is**

**Question Mandatory : No Calculator : None Response Time : N.A Think Time : N.A Minimum**

**Instruction Time : 0**

**Correct Marks : 1 Wrong Marks : 0.25**

Three statements are followed by four conclusions I, II, III and IV. Take the given statements to be true even if they seem to be at variance with commonly known facts and decide which of the given conclusions logically follow from the given statements.

Statement :

All animals are vegetables.

All fishes are vegetables.

All birds are fishes.

Conclusions :

I. Some birds are animals.

II. Some vegetables are fishes.

III. Some vegetables are animals.

IV. All birds are vegetables.

**Options :**

4058595203. Only I, II and III follow

4058595204. Only I, III and IV follow

4058595205. Only II and III follow

4058595206. Only II, III and IV follow

**Question Number : 89 Question Id : 4058591648 Question Type : MCQ Option Shuffling : Yes Is**

**Question Mandatory : No Calculator : None Response Time : N.A Think Time : N.A Minimum**

**Instruction Time : 0**

**Correct Marks : 1 Wrong Marks : 0.25**

तीन कथनों के पश्चात् चार निष्कर्ष I, II, III और IV दिए गए हैं। दिए गए कथनों को सही माने भले ही वे सामान्यतया ज्ञात तथ्यों से भिन्न प्रतीत होते हो और निर्णय करे कि दिए गए कथनों से कौन से निष्कर्ष तार्किक रूप से निकलते हैं।

कथन :

सभी पशु वनस्पति हैं।

सभी मछली वनस्पति हैं।

सभी पक्षी मछली हैं।

निष्कर्ष :

I. कुछ पक्षी पशु हैं।

II. कुछ वनस्पति मछली हैं।

III. कुछ वनस्पति पशु हैं।

IV. सभी पक्षी वनस्पति हैं।

**Options :**

4058595203. केवल I, II और III निकलते हैं।

4058595204. केवल I, III और IV निकलते हैं।

4058595205. केवल II और III निकलते हैं।

4058595206. केवल II, III और IV निकलते हैं।

**Question Number : 90 Question Id : 4058591649 Question Type : MCQ Option Shuffling : Yes Is**

**Question Mandatory : No Calculator : None Response Time : N.A Think Time : N.A Minimum**

**Instruction Time : 0**

**Correct Marks : 1 Wrong Marks : 0.25**

If  $\times$  mean  $\div$ ,  $-$  means  $\times$ ,  $\div$  means  $+$  and  $+$  means  $-$ , then  $(3 - 15 \div 19) \times 8 + 6 = ?$

**Options :**

4058595207.  $- 1$

4058595208. 2

4058595209. 4

4058595210. 8

**Question Number : 90 Question Id : 4058591649 Question Type : MCQ Option Shuffling : Yes Is Question Mandatory : No Calculator : None Response Time : N.A Think Time : N.A Minimum Instruction Time : 0**

**Correct Marks : 1 Wrong Marks : 0.25**

यदि  $\times$  का अर्थ  $\div$ ,  $-$  का अर्थ  $\times$ ,  $\div$  का अर्थ  $+$  तथा  $+$  का अर्थ  $-$ , है, तो  $(3 - 15 \div 19) \times 8 + 6 = ?$

**Options :**

4058595207. - 1

4058595208. 2

4058595209. 4

4058595210. 8

**Question Number : 91 Question Id : 4058591650 Question Type : MCQ Option Shuffling : Yes Is Question Mandatory : No Calculator : None Response Time : N.A Think Time : N.A Minimum Instruction Time : 0**

**Correct Marks : 1 Wrong Marks : 0.25**

In an imaginary language, the digits 0, 1, 2, 3, 4, 5, 6, 7, 8 and 9 are substituted by a, b, c, d, e, f, g, h, i and j. And 10 is written as ba

Then

$dc \times f - (bf - d) \times d$  is equal to ?

**Options :**

4058595211.  abb

4058595212.  abe

4058595213.  bce

4058595214.  bcf

**Question Number : 91 Question Id : 4058591650 Question Type : MCQ Option Shuffling : Yes Is**

**Question Mandatory : No Calculator : None Response Time : N.A Think Time : N.A Minimum**

**Instruction Time : 0**

**Correct Marks : 1 Wrong Marks : 0.25**

एक काल्पनिक भाषा में, अंकों 0, 1, 2, 3, 4, 5, 6, 7, 8 तथा 9 को a, b, c, d, e, f, g, h, i तथा j से प्रतिस्थापित किया गया तथा 10 को ba लिखा गया है। तो

$dc \times f - (bf - d) \times d$  बराबर है ?

**Options :**

4058595211.  abb

4058595212.  abe

4058595213.  bce

4058595214.  bcf

**Question Number : 92 Question Id : 4058591651 Question Type : MCQ Option Shuffling : Yes Is**

**Question Mandatory : No Calculator : None Response Time : N.A Think Time : N.A Minimum**

**Instruction Time : 0**

**Correct Marks : 1 Wrong Marks : 0.25**



Three of the following four are alike in a certain way on the basis of the arrangement given below, hence form a group.

P 2 R % 3 J F # 9 T \* 2 I 6 H B 8 A \$ 5 G K 7 D # 4

Which one does not belong to the group?

**Options :**

4058595215. RP3

4058595216. KG7

4058595217. 9F \*

4058595218. 8H \$

**Question Number : 92 Question Id : 4058591651 Question Type : MCQ Option Shuffling : Yes Is**

**Question Mandatory : No Calculator : None Response Time : N.A Think Time : N.A Minimum**

**Instruction Time : 0**

**Correct Marks : 1 Wrong Marks : 0.25**

निम्नलिखित चार में से तीन नीचे दी गयी व्यवस्था के आधार पर एक सुनिश्चित तरीके से एक समान हैं, अतः एक समूह की रचना करते हैं

P 2 R % 3 J F # 9 T \* 2 I 6 H B 8 A \$ 5 G K 7 D # 4

कौन समूह से सम्बन्धित नहीं है

**Options :**

4058595215. RP3

4058595216. KG7

4058595217. 9F \*

4058595218. 8H \$

**Question Number : 93 Question Id : 4058591652 Question Type : MCQ Option Shuffling : Yes Is**

**Question Mandatory : No Calculator : None Response Time : N.A Think Time : N.A Minimum**

**Instruction Time : 0**

**Correct Marks : 1 Wrong Marks : 0.25**

If each symbol is first converted into numeral and then all the numerals are converted into English letters in the following arrangement.

F 6 G @ 7 N \$ 2 T Y 5 ⊙ G # Q 8 M \* 9 Z % B A 4

Then how many converted English letters will be there in the above arrangement of elements?

**Options :**

4058595219. 12

4058595220. 13

4058595221. 7

4058595222. 24

**Question Number : 93 Question Id : 4058591652 Question Type : MCQ Option Shuffling : Yes Is**

**Question Mandatory : No Calculator : None Response Time : N.A Think Time : N.A Minimum**

**Instruction Time : 0**

**Correct Marks : 1 Wrong Marks : 0.25**

यदि पहले प्रत्येक चिह्न को संख्याओं में बदला जाए और फिर निम्नलिखित व्यवस्था में सभी संख्याओं को अंग्रेजी के वर्णों में बदला जाए

F 6 G @ 7 N \$ 2 T Y 5 ⊙ G # Q 8 M \* 9 Z % B A 4

तो तत्वों की उपर्युक्त व्यवस्था में उनमें से कितने बदले हुए अंग्रेजी के वर्ण होंगे

**Options :**

4058595219. 12

4058595220. 13

4058595221. 7

4058595222. 24

**Question Number : 94 Question Id : 4058591653 Question Type : MCQ Option Shuffling : Yes Is Question Mandatory : No Calculator : None Response Time : N.A Think Time : N.A Minimum Instruction Time : 0**

**Correct Marks : 1 Wrong Marks : 0.25**

Friday was a holiday for Republic day. 13<sup>th</sup> of the next month is again a holiday for some festival. What day was it on 13<sup>th</sup>?

**Options :**

4058595223. Sunday

4058595224. Monday

4058595225. Tuesday

4058595226. Wednesday

**Question Number : 94 Question Id : 4058591653 Question Type : MCQ Option Shuffling : Yes Is Question Mandatory : No Calculator : None Response Time : N.A Think Time : N.A Minimum Instruction Time : 0**

**Correct Marks : 1 Wrong Marks : 0.25**

गणतंत्र दिवस हेतु शुक्रवार को अवकाश था । अगले महीने 13 वें दिन किसी उत्सव के लिए पुनः अवकाश है । 13 वें दिन कौन सा दिन था ?

**Options :**

4058595223. रविवार

4058595224. सोमवार

4058595225. मंगलवार

4058595226. बुधवार

**Question Number : 95 Question Id : 4058591654 Question Type : MCQ Option Shuffling : Yes Is**

**Question Mandatory : No Calculator : None Response Time : N.A Think Time : N.A Minimum**

**Instruction Time : 0**

**Correct Marks : 1 Wrong Marks : 0.25**

A man starts from point A and travelled 20 km toward North and then 12 km towards west to reach point B. He took a Southward turn and went 5 km to reach point C. Again he turned Eastward and went 10 km. to reach point D. Lastly he travelled 15 km turning to his right. What is the distance and in which direction is he from his starting point?

**Options :**

4058595227. 15 km, West

4058595228. 2 km, South

4058595229. 12 km, South

4058595230. 2 km, West

**Question Number : 95 Question Id : 4058591654 Question Type : MCQ Option Shuffling : Yes Is**

**Question Mandatory : No Calculator : None Response Time : N.A Think Time : N.A Minimum**

**Instruction Time : 0**

**Correct Marks : 1 Wrong Marks : 0.25**

एक व्यक्ति बिन्दु A से यात्रा आरम्भ करता है और बिन्दु B तक पहुँचने के लिए उत्तर की ओर 20 किमी यात्रा करता है और फिर पश्चिम की ओर 12 किमी यात्रा करता है। वह दक्षिण की ओर मुड़ा और बिन्दु C तक पहुँचने के लिए 5 किमी गया। फिर वह पूर्व की ओर मुड़ा और बिन्दु D तक पहुँचने के लिए 10 किमी गया। अंत में, उसने अपने दायीं ओर घूम कर 15 किमी यात्रा की। वह अपनी यात्रा के प्रारम्भिक बिंदु के अब कितनी दूर तथा किस दिशा में है?

**Options :**

4058595227. 15 किमी, पश्चिम

4058595228. 2 किमी, दक्षिण

4058595229. 12 किमी, दक्षिण

4058595230. 2 किमी, पश्चिम

**Question Number : 96 Question Id : 4058591655 Question Type : MCQ Option Shuffling : Yes Is**

**Question Mandatory : No Calculator : None Response Time : N.A Think Time : N.A Minimum**

**Instruction Time : 0**

**Correct Marks : 1 Wrong Marks : 0.25**

A man starts walking in the North direction. Which of the following options will bring him going Southward?

**Options :**

4058595231. Three consecutive left turns

4058595232. One left turn and then another right turn

4058595233. Two consecutive right turns

4058595234. One right turn and then another left turn

**Question Number : 96 Question Id : 4058591655 Question Type : MCQ Option Shuffling : Yes Is**

**Question Mandatory : No Calculator : None Response Time : N.A Think Time : N.A Minimum**

**Instruction Time : 0**

**Correct Marks : 1 Wrong Marks : 0.25**

एक व्यक्ति उत्तर दिशा की ओर चलना शुरू करता है। नीचे दिया गया कौन-सा विकल्प उसे दक्षिण की ओर लेकर जाएगा ?

**Options :**

4058595231. तीन निरंतर बाएँ घुमाव

4058595232. एक बायाँ घुमाव तथा एक अन्य दायाँ घुमाव

4058595233. दो निरंतर दाएँ घुमाव

4058595234. एक दायाँ घुमाव तथा एक अन्य बायाँ घुमाव

**Question Number : 97 Question Id : 4058591656 Question Type : MCQ Option Shuffling : Yes Is**

**Question Mandatory : No Calculator : None Response Time : N.A Think Time : N.A Minimum**

**Instruction Time : 0**

**Correct Marks : 1 Wrong Marks : 0.25**

In the question given below, there are two statements labelled as Assertion (A) and Reason (R).

Assertion (A) : Bats can fly in the night.

Reason (R) : Bats emit ultrasonics.

Make your answer as per the codes provided below:

**Options :**

4058595235. Both (A) and (R) are true and (R) is the correct explanation of (A)

4058595236. Both (A) and (R) are true but (R) is not the correct explanation of (A)

4058595237. (A) is true but (R) is false

4058595238. (A) is false but (R) is true

**Question Number : 97 Question Id : 4058591656 Question Type : MCQ Option Shuffling : Yes Is Question Mandatory : No Calculator : None Response Time : N.A Think Time : N.A Minimum Instruction Time : 0**

**Correct Marks : 1 Wrong Marks : 0.25**

नीचे दिए गए प्रश्न में, अभिकथन (A) और कारण (R) नाम से दो कथन दिए गए हैं।

अभिकथन (A) : चमगादड़ रात में उड़ सकते हैं।

कारण (R) : चमगादड़ पराध्वानिकी उत्सर्जन करते हैं।

नीचे दिए गए कूटों के अनुसार, अपना उत्तर चिह्नित कीजिए :

**Options :**

4058595235. (A) और (R) दोनों सही हैं, तथा (R), (A) का सही स्पष्टीकरण है।

4058595236. (A) और (R) दोनों सही हैं, किन्तु (R), (A) का सही स्पष्टीकरण नहीं है।

4058595237. (A) सत्य है, किन्तु (R) असत्य है।

4058595238. (A) असत्य है, किन्तु (R) सत्य है।

**Question Number : 98 Question Id : 4058591657 Question Type : MCQ Option Shuffling : Yes Is Question Mandatory : No Calculator : None Response Time : N.A Think Time : N.A Minimum Instruction Time : 0**

**Correct Marks : 1 Wrong Marks : 0.25**

A statement is followed by three assumptions numbered (I), (II) and (III). Consider the statement and the following assumptions and decide which of the assumptions is implicit in the statement.

Statement : The potential of any individual can be developed with the help of co-operative social relationship in our society.

Assumptions :

- (I) In any society, we can establish and system the cooperative environment.
- (II) There is an aspiration of prosperity in every society.
- (III) Every person wants to develop his/her potential

**Options :**

4058595239. Both (I) and (II) are implicit

4058595240. All (I), (II) and (III) are implicit

4058595241. Both (II) and (III) are implicit

4058595242. Both (I) and (III) and implicit

**Question Number : 98 Question Id : 4058591657 Question Type : MCQ Option Shuffling : Yes Is**

**Question Mandatory : No Calculator : None Response Time : N.A Think Time : N.A Minimum**

**Instruction Time : 0**

**Correct Marks : 1 Wrong Marks : 0.25**

एक कथन के पश्चात् तीन मान्यताएँ (I), (II) और (III) दी गई हैं। कथन और अनुवर्ती मान्यताओं पर विचार कीजिए और निर्णय करें कि कौन सी मान्यता कथन में अंतर्निहित है।

कथन : किसी व्यक्ति की क्षमता का विकास अपने समाज में सहकारी सामाजिक संबंधों की सहायता से किया जा सकता है।

मान्यता :

- (I) किसी भी समाज में हम सहकारी परिवेश को स्थापित और संपोषित कर सकते हैं।
- (II) प्रत्येक समाज में समृद्धि की आकांक्षा होती है।
- (III) प्रत्येक पुरुष/महिला अपनी क्षमता का विकास करना चाहता है/चाहती है।



**Options :**

4058595239. दोनों मान्यताएँ (I) और (II) अंतर्निहित हैं।

4058595240. सभी मान्यताएँ (I), (II) और (III) अंतर्निहित हैं।

4058595241. दोनों मान्यताएँ (II) और (III) अंतर्निहित हैं।

4058595242. दोनों मान्यताएँ (I) और (III) अंतर्निहित हैं।

**Question Number : 99 Question Id : 4058591658 Question Type : MCQ Option Shuffling : Yes Is Question Mandatory : No Calculator : None Response Time : N.A Think Time : N.A Minimum Instruction Time : 0**

**Correct Marks : 1 Wrong Marks : 0.25**

In a family there are seven members A, B, C, D, E, F and G. A is married to B. C is the brother of A. D is the only son of C. Who is the father of E. B is the daughter-in-law of F. G is father of C.

How many female members are there in the family?

**Options :**

4058595243. 2

4058595244. 4

4058595245. 1

4058595246. 3

**Question Number : 99 Question Id : 4058591658 Question Type : MCQ Option Shuffling : Yes Is Question Mandatory : No Calculator : None Response Time : N.A Think Time : N.A Minimum Instruction Time : 0**

**Correct Marks : 1 Wrong Marks : 0.25**

एक परिवार में सात सदस्य A, B, C, D, E, F और G हैं। A का विवाह B से हुआ है। C, A का भाई है। D, C का एकमात्र पुत्र है जो E के पिता हैं। B, F की पुत्रवधु है। G, C के पिता हैं।

परिवार में कितनी महिला सदस्य हैं ?

**Options :**

4058595243. 2

4058595244. 4

4058595245. 1

4058595246. 3

**Question Number : 100 Question Id : 4058591659 Question Type : MCQ Option Shuffling : Yes**

**Is Question Mandatory : No Calculator : None Response Time : N.A Think Time : N.A**

**Minimum Instruction Time : 0**

**Correct Marks : 1 Wrong Marks : 0.25**

In the following letter series. Some of the letters are missing which are given in that order as one of the alternatives below it. Choose the correct alternative

a b c \_ d d a \_ c c d \_ b c c \_ \_ a b

**Options :**

4058595247. a b c d a

4058595248. c d b c a

4058595249. c b a c d

4058595250. b c a c d

Question Number : 100 Question Id : 4058591659 Question Type : MCQ Option Shuffling : Yes

Is Question Mandatory : No Calculator : None Response Time : N.A Think Time : N.A

Minimum Instruction Time : 0

Correct Marks : 1 Wrong Marks : 0.25

निम्नलिखित अक्षर श्रृंखला में, कुछ अक्षर लुप्त हैं जो उसके नीचे दिए गए विकल्पों में उसी क्रम में दिए गए हैं। सही विकल्प का चयन कीजिए।

a b c \_ d d a \_ c c d \_ b c c \_ \_ a b

Options :

4058595247. a b c d a

4058595248. c d b c a

4058595249. c b a c d

4058595250. b c a c d

Question Number : 101 Question Id : 4058591660 Question Type : MCQ Option Shuffling : Yes

Is Question Mandatory : No Calculator : None Response Time : N.A Think Time : N.A

Minimum Instruction Time : 0

Correct Marks : 1 Wrong Marks : 0.25

If in a certain code language 'INDIA WON GOLD MEDAL' is written as 'JKRJG YBK VBPR NARGP' then how will you write 'LAID DOWN' in the same code language?

Options :

4058595251. P G J R R B Y P

4058595252. P G J R R A Y N

4058595253. P G J R R B Y K

4058595254. P G J R R A Y K

**Question Number : 101 Question Id : 4058591660 Question Type : MCQ Option Shuffling : Yes**

**Is Question Mandatory : No Calculator : None Response Time : N.A Think Time : N.A**

**Minimum Instruction Time : 0**

**Correct Marks : 1 Wrong Marks : 0.25**

यदि एक निश्चित कूट भाषा में 'INDIA WON GOLD MEDAL' को 'JKRJG YBK VBPR NARGP' लिख जाता है, तो उसी भाषा में आप 'LAID DOWN' को किस प्रकार लिखेंगे ?

**Options :**

4058595251. P G J R R B Y P

4058595252. P G J R R A Y N

4058595253. P G J R R B Y K

4058595254. P G J R R A Y K

**Question Number : 102 Question Id : 4058591661 Question Type : MCQ Option Shuffling : Yes**

**Is Question Mandatory : No Calculator : None Response Time : N.A Think Time : N.A**

**Minimum Instruction Time : 0**

**Correct Marks : 1 Wrong Marks : 0.25**

In a certain code 'SHE LOVES WINTER' is written as '2a 3b 4c' 'WINTER IS COLD' written as '2a 7b 8c' and 'SHE IS BEAUTIFUL' is written as '5a 4c 8c' then how is 'BEAUTIFUL' coded in the same language

**Options :**

4058595255. 8c

4058595256. 5a

4058595257. 4c

4058595258. 3b

**Question Number : 102 Question Id : 4058591661 Question Type : MCQ Option Shuffling : Yes**

**Is Question Mandatory : No Calculator : None Response Time : N.A Think Time : N.A**

**Minimum Instruction Time : 0**

**Correct Marks : 1 Wrong Marks : 0.25**

एक निश्चित कूट भाषा में, 'SHE LOVES WINTER' को '2a 3b 4c' लिखा जाता है 'WINTER IS COLD' को '2a 7b 8c' लिखा जाता है तथा 'SHE IS BEAUTIFUL' को '5a 4c 8c' लिखा जाता है तो उसी भाषा में 'BEAUTIFUL' का कूट-शब्द क्या होगा ?

**Options :**

4058595255. 8c

4058595256. 5a

4058595257. 4c

4058595258. 3b

**Question Number : 103 Question Id : 4058591662 Question Type : MCQ Option Shuffling : Yes**

**Is Question Mandatory : No Calculator : None Response Time : N.A Think Time : N.A**

**Minimum Instruction Time : 0**

**Correct Marks : 1 Wrong Marks : 0.25**

The six faces of a cube are coloured Black, Brown, Green, Red, White and Blue, such that Red is opposite black, Green is between Red and Black, blue is adjacent to White, Brown is adjacent to Blue and Red is at the bottom. From the following which are three adjacent colors?

**Options :**

4058595259. Black, blue, Red

4058595260. Black, Brown, White

4058595261. Black, Blue, White

4058595262. Brown, Red, White

**Question Number : 103 Question Id : 4058591662 Question Type : MCQ Option Shuffling : Yes**

**Is Question Mandatory : No Calculator : None Response Time : N.A Think Time : N.A**

**Minimum Instruction Time : 0**

**Correct Marks : 1 Wrong Marks : 0.25**

एक घन के छः फलंको को काला, भूरा, हरा, लाल, सफेद तथा नीले रंग से इस प्रकार रंगा गया है कि लाल, काले के विपरीत है, हरा रंग काले तथा लाल के मध्य है, नीला, सफेद के संलग्न है, भूरा नीले पृष्ठ के संलग्न है तथा लाल नीचे है। इनमें से कौन-से तीन रंग निकटवर्ती है।

**Options :**

4058595259. काला, नीला, लाल

4058595260. काला, भूरा, सफेद

4058595261. काला, नीला, सफेद

4058595262. भूरा, लाल, सफेद

**Question Number : 104 Question Id : 4058591663 Question Type : MCQ Option Shuffling : Yes**

**Is Question Mandatory : No Calculator : None Response Time : N.A Think Time : N.A**

**Minimum Instruction Time : 0**

**Correct Marks : 1 Wrong Marks : 0.25**

Find the missing term in the following number series

3, 10, 101, ?

**Options :**

4058595263. 10101

4058595264. 10201

4058595265. 10202

4058595266. 10102

**Question Number : 104 Question Id : 4058591663 Question Type : MCQ Option Shuffling : Yes**

**Is Question Mandatory : No Calculator : None Response Time : N.A Think Time : N.A**

**Minimum Instruction Time : 0**

**Correct Marks : 1 Wrong Marks : 0.25**

निम्नलिखित संख्या श्रृंखला में लुप्त पद ज्ञात कीजिए ।

3, 10, 101, ?

**Options :**

4058595263. 10101

4058595264. 10201

4058595265. 10202

4058595266. 10102

**Question Number : 105 Question Id : 4058591664 Question Type : MCQ Option Shuffling : Yes**

**Is Question Mandatory : No Calculator : None Response Time : N.A Think Time : N.A**

**Minimum Instruction Time : 0**

**Correct Marks : 1 Wrong Marks : 0.25**

Find the missing term in the following numbers series

240, ?, 120, 40, 10, 2,....

**Options :**

4058595267. 180

4058595268. 160

4058595269. 200

4058595270. 240

**Question Number : 105 Question Id : 4058591664 Question Type : MCQ Option Shuffling : Yes**

**Is Question Mandatory : No Calculator : None Response Time : N.A Think Time : N.A**

**Minimum Instruction Time : 0**

**Correct Marks : 1 Wrong Marks : 0.25**

निम्नलिखित संख्या श्रृंखला में लुप्त पद ज्ञात कीजिए :

240, 2, 120, 40, 10, 2

**Options :**

4058595267. 180

4058595268. 160

4058595269. 200

4058595270. 240

## **General Knowledge and Current Affairs**

<b>Section Id :</b>	405859102
<b>Section Number :</b>	5
<b>Section type :</b>	Online
<b>Mandatory or Optional :</b>	Mandatory
<b>Number of Questions :</b>	15
<b>Number of Questions to be attempted :</b>	15



**Section Marks :** 15  
**Enable Mark as Answered Mark for Review and Clear Response :** Yes  
**Maximum Instruction Time :** 0  
**Sub-Section Number :** 1  
**Sub-Section Id :** 405859106  
**Question Shuffling Allowed :** Yes  
**Is Section Default? :** null

**Question Number : 106 Question Id : 4058591665 Question Type : MCQ Option Shuffling : Yes**

**Is Question Mandatory : No Calculator : None Response Time : N.A Think Time : N.A**

**Minimum Instruction Time : 0**

**Correct Marks : 1 Wrong Marks : 0.25**

Match List I with List II with reference to Nobel Prize 2023

LIST I (Winner)		LIST II (Area)	
A.	Jon Fosse	I.	Physics
B.	Narges Mohammadi	II.	Physiology
C.	Piere Agastini, Feren Krausz and Anne L Huiller	III.	Literature
D.	Katalin Kariko	IV.	Peace

Choose the correct answer from the options given below:

**Options :**

4058595271. A-I, B-III, C-II, D-IV

4058595272. A-III, B-I, C-IV, D-II

4058595273. A-III, B-IV, C-I, D-II

4058595274. A-III, B-IV, C-II, D-I

**Question Number : 106 Question Id : 4058591665 Question Type : MCQ Option Shuffling : Yes**

**Is Question Mandatory : No Calculator : None Response Time : N.A Think Time : N.A**

**Minimum Instruction Time : 0**

**Correct Marks : 1 Wrong Marks : 0.25**

नोबल पुरस्कार 2023 के संदर्भ में सूची I का मिलान सूची II से कीजिए :

सूची I (विजेता)		सूची II (क्षेत्र)	
A.	जोन फोसे	I.	भौतिकशास्त्र
B.	नर्गिस मोहम्मदी	II.	शरीर क्रिया विज्ञान
C.	पियरे अगस्तीनी, फेरेन क्राज और एने एल ह्यूलर	III.	साहित्य
D.	केटालिन करिको	IV.	शांति

नीचे दिए गए विकल्पों में से सही उत्तर का चयन कीजिए:

**Options :**

4058595271. A-I, B-III, C-II, D-IV

4058595272. A-III, B-I, C-IV, D-II

4058595273. A-III, B-IV, C-I, D-II

4058595274. A-III, B-IV, C-II, D-I

**Question Number : 107 Question Id : 4058591666 Question Type : MCQ Option Shuffling : Yes**

**Is Question Mandatory : No Calculator : None Response Time : N.A Think Time : N.A**

**Minimum Instruction Time : 0**

**Correct Marks : 1 Wrong Marks : 0.25**

Statement-A : The G 20 was founded in 1999 after the Asian Financial crisis as a forum for the finance ministers and Central Bank Governors to discuss global economic and financial issues.

Statement-B : It is held biannually, under the leadership of a rotating presidency.

Choose the correct answer from the options given below :

**Options :**

4058595275. Statements A and B are correct.

4058595276. Statements A and B both are incorrect.

4058595277. Statement A is correct, B is incorrect.

4058595278. Statement A is incorrect, B is correct.

**Question Number : 107 Question Id : 4058591666 Question Type : MCQ Option Shuffling : Yes**

**Is Question Mandatory : No Calculator : None Response Time : N.A Think Time : N.A**

**Minimum Instruction Time : 0**

**Correct Marks : 1 Wrong Marks : 0.25**

कथन-A : G 20 की स्थापना 1999 में एशियन वित्तीय संकट के बाद वित्त मंत्रियों एवं सेंट्रल बैंक गवर्नर्स को वैश्विक आर्थिक एवं वित्तीय मामलों पर विवेचन करने के लिए एक मंच प्रदान करने के लिए हुई थी ।

कथन-B : यह दो वर्ष में एक बार आवर्ती अध्यक्षता के नेतृत्व में होती है।

नीचे दिए गए विकल्पों में से सही उत्तर का चयन कीजिए :

**Options :**

4058595275. कथन A तथा B सही हैं ।

4058595276. कथन A तथा B दोनों गलत हैं ।

4058595277. कथन A सही है, B गलत है ।

4058595278. कथन A गलत है, B सही है ।

**Question Number : 108 Question Id : 4058591667 Question Type : MCQ Option Shuffling : Yes**

**Is Question Mandatory : No Calculator : None Response Time : N.A Think Time : N.A**

**Minimum Instruction Time : 0**

**Correct Marks : 1 Wrong Marks : 0.25**

Who invented the world's first printing press which enabled the mass production of books?

**Options :**

4058595279. Matthew Web

4058595280. Maurice Garin

4058595281. Johannes Gutenberg

4058595282. Al Jolson

**Question Number : 108 Question Id : 4058591667 Question Type : MCQ Option Shuffling : Yes**

**Is Question Mandatory : No Calculator : None Response Time : N.A Think Time : N.A**

**Minimum Instruction Time : 0**

**Correct Marks : 1 Wrong Marks : 0.25**

विश्व की पहली प्रिंटिंग प्रेस का आविष्कार किसने किया जिससे किताबों का बड़ी संख्या में उत्पादन संभव हो सका?

**Options :**

4058595279. मैथ्यू वेब

4058595280. मॉरिस गेरिन

4058595281. जोहानेस गुटनबर्ग

4058595282. एल जॉल्सन

**Question Number : 109 Question Id : 4058591668 Question Type : MCQ Option Shuffling : Yes**

**Is Question Mandatory : No Calculator : None Response Time : N.A Think Time : N.A**

**Minimum Instruction Time : 0**

**Correct Marks : 1 Wrong Marks : 0.25**

Statement A : In 1236, Sultan Iltutmish's daughter, Raziyya, became Sultan.

Statement B : The chronicler of the age Minhaj-i-Siraj and other Nobles were happy at her attempts to rule independently. She ruled for atleast two decades.

Choose the correct answer from the options given below:

**Options :**

4058595283. Statements A and B are correct.

4058595284. Statements A and B are in correct.

4058595285. Statements A is correct; B is in correct.

4058595286. Statements A in correct; B is correct.

**Question Number : 109 Question Id : 4058591668 Question Type : MCQ Option Shuffling : Yes**

**Is Question Mandatory : No Calculator : None Response Time : N.A Think Time : N.A**

**Minimum Instruction Time : 0**

**Correct Marks : 1 Wrong Marks : 0.25**

कथन A : 1236, में सुल्तान इल्तुतमिश की बेटी रजिया सुल्तान बन गई।

कथन B : उस युग के इतिहासकार मिनहाज-ई-सिराज और अन्य शासक वर्ग उसके स्वतंत्र रूप से शासन करने के प्रयासों से प्रसन्न थे। रजिया ने कम से कम दो दशक तक शासन किया।

उपरोक्त कथन के आलोक में, नीचे दिए गए विकल्पों में से सही उत्तर का चयन कीजिए:

**Options :**

4058595283. कथन A और B दोनों सही हैं ।

4058595284. कथन A और B दोनों गलत हैं ।

4058595285. कथन A सही है, कथन B गलत है ।

4058595286. कथन A गलत है, B सही है ।

Question Number : 110 Question Id : 4058591669 Question Type : MCQ Option Shuffling : Yes

Is Question Mandatory : No Calculator : None Response Time : N.A Think Time : N.A

Minimum Instruction Time : 0

Correct Marks : 1 Wrong Marks : 0.25

Who is the author of the book, "The Social contract"?

Options :

4058595287. Socrates

4058595288. Rousseau

4058595289. Aristotle

4058595290. Plato

Question Number : 110 Question Id : 4058591669 Question Type : MCQ Option Shuffling : Yes

Is Question Mandatory : No Calculator : None Response Time : N.A Think Time : N.A

Minimum Instruction Time : 0

Correct Marks : 1 Wrong Marks : 0.25

पुस्तक 'द सोशल कॉन्ट्रैक्ट' का लेखक कौन है?

Options :

4058595287. सुकरात

4058595288. रूसो

4058595289. अरस्तू

4058595290. प्लेटो

**Question Number : 111 Question Id : 4058591670 Question Type : MCQ Option Shuffling : Yes**

**Is Question Mandatory : No Calculator : None Response Time : N.A Think Time : N.A**

**Minimum Instruction Time : 0**

**Correct Marks : 1 Wrong Marks : 0.25**

Gulf of Mannar, Dibru Saikhowa and Pachmadhi are the examples of :

**Options :**

4058595291. Bioreserves

4058595292. Botanical gardens

4058595293. Wildlife reserves

4058595294. Thorn forests

**Question Number : 111 Question Id : 4058591670 Question Type : MCQ Option Shuffling : Yes**

**Is Question Mandatory : No Calculator : None Response Time : N.A Think Time : N.A**

**Minimum Instruction Time : 0**

**Correct Marks : 1 Wrong Marks : 0.25**

मन्नार की खाड़ी, डिब्रू सैखोवा और पंचमढ़ी निम्नांकित के उदाहरण हैं :

**Options :**

4058595291. जैव आरक्षिति

4058595292. वनस्पति उद्यान

4058595293. वन्यजीव आरक्षिति (अभ्यारण्य)

4058595294. काँटेदार वन

Question Number : 112 Question Id : 4058591671 Question Type : MCQ Option Shuffling : Yes

Is Question Mandatory : No Calculator : None Response Time : N.A Think Time : N.A

Minimum Instruction Time : 0

Correct Marks : 1 Wrong Marks : 0.25

Which of the following locally called as *Susu* are found in the fresh waters of River Ganga and River Brahmaputra and are an indication of the health of the river.

Options :

4058595295. Whales

4058595296. Blind Dolphins

4058595297. Turtles

4058595298. Mangrooves

Question Number : 112 Question Id : 4058591671 Question Type : MCQ Option Shuffling : Yes

Is Question Mandatory : No Calculator : None Response Time : N.A Think Time : N.A

Minimum Instruction Time : 0

Correct Marks : 1 Wrong Marks : 0.25

निम्नांकित में से क्या जिसे स्थानीय स्तर पर 'सुसु' कहा जाता है गंगानदी के ताजा जल और ब्रह्मपुत्र नदी में पाया जाता है और यह नदी के स्वास्थ्य का निरूपक होता है।

Options :

4058595295. हेल

4058595296. ब्लाइंड डॉल्फिन (अंध डॉल्फिन)

4058595297. कछुआ

4058595298. कच्छ वनस्पति



Question Number : 113 Question Id : 4058591672 Question Type : MCQ Option Shuffling : Yes  
Is Question Mandatory : No Calculator : None Response Time : N.A Think Time : N.A  
Minimum Instruction Time : 0

Correct Marks : 1 Wrong Marks : 0.25

Match Column I with Column II.

Column I		Column II	
A.	Inner Himalayas	I.	Indus and Satluj
b.	Lesser Himalayas	II.	Satluj and Kali
c.	Punjab Himalayas	III.	Himadri
d.	Kumaon Himalayas	IV.	Himachal

Choose the correct answer from the options given below:

Options :

4058595299. A-I, B-III, C-II, D-IV

4058595300. A-III, B-II, C-IV, D-I

4058595301. A-II, B-III, C-I, D-IV

4058595302. A-III, B-IV, C-I, D-II

Question Number : 113 Question Id : 4058591672 Question Type : MCQ Option Shuffling : Yes  
Is Question Mandatory : No Calculator : None Response Time : N.A Think Time : N.A  
Minimum Instruction Time : 0

Correct Marks : 1 Wrong Marks : 0.25

स्तंभ I और स्तंभ II को सुमेलित कीजिए ।

स्तंभ I		स्तंभ II	
A.	आंतरिक हिमालयी क्षेत्र	I.	सिंधु और सतलुज
B	न्यूनतर हिमालयी क्षेत्र	II	सतलुज और काली
C	पंजाब हिमालयी क्षेत्र	III	हिमाद्रि
D	कुमाऊँ हिमालयी क्षेत्र	IV	हिमाचल

नीचे दिए गए विकल्पों में से सही उत्तर का चयन कीजिए:

**Options :**

4058595299. A-I, B-III, C-II, D-IV

4058595300. A-III, B-II, C-IV, D-I

4058595301. A-II, B-III, C-I, D-IV

4058595302. A-III, B-IV, C-I, D-II

**Question Number : 114 Question Id : 4058591673 Question Type : MCQ Option Shuffling : Yes**

**Is Question Mandatory : No Calculator : None Response Time : N.A Think Time : N.A**

**Minimum Instruction Time : 0**

**Correct Marks : 1 Wrong Marks : 0.25**

Which of the following equation correctly represents speed?

**Options :**

4058595303.  $\text{Speed} = \frac{\text{Time}}{\text{Distance}}$

4058595304.  $\text{Speed} = \text{Distance} \times \text{Time}$

4058595305.  $\text{Speed} = \frac{\text{Distance}}{\text{Time}}$

4058595306.  $\text{Speed} = \frac{1}{\text{Distance} \times \text{Time}}$

**Question Number : 114 Question Id : 4058591673 Question Type : MCQ Option Shuffling : Yes**

**Is Question Mandatory : No Calculator : None Response Time : N.A Think Time : N.A**

**Minimum Instruction Time : 0**

**Correct Marks : 1 Wrong Marks : 0.25**

निम्नांकित में से कौन सा समीकरण गति को निरूपित करता है?

**Options :**

$$\text{गति} = \frac{\text{समय}}{\text{दूरी}}$$

4058595303.

4058595304.  $\text{गति} = \text{दूरी} \times \text{समय}$

$$\text{गति} = \frac{\text{दूरी}}{\text{समय}}$$

4058595305.

4058595306.  $\text{गति} = \frac{1}{\text{दूरी} \times \text{समय}}$

**Question Number : 115 Question Id : 4058591674 Question Type : MCQ Option Shuffling : Yes**

**Is Question Mandatory : No Calculator : None Response Time : N.A Think Time : N.A**

**Minimum Instruction Time : 0**

**Correct Marks : 1 Wrong Marks : 0.25**

Match the items given in Column I with those in Column II.

Column I		Column II	
A.	Unisexual flowers	I.	Unisexual plants
B.	Bisexual flowers	II.	Bisexual plants
C.	Corn and Papaya	III.	Contain only pistil or stamens
D.	Mustard and rose	IV.	Contain both pistil and stamens

Choose the correct answer from the options given below:

**Options :**

4058595307. A-III, B-IV, C-II, D-I

4058595308. A-IV, B-III, C-I, D-II

4058595309. A-III, B-IV, C-I, D-II

4058595310. A-IV, B-III, C-II, D-I

Question Number : 115 Question Id : 4058591674 Question Type : MCQ Option Shuffling : Yes

Is Question Mandatory : No Calculator : None Response Time : N.A Think Time : N.A

Minimum Instruction Time : 0

Correct Marks : 1 Wrong Marks : 0.25

कॉलम I और कॉलम II को सुमेलित कीजिए

कॉलम I		कॉलम II	
A.	एकलिंगी पुष्प	I.	एकलिंगी पादप
B.	उभयलिंगी पुष्प	II.	उभयलिंगी पादप
C.	अनाज और पपीता	III.	जिसमें केवल स्त्रीकेसर या पुंकेसर होता है।
D.	सरसों और गुलाब	IVG.	इसमें स्त्रीकेसर और पुंकेसर दोनों होते हैं।

नीचे दिए गए विकल्पों में से सही उत्तर का चयन कीजिए:

Options :

4058595307. A-III, B-IV, C-II, D-I

4058595308. A-IV, B-III, C-I, D-II

4058595309. A-III, B-IV, C-I, D-II

4058595310. A-IV, B-III, C-II, D-I

Question Number : 116 Question Id : 4058591675 Question Type : MCQ Option Shuffling : Yes

Is Question Mandatory : No Calculator : None Response Time : N.A Think Time : N.A

Minimum Instruction Time : 0

Correct Marks : 1 Wrong Marks : 0.25

What is the movement of air from high pressure area to low pressure area called?

Options :

4058595311. Wind

4058595312. Cyclone

4058595313. Hurricane

4058595314. Torpedo

**Question Number : 116 Question Id : 4058591675 Question Type : MCQ Option Shuffling : Yes**

**Is Question Mandatory : No Calculator : None Response Time : N.A Think Time : N.A**

**Minimum Instruction Time : 0**

**Correct Marks : 1 Wrong Marks : 0.25**

उच्च दाब क्षेत्र से निम्न दाब क्षेत्र की ओर वायु के बहाव को क्या कहा जाता है ?

**Options :**

4058595311. हवा

4058595312. साइक्लोन

4058595313. हरिकेन

4058595314. टॉरपिडो

**Question Number : 117 Question Id : 4058591676 Question Type : MCQ Option Shuffling : Yes**

**Is Question Mandatory : No Calculator : None Response Time : N.A Think Time : N.A**

**Minimum Instruction Time : 0**

**Correct Marks : 1 Wrong Marks : 0.25**

Who is the leader of the ruling party in the Lok Sabha in India?

**Options :**

4058595315. President

4058595316. Speaker of the Lok Sabha

4058595317. Prime Minister

4058595318. Chief Minister of the State

**Question Number : 117 Question Id : 4058591676 Question Type : MCQ Option Shuffling : Yes**

**Is Question Mandatory : No Calculator : None Response Time : N.A Think Time : N.A**

**Minimum Instruction Time : 0**

**Correct Marks : 1 Wrong Marks : 0.25**

भारत की लोकसभा में सत्ताधारी दल का नेता कौन होता है?

**Options :**

4058595315. राष्ट्रपति

4058595316. लोकसभा का स्पीकर

4058595317. प्रधानमंत्री

4058595318. राज्य का मुख्यमंत्री

**Question Number : 118 Question Id : 4058591677 Question Type : MCQ Option Shuffling : Yes**

**Is Question Mandatory : No Calculator : None Response Time : N.A Think Time : N.A**

**Minimum Instruction Time : 0**

**Correct Marks : 1 Wrong Marks : 0.25**

Which one of the following is NOT one of the systems of Indian Philosophy?

**Options :**

4058595319. Vaisheshika

4058595320. Nyaya

4058595321. Yoga

4058595322. Upanishads

**Question Number : 118 Question Id : 4058591677 Question Type : MCQ Option Shuffling : Yes**

**Is Question Mandatory : No Calculator : None Response Time : N.A Think Time : N.A**

**Minimum Instruction Time : 0**

**Correct Marks : 1 Wrong Marks : 0.25**

निम्नलिखित में से क्या भारतीय दर्शन की एक व्यवस्था नहीं है ?

**Options :**

4058595319. वैशेशिका

4058595320. न्याय

4058595321. योग

4058595322. उपनिषद

**Question Number : 119 Question Id : 4058591678 Question Type : MCQ Option Shuffling : Yes**

**Is Question Mandatory : No Calculator : None Response Time : N.A Think Time : N.A**

**Minimum Instruction Time : 0**

**Correct Marks : 1 Wrong Marks : 0.25**

In which language did Buddha teach?

**Options :**

4058595323. Pali

4058595324. Prakrit

4058595325. Sanskrit

4058595326. Brahmi

**Question Number : 119 Question Id : 4058591678 Question Type : MCQ Option Shuffling : Yes  
Is Question Mandatory : No Calculator : None Response Time : N.A Think Time : N.A  
Minimum Instruction Time : 0**

**Correct Marks : 1 Wrong Marks : 0.25**

बुद्ध ने किस भाषा में शिक्षा प्रदान की ?

**Options :**

4058595323. पालि

4058595324. प्राकृत

4058595325. संस्कृत

4058595326. ब्राह्मी

**Question Number : 120 Question Id : 4058591679 Question Type : MCQ Option Shuffling : Yes  
Is Question Mandatory : No Calculator : None Response Time : N.A Think Time : N.A  
Minimum Instruction Time : 0**

**Correct Marks : 1 Wrong Marks : 0.25**

Which Fundamental Right will be violated if a 13-year old child is working in a factory manufacturing carpets?

**Options :**

4058595327. Right to Equality



4058595328. Right to Freedom

4058595329. Right against Exploitation

4058595330. Right to Freedom of Religion

**Question Number : 120 Question Id : 4058591679 Question Type : MCQ Option Shuffling : Yes**

**Is Question Mandatory : No Calculator : None Response Time : N.A Think Time : N.A**

**Minimum Instruction Time : 0**

**Correct Marks : 1 Wrong Marks : 0.25**

यदि कालीन के किसी कारखाने में 13 वर्ष की आयु का कोई बच्चा काम करता है, ऐसी स्थिति में निम्नलिखित में से किस मौलिक अधिकार का उल्लंघन होगा?

**Options :**

4058595327. समानता का अधिकार

4058595328. स्वतंत्रता का अधिकार

4058595329. शोषण के विरुद्ध अधिकार

4058595330. धार्मिक स्वतंत्रता का अधिकार

# National Testing Agency

**Question Paper Name :** MDES CAT 05th Feb 2024 Shift 2  
**Subject Name :** MDES CAT  
**Creation Date :** 2024-02-05 21:32:50  
**Duration :** 180  
**Total Marks :** 100  
**Display Marks:** Yes

## MDES CAT

**Group Number :** 1  
**Group Id :** 95617728  
**Group Maximum Duration :** 0  
**Group Minimum Duration :** 180  
**Show Attended Group? :** No  
**Edit Attended Group? :** No  
**Break time :** 0  
**Group Marks :** 100  
**Is this Group for Examiner? :** No  
**Examiner permission :** Cant View  
**Show Progress Bar? :** No

## MDES CAT

**Section Id :** 95617792  
**Section Number :** 1

<b>Section type :</b>	Offline
<b>Mandatory or Optional :</b>	Mandatory
<b>Number of Questions :</b>	3
<b>Number of Questions to be attempted :</b>	3
<b>Section Marks :</b>	100
<b>Enable Mark as Answered Mark for Review and Clear Response :</b>	Yes
<b>Maximum Instruction Time :</b>	0
<b>Sub-Section Number :</b>	1
<b>Sub-Section Id :</b>	956177104
<b>Question Shuffling Allowed :</b>	No
<b>Is Section Default? :</b>	null

**Question Number : 1 Question Id : 9561771567 Question Type : SUBJECTIVE Consider As Subjective : Yes Calculator : None Response Time : N.A Think Time : N.A Minimum Instruction Time : 0**

**Correct Marks : 30**

Imagine and render an aerial/ bird's eye view of any **ONE** of the following taken during sunrise :

- (a) Farms during harvesting season
- (b) Coastal region
- (c) A circus setup outside the city

**Question Number : 1 Question Id : 9561771567 Question Type : SUBJECTIVE Consider As Subjective : Yes Calculator : None Response Time : N.A Think Time : N.A Minimum Instruction Time : 0**

**Correct Marks : 30**

निम्नलिखित में से किसी एक का सूर्योदय के समय लिया गया एरियल (हवाई)/बर्ड्स आई (विहंगम) दृश्य की कल्पना कीजिए और उसे चित्रित कीजिए :

- (a) कटाई की ऋतु में खेत
- (b) तटीय क्षेत्र
- (c) नगर के बाहर बनाए गए एक सर्कस का सेटअप

<b>Sub-Section Number :</b>	2
<b>Sub-Section Id :</b>	956177105
<b>Question Shuffling Allowed :</b>	No
<b>Is Section Default? :</b>	null

**Question Number : 2 Question Id : 9561771568 Question Type : SUBJECTIVE Consider As Subjective : Yes Calculator : None Response Time : N.A Think Time : N.A Minimum Instruction Time : 0**

**Correct Marks : 40**

Design and illustrate any ONE of the below-mentioned paradoxical objects (opposite or unlikely purposes).

- (a) A water amusement park in the desert
- (b) A window facing a wall
- (c) A signpost for ants

Describe your concept in 150 words.

**Question Number : 2 Question Id : 9561771568 Question Type : SUBJECTIVE Consider As Subjective : Yes Calculator : None Response Time : N.A Think Time : N.A Minimum Instruction Time : 0**

**Correct Marks : 40**

नीचे उल्लेखित विरोधाभासी वस्तुओं (विरोधी अथवा असंभावित उद्देश्यों वाली) में से किसी एक की रूपरेखा/डिजाइन बनाइए और उसको चित्रित कीजिए :

- (a) रेगिस्तान में एक जलीय मनोरंजन पार्क
- (b) दीवार की तरफ खुलती हुई एक खिड़की
- (c) चींटियों के लिए साइनपोस्ट

अपनी संकल्पना (कनसेप्ट) का 150 शब्दों में वर्णन कीजिए।

**Sub-Section Number :** 3  
**Sub-Section Id :** 956177106  
**Question Shuffling Allowed :** No  
**Is Section Default? :** null

**Question Number : 3 Question Id : 9561771569 Question Type : SUBJECTIVE Consider As Subjective : Yes Calculator : None Response Time : N.A Think Time : N.A Minimum Instruction Time : 0**

**Correct Marks : 30**

Conceptualize any ONE of the following spaces to address global warming and reduce carbon footprint. Describe in not more than 250 words :

- (a) Café
- (b) Dental clinic
- (c) Wedding hall

**Question Number : 3 Question Id : 9561771569 Question Type : SUBJECTIVE Consider As Subjective : Yes Calculator : None Response Time : N.A Think Time : N.A Minimum Instruction Time : 0**

**Correct Marks : 30**

भूमंडलीय तापन और कार्बन फुटप्रिंट को कम करने को संबोधित करने के लिए निम्नलिखित में से किसी एक स्थान की संकल्पना कीजिए। इसका वर्णन अधिकतम 250 शब्दों में कीजिए :

- (a) कैफे
- (b) दंत चिकित्सालय
- (c) विवाह समारोह कक्ष/हॉल

# National Testing Agency

**Question Paper Name :** MFM 05th Feb 2024 Shift 1  
**Subject Name :** MFM  
**Creation Date :** 2024-02-05 17:53:44  
**Duration :** 180  
**Total Marks :** 150  
**Display Marks:** Yes

## MFM

**Group Number :** 1  
**Group Id :** 40585926  
**Group Maximum Duration :** 0  
**Group Minimum Duration :** 180  
**Show Attended Group? :** No  
**Edit Attended Group? :** No  
**Break time :** 0  
**Group Marks :** 150  
**Is this Group for Examiner? :** No  
**Examiner permission :** Cant View  
**Show Progress Bar? :** No

## Communication Ability & English Comprehension

**Section Id :** 405859126  
**Section Number :** 1

<b>Section type :</b>	Online
<b>Mandatory or Optional :</b>	Mandatory
<b>Number of Questions :</b>	33
<b>Number of Questions to be attempted :</b>	33
<b>Section Marks :</b>	50
<b>Enable Mark as Answered Mark for Review and Clear Response :</b>	Yes
<b>Maximum Instruction Time :</b>	0
<b>Sub-Section Number :</b>	1
<b>Sub-Section Id :</b>	405859157
<b>Question Shuffling Allowed :</b>	Yes
<b>Is Section Default? :</b>	null

**Question Number : 1 Question Id : 4058592262 Question Type : MCQ Option Shuffling : Yes Is Question Mandatory : No Calculator : None Response Time : N.A Think Time : N.A Minimum Instruction Time : 0**

**Correct Marks : 1 Wrong Marks : 0.25**

Choose the appropriate idiom to fill in the blank :

On arrival of the police the agitators ran \_\_\_\_\_.

**Options :**

4058597531. kith and kin

4058597532. helter skelter

4058597533. loaves and fish

4058597534. rank and file

**Question Number : 1 Question Id : 4058592262 Question Type : MCQ Option Shuffling : Yes Is Question Mandatory : No Calculator : None Response Time : N.A Think Time : N.A Minimum**

**Instruction Time : 0**

**Correct Marks : 1 Wrong Marks : 0.25**

Choose the appropriate idiom to fill in the blank :

On arrival of the police the agitators ran \_\_\_\_\_.

**Options :**

4058597531. kith and kin

4058597532. helter skelter

4058597533. loaves and fish

4058597534. rank and file

**Question Number : 2 Question Id : 4058592263 Question Type : MCQ Option Shuffling : Yes Is**

**Question Mandatory : No Calculator : None Response Time : N.A Think Time : N.A Minimum**

**Instruction Time : 0**

**Correct Marks : 1 Wrong Marks : 0.25**

Correct the given sentence :

He had rather starved than beg.

**Options :**

4058597535. He had rather to starve than beg.

4058597536. He had rather starve than beg.

4058597537. He has rather starved than begged.

4058597538. He had rather starved than begged.

**Question Number : 2 Question Id : 4058592263 Question Type : MCQ Option Shuffling : Yes Is**



**Question Mandatory : No Calculator : None Response Time : N.A Think Time : N.A Minimum**

**Instruction Time : 0**

**Correct Marks : 1 Wrong Marks : 0.25**

Correct the given sentence :

He had rather starved than beg.

**Options :**

4058597535. He had rather to starve than beg.

4058597536. He had rather starve than beg.

4058597537. He has rather starved than begged.

4058597538. He had rather starved than begged.

**Question Number : 3 Question Id : 4058592264 Question Type : MCQ Option Shuffling : Yes Is**

**Question Mandatory : No Calculator : None Response Time : N.A Think Time : N.A Minimum**

**Instruction Time : 0**

**Correct Marks : 1 Wrong Marks : 0.25**

Correct the given sentence -

Either the teacher or the students have left his classroom unlocked.

**Options :**

4058597539. Either the teacher or the students has left his classroom unlocked.

4058597540. Either the teacher or the students have left his classroom unlocked.

4058597541. Either the teacher or the students have left their classroom unlocked.

4058597542. Either the teacher or the students has left their classroom unlocked.

**Question Number : 3 Question Id : 4058592264 Question Type : MCQ Option Shuffling : Yes Is**

**Question Mandatory : No Calculator : None Response Time : N.A Think Time : N.A Minimum**

**Instruction Time : 0**

**Correct Marks : 1 Wrong Marks : 0.25**

Correct the given sentence -

Either the teacher or the students have left his classroom unlocked.

**Options :**

4058597539. Either the teacher or the students has left his classroom unlocked.

4058597540. Either the teacher or the students have left his classroom unlocked.

4058597541. Either the teacher or the students have left their classroom unlocked.

4058597542. Either the teacher or the students has left their classroom unlocked.

**Question Number : 4 Question Id : 4058592265 Question Type : MCQ Option Shuffling : Yes Is**

**Question Mandatory : No Calculator : None Response Time : N.A Think Time : N.A Minimum**

**Instruction Time : 0**

**Correct Marks : 1 Wrong Marks : 0.25**

Choose the word with nearly the same meaning as the given word :

INTERVENTION

**Options :**

4058597543. interception

4058597544. interruption

4058597545. mediation

4058597546. meddling

**Question Number : 4 Question Id : 4058592265 Question Type : MCQ Option Shuffling : Yes Is Question Mandatory : No Calculator : None Response Time : N.A Think Time : N.A Minimum Instruction Time : 0**

**Correct Marks : 1 Wrong Marks : 0.25**

Choose the word with nearly the same meaning as the given word :

INTERVENTION

**Options :**

4058597543. interception

4058597544. interruption

4058597545. mediation

4058597546. meddling

**Question Number : 5 Question Id : 4058592266 Question Type : MCQ Option Shuffling : Yes Is Question Mandatory : No Calculator : None Response Time : N.A Think Time : N.A Minimum Instruction Time : 0**

**Correct Marks : 1 Wrong Marks : 0.25**

Choose the word with nearly the same meaning as the given word :

INSOLVENT

**Options :**

4058597547. flourishing

4058597548. bankrupt

4058597549. soluble

4058597550. opprobrious

**Question Number : 5 Question Id : 4058592266 Question Type : MCQ Option Shuffling : Yes Is Question Mandatory : No Calculator : None Response Time : N.A Think Time : N.A Minimum Instruction Time : 0**

**Correct Marks : 1 Wrong Marks : 0.25**

Choose the word with nearly the same meaning as the given word :

INSOLVENT

**Options :**

4058597547. flourishing

4058597548. bankrupt

4058597549. soluble

4058597550. opprobrious

**Question Number : 6 Question Id : 4058592267 Question Type : MCQ Option Shuffling : Yes Is Question Mandatory : No Calculator : None Response Time : N.A Think Time : N.A Minimum Instruction Time : 0**

**Correct Marks : 1 Wrong Marks : 0.25**

Choose the word with nearly the same meaning as the given word :

LAUNCH

**Options :**

4058597551. review

4058597552. begin

4058597553. propel

4058597554. force

**Question Number : 6 Question Id : 4058592267 Question Type : MCQ Option Shuffling : Yes Is Question Mandatory : No Calculator : None Response Time : N.A Think Time : N.A Minimum Instruction Time : 0**

**Correct Marks : 1 Wrong Marks : 0.25**

Choose the word with nearly the same meaning as the given word :

LAUNCH

**Options :**

4058597551. review

4058597552. begin

4058597553. propel

4058597554. force

**Question Number : 7 Question Id : 4058592268 Question Type : MCQ Option Shuffling : Yes Is Question Mandatory : No Calculator : None Response Time : N.A Think Time : N.A Minimum Instruction Time : 0**

**Correct Marks : 1 Wrong Marks : 0.25**

Give one word for the underlined expression :

She works in an office with no work, but high pay.

**Options :**

4058597555. honorary

4058597556. sinecure

4058597557. ex-officio

4058597558. reticent

**Question Number : 7 Question Id : 4058592268 Question Type : MCQ Option Shuffling : Yes Is Question Mandatory : No Calculator : None Response Time : N.A Think Time : N.A Minimum Instruction Time : 0**

**Correct Marks : 1 Wrong Marks : 0.25**

Give one word for the underlined expression :

She works in an office with no work, but high pay.

**Options :**

4058597555. honorary

4058597556. sinecure

4058597557. ex-officio

4058597558. reticent

**Question Number : 8 Question Id : 4058592269 Question Type : MCQ Option Shuffling : Yes Is Question Mandatory : No Calculator : None Response Time : N.A Think Time : N.A Minimum Instruction Time : 0**

**Correct Marks : 1 Wrong Marks : 0.25**

Give one word for the given expression :

Passing through the gate without permission.

**Options :**

4058597559. abscond

4058597560. gatecrash

4058597561. bypass

4058597562. tresspass

**Question Number : 8 Question Id : 4058592269 Question Type : MCQ Option Shuffling : Yes Is  
Question Mandatory : No Calculator : None Response Time : N.A Think Time : N.A Minimum  
Instruction Time : 0**

**Correct Marks : 1 Wrong Marks : 0.25**

Give one word for the given expression :

Passing through the gate without permission.

**Options :**

4058597559. abscond

4058597560. gatecrash

4058597561. bypass

4058597562. tresspass

**Question Number : 9 Question Id : 4058592270 Question Type : MCQ Option Shuffling : Yes Is  
Question Mandatory : No Calculator : None Response Time : N.A Think Time : N.A Minimum  
Instruction Time : 0**

**Correct Marks : 1 Wrong Marks : 0.25**

Give one word for the given expression :

Constant effort to achieve something.

**Options :**

4058597563. patience

4058597564. vigour

4058597565. hardship

4058597566. perseverance

**Question Number : 9 Question Id : 4058592270 Question Type : MCQ Option Shuffling : Yes Is Question Mandatory : No Calculator : None Response Time : N.A Think Time : N.A Minimum Instruction Time : 0**

**Correct Marks : 1 Wrong Marks : 0.25**

Give one word for the given expression :

Constant effort to achieve something.

**Options :**

4058597563. patience

4058597564. vigour

4058597565. hardship

4058597566. perseverance

**Question Number : 10 Question Id : 4058592271 Question Type : MCQ Option Shuffling : Yes Is Question Mandatory : No Calculator : None Response Time : N.A Think Time : N.A Minimum Instruction Time : 0**

**Correct Marks : 1 Wrong Marks : 0.25**

Fill in the blanks :

The \_\_\_\_\_ of glory lead but to the \_\_\_\_\_.

**Options :**

4058597567. ways, frustration



4058597568. paths, grave

4058597569. acts, pride

4058597570. achievements, suffering

**Question Number : 10 Question Id : 4058592271 Question Type : MCQ Option Shuffling : Yes Is**

**Question Mandatory : No Calculator : None Response Time : N.A Think Time : N.A Minimum**

**Instruction Time : 0**

**Correct Marks : 1 Wrong Marks : 0.25**

Fill in the blanks :

The \_\_\_\_\_ of glory lead but to the \_\_\_\_\_.

**Options :**

4058597567. ways, frustration

4058597568. paths, grave

4058597569. acts, pride

4058597570. achievements, suffering

**Question Number : 11 Question Id : 4058592272 Question Type : MCQ Option Shuffling : Yes Is**

**Question Mandatory : No Calculator : None Response Time : N.A Think Time : N.A Minimum**

**Instruction Time : 0**

**Correct Marks : 1 Wrong Marks : 0.25**

Fill in the blank :

Last Monday \_\_\_\_\_ a bad day for me as I \_\_\_\_\_ the whole of it in hospital bed.

**Options :**

4058597571. was, had spend

4058597572. had been, was spending

4058597573. was, spent

4058597574. were, spent

**Question Number : 11 Question Id : 4058592272 Question Type : MCQ Option Shuffling : Yes Is Question Mandatory : No Calculator : None Response Time : N.A Think Time : N.A Minimum Instruction Time : 0**

**Correct Marks : 1 Wrong Marks : 0.25**

Fill in the blank :

Last Monday \_\_\_\_\_ a bad day for me as I \_\_\_\_\_ the whole of it in hospital bed.

**Options :**

4058597571. was, had spend

4058597572. had been, was spending

4058597573. was, spent

4058597574. were, spent

**Question Number : 12 Question Id : 4058592273 Question Type : MCQ Option Shuffling : Yes Is Question Mandatory : No Calculator : None Response Time : N.A Think Time : N.A Minimum Instruction Time : 0**

**Correct Marks : 1 Wrong Marks : 0.25**

Fill in the blank :

Had Savita worked hard, she \_\_\_\_\_ have passed the examination.

**Options :**

4058597575. will

4058597576. would

4058597577. shall

4058597578. should

**Question Number : 12 Question Id : 4058592273 Question Type : MCQ Option Shuffling : Yes Is Question Mandatory : No Calculator : None Response Time : N.A Think Time : N.A Minimum Instruction Time : 0**

**Correct Marks : 1 Wrong Marks : 0.25**

Fill in the blank :

Had Savita worked hard, she \_\_\_\_\_ have passed the examination.

**Options :**

4058597575. will

4058597576. would

4058597577. shall

4058597578. should

**Question Number : 13 Question Id : 4058592274 Question Type : MCQ Option Shuffling : Yes Is Question Mandatory : No Calculator : None Response Time : N.A Think Time : N.A Minimum Instruction Time : 0**

**Correct Marks : 1 Wrong Marks : 0.25**

Fill the in blank :

\_\_\_\_\_ you, please, stop making noise?

**Options :**

4058597579. **must**

4058597580. **need**

4058597581. **shall**

4058597582. **will**

**Question Number : 13 Question Id : 4058592274 Question Type : MCQ Option Shuffling : Yes Is**

**Question Mandatory : No Calculator : None Response Time : N.A Think Time : N.A Minimum**

**Instruction Time : 0**

**Correct Marks : 1 Wrong Marks : 0.25**

Fill the in blank :

\_\_\_\_\_ you, please, stop making noise?

**Options :**

4058597579. **must**

4058597580. **need**

4058597581. **shall**

4058597582. **will**

**Question Number : 14 Question Id : 4058592275 Question Type : MCQ Option Shuffling : Yes Is**

**Question Mandatory : No Calculator : None Response Time : N.A Think Time : N.A Minimum**

**Instruction Time : 0**

**Correct Marks : 1 Wrong Marks : 0.25**

Fill in the blank :

Bhoomi \_\_\_\_\_ stamps since childhood.

**Options :**

4058597583. was collecting

4058597584. has been collecting

4058597585. were collecting

4058597586. have had been collecting

**Question Number : 14 Question Id : 4058592275 Question Type : MCQ Option Shuffling : Yes Is**

**Question Mandatory : No Calculator : None Response Time : N.A Think Time : N.A Minimum**

**Instruction Time : 0**

**Correct Marks : 1 Wrong Marks : 0.25**

Fill in the blank :

Bhoomi \_\_\_\_\_ stamps since childhood.

**Options :**

4058597583. was collecting

4058597584. has been collecting

4058597585. were collecting

4058597586. have had been collecting

**Question Number : 15 Question Id : 4058592276 Question Type : MCQ Option Shuffling : Yes Is**

**Question Mandatory : No Calculator : None Response Time : N.A Think Time : N.A Minimum**

**Instruction Time : 0**

**Correct Marks : 1 Wrong Marks : 0.25**

Fill in the blank :

Half of the apples \_\_\_\_\_ ripe.

**Options :**

4058597587. is

4058597588. are

4058597589. has

4058597590. have

**Question Number : 15 Question Id : 4058592276 Question Type : MCQ Option Shuffling : Yes Is**

**Question Mandatory : No Calculator : None Response Time : N.A Think Time : N.A Minimum**

**Instruction Time : 0**

**Correct Marks : 1 Wrong Marks : 0.25**

Fill in the blank :

Half of the apples \_\_\_\_\_ ripe.

**Options :**

4058597587. is

4058597588. are

4058597589. has

4058597590. have

**Question Number : 16 Question Id : 4058592277 Question Type : MCQ Option Shuffling : Yes Is**

**Question Mandatory : No Calculator : None Response Time : N.A Think Time : N.A Minimum**

**Instruction Time : 0**

**Correct Marks : 1 Wrong Marks : 0.25**

Choose the word opposite in meaning to the given word :

PUNGENCY

**Options :**

4058597591. VAPIDITY

4058597592. JAM

4058597593. CRUSE

4058597594. PSORA

**Question Number : 16 Question Id : 4058592277 Question Type : MCQ Option Shuffling : Yes Is**

**Question Mandatory : No Calculator : None Response Time : N.A Think Time : N.A Minimum**

**Instruction Time : 0**

**Correct Marks : 1 Wrong Marks : 0.25**

Choose the word opposite in meaning to the given word :

PUNGENCY

**Options :**

4058597591. VAPIDITY

4058597592. JAM

4058597593. CRUSE

4058597594. PSORA

**Question Number : 17 Question Id : 4058592278 Question Type : MCQ Option Shuffling : Yes Is**

**Question Mandatory : No Calculator : None Response Time : N.A Think Time : N.A Minimum**

**Instruction Time : 0**

**Correct Marks : 1 Wrong Marks : 0.25**

Choose the word opposite in meaning to the given word :

'DECIMATE'

**Options :**

4058597595. SCULL

4058597596. WALLOW

4058597597. CONNUBIAL

4058597598. UNITY

**Question Number : 17 Question Id : 4058592278 Question Type : MCQ Option Shuffling : Yes Is**

**Question Mandatory : No Calculator : None Response Time : N.A Think Time : N.A Minimum**

**Instruction Time : 0**

**Correct Marks : 1 Wrong Marks : 0.25**

Choose the word opposite in meaning to the given word :

'DECIMATE'

**Options :**

4058597595. SCULL

4058597596. WALLOW

4058597597. CONNUBIAL

4058597598. UNITY



**Question Number : 18 Question Id : 4058592279 Question Type : MCQ Option Shuffling : Yes Is**

**Question Mandatory : No Calculator : None Response Time : N.A Think Time : N.A Minimum**

**Instruction Time : 0**

**Correct Marks : 1 Wrong Marks : 0.25**

Choose the word opposite in meaning to the given word :

'PARSIMONY'

**Options :**

4058597599. LARGESS

4058597600. GERMINAL

4058597601. JOCULAR

4058597602. LIBRETTO

**Question Number : 18 Question Id : 4058592279 Question Type : MCQ Option Shuffling : Yes Is**

**Question Mandatory : No Calculator : None Response Time : N.A Think Time : N.A Minimum**

**Instruction Time : 0**

**Correct Marks : 1 Wrong Marks : 0.25**

Choose the word opposite in meaning to the given word :

'PARSIMONY'

**Options :**

4058597599. LARGESS

4058597600. GERMINAL

4058597601. JOCULAR

4058597602. LIBRETTO

**Question Number : 19 Question Id : 4058592280 Question Type : MCQ Option Shuffling : Yes Is**

**Question Mandatory : No Calculator : None Response Time : N.A Think Time : N.A Minimum**

**Instruction Time : 0**

**Correct Marks : 1 Wrong Marks : 0.25**

Choose the word similar in meaning to the given word :

'VARIEGATION'

**Options :**

4058597603. DIVERSITY

4058597604. DENSITY

4058597605. ATOMISE

4058597606. INSIPID

**Question Number : 19 Question Id : 4058592280 Question Type : MCQ Option Shuffling : Yes Is**

**Question Mandatory : No Calculator : None Response Time : N.A Think Time : N.A Minimum**

**Instruction Time : 0**

**Correct Marks : 1 Wrong Marks : 0.25**

Choose the word similar in meaning to the given word :

'VARIEGATION'

**Options :**

4058597603. DIVERSITY

4058597604. DENSITY

4058597605. ATOMISE

4058597606. INSIPID

**Question Number : 20 Question Id : 4058592281 Question Type : MCQ Option Shuffling : Yes Is**

**Question Mandatory : No Calculator : None Response Time : N.A Think Time : N.A Minimum**

**Instruction Time : 0**

**Correct Marks : 1 Wrong Marks : 0.25**

Choose the word similar in meaning to the given word :

'TAWDRY'

**Options :**

4058597607. GIMCRACK

4058597608. LACERATE

4058597609. SWAY

4058597610. LEVY

**Question Number : 20 Question Id : 4058592281 Question Type : MCQ Option Shuffling : Yes Is**

**Question Mandatory : No Calculator : None Response Time : N.A Think Time : N.A Minimum**

**Instruction Time : 0**

**Correct Marks : 1 Wrong Marks : 0.25**

Choose the word similar in meaning to the given word :

'TAWDRY'

**Options :**

4058597607. GIMCRACK

4058597608. LACERATE

4058597609. SWAY

4058597610. LEVY

**Question Number : 21 Question Id : 4058592282 Question Type : MCQ Option Shuffling : Yes Is**

**Question Mandatory : No Calculator : None Response Time : N.A Think Time : N.A Minimum**

**Instruction Time : 0**

**Correct Marks : 1 Wrong Marks : 0.25**

Choose the word similar in meaning to the given word :

'MOGUL'

**Options :**

4058597611. MONACHISM

4058597612. BIGWIG

4058597613. SMART

4058597614. FASHION

**Question Number : 21 Question Id : 4058592282 Question Type : MCQ Option Shuffling : Yes Is**

**Question Mandatory : No Calculator : None Response Time : N.A Think Time : N.A Minimum**

**Instruction Time : 0**

**Correct Marks : 1 Wrong Marks : 0.25**

Choose the word similar in meaning to the given word :

'MOGUL'

**Options :**

4058597611. MONACHISM

4058597612. BIGWIG

4058597613. SMART

4058597614. FASHION

Question Number : 22 Question Id : 4058592283 Question Type : MCQ Option Shuffling : Yes Is

Question Mandatory : No Calculator : None Response Time : N.A Think Time : N.A Minimum

Instruction Time : 0

Correct Marks : 1 Wrong Marks : 0.25

Spot the error in the given sentence :

My friend is so rich that he is having six houses in Mumbai and four in Pune.

A

B

C

D

Options :

4058597615. A

4058597616. B

4058597617. C

4058597618. D

Question Number : 22 Question Id : 4058592283 Question Type : MCQ Option Shuffling : Yes Is

Question Mandatory : No Calculator : None Response Time : N.A Think Time : N.A Minimum

Instruction Time : 0

Correct Marks : 1 Wrong Marks : 0.25

Spot the error in the given sentence :

My friend is so rich that he is having six houses in Mumbai and four in Pune.

A

B

C

D

Options :

4058597615. A

4058597616. B

4058597617. C

4058597618. D

**Question Number : 23 Question Id : 4058592284 Question Type : MCQ Option Shuffling : Yes Is Question Mandatory : No Calculator : None Response Time : N.A Think Time : N.A Minimum Instruction Time : 0**

**Correct Marks : 1 Wrong Marks : 0.25**

Spot the error in the given sentence :

One of the most widely spread bad habit is the use of tobacco.

A

B

C

D

**Options :**

4058597619. A

4058597620. B

4058597621. C

4058597622. D

**Question Number : 23 Question Id : 4058592284 Question Type : MCQ Option Shuffling : Yes Is Question Mandatory : No Calculator : None Response Time : N.A Think Time : N.A Minimum Instruction Time : 0**

**Correct Marks : 1 Wrong Marks : 0.25**

Spot the error in the given sentence :

One of the most widely spread bad habit is the use of tobacco.

A

B

C

D

**Options :**

4058597619. A

4058597620. B

4058597621. C

4058597622. D

**Question Number : 24 Question Id : 4058592285 Question Type : MCQ Option Shuffling : Yes Is Question Mandatory : No Calculator : None Response Time : N.A Think Time : N.A Minimum Instruction Time : 0**

**Correct Marks : 1 Wrong Marks : 0.25**

Spot the error in the given sentence :

No method of making other people agree to your view point is as effective as this method.

A

B

C

D

**Options :**

4058597623. A

4058597624. B

4058597625. C

4058597626. D

**Question Number : 24 Question Id : 4058592285 Question Type : MCQ Option Shuffling : Yes Is Question Mandatory : No Calculator : None Response Time : N.A Think Time : N.A Minimum Instruction Time : 0**

**Correct Marks : 1 Wrong Marks : 0.25**

Spot the error in the given sentence :

No method of making other people agree to your view point is as effective as this method.

A

B

C

D

**Options :**

4058597623. A

4058597624. B

4058597625. C

4058597626. D

**Question Number : 25 Question Id : 4058592286 Question Type : MCQ Option Shuffling : Yes Is Question Mandatory : No Calculator : None Response Time : N.A Think Time : N.A Minimum Instruction Time : 0**

**Correct Marks : 1 Wrong Marks : 0.25**

Choose the appropriate idiom to fill in the blank :

He invited \_\_\_\_\_ in the marriage party of his younger brother.

**Options :**

4058597627. all in all

4058597628. alpha and omega

4058597629. all and sundry

4058597630. beck and call

**Question Number : 25 Question Id : 4058592286 Question Type : MCQ Option Shuffling : Yes Is Question Mandatory : No Calculator : None Response Time : N.A Think Time : N.A Minimum Instruction Time : 0**

**Correct Marks : 1 Wrong Marks : 0.25**

Choose the appropriate idiom to fill in the blank :

He invited \_\_\_\_\_ in the marriage party of his younger brother.



**Options :**

4058597627. all in all

4058597628. alpha and omega

4058597629. all and sundry

4058597630. beck and call

**Question Number : 26 Question Id : 4058592287 Question Type : MCQ Option Shuffling : Yes Is Question Mandatory : No Calculator : None Response Time : N.A Think Time : N.A Minimum Instruction Time : 0**

**Correct Marks : 1 Wrong Marks : 0.25**

Choose the most appropriate option from the following :

'To check by Jowl'

**Options :**

4058597631. to be very near to each other.

4058597632. to aspire for impossible thing.

4058597633. to make minor changes.

4058597634. to be kept waiting.

**Question Number : 26 Question Id : 4058592287 Question Type : MCQ Option Shuffling : Yes Is Question Mandatory : No Calculator : None Response Time : N.A Think Time : N.A Minimum Instruction Time : 0**

**Correct Marks : 1 Wrong Marks : 0.25**

Choose the most appropriate option from the following :

'To check by Jowl'

**Options :**

4058597631. to be very near to each other.

4058597632. to aspire for impossible thing.

4058597633. to make minor changes.

4058597634. to be kept waiting.

**Question Number : 27 Question Id : 4058592288 Question Type : MCQ Option Shuffling : Yes Is Question Mandatory : No Calculator : None Response Time : N.A Think Time : N.A Minimum Instruction Time : 0**

**Correct Marks : 1 Wrong Marks : 0.25**

Choose the most appropriate option for the following idiomatic expression :

The problem of corruption has been hanging fire for the last ten years.

**Options :**

4058597635. to remain unsolved.

4058597636. to make all possible efforts.

4058597637. to create hindrance.

4058597638. to have no strength and support.

**Question Number : 27 Question Id : 4058592288 Question Type : MCQ Option Shuffling : Yes Is Question Mandatory : No Calculator : None Response Time : N.A Think Time : N.A Minimum Instruction Time : 0**

**Correct Marks : 1 Wrong Marks : 0.25**

Choose the most appropriate option for the following idiomatic expression :

The problem of corruption has been hanging fire for the last ten years.

**Options :**

4058597635. to remain unsolved.

4058597636. to make all possible efforts.

4058597637. to create hindrance.

4058597638. to have no strength and support.

**Question Number : 28 Question Id : 4058592289 Question Type : MCQ Option Shuffling : Yes Is**

**Question Mandatory : No Calculator : None Response Time : N.A Think Time : N.A Minimum**

**Instruction Time : 0**

**Correct Marks : 1 Wrong Marks : 0.25**

Choose the correct spelling :

**Options :**

4058597639. MOMENTOUS

4058597640. MOMENTEIOUS

4058597641. MOMENTIOUS

4058597642. MOMENTIEIOUS

**Question Number : 28 Question Id : 4058592289 Question Type : MCQ Option Shuffling : Yes Is**

**Question Mandatory : No Calculator : None Response Time : N.A Think Time : N.A Minimum**

**Instruction Time : 0**

**Correct Marks : 1 Wrong Marks : 0.25**

Choose the correct spelling :

**Options :**

4058597639. MOMENTOUS

4058597640. MOMENTEIOUS

4058597641. MOMENTIOUS

4058597642. MOMENTIEIOUS

**Question Number : 29 Question Id : 4058592290 Question Type : MCQ Option Shuffling : Yes Is**

**Question Mandatory : No Calculator : None Response Time : N.A Think Time : N.A Minimum**

**Instruction Time : 0**

**Correct Marks : 1 Wrong Marks : 0.25**

Choose the correct spelling :

**Options :**

4058597643. BEATIFICATION

4058597644. BEAUTIFICATION

4058597645. BEAUTIFASCION

4058597646. BEATIFICASCION

**Question Number : 29 Question Id : 4058592290 Question Type : MCQ Option Shuffling : Yes Is**

**Question Mandatory : No Calculator : None Response Time : N.A Think Time : N.A Minimum**

**Instruction Time : 0**

**Correct Marks : 1 Wrong Marks : 0.25**

Choose the correct spelling :

**Options :**

4058597643. BEATIFICATION

4058597644. BEAUTIFICATION

4058597645. BEAUTIFASCION

4058597646. BEATIFICASCION

**Question Number : 30 Question Id : 4058592291 Question Type : MCQ Option Shuffling : Yes Is  
Question Mandatory : No Calculator : None Response Time : N.A Think Time : N.A Minimum  
Instruction Time : 0**

**Correct Marks : 1 Wrong Marks : 0.25**

Choose the correct spelling :

**Options :**

4058597647. TOMPOOLARY

4058597648. TOMFOOLARY

4058597649. TOMFOOLERY

4058597650. TOMPOOLERY

**Question Number : 30 Question Id : 4058592291 Question Type : MCQ Option Shuffling : Yes Is  
Question Mandatory : No Calculator : None Response Time : N.A Think Time : N.A Minimum  
Instruction Time : 0**

**Correct Marks : 1 Wrong Marks : 0.25**

Choose the correct spelling :

**Options :**

4058597647. TOMPOOLARY

4058597648. TOMFOOLARY

4058597649. TOMFOOLERY

4058597650. TOMPOOLERY

<b>Sub-Section Number :</b>	2
<b>Sub-Section Id :</b>	405859158
<b>Question Shuffling Allowed :</b>	No
<b>Is Section Default? :</b>	null

**Question Id : 4058592292 Question Type : COMPREHENSION Sub Question Shuffling Allowed :**

**Yes Group Comprehension Questions : No Question Pattern Type : NonMatrix Calculator :**

**None Response Time : N.A Think Time : N.A Minimum Instruction Time : 0**

**Question Numbers : (31 to 38)**

Question Label : Comprehension

Read the given passage and answer the questions that follow -

What is a Plan?

A plan spells out how the resources of a nation should be put to use. It should have some general goals as well as specific objectives which are to be achieved within a specified period of time: in India plans were of five years duration and were called five year plans (we borrowed this from the former Soviet Union, the pioneer in national planning). Our plan documents upto the year 2017 not only specify the objectives to be attained in the five years of a plan but also what is to be achieved over a period of twenty years. This long-term plan is called 'perspective plan'. The five year plans were supposed to provide the basis for the perspective plan.

It will be unrealistic to expect all the goals of a plan to be given equal importance in all the plans. In fact the goals may actually be in conflict. For example, the goal of introducing modern technology may be in conflict with the goal of increasing employment if the technology reduces the need for labour. The planners have to balance the goals, a very difficult job indeed. We find different goals being emphasised in different plans in India.

India's five year plans did not spell out how much of each and every good and service is to be produced. This is neither possible nor necessary (the former Soviet Union tried to do this and failed). It is enough if the plan is specific about the sectors where it plays a commanding role, for instance power, generation and irrigation, while leaving the rest to the market.

### Sub questions

Question Number : 31 Question Id : 4058592293 Question Type : MCQ Option Shuffling : Yes Is

Question Mandatory : No Calculator : None Response Time : N.A Think Time : N.A Minimum

Instruction Time : 0

Correct Marks : 1 Wrong Marks : 0.25

What is the duration of a plan?

Options :

4058597651. 5 years

4058597652. a period

4058597653. 20 years

4058597654. upto 2017

**Question Number : 32 Question Id : 4058592294 Question Type : MCQ Option Shuffling : Yes Is Question Mandatory : No Calculator : None Response Time : N.A Think Time : N.A Minimum Instruction Time : 0**

**Correct Marks : 1 Wrong Marks : 0.25**

What is the purpose of a plan?

**Options :**

4058597655. to figure out the resources of a nation.

4058597656. to figure out general goals and objectives.

4058597657. to put to use the resources with specific objectives only.

4058597658. to put to use the resources keeping in mind goals and objectives to be achieved within a stipulated amount of time.

**Question Number : 33 Question Id : 4058592295 Question Type : MCQ Option Shuffling : Yes Is Question Mandatory : No Calculator : None Response Time : N.A Think Time : N.A Minimum Instruction Time : 0**

**Correct Marks : 1 Wrong Marks : 0.25**

How is Indian planning different from that of Soviet Union's?

**Options :**

4058597659. In India plans were of 5 years duration.

4058597660. Our plans were upto the year 2017.

4058597661. India has 'perspective plan' modelled after the five year plans.

4058597662. India has specific objectives to obtain



**Question Number : 34 Question Id : 4058592296 Question Type : MCQ Option Shuffling : Yes Is Question Mandatory : No Calculator : None Response Time : N.A Think Time : N.A Minimum Instruction Time : 0**

**Correct Marks : 1 Wrong Marks : 0.25**

Which of the following statements is true?

**Options :**

- 4058597663. All plans are given equal importance in India.
- 4058597664. The goals of a plan is to always smooth out any friction.
- 4058597665. The planners plan the goals and manage the goals effectively.
- 4058597666. Different goals are being emphasised in different plans in India.

**Question Number : 35 Question Id : 4058592297 Question Type : MCQ Option Shuffling : Yes Is Question Mandatory : No Calculator : None Response Time : N.A Think Time : N.A Minimum Instruction Time : 0**

**Correct Marks : 1 Wrong Marks : 0.25**

Which of the following statements is false :

**Options :**

- 4058597667. The basis for the perspective plan is five year plans.
- 4058597668. Soviet Union spelt out the amount and extend of goods and service successfully.
- 4058597669. The goals of a plan is to give equal importance to all the plans.
- 4058597670. The goals of introducing modern technology may produce conflict with the employment plan.

**Question Number : 36 Question Id : 4058592298 Question Type : MCQ Option Shuffling : Yes Is Question Mandatory : No Calculator : None Response Time : N.A Think Time : N.A Minimum Instruction Time : 0**

**Correct Marks : 1 Wrong Marks : 0.25**

Find from the passage the word similar in meaning to :

'up-to-date'

**Options :**

4058597671. **planning**

4058597672. **modern**

4058597673. **technology**

4058597674. **goals**

**Question Number : 37 Question Id : 4058592299 Question Type : MCQ Option Shuffling : Yes Is Question Mandatory : No Calculator : None Response Time : N.A Think Time : N.A Minimum Instruction Time : 0**

**Correct Marks : 1 Wrong Marks : 0.25**

What is the objective of the given passage?

**Options :**

4058597675. **To encourage a five year plan better.**

4058597676. **To put into perspective the long-term plan.**

4058597677. **To justify the failure of plan.**

4058597678. **To introduce the basics of national planing.**

**Question Number : 38 Question Id : 4058592300 Question Type : MCQ Option Shuffling : Yes Is Question Mandatory : No Calculator : None Response Time : N.A Think Time : N.A Minimum Instruction Time : 0**

**Correct Marks : 1 Wrong Marks : 0.25**

Identify the odd one out :

**Options :**

4058597679. national objectives

4058597680. modern technology

4058597681. commanding role

4058597682. perspective plan

**Question Id : 4058592292 Question Type : COMPREHENSION Sub Question Shuffling Allowed : Yes Group Comprehension Questions : No Question Pattern Type : NonMatrix Calculator : None Response Time : N.A Think Time : N.A Minimum Instruction Time : 0**

**Question Numbers : (31 to 38)**

Question Label : Comprehension

Read the given passage and answer the questions that follow -

What is a Plan?

A plan spells out how the resources of a nation should be put to use. It should have some general goals as well as specific objectives which are to be achieved within a specified period of time: in India plans were of five years duration and were called five year plans (we borrowed this from the former Soviet Union, the pioneer in national planning). Our plan documents upto the year 2017 not only specify the objectives to be attained in the five years of a plan but also what is to be achieved over a period of twenty years. This long-term plan is called 'perspective plan'. The five year plans were supposed to provide the basis for the perspective plan.

It will be unrealistic to expect all the goals of a plan to be given equal importance in all the plans. In fact the goals may actually be in conflict. For example, the goal of introducing modern technology may be in conflict with the goal of increasing employment if the technology reduces the need for labour. The planners have to balance the goals, a very difficult job indeed. We find different goals being emphasised in different plans in India.

India's five year plans did not spell out how much of each and every good and service is to be produced. This is neither possible nor necessary (the former Soviet Union tried to do this and failed). It is enough if the plan is specific about the sectors where it plays a commanding role, for instance power, generation and irrigation, while leaving the rest to the market.

### Sub questions

Question Number : 31 Question Id : 4058592293 Question Type : MCQ Option Shuffling : Yes Is

Question Mandatory : No Calculator : None Response Time : N.A Think Time : N.A Minimum

Instruction Time : 0

Correct Marks : 1 Wrong Marks : 0.25

What is the duration of a plan?

Options :

4058597651. 5 years

4058597652. a period

4058597653. 20 years

4058597654. upto 2017

**Question Number : 32 Question Id : 4058592294 Question Type : MCQ Option Shuffling : Yes Is Question Mandatory : No Calculator : None Response Time : N.A Think Time : N.A Minimum Instruction Time : 0**

**Correct Marks : 1 Wrong Marks : 0.25**

What is the purpose of a plan?

**Options :**

4058597655. to figure out the resources of a nation.

4058597656. to figure out general goals and objectives.

4058597657. to put to use the resources with specific objectives only.

4058597658. to put to use the resources keeping in mind goals and objectives to be achieved within a stipulated amount of time.

**Question Number : 33 Question Id : 4058592295 Question Type : MCQ Option Shuffling : Yes Is Question Mandatory : No Calculator : None Response Time : N.A Think Time : N.A Minimum Instruction Time : 0**

**Correct Marks : 1 Wrong Marks : 0.25**

How is Indian planning different from that of Soviet Union's?

**Options :**

4058597659. In India plans were of 5 years duration.

4058597660. Our plans were upto the year 2017.

4058597661. India has 'perspective plan' modelled after the five year plans.

4058597662. India has specific objectives to obtain

**Question Number : 34 Question Id : 4058592296 Question Type : MCQ Option Shuffling : Yes Is Question Mandatory : No Calculator : None Response Time : N.A Think Time : N.A Minimum Instruction Time : 0**

**Correct Marks : 1 Wrong Marks : 0.25**

Which of the following statements is true?

**Options :**

- 4058597663. All plans are given equal importance in India.
- 4058597664. The goals of a plan is to always smooth out any friction.
- 4058597665. The planners plan the goals and manage the goals effectively.
- 4058597666. Different goals are being emphasised in different plans in India.

**Question Number : 35 Question Id : 4058592297 Question Type : MCQ Option Shuffling : Yes Is Question Mandatory : No Calculator : None Response Time : N.A Think Time : N.A Minimum Instruction Time : 0**

**Correct Marks : 1 Wrong Marks : 0.25**

Which of the following statements is false :

**Options :**

- 4058597667. The basis for the perspective plan is five year plans.
- 4058597668. Soviet Union spelt out the amount and extend of goods and service successfully.
- 4058597669. The goals of a plan is to give equal importance to all the plans.
- 4058597670. The goals of introducing modern technology may produce conflict with the employment plan.

**Question Number : 36 Question Id : 4058592298 Question Type : MCQ Option Shuffling : Yes Is Question Mandatory : No Calculator : None Response Time : N.A Think Time : N.A Minimum Instruction Time : 0**

**Correct Marks : 1 Wrong Marks : 0.25**

Find from the passage the word similar in meaning to :

'up-to-date'

**Options :**

4058597671. **planning**

4058597672. **modern**

4058597673. **technology**

4058597674. **goals**

**Question Number : 37 Question Id : 4058592299 Question Type : MCQ Option Shuffling : Yes Is Question Mandatory : No Calculator : None Response Time : N.A Think Time : N.A Minimum Instruction Time : 0**

**Correct Marks : 1 Wrong Marks : 0.25**

What is the objective of the given passage?

**Options :**

4058597675. **To encourage a five year plan better.**

4058597676. **To put into perspective the long-term plan.**

4058597677. **To justify the failure of plan.**

4058597678. **To introduce the basics of national planing.**

**Question Number : 38 Question Id : 4058592300 Question Type : MCQ Option Shuffling : Yes Is Question Mandatory : No Calculator : None Response Time : N.A Think Time : N.A Minimum Instruction Time : 0**

**Correct Marks : 1 Wrong Marks : 0.25**

Identify the odd one out :

**Options :**

4058597679. national objectives

4058597680. modern technology

4058597681. commanding role

4058597682. perspective plan

<b>Sub-Section Number :</b>	3
<b>Sub-Section Id :</b>	405859159
<b>Question Shuffling Allowed :</b>	No
<b>Is Section Default? :</b>	null

**Question Id : 4058592301 Question Type : COMPREHENSION Sub Question Shuffling Allowed : Yes Group Comprehension Questions : No Question Pattern Type : NonMatrix Calculator : None Response Time : N.A Think Time : N.A Minimum Instruction Time : 0**

**Question Numbers : (39 to 44)**

Question Label : Comprehension



Read the given passage and answer the questions that follow -

Historians do not see time just as a passing of hours, days or years -as a clock or a calendar. Time also reflects changes in social and economic organisation, in the persistence and transformation of ideas and beliefs. The study of time is made somewhat easier by dividing the past into large segments - periods – that possess shared characteristics.

In the middle of the nineteenth century, British historians divided the history of India into three periods: "Hindu", "Muslim" and "British". This division was based on the idea that the religion of rulers was the only important historical change, and that there were no other significant developments – in the economy, society or culture. Such a division also ignored the rich diversity of the subcontinent.

Few historians follow this periodisation today. Most look to economic and social factors to characterise the major elements of different moments of the past.

### Sub questions

Question Number : 39 Question Id : 4058592302 Question Type : MCQ Option Shuffling : Yes Is

Question Mandatory : No Calculator : None Response Time : N.A Think Time : N.A Minimum

Instruction Time : 0

Correct Marks : 1 Wrong Marks : 0.25

Historians see time as

Options :

4058597683. a clock or a calendar.

4058597684. transformation of ideas and beliefs.

4058597685. large segments

4058597686. periods that possess shared characteristics.

Question Number : 40 Question Id : 4058592303 Question Type : MCQ Option Shuffling : Yes Is

Question Mandatory : No Calculator : None Response Time : N.A Think Time : N.A Minimum

Instruction Time : 0

Correct Marks : 1 Wrong Marks : 0.25

British historians divided the history of India into -

**Options :**

4058597687. periods based on social and economic organisation.

4058597688. periods based on religion of people.

4058597689. periods based on important historical changes.

4058597690. periods based on religion of rulers.

**Question Number : 41 Question Id : 4058592304 Question Type : MCQ Option Shuffling : Yes Is Question Mandatory : No Calculator : None Response Time : N.A Think Time : N.A Minimum Instruction Time : 0**

**Correct Marks : 1 Wrong Marks : 0.25**

Choose the correct statement -

The division made by the British historians

**Options :**

4058597691. was based on shared characteristics of people.

4058597692. reflected changes in social and economic organisation.

4058597693. was based on significant developments

4058597694. ignored the rich diversity of the subcontinent.

**Question Number : 42 Question Id : 4058592305 Question Type : MCQ Option Shuffling : Yes Is Question Mandatory : No Calculator : None Response Time : N.A Think Time : N.A Minimum Instruction Time : 0**

**Correct Marks : 1 Wrong Marks : 0.25**

Most historians today divide the history of India on the basis of -

**Options :**

4058597695. social and religious factors taken together.

4058597696. economic and social factors taken together.

4058597697. 'Hindu', 'Muslim' and 'British' rulers.

4058597698. large segments of time.

**Question Number : 43 Question Id : 4058592306 Question Type : MCQ Option Shuffling : Yes Is Question Mandatory : No Calculator : None Response Time : N.A Think Time : N.A Minimum Instruction Time : 0**

**Correct Marks : 1 Wrong Marks : 0.25**

The meaning of the word 'persistence' as per the context is -

**Options :**

4058597699. credulity

4058597700. disapprobation

4058597701. continuity

4058597702. disappearance

**Question Number : 44 Question Id : 4058592307 Question Type : MCQ Option Shuffling : Yes Is Question Mandatory : No Calculator : None Response Time : N.A Think Time : N.A Minimum Instruction Time : 0**

**Correct Marks : 1 Wrong Marks : 0.25**

The British historians carried out the division of history of India -

**Options :**

4058597703. around 1750 AD.

4058597704. around 1850 AD.

4058597705. around 1950 AD.

4058597706. around 1900 AD.

**Question Id : 4058592301 Question Type : COMPREHENSION Sub Question Shuffling Allowed : Yes Group Comprehension Questions : No Question Pattern Type : NonMatrix Calculator : None Response Time : N.A Think Time : N.A Minimum Instruction Time : 0**

**Question Numbers : (39 to 44)**

Question Label : Comprehension

Read the given passage and answer the questions that follow -

Historians do not see time just as a passing of hours, days or years -as a clock or a calendar. Time also reflects changes in social and economic organisation, in the persistence and transformation of ideas and beliefs. The study of time is made somewhat easier by dividing the past into large segments - periods – that possess shared characteristics.

In the middle of the nineteenth century, British historians divided the history of India into three periods: "Hindu", "Muslim" and "British". This division was based on the idea that the religion of rulers was the only important historical change, and that there were no other significant developments – in the economy, society or culture. Such a division also ignored the rich diversity of the subcontinent.

Few historians follow this periodisation today. Most look to economic and social factors to characterise the major elements of different moments of the past.

**Sub questions**

**Question Number : 39 Question Id : 4058592302 Question Type : MCQ Option Shuffling : Yes Is Question Mandatory : No Calculator : None Response Time : N.A Think Time : N.A Minimum Instruction Time : 0**

**Correct Marks : 1 Wrong Marks : 0.25**

Historians see time as

**Options :**

4058597683. a clock or a calendar.

4058597684. transformation of ideas and beliefs.

4058597685. large segments

4058597686. periods that possess shared characteristics.

**Question Number : 40 Question Id : 4058592303 Question Type : MCQ Option Shuffling : Yes Is**

**Question Mandatory : No Calculator : None Response Time : N.A Think Time : N.A Minimum**

**Instruction Time : 0**

**Correct Marks : 1 Wrong Marks : 0.25**

British historians divided the history of India into -

**Options :**

4058597687. periods based on social and economic organisation.

4058597688. periods based on religion of people.

4058597689. periods based on important historical changes.

4058597690. periods based on religion of rulers.

**Question Number : 41 Question Id : 4058592304 Question Type : MCQ Option Shuffling : Yes Is**

**Question Mandatory : No Calculator : None Response Time : N.A Think Time : N.A Minimum**

**Instruction Time : 0**

**Correct Marks : 1 Wrong Marks : 0.25**

Choose the correct statement -

The division made by the British historians

**Options :**

4058597691. was based on shared characteristics of people.

4058597692. reflected changes in social and economic organisation.

4058597693. was based on significant developments

4058597694. ignored the rich diversity of the subcontinent.

**Question Number : 42 Question Id : 4058592305 Question Type : MCQ Option Shuffling : Yes Is**

**Question Mandatory : No Calculator : None Response Time : N.A Think Time : N.A Minimum**

**Instruction Time : 0**

**Correct Marks : 1 Wrong Marks : 0.25**

Most historians today divide the history of India on the basis of -

**Options :**

4058597695. social and religious factors taken together.

4058597696. economic and social factors taken together.

4058597697. 'Hindu', 'Muslim' and 'British' rulers.

4058597698. large segments of time.

**Question Number : 43 Question Id : 4058592306 Question Type : MCQ Option Shuffling : Yes Is**

**Question Mandatory : No Calculator : None Response Time : N.A Think Time : N.A Minimum**

**Instruction Time : 0**

**Correct Marks : 1 Wrong Marks : 0.25**

The meaning of the word 'persistence' as per the context is -

**Options :**

4058597699. credulity

4058597700. disapprobation

4058597701. continuity

4058597702. disappearance

**Question Number : 44 Question Id : 4058592307 Question Type : MCQ Option Shuffling : Yes Is Question Mandatory : No Calculator : None Response Time : N.A Think Time : N.A Minimum Instruction Time : 0**

**Correct Marks : 1 Wrong Marks : 0.25**

The British historians carried out the division of history of India -

**Options :**

4058597703. around 1750 AD.

4058597704. around 1850 AD.

4058597705. around 1950 AD.

4058597706. around 1900 AD.

<b>Sub-Section Number :</b>	4
<b>Sub-Section Id :</b>	405859160
<b>Question Shuffling Allowed :</b>	No
<b>Is Section Default? :</b>	null

**Question Id : 4058592308 Question Type : COMPREHENSION Sub Question Shuffling Allowed :**

**Yes Group Comprehension Questions : No Question Pattern Type : NonMatrix Calculator :**

**None Response Time : N.A Think Time : N.A Minimum Instruction Time : 0**

**Question Numbers : (45 to 50)**

Question Label : Comprehension

Read the given passage and answer the questions that follow -

Recently I spent several hours sitting under a tree in my garden with the social anthropologist William Ury, a Harvard University professor who specialises in the art of negotiation and wrote the best selling book, *Getting to Yes*. He captivated me with his theory that tribalism protects people from their fear of rapid change. He explained that the pillars of tribalism that humans rely on for security would always counter any significant cultural or social change.

In this way, he said, change is never allowed to happen too fast. Technology, for example is a pillar of society. Ury believes that every time technology moves in a new or radical direction another pillar such as religion or nationalism will grow stronger-in effect, the traditional and familiar will assume greater importance to compensate for the new and untested. In this manner, human tribes avoid rapid change that leaves people insecure and frightened.

But we have all heard that nothing is as permanent as change. Nothing is guaranteed. Pithy expressions, to be sure, but no more than cliches. As Ury says, "people don't live that way from day-to-day. On the contrary, they actively seek certainty and stability. They want to know they will be safe."

Even so we scare ourselves constantly with the idea of change. An IBM CEO once said "We only restructure for a good reason, and if we haven't restructured in a while, that's a good reason. We are scared that competitors technology, and the consumer will put us out of business so we have to change all the time just to stay alive. But if we asked our fathers and grandfathers, would they have said that they lived in a period of little change? Structure may not have changed much. It may just be the speed with which we do things."

**Sub questions**

**Question Number : 45 Question Id : 4058592309 Question Type : MCQ Option Shuffling : Yes Is**

**Question Mandatory : No Calculator : None Response Time : N.A Think Time : N.A Minimum Instruction Time : 0**

**Correct Marks : 1 Wrong Marks : 0.25**

Which of the following views does the author fully support in the passage?

**Options :**

4058597707. Nothing is permanent as change.



4058597708. Change is always rapid.

4058597709. More money spent on innovation leads to more rapid change.

4058597710. Over decades structural changes have been incremental.

**Question Number : 46 Question Id : 4058592310 Question Type : MCQ Option Shuffling : Yes Is Question Mandatory : No Calculator : None Response Time : N.A Think Time : N.A Minimum Instruction Time : 0**

**Correct Marks : 1 Wrong Marks : 0.25**

Any significant cultural or social change -

**Options :**

4058597711. depends upon technological advancement.

4058597712. tends to move in the direction of permanence.

4058597713. is countered by the pillars of tribalism.

4058597714. is carried out for a good reason.

**Question Number : 47 Question Id : 4058592311 Question Type : MCQ Option Shuffling : Yes Is Question Mandatory : No Calculator : None Response Time : N.A Think Time : N.A Minimum Instruction Time : 0**

**Correct Marks : 1 Wrong Marks : 0.25**

According to the IBM CEO -

**Options :**

4058597715. change is scary.

4058597716. the competitors will force us to change.

4058597717. our fathers and grandfathers lived in a period of little change.

4058597718. we have not changed the structure speedily.

**Question Number : 48 Question Id : 4058592312 Question Type : MCQ Option Shuffling : Yes Is**

**Question Mandatory : No Calculator : None Response Time : N.A Think Time : N.A Minimum**

**Instruction Time : 0**

**Correct Marks : 1 Wrong Marks : 0.25**

Anthropology is the study of

**Options :**

4058597719. art of negotiation.

4058597720. human origins, customs and beliefs.

4058597721. human congregations in a given time period.

4058597722. art of growing a garden.

**Question Number : 49 Question Id : 4058592313 Question Type : MCQ Option Shuffling : Yes Is**

**Question Mandatory : No Calculator : None Response Time : N.A Think Time : N.A Minimum**

**Instruction Time : 0**

**Correct Marks : 1 Wrong Marks : 0.25**

According to Prof. William Ury -

**Options :**

4058597723. change happens too fast.

4058597724. the traditional and familiar will assume greater importance.

4058597725. technology is a pillar of society.

4058597726. tribalism protects people from their fear of rapid change.

**Question Number : 50 Question Id : 4058592314 Question Type : MCQ Option Shuffling : Yes Is Question Mandatory : No Calculator : None Response Time : N.A Think Time : N.A Minimum Instruction Time : 0**

**Correct Marks : 1 Wrong Marks : 0.25**

The meaning of the word 'pithy' is -

**Options :**

4058597727. expressed in a clear, direct way.

4058597728. a phrase or idea that has been used many times.

4058597729. an important idea.

4058597730. ambiguous and unclear idea.

**Question Id : 4058592308 Question Type : COMPREHENSION Sub Question Shuffling Allowed : Yes Group Comprehension Questions : No Question Pattern Type : NonMatrix Calculator : None Response Time : N.A Think Time : N.A Minimum Instruction Time : 0**

**Question Numbers : (45 to 50)**

Question Label : Comprehension

Read the given passage and answer the questions that follow -

Recently I spent several hours sitting under a tree in my garden with the social anthropologist William Ury, a Harvard University professor who specialises in the art of negotiation and wrote the best selling book, *Getting to Yes*. He captivated me with his theory that tribalism protects people from their fear of rapid change. He explained that the pillars of tribalism that humans rely on for security would always counter any significant cultural or social change.

In this way, he said, change is never allowed to happen too fast. Technology, for example is a pillar of society. Ury believes that every time technology moves in a new or radical direction another pillar such as religion or nationalism will grow stronger-in effect, the traditional and familiar will assume greater importance to compensate for the new and untested. In this manner, human tribes avoid rapid change that leaves people insecure and frightened.

But we have all heard that nothing is as permanent as change. Nothing is guaranteed. Pithy expressions, to be sure, but no more than cliches. As Ury says, "people don't live that way from day-to-day. On the contrary, they actively seek certainty and stability. They want to know they will be safe."

Even so we scare ourselves constantly with the idea of change. An IBM CEO once said "We only restructure for a good reason, and if we haven't restructured in a while, that's a good reason. We are scared that competitors technology, and the consumer will put us out of business so we have to change all the time just to stay alive. But if we asked our fathers and grandfathers, would they have said that they lived in a period of little change? Structure may not have changed much. It may just be the speed with which we do things."

### Sub questions

**Question Number : 45 Question Id : 4058592309 Question Type : MCQ Option Shuffling : Yes Is Question Mandatory : No Calculator : None Response Time : N.A Think Time : N.A Minimum Instruction Time : 0**

**Correct Marks : 1 Wrong Marks : 0.25**

Which of the following views does the author fully support in the passage?

**Options :**

4058597707. Nothing is permanent as change.

4058597708. Change is always rapid.

4058597709. More money spent on innovation leads to more rapid change.

4058597710. Over decades structural changes have been incremental.

**Question Number : 46 Question Id : 4058592310 Question Type : MCQ Option Shuffling : Yes Is Question Mandatory : No Calculator : None Response Time : N.A Think Time : N.A Minimum Instruction Time : 0**

**Correct Marks : 1 Wrong Marks : 0.25**

Any significant cultural or social change -

**Options :**

4058597711. depends upon technological advancement.

4058597712. tends to move in the direction of permanence.

4058597713. is countered by the pillars of tribalism.

4058597714. is carried out for a good reason.

**Question Number : 47 Question Id : 4058592311 Question Type : MCQ Option Shuffling : Yes Is Question Mandatory : No Calculator : None Response Time : N.A Think Time : N.A Minimum Instruction Time : 0**

**Correct Marks : 1 Wrong Marks : 0.25**

According to the IBM CEO -

**Options :**

4058597715. change is scary.

4058597716. the competitors will force us to change.

4058597717. our fathers and grandfathers lived in a period of little change.

4058597718. we have not changed the structure speedily.

**Question Number : 48 Question Id : 4058592312 Question Type : MCQ Option Shuffling : Yes Is Question Mandatory : No Calculator : None Response Time : N.A Think Time : N.A Minimum Instruction Time : 0**

**Correct Marks : 1 Wrong Marks : 0.25**

Anthropology is the study of

**Options :**

4058597719. art of negotiation.

4058597720. human origins, customs and beliefs.

4058597721. human congregations in a given time period.

4058597722. art of growing a garden.

**Question Number : 49 Question Id : 4058592313 Question Type : MCQ Option Shuffling : Yes Is Question Mandatory : No Calculator : None Response Time : N.A Think Time : N.A Minimum Instruction Time : 0**

**Correct Marks : 1 Wrong Marks : 0.25**

According to Prof. William Ury -

**Options :**

4058597723. change happens too fast.

4058597724. the traditional and familiar will assume greater importance.

4058597725. technology is a pillar of society.

4058597726. tribalism protects people from their fear of rapid change.

**Question Number : 50 Question Id : 4058592314 Question Type : MCQ Option Shuffling : Yes Is Question Mandatory : No Calculator : None Response Time : N.A Think Time : N.A Minimum Instruction Time : 0**

**Correct Marks : 1 Wrong Marks : 0.25**

The meaning of the word 'pithy' is -

**Options :**

4058597727. expressed in a clear, direct way.

4058597728. a phrase or idea that has been used many times.

4058597729. an important idea.

4058597730. ambiguous and unclear idea.

## Case Study

<b>Section Id :</b>	405859127
<b>Section Number :</b>	2
<b>Section type :</b>	Online
<b>Mandatory or Optional :</b>	Mandatory
<b>Number of Questions :</b>	8
<b>Number of Questions to be attempted :</b>	8
<b>Section Marks :</b>	40
<b>Enable Mark as Answered Mark for Review and Clear Response :</b>	Yes
<b>Maximum Instruction Time :</b>	0
<b>Sub-Section Number :</b>	1
<b>Sub-Section Id :</b>	405859161

**Question Shuffling Allowed :**

No

**Is Section Default? :**

null

**Question Id : 4058592315 Question Type : COMPREHENSION Sub Question Shuffling Allowed :**

**Yes Group Comprehension Questions : No Question Pattern Type : NonMatrix Calculator :**

**None Response Time : N.A Think Time : N.A Minimum Instruction Time : 0**

**Question Numbers : (51 to 55)**

Question Label : Comprehension

Read the given passage and answer the questions that follow -

In what will be its second attempt at going public, One MobiKwik Systems – the parent company of fintech firm MobiKwik – on Friday filed a fresh draft red herring prospectus with Sebi to raise Rs. 700 crore through a fresh issue of shares. The size of the proposed IPO is over 50% lower than the previous issue which was planned at Rs 1,900 crore. The IPO does not have an offer for sale component. In 2021, MobiKwik had attempted to get listed on the bourses but stalled its IPO plans on the back of choppy markets and a dismal market debut by bigger peer Paytm. The company said that it may undertake a pre-IPO placement worth up to Rs 140 crore. MobiKwik will use the IPO proceeds to fund growth of its financial services and payment services businesses and make investments in data and technology tools like AI & ML. In an interview with co-founder and CEO Bipin Preet Singh had said that the company's digital credit GMV (gross merchandise value) has seen a multi-fold growth over the past few years.

**Sub questions**

**Question Number : 51 Question Id : 4058592316 Question Type : MCQ Option Shuffling : Yes Is**

**Question Mandatory : No Calculator : None Response Time : N.A Think Time : N.A Minimum**

**Instruction Time : 0**

**Correct Marks : 1 Wrong Marks : 0.25**

The amount of money MobiKwik plans to raise through issue of shares is -

**Options :**

4058597731. Rs. 700 crores

4058597732. Rs. 1900 crores

4058597733. Rs. 140 crores



4058597734. 50% lower than 2021

**Question Number : 52 Question Id : 4058592317 Question Type : MCQ Option Shuffling : Yes Is Question Mandatory : No Calculator : None Response Time : N.A Think Time : N.A Minimum Instruction Time : 0**

**Correct Marks : 1 Wrong Marks : 0.25**

MobiKwik stalled its first IPO plans because of

**Options :**

4058597735. uncertain markets

4058597736. violent markets

4058597737. dull markets

4058597738. jerky markets

**Question Number : 53 Question Id : 4058592318 Question Type : MCQ Option Shuffling : Yes Is Question Mandatory : No Calculator : None Response Time : N.A Think Time : N.A Minimum Instruction Time : 0**

**Correct Marks : 1 Wrong Marks : 0.25**

The money collected through IPO will be used by MobiKwik -

**Options :**

4058597739. to sustain the company.

4058597740. to raise its funds ahead of Paytm.

4058597741. to fund its growth in the market and invest in data and technology tools.

4058597742. to fund the growth of its financial services businesses and invest in data and technology tools.

**Question Number : 54 Question Id : 4058592319 Question Type : MCQ Option Shuffling : Yes Is Question Mandatory : No Calculator : None Response Time : N.A Think Time : N.A Minimum Instruction Time : 0**

**Correct Marks : 1 Wrong Marks : 0.25**

Give one word for the following phrase -

'goods that are bought or sold'

**Options :**

4058597743. prospectus

4058597744. issue

4058597745. bourses

4058597746. merchandise

**Question Number : 55 Question Id : 4058592320 Question Type : MCQ Option Shuffling : Yes Is Question Mandatory : No Calculator : None Response Time : N.A Think Time : N.A Minimum Instruction Time : 0**

**Correct Marks : 1 Wrong Marks : 0.25**

Choose the correct synonym for the word 'dismal' -

**Options :**

4058597747. promising

4058597748. thundering

4058597749. depressing

4058597750. considerable

**Question Id : 4058592315 Question Type : COMPREHENSION Sub Question Shuffling Allowed :**

**Yes Group Comprehension Questions : No Question Pattern Type : NonMatrix Calculator :**

**None Response Time : N.A Think Time : N.A Minimum Instruction Time : 0**

**Question Numbers : (51 to 55)**

Question Label : Comprehension

Read the given passage and answer the questions that follow -

In what will be its second attempt at going public, One MobiKwik Systems – the parent company of fintech firm MobiKwik – on Friday filed a fresh draft red herring prospectus with Sebi to raise Rs. 700 crore through a fresh issue of shares. The size of the proposed IPO is over 50% lower than the previous issue which was planned at Rs 1,900 crore. The IPO does not have an offer for sale component. In 2021, MobiKwik had attempted to get listed on the bourses but stalled its IPO plans on the back of choppy markets and a dismal market debut by bigger peer Paytm. The company said that it may undertake a pre-IPO placement worth up to Rs 140 crore. MobiKwik will use the IPO proceeds to fund growth of its financial services and payment services businesses and make investments in data and technology tools like AI & ML. In an interview with co-founder and CEO Bipin Preet Singh had said that the company's digital credit GMV (gross merchandise value) has seen a multi-fold growth over the past few years.

**Sub questions**

**Question Number : 51 Question Id : 4058592316 Question Type : MCQ Option Shuffling : Yes Is**

**Question Mandatory : No Calculator : None Response Time : N.A Think Time : N.A Minimum**

**Instruction Time : 0**

**Correct Marks : 1 Wrong Marks : 0.25**

The amount of money MobiKwik plans to raise through issue of shares is -

**Options :**

4058597731. Rs. 700 crores

4058597732. Rs. 1900 crores

4058597733. Rs. 140 crores

4058597734. 50% lower than 2021

**Question Number : 52 Question Id : 4058592317 Question Type : MCQ Option Shuffling : Yes Is Question Mandatory : No Calculator : None Response Time : N.A Think Time : N.A Minimum Instruction Time : 0**

**Correct Marks : 1 Wrong Marks : 0.25**

MobiKwik stalled its first IPO plans because of

**Options :**

4058597735. uncertain markets

4058597736. violent markets

4058597737. dull markets

4058597738. jerky markets

**Question Number : 53 Question Id : 4058592318 Question Type : MCQ Option Shuffling : Yes Is Question Mandatory : No Calculator : None Response Time : N.A Think Time : N.A Minimum Instruction Time : 0**

**Correct Marks : 1 Wrong Marks : 0.25**

The money collected through IPO will be used by MobiKwik -

**Options :**

4058597739. to sustain the company.

4058597740. to raise its funds ahead of Paytm.

4058597741. to fund its growth in the market and invest in data and technology tools.

4058597742. to fund the growth of its financial services businesses and invest in data and technology tools.

**Question Number : 54 Question Id : 4058592319 Question Type : MCQ Option Shuffling : Yes Is Question Mandatory : No Calculator : None Response Time : N.A Think Time : N.A Minimum Instruction Time : 0**

**Correct Marks : 1 Wrong Marks : 0.25**

Give one word for the following phrase -

'goods that are bought or sold'

**Options :**

4058597743. prospectus

4058597744. issue

4058597745. bourses

4058597746. merchandise

**Question Number : 55 Question Id : 4058592320 Question Type : MCQ Option Shuffling : Yes Is Question Mandatory : No Calculator : None Response Time : N.A Think Time : N.A Minimum Instruction Time : 0**

**Correct Marks : 1 Wrong Marks : 0.25**

Choose the correct synonym for the word 'dismal' -

**Options :**

4058597747. promising

4058597748. thundering

4058597749. depressing

4058597750. considerable

**Sub-Section Number :** 2  
**Sub-Section Id :** 405859162  
**Question Shuffling Allowed :** No  
**Is Section Default? :** null

**Question Id : 4058592321 Question Type : COMPREHENSION Sub Question Shuffling Allowed :  
Yes Group Comprehension Questions : No Question Pattern Type : NonMatrix Calculator :  
None Response Time : N.A Think Time : N.A Minimum Instruction Time : 0**

**Question Numbers : (56 to 60)**

Question Label : Comprehension

Read the given passage and answer the questions that follow -

Allied Blenders & Distillers (ABD), the largest domestic liquor company, is set to file for a Rs 2,000-crore IPO later this month at a valuation of nearly Rs 20,000 crore, or \$2.5 billion. The company has appointed ICICI Securities, Axis Capital, Kotak Mahindra Capital and JM Financial to manage the public offer.

The IPO will be a combination of a fresh fund-raising by the company and an offer for sale by some of its promoters, in a 50:50 ratio, sources said. It will use Rs 1,000 crore to retire part of its debt and some amount to expand its business, including launch of new brands, they added.

ABD, the makers of popular brands like Officer's Choice and Sterling Reserve, had been planning for some years to go public. ABD is the biggest homegrown alcohol company in India and third largest overall, behind global players Diageo and Pernod Ricard, according to merchant bankers.

A text message sent to Kishore Chhabria, chairman and the main promoter of ABD, did not elicit any reply till the time of going to press. Once listed, ABD will be the first listing of a brewery & distiller in more than a decade. According to BSE data, Globus Spirits was the last such company to go public in 2009.

ABD began its operations in 1988 with Officer's Choice being its flagship brand. Currently it's the third-largest selling whisky in the world. In 2017, ABD forayed into the premium segment with Sterling Reserve.

**Sub questions**

**Question Number : 56 Question Id : 4058592322 Question Type : MCQ Option Shuffling : Yes Is  
Question Mandatory : No Calculator : None Response Time : N.A Think Time : N.A Minimum  
Instruction Time : 0**

**Correct Marks : 1 Wrong Marks : 0.25**

ABD is filing its IPO for Rs. 2,000 crore -

**Options :**

4058597751. to expand its business

4058597752. to retire part of its debt

4058597753. to payoff its debt and expand its business

4058597754. to foray into premium segment and compete with global players.

**Question Number : 57 Question Id : 4058592323 Question Type : MCQ Option Shuffling : Yes Is Question Mandatory : No Calculator : None Response Time : N.A Think Time : N.A Minimum Instruction Time : 0**

**Correct Marks : 1 Wrong Marks : 0.25**

Deduce from the passage-Officer's choice is \_\_\_\_\_ as compared to Sterling Reserve.

**Options :**

4058597755. Costlier

4058597756. Cheaper

4058597757. Dearer

4058597758. Equally priced

**Question Number : 58 Question Id : 4058592324 Question Type : MCQ Option Shuffling : Yes Is Question Mandatory : No Calculator : None Response Time : N.A Think Time : N.A Minimum Instruction Time : 0**

**Correct Marks : 1 Wrong Marks : 0.25**

The earliest company to file its IPO according to the passage is -

**Options :**

4058597759. Allied Blenders & Distillers

4058597760. Diageo

4058597761. Pernod Ricard

4058597762. Globus Spirits

**Question Number : 59 Question Id : 4058592325 Question Type : MCQ Option Shuffling : Yes Is Question Mandatory : No Calculator : None Response Time : N.A Think Time : N.A Minimum Instruction Time : 0**

**Correct Marks : 1 Wrong Marks : 0.25**

Give one word for the following group of words -

The most important product, service, building, etc. that an organisation owns or produces'.

**Options :**

4058597763. domestic

4058597764. valuation

4058597765. brand

4058597766. flagship

**Question Number : 60 Question Id : 4058592326 Question Type : MCQ Option Shuffling : Yes Is Question Mandatory : No Calculator : None Response Time : N.A Think Time : N.A Minimum Instruction Time : 0**

**Correct Marks : 1 Wrong Marks : 0.25**



Choose the most appropriate word to fill in the blank -

I had to pay extra amount for a \_\_\_\_\_ car number.

**Options :**

4058597767. domestic

4058597768. public

4058597769. popular

4058597770. premium

**Question Id : 4058592321 Question Type : COMPREHENSION Sub Question Shuffling Allowed :**

**Yes Group Comprehension Questions : No Question Pattern Type : NonMatrix Calculator :**

**None Response Time : N.A Think Time : N.A Minimum Instruction Time : 0**

**Question Numbers : (56 to 60)**

Question Label : Comprehension

Read the given passage and answer the questions that follow -

Allied Blenders & Distillers (ABD), the largest domestic liquor company, is set to file for a Rs 2,000-crore IPO later this month at a valuation of nearly Rs 20,000 crore, or \$2.5 billion. The company has appointed ICICI Securities, Axis Capital, Kotak Mahindra Capital and JM Financial to manage the public offer.

The IPO will be a combination of a fresh fund-raising by the company and an offer for sale by some of its promoters, in a 50:50 ratio, sources said. It will use Rs 1,000 crore to retire part of its debt and some amount to expand its business, including launch of new brands, they added.

ABD, the makers of popular brands like Officer's Choice and Sterling Reserve, had been planning for some years to go public. ABD is the biggest homegrown alcohol company in India and third largest overall, behind global players Diageo and Pernod Ricard, according to merchant bankers.

A text message sent to Kishore Chhabria, chairman and the main promoter of ABD, did not elicit any reply till the time of going to press. Once listed, ABD will be the first listing of a brewery & distiller in more than a decade. According to BSE data, Globus Spirits was the last such company to go public in 2009.

ABD began its operations in 1988 with Officer's Choice being its flagship brand. Currently it's the third-largest selling whisky in the world. In 2017, ABD forayed into the premium segment with Sterling Reserve.

### Sub questions

**Question Number : 56 Question Id : 4058592322 Question Type : MCQ Option Shuffling : Yes Is Question Mandatory : No Calculator : None Response Time : N.A Think Time : N.A Minimum Instruction Time : 0**

**Correct Marks : 1 Wrong Marks : 0.25**

ABD is filing its IPO for Rs. 2,000 crore -

**Options :**

4058597751. to expand its business

4058597752. to retire part of its debt

4058597753. to payoff its debt and expand its business

4058597754. to foray into premium segment and compete with global players.

**Question Number : 57 Question Id : 4058592323 Question Type : MCQ Option Shuffling : Yes Is Question Mandatory : No Calculator : None Response Time : N.A Think Time : N.A Minimum Instruction Time : 0**

**Correct Marks : 1 Wrong Marks : 0.25**

Deduce from the passage-Officer's choice is \_\_\_\_\_ as compared to Sterling Reserve.

**Options :**

4058597755. Costlier

4058597756. Cheaper

4058597757. Dearer

4058597758. Equally priced

**Question Number : 58 Question Id : 4058592324 Question Type : MCQ Option Shuffling : Yes Is Question Mandatory : No Calculator : None Response Time : N.A Think Time : N.A Minimum Instruction Time : 0**

**Correct Marks : 1 Wrong Marks : 0.25**

The earliest company to file its IPO according to the passage is -

**Options :**

4058597759. Allied Blenders & Distillers

4058597760. Diageo

4058597761. Pernod Ricard

4058597762. Globus Spirits

**Question Number : 59 Question Id : 4058592325 Question Type : MCQ Option Shuffling : Yes Is**

**Question Mandatory : No Calculator : None Response Time : N.A Think Time : N.A Minimum**

**Instruction Time : 0**

**Correct Marks : 1 Wrong Marks : 0.25**

Give one word for the following group of words -

The most important product, service, building, etc. that an organisation owns or produces'.

**Options :**

4058597763. domestic

4058597764. valuation

4058597765. brand

4058597766. flagship

**Question Number : 60 Question Id : 4058592326 Question Type : MCQ Option Shuffling : Yes Is**

**Question Mandatory : No Calculator : None Response Time : N.A Think Time : N.A Minimum**

**Instruction Time : 0**

**Correct Marks : 1 Wrong Marks : 0.25**

Choose the most appropriate word to fill in the blank -

I had to pay extra amount for a \_\_\_\_\_ car number.

**Options :**

4058597767. domestic

4058597768. public

4058597769. popular

4058597770. premium

**Sub-Section Number :** 3  
**Sub-Section Id :** 405859163  
**Question Shuffling Allowed :** No  
**Is Section Default? :** null

**Question Id : 4058592327 Question Type : COMPREHENSION Sub Question Shuffling Allowed :  
Yes Group Comprehension Questions : No Question Pattern Type : NonMatrix Calculator :  
None Response Time : N.A Think Time : N.A Minimum Instruction Time : 0**

**Question Numbers : (61 to 65)**

Question Label : Comprehension

Read the given passage and answer the question that follow -

German luxury carmaker Audi has staged a strong comeback in the Indian market, registering sales of 7,931 units in 2023. The company's volumes had plunged to 1,639 units in 2020.

For Audi, which suffered a major reversal after exiting the diesel segment in 2020 and moving to only a petrol & electric power train strategy the growth in 2023 was 89% over the 4,187 units it had sold in 2022. The surge came even as its close rivals and compatriots Mercedes Benz and BMW have strong diesel line-ups in their portfolios.

For Audi, the numbers have been on an upswing recently, though its overall sales are still some distance away from the peak of 11,192 units it had achieved in 2011.

Balbir Singh Dhillon, head of Audi in India, told that the company has been rapidly expanding its offerings in India as it opts for more locally assembled cars to keep the retail pricing and ownership costs under check. "Our decision to move out of diesels was also absolutely correct as the contribution of the fuel has been coming down with petrol now becoming the dominant powertrain on a share of 65%," he said, adding that "Audi now leads in the petrol segment" over its rivals.

Audi is part of German giant Volkswagen's ecosystem that also sells brands such as Skoda, VW, Lamborghini, and Porsche in India. Dhillon said demand for luxury cars remains strong, and is likely to see record numbers this year.

**Sub questions**

**Question Number : 61 Question Id : 4058592328 Question Type : MCQ Option Shuffling : Yes Is  
Question Mandatory : No Calculator : None Response Time : N.A Think Time : N.A Minimum  
Instruction Time : 0**

**Correct Marks : 1 Wrong Marks : 0.25**

The difference in the Audi sales in the years 2023 and 2020 is -

**Options :**

4058597771. approximately 5500 units

4058597772. less than 6000 units

4058597773. more than 6000 units

4058597774. 89% over 2022

**Question Number : 62 Question Id : 4058592329 Question Type : MCQ Option Shuffling : Yes Is Question Mandatory : No Calculator : None Response Time : N.A Think Time : N.A Minimum Instruction Time : 0**

**Correct Marks : 1 Wrong Marks : 0.25**

The total number of differences in the given sentence, from the passage are -

The surge came even when their close rivals and compatriots Mercedes-Benz and BMW have strong petrol line-ups in their portfolio.

**Options :**

4058597775. 3

4058597776. 4

4058597777. 5

4058597778. 6

**Question Number : 63 Question Id : 4058592330 Question Type : MCQ Option Shuffling : Yes Is Question Mandatory : No Calculator : None Response Time : N.A Think Time : N.A Minimum Instruction Time : 0**

**Correct Marks : 1 Wrong Marks : 0.25**

Audi achieved the highest sale in India in -

**Options :**

4058597779. 2011

4058597780. 2020

4058597781. 2022

4058597782. 2023

**Question Number : 64 Question Id : 4058592331 Question Type : MCQ Option Shuffling : Yes Is Question Mandatory : No Calculator : None Response Time : N.A Think Time : N.A Minimum Instruction Time : 0**

**Correct Marks : 1 Wrong Marks : 0.25**

The parent company of 'Audi' is -

**Options :**

4058597783. Mercedes-Benz

4058597784. BMV

4058597785. Volkswagen

4058597786. Audi India

**Question Number : 65 Question Id : 4058592332 Question Type : MCQ Option Shuffling : Yes Is Question Mandatory : No Calculator : None Response Time : N.A Think Time : N.A Minimum Instruction Time : 0**

**Correct Marks : 1 Wrong Marks : 0.25**

Choose the word that means the same as 'a person who is a citizen of the same country as somebody else'.

**Options :**

4058597787. rival

4058597788. compatriot

4058597789. local

4058597790. giant

**Question Id : 4058592327 Question Type : COMPREHENSION Sub Question Shuffling Allowed :**

**Yes Group Comprehension Questions : No Question Pattern Type : NonMatrix Calculator :**

**None Response Time : N.A Think Time : N.A Minimum Instruction Time : 0**

**Question Numbers : (61 to 65)**

Question Label : Comprehension

Read the given passage and answer the question that follow -

German luxury carmaker Audi has staged a strong comeback in the Indian market, registering sales of 7,931 units in 2023. The company's volumes had plunged to 1,639 units in 2020.

For Audi, which suffered a major reversal after exiting the diesel segment in 2020 and moving to only a petrol & electric power train strategy the growth in 2023 was 89% over the 4,187 units it had sold in 2022. The surge came even as its close rivals and compatriots Mercedes Benz and BMW have strong diesel line-ups in their portfolios.

For Audi, the numbers have been on an upswing recently, though its overall sales are still some distance away from the peak of 11,192 units it had achieved in 2011.

Balbir Singh Dhillon, head of Audi in India, told that the company has been rapidly expanding its offerings in India as it opts for more locally assembled cars to keep the retail pricing and ownership costs under check. "Our decision to move out of diesels was also absolutely correct as the contribution of the fuel has been coming down with petrol now becoming the dominant powertrain on a share of 65%," he said, adding that "Audi now leads in the petrol segment" over its rivals.

Audi is part of German giant Volkswagen's ecosystem that also sells brands such as Skoda, VW, Lamborghini, and Porsche in India. Dhillon said demand for luxury cars remains strong, and is likely to see record numbers this year.

**Sub questions**



**Question Number : 61 Question Id : 4058592328 Question Type : MCQ Option Shuffling : Yes Is Question Mandatory : No Calculator : None Response Time : N.A Think Time : N.A Minimum Instruction Time : 0**

**Correct Marks : 1 Wrong Marks : 0.25**

The difference in the Audi sales in the years 2023 and 2020 is -

**Options :**

4058597771. approximately 5500 units

4058597772. less than 6000 units

4058597773. more than 6000 units

4058597774. 89% over 2022

**Question Number : 62 Question Id : 4058592329 Question Type : MCQ Option Shuffling : Yes Is Question Mandatory : No Calculator : None Response Time : N.A Think Time : N.A Minimum Instruction Time : 0**

**Correct Marks : 1 Wrong Marks : 0.25**

The total number of differences in the given sentence, from the passage are -

The surge came even when their close rivals and compatriots Mercedes-Benz and BMW have strong petrol line-ups in their portfolio.

**Options :**

4058597775. 3

4058597776. 4

4058597777. 5

4058597778. 6

**Question Number : 63 Question Id : 4058592330 Question Type : MCQ Option Shuffling : Yes Is**

**Question Mandatory : No Calculator : None Response Time : N.A Think Time : N.A Minimum**

**Instruction Time : 0**

**Correct Marks : 1 Wrong Marks : 0.25**

Audi achieved the highest sale in India in -

**Options :**

4058597779. 2011

4058597780. 2020

4058597781. 2022

4058597782. 2023

**Question Number : 64 Question Id : 4058592331 Question Type : MCQ Option Shuffling : Yes Is**

**Question Mandatory : No Calculator : None Response Time : N.A Think Time : N.A Minimum**

**Instruction Time : 0**

**Correct Marks : 1 Wrong Marks : 0.25**

The parent company of 'Audi' is -

**Options :**

4058597783. Mercedes-Benz

4058597784. BMW

4058597785. Volkswagen

4058597786. Audi India

**Question Number : 65 Question Id : 4058592332 Question Type : MCQ Option Shuffling : Yes Is**

**Question Mandatory : No Calculator : None Response Time : N.A Think Time : N.A Minimum**

**Instruction Time : 0**

**Correct Marks : 1 Wrong Marks : 0.25**

Choose the word that means the same as 'a person who is a citizen of the same country as somebody else'.

**Options :**

4058597787. rival

4058597788. compatriot

4058597789. local

4058597790. giant

<b>Sub-Section Number :</b>	4
<b>Sub-Section Id :</b>	405859164
<b>Question Shuffling Allowed :</b>	No
<b>Is Section Default? :</b>	null

**Question Id : 4058592333 Question Type : COMPREHENSION Sub Question Shuffling Allowed :**

**Yes Group Comprehension Questions : No Question Pattern Type : NonMatrix Calculator :**

**None Response Time : N.A Think Time : N.A Minimum Instruction Time : 0**

**Question Numbers : (66 to 70)**

**Question Label : Comprehension**

Read the given passage and answer the questions that follow -

Adani Group stocks rallied up to 18% on Wednesday ahead of the Supreme Court's judgment in the Adani-Sebi case. The SC didn't order any investigation by other agencies or bodies like CBI in the case and declined to interfere in Sebi's investigation.

At close of the day's session, all 10 Adani Group stocks were in the green with Adani Energy Solutions (formerly Adani Transmission) leading the pack with a 12% gain. Group flagship Adani Enterprises closed 2.5% higher on the BSE.

The group's total market cap also crossed the Rs 15 lakh-crore mark in Wednesday's session. During the day's trade, the group companies added nearly Rs 64,000 crore to the conglomerate's total market value to Rs 15.1 lakh crore. From its all-time high total market cap of Rs 19.2 lakh crore on January 24, 2023 the day US-based short seller Hindenburg had published its damning report against the group it is still down by Rs 4.1 lakh crore or about 21%, BSE data showed.

Nearly a year ago, Hindenburg had published a report that alleged serious corporate malfeasance by Adani Group including cooking books of accounts, round tripping of own funds to jack up stock prices using offshore entities and over invoicing of import costs. Adani Group denied the allegations but by February 27, the group's market cap had dropped by about 65% to Rs 6.8 lakh crore. Since then, it has

been on a steady upward trajectory, at times helped by SC orders that came in its favour and other regulatory moves.

Among the group's stocks, Adani Power is the biggest gainer since the Hindenburg report last year. The stock has nearly doubled, with the company's market cap now at Rs 2.1 lakh crore from Rs 1.1 lakh crore then. The biggest laggard has been Adani Total Gas, which has lost 72% of its market value from Rs 4.3 lakh crore on January 24, 2023, it is at Rs 1.2 lakh crore. The other top laggards are Adani Transmission, down from Rs 3.1 lakh crore to Rs 1.3 lakh crore, and Adani Enterprises, down from Rs 3.9 lakh crore to Rs 3.4 lakh crore.

### Sub questions

**Question Number : 66 Question Id : 4058592334 Question Type : MCQ Option Shuffling : Yes Is**

**Question Mandatory : No Calculator : None Response Time : N.A Think Time : N.A Minimum**

**Instruction Time : 0**

**Correct Marks : 1 Wrong Marks : 0.25**

Choose the incorrect statement -

**Options :**

4058597791. The Supreme Court declined to interfere in Sebi's investigation.

4058597792. At the close of the day's session, not all of the 10 Adani group stocks were in the green.

4058597793. The group's total market cap also crossed the Rs. 15-lakh-crore mark in Wednesday's session.

4058597794. Among the group's stocks, Adani Power is the biggest gainer.

**Question Number : 67 Question Id : 4058592335 Question Type : MCQ Option Shuffling : Yes Is Question Mandatory : No Calculator : None Response Time : N.A Think Time : N.A Minimum Instruction Time : 0**

**Correct Marks : 1 Wrong Marks : 0.25**

Adani group has had the all time high of -

**Options :**

4058597795. 15.1 lakh-crore

4058597796. 19.2 lakh-crore

4058597797. 43 lakh-crore

4058597798. 68 lakh-crore

**Question Number : 68 Question Id : 4058592336 Question Type : MCQ Option Shuffling : Yes Is Question Mandatory : No Calculator : None Response Time : N.A Think Time : N.A Minimum Instruction Time : 0**

**Correct Marks : 1 Wrong Marks : 0.25**

Hindenburg report alleged that Adani Group -

**Options :**

4058597799. interfered in Sebi's investigation before Supreme Court's judgement.

4058597800. Crossed the Rs. 15 lakh-crore mark in Wednesday's session.

4058597801. had cooked account-books and round tripped own funds to jack down stock prices.

4058597802. had indulged in serious corporate malfeasance.

**Question Number : 69 Question Id : 4058592337 Question Type : MCQ Option Shuffling : Yes Is Question Mandatory : No Calculator : None Response Time : N.A Think Time : N.A Minimum Instruction Time : 0**

**Correct Marks : 1 Wrong Marks : 0.25**

Choose one word for the given group of words -

the curved path of something that has been fired, hit or thrown into the air?

**Options :**

4058597803. rallied

4058597804. transmission

4058597805. flagship

4058597806. trajectory

**Question Number : 70 Question Id : 4058592338 Question Type : MCQ Option Shuffling : Yes Is Question Mandatory : No Calculator : None Response Time : N.A Think Time : N.A Minimum Instruction Time : 0**

**Correct Marks : 1 Wrong Marks : 0.25**

The word closest in meaning to 'malfeasance' is

**Options :**

4058597807. malintentions

4058597808. malpractice

4058597809. manifestation

4058597810. deficiency

**Question Id : 4058592333 Question Type : COMPREHENSION Sub Question Shuffling Allowed :**

**Yes Group Comprehension Questions : No Question Pattern Type : NonMatrix Calculator :**

**None Response Time : N.A Think Time : N.A Minimum Instruction Time : 0**

**Question Numbers : (66 to 70)**

Question Label : Comprehension

Read the given passage and answer the questions that follow -

Adani Group stocks rallied up to 18% on Wednesday ahead of the Supreme Court's judgment in the Adani-Sebi case. The SC didn't order any investigation by other agencies or bodies like CBI in the case and declined to interfere in Sebi's investigation.

At close of the day's session, all 10 Adani Group stocks were in the green with Adani Energy Solutions (formerly Adani Transmission) leading the pack with a 12% gain. Group flagship Adani Enterprises closed 2.5% higher on the BSE.

The group's total market cap also crossed the Rs 15 lakh-crore mark in Wednesday's session. During the day's trade, the group companies added nearly Rs 64,000 crore to the conglomerate's total market value to Rs 15.1 lakh crore. From its all-time high total market cap of Rs 19.2 lakh crore on January 24, 2023 the day US-based short seller Hindenburg had published its damning report against the group it is still down by Rs 4.1 lakh crore or about 21%, BSE data showed.

Nearly a year ago, Hindenburg had published a report that alleged serious corporate malfeasance by Adani Group including cooking books of accounts, round tripping of own funds to jack up stock prices using offshore entities and over invoicing of import costs. Adani Group denied the allegations but by February 27, the group's market cap had dropped by about 65% to Rs 6.8 lakh crore. Since then, it has

been on a steady upward trajectory, at times helped by SC orders that came in its favour and other regulatory moves.

Among the group's stocks, Adani Power is the biggest gainer since the Hindenburg report last year. The stock has nearly doubled, with the company's market cap now at Rs 2.1 lakh crore from Rs 1.1 lakh crore then. The biggest laggard has been Adani Total Gas, which has lost 72% of its market value from Rs 4.3 lakh crore on January 24, 2023, it is at Rs 1.2 lakh crore. The other top laggards are Adani Transmission, down from Rs 3.1 lakh crore to Rs 1.3 lakh crore, and Adani Enterprises, down from Rs 3.9 lakh crore to Rs 3.4 lakh crore.

### Sub questions

**Question Number : 66 Question Id : 4058592334 Question Type : MCQ Option Shuffling : Yes Is**

**Question Mandatory : No Calculator : None Response Time : N.A Think Time : N.A Minimum**

**Instruction Time : 0**

**Correct Marks : 1 Wrong Marks : 0.25**

Choose the incorrect statement -

**Options :**

4058597791. The Supreme Court declined to interfere in Sebi's investigation.



4058597792. At the close of the day's session, not all of the 10 Adani group stocks were in the green.

4058597793. The group's total market cap also crossed the Rs. 15-lakh-crore mark in Wednesday's session.

4058597794. Among the group's stocks, Adani Power is the biggest gainer.

**Question Number : 67 Question Id : 4058592335 Question Type : MCQ Option Shuffling : Yes Is Question Mandatory : No Calculator : None Response Time : N.A Think Time : N.A Minimum Instruction Time : 0**

**Correct Marks : 1 Wrong Marks : 0.25**

Adani group has had the all time high of -

**Options :**

4058597795. 15.1 lakh-crore

4058597796. 19.2 lakh-crore

4058597797. 43 lakh-crore

4058597798. 68 lakh-crore

**Question Number : 68 Question Id : 4058592336 Question Type : MCQ Option Shuffling : Yes Is Question Mandatory : No Calculator : None Response Time : N.A Think Time : N.A Minimum Instruction Time : 0**

**Correct Marks : 1 Wrong Marks : 0.25**

Hindenburg report alleged that Adani Group -

**Options :**

4058597799. interfered in Sebi's investigation before Supreme Court's judgement.

4058597800. Crossed the Rs. 15 lakh-crore mark in Wednesday's session.

4058597801. had cooked account-books and round tripped own funds to jack down stock prices.

4058597802. had indulged in serious corporate malfeasance.

**Question Number : 69 Question Id : 4058592337 Question Type : MCQ Option Shuffling : Yes Is Question Mandatory : No Calculator : None Response Time : N.A Think Time : N.A Minimum Instruction Time : 0**

**Correct Marks : 1 Wrong Marks : 0.25**

Choose one word for the given group of words -

the curved path of something that has been fired, hit or thrown into the air?

**Options :**

4058597803. rallied

4058597804. transmission

4058597805. flagship

4058597806. trajectory

**Question Number : 70 Question Id : 4058592338 Question Type : MCQ Option Shuffling : Yes Is Question Mandatory : No Calculator : None Response Time : N.A Think Time : N.A Minimum Instruction Time : 0**

**Correct Marks : 1 Wrong Marks : 0.25**

The word closest in meaning to 'malfeasance' is

**Options :**

4058597807. malintentions

4058597808. malpractice

4058597809. manifestation

4058597810. deficiency

<b>Sub-Section Number :</b>	5
<b>Sub-Section Id :</b>	405859165
<b>Question Shuffling Allowed :</b>	No
<b>Is Section Default? :</b>	null

**Question Id : 4058592339 Question Type : COMPREHENSION Sub Question Shuffling Allowed :  
Yes Group Comprehension Questions : No Question Pattern Type : NonMatrix Calculator :  
None Response Time : N.A Think Time : N.A Minimum Instruction Time : 0**

**Question Numbers : (71 to 75)**

Question Label : Comprehension

Read the given passage and answer the questions that follow -

The healthcare sector continued to be a hub of private equity deal activity in 2023, with India registering 22 deals valued at \$4.6 billion. This is a tad lower than \$4.7 billion achieved in 2022.

The country's growing middle class is catalysing a significant surge in healthcare expenditure, propelled by the upswing in disposable incomes and a proliferation of insurtech platforms, alongside the presence of private payers, says Bain & Company's annual Global Healthcare Private Equity and M&A report.

India has seen a long-term rise in biopharma-related activity (for example, in generics and active pharmaceutical ingredient manufacturing), albeit with a slowdown year over year, while also witnessing growth in domestic demand driven by an expanding middle class and government Insurance programmes. These macroeconomic dynamics, coupled with a number of successful exits by early investors in India such as TPG's sale of a controlling stake in Care Hospitals to Blackstone - have propelled private equity sponsors to regard India as a place to deploy healthcare capital at scale, it adds.

Globally too, the sector held its own in a tepid market with deals totalling around \$60 billion, despite higher global interest rates, inflationary pressures, and broader geopolitical uncertainty. Biopharma captured the bulk of dealmaking momentum, contributing 48% of global deal value, including six deals of over \$2 billion.

In 2024, investors will continue to bet on the transformative nature of generative AI, new modalities and innovative therapies such as glucagon-like peptide-1 agonists (GLP-1s), and India as a place to deploy healthcare capital at scale, the report says.

Investors seeking to manage geopolitical risk began to broaden their horizons, with India representing the largest share of announced deal value and continuing to see a long-term rise in biopharma-related activity. The domestic pharmaceutical sector, buoyed by government policies and skilled talent, holds a top three global position in small molecule and generic manufacturing, satisfying 50% of global vaccine needs.

Private equity investors, including Advent International, Carlyle, and PAG, capitalised on this growth, expanding in pharma services like CDMOs and APIs. India has historically served as the back end for many US- and Europe-focused healthcare data and analytics companies. Recent years, however, witnessed a surge in direct-to-consumer digital health companies especially in fitness, wellness, telemedicine, and insurtech.

Investments in Asia-Pacific are evolving, and India's favourable macro tailwinds have made it a leading destination for capital. India has traditionally seen investments in biopharma and providers, and it is still too soon to know whether green shoots in other areas can achieve comparable prominence, the report said.

### Sub questions

Question Number : 71 Question Id : 4058592340 Question Type : MCQ Option Shuffling : Yes Is

Question Mandatory : No Calculator : None Response Time : N.A Think Time : N.A Minimum

Instruction Time : 0

Correct Marks : 1 Wrong Marks : 0.25

The expanding middle class of India

**Options :**

4058597811. has caused a noticeable increase in government insurance programmes.

4058597812. has caused a noticeable increase in healthcare expenditure.

4058597813. has caused a proliferation of insurtech platforms.

4058597814. has caused private equity sponsors to regard India as a place to deploy healthcare capital at scale.

**Question Number : 72 Question Id : 4058592341 Question Type : MCQ Option Shuffling : Yes Is Question Mandatory : No Calculator : None Response Time : N.A Think Time : N.A Minimum Instruction Time : 0**

**Correct Marks : 1 Wrong Marks : 0.25**

The sector that showed an upswing globally in 2023 was -

**Options :**

4058597815. Generative AI

4058597816. Biopharma

4058597817. Data and analytics

4058597818. Fitness and wellness

**Question Number : 73 Question Id : 4058592342 Question Type : MCQ Option Shuffling : Yes Is Question Mandatory : No Calculator : None Response Time : N.A Think Time : N.A Minimum Instruction Time : 0**

**Correct Marks : 1 Wrong Marks : 0.25**

Indian pharmaceutical sector saw an upswing in 2023 -

**Options :**

4058597819. because of country's growing middle class.

4058597820. because of a number of successful exits by early investors in India.

4058597821. because of India representing the largest share of announced deal value and continuing to see a long-term rise in biopharma related activity.

4058597822. because of favourable government policies and skilled talent.

**Question Number : 74 Question Id : 4058592343 Question Type : MCQ Option Shuffling : Yes Is Question Mandatory : No Calculator : None Response Time : N.A Think Time : N.A Minimum Instruction Time : 0**

**Correct Marks : 1 Wrong Marks : 0.25**

Choose the most appropriate word for the given group of words -

'The state of being important, well known or easy to notice'.

**Options :**

4058597823. hub

4058597824. significant

4058597825. dynamic

4058597826. prominence

**Question Number : 75 Question Id : 4058592344 Question Type : MCQ Option Shuffling : Yes Is Question Mandatory : No Calculator : None Response Time : N.A Think Time : N.A Minimum Instruction Time : 0**

**Correct Marks : 1 Wrong Marks : 0.25**

The closest synonym for 'tepid' is

**Options :**

4058597827. lukewarm

4058597828. volatile

4058597829. slow

4058597830. frozen

**Question Id : 4058592339 Question Type : COMPREHENSION Sub Question Shuffling Allowed :**

**Yes Group Comprehension Questions : No Question Pattern Type : NonMatrix Calculator :**

**None Response Time : N.A Think Time : N.A Minimum Instruction Time : 0**

**Question Numbers : (71 to 75)**

Question Label : Comprehension

Read the given passage and answer the questions that follow -

The healthcare sector continued to be a hub of private equity deal activity in 2023, with India registering 22 deals valued at \$4.6 billion. This is a tad lower than \$4.7 billion achieved in 2022.

The country's growing middle class is catalysing a significant surge in healthcare expenditure, propelled by the upswing in disposable incomes and a proliferation of insurtech platforms, alongside the presence of private payers, says Bain & Company's annual Global Healthcare Private Equity and M&A report.

India has seen a long-term rise in biopharma-related activity (for example, in generics and active pharmaceutical ingredient manufacturing), albeit with a slowdown year over year, while also witnessing growth in domestic demand driven by an expanding middle class and government Insurance programmes. These macroeconomic dynamics, coupled with a number of successful exits by early investors in India such as TPG's sale of a controlling stake in Care Hospitals to Blackstone -have propelled private equity sponsors to regard India as a place to deploy healthcare capital at scale, it adds.

Globally too, the sector held its own in a tepid market with deals totalling around \$60 billion, despite higher global interest rates, inflationary pressures, and broader geopolitical uncertainty. Biopharma captured the bulk of dealmaking momentum, contributing 48% of global deal value, including six deals of over \$2 billion.

In 2024, investors will continue to bet on the transformative nature of generative AI, new modalities and innovative therapies such as glucagon-like peptide-1 agonists (GLP-1s), and India as a place to deploy healthcare capital at scale, the report says.

Investors seeking to manage geopolitical risk began to broaden their horizons, with India representing the largest share of announced deal value and continuing to see a long-term rise in biopharma-related activity. The domestic pharmaceutical sector, buoyed by government policies and skilled talent, holds a top three global position in small molecule and generic manufacturing, satisfying 50% of global vaccine needs.

Private equity investors, including Advent International, Carlyle, and PAG, capitalised on this growth, expanding in pharma services like CDMOs and APIs. India has historically served as the back end for many US- and Europe-focused healthcare data and analytics companies. Recent years, however, witnessed a surge in direct-to-consumer digital health companies especially in fitness, wellness, telemedicine, and insurtech.

Investments in Asia-Pacific are evolving, and India's favourable macro tailwinds have made it a leading destination for capital. India has traditionally seen investments in biopharma and providers, and it is still too soon to know whether green shoots in other areas can achieve comparable prominence, the report said.

### Sub questions

Question Number : 71 Question Id : 4058592340 Question Type : MCQ Option Shuffling : Yes Is

Question Mandatory : No Calculator : None Response Time : N.A Think Time : N.A Minimum

Instruction Time : 0

Correct Marks : 1 Wrong Marks : 0.25

The expanding middle class of India



**Options :**

4058597811. has caused a noticeable increase in government insurance programmes.

4058597812. has caused a noticeable increase in healthcare expenditure.

4058597813. has caused a proliferation of insurtech platforms.

4058597814. has caused private equity sponsors to regard India as a place to deploy healthcare capital at scale.

**Question Number : 72 Question Id : 4058592341 Question Type : MCQ Option Shuffling : Yes Is Question Mandatory : No Calculator : None Response Time : N.A Think Time : N.A Minimum Instruction Time : 0**

**Correct Marks : 1 Wrong Marks : 0.25**

The sector that showed an upswing globally in 2023 was -

**Options :**

4058597815. Generative AI

4058597816. Biopharma

4058597817. Data and analytics

4058597818. Fitness and wellness

**Question Number : 73 Question Id : 4058592342 Question Type : MCQ Option Shuffling : Yes Is Question Mandatory : No Calculator : None Response Time : N.A Think Time : N.A Minimum Instruction Time : 0**

**Correct Marks : 1 Wrong Marks : 0.25**

Indian pharmaceutical sector saw an upswing in 2023 -

**Options :**

4058597819. because of country's growing middle class.

4058597820. because of a number of successful exits by early investors in India.

4058597821. because of India representing the largest share of announced deal value and continuing to see a long-term rise in biopharma related activity.

4058597822. because of favourable government policies and skilled talent.

**Question Number : 74 Question Id : 4058592343 Question Type : MCQ Option Shuffling : Yes Is Question Mandatory : No Calculator : None Response Time : N.A Think Time : N.A Minimum Instruction Time : 0**

**Correct Marks : 1 Wrong Marks : 0.25**

Choose the most appropriate word for the given group of words -

'The state of being important, well known or easy to notice'.

**Options :**

4058597823. hub

4058597824. significant

4058597825. dynamic

4058597826. prominence

**Question Number : 75 Question Id : 4058592344 Question Type : MCQ Option Shuffling : Yes Is Question Mandatory : No Calculator : None Response Time : N.A Think Time : N.A Minimum Instruction Time : 0**

**Correct Marks : 1 Wrong Marks : 0.25**

The closest synonym for 'tepid' is

**Options :**

4058597827. lukewarm

4058597828. volatile

4058597829. slow

4058597830. frozen

<b>Sub-Section Number :</b>	6
<b>Sub-Section Id :</b>	405859166
<b>Question Shuffling Allowed :</b>	No
<b>Is Section Default? :</b>	null

**Question Id : 4058592345 Question Type : COMPREHENSION Sub Question Shuffling Allowed :  
Yes Group Comprehension Questions : No Question Pattern Type : NonMatrix Calculator :  
None Response Time : N.A Think Time : N.A Minimum Instruction Time : 0**

**Question Numbers : (76 to 80)**

Question Label : Comprehension

Read the given passage and answer the questions that follow -

Water Isaacson, biographer of tech visionaries like Steve Jobs and Elon Musk, has also told the story of the many-splendoured Leonardo da Vinci, whose accomplishments sprang from his capacity to marvel at the world.

Leonardo made the two most famous paintings in history - Mona Lisa and The Last Supper - but thought of himself as much a scientist and engineer. Driven by curiosity and equipped with acute powers of observation, he peeled the skin of cadavers to understand the muscles that moved the smile and the mysteries of the skeleton. He studied optics, and mastered shading and perspective: this dimensionality became the supreme innovation of Renaissance art. Leonardo was not formally schooled but saw himself as a disciple of 'experience'.

Everything flowed into everything else, as he looked for patterns and analogies between the human body and the world. His notebooks reveal his 'matchlessly weird' mind with its to-do lists, math challenges, drawings of his boyfriend, bird, theatre props, flying machines, riddles, painting tips, weapons, grotesque heads and fables. He would find patterns in curls of hair, eddies of water and whirls of air.

Being born out of wedlock freed him from following in his father's footsteps as a notary. Illegitimate, gay left-handed, vegetarian: and yet, Leonardo was right at home in 15th century Florence, which welcomed misfits and rebels. A cradle of art and commerce under the Medicis, it was the perfect setting for Leonardo's artistic experiments. He apprenticed at a workshop, learning to sculpt bodies in motion, the folds of drapery the harmonies of geometry. He pioneered sfumato (from the word for smoke)- a way of blurring edges to render objects as they appear to the eye.

Leonardo also worked in theatre pageants, on sets and dazzling props to change scenery. His aerial screw - regarded as a prototype helicopter - came from this experience.

He was impelled by scientific humanism, unbothered by religious dogma. His famous Vitruvian man shows his search for the 'universal measure of man', seeing human bodies as microcosms of the universe.

And yet, the book shows that he was no genius touched by lightning, but a fanciful mortal who enjoyed conception more than completion.

He had masterpieces that remained unfinished, impractical fantasies, flying machines that never flew, military strategies, attempts to square the circle, to divert rivers.

His patrons included the ruthless Ludovico Sforza and Cesare Borgia, he was friends with Niccolo Machiavelli. In midlife, he clashed with the rising star Michelangelo, whose clearcut anatomy renderings he declared wooden rather than human. He refused to paint a rich marchesa no matter how much she begged, but gladly began a painting of a silk merchant's wife; labouring over it until he died, never delivering it to the merchant. That painting was the enigmatic Mona Lisa.

Does Leonardo's life hold out lessons for aspiring creatives? The book has some tips: Be relentlessly curious, pursue knowledge for its own sake, observe. Start with the details, go down rabbit holes, but allow yourself to be distracted too. Collaborate, take notes. Respect facts, but indulge fantasy and let your reach exceed your grasp. And finally, be open to mystery.

## Sub questions

Question Number : 76 Question Id : 4058592346 Question Type : MCQ Option Shuffling : Yes Is

Question Mandatory : No Calculator : None Response Time : N.A Think Time : N.A Minimum

Instruction Time : 0

Correct Marks : 1 Wrong Marks : 0.25

The Renaissance art is characterized by -

**Options :**

4058597831. splendour

4058597832. shading and perspective

4058597833. patterns and analogies

4058597834. harmonies of geometry

**Question Number : 77 Question Id : 4058592347 Question Type : MCQ Option Shuffling : Yes Is Question Mandatory : No Calculator : None Response Time : N.A Think Time : N.A Minimum Instruction Time : 0**

**Correct Marks : 1 Wrong Marks : 0.25**

Choose the most appropriate statement that describes Vinci's vision -

**Options :**

4058597835. He had a limited capacity to marvel at the world.

4058597836. He was illegitimate and left-handed.

4058597837. He apprenticed at a work shop, learning to sculpt bodies in motion.

4058597838. He saw human bodies as microcosms of the universe.

**Question Number : 78 Question Id : 4058592348 Question Type : MCQ Option Shuffling : Yes Is Question Mandatory : No Calculator : None Response Time : N.A Think Time : N.A Minimum Instruction Time : 0**

**Correct Marks : 1 Wrong Marks : 0.25**

The author of this passage considers Leonardo da Vinci a 'more fanciful mortal' rather than a genius because -

**Options :**

4058597839. his accomplishments sprang from his capacity to marvel at the world.

4058597840. he was not formally schooled but was 'a disciple of experience'.

4058597841. he was impelled by scientific humanism unbothered by religious dogma.

4058597842. he had unfinished masterpieces, impractical fantasies and flying machines that never flew.

**Question Number : 79 Question Id : 4058592349 Question Type : MCQ Option Shuffling : Yes Is Question Mandatory : No Calculator : None Response Time : N.A Think Time : N.A Minimum Instruction Time : 0**

**Correct Marks : 1 Wrong Marks : 0.25**

Give one word for the following group of words -

'Mysterious and difficult to understand'

**Options :**

4058597843. marvel

4058597844. weird

4058597845. enigmatic

4058597846. fantasy

**Question Number : 80 Question Id : 4058592350 Question Type : MCQ Option Shuffling : Yes Is Question Mandatory : No Calculator : None Response Time : N.A Think Time : N.A Minimum Instruction Time : 0**

**Correct Marks : 1 Wrong Marks : 0.25**

The closest synonym of the word 'ugly' is -

**Options :**

4058597847. splendoured

4058597848. impelled

4058597849. weird

4058597850. grotesque

**Question Id : 4058592345 Question Type : COMPREHENSION Sub Question Shuffling Allowed :**

**Yes Group Comprehension Questions : No Question Pattern Type : NonMatrix Calculator :**

**None Response Time : N.A Think Time : N.A Minimum Instruction Time : 0**

**Question Numbers : (76 to 80)**

Question Label : Comprehension

Read the given passage and answer the questions that follow -

Water Isaacson, biographer of tech visionaries like Steve Jobs and Elon Musk, has also told the story of the many-splendoured Leonardo da Vinci, whose accomplishments sprang from his capacity to marvel at the world.

Leonardo made the two most famous paintings in history - Mona Lisa and The Last Supper - but thought of himself as much a scientist and engineer. Driven by curiosity and equipped with acute powers of observation, he peeled the skin of cadavers to understand the muscles that moved the smile and the mysteries of the skeleton. He studied optics, and mastered shading and perspective: this dimensionality became the supreme innovation of Renaissance art. Leonardo was not formally schooled but saw himself as a disciple of 'experience'.

Everything flowed into everything else, as he looked for patterns and analogies between the human body and the world. His notebooks reveal his 'matchlessly weird' mind with its to-do lists, math challenges, drawings of his boyfriend, bird, theatre props, flying machines, riddles, painting tips, weapons, grotesque heads and fables. He would find patterns in curls of hair, eddies of water and whirls of air.

Being born out of wedlock freed him from following in his father's footsteps as a notary. Illegitimate, gay left-handed, vegetarian: and yet, Leonardo was right at home in 15th century Florence, which welcomed misfits and rebels. A cradle of art and commerce under the Medicis, it was the perfect setting for Leonardo's artistic experiments. He apprenticed at a workshop, learning to sculpt bodies in motion, the folds of drapery the harmonies of geometry. He pioneered sfumato (from the word for smoke)- a way of blurring edges to render objects as they appear to the eye.

Leonardo also worked in theatre pageants, on sets and dazzling props to change scenery. His aerial screw - regarded as a prototype helicopter - came from this experience.

He was impelled by scientific humanism, unbothered by religious dogma. His famous Vitruvian man shows his search for the 'universal measure of man', seeing human bodies as microcosms of the universe.

And yet, the book shows that he was no genius touched by lightning, but a fanciful mortal who enjoyed conception more than completion.

He had masterpieces that remained unfinished, impractical fantasies, flying machines that never flew, military strategies, attempts to square the circle, to divert rivers.

His patrons included the ruthless Ludovico Sforza and Cesare Borgia, he was friends with Niccolo Machiavelli. In midlife, he clashed with the rising star Michelangelo, whose clearcut anatomy renderings he declared wooden rather than human. He refused to paint a rich marchesa no matter how much she begged, but gladly began a painting of a silk merchant's wife; labouring over it until he died, never delivering it to the merchant. That painting was the enigmatic Mona Lisa.

Does Leonardo's life hold out lessons for aspiring creatives? The book has some tips: Be relentlessly curious, pursue knowledge for its own sake, observe. Start with the details, go down rabbit holes, but allow yourself to be distracted too. Collaborate, take notes. Respect facts, but indulge fantasy and let your reach exceed your grasp. And finally, be open to mystery.

## Sub questions

Question Number : 76 Question Id : 4058592346 Question Type : MCQ Option Shuffling : Yes Is

Question Mandatory : No Calculator : None Response Time : N.A Think Time : N.A Minimum

Instruction Time : 0

Correct Marks : 1 Wrong Marks : 0.25

The Renaissance art is characterized by -



**Options :**

4058597831. splendour

4058597832. shading and perspective

4058597833. patterns and analogies

4058597834. harmonies of geometry

**Question Number : 77 Question Id : 4058592347 Question Type : MCQ Option Shuffling : Yes Is Question Mandatory : No Calculator : None Response Time : N.A Think Time : N.A Minimum Instruction Time : 0**

**Correct Marks : 1 Wrong Marks : 0.25**

Choose the most appropriate statement that describes Vinci's vision -

**Options :**

4058597835. He had a limited capacity to marvel at the world.

4058597836. He was illegitimate and left-handed.

4058597837. He apprenticed at a work shop, learning to sculpt bodies in motion.

4058597838. He saw human bodies as microcosms of the universe.

**Question Number : 78 Question Id : 4058592348 Question Type : MCQ Option Shuffling : Yes Is Question Mandatory : No Calculator : None Response Time : N.A Think Time : N.A Minimum Instruction Time : 0**

**Correct Marks : 1 Wrong Marks : 0.25**

The author of this passage considers Leonardo da Vinci a 'more fanciful mortal' rather than a genius because -

**Options :**

4058597839. his accomplishments sprang from his capacity to marvel at the world.

4058597840. he was not formally schooled but was 'a disciple of experience'.

4058597841. he was impelled by scientific humanism unbothered by religious dogma.

4058597842. he had unfinished masterpieces, impractical fantasies and flying machines that never flew.

**Question Number : 79 Question Id : 4058592349 Question Type : MCQ Option Shuffling : Yes Is Question Mandatory : No Calculator : None Response Time : N.A Think Time : N.A Minimum Instruction Time : 0**

**Correct Marks : 1 Wrong Marks : 0.25**

Give one word for the following group of words -

'Mysterious and difficult to understand'

**Options :**

4058597843. marvel

4058597844. weird

4058597845. enigmatic

4058597846. fantasy

**Question Number : 80 Question Id : 4058592350 Question Type : MCQ Option Shuffling : Yes Is Question Mandatory : No Calculator : None Response Time : N.A Think Time : N.A Minimum Instruction Time : 0**

**Correct Marks : 1 Wrong Marks : 0.25**

The closest synonym of the word 'ugly' is -

**Options :**

4058597847. splendoured

4058597848. impelled

4058597849. weird

4058597850. grotesque

<b>Sub-Section Number :</b>	7
<b>Sub-Section Id :</b>	405859167
<b>Question Shuffling Allowed :</b>	No
<b>Is Section Default? :</b>	null

**Question Id : 4058592351 Question Type : COMPREHENSION Sub Question Shuffling Allowed :**

**Yes Group Comprehension Questions : No Question Pattern Type : NonMatrix Calculator :**

**None Response Time : N.A Think Time : N.A Minimum Instruction Time : 0**

**Question Numbers : (81 to 85)**

Question Label : Comprehension

Read the given passage and answer the questions that follow :

After a roller-coaster ride on the wealth rankings last year, Gautam Adani is back to being Asia's wealthiest person -days after the country's top court said no new probes were needed into Hindenburg Research's bombshell allegations against the tycoon's conglomerate.

Adani's net worth rose in to \$7.7 billion a day \$97.6 billion, reclaiming the top spot in the region from Mukesh Ambani, according to Bloomberg Billionaires Index. Ambani, chairman of Reliance Industries, was trailing by a narrow margin with a net worth of \$97 billion, the index shows.

The comeback of the first generation entrepreneur, who started off as a diamond trader in the 1980s, caps an eventful year for Adani's ports-to-power conglomerate. Despite denying Hindenburg's allegations of corporate fraud, the Adani Group lost more than \$150 billion in market value at one point last year and spent months wooing back investors, lenders, repaying debt and assuaging regulatory concerns.

Adani Group's stocks rallied after Supreme Court this week ordered the local markets regulator to conclude its investigation into the conglomerate within three months and said no more probes were needed, effectively drawing a line under the year-long short-seller saga.

The court reprieve stoked a \$13.3 billion wealth gain for Adani - world's largest this year - after logging one of the world's largest wealth losses in 2023.

Adani's net worth, however, is yet to fully recover from the short-seller's broadside. It was at \$118.9 billion at the close of January 24, just before Hindenburg's report was published.

Adani, whose conglomerate has committed an investment of \$100 billion over the next decade for green transition across its businesses, is back to rapidly diversifying his empire beyond his coal trading origins into data centers, AI, urban development, air ports and media.

### Sub questions

**Question Number : 81 Question Id : 4058592352 Question Type : MCQ Option Shuffling : Yes Is**

**Question Mandatory : No Calculator : None Response Time : N.A Think Time : N.A Minimum**

**Instruction Time : 0**

**Correct Marks : 1 Wrong Marks : 0.25**

The reason for Gautam Adani regaining his position of being the wealthiest person in Asia is -

**Options :**

4058597851. a roller-coaster ride on the wealth rankings last year.

4058597852. the Supreme Court saying that no new probes were needed into the allegations against the Adani Group.

4058597853. that the Bloomberg Billionaires Index shows him ahead of Mukesh Ambani.

4058597854. that it has been able to woo back the investors and lenders.

**Question Number : 82 Question Id : 4058592353 Question Type : MCQ Option Shuffling : Yes Is Question Mandatory : No Calculator : None Response Time : N.A Think Time : N.A Minimum Instruction Time : 0**

**Correct Marks : 1 Wrong Marks : 0.25**

The net worth of Adani Group at the time of writing this article is -

**Options :**

4058597855. 97.6 billion

4058597856. 150 billion

4058597857. 13.3 billion

4058597858. 118.9 billion

**Question Number : 83 Question Id : 4058592354 Question Type : MCQ Option Shuffling : Yes Is Question Mandatory : No Calculator : None Response Time : N.A Think Time : N.A Minimum Instruction Time : 0**

**Correct Marks : 1 Wrong Marks : 0.25**

Adani group has committed to -

**Options :**

4058597859. regain its market share.

4058597860. regain its investors and lenders.

4058597861. repay its debts and assuage regulatory concerns.

4058597862. go ahead with green transition across its businesses.

**Question Number : 84 Question Id : 4058592355 Question Type : MCQ Option Shuffling : Yes Is**

**Question Mandatory : No Calculator : None Response Time : N.A Think Time : N.A Minimum**

**Instruction Time : 0**

**Correct Marks : 1 Wrong Marks : 0.25**

Choose the appropriate word to fill in the blanks -

The Cabinet \_\_\_\_\_ behind the Prime Minister.

**Options :**

4058597863. needed

4058597864. started off

4058597865. rallied

4058597866. stoked

**Question Number : 85 Question Id : 4058592356 Question Type : MCQ Option Shuffling : Yes Is**

**Question Mandatory : No Calculator : None Response Time : N.A Think Time : N.A Minimum**

**Instruction Time : 0**

**Correct Marks : 1 Wrong Marks : 0.25**

Choose one word for the given group of words -

'to make an unpleasant feeling less severe'

**Options :**

4058597867. probe

4058597868. bombshell

4058597869. assuage

4058597870. reprieve

**Question Id : 4058592351 Question Type : COMPREHENSION Sub Question Shuffling Allowed :**

**Yes Group Comprehension Questions : No Question Pattern Type : NonMatrix Calculator :**

**None Response Time : N.A Think Time : N.A Minimum Instruction Time : 0**

**Question Numbers : (81 to 85)**

Question Label : Comprehension

Read the given passage and answer the questions that follow :

After a roller-coaster ride on the wealth rankings last year, Gautam Adani is back to being Asia's wealthiest person -days after the country's top court said no new probes were needed into Hindenburg Research's bombshell allegations against the tycoon's conglomerate.

Adani's net worth rose in to \$7.7 billion a day \$97.6 billion, reclaiming the top spot in the region from Mukesh Ambani, according to Bloomberg Billionaires Index. Ambani, chairman of Reliance Industries, was trailing by a narrow margin with a net worth of \$97 billion, the index shows.

The comeback of the first generation entrepreneur, who started off as a diamond trader in the 1980s, caps an eventful year for Adani's ports-to-power conglomerate. Despite denying Hindenburg's allegations of corporate fraud, the Adani Group lost more than \$150 billion in market value at one point last year and spent months wooing back investors, lenders, repaying debt and assuaging regulatory concerns.

Adani Group's stocks rallied after Supreme Court this week ordered the local markets regulator to conclude its investigation into the conglomerate within three months and said no more probes were needed, effectively drawing a line under the year-long short-seller saga.

The court reprieve stoked a \$13.3 billion wealth gain for Adani - world's largest this year - after logging one of the world's largest wealth losses in 2023.

Adani's net worth, however, is yet to fully recover from the short-seller's broadside. It was at \$118.9 billion at the close of January 24, just before Hindenburg's report was published.

Adani, whose conglomerate has committed an investment of \$100 billion over the next decade for green transition across its businesses, is back to rapidly diversifying his empire beyond his coal trading origins into data centers, AI, urban development, air ports and media.

### Sub questions

**Question Number : 81 Question Id : 4058592352 Question Type : MCQ Option Shuffling : Yes Is**

**Question Mandatory : No Calculator : None Response Time : N.A Think Time : N.A Minimum**

**Instruction Time : 0**

**Correct Marks : 1 Wrong Marks : 0.25**

The reason for Gautam Adani regaining his position of being the wealthiest person in Asia is -

**Options :**

4058597851. a roller-coaster ride on the wealth rankings last year.



4058597852. the Supreme Court saying that no new probes were needed into the allegations against the Adani Group.

4058597853. that the Bloomberg Billionaires Index shows him ahead of Mukesh Ambani.

4058597854. that it has been able to woo back the investors and lenders.

**Question Number : 82 Question Id : 4058592353 Question Type : MCQ Option Shuffling : Yes Is Question Mandatory : No Calculator : None Response Time : N.A Think Time : N.A Minimum Instruction Time : 0**

**Correct Marks : 1 Wrong Marks : 0.25**

The net worth of Adani Group at the time of writing this article is -

**Options :**

4058597855. 97.6 billion

4058597856. 150 billion

4058597857. 13.3 billion

4058597858. 118.9 billion

**Question Number : 83 Question Id : 4058592354 Question Type : MCQ Option Shuffling : Yes Is Question Mandatory : No Calculator : None Response Time : N.A Think Time : N.A Minimum Instruction Time : 0**

**Correct Marks : 1 Wrong Marks : 0.25**

Adani group has committed to -

**Options :**

4058597859. regain its market share.

4058597860. regain its investors and lenders.

4058597861. repay its debts and assuage regulatory concerns.

4058597862. go ahead with green transition across its businesses.

**Question Number : 84 Question Id : 4058592355 Question Type : MCQ Option Shuffling : Yes Is**

**Question Mandatory : No Calculator : None Response Time : N.A Think Time : N.A Minimum**

**Instruction Time : 0**

**Correct Marks : 1 Wrong Marks : 0.25**

Choose the appropriate word to fill in the blanks -

The Cabinet \_\_\_\_\_ behind the Prime Minister.

**Options :**

4058597863. needed

4058597864. started off

4058597865. rallied

4058597866. stoked

**Question Number : 85 Question Id : 4058592356 Question Type : MCQ Option Shuffling : Yes Is**

**Question Mandatory : No Calculator : None Response Time : N.A Think Time : N.A Minimum**

**Instruction Time : 0**

**Correct Marks : 1 Wrong Marks : 0.25**

Choose one word for the given group of words -

'to make an unpleasant feeling less severe'

**Options :**

4058597867. probe

4058597868. bombshell

4058597869. assuage

4058597870. reprieve

**Sub-Section Number :** 8  
**Sub-Section Id :** 405859168  
**Question Shuffling Allowed :** No  
**Is Section Default? :** null

**Question Id : 4058592357 Question Type : COMPREHENSION Sub Question Shuffling Allowed :  
Yes Group Comprehension Questions : No Question Pattern Type : NonMatrix Calculator :  
None Response Time : N.A Think Time : N.A Minimum Instruction Time : 0**

**Question Numbers : (86 to 90)**

Question Label : Comprehension

Read the given passage and answer the questions that follow:

Auto Expo, which has for years been India's premier motor show, is set to lose some sheen with government lining up Bharat Mobility Expo, a three day event starting February 1. The event will bring 11 agencies representing the multiple segments, from car makers to components, tyres, electric vehicles, construction to battery and electronics outfits under one platform.

While this year's show has been put together quickly, a talking point in industry circles is commerce and industry minister Piyush Goyal's suggestion to expand the Mobility Show beyond Bharat Mandapam (the original venue of the Auto - Expo when it was called Pragati Maidan) to also include the recently completed Yashobhoomi in Dwarka, and subsequently the Noida Expo Centre (the current home of the Auto Expo).

While Goyal did not give any dates for next year, Auto Expo has been held every alternate year in January-February.

At a meeting on Friday, the minister was candid about a pushback from industry players when he first suggested the mega mobility show. The minister's suggestion that this won't be a one-off event got industry players talking about the possibility of dealing with it next year too..

For the moment, the Society of Indian Automobile Manufacturers or Siam, the Auto Expo is sticking to its plan. "Let this event (Bharat Mobility) get over," said a functionary.

While the industry lobby group has been pitching it as ~ a main auto show, several top players have been giving it a miss. For instance, in 2023, many major players, ~ including Mahindra & Mahindra, Honda, Mercedes, BMW, VW, Skoda, Hero Honda and Bajaj Auto decided to skip the event.

In contrast, Goyal has nudged the entire mobility sector to join Bharat Mobility Expo as part of its drive to position India as an attractive MICE (meetings, incentives, conferences and exhibitions) destination with several shows, including those for textiles, gems and jewellery and food lined up until March.

So far, 600 exhibitors, including over 50 from overseas, are expected to participate in this edition's Bharat Mobility, the organizers said.

### Sub questions

Question Number : 86 Question Id : 4058592358 Question Type : MCQ Option Shuffling : Yes Is

Question Mandatory : No Calculator : None Response Time : N.A Think Time : N.A Minimum

Instruction Time : 0

Correct Marks : 1 Wrong Marks : 0.25

The event starting from February 1 is called

Options :

4058597871. Auto Expo

4058597872. Bharat Mobility Expo

4058597873. Mobility Show

4058597874. Noida Expo

**Question Number : 87 Question Id : 4058592359 Question Type : MCQ Option Shuffling : Yes Is Question Mandatory : No Calculator : None Response Time : N.A Think Time : N.A Minimum Instruction Time : 0**

**Correct Marks : 1 Wrong Marks : 0.25**

The new name for Pragati Maidan is -

**Options :**

4058597875. Bharat Mandapam

4058597876. Yashobhoomi

4058597877. Expo Centre

4058597878. Noida Expo centre

**Question Number : 88 Question Id : 4058592360 Question Type : MCQ Option Shuffling : Yes Is Question Mandatory : No Calculator : None Response Time : N.A Think Time : N.A Minimum Instruction Time : 0**

**Correct Marks : 1 Wrong Marks : 0.25**

The 'M' in MICE stands for -

**Options :**

4058597879. Mobility

4058597880. Manufacturers

4058597881. Mercedes

4058597882. Meetings

**Question Number : 89 Question Id : 4058592361 Question Type : MCQ Option Shuffling : Yes Is Question Mandatory : No Calculator : None Response Time : N.A Think Time : N.A Minimum Instruction Time : 0**

**Correct Marks : 1 Wrong Marks : 0.25**

The total number of differences in the given sentence, from the passage are -

For a moment, the society of Indian Automobiles manufacturers or Siam, the Auto Expo was sticking to their plan.

**Options :**

4058597883. 3

4058597884. 4

4058597885. 5

4058597886. 6

**Question Number : 90 Question Id : 4058592362 Question Type : MCQ Option Shuffling : Yes Is Question Mandatory : No Calculator : None Response Time : N.A Think Time : N.A Minimum Instruction Time : 0**

**Correct Marks : 1 Wrong Marks : 0.25**

Choose the word that means the same as -

'Saying what you think openly and honestly'

**Options :**

4058597887. talking

4058597888. pitching

4058597889. conference

4058597890. candid

**Question Id : 4058592357 Question Type : COMPREHENSION Sub Question Shuffling Allowed :**

**Yes Group Comprehension Questions : No Question Pattern Type : NonMatrix Calculator :**

**None Response Time : N.A Think Time : N.A Minimum Instruction Time : 0**

**Question Numbers : (86 to 90)**

Question Label : Comprehension

Read the given passage and answer the questions that follow:

Auto Expo, which has for years been India's premier motor show, is set to lose some sheen with government lining up Bharat Mobility Expo, a three day event starting February 1. The event will bring 11 agencies representing the multiple segments, from car makers to components, tyres, electric vehicles, construction to battery and electronics outfits under one platform.

While this year's show has been put together quickly, a talking point in industry circles is commerce and industry minister Piyush Goyal's suggestion to expand the Mobility Show beyond Bharat Mandapam (the original venue of the Auto - Expo when it was called Pragati Maidan) to also include the recently completed Yashobhoomi in Dwarka, and subsequently the Noida Expo Centre (the current home of the Auto Expo).

While Goyal did not give any dates for next year, Auto Expo has been held every alternate year in January-February.

At a meeting on Friday, the minister was candid about a pushback from industry players when he first suggested the mega mobility show. The minister's suggestion that this won't be a one-off event got industry players talking about the possibility of dealing with it next year too.,

For the moment, the Society of Indian Automobile Manufacturers or Siam, the Auto Expo is sticking to its plan. "Let this event (Bharat Mobility) get over," said a functionary.

While the industry lobby group has been pitching it as ~ a main auto show, several top players have been giving it a miss. For instance, in 2023, many major players, ~ including Mahindra & Mahindra, Honda, Mercedes, BMW, VW, Skoda, Hero Honda and Bajaj Auto decided to skip the event.

In contrast, Goyal has nudged the entire mobility sector to join Bharat Mobility Expo as part of its drive to position India as an attractive MICE (meetings, incentives, conferences and exhibitions) destination with several shows, including those for textiles, gems and jewellery and food lined up until March.

So far, 600 exhibitors, including over 50 from overseas, are expected to participate in this edition's Bharat Mobility, the organizers said.

**Sub questions**

**Question Number : 86 Question Id : 4058592358 Question Type : MCQ Option Shuffling : Yes Is Question Mandatory : No Calculator : None Response Time : N.A Think Time : N.A Minimum Instruction Time : 0**

**Correct Marks : 1 Wrong Marks : 0.25**

The event starting from February 1 is called

**Options :**

4058597871. Auto Expo

4058597872. Bharat Mobility Expo

4058597873. Mobility Show

4058597874. Noida Expo

**Question Number : 87 Question Id : 4058592359 Question Type : MCQ Option Shuffling : Yes Is Question Mandatory : No Calculator : None Response Time : N.A Think Time : N.A Minimum Instruction Time : 0**

**Correct Marks : 1 Wrong Marks : 0.25**

The new name for Pragati Maidan is -

**Options :**

4058597875. Bharat Mandapam

4058597876. Yashobhoomi

4058597877. Expo Centre

4058597878. Noida Expo centre



**Question Number : 88 Question Id : 4058592360 Question Type : MCQ Option Shuffling : Yes Is Question Mandatory : No Calculator : None Response Time : N.A Think Time : N.A Minimum Instruction Time : 0**

**Correct Marks : 1 Wrong Marks : 0.25**

The 'M' in MICE stands for -

**Options :**

4058597879. Mobility

4058597880. Manufacturers

4058597881. Mercedes

4058597882. Meetings

**Question Number : 89 Question Id : 4058592361 Question Type : MCQ Option Shuffling : Yes Is Question Mandatory : No Calculator : None Response Time : N.A Think Time : N.A Minimum Instruction Time : 0**

**Correct Marks : 1 Wrong Marks : 0.25**

The total number of differences in the given sentence, from the passage are -

For a moment, the society of Indian Automobiles manufacturers or Siam, the Auto Expo was sticking to their plan.

**Options :**

4058597883. 3

4058597884. 4

4058597885. 5

4058597886. 6

Question Number : 90 Question Id : 4058592362 Question Type : MCQ Option Shuffling : Yes Is

Question Mandatory : No Calculator : None Response Time : N.A Think Time : N.A Minimum

Instruction Time : 0

Correct Marks : 1 Wrong Marks : 0.25

Choose the word that means the same as -

'Saying what you think openly and honestly'

Options :

4058597887. talking

4058597888. pitching

4058597889. conference

4058597890. candid

## Quantitative Ability

Section Id :	405859128
Section Number :	3
Section type :	Online
Mandatory or Optional :	Mandatory
Number of Questions :	10
Number of Questions to be attempted :	10
Section Marks :	10
Enable Mark as Answered Mark for Review and Clear Response :	Yes
Maximum Instruction Time :	0
Sub-Section Number :	1
Sub-Section Id :	405859169

Question Shuffling Allowed :

Yes

Is Section Default? :

null

**Question Number : 91 Question Id : 4058592363 Question Type : MCQ Option Shuffling : Yes Is Question Mandatory : No Calculator : None Response Time : N.A Think Time : N.A Minimum Instruction Time : 0**

**Correct Marks : 1 Wrong Marks : 0.25**

A and B entered into a business partnership with Rs. 50,000 and Rs. 60,000, respectively. C joined them after X months by contributing Rs. 70,000 and B left X months before the end of the year. If they shared the profit in the ratio 20:18:21, then the value of X is

**Options :**

4058597891. 3

4058597892. 6

4058597893. 8

4058597894. 9

**Question Number : 91 Question Id : 4058592363 Question Type : MCQ Option Shuffling : Yes Is Question Mandatory : No Calculator : None Response Time : N.A Think Time : N.A Minimum Instruction Time : 0**

**Correct Marks : 1 Wrong Marks : 0.25**

A तथा B क्रमशः रु. 50,000 तथा रु. 60,000 का निवेश कर साझे में व्यवसाय शुरू करते हैं। C, X माह बाद रु. 70,000 के योगदान से उनके साथ शामिल हो जाता है तथा B वर्ष के अंत से X माह पूर्व छोड़ कर चला जाता है। यदि उनके मुनाफे का अनुपात 20:18:21 हो, तो X का मान है:

**Options :**

4058597891. 3

4058597892. 6

4058597893. 8

4058597894. 9

**Question Number : 92 Question Id : 4058592364 Question Type : MCQ Option Shuffling : Yes Is Question Mandatory : No Calculator : None Response Time : N.A Think Time : N.A Minimum Instruction Time : 0**

**Correct Marks : 1 Wrong Marks : 0.25**

After allowing a discount of 10% on the marked price, a trader still makes a profit of 17%. By what percentage is the marked price above the cost price?

**Options :**

4058597895. 20%

4058597896. 30%

4058597897. 28%

4058597898. 27%

**Question Number : 92 Question Id : 4058592364 Question Type : MCQ Option Shuffling : Yes Is Question Mandatory : No Calculator : None Response Time : N.A Think Time : N.A Minimum Instruction Time : 0**

**Correct Marks : 1 Wrong Marks : 0.25**

कोई व्यापारी अंकित मूल्य पर 10% का बट्टा प्रदान करने के बाद भी 17% का मुनाफा कमाता है। अंकित मूल्य लागत मूल्य से कितने प्रतिशत अधिक है?

**Options :**

4058597895. 20%

4058597896. 30%

4058597897. 28%

4058597898. 27%

**Question Number : 93 Question Id : 4058592365 Question Type : MCQ Option Shuffling : Yes Is Question Mandatory : No Calculator : None Response Time : N.A Think Time : N.A Minimum Instruction Time : 0**

**Correct Marks : 1 Wrong Marks : 0.25**

Sugar syrup A contains 40% sugar and Sugar syrup B contain 80% sugar. In what ratio Syrup A and Syrup B be mixed to obtain a syrup with 65% sugar?

**Options :**

4058597899. 2:3

4058597900. 3:4

4058597901. 3:5

4058597902. 4:5

**Question Number : 93 Question Id : 4058592365 Question Type : MCQ Option Shuffling : Yes Is Question Mandatory : No Calculator : None Response Time : N.A Think Time : N.A Minimum Instruction Time : 0**

**Correct Marks : 1 Wrong Marks : 0.25**

चीनी की चाशनी A में 40% चीनी और चीनी की चाशनी B में 80% चीनी है। 65% चीनी वाली चाशनी की प्राप्ति हेतु चाशनी A और चाशनी B को किस अनुपात में मिलाया जाना चाहिए?

**Options :**

4058597899. 2:3

4058597900. 3:4

4058597901. 3:5

4058597902. 4:5

**Question Number : 94 Question Id : 4058592366 Question Type : MCQ Option Shuffling : Yes Is Question Mandatory : No Calculator : None Response Time : N.A Think Time : N.A Minimum Instruction Time : 0**

**Correct Marks : 1 Wrong Marks : 0.25**

A man and a woman can do a piece of work in 7 days and 8 days, respectively. If both finish the work with the help of a boy in 3 days and get payment of Rs. 1,400, then the share of the boy, is:

**Options :**

4058597903. Rs. 275

4058597904. Rs. 525

4058597905. Rs. 600

4058597906. Rs. 250

**Question Number : 94 Question Id : 4058592366 Question Type : MCQ Option Shuffling : Yes Is Question Mandatory : No Calculator : None Response Time : N.A Think Time : N.A Minimum Instruction Time : 0**

**Correct Marks : 1 Wrong Marks : 0.25**

एक काम को एक पुरुष एवं एक महिला क्रमशः 7 दिनों और 8 दिनों में कर सकते हैं। यदि दोनों 3 दिनों में ही एक लड़के की सहायता से काम पूरा कर लेते हैं और रु. 1400 का भुगतान प्राप्त करते हैं, तो लड़के का हिस्सा है:

**Options :**

4058597903. रु. 275

4058597904. रु. 525

4058597905. ₹. 600

4058597906. ₹. 250

**Question Number : 95 Question Id : 4058592367 Question Type : MCQ Option Shuffling : Yes Is**

**Question Mandatory : No Calculator : None Response Time : N.A Think Time : N.A Minimum**

**Instruction Time : 0**

**Correct Marks : 1 Wrong Marks : 0.25**

If the cost price of 15 pieces of an item is equal to the selling price of 12 pieces of the item. What is the profit percentage?

**Options :**

4058597907. 20%

4058597908. 24%

4058597909. 25%

4058597910. 30%

**Question Number : 95 Question Id : 4058592367 Question Type : MCQ Option Shuffling : Yes Is**

**Question Mandatory : No Calculator : None Response Time : N.A Think Time : N.A Minimum**

**Instruction Time : 0**

**Correct Marks : 1 Wrong Marks : 0.25**

यदि किसी वस्तु के 15 नगों का क्रय मूल्य उस वस्तु के 12 नगों के विक्रय मूल्य के समान है, तो लाभ प्रतिशतता कितनी है?

**Options :**

4058597907. 20%

4058597908. 24%

4058597909. 25%

4058597910. 30%

**Question Number : 96 Question Id : 4058592368 Question Type : MCQ Option Shuffling : Yes Is Question Mandatory : No Calculator : None Response Time : N.A Think Time : N.A Minimum Instruction Time : 0**

**Correct Marks : 1 Wrong Marks : 0.25**

What should be the least number of years in which the simple interest on Rs. 2,500 at  $3\frac{1}{6}\%$  will be the exact number of rupees?

**Options :**

4058597911. 2 year

4058597912. 3 year

4058597913. 6 year

4058597914. 9 year

**Question Number : 96 Question Id : 4058592368 Question Type : MCQ Option Shuffling : Yes Is Question Mandatory : No Calculator : None Response Time : N.A Think Time : N.A Minimum Instruction Time : 0**

**Correct Marks : 1 Wrong Marks : 0.25**

वर्षों की वह न्यूनतम संख्या क्या होनी चाहिए जिसमें  $3\frac{1}{6}\%$  की दर से रु. 2500 पर साधारण ब्याज रुपयों की संख्या एक बिलकुल ठीक संख्या में होगा?

**Options :**

4058597911. 2 वर्ष



4058597912. 3 वर्ष

4058597913. 6 वर्ष

4058597914. 9 वर्ष

**Question Number : 97 Question Id : 4058592369 Question Type : MCQ Option Shuffling : Yes Is Question Mandatory : No Calculator : None Response Time : N.A Think Time : N.A Minimum Instruction Time : 0**

**Correct Marks : 1 Wrong Marks : 0.25**

If  $y^2 = xz$  and  $x^a = y^b = z^c$ , then  $b$  is equal to:

**Options :**

4058597915.  $\frac{2ac}{a+c}$

4058597916.  $\frac{ac}{a+c}$

4058597917.  $\frac{ac}{2(a-c)}$

4058597918.  $\frac{ac}{2(c-a)}$

**Question Number : 97 Question Id : 4058592369 Question Type : MCQ Option Shuffling : Yes Is Question Mandatory : No Calculator : None Response Time : N.A Think Time : N.A Minimum Instruction Time : 0**

**Correct Marks : 1 Wrong Marks : 0.25**

यदि  $y^2 = xz$  और  $x^a = y^b = z^c$ , तो  $b$  किसके बराबर है?

**Options :**

$$4058597915. \frac{2ac}{a+c}$$

$$4058597916. \frac{ac}{a+c}$$

$$4058597917. \frac{ac}{2(a-c)}$$

$$4058597918. \frac{ac}{2(c-a)}$$

**Question Number : 98 Question Id : 4058592370 Question Type : MCQ Option Shuffling : Yes Is Question Mandatory : No Calculator : None Response Time : N.A Think Time : N.A Minimum Instruction Time : 0**

**Correct Marks : 1 Wrong Marks : 0.25**

The sum of two numbers is 65. Their difference is  $\frac{1}{5}$  of their sum. Their LCM is:

**Options :**

4058597919. 78

4058597920. 86

4058597921. 156

4058597922. 172

**Question Number : 98 Question Id : 4058592370 Question Type : MCQ Option Shuffling : Yes Is Question Mandatory : No Calculator : None Response Time : N.A Think Time : N.A Minimum Instruction Time : 0**

**Correct Marks : 1 Wrong Marks : 0.25**

दो संख्याओं का योग 65 है। उनका अन्तर, उनके योग का  $\frac{1}{5}$  है। उनका लघुत्तम समापवर्त्य है:

**Options :**

4058597919. 78

4058597920. 86

4058597921. 156

4058597922. 172

**Question Number : 99 Question Id : 4058592371 Question Type : MCQ Option Shuffling : Yes Is Question Mandatory : No Calculator : None Response Time : N.A Think Time : N.A Minimum Instruction Time : 0**

**Correct Marks : 1 Wrong Marks : 0.25**

The rational number representing number  $0.\overline{24}$  , is:

**Options :**

4058597923.  $\frac{7}{99}$

4058597924.  $\frac{7}{33}$

4058597925.  $\frac{8}{99}$

4058597926.  $\frac{8}{33}$

**Question Number : 99 Question Id : 4058592371 Question Type : MCQ Option Shuffling : Yes Is Question Mandatory : No Calculator : None Response Time : N.A Think Time : N.A Minimum**

**Instruction Time : 0**

**Correct Marks : 1 Wrong Marks : 0.25**

0.24 संख्या को निरूपित करने वाली परिमेय संख्या है:

**Options :**

4058597923.  $\frac{7}{99}$

4058597924.  $\frac{7}{33}$

4058597925.  $\frac{8}{99}$

4058597926.  $\frac{8}{33}$

**Question Number : 100 Question Id : 4058592372 Question Type : MCQ Option Shuffling : Yes**

**Is Question Mandatory : No Calculator : None Response Time : N.A Think Time : N.A**

**Minimum Instruction Time : 0**

**Correct Marks : 1 Wrong Marks : 0.25**

If  $a^b = b^a$ , then  $\left(\frac{b}{a}\right)^{b/a}$  is equal to:

**Options :**

4058597927.  $b^{\left(\frac{a}{b}-1\right)}$

4058597928.  $b^{\left(\frac{b}{a}-1\right)}$

4058597929.  $2a^{\left(\frac{a}{b}-1\right)}$

4058597930.  $a^{\left(\frac{b}{a}-1\right)}$

Question Number : 100 Question Id : 4058592372 Question Type : MCQ Option Shuffling : Yes

Is Question Mandatory : No Calculator : None Response Time : N.A Think Time : N.A

Minimum Instruction Time : 0

Correct Marks : 1 Wrong Marks : 0.25

यदि  $a^b = b^a$ , तो  $\left(\frac{b}{a}\right)^{b/a}$ , किसके बराबर है?

Options :

4058597927.  $b^{\left(\frac{a}{b}-1\right)}$

4058597928.  $b^{\left(\frac{b}{a}-1\right)}$

4058597929.  $2a^{\left(\frac{a}{b}-1\right)}$

4058597930.  $a^{\left(\frac{b}{a}-1\right)}$

## Analytical & Logical Ability

Section Id :

405859129

Section Number :

4

Section type :

Online

Mandatory or Optional :

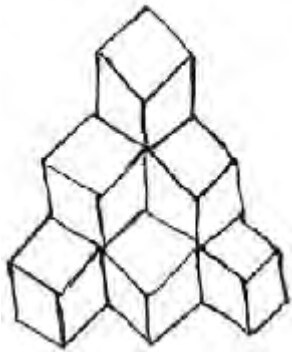
Mandatory

<b>Number of Questions :</b>	25
<b>Number of Questions to be attempted :</b>	25
<b>Section Marks :</b>	25
<b>Enable Mark as Answered Mark for Review and Clear Response :</b>	Yes
<b>Maximum Instruction Time :</b>	0
<b>Sub-Section Number :</b>	1
<b>Sub-Section Id :</b>	405859170
<b>Question Shuffling Allowed :</b>	Yes
<b>Is Section Default? :</b>	null

**Question Number : 101 Question Id : 4058592373 Question Type : MCQ Option Shuffling : Yes**  
**Is Question Mandatory : No Calculator : None Response Time : N.A Think Time : N.A**  
**Minimum Instruction Time : 0**

**Correct Marks : 1 Wrong Marks : 0.25**

Count the number of cubes in the given figure:



**Options :**

4058597931. 6

4058597932. 8

4058597933. 10

4058597934. 12

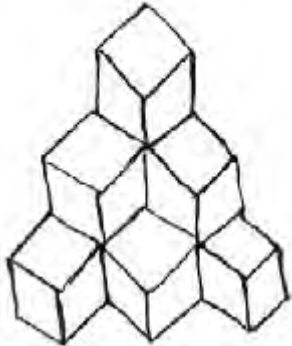
Question Number : 101 Question Id : 4058592373 Question Type : MCQ Option Shuffling : Yes

Is Question Mandatory : No Calculator : None Response Time : N.A Think Time : N.A

Minimum Instruction Time : 0

Correct Marks : 1 Wrong Marks : 0.25

दिए गए आरेख में घन की संख्या की गणना कीजिए



Options :

4058597931. 6

4058597932. 8

4058597933. 10

4058597934. 12

Question Number : 102 Question Id : 4058592374 Question Type : MCQ Option Shuffling : Yes

Is Question Mandatory : No Calculator : None Response Time : N.A Think Time : N.A

Minimum Instruction Time : 0

Correct Marks : 1 Wrong Marks : 0.25

A cube is coloured black on all six faces. It is then cut into 64 smaller cubes of equal size. How many cubes are there which have only one face coloured?

Options :

4058597935. 12

4058597936. 24

4058597937. 18

4058597938. 8

**Question Number : 102 Question Id : 4058592374 Question Type : MCQ Option Shuffling : Yes**

**Is Question Mandatory : No Calculator : None Response Time : N.A Think Time : N.A**

**Minimum Instruction Time : 0**

**Correct Marks : 1 Wrong Marks : 0.25**

एक घन के सभी छह फलक काले रंग के हैं। फिर इसे समान आकार के 64 छोटे घनों में काटा जाता है। कितने घन हैं जिनका केवल एक फलक रंगीन है?

**Options :**

4058597935. 12

4058597936. 24

4058597937. 18

4058597938. 8

**Question Number : 103 Question Id : 4058592375 Question Type : MCQ Option Shuffling : Yes**

**Is Question Mandatory : No Calculator : None Response Time : N.A Think Time : N.A**

**Minimum Instruction Time : 0**

**Correct Marks : 1 Wrong Marks : 0.25**

A, B, C, D, E, F and G are sitting in a circle facing at the centre and playing cards. E is neighbour of A and D and G is not between F and C. F is to the immediate right of A, which of the following does not have the pair of persons sitting adjacent to each other:

**Options :**

4058597939. BA

4058597940. CB



4058597941. DE

4058597942. GD

**Question Number : 103 Question Id : 4058592375 Question Type : MCQ Option Shuffling : Yes**

**Is Question Mandatory : No Calculator : None Response Time : N.A Think Time : N.A**

**Minimum Instruction Time : 0**

**Correct Marks : 1 Wrong Marks : 0.25**

A, B, C, D, E, F एवं G केंद्र की ओर मुँह करके गोलाकार बैठे हैं तथा कार्ड खेल रहे हैं। E, A और D का पड़ोसी है और G, F और C के बीच नहीं है। साथ ही, F, A के तुरंत दाँयीं ओर है। निम्नलिखित में से कौन-सा एक-दूसरे से संलग्न बैठा युग्म नहीं है?

**Options :**

4058597939. BA

4058597940. CB

4058597941. DE

4058597942. GD

**Question Number : 104 Question Id : 4058592376 Question Type : MCQ Option Shuffling : Yes**

**Is Question Mandatory : No Calculator : None Response Time : N.A Think Time : N.A**

**Minimum Instruction Time : 0**

**Correct Marks : 1 Wrong Marks : 0.25**

Anil, Bob, Chetan, Deepak, Elan and Farid are sitting on the ground in a hexagonal shape. All the sides of the hexagon formed are of same length. Anil is not adjacent to Bob or Chetan; Deepak is not adjacent to Chetan or Elan; Bob and Chetan are adjacent; Farid is in the middle of Deepak and Chetan.

Which of the following is a correct neighbour pair?

**Options :**

4058597943. Anil and Farid

4058597944. Bob and Deepak

4058597945. Elan and Chetan

4058597946. Deepak and Anil

**Question Number : 104 Question Id : 4058592376 Question Type : MCQ Option Shuffling : Yes**

**Is Question Mandatory : No Calculator : None Response Time : N.A Think Time : N.A**

**Minimum Instruction Time : 0**

**Correct Marks : 1 Wrong Marks : 0.25**

अनिल, बॉब, चेतन, दीपक, ईलान और फरीद जमीन पर षड्भुजाकार आकृति में बैठे हुए हैं, वे सभी भुजाएँ जिनसे षड्भुज बना हुआ है, उनकी लम्बाई समान है। अनिल, बॉब या चेतन के सन्निकट नहीं है; दीपक, चेतन या ईलान के सन्निकट नहीं है; बॉब और चेतन सन्निकट हैं; फरीद, दीपक और चेतन के मध्य है। निम्नलिखित में से कौन एक सही प्रतिवेशी युग्म है?

**Options :**

4058597943. अनिल और फरीद

4058597944. बॉब और दीपक

4058597945. ईलान और चेतन

4058597946. दीपक और अनिल

**Question Number : 105 Question Id : 4058592377 Question Type : MCQ Option Shuffling : Yes**

**Is Question Mandatory : No Calculator : None Response Time : N.A Think Time : N.A**

**Minimum Instruction Time : 0**

**Correct Marks : 1 Wrong Marks : 0.25**

If

'P+Q' means 'P' is the father of 'Q'.

'P×Q' means 'P' is the brother of 'Q'.

'P-Q' means 'P' is the mother of 'Q'.

then which of the following is definitely true about C-A + B?

**Options :**

4058597947. B is the son of A

4058597948. B is the father of A

4058597949. A is the son of C

4058597950. C is the mother of B

**Question Number : 105 Question Id : 4058592377 Question Type : MCQ Option Shuffling : Yes**

**Is Question Mandatory : No Calculator : None Response Time : N.A Think Time : N.A**

**Minimum Instruction Time : 0**

**Correct Marks : 1 Wrong Marks : 0.25**

यदि

'P+Q' का अर्थ 'P', 'Q' का पिता है।

'P×Q' का अर्थ 'P', 'Q' का भाई है।

'P-Q' का अर्थ 'P', 'Q' की माँ है।

तो निम्नलिखित में से कौन सा C - A + B के बारे में निश्चित रूप से सत्य है?

**Options :**

4058597947. B, A का बेटा है।

4058597948. B, A का पिता है।

4058597949. A, C का बेटा है।

4058597950. C, B की माँ है।

**Question Number : 106 Question Id : 4058592378 Question Type : MCQ Option Shuffling : Yes**

**Is Question Mandatory : No Calculator : None Response Time : N.A Think Time : N.A**

**Minimum Instruction Time : 0**

**Correct Marks : 1 Wrong Marks : 0.25**

A girl introduced a boy as the son of the only daughter of the father of her maternal uncle. The boy is girl's \_\_\_\_\_.

**Options :**

4058597951. Brother

4058597952. Son

4058597953. Uncle

4058597954. Son-in-law

**Question Number : 106 Question Id : 4058592378 Question Type : MCQ Option Shuffling : Yes**

**Is Question Mandatory : No Calculator : None Response Time : N.A Think Time : N.A**

**Minimum Instruction Time : 0**

**Correct Marks : 1 Wrong Marks : 0.25**

एक लड़की ने एक लड़के का परिचय अपने मामा के पिता की एकमात्र पुत्री के पुत्र के रूप में कराया। लड़का लड़की का \_\_\_\_\_ है।

**Options :**

4058597951. भाई

4058597952. बेटा

4058597953. मौसा

4058597954. दामाद

**Question Number : 107 Question Id : 4058592379 Question Type : MCQ Option Shuffling : Yes**

**Is Question Mandatory : No Calculator : None Response Time : N.A Think Time : N.A**

**Minimum Instruction Time : 0**

**Correct Marks : 1 Wrong Marks : 0.25**

If L stands for +, M stands for -, N stands for  $\times$ , P stands for  $\div$ , then

$$14N10L42P2M8 = \underline{\quad?}$$

**Options :**

4058597955. 152

4058597956. 153

4058597957. 251

4058597958. 252

**Question Number : 107 Question Id : 4058592379 Question Type : MCQ Option Shuffling : Yes**

**Is Question Mandatory : No Calculator : None Response Time : N.A Think Time : N.A**

**Minimum Instruction Time : 0**

**Correct Marks : 1 Wrong Marks : 0.25**

यदि L का अर्थ +, M का अर्थ -, N का अर्थ  $\times$  तथा P का अर्थ  $\div$  है, तो  $14N10L42P2M8 =$

$$\underline{\quad?}$$

**Options :**

4058597955. 152

4058597956. 153

4058597957. 251

4058597958. 252

**Question Number : 108 Question Id : 4058592380 Question Type : MCQ Option Shuffling : Yes**

**Is Question Mandatory : No Calculator : None Response Time : N.A Think Time : N.A**

**Minimum Instruction Time : 0**

**Correct Marks : 1 Wrong Marks : 0.25**

If the signs + and ÷ are interchanged and numbers 2 and 4 are interchanged then which one of the following four equations would be correct?

**Options :**

4058597959.  $2+4\div 3 = 3$

4058597960.  $4+2\div 6 = 1.5$

4058597961.  $4\div 2+3 = 4$

4058597962.  $2+4\div 6 = 8$

**Question Number : 108 Question Id : 4058592380 Question Type : MCQ Option Shuffling : Yes**

**Is Question Mandatory : No Calculator : None Response Time : N.A Think Time : N.A**

**Minimum Instruction Time : 0**

**Correct Marks : 1 Wrong Marks : 0.25**

यदि + तथा ÷ चिह्नों की अदला-बदली की गयी हो और 2 तथा 4 संख्याओं की भी अदला-बदली की गयी हो, तो निम्नलिखित चार समीकरणों में से कौन सही होगा?

**Options :**

4058597959.  $2+4\div 3 = 3$

4058597960.  $4+2\div 6 = 1.5$

4058597961.  $4 \div 2 + 3 = 4$

4058597962.  $2 + 4 \div 6 = 8$

**Question Number : 109 Question Id : 4058592381 Question Type : MCQ Option Shuffling : Yes**

**Is Question Mandatory : No Calculator : None Response Time : N.A Think Time : N.A**

**Minimum Instruction Time : 0**

**Correct Marks : 1 Wrong Marks : 0.25**

The positions of the first and the second digits in the numbers 8 9 4 3 1 5 6 7 2 4 are interchanged. Similarly the positions of the third and fourth digits are interchanged and so on. Which of the following will be the third to the left of the seventh digit from the left after the rearrangement?

**Options :**

4058597963. 2

4058597964. 4

4058597965. 7

4058597966. 9

**Question Number : 109 Question Id : 4058592381 Question Type : MCQ Option Shuffling : Yes**

**Is Question Mandatory : No Calculator : None Response Time : N.A Think Time : N.A**

**Minimum Instruction Time : 0**

**Correct Marks : 1 Wrong Marks : 0.25**

नीचे दी गई संख्या में पहले तथा दूसरे अंक के स्थान को आपस में बदल दिया गया है। इसी प्रकार तीसरे तथा चौथे अंक का स्थान भी आपस में बदल दिया गया है। अन्य अंको को भी इसी प्रकार बदला गया है। इस अदला बदली के बाद बायीं ओर से आरंभ करने पर सातवें अंक के बायीं ओर से तीसरा अंक क्या होगा?

8 9 4 3 1 5 6 7 2 4

**Options :**

4058597963. 2

4058597964. 4

4058597965. 7

4058597966. 9

**Question Number : 110 Question Id : 4058592382 Question Type : MCQ Option Shuffling : Yes**

**Is Question Mandatory : No Calculator : None Response Time : N.A Think Time : N.A**

**Minimum Instruction Time : 0**

**Correct Marks : 1 Wrong Marks : 0.25**

How many even numbers are there in the following sequence of numbers each of which is immediately followed by an odd number as well as immediately preceded by an even number?

8 6 7 6 8 9 3 2 7 5 3 4 2 2 3 5 5 2 2 8 1 1 9

**Options :**

4058597967. One

4058597968. Three

4058597969. Five

4058597970. Four

**Question Number : 110 Question Id : 4058592382 Question Type : MCQ Option Shuffling : Yes**

**Is Question Mandatory : No Calculator : None Response Time : N.A Think Time : N.A**

**Minimum Instruction Time : 0**

**Correct Marks : 1 Wrong Marks : 0.25**



निम्नलिखित संख्याओं के अनुक्रम में कितनी ऐसी सम संख्याएँ हैं जिनमें से प्रत्येक की निकटतम उत्तरवर्ती एक विषम संख्या है और निकटतम पूर्ववर्ती एक सम संख्या है?

8 6 7 6 8 9 3 2 7 5 3 4 2 2 3 5 5 2 2 8 1 1 9

**Options :**

4058597967. एक

4058597968. तीन

4058597969. पाँच

4058597970. चार

**Question Number : 111 Question Id : 4058592383 Question Type : MCQ Option Shuffling : Yes**

**Is Question Mandatory : No Calculator : None Response Time : N.A Think Time : N.A**

**Minimum Instruction Time : 0**

**Correct Marks : 1 Wrong Marks : 0.25**

A cube is painted yellow on all faces is cut in 27 small cubes of equal size. How many cubes are painted on one face only?

**Options :**

4058597971. 1

4058597972. 6

4058597973. 8

4058597974. 12

**Question Number : 111 Question Id : 4058592383 Question Type : MCQ Option Shuffling : Yes**

**Is Question Mandatory : No Calculator : None Response Time : N.A Think Time : N.A**

**Minimum Instruction Time : 0**

**Correct Marks : 1 Wrong Marks : 0.25**

एक घन जिसके सभी फलकों को पीला रंगा गया है, उसे सामान आकार के 27 छोटे घनों में काटा जाता है। कितने घनों के केवल एक फलक पर ही रंग है?

**Options :**

4058597971. 1

4058597972. 6

4058597973. 8

4058597974. 12

**Question Number : 112 Question Id : 4058592384 Question Type : MCQ Option Shuffling : Yes**

**Is Question Mandatory : No Calculator : None Response Time : N.A Think Time : N.A**

**Minimum Instruction Time : 0**

**Correct Marks : 1 Wrong Marks : 0.25**

Two buses start from the opposite points of a main road, 150 km apart. The first bus runs for 25 km and takes a right turn and then runs for 15 km. If then turns left and runs for another 25 km and takes the direction back to reach the main road. In the meantime, due to a minor breakdown, the other bus has run only 35 km along the main road. What would be the distance between the two buses at this point?

**Options :**

4058597975. 55 km

4058597976. 65 km

4058597977. 75 km

4058597978. 80 km

**Question Number : 112 Question Id : 4058592384 Question Type : MCQ Option Shuffling : Yes**

**Is Question Mandatory : No Calculator : None Response Time : N.A Think Time : N.A**

**Minimum Instruction Time : 0**

**Correct Marks : 1 Wrong Marks : 0.25**

दो बसें मेन रोड के विपरीत बिंदुओं जो परस्पर 150 कि.मी. दूर हैं, से चलना शुरू करती हैं। पहली बस 25 कि.मी. चलती है और दायीं ओर मुड़ती है और फिर 15 कि.मी. चलती है। फिर यह बाईं ओर मुड़ती है तथा 25 कि.मी. और चलती है और मेन रोड पहुँचने के लिए वापस मुड़ती है। इस बीच छोटी सी खराबी के कारण दूसरी बस मेन रोड पर केवल 35 कि.मी. चली है। इस स्थिति में इन दोनों बसों के बीच की दूरी क्या होगी?

**Options :**

4058597975. 55 कि.मी.

4058597976. 65 कि.मी.

4058597977. 75 कि.मी.

4058597978. 80 कि.मी.

**Question Number : 113 Question Id : 4058592385 Question Type : MCQ Option Shuffling : Yes**

**Is Question Mandatory : No Calculator : None Response Time : N.A Think Time : N.A**

**Minimum Instruction Time : 0**

**Correct Marks : 1 Wrong Marks : 0.25**

Find the wrong term in the following sequence of numbers:

125, 126, 124, 127, 123, 129

**Options :**

4058597979. 126

4058597980. 124

4058597981. 123

4058597982. 129

**Question Number : 113 Question Id : 4058592385 Question Type : MCQ Option Shuffling : Yes**

**Is Question Mandatory : No Calculator : None Response Time : N.A Think Time : N.A**

**Minimum Instruction Time : 0**

**Correct Marks : 1 Wrong Marks : 0.25**

निम्नलिखित संख्याओं में गलत पद ज्ञात कीजिए:

125, 126, 124, 127, 123, 129

**Options :**

4058597979. 126

4058597980. 124

4058597981. 123

4058597982. 129

**Question Number : 114 Question Id : 4058592386 Question Type : MCQ Option Shuffling : Yes**

**Is Question Mandatory : No Calculator : None Response Time : N.A Think Time : N.A**

**Minimum Instruction Time : 0**

**Correct Marks : 1 Wrong Marks : 0.25**

Find the missing term in the following number series:

125, 80, 45, 20, \_\_\_?\_\_\_

**Options :**

4058597983. 5

4058597984. 10

4058597985. 15

4058597986. 16

**Question Number : 114 Question Id : 4058592386 Question Type : MCQ Option Shuffling : Yes**

**Is Question Mandatory : No Calculator : None Response Time : N.A Think Time : N.A**

**Minimum Instruction Time : 0**

**Correct Marks : 1 Wrong Marks : 0.25**

निम्नलिखित संख्या श्रृंखला में लुप्त पद ज्ञात कीजिए:

125, 80, 45, 20, \_\_\_?

**Options :**

4058597983. 5

4058597984. 10

4058597985. 15

4058597986. 16

**Question Number : 115 Question Id : 4058592387 Question Type : MCQ Option Shuffling : Yes**

**Is Question Mandatory : No Calculator : None Response Time : N.A Think Time : N.A**

**Minimum Instruction Time : 0**

**Correct Marks : 1 Wrong Marks : 0.25**

Find the missing term in the following alphabet series:

ACD, CEE, EGD, GIE, \_\_\_?

**Options :**

4058597987. IKF

4058597988. IFK

4058597989. IKD

4058597990. KID

**Question Number : 115 Question Id : 4058592387 Question Type : MCQ Option Shuffling : Yes**

**Is Question Mandatory : No Calculator : None Response Time : N.A Think Time : N.A**

**Minimum Instruction Time : 0**

**Correct Marks : 1 Wrong Marks : 0.25**

निम्नलिखित वर्णमाला श्रृंखला में लुप्त पद ज्ञात कीजिए:

ACD, CEE, EGD, GIE, \_\_\_?\_\_\_

**Options :**

4058597987. IKF

4058597988. IFK

4058597989. IKD

4058597990. KID

**Question Number : 116 Question Id : 4058592388 Question Type : MCQ Option Shuffling : Yes**

**Is Question Mandatory : No Calculator : None Response Time : N.A Think Time : N.A**

**Minimum Instruction Time : 0**

**Correct Marks : 1 Wrong Marks : 0.25**

Find the missing term in the following alpha-numeric series:

3F, 6G, 11I, 18L, \_\_\_?\_\_\_

**Options :**

4058597991. 25Q

4058597992. 25P

4058597993. 27Q

4058597994. 27P

**Question Number : 116 Question Id : 4058592388 Question Type : MCQ Option Shuffling : Yes**

**Is Question Mandatory : No Calculator : None Response Time : N.A Think Time : N.A**

**Minimum Instruction Time : 0**

**Correct Marks : 1 Wrong Marks : 0.25**

निम्नलिखित अक्षरांक श्रृंखला में लुप्त पद ज्ञात कीजिए:

3F, 6G, 11I, 18L, \_\_?\_\_

**Options :**

4058597991. 25Q

4058597992. 25P

4058597993. 27Q

4058597994. 27P

**Question Number : 117 Question Id : 4058592389 Question Type : MCQ Option Shuffling : Yes**

**Is Question Mandatory : No Calculator : None Response Time : N.A Think Time : N.A**

**Minimum Instruction Time : 0**

**Correct Marks : 1 Wrong Marks : 0.25**

If in a certain language, POPULAR is coded as QPQVMBS, which word would be coded as GBNPVT?

**Options :**

4058597995. FARMER

4058597996. FAMOUS

4058597997. FARMES

4058597998. FAMOTH

**Question Number : 117 Question Id : 4058592389 Question Type : MCQ Option Shuffling : Yes**

**Is Question Mandatory : No Calculator : None Response Time : N.A Think Time : N.A**

**Minimum Instruction Time : 0**

**Correct Marks : 1 Wrong Marks : 0.25**

एक निश्चित भाषा में POPULAR को QPQVMBS के रूप में कूटबद्ध किया गया है।  
GBNPVT के रूप में किस शब्द को कूटबद्ध किया गया होगा?

**Options :**

4058597995. FARMER

4058597996. FAMOUS

4058597997. FARMES

4058597998. FAMOTH

**Question Number : 118 Question Id : 4058592390 Question Type : MCQ Option Shuffling : Yes**

**Is Question Mandatory : No Calculator : None Response Time : N.A Think Time : N.A**

**Minimum Instruction Time : 0**

**Correct Marks : 1 Wrong Marks : 0.25**

If in a code language, PARENT is written as BDFGJK and CHILDREN is written  
as MOXQUFGJ, how is REPRINT written in that code?

**Options :**

4058597999. FGBFXJK

4058598000. FGBUXJK



4058598001. FGBFXGD

4058598002. BGBFXJK

**Question Number : 118 Question Id : 4058592390 Question Type : MCQ Option Shuffling : Yes**

**Is Question Mandatory : No Calculator : None Response Time : N.A Think Time : N.A**

**Minimum Instruction Time : 0**

**Correct Marks : 1 Wrong Marks : 0.25**

यदि किसी कूट भाषा में PARENT को BDFGJK के रूप में लिखा गया है और CHILDREN को MOXQUFGJ के रूप में लिखा गया है, तो उस कूट भाषा में REPRINT को किस प्रकार लिखा जाएगा?

**Options :**

4058597999. FGBFXJK

4058598000. FGBUXJK

4058598001. FGBFXGD

4058598002. BGBFXJK

**Question Number : 119 Question Id : 4058592391 Question Type : MCQ Option Shuffling : Yes**

**Is Question Mandatory : No Calculator : None Response Time : N.A Think Time : N.A**

**Minimum Instruction Time : 0**

**Correct Marks : 1 Wrong Marks : 0.25**

Select one alternative in which the third statement is implied by the first two statements.

**Options :**

4058598003. All dogs are mad. All sick persons are mad. So, all sick persons are dogs.

4058598004. All oranges are black. All figs are oranges. So, all figs are black.

4058598005. All windows are dogs. Some doors are dogs. So, all windows are doors.

4058598006. No man can fly. No kite can fly. So, all men are kites.

**Question Number : 119 Question Id : 4058592391 Question Type : MCQ Option Shuffling : Yes**

**Is Question Mandatory : No Calculator : None Response Time : N.A Think Time : N.A**

**Minimum Instruction Time : 0**

**Correct Marks : 1 Wrong Marks : 0.25**

उस विकल्प का चयन कीजिए जिसमें तीसरा कथन प्रथम दो कथनों के द्वारा उपलक्षित है:

**Options :**

4058598003. सारे कुत्ते पागल हैं। सारे रोगी पागल है। अतः सारे रोगी कुत्ते हैं।

4058598004. सारे संतरे काले हैं। सारे अंजीर संतरे हैं। अतः सारे अंजीर काले हैं।

4058598005. सारी खिड़कियाँ कुत्ते हैं। कुछ दरवाजे कुत्ते हैं। अतः सारी खिड़कियाँ दरवाजे हैं।

4058598006. कोई मनुष्य उड़ नहीं सकता है। कोई पतंग उड़ नहीं सकती है। अतः सारे मनुष्य पतंग हैं।

**Question Number : 120 Question Id : 4058592392 Question Type : MCQ Option Shuffling : Yes**

**Is Question Mandatory : No Calculator : None Response Time : N.A Think Time : N.A**

**Minimum Instruction Time : 0**

**Correct Marks : 1 Wrong Marks : 0.25**

Given below is a statement, followed by two arguments numbered, I and II. You have to decide which of the arguments is/are a 'strong' argument.

Statement : Does India need so many plans for development?

Arguments : I. Yes. Nothing can be achieved without proper planning.

II. No. Too much time, money and energy is wasted on planning.

**Options :**

4058598007. If only argument I is strong.

4058598008. If only argument II is strong.

4058598009. If either I or II is strong.

4058598010. If neither I nor II is strong.

**Question Number : 120 Question Id : 4058592392 Question Type : MCQ Option Shuffling : Yes**

**Is Question Mandatory : No Calculator : None Response Time : N.A Think Time : N.A**

**Minimum Instruction Time : 0**

**Correct Marks : 1 Wrong Marks : 0.25**

नीचे एक कथन दिया गया है। उसके आधार पर दो तर्क I व II दिए गए हैं। कथन पर विचार कीजिए तथा सुनिश्चित कीजिए कि कौन-सा/से तर्क प्रभावशाली हैं?

कथन: क्या भारत को विकास के लिए बहुत सारी योजनाओं की आवश्यकता है?

तर्क: I. हाँ, बिना उचित नियोजन के, कुछ भी हासिल नहीं किया जा सकता।

II. नहीं, नियोजन पर बहुत अधिक समय, राशि तथा ऊर्जा बर्बाद होती है।

**Options :**

4058598007. केवल तर्क I प्रभावशाली है।

4058598008. केवल तर्क II प्रभावशाली है।

4058598009. I अथवा II, कोई एक प्रभावशाली है।

4058598010. न I न ही II, प्रभावशाली है।

**Question Number : 121 Question Id : 4058592393 Question Type : MCQ Option Shuffling : Yes**

**Is Question Mandatory : No Calculator : None Response Time : N.A Think Time : N.A**

**Minimum Instruction Time : 0**

**Correct Marks : 1 Wrong Marks : 0.25**

X was born on march 6, 1993. The same year Independence Day was celebrated on Friday. On which day was X born?

**Options :**

4058598011. Wednesday

4058598012. Thursday

4058598013. Friday

4058598014. Saturday

**Question Number : 121 Question Id : 4058592393 Question Type : MCQ Option Shuffling : Yes**

**Is Question Mandatory : No Calculator : None Response Time : N.A Think Time : N.A**

**Minimum Instruction Time : 0**

**Correct Marks : 1 Wrong Marks : 0.25**

X का जन्म 6 मार्च 1993 को हुआ। उसी वर्ष स्वतंत्रता दिवस शुक्रवार को मनाया गया। X का जन्म किस दिन हुआ था?

**Options :**

4058598011. बुधवार

4058598012. बृहस्पतिवार

4058598013. शुक्रवार

4058598014. शनिवार

**Question Number : 122 Question Id : 4058592394 Question Type : MCQ Option Shuffling : Yes**

**Is Question Mandatory : No Calculator : None Response Time : N.A Think Time : N.A**

**Minimum Instruction Time : 0**

**Correct Marks : 1 Wrong Marks : 0.25**

In question below is given a statement followed by two courses of action numbered I and II. You have to assume everything in the statement to be true and on the basis of the information given in the statement, decide which of the suggested courses of action logically follow(s) for pursuing.

Statement : A large number of people in ward 'X' of the city are diagnosed to be suffering from a fatal malaria type disease.

Course of action :

- I. The city municipal authority should take immediate steps to carry out extensive fumigation in ward 'X'.
- II. The people in the area should be advised to take steps to avoid mosquito bite.

**Options :**

4058598015. If only I follows.

4058598016. If only II follows.

4058598017. If either I or II follows.

4058598018. If both I and II follows.

**Question Number : 122 Question Id : 4058592394 Question Type : MCQ Option Shuffling : Yes**

**Is Question Mandatory : No Calculator : None Response Time : N.A Think Time : N.A**

**Minimum Instruction Time : 0**

**Correct Marks : 1 Wrong Marks : 0.25**

नीचे दिए गए प्रश्न में, एक कथन दिया गया है। उसके आधार पर दो कार्यवाहियाँ I वा II दी गई हैं। आपको कथन को सत्य मानना है तथा कथन में दी गई जानकारी के आधार पर तय करना है कि दी गई कार्यवाहियों में से कौन-सा/से तार्किक रूप से अनुपालन हेतु उचित हैं?

कथन: शहर के वार्ड 'X' में उपस्थित लोगों की बड़ी संख्या मलेरिया के प्राणघातक रूप से ग्रसित है।

कार्यवाही: I शहर की म्युनिसिपल अथॉरिटी को वॉर्ड 'X' में गंभीर स्तर पर व्यूमीकरण करवाने के लिए फौरन जरूरी कदम उठाने चाहिए।

II क्षेत्र के लोगों को मच्छर के डंक से बचने के लिए जरूरी कदम उठाए जाने की हिदायत दी जानी चाहिए।

**Options :**

4058598015. केवल I का अनुपालन होता है।

4058598016. केवल II का अनुपालन होता है।

4058598017. I अथवा II का अनुपालन होता है।

4058598018. I तथा II, दोनों का अनुपालन होता है।

**Question Number : 123 Question Id : 4058592395 Question Type : MCQ Option Shuffling : Yes**

**Is Question Mandatory : No Calculator : None Response Time : N.A Think Time : N.A**

**Minimum Instruction Time : 0**

**Correct Marks : 1 Wrong Marks : 0.25**

In a row of 23 boys, when Rohan was shifted by five places towards the right, he became sixteenth from the left end. What was his earlier position from the right end of the row ?

**Options :**

4058598019. 9<sup>th</sup>

4058598020. 11<sup>th</sup>

4058598021. 12<sup>th</sup>

4058598022. 13<sup>th</sup>

**Question Number : 123 Question Id : 4058592395 Question Type : MCQ Option Shuffling : Yes**

**Is Question Mandatory : No Calculator : None Response Time : N.A Think Time : N.A**

**Minimum Instruction Time : 0**

**Correct Marks : 1 Wrong Marks : 0.25**

23 लड़कों की एक पंक्ति में, जब रोहन को दायीं ओर पाँच स्थान खिसकाया जाता है तो वह बायें छोर से 16वें स्थान पर है, तो पंक्ति के दायें छोर से उसका स्थान पहले क्या था?

**Options :**

4058598019. 9वां

4058598020. 11वां

4058598021. 12वां

4058598022. 13वां

**Question Number : 124 Question Id : 4058592396 Question Type : MCQ Option Shuffling : Yes**

**Is Question Mandatory : No Calculator : None Response Time : N.A Think Time : N.A**

**Minimum Instruction Time : 0**

**Correct Marks : 1 Wrong Marks : 0.25**

If  $A = 2$

$M = 26$

$Z = 52$

Then  $BET = ?$

**Options :**

4058598023. 44

4058598024. 54

4058598025. 64

4058598026. 72

**Question Number : 124 Question Id : 4058592396 Question Type : MCQ Option Shuffling : Yes**

**Is Question Mandatory : No Calculator : None Response Time : N.A Think Time : N.A**

**Minimum Instruction Time : 0**

**Correct Marks : 1 Wrong Marks : 0.25**

यदि  $A = 2$

$M = 26$

$Z = 52$

तो  $BET = ?$

**Options :**

4058598023. 44

4058598024. 54

4058598025. 64

4058598026. 72

**Question Number : 125 Question Id : 4058592397 Question Type : MCQ Option Shuffling : Yes**

**Is Question Mandatory : No Calculator : None Response Time : N.A Think Time : N.A**

**Minimum Instruction Time : 0**

**Correct Marks : 1 Wrong Marks : 0.25**



Answer the question referring to the symbol – letter – number sequence given below :

2PJ@8\$LB1V#Q6δGTJ9KCD3©●£5FR7AY4

P@L is to Y75 in the same way as \$1# is to :

**Options :**

4058598027. R£3

4058598028. F£3

4058598029. 5£©

4058598030. F●3

**Question Number : 125 Question Id : 4058592397 Question Type : MCQ Option Shuffling : Yes**

**Is Question Mandatory : No Calculator : None Response Time : N.A Think Time : N.A**

**Minimum Instruction Time : 0**

**Correct Marks : 1 Wrong Marks : 0.25**

नीचे दिए गए प्रतीक-वर्ण-अंक अनुक्रम के संदर्भ में उत्तर दीजिए:

2PJ@8\$LB1V#Q6δGTJ9KCD3©●£5FR7AY4

P@L समान है Y75 के। इसी तरह \$1# समान है:

**Options :**

4058598027. R£3

4058598028. F£3

4058598029. 5£©

4058598030. F●3

# General Knowledge And Current Affairs

<b>Section Id :</b>	405859130
<b>Section Number :</b>	5
<b>Section type :</b>	Online
<b>Mandatory or Optional :</b>	Mandatory
<b>Number of Questions :</b>	25
<b>Number of Questions to be attempted :</b>	25
<b>Section Marks :</b>	25
<b>Enable Mark as Answered Mark for Review and Clear Response :</b>	Yes
<b>Maximum Instruction Time :</b>	0
<b>Sub-Section Number :</b>	1
<b>Sub-Section Id :</b>	405859171
<b>Question Shuffling Allowed :</b>	Yes
<b>Is Section Default? :</b>	null

**Question Number : 126 Question Id : 4058592398 Question Type : MCQ Option Shuffling : Yes**

**Is Question Mandatory : No Calculator : None Response Time : N.A Think Time : N.A**

**Minimum Instruction Time : 0**

**Correct Marks : 1 Wrong Marks : 0.25**

Arvind Panagariya has been appointed the chairperson of the :

**Options :**

4058598031. 15<sup>th</sup> Finance Commission

4058598032. 16<sup>th</sup> Finance Commission

4058598033. 17<sup>th</sup> Finance Commission

4058598034. 18<sup>th</sup> Finance Commission

**Question Number : 126 Question Id : 4058592398 Question Type : MCQ Option Shuffling : Yes**

**Is Question Mandatory : No Calculator : None Response Time : N.A Think Time : N.A**

**Minimum Instruction Time : 0**

**Correct Marks : 1 Wrong Marks : 0.25**

अरविंद पनगरिया को निम्न में से किसका अध्यक्ष नियुक्त किया गया है?

**Options :**

4058598031. 15वां वित्त आयोग

4058598032. 16वां वित्त आयोग

4058598033. 17वां वित्त आयोग

4058598034. 18वां वित्त आयोग

**Question Number : 127 Question Id : 4058592399 Question Type : MCQ Option Shuffling : Yes**

**Is Question Mandatory : No Calculator : None Response Time : N.A Think Time : N.A**

**Minimum Instruction Time : 0**

**Correct Marks : 1 Wrong Marks : 0.25**

Sudarshan Pattnaik is acclaimed as :

**Options :**

4058598035. A musician from Odisha

4058598036. A Bharatnatyam dancer

4058598037. A drama artist

4058598038. A sand artist

Question Number : 127 Question Id : 4058592399 Question Type : MCQ Option Shuffling : Yes

Is Question Mandatory : No Calculator : None Response Time : N.A Think Time : N.A

Minimum Instruction Time : 0

Correct Marks : 1 Wrong Marks : 0.25

सुदर्शन पटनायक किस रूप में प्रसिद्ध हैं?

Options :

4058598035. ओडिशा से एक संगीतकार

4058598036. भरतनाट्यम नर्तक

4058598037. नाटककार

4058598038. बालू कलाकार

Question Number : 128 Question Id : 4058592400 Question Type : MCQ Option Shuffling : Yes

Is Question Mandatory : No Calculator : None Response Time : N.A Think Time : N.A

Minimum Instruction Time : 0

Correct Marks : 1 Wrong Marks : 0.25

Who is the present Governor of Reserve Bank of India ?

Options :

4058598039. Shaktikanta Das

4058598040. Raghuram Rajan

4058598041. Ashok Gulati

4058598042. T. V. Somanathan

Question Number : 128 Question Id : 4058592400 Question Type : MCQ Option Shuffling : Yes

**Is Question Mandatory : No Calculator : None Response Time : N.A Think Time : N.A**

**Minimum Instruction Time : 0**

**Correct Marks : 1 Wrong Marks : 0.25**

भारतीय रिजर्व बैंक के वर्तमान गवर्नर कौन हैं?

**Options :**

4058598039. शक्तिकांत दास

4058598040. रघुराम राजन

4058598041. अशोक गुलाटी

4058598042. टी. वी. सोमनाथन

**Question Number : 129 Question Id : 4058592401 Question Type : MCQ Option Shuffling : Yes**

**Is Question Mandatory : No Calculator : None Response Time : N.A Think Time : N.A**

**Minimum Instruction Time : 0**

**Correct Marks : 1 Wrong Marks : 0.25**

Which one of the following National Parks is correctly matched with the State it is located in ?

**Options :**

4058598043. Chandoli National Park, Gujarat

4058598044. Khirganga National Park - Uttar Pradesh

4058598045. Anshi National Park - Tamil Nadu

4058598046. Betla National Park - Jharkhand

**Question Number : 129 Question Id : 4058592401 Question Type : MCQ Option Shuffling : Yes**

**Is Question Mandatory : No Calculator : None Response Time : N.A Think Time : N.A**

**Minimum Instruction Time : 0**

**Correct Marks : 1 Wrong Marks : 0.25**

निम्न में से किस राष्ट्रीय उद्यान का उस राज्य के साथ सही मिलान किया गया है जिसमें वह स्थित है ?

**Options :**

4058598043. चंदोली राष्ट्रीय पार्क - गुजरात

4058598044. खीरगंगा राष्ट्रीय पार्क - उत्तर प्रदेश

4058598045. अंशी राष्ट्रीय पार्क - तमिलनाडु

4058598046. बेतला राष्ट्रीय पार्क - झारखंड

**Question Number : 130 Question Id : 4058592402 Question Type : MCQ Option Shuffling : Yes**

**Is Question Mandatory : No Calculator : None Response Time : N.A Think Time : N.A**

**Minimum Instruction Time : 0**

**Correct Marks : 1 Wrong Marks : 0.25**

Which one of the following States is/are wrongly matched with its/their Capitals:

- A. Meghalaya - Shilong
- B. Nagaland - Kohima
- C. Andhra Pradesh - Hyderabad
- D. Arunachal Pradesh - Agartala
- E. Mizoram - Aizwal

Choose the correct answer from the options given below:

**Options :**

4058598047. A, B and E only

4058598048. B and C only

4058598049. A, D and E only

4058598050. C and D only

**Question Number : 130 Question Id : 4058592402 Question Type : MCQ Option Shuffling : Yes**

**Is Question Mandatory : No Calculator : None Response Time : N.A Think Time : N.A**

**Minimum Instruction Time : 0**

**Correct Marks : 1 Wrong Marks : 0.25**

निम्न में से किन राज्यों का मिलान उनकी राजधानियों के साथ सही रूप से नहीं किया गया है?

- A. मेघालय - शिलांग
- B. नागालैंड - कोहिमा
- C. आंध्र प्रदेश - हैदराबाद
- D. अरुणाचल प्रदेश - अगरतला
- E. मिज़ोरम - आइज़ोल

नीचे दिए गए विकल्पों में से सही विकल्प का चयन कीजिए:

**Options :**

4058598047. केवल A, B तथा E

4058598048. केवल B तथा C

4058598049. केवल A, D तथा E

4058598050. केवल C तथा D

**Question Number : 131 Question Id : 4058592403 Question Type : MCQ Option Shuffling : Yes**

**Is Question Mandatory : No Calculator : None Response Time : N.A Think Time : N.A**

**Minimum Instruction Time : 0**

**Correct Marks : 1 Wrong Marks : 0.25**

Which Act gave the government enormous power to repress political activities and allowed detention of political prisoners without trial for two years?

**Options :**

4058598051. Pitts India Act, 1784

4058598052. Indian Council Act, 1861

4058598053. Government of India Act, 1919

4058598054. Rowlatt Act

**Question Number : 131 Question Id : 4058592403 Question Type : MCQ Option Shuffling : Yes**

**Is Question Mandatory : No Calculator : None Response Time : N.A Think Time : N.A**

**Minimum Instruction Time : 0**

**Correct Marks : 1 Wrong Marks : 0.25**

निम्नांकित में से किस अधिनियम में सरकार को राजनीतिक गतिविधियों का दमन करने की अपार शक्ति दिए जाने तथा राजनीतिक बन्दियों (कैदियों) को बिना किसी विचारण के ही 2 वर्ष तक निरुद्ध किए जाने का उपबंध किया गया था?

**Options :**

4058598051. पिट्स इंडिया अधिनियम, 1784

4058598052. इन्डियन काउंसिल एक्ट, 1861

4058598053. गवर्नमेंट ऑफ इन्डिया एक्ट, 1919

4058598054. रॉलेट एक्ट

**Question Number : 132 Question Id : 4058592404 Question Type : MCQ Option Shuffling : Yes**

**Is Question Mandatory : No Calculator : None Response Time : N.A Think Time : N.A**



**Minimum Instruction Time : 0**

**Correct Marks : 1 Wrong Marks : 0.25**

Who is the author of the book 'Stri Purush Tulna'- a comparison between women and Men?

**Options :**

4058598055. Pandita Ramabai

4058598056. Begum Rokeya Sekhawat

4058598057. Madhu Kishwar

4058598058. Tarabai Shinde

**Question Number : 132 Question Id : 4058592404 Question Type : MCQ Option Shuffling : Yes**

**Is Question Mandatory : No Calculator : None Response Time : N.A Think Time : N.A**

**Minimum Instruction Time : 0**

**Correct Marks : 1 Wrong Marks : 0.25**

महिलाओं और पुरुषों के मध्य तुलनात्मक विवरण से संबंधित पुस्तक- 'स्त्री पुरुष तुलना' की रचयिता कौन है?

**Options :**

4058598055. पंडिता रामाबाई

4058598056. बेगम रोकेया शेखावत

4058598057. मधु किश्वर

4058598058. ताराबाई शिंदे

**Question Number : 133 Question Id : 4058592405 Question Type : MCQ Option Shuffling : Yes**

**Is Question Mandatory : No Calculator : None Response Time : N.A Think Time : N.A**

**Minimum Instruction Time : 0**

**Correct Marks : 1 Wrong Marks : 0.25**

**Statement A :** The Kandariya Mahadeva Temple dedicated to Shiva was constructed in 999 by the King Dhangadeva of the Chandela dynasty.

**Statement B :** This was the place for ritual worship where only the king, his immediate family and priests gathered.

Choose the correct answer from the options given below:

**Options :**

4058598059. Both statements A and B are correct.

4058598060. Both statements A and B are incorrect.

4058598061. Statement A is correct; B is incorrect.

4058598062. Statement B is correct; A is incorrect.

**Question Number : 133 Question Id : 4058592405 Question Type : MCQ Option Shuffling : Yes**

**Is Question Mandatory : No Calculator : None Response Time : N.A Think Time : N.A**

**Minimum Instruction Time : 0**

**Correct Marks : 1 Wrong Marks : 0.25**

**कथन A :** शिव को समर्पित कंदारिया महादेव मंदिर का निर्माण चंदेल वंश के राजा धांगदेव द्वारा 999 में करवाया गया था।

**कथन B :** यह स्थान रीतिपूर्वक पूजा के लिए था जहाँ केवल राजा, उसके निकट संबंधी तथा पुजारी ही एकत्र होते थे।

नीचे दिए गए विकल्पों में से सही विकल्प का चयन कीजिए:

**Options :**

4058598059. दोनों कथन A तथा B सही हैं।

4058598060. दोनों कथन A तथा B गलत हैं।

4058598061. कथन A सही है, B गलत है।

4058598062. कथन B सही है, A गलत है।

**Question Number : 134 Question Id : 4058592406 Question Type : MCQ Option Shuffling : Yes**

**Is Question Mandatory : No Calculator : None Response Time : N.A Think Time : N.A**

**Minimum Instruction Time : 0**

**Correct Marks : 1 Wrong Marks : 0.25**

Which of the following is/are wrongly matched with reference to France?

- A. Livre - Unit of currency in France discontinued in 1794.
- B. Tithe - Tax to be paid directly to the State.
- C. Clergy - Group of persons invested with special functions in the Church.
- D. Taille - A tax levied by the Church, comprising one tenth of the agricultural produce.

Choose the correct answer from the options given below:

**Options :**

4058598063. A, B and C

4058598064. B and D

4058598065. B and C

4058598066. Only C

**Question Number : 134 Question Id : 4058592406 Question Type : MCQ Option Shuffling : Yes**

**Is Question Mandatory : No Calculator : None Response Time : N.A Think Time : N.A**

**Minimum Instruction Time : 0**

**Correct Marks : 1 Wrong Marks : 0.25**

निम्न में से क्या फ्रांस के संदर्भ में सुमेलित नहीं है?

- A. लिवरे - फ्रांस में मुद्रा की एक इकाई जिसे 1794 में समाप्त कर दिया गया।
- B. टिथे - राज्यों को प्रत्यक्ष रूप से दिया जाने वाला कर
- C. क्लर्जी - चर्च में खास कार्यों में लगे व्यक्तियों का समूह
- D. टेले - चर्च द्वारा लगाया जाने वाला कर, जो कृषि उत्पादन का दसवाँ भाग हो।

नीचे दिए विकल्पों में से सही विकल्प का चयन कीजिए:

**Options :**

4058598063. A, B तथा C

4058598064. B तथा D

4058598065. B तथा C

4058598066. केवल C

**Question Number : 135 Question Id : 4058592407 Question Type : MCQ Option Shuffling : Yes**

**Is Question Mandatory : No Calculator : None Response Time : N.A Think Time : N.A**

**Minimum Instruction Time : 0**

**Correct Marks : 1 Wrong Marks : 0.25**

Which one of the following describes the drainage pattern resembling the dome like structure?

**Options :**

4058598067. Dendritic

4058598068. Radial

4058598069. Trellis

4058598070. Rectangular

Question Number : 135 Question Id : 4058592407 Question Type : MCQ Option Shuffling : Yes

Is Question Mandatory : No Calculator : None Response Time : N.A Think Time : N.A

Minimum Instruction Time : 0

Correct Marks : 1 Wrong Marks : 0.25

निम्नलिखित में से क्या गुम्बद सदृश संरचना से साम्य रखने वाले अपवाह प्रतिरूप का वर्णन करता है?

Options :

4058598067. द्रुमाकृतिक

4058598068. अरीय

4058598069. झंझरी

4058598070. आयताकार

Question Number : 136 Question Id : 4058592408 Question Type : MCQ Option Shuffling : Yes

Is Question Mandatory : No Calculator : None Response Time : N.A Think Time : N.A

Minimum Instruction Time : 0

Correct Marks : 1 Wrong Marks : 0.25

A narrow zone of the Earth where land, water and air interact with each other to support life is called:

Options :

4058598071. Atmosphere

4058598072. Biosphere

4058598073. Hydrosphere

4058598074. Lithosphere

Question Number : 136 Question Id : 4058592408 Question Type : MCQ Option Shuffling : Yes

Is Question Mandatory : No Calculator : None Response Time : N.A Think Time : N.A

Minimum Instruction Time : 0

Correct Marks : 1 Wrong Marks : 0.25

पृथ्वी का एक संकीर्ण क्षेत्र जहाँ भूमि, जल और वायु जीवन के पोषण हेतु एक दूसरे से अन्तः क्रिया करते हैं, कहलाता है:

Options :

4058598071. वायुमण्डल

4058598072. जीवमण्डल

4058598073. जलमण्डल

4058598074. स्थलमण्डल

Question Number : 137 Question Id : 4058592409 Question Type : MCQ Option Shuffling : Yes

Is Question Mandatory : No Calculator : None Response Time : N.A Think Time : N.A

Minimum Instruction Time : 0

Correct Marks : 1 Wrong Marks : 0.25

Which one of the atmosphere layers is most ideal for flying aeroplanes?

Options :

4058598075. Troposphere

4058598076. Stratosphere

4058598077. Mesosphere

4058598078. Exosphere

**Question Number : 137 Question Id : 4058592409 Question Type : MCQ Option Shuffling : Yes**

**Is Question Mandatory : No Calculator : None Response Time : N.A Think Time : N.A**

**Minimum Instruction Time : 0**

**Correct Marks : 1 Wrong Marks : 0.25**

वायुयान के उड्डयन हेतु आदर्श वायुमंडलीय परत निम्नांकित में से कौन सी है?

**Options :**

4058598075. क्षोभमंडल

4058598076. समतापमंडल

4058598077. मध्यमंडल

4058598078. बहिर्मंडल (बाह्यमंडल)

**Question Number : 138 Question Id : 4058592410 Question Type : MCQ Option Shuffling : Yes**

**Is Question Mandatory : No Calculator : None Response Time : N.A Think Time : N.A**

**Minimum Instruction Time : 0**

**Correct Marks : 1 Wrong Marks : 0.25**

Which of the following is not used to reduce friction?

**Options :**

4058598079. Grease or oil in a machine part

4058598080. Powder on carrom board

4058598081. Ball bearings in motors

4058598082. Sole of the shoe or tyres of the vehicle

**Question Number : 138 Question Id : 4058592410 Question Type : MCQ Option Shuffling : Yes**

**Is Question Mandatory : No Calculator : None Response Time : N.A Think Time : N.A**

**Minimum Instruction Time : 0**

**Correct Marks : 1 Wrong Marks : 0.25**

घर्षण कम करने के लिए निम्नांकित में से क्या प्रयुक्त नहीं होता है:

**Options :**

4058598079. किसी मशीन के पुर्जे में ग्रीस या तेल

4058598080. कैरमबोर्ड पर पाउडर

4058598081. मोटर में बॉल बेरिंग

4058598082. जूते का सोल या वाहन के टायर

**Question Number : 139 Question Id : 4058592411 Question Type : MCQ Option Shuffling : Yes**

**Is Question Mandatory : No Calculator : None Response Time : N.A Think Time : N.A**

**Minimum Instruction Time : 0**

**Correct Marks : 1 Wrong Marks : 0.25**

Identify the correct statements:

- A. A liquid exerts pressure on the walls of the container.
- B. Pressure exerted by water at the bottom of the container depends on the height of its column.
- C. Liquid exerts equal pressure at the same depth.

Choose the correct answer from the options given below:

**Options :**

4058598083. A and B

4058598084. A and C



4058598085. B and C

4058598086. A, B and C

**Question Number : 139 Question Id : 4058592411 Question Type : MCQ Option Shuffling : Yes**

**Is Question Mandatory : No Calculator : None Response Time : N.A Think Time : N.A**

**Minimum Instruction Time : 0**

**Correct Marks : 1 Wrong Marks : 0.25**

सही कथन/कथनों की पहचान कीजिए:

- A. द्रव धारक की भित्तियों पर दाब डालता है।
- B. धारक की पेंदी में जल द्वारा उत्पन्न दाब इसके स्तंभ (कॉलम) की ऊंचाई पर निर्भर करता है।
- C. द्रव समान गहराई में समान दाब डालता है।

नीचे दिए गए विकल्पों में से सही उत्तर चुनिए:

**Options :**

4058598083. A और B

4058598084. A और C

4058598085. B और C

4058598086. A, B और C

**Question Number : 140 Question Id : 4058592412 Question Type : MCQ Option Shuffling : Yes**

**Is Question Mandatory : No Calculator : None Response Time : N.A Think Time : N.A**

**Minimum Instruction Time : 0**

**Correct Marks : 1 Wrong Marks : 0.25**

Identify the Electrical Insulator from the following:

**Options :**

4058598087. Nickel

4058598088. Manganese

4058598089. Nichrome

4058598090. Ebonite

**Question Number : 140 Question Id : 4058592412 Question Type : MCQ Option Shuffling : Yes**

**Is Question Mandatory : No Calculator : None Response Time : N.A Think Time : N.A**

**Minimum Instruction Time : 0**

**Correct Marks : 1 Wrong Marks : 0.25**

निम्नांकित में से विद्युत्रोधी चुनिए:

**Options :**

4058598087. निकेल

4058598088. मैगनीज

4058598089. नाइक्रोम

4058598090. एबोनाइट

**Question Number : 141 Question Id : 4058592413 Question Type : MCQ Option Shuffling : Yes**

**Is Question Mandatory : No Calculator : None Response Time : N.A Think Time : N.A**

**Minimum Instruction Time : 0**

**Correct Marks : 1 Wrong Marks : 0.25**

Which of the following is **NOT** a characteristic feature of computer device?

**Options :**

4058598091. Reliability

4058598092. Versatility

4058598093. Diligence

4058598094. Emotion

**Question Number : 141 Question Id : 4058592413 Question Type : MCQ Option Shuffling : Yes**

**Is Question Mandatory : No Calculator : None Response Time : N.A Think Time : N.A**

**Minimum Instruction Time : 0**

**Correct Marks : 1 Wrong Marks : 0.25**

निम्नांकित में से क्या कंप्यूटर उपकरण की अभिलाक्षणिक विशेषता नहीं है?

**Options :**

4058598091. विश्वसनीयता

4058598092. व्यापकता

4058598093. श्रम

4058598094. भावना

**Question Number : 142 Question Id : 4058592414 Question Type : MCQ Option Shuffling : Yes**

**Is Question Mandatory : No Calculator : None Response Time : N.A Think Time : N.A**

**Minimum Instruction Time : 0**

**Correct Marks : 1 Wrong Marks : 0.25**

Which of the following is **NOT** a computer hardware?

**Options :**

4058598095. Mouse

4058598096. Joystick

4058598097. MS-Paint

4058598098. Microphone

**Question Number : 142 Question Id : 4058592414 Question Type : MCQ Option Shuffling : Yes**

**Is Question Mandatory : No Calculator : None Response Time : N.A Think Time : N.A**

**Minimum Instruction Time : 0**

**Correct Marks : 1 Wrong Marks : 0.25**

निम्नांकित में से क्या कंप्यूटर हार्डवेयर नहीं है?

**Options :**

4058598095. माउस

4058598096. जॉयस्टिक

4058598097. एम.एस पेंट

4058598098. माइक्रोफोन

**Question Number : 143 Question Id : 4058592415 Question Type : MCQ Option Shuffling : Yes**

**Is Question Mandatory : No Calculator : None Response Time : N.A Think Time : N.A**

**Minimum Instruction Time : 0**

**Correct Marks : 1 Wrong Marks : 0.25**

Which of the following is **NOT** a Fundamental Right under the Constitution of India?

**Options :**

4058598099. Right to Constitutional Remedies

4058598100. Right to Vote

4058598101. Cultural and Educational Rights

4058598102. Right against exploitation

**Question Number : 143 Question Id : 4058592415 Question Type : MCQ Option Shuffling : Yes**

**Is Question Mandatory : No Calculator : None Response Time : N.A Think Time : N.A**

**Minimum Instruction Time : 0**

**Correct Marks : 1 Wrong Marks : 0.25**

निम्नलिखित में से क्या भारत के संविधान के अंतर्गत मूल अधिकार नहीं है?

**Options :**

4058598099. संवैधानिक उपचार का अधिकार

4058598100. मतदान का अधिकार

4058598101. सांस्कृतिक और शैक्षणिक अधिकार

4058598102. शोषण के विरुद्ध अधिकार

**Question Number : 144 Question Id : 4058592416 Question Type : MCQ Option Shuffling : Yes**

**Is Question Mandatory : No Calculator : None Response Time : N.A Think Time : N.A**

**Minimum Instruction Time : 0**

**Correct Marks : 1 Wrong Marks : 0.25**

Who among the following coined the phrase "Unity in diversity" to describe India?

**Options :**

4058598103. Mahatma Gandhi

4058598104. Rabindranath Tagore

4058598105. Dayanand Saraswati

4058598106. Jawaharlal Nehru

**Question Number : 144 Question Id : 4058592416 Question Type : MCQ Option Shuffling : Yes**

**Is Question Mandatory : No Calculator : None Response Time : N.A Think Time : N.A**

**Minimum Instruction Time : 0**

**Correct Marks : 1 Wrong Marks : 0.25**

निम्नलिखित में से किसने भारत का वर्णन करने के लिए "विविधता में एकता" वाक्यांश बनाया?

**Options :**

4058598103. महात्मा गांधी

4058598104. रवीन्द्रनाथ टैगोर

4058598105. दयानन्द सरस्वती

4058598106. जवाहरलाल नेहरू

**Question Number : 145 Question Id : 4058592417 Question Type : MCQ Option Shuffling : Yes**

**Is Question Mandatory : No Calculator : None Response Time : N.A Think Time : N.A**

**Minimum Instruction Time : 0**

**Correct Marks : 1 Wrong Marks : 0.25**

Consider the following statements about the Rajya Sabha:

- A. Rajya Sabha controls the executive by asking questions, supplementary questions, resolutions and motions and through no confidence motion.
- B. Rajya Sabha can give the Union Parliament power to make laws on matters included in the State list.

Choose the correct answer from the options given below:

**Options :**

4058598107. A is true and B is false.

4058598108. Both A and B are true.

4058598109. A is false and B is true.

4058598110. Both A and B are false.

**Question Number : 145 Question Id : 4058592417 Question Type : MCQ Option Shuffling : Yes**

**Is Question Mandatory : No Calculator : None Response Time : N.A Think Time : N.A**

**Minimum Instruction Time : 0**

**Correct Marks : 1 Wrong Marks : 0.25**

राज्य सभा के बारे में निम्नलिखित कथनों के बारे में विचार कीजिए:

- A. राज्य सभा प्रश्न, पूरक प्रश्न पूछकर, संकल्पों और प्रस्तावों और अविश्वास प्रस्तावों के माध्यम से कार्यपालिका को नियंत्रित करती है।
- B. राज्य सभा केंद्र सरकार को राज्य सूची में सम्मिलित विषयों पर कानून बनाने की शक्ति प्रदान कर सकती है।

निम्नलिखित विकल्पों से सही उत्तर चुनिए:

**Options :**

4058598107. A सही है और B गलत है।

4058598108. A और B दोनों सही हैं।

4058598109. A गलत है और B सही है।

4058598110. A और B दोनों गलत हैं।

**Question Number : 146 Question Id : 4058592418 Question Type : MCQ Option Shuffling : Yes**

**Is Question Mandatory : No Calculator : None Response Time : N.A Think Time : N.A**

**Minimum Instruction Time : 0**

**Correct Marks : 1 Wrong Marks : 0.25**

Under which of the following writs the Court orders a Lower Court or another authority to transfer a matter pending before it to the higher authority are Court?

**Options :**

4058598111. Mandamus

4058598112. Prohibition

4058598113. Quo Warranto

4058598114. Certiorari

**Question Number : 146 Question Id : 4058592418 Question Type : MCQ Option Shuffling : Yes**

**Is Question Mandatory : No Calculator : None Response Time : N.A Think Time : N.A**

**Minimum Instruction Time : 0**

**Correct Marks : 1 Wrong Marks : 0.25**

निम्नलिखित प्रादेशों (रिट) में से किसके अंतर्गत न्यायालय किसी निचली अदालत या अन्य अधिकारी को इसके समक्ष लंबित विषय को ऊपर के अधिकारी या अदालत को हस्तांतरित करने का आदेश देता है?

**Options :**

4058598111. परमादेश

4058598112. निषेध आदेश



4058598113. अधिकार पृच्छा

4058598114. उत्प्रेषण रिट

**Question Number : 147 Question Id : 4058592419 Question Type : MCQ Option Shuffling : Yes**

**Is Question Mandatory : No Calculator : None Response Time : N.A Think Time : N.A**

**Minimum Instruction Time : 0**

**Correct Marks : 1 Wrong Marks : 0.25**

Wholesale Price Index number indicates which of the following?

**Options :**

4058598115. Change in cost of living.

4058598116. Change in general price level.

4058598117. Change in stock market.

4058598118. Change in quantities of manufactured items.

**Question Number : 147 Question Id : 4058592419 Question Type : MCQ Option Shuffling : Yes**

**Is Question Mandatory : No Calculator : None Response Time : N.A Think Time : N.A**

**Minimum Instruction Time : 0**

**Correct Marks : 1 Wrong Marks : 0.25**

थोक बिक्री कीमत सूचकांक निम्नलिखित में से किसे निदर्शित करता है?

**Options :**

4058598115. जीवन निर्वाह की लागत में परिवर्तन

4058598116. सामान्य मूल्य स्तर में परिवर्तन

4058598117. स्टॉक बाजार में परिवर्तन

4058598118. विनिर्मित वस्तुओं की मात्राओं में परिवर्तन

**Question Number : 148 Question Id : 4058592420 Question Type : MCQ Option Shuffling : Yes**

**Is Question Mandatory : No Calculator : None Response Time : N.A Think Time : N.A**

**Minimum Instruction Time : 0**

**Correct Marks : 1 Wrong Marks : 0.25**

Consider the following statements about non-random sampling method:

- A. All the units of the population have an equal chance of being selected.
- B. Convenience on judgement of the investigator does not play an important role in selection of the sample.

Choose the correct answer from the options given below:

**Options :**

4058598119. A is true, B is false.

4058598120. Both A and B are true.

4058598121. A is false, B is true.

4058598122. Both A and B are false.

**Question Number : 148 Question Id : 4058592420 Question Type : MCQ Option Shuffling : Yes**

**Is Question Mandatory : No Calculator : None Response Time : N.A Think Time : N.A**

**Minimum Instruction Time : 0**

**Correct Marks : 1 Wrong Marks : 0.25**

गैर-यादृच्छिक प्रतिचयन पद्धति के बारे में निम्नलिखित कथनों पर विचार कीजिए:

- A. जनसंख्या की सभी इकाइयों के पास चयनित होने का समान अवसर होता है।
- B. सुविधा या अन्वेषण का निर्णय प्रतिदर्श के चयन में महत्वपूर्ण भूमिका का निर्वहन नहीं करते हैं।

नीचे दिए गए विकल्पों में से सही उत्तर का चयन कीजिए:

**Options :**

4058598119. A सत्य है, B असत्य है।

4058598120. A और B दोनों सत्य है।

4058598121. A असत्य है, B सत्य है।

4058598122. A और B दोनों असत्य हैं।

**Question Number : 149 Question Id : 4058592421 Question Type : MCQ Option Shuffling : Yes**

**Is Question Mandatory : No Calculator : None Response Time : N.A Think Time : N.A**

**Minimum Instruction Time : 0**

**Correct Marks : 1 Wrong Marks : 0.25**

The Second Five Year Plan of India, a landmark contribution to development planning, was based on the ideas of which of the following thinkers?

**Options :**

4058598123. Dadabhai Naoroji

4058598124. V.K.R.V. Rao

4058598125. R. C. Desai

4058598126. P.C. Mahalanobis

**Question Number : 149 Question Id : 4058592421 Question Type : MCQ Option Shuffling : Yes**

**Is Question Mandatory : No Calculator : None Response Time : N.A Think Time : N.A**

**Minimum Instruction Time : 0**

**Correct Marks : 1 Wrong Marks : 0.25**

भारत की द्वितीय पंचवर्षीय योजना का सामान्यतः विकासात्मक योजना में एक अतिमहत्वपूर्ण स्थान है। यह निम्नलिखित विचारकों में से किसके विचार पर आधारित था?

**Options :**

4058598123. दादाभाई नौरोजी

4058598124. वी.के.आर.वी. राव

4058598125. आर. सी. देसाई

4058598126. पी. सी. महालबोनिस

**Question Number : 150 Question Id : 4058592422 Question Type : MCQ Option Shuffling : Yes**

**Is Question Mandatory : No Calculator : None Response Time : N.A Think Time : N.A**

**Minimum Instruction Time : 0**

**Correct Marks : 1 Wrong Marks : 0.25**

Which one among the following statements correctly explains "Capital Goods Industry"?

**Options :**

4058598127. Industries which produce machine tools which are used for producing articles for current consumption.

4058598128. Industries which produce articles for direct current consumption.

4058598129. Industries which produce machine tools which are used in the agricultural sector.

4058598130. Industries which produce articles only for export.

Question Number : 150 Question Id : 4058592422 Question Type : MCQ Option Shuffling : Yes

Is Question Mandatory : No Calculator : None Response Time : N.A Think Time : N.A

Minimum Instruction Time : 0

Correct Marks : 1 Wrong Marks : 0.25

निम्नलिखित कथनों में से कौन-सा कथन "पूँजीगत उद्योगों" का सही वर्णन करता है?

Options :

4058598127. उद्योग, जो यन्त्रोपकरण का उत्पादन करते हैं, जिनका वर्तमान उपभोग हेतु वस्तु उत्पादन के लिए प्रयोग किया जाता है।

4058598128. उद्योग, जो तात्कालिक वर्तमान उपभोग हेतु वस्तुओं का उत्पादन करते हैं।

4058598129. उद्योग, जो यन्त्रोपकरण का उत्पादन करते हैं जिनका प्रयोग कृषि क्षेत्र में किया जाता है।

4058598130. उद्योग, जो केवल निर्यात के लिए वस्तुओं का उत्पादन करते हैं।

# National Testing Agency

**Question Paper Name :** MFTECH 05th Feb 2024 Shift 1  
**Subject Name :** MFTECH  
**Creation Date :** 2024-02-05 17:53:45  
**Duration :** 180  
**Total Marks :** 150  
**Display Marks:** Yes

## MFTECH

**Group Number :** 1  
**Group Id :** 40585920  
**Group Maximum Duration :** 0  
**Group Minimum Duration :** 180  
**Show Attended Group? :** No  
**Edit Attended Group? :** No  
**Break time :** 0  
**Group Marks :** 150  
**Is this Group for Examiner? :** No  
**Examiner permission :** Cant View  
**Show Progress Bar? :** No

## Communication Ability & English Comprehension

**Section Id :** 405859108  
**Section Number :** 1

<b>Section type :</b>	Online
<b>Mandatory or Optional :</b>	Mandatory
<b>Number of Questions :</b>	35
<b>Number of Questions to be attempted :</b>	35
<b>Section Marks :</b>	45
<b>Enable Mark as Answered Mark for Review and Clear Response :</b>	Yes
<b>Maximum Instruction Time :</b>	0
<b>Sub-Section Number :</b>	1
<b>Sub-Section Id :</b>	405859122
<b>Question Shuffling Allowed :</b>	Yes
<b>Is Section Default? :</b>	null

**Question Number : 1 Question Id : 4058591841 Question Type : MCQ Option Shuffling : Yes Is Question Mandatory : No Calculator : None Response Time : N.A Think Time : N.A Minimum Instruction Time : 0**

**Correct Marks : 1 Wrong Marks : 0.25**

Fill in the blanks:

He \_\_\_\_\_ the newspaper when Ved came \_\_\_\_\_.

**Options :**

4058595931. was read, in

4058595932. read, on

4058595933. was reading, in

4058595934. had read, about

**Question Number : 1 Question Id : 4058591841 Question Type : MCQ Option Shuffling : Yes Is Question Mandatory : No Calculator : None Response Time : N.A Think Time : N.A Minimum**

**Instruction Time : 0**

**Correct Marks : 1 Wrong Marks : 0.25**

Fill in the blanks:

He \_\_\_\_\_ the newspaper when Ved came \_\_\_\_\_.

**Options :**

4058595931. was read, in

4058595932. read, on

4058595933. was reading, in

4058595934. had read, about

**Question Number : 2 Question Id : 4058591842 Question Type : MCQ Option Shuffling : Yes Is**

**Question Mandatory : No Calculator : None Response Time : N.A Think Time : N.A Minimum**

**Instruction Time : 0**

**Correct Marks : 1 Wrong Marks : 0.25**

Correct the given sentence:

Anyone of the two girls can solve this puzzle.

**Options :**

4058595935. Anyone of the two girl can solve this puzzle.

4058595936. Either of the two girl can solve this puzzle.

4058595937. Anyone of the two girls can have solved this puzzle.

4058595938. Either of the two girls can solve this puzzle.



**Question Number : 2 Question Id : 4058591842 Question Type : MCQ Option Shuffling : Yes Is**

**Question Mandatory : No Calculator : None Response Time : N.A Think Time : N.A Minimum**

**Instruction Time : 0**

**Correct Marks : 1 Wrong Marks : 0.25**

Correct the given sentence:

Anyone of the two girls can solve this puzzle.

**Options :**

4058595935. Anyone of the two girl can solve this puzzle.

4058595936. Either of the two girl can solve this puzzle.

4058595937. Anyone of the two girls can have solved this puzzle.

4058595938. Either of the two girls can solve this puzzle.

**Question Number : 3 Question Id : 4058591843 Question Type : MCQ Option Shuffling : Yes Is**

**Question Mandatory : No Calculator : None Response Time : N.A Think Time : N.A Minimum**

**Instruction Time : 0**

**Correct Marks : 1 Wrong Marks : 0.25**

Correct the given sentence:

She denied to use any force to get him accept his fault.

**Options :**

4058595939. She denied used any force to have him accept his fault.

4058595940. She denied use of any force to get him accept his fault.

4058595941. She denied using any force to get him to accept his fault.

4058595942. She denied having used any force to have him accept his fault.

**Question Number : 3 Question Id : 4058591843 Question Type : MCQ Option Shuffling : Yes Is Question Mandatory : No Calculator : None Response Time : N.A Think Time : N.A Minimum Instruction Time : 0**

**Correct Marks : 1 Wrong Marks : 0.25**

Correct the given sentence:

She denied to use any force to get him accept his fault.

**Options :**

4058595939. She denied used any force to have him accept his fault.

4058595940. She denied use of any force to get him accept his fault.

4058595941. She denied using any force to get him to accept his fault.

4058595942. She denied having used any force to have him accept his fault.

**Question Number : 4 Question Id : 4058591844 Question Type : MCQ Option Shuffling : Yes Is Question Mandatory : No Calculator : None Response Time : N.A Think Time : N.A Minimum Instruction Time : 0**

**Correct Marks : 1 Wrong Marks : 0.25**

Correct the given sentence:

The leaders which do not love their country are not respected.

**Options :**

4058595943. The leaders that do not love their country are not respected.

4058595944. The leaders which do not love his country is not respected.

4058595945. The leaders who do not love his country are not respected.

4058595946. The leaders who do not love their country are not respected.

**Question Number : 4 Question Id : 4058591844 Question Type : MCQ Option Shuffling : Yes Is Question Mandatory : No Calculator : None Response Time : N.A Think Time : N.A Minimum Instruction Time : 0**

**Correct Marks : 1 Wrong Marks : 0.25**

Correct the given sentence:

The leaders which do not love their country are not respected.

**Options :**

4058595943. The leaders that do not love their country are not respected.

4058595944. The leaders which do not love his country is not respected.

4058595945. The leaders who do not love his country are not respected.

4058595946. The leaders who do not love their country are not respected.

**Question Number : 5 Question Id : 4058591845 Question Type : MCQ Option Shuffling : Yes Is Question Mandatory : No Calculator : None Response Time : N.A Think Time : N.A Minimum Instruction Time : 0**

**Correct Marks : 1 Wrong Marks : 0.25**

Choose the appropriate phrase to replace the underlined part.

During his long discourse he did not touch that point.

**Options :**

4058595947. touch into

4058595948. touch with

4058595949. touch on

4058595950. touch upon

**Question Number : 5 Question Id : 4058591845 Question Type : MCQ Option Shuffling : Yes Is Question Mandatory : No Calculator : None Response Time : N.A Think Time : N.A Minimum Instruction Time : 0**

**Correct Marks : 1 Wrong Marks : 0.25**

Choose the appropriate phrase to replace the underlined part.

During his long discourse he did not touch that point.

**Options :**

4058595947. touch into

4058595948. touch with

4058595949. touch on

4058595950. touch upon

**Question Number : 6 Question Id : 4058591846 Question Type : MCQ Option Shuffling : Yes Is Question Mandatory : No Calculator : None Response Time : N.A Think Time : N.A Minimum Instruction Time : 0**

**Correct Marks : 1 Wrong Marks : 0.25**

Choose the appropriate phrase to replace the underlined part.

This matter admits under no excuse.

**Options :**

4058595951. admits of

4058595952. admits over

4058595953. admits with

4058595954. admits in

**Question Number : 6 Question Id : 4058591846 Question Type : MCQ Option Shuffling : Yes Is Question Mandatory : No Calculator : None Response Time : N.A Think Time : N.A Minimum Instruction Time : 0**

**Correct Marks : 1 Wrong Marks : 0.25**

Choose the appropriate phrase to replace the underlined part.

This matter admits under no excuse.

**Options :**

4058595951. admits of

4058595952. admits over

4058595953. admits with

4058595954. admits in

**Question Number : 7 Question Id : 4058591847 Question Type : MCQ Option Shuffling : Yes Is Question Mandatory : No Calculator : None Response Time : N.A Think Time : N.A Minimum Instruction Time : 0**

**Correct Marks : 1 Wrong Marks : 0.25**

Choose the word with nearly the same meaning as the given word.

EXIGUOUS

**Options :**

4058595955. tall

4058595956. large

4058595957. abundant

4058595958. scanty

**Question Number : 7 Question Id : 4058591847 Question Type : MCQ Option Shuffling : Yes Is  
Question Mandatory : No Calculator : None Response Time : N.A Think Time : N.A Minimum  
Instruction Time : 0**

**Correct Marks : 1 Wrong Marks : 0.25**

Choose the word with nearly the same meaning as the given word.

EXIGUOUS

**Options :**

4058595955. tall

4058595956. large

4058595957. abundant

4058595958. scanty

**Question Number : 8 Question Id : 4058591848 Question Type : MCQ Option Shuffling : Yes Is  
Question Mandatory : No Calculator : None Response Time : N.A Think Time : N.A Minimum  
Instruction Time : 0**

**Correct Marks : 1 Wrong Marks : 0.25**

Choose the word with nearly the same meaning as the given word.

OFFICIOUS

**Options :**

4058595959. pushing

4058595960. modest

4058595961. stubborn

4058595962. mystic

**Question Number : 8 Question Id : 4058591848 Question Type : MCQ Option Shuffling : Yes Is Question Mandatory : No Calculator : None Response Time : N.A Think Time : N.A Minimum Instruction Time : 0**

**Correct Marks : 1 Wrong Marks : 0.25**

Choose the word with nearly the same meaning as the given word.

OFFICIOUS

**Options :**

4058595959. pushing

4058595960. modest

4058595961. stubborn

4058595962. mystic

**Question Number : 9 Question Id : 4058591849 Question Type : MCQ Option Shuffling : Yes Is Question Mandatory : No Calculator : None Response Time : N.A Think Time : N.A Minimum Instruction Time : 0**

**Correct Marks : 1 Wrong Marks : 0.25**

Choose the word with nearly the same meaning as the given word.

SOMBRE

**Options :**

4058595963. causing sleep

4058595964. squalid

4058595965. gloomy

4058595966. malicious

**Question Number : 9 Question Id : 4058591849 Question Type : MCQ Option Shuffling : Yes Is Question Mandatory : No Calculator : None Response Time : N.A Think Time : N.A Minimum Instruction Time : 0**

**Correct Marks : 1 Wrong Marks : 0.25**

Choose the word with nearly the same meaning as the given word.

SOMBRE

**Options :**

4058595963. causing sleep

4058595964. squalid

4058595965. gloomy

4058595966. malicious

**Question Number : 10 Question Id : 4058591850 Question Type : MCQ Option Shuffling : Yes Is Question Mandatory : No Calculator : None Response Time : N.A Think Time : N.A Minimum Instruction Time : 0**

**Correct Marks : 1 Wrong Marks : 0.25**

Give one word for the given expression.

That which cannot be done without.

**Options :**



4058595967. impracticable

4058595968. impossible

4058595969. unmanageable

4058595970. indispensable

**Question Number : 10 Question Id : 4058591850 Question Type : MCQ Option Shuffling : Yes Is Question Mandatory : No Calculator : None Response Time : N.A Think Time : N.A Minimum Instruction Time : 0**

**Correct Marks : 1 Wrong Marks : 0.25**

Give one word for the given expression.

That which cannot be done without.

**Options :**

4058595967. impracticable

4058595968. impossible

4058595969. unmanageable

4058595970. indispensable

**Question Number : 11 Question Id : 4058591851 Question Type : MCQ Option Shuffling : Yes Is Question Mandatory : No Calculator : None Response Time : N.A Think Time : N.A Minimum Instruction Time : 0**

**Correct Marks : 1 Wrong Marks : 0.25**

Give one word for the given expression.

Plants that draw sustenance from one another.

**Options :**

4058595971. parasitic

4058595972. symbiotic

4058595973. co-biotic

4058595974. subsistant

**Question Number : 11 Question Id : 4058591851 Question Type : MCQ Option Shuffling : Yes Is**

**Question Mandatory : No Calculator : None Response Time : N.A Think Time : N.A Minimum**

**Instruction Time : 0**

**Correct Marks : 1 Wrong Marks : 0.25**

Give one word for the given expression.

Plants that draw sustenance from one another.

**Options :**

4058595971. parasitic

4058595972. symbiotic

4058595973. co-biotic

4058595974. subsistant

**Question Number : 12 Question Id : 4058591852 Question Type : MCQ Option Shuffling : Yes Is**

**Question Mandatory : No Calculator : None Response Time : N.A Think Time : N.A Minimum**

**Instruction Time : 0**

**Correct Marks : 1 Wrong Marks : 0.25**

Give one word for the given expression.

One who goes into space.

**Options :**

4058595975. astronomer

4058595976. astrologer

4058595977. astronaut

4058595978. jetsetter

**Question Number : 12 Question Id : 4058591852 Question Type : MCQ Option Shuffling : Yes Is**

**Question Mandatory : No Calculator : None Response Time : N.A Think Time : N.A Minimum**

**Instruction Time : 0**

**Correct Marks : 1 Wrong Marks : 0.25**

Give one word for the given expression.

One who goes into space.

**Options :**

4058595975. astronomer

4058595976. astrologer

4058595977. astronaut

4058595978. jetsetter

**Question Number : 13 Question Id : 4058591853 Question Type : MCQ Option Shuffling : Yes Is**

**Question Mandatory : No Calculator : None Response Time : N.A Think Time : N.A Minimum**

**Instruction Time : 0**

**Correct Marks : 1 Wrong Marks : 0.25**

Give one word for the given expression.

Words inscribed on the tomb.

**Options :**

4058595979. eulogy

4058595980. epitaph

4058595981. epigraph

4058595982. epigram

**Question Number : 13 Question Id : 4058591853 Question Type : MCQ Option Shuffling : Yes Is**

**Question Mandatory : No Calculator : None Response Time : N.A Think Time : N.A Minimum**

**Instruction Time : 0**

**Correct Marks : 1 Wrong Marks : 0.25**

Give one word for the given expression.

Words inscribed on the tomb.

**Options :**

4058595979. eulogy

4058595980. epitaph

4058595981. epigraph

4058595982. epigram

**Question Number : 14 Question Id : 4058591854 Question Type : MCQ Option Shuffling : Yes Is**

**Question Mandatory : No Calculator : None Response Time : N.A Think Time : N.A Minimum**

**Instruction Time : 0**

**Correct Marks : 1 Wrong Marks : 0.25**

Fill in the blank with the appropriate word.

Divide these twelve apples \_\_\_\_\_ three boys standing on the road.

**Options :**

4058595983. to

4058595984. for

4058595985. between

4058595986. among

**Question Number : 14 Question Id : 4058591854 Question Type : MCQ Option Shuffling : Yes Is**

**Question Mandatory : No Calculator : None Response Time : N.A Think Time : N.A Minimum**

**Instruction Time : 0**

**Correct Marks : 1 Wrong Marks : 0.25**

Fill in the blank with the appropriate word.

Divide these twelve apples \_\_\_\_\_ three boys standing on the road.

**Options :**

4058595983. to

4058595984. for

4058595985. between

4058595986. among

**Question Number : 15 Question Id : 4058591855 Question Type : MCQ Option Shuffling : Yes Is**

**Question Mandatory : No Calculator : None Response Time : N.A Think Time : N.A Minimum**

**Instruction Time : 0**

**Correct Marks : 1 Wrong Marks : 0.25**

Fill in the blank with the appropriate word.

There were many interruptions \_\_\_\_\_ the chairman's speech.

**Options :**

4058595987. for

4058595988. during

4058595989. while

4058595990. at

**Question Number : 15 Question Id : 4058591855 Question Type : MCQ Option Shuffling : Yes Is**

**Question Mandatory : No Calculator : None Response Time : N.A Think Time : N.A Minimum**

**Instruction Time : 0**

**Correct Marks : 1 Wrong Marks : 0.25**

Fill in the blank with the appropriate word.

There were many interruptions \_\_\_\_\_ the chairman's speech.

**Options :**

4058595987. for

4058595988. during

4058595989. while

4058595990. at

**Question Number : 16 Question Id : 4058591856 Question Type : MCQ Option Shuffling : Yes Is Question Mandatory : No Calculator : None Response Time : N.A Think Time : N.A Minimum Instruction Time : 0**

**Correct Marks : 1 Wrong Marks : 0.25**

Fill in the blanks.

I was \_\_\_\_\_ soundly and \_\_\_\_\_ that a dog had entered the room.

**Options :**

4058595991. sleeps, dreamt

4058595992. sleeping, dreams

4058595993. slept, dreaming

4058595994. sleeping, dreamt

**Question Number : 16 Question Id : 4058591856 Question Type : MCQ Option Shuffling : Yes Is Question Mandatory : No Calculator : None Response Time : N.A Think Time : N.A Minimum Instruction Time : 0**

**Correct Marks : 1 Wrong Marks : 0.25**

Fill in the blanks.

I was \_\_\_\_\_ soundly and \_\_\_\_\_ that a dog had entered the room.

**Options :**

4058595991. sleeps, dreamt

4058595992. sleeping, dreams

4058595993. slept, dreaming

4058595994. sleeping, dreamt

**Question Number : 17 Question Id : 4058591857 Question Type : MCQ Option Shuffling : Yes Is Question Mandatory : No Calculator : None Response Time : N.A Think Time : N.A Minimum Instruction Time : 0**

**Correct Marks : 1 Wrong Marks : 0.25**

Fill in the blanks.

The sun shines \_\_\_\_\_ day and the moon \_\_\_\_\_ night.

**Options :**

4058595995. by, by

4058595996. in, by

4058595997. at, at

4058595998. by, in

**Question Number : 17 Question Id : 4058591857 Question Type : MCQ Option Shuffling : Yes Is Question Mandatory : No Calculator : None Response Time : N.A Think Time : N.A Minimum Instruction Time : 0**

**Correct Marks : 1 Wrong Marks : 0.25**

Fill in the blanks.

The sun shines \_\_\_\_\_ day and the moon \_\_\_\_\_ night.

**Options :**

4058595995. by, by

4058595996. in, by



4058595997. at, at

4058595998. by, in

**Question Number : 18 Question Id : 4058591858 Question Type : MCQ Option Shuffling : Yes Is  
Question Mandatory : No Calculator : None Response Time : N.A Think Time : N.A Minimum  
Instruction Time : 0**

**Correct Marks : 1 Wrong Marks : 0.25**

Fill in the blank.

Billiards \_\_\_\_\_ my favorite game.

**Options :**

4058595999. is

4058596000. are

4058596001. be

4058596002. has

**Question Number : 18 Question Id : 4058591858 Question Type : MCQ Option Shuffling : Yes Is  
Question Mandatory : No Calculator : None Response Time : N.A Think Time : N.A Minimum  
Instruction Time : 0**

**Correct Marks : 1 Wrong Marks : 0.25**

Fill in the blank.

Billiards \_\_\_\_\_ my favorite game.

**Options :**

4058595999. is

4058596000. are

4058596001. be

4058596002. has

**Question Number : 19 Question Id : 4058591859 Question Type : MCQ Option Shuffling : Yes Is**

**Question Mandatory : No Calculator : None Response Time : N.A Think Time : N.A Minimum**

**Instruction Time : 0**

**Correct Marks : 1 Wrong Marks : 0.25**

Choose the word similar in meaning to the given word.

'PROSPERITY'

**Options :**

4058596003. MULTIPLICITY

4058596004. JOURNALESE

4058596005. POSTULATE

4058596006. CONVEXITY

**Question Number : 19 Question Id : 4058591859 Question Type : MCQ Option Shuffling : Yes Is**

**Question Mandatory : No Calculator : None Response Time : N.A Think Time : N.A Minimum**

**Instruction Time : 0**

**Correct Marks : 1 Wrong Marks : 0.25**

Choose the word similar in meaning to the given word.

'PROSPERITY'

**Options :**

4058596003. MULTIPLICITY

4058596004. JOURNALESE

4058596005. POSTULATE

4058596006. CONVEXITY

**Question Number : 20 Question Id : 4058591860 Question Type : MCQ Option Shuffling : Yes Is Question Mandatory : No Calculator : None Response Time : N.A Think Time : N.A Minimum Instruction Time : 0**

**Correct Marks : 1 Wrong Marks : 0.25**

Choose the word similar in meaning to the given word:

'VANGUARD'

**Options :**

4058596007. VAMOOSE

4058596008. LEADER

4058596009. IMMODEST

4058596010. PRIG

**Question Number : 20 Question Id : 4058591860 Question Type : MCQ Option Shuffling : Yes Is Question Mandatory : No Calculator : None Response Time : N.A Think Time : N.A Minimum Instruction Time : 0**

**Correct Marks : 1 Wrong Marks : 0.25**

Choose the word similar in meaning to the given word:

'VANGUARD'

**Options :**

4058596007. VAMOOSE

4058596008. LEADER

4058596009. IMMODEST

4058596010. PRIG

**Question Number : 21 Question Id : 4058591861 Question Type : MCQ Option Shuffling : Yes Is Question Mandatory : No Calculator : None Response Time : N.A Think Time : N.A Minimum Instruction Time : 0**

**Correct Marks : 1 Wrong Marks : 0.25**

Choose the word similar in meaning to the given word.

'ROIL'

**Options :**

4058596011. VEX

4058596012. DREAMY

4058596013. PLUSH

4058596014. SCAMP

**Question Number : 21 Question Id : 4058591861 Question Type : MCQ Option Shuffling : Yes Is Question Mandatory : No Calculator : None Response Time : N.A Think Time : N.A Minimum Instruction Time : 0**

**Correct Marks : 1 Wrong Marks : 0.25**

Choose the word similar in meaning to the given word.

'ROIL'

**Options :**

4058596011. VEX

4058596012. DREAMY

4058596013. PLUSH

4058596014. SCAMP

**Question Number : 22 Question Id : 4058591862 Question Type : MCQ Option Shuffling : Yes Is Question Mandatory : No Calculator : None Response Time : N.A Think Time : N.A Minimum Instruction Time : 0**

**Correct Marks : 1 Wrong Marks : 0.25**

Choose the word opposite in meaning to the given word:

‘PAUCILOQUY’

**Options :**

4058596015. LOQUACITY

4058596016. TATTER

4058596017. TACTILE

4058596018. CONCOMITANCE

**Question Number : 22 Question Id : 4058591862 Question Type : MCQ Option Shuffling : Yes Is Question Mandatory : No Calculator : None Response Time : N.A Think Time : N.A Minimum Instruction Time : 0**

**Correct Marks : 1 Wrong Marks : 0.25**

Choose the word opposite in meaning to the given word:

‘PAUCILOQUY’

**Options :**

4058596015. LOQUACITY

4058596016. TATTER

4058596017. TACTILE

4058596018. CONCOMITANCE

**Question Number : 23 Question Id : 4058591863 Question Type : MCQ Option Shuffling : Yes Is Question Mandatory : No Calculator : None Response Time : N.A Think Time : N.A Minimum Instruction Time : 0**

**Correct Marks : 1 Wrong Marks : 0.25**

Choose the word opposite in meaning to the given word:

"BRITTLENESS"

**Options :**

4058596019. GIMCRACK

4058596020. COHERENCE

4058596021. VISCID

4058596022. APOSTATE

**Question Number : 23 Question Id : 4058591863 Question Type : MCQ Option Shuffling : Yes Is Question Mandatory : No Calculator : None Response Time : N.A Think Time : N.A Minimum Instruction Time : 0**

**Correct Marks : 1 Wrong Marks : 0.25**

Choose the word opposite in meaning to the given word:

"BRITTLENESS"

**Options :**

4058596019. GIMCRACK

4058596020. COHERENCE

4058596021. VISCID

4058596022. APOSTATE

**Question Number : 24 Question Id : 4058591864 Question Type : MCQ Option Shuffling : Yes Is Question Mandatory : No Calculator : None Response Time : N.A Think Time : N.A Minimum Instruction Time : 0**

**Correct Marks : 1 Wrong Marks : 0.25**

Choose the word opposite in meaning to the given word:

"PRIDE"

**Options :**

4058596023. CHILL

4058596024. SOLICIT

4058596025. HUMILITY

4058596026. HUM

**Question Number : 24 Question Id : 4058591864 Question Type : MCQ Option Shuffling : Yes Is Question Mandatory : No Calculator : None Response Time : N.A Think Time : N.A Minimum Instruction Time : 0**

**Correct Marks : 1 Wrong Marks : 0.25**

Choose the word opposite in meaning to the given word:

"PRIDE"

**Options :**

4058596023. CHILL

4058596024. SOLICIT

4058596025. HUMILITY

4058596026. HUM

**Question Number : 25 Question Id : 4058591865 Question Type : MCQ Option Shuffling : Yes Is Question Mandatory : No Calculator : None Response Time : N.A Think Time : N.A Minimum Instruction Time : 0**

**Correct Marks : 1 Wrong Marks : 0.25**

Spot the error in the given sentence:

The visitors complained on the poor accommdodation they were given

A

B

C

D

**Options :**

4058596027. A

4058596028. B

4058596029. C

4058596030. D

**Question Number : 25 Question Id : 4058591865 Question Type : MCQ Option Shuffling : Yes Is Question Mandatory : No Calculator : None Response Time : N.A Think Time : N.A Minimum Instruction Time : 0**

**Correct Marks : 1 Wrong Marks : 0.25**

Spot the error in the given sentence:

The visitors complained on the poor accommdodation they were given

A

B

C

D



**Options :**

4058596027. A

4058596028. B

4058596029. C

4058596030. D

**Question Number : 26 Question Id : 4058591866 Question Type : MCQ Option Shuffling : Yes Is Question Mandatory : No Calculator : None Response Time : N.A Think Time : N.A Minimum Instruction Time : 0**

**Correct Marks : 1 Wrong Marks : 0.25**

Spot the error in the given sentence:

He will not   escape punishment unless   he does not speak   the truth

A

B

C

D

**Options :**

4058596031. A

4058596032. B

4058596033. C

4058596034. D

**Question Number : 26 Question Id : 4058591866 Question Type : MCQ Option Shuffling : Yes Is Question Mandatory : No Calculator : None Response Time : N.A Think Time : N.A Minimum Instruction Time : 0**

**Correct Marks : 1 Wrong Marks : 0.25**

Spot the error in the given sentence:

He will not   escape punishment unless   he does not speak   the truth

A

B

C

D

**Options :**

4058596031. A

4058596032. B

4058596033. C

4058596034. D

**Question Number : 27 Question Id : 4058591867 Question Type : MCQ Option Shuffling : Yes Is  
Question Mandatory : No Calculator : None Response Time : N.A Think Time : N.A Minimum  
Instruction Time : 0**

**Correct Marks : 1 Wrong Marks : 0.25**

Spot the error in the given sentence:

Her and the other   members of the group   spoke after   their final victory.

A

B

C

D

**Options :**

4058596035. A

4058596036. B

4058596037. C

4058596038. D

**Question Number : 27 Question Id : 4058591867 Question Type : MCQ Option Shuffling : Yes Is**

**Question Mandatory : No Calculator : None Response Time : N.A Think Time : N.A Minimum**

**Instruction Time : 0**

**Correct Marks : 1 Wrong Marks : 0.25**

Spot the error in the given sentence:

Her and the other members of the group spoke after their final victory.

A

B

C

D

**Options :**

4058596035. A

4058596036. B

4058596037. C

4058596038. D

**Question Number : 28 Question Id : 4058591868 Question Type : MCQ Option Shuffling : Yes Is**

**Question Mandatory : No Calculator : None Response Time : N.A Think Time : N.A Minimum**

**Instruction Time : 0**

**Correct Marks : 1 Wrong Marks : 0.25**

Choose the most appropriate option for the following idiomatic expression :

Instead of wasting time in discussions, kindly get down to brass tacks.

**Options :**

4058596039. to utilize time.

4058596040. to make all possible efforts.

4058596041. to deal with the matter up-front.

4058596042. to know a thing thoroughly.

**Question Number : 28 Question Id : 4058591868 Question Type : MCQ Option Shuffling : Yes Is Question Mandatory : No Calculator : None Response Time : N.A Think Time : N.A Minimum Instruction Time : 0**

**Correct Marks : 1 Wrong Marks : 0.25**

Choose the most appropriate option for the following idiomatic expression :

Instead of wasting time in discussions, kindly get down to brass tacks.

**Options :**

4058596039. to utilize time.

4058596040. to make all possible efforts.

4058596041. to deal with the matter up-front.

4058596042. to know a thing thoroughly.

**Question Number : 29 Question Id : 4058591869 Question Type : MCQ Option Shuffling : Yes Is Question Mandatory : No Calculator : None Response Time : N.A Think Time : N.A Minimum Instruction Time : 0**

**Correct Marks : 1 Wrong Marks : 0.25**

Choose the most appropriate option for the following idiomatic expression:

'Will-o-the-Wisp'

**Options :**

4058596043. yearning of the spirit.

4058596044. acting in a foolish way.

4058596045. anything which eludes or deceives.

4058596046. to have desires unbacked by effort.

**Question Number : 29 Question Id : 4058591869 Question Type : MCQ Option Shuffling : Yes Is Question Mandatory : No Calculator : None Response Time : N.A Think Time : N.A Minimum Instruction Time : 0**

**Correct Marks : 1 Wrong Marks : 0.25**

Choose the most appropriate option for the following idiomatic expression:

'Will-o-the-Wisp'

**Options :**

4058596043. yearning of the spirit.

4058596044. acting in a foolish way.

4058596045. anything which eludes or deceives.

4058596046. to have desires unbacked by effort.

**Question Number : 30 Question Id : 4058591870 Question Type : MCQ Option Shuffling : Yes Is Question Mandatory : No Calculator : None Response Time : N.A Think Time : N.A Minimum Instruction Time : 0**

**Correct Marks : 1 Wrong Marks : 0.25**

Choose the most appropriate option for the following idiomatic expression.

Children and fools should not play with edged tools.

**Options :**

4058596047. matter that requires delicate handling.

4058596048. to act under pretence.

4058596049. to disregard one's promises or engagements.

4058596050. to take liberty to which one has no rights.

**Question Number : 30 Question Id : 4058591870 Question Type : MCQ Option Shuffling : Yes Is Question Mandatory : No Calculator : None Response Time : N.A Think Time : N.A Minimum Instruction Time : 0**

**Correct Marks : 1 Wrong Marks : 0.25**

Choose the most appropriate option for the following idiomatic expression.

Children and fools should not play with edged tools.

**Options :**

4058596047. matter that requires delicate handling.

4058596048. to act under pretence.

4058596049. to disregard one's promises or engagements.

4058596050. to take liberty to which one has no rights.

**Question Number : 31 Question Id : 4058591871 Question Type : MCQ Option Shuffling : Yes Is Question Mandatory : No Calculator : None Response Time : N.A Think Time : N.A Minimum Instruction Time : 0**

**Correct Marks : 1 Wrong Marks : 0.25**

Choose the correct spelling:

**Options :**

4058596051. COUNTERFIAT

4058596052. CONTOURFIET

4058596053. COUNTERFEIT

4058596054. COUNTERFIET

**Question Number : 31 Question Id : 4058591871 Question Type : MCQ Option Shuffling : Yes Is Question Mandatory : No Calculator : None Response Time : N.A Think Time : N.A Minimum Instruction Time : 0**

**Correct Marks : 1 Wrong Marks : 0.25**

Choose the correct spelling:

**Options :**

4058596051. COUNTERFIAT

4058596052. CONTOURFIET

4058596053. COUNTERFEIT

4058596054. COUNTERFIET

**Question Number : 32 Question Id : 4058591872 Question Type : MCQ Option Shuffling : Yes Is Question Mandatory : No Calculator : None Response Time : N.A Think Time : N.A Minimum Instruction Time : 0**

**Correct Marks : 1 Wrong Marks : 0.25**

Choose the correct spelling :

**Options :**

4058596055. PLUTOCRAT

4058596056. PLOTUCRAT

4058596057. PLUTOCRET

4058596058. PLUTOCREAT

**Question Number : 32 Question Id : 4058591872 Question Type : MCQ Option Shuffling : Yes Is Question Mandatory : No Calculator : None Response Time : N.A Think Time : N.A Minimum Instruction Time : 0**

**Correct Marks : 1 Wrong Marks : 0.25**

Choose the correct spelling :

**Options :**

4058596055. PLUTOCRAT

4058596056. PLOTUCRAT

4058596057. PLUTOCRET

4058596058. PLUTOCREAT

**Question Number : 33 Question Id : 4058591873 Question Type : MCQ Option Shuffling : Yes Is Question Mandatory : No Calculator : None Response Time : N.A Think Time : N.A Minimum Instruction Time : 0**

**Correct Marks : 1 Wrong Marks : 0.25**

Choose the correct spelling :

**Options :**

4058596059. PRIMOGEANITURE

4058596060. PREMOGENIATURE

4058596061. PREMOGENITURE

4058596062. PRIMOGENITURE



**Question Number : 33 Question Id : 4058591873 Question Type : MCQ Option Shuffling : Yes Is Question Mandatory : No Calculator : None Response Time : N.A Think Time : N.A Minimum Instruction Time : 0**

**Correct Marks : 1 Wrong Marks : 0.25**

**Choose the correct spelling :**

**Options :**

4058596059. PRIMOGEANITURE

4058596060. PREMOGENIATURE

4058596061. PREMOGENITURE

4058596062. PRIMOGENITURE

<b>Sub-Section Number :</b>	2
<b>Sub-Section Id :</b>	405859123
<b>Question Shuffling Allowed :</b>	No
<b>Is Section Default? :</b>	null

**Question Id : 4058591874 Question Type : COMPREHENSION Sub Question Shuffling Allowed : Yes Group Comprehension Questions : No Question Pattern Type : NonMatrix Calculator : None Response Time : N.A Think Time : N.A Minimum Instruction Time : 0**

**Question Numbers : (34 to 39)**

Question Label : Comprehension

Read the given passage and answer the question that follows:

Biological classification of plants and animals was first proposed by Aristotle on the basis of simple morphological characters. Linnaeus later classified all living organisms into two kingdoms - Plantae and Animalia. Whittaker proposed an elaborate five kingdom classification - Monera, Protista, Fungi, Plantae and Animalia. The main criteria of the five kingdom classification were cell structure, body organisation, mode of nutrition and reproduction, and phylogenetic relationships.

In the five kingdom classification, bacteria are included in Kingdom Monera. Bacteria are cosmopolitan in distribution. These organisms show the most extensive metabolic diversity. Bacteria may be autotrophic or heterotrophic in their mode of nutrition. Kingdom Protista includes all single-celled eukaryotes such as Chrysophytes, Dinoflagellates, Euglenoids, Slime-moulds and Protozoans. Protists have defined nucleus and other membrane bound organelles. They reproduce both asexually and sexually. Members of Kingdom Fungi show a great diversity in structures and habitat. Most Fungi are saprophytic in their mode of nutrition. They show asexual and sexual reproduction. Phycomycetes, Ascomycetes, Basidiomycetes and Deuteromycetes are the four classes under this kingdom. The plantae includes all eukaryotic chlorophyll-containing organisms. Algae, bryophytes, pteridophytes, gymnosperms and angiosperms are included in this group. The life cycle of plants exhibit alternation of generations - gametophytic and sporophytic generations. The heterotrophic eukaryotic, multicellular organisms lacking a cell wall are included in the kingdom Animalia. The mode of nutrition of these organisms is holozoic. They reproduce mostly by the sexual mode. Some acellular organisms like viruses and viroids as well as the lichens are not included in the five kingdom system of classification.

### Sub questions

**Question Number : 34 Question Id : 4058591875 Question Type : MCQ Option Shuffling : Yes Is Question Mandatory : No Calculator : None Response Time : N.A Think Time : N.A Minimum Instruction Time : 0**

**Correct Marks : 1 Wrong Marks : 0.25**

'Bacteria are cosmopolitan in distribution'. The meaning of this statement is-

**Options :**

4058596063. Bacteria exist in metro or large cities.

4058596064. Bacteria show most extensive metabolic diversity.

4058596065. Bacteria exist in a wide range of places across all countries.

4058596066. Kingdom Monera is a vast Kingdom.

**Question Number : 35 Question Id : 4058591876 Question Type : MCQ Option Shuffling : Yes Is Question Mandatory : No Calculator : None Response Time : N.A Think Time : N.A Minimum Instruction Time : 0**

**Correct Marks : 1 Wrong Marks : 0.25**

The five kingdom classification of organisms was based on -

**Options :**

4058596067. morphological characteristics and phylogenetic relationships.

4058596068. cell structure and mode of nutrition and phylogenetic relationships.

4058596069. cell structure and body organisation.

4058596070. mode of nutrition and reproduction.

**Question Number : 36 Question Id : 4058591877 Question Type : MCQ Option Shuffling : Yes Is Question Mandatory : No Calculator : None Response Time : N.A Think Time : N.A Minimum Instruction Time : 0**

**Correct Marks : 1 Wrong Marks : 0.25**

The organisms showing 'holozoic' mode of nutrition belong to the kingdom-

**Options :**

4058596071. Monera

4058596072. Fungi

4058596073. Plantae

4058596074. Animalia

**Question Number : 37 Question Id : 4058591878 Question Type : MCQ Option Shuffling : Yes Is Question Mandatory : No Calculator : None Response Time : N.A Think Time : N.A Minimum Instruction Time : 0**

**Correct Marks : 1 Wrong Marks : 0.25**

Choose the correct statement-

**Options :**

4058596075. Kingdom Protista includes all the multi-celled eukaryotes.

4058596076. Fungi show autotrophic mode of nutrition.

4058596077. Members of Kingdom Animalia are heterotrophic as well as saprophytic.

4058596078. Plantae include eukaryotic chlorophyll containing organisms.

**Question Number : 38 Question Id : 4058591879 Question Type : MCQ Option Shuffling : Yes Is Question Mandatory : No Calculator : None Response Time : N.A Think Time : N.A Minimum Instruction Time : 0**

**Correct Marks : 1 Wrong Marks : 0.25**

A chlorophyll containing organism is -

**Options :**

4058596079. bacteria

4058596080. slime-mould

4058596081. algae

4058596082. virus

**Question Number : 39 Question Id : 4058591880 Question Type : MCQ Option Shuffling : Yes Is Question Mandatory : No Calculator : None Response Time : N.A Think Time : N.A Minimum Instruction Time : 0**

**Correct Marks : 1 Wrong Marks : 0.25**

Bacteria show most extensive metabolic diversity -

**Options :**

4058596083. because they are cosmopolitan in distribution.

4058596084. because they are single celled organisms.

4058596085. because they belong to the Kingdom Monera.

4058596086. because they may be autotrophic or heterotrophic in their mode of nutrition.

**Question Id : 4058591874 Question Type : COMPREHENSION Sub Question Shuffling Allowed : Yes Group Comprehension Questions : No Question Pattern Type : NonMatrix Calculator : None Response Time : N.A Think Time : N.A Minimum Instruction Time : 0**

**Question Numbers : (34 to 39)**

Question Label : Comprehension

Read the given passage and answer the question that follows:

Biological classification of plants and animals was first proposed by Aristotle on the basis of simple morphological characters. Linnaeus later classified all living organisms into two kingdoms - Plantae and Animalia. Whittaker proposed an elaborate five kingdom classification - Monera, Protista, Fungi, Plantae and Animalia. The main criteria of the five kingdom classification were cell structure, body organisation, mode of nutrition and reproduction, and phylogenetic relationships.

In the five kingdom classification, bacteria are included in Kingdom Monera. Bacteria are cosmopolitan in distribution. These organisms show the most extensive metabolic diversity. Bacteria may be autotrophic or heterotrophic in their mode of nutrition. Kingdom Protista includes all single-celled eukaryotes such as Chrysophytes, Dinoflagellates, Euglenoids, Slime-moulds and Protozoans. Protists have defined nucleus and other membrane bound organelles. They reproduce both asexually and sexually. Members of Kingdom Fungi show a great diversity in structures and habitat. Most Fungi are saprophytic in their mode of nutrition. They show asexual and sexual reproduction. Phycomycetes, Ascomycetes, Basidiomycetes and Deuteromycetes are the four classes under this kingdom. The plantae includes all eukaryotic chlorophyll-containing organisms. Algae, bryophytes, pteridophytes, gymnosperms and angiosperms are included in this group. The life cycle of plants exhibit alternation of generations - gametophytic and sporophytic generations. The heterotrophic eukaryotic, multicellular organisms lacking a cell wall are included in the kingdom Animalia. The mode of nutrition of these organisms is holozoic. They reproduce mostly by the sexual mode. Some acellular organisms like viruses and viroids as well as the lichens are not included in the five kingdom system of classification.

### Sub questions

**Question Number : 34 Question Id : 4058591875 Question Type : MCQ Option Shuffling : Yes Is Question Mandatory : No Calculator : None Response Time : N.A Think Time : N.A Minimum Instruction Time : 0**

**Correct Marks : 1 Wrong Marks : 0.25**

'Bacteria are cosmopolitan in distribution'. The meaning of this statement is-

**Options :**

4058596063. Bacteria exist in metro or large cities.

4058596064. Bacteria show most extensive metabolic diversity.

4058596065. Bacteria exist in a wide range of places across all countries.

4058596066. Kingdom Monera is a vast Kingdom.

**Question Number : 35 Question Id : 4058591876 Question Type : MCQ Option Shuffling : Yes Is Question Mandatory : No Calculator : None Response Time : N.A Think Time : N.A Minimum Instruction Time : 0**

**Correct Marks : 1 Wrong Marks : 0.25**

The five kingdom classification of organisms was based on -

**Options :**

4058596067. morphological characteristics and phylogenetic relationships.

4058596068. cell structure and mode of nutrition and phylogenetic relationships.

4058596069. cell structure and body organisation.

4058596070. mode of nutrition and reproduction.

**Question Number : 36 Question Id : 4058591877 Question Type : MCQ Option Shuffling : Yes Is Question Mandatory : No Calculator : None Response Time : N.A Think Time : N.A Minimum Instruction Time : 0**

**Correct Marks : 1 Wrong Marks : 0.25**

The organisms showing 'holozoic' mode of nutrition belong to the kingdom-

**Options :**

4058596071. Monera

4058596072. Fungi

4058596073. Plantae

4058596074. Animalia

**Question Number : 37 Question Id : 4058591878 Question Type : MCQ Option Shuffling : Yes Is Question Mandatory : No Calculator : None Response Time : N.A Think Time : N.A Minimum Instruction Time : 0**

**Correct Marks : 1 Wrong Marks : 0.25**

Choose the correct statement-

**Options :**

4058596075. Kingdom Protista includes all the multi-celled eukaryotes.

4058596076. Fungi show autotrophic mode of nutrition.

4058596077. Members of Kingdom Animalia are heterotrophic as well as saprophytic.

4058596078. Plantae include eukaryotic chlorophyll containing organisms.

**Question Number : 38 Question Id : 4058591879 Question Type : MCQ Option Shuffling : Yes Is Question Mandatory : No Calculator : None Response Time : N.A Think Time : N.A Minimum Instruction Time : 0**

**Correct Marks : 1 Wrong Marks : 0.25**

A chlorophyll containing organism is -

**Options :**

4058596079. bacteria

4058596080. slime-mould

4058596081. algae

4058596082. virus



**Question Number : 39 Question Id : 4058591880 Question Type : MCQ Option Shuffling : Yes Is Question Mandatory : No Calculator : None Response Time : N.A Think Time : N.A Minimum Instruction Time : 0**

**Correct Marks : 1 Wrong Marks : 0.25**

**Bacteria show most extensive metabolic diversity -**

**Options :**

4058596083. because they are cosmopolitan in distribution.

4058596084. because they are single celled organisms.

4058596085. because they belong to the Kingdom Monera.

4058596086. because they may be autotrophic or heterotrophic in their mode of nutrition.

<b>Sub-Section Number :</b>	3
<b>Sub-Section Id :</b>	405859124
<b>Question Shuffling Allowed :</b>	No
<b>Is Section Default? :</b>	null

**Question Id : 4058591881 Question Type : COMPREHENSION Sub Question Shuffling Allowed : Yes Group Comprehension Questions : No Question Pattern Type : NonMatrix Calculator : None Response Time : N.A Think Time : N.A Minimum Instruction Time : 0**

**Question Numbers : (40 to 45)**

Question Label : Comprehension

Read the given passage and answer the question that follows:

Who decides which constituency is to be reserved? On what basis is this decision taken? This decision is taken by an independent body called the Delimitation Commission. The Delimitation Commission is appointed by the President of India and works in collaboration with the Election Commission of India. It is appointed for the purpose of drawing up the boundaries of constituencies all over the country. A quota of constituencies to be reserved in each State is fixed depending on the proportion of SC or ST in that State. After drawing the boundaries, the Delimitation Commission looks at the composition of population in each constituency. Those constituencies that have the highest proportion of Scheduled Tribe population are reserved for ST. In the case of Scheduled Castes, the Delimitation Commission looks at two things. It picks constituencies that have higher proportion of Scheduled Caste population. But it also spreads these constituencies in different regions of the State. This is done because the Scheduled Caste population is generally spread evenly throughout the country. These reserved constituencies can be rotated each time the Delimitation exercise is undertaken.

### Sub questions

**Question Number : 40 Question Id : 4058591882 Question Type : MCQ Option Shuffling : Yes Is**

**Question Mandatory : No Calculator : None Response Time : N.A Think Time : N.A Minimum**

**Instruction Time : 0**

**Correct Marks : 1 Wrong Marks : 0.25**

Choose the correct statement -

**Options :**

4058596087.  The Delimitation Commission draws up the boundaries of Constitution all over the country.

4058596088.  The Delimitation Commission works in collaboration with the Election Commission of India.

4058596089.  A quota of constituencies to be reserved in each state is fixed.

4058596090.  Delimitation Commission clustures the SC/ST constituencies.

**Question Number : 41 Question Id : 4058591883 Question Type : MCQ Option Shuffling : Yes Is**

**Question Mandatory : No Calculator : None Response Time : N.A Think Time : N.A Minimum**

**Instruction Time : 0**

**Correct Marks : 1 Wrong Marks : 0.25**

Delimitation Commission divides the constituencies -

**Options :**

4058596091. on the basis of a quota for each state.

4058596092. on the basis of the composition of population in each constituency.

4058596093. on the advice of the Election Commission of India.

4058596094. on the directions of the President of India.

**Question Number : 42 Question Id : 4058591884 Question Type : MCQ Option Shuffling : Yes Is**

**Question Mandatory : No Calculator : None Response Time : N.A Think Time : N.A Minimum**

**Instruction Time : 0**

**Correct Marks : 1 Wrong Marks : 0.25**

Choose the correct statements -

**Options :**

4058596095. Delimitation Commission is governed by the Election Commission of India.

4058596096. The constituencies that have Scheduled Tribe population are reserved for ST.

In case of Scheduled Caste, the constituencies are spread in different regions of the  
4058596097. State.

4058596098. The reserved constituencies are fixed as per our Constitution.

**Question Number : 43 Question Id : 4058591885 Question Type : MCQ Option Shuffling : Yes Is**

**Question Mandatory : No Calculator : None Response Time : N.A Think Time : N.A Minimum**

**Instruction Time : 0**

**Correct Marks : 1 Wrong Marks : 0.25**

The meaning of the word 'delimit' is -

**Options :**

4058596099. to describe, draw or explain in detail.

4058596100. to decide what the limits are.

4058596101. to free from boundaries.

4058596102. involving or showing careful consideration.

**Question Number : 44 Question Id : 4058591886 Question Type : MCQ Option Shuffling : Yes Is**

**Question Mandatory : No Calculator : None Response Time : N.A Think Time : N.A Minimum**

**Instruction Time : 0**

**Correct Marks : 1 Wrong Marks : 0.25**

A synonym for the word 'quota' is

**Options :**

4058596103. addition

4058596104. acquisition

4058596105. quantity

4058596106. apportionment

**Question Number : 45 Question Id : 4058591887 Question Type : MCQ Option Shuffling : Yes Is**

**Question Mandatory : No Calculator : None Response Time : N.A Think Time : N.A Minimum**

**Instruction Time : 0**

**Correct Marks : 1 Wrong Marks : 0.25**

The distribution of Scheduled Castes is -

**Options :**

4058596107. concentrated in different regions of states.

4058596108. even throughout the country.

4058596109. dependent upon the proportion of Schedule Tribes in the country.

4058596110. decides which constituency is to be reserved.

**Question Id : 4058591881 Question Type : COMPREHENSION Sub Question Shuffling Allowed :  
Yes Group Comprehension Questions : No Question Pattern Type : NonMatrix Calculator :  
None Response Time : N.A Think Time : N.A Minimum Instruction Time : 0**

**Question Numbers : (40 to 45)**

Question Label : Comprehension

Read the given passage and answer the question that follows:

Who decides which constituency is to be reserved? On what basis is this decision taken? This decision is taken by an independent body called the Delimitation Commission. The Delimitation Commission is appointed by the President of India and works in collaboration with the Election Commission of India. It is appointed for the purpose of drawing up the boundaries of constituencies all over the country. A quota of constituencies to be reserved in each State is fixed depending on the proportion of SC or ST in that State. After drawing the boundaries, the Delimitation Commission looks at the composition of population in each constituency. Those constituencies that have the highest proportion of Scheduled Tribe population are reserved for ST. In the case of Scheduled Castes, the Delimitation Commission looks at two things. It picks constituencies that have higher proportion of Scheduled Caste population. But it also spreads these constituencies in different regions of the State. This is done because the Scheduled Caste population is generally spread evenly throughout the country. These reserved constituencies can be rotated each time the Delimitation exercise is undertaken.

**Sub questions**

**Question Number : 40 Question Id : 4058591882 Question Type : MCQ Option Shuffling : Yes Is  
Question Mandatory : No Calculator : None Response Time : N.A Think Time : N.A Minimum  
Instruction Time : 0**

**Correct Marks : 1 Wrong Marks : 0.25**

Choose the correct statement -

**Options :**

4058596087. The Delimitation Commission draws up the boundaries of Constitution all over the country.

4058596088. The Delimitation Commission works in collaboration with the Election Commission of India.

4058596089. A quota of constituencies to be reserved in each state is fixed.

4058596090. Delimitation Commission clusters the SC/ST constituencies.

**Question Number : 41 Question Id : 4058591883 Question Type : MCQ Option Shuffling : Yes Is Question Mandatory : No Calculator : None Response Time : N.A Think Time : N.A Minimum Instruction Time : 0**

**Correct Marks : 1 Wrong Marks : 0.25**

Delimitation Commission divides the constituencies -

**Options :**

4058596091. on the basis of a quota for each state.

4058596092. on the basis of the composition of population in each constituency.

4058596093. on the advice of the Election Commission of India.

4058596094. on the directions of the President of India.

**Question Number : 42 Question Id : 4058591884 Question Type : MCQ Option Shuffling : Yes Is Question Mandatory : No Calculator : None Response Time : N.A Think Time : N.A Minimum Instruction Time : 0**

**Correct Marks : 1 Wrong Marks : 0.25**

Choose the correct statements -

**Options :**

4058596095. Delimitation Commission is governed by the Election Commission of India.

4058596096. The constituencies that have Scheduled Tribe population are reserved for ST.

In case of Scheduled Caste, the constituencies are spread in different regions of the  
4058596097. State.

4058596098. The reserved constituencies are fixed as per our Constitution.

**Question Number : 43 Question Id : 4058591885 Question Type : MCQ Option Shuffling : Yes Is  
Question Mandatory : No Calculator : None Response Time : N.A Think Time : N.A Minimum  
Instruction Time : 0**

**Correct Marks : 1 Wrong Marks : 0.25**

The meaning of the word 'delimit' is -

**Options :**

4058596099. to describe, draw or explain in detail.

4058596100. to decide what the limits are.

4058596101. to free from boundaries.

4058596102. involving or showing careful consideration.

**Question Number : 44 Question Id : 4058591886 Question Type : MCQ Option Shuffling : Yes Is  
Question Mandatory : No Calculator : None Response Time : N.A Think Time : N.A Minimum  
Instruction Time : 0**

**Correct Marks : 1 Wrong Marks : 0.25**

A synonym for the word 'quota' is

**Options :**

4058596103. addition

4058596104. acquisition

4058596105. quantity

4058596106. apportionment

**Question Number : 45 Question Id : 4058591887 Question Type : MCQ Option Shuffling : Yes Is Question Mandatory : No Calculator : None Response Time : N.A Think Time : N.A Minimum Instruction Time : 0**

**Correct Marks : 1 Wrong Marks : 0.25**

The distribution of Scheduled Castes is -

**Options :**

4058596107. concentrated in different regions of states.

4058596108. even throughout the country.

4058596109. dependent upon the proportion of Schedule Tribes in the country.

4058596110. decides which constituency is to be reserved.

## Case Study

<b>Section Id :</b>	405859109
<b>Section Number :</b>	2
<b>Section type :</b>	Online
<b>Mandatory or Optional :</b>	Mandatory



<b>Number of Questions :</b>	5
<b>Number of Questions to be attempted :</b>	5
<b>Section Marks :</b>	25
<b>Enable Mark as Answered Mark for Review and Clear Response :</b>	Yes
<b>Maximum Instruction Time :</b>	0
<b>Sub-Section Number :</b>	1
<b>Sub-Section Id :</b>	405859125
<b>Question Shuffling Allowed :</b>	No
<b>Is Section Default? :</b>	null

**Question Id : 4058591888 Question Type : COMPREHENSION Sub Question Shuffling Allowed :  
Yes Group Comprehension Questions : No Question Pattern Type : NonMatrix Calculator :  
None Response Time : N.A Think Time : N.A Minimum Instruction Time : 0**

**Question Numbers : (46 to 50)**

Question Label : Comprehension

Read the given passage and answer the questions that follow-

Drug major Novartis is planning to divest its Indian eyecare portfolio to Mumbai-based JB Chemicals, in a deal estimated to be around ₹ 1,000 crore.

The Novartis spin-off will join the list of several MNCs pruning their drug portfolios and reducing exposure to the Indian market, due to multiple reasons, including increased competition and tough business environment.

Sources say the move fits well with the MNC's strategy to capitalize its ophthalmic therapy, while for JB Chemicals it will offer an entry into a growing business segment.

Over last few months, global Big Pharma have been divesting their branded generic portfolio to domestic companies and rationalizing their portfolio by selling off key assets.

Further, large Indian players are doubling down on India as an attractive diversification from a US generics market beaten up heavily by price erosion. As a consequence, several deals were inked where Indian companies snapped up high-growth brands from MNCs and local sellers at attractive valuations.

The deal is expected to be announced over the next few days. Emails sent across to Novartis and JB Chemicals did not elicit a response.

Ageing population and increasing access to eyecare, especially in emerging markets, is a strong growth opportunity for drug companies. The demand for eyecare is expected to increase significantly as people spend more time in front of tablets and mobile devices.

Sources added that existing eyecare portfolio in India of Novartis is understood to be around ₹ 400-500 crore, including certain brands transferred from eyecare biggie Alcon, when it was spun off from Novartis. In 2019 under a global restructuring move, Novartis had spun off Alcon into a standalone business to focus on its core area of pharmaceuticals. Alcon is a global leader in eyecare, offering solutions to issues like cataracts, glaucoma, retinal diseases and refractive errors.

The stock market seems to have got a wind of the potential deal. Over the last few days, scrips of both Novartis India and JB Chem have witnessed a spurt. On December 7, JB Chem traded on a new 52-week high at ₹ 1555, while Novartis India stock closed ₹ 706 on Friday.

Further, Novartis had last year announced the transfer of sales & distribution of a few of its established medicines, including the Voveran and Calcium range to Dr.Reddy's.

### Sub questions

Question Number : 46 Question Id : 4058591889 Question Type : MCQ Option Shuffling : Yes Is

Question Mandatory : No Calculator : None Response Time : N.A Think Time : N.A Minimum

Instruction Time : 0

Correct Marks : 1 Wrong Marks : 0.25

Choose the correct statement:

Options :

4058596111. India presents a tough business environment to drug companies.

Over the last few months, global Big Pharma have been investing their branded  
4058596112. generic portfolio.

The deal between Novartis and JB Chemicals is expected to be announced over the  
4058596113. next few weeks.

The demand for spectacles is expected to increase significantly as people spend  
4058596114. more time in front of tablets and mobile devices.

**Question Number : 47 Question Id : 4058591890 Question Type : MCQ Option Shuffling : Yes Is  
Question Mandatory : No Calculator : None Response Time : N.A Think Time : N.A Minimum  
Instruction Time : 0**

**Correct Marks : 1 Wrong Marks : 0.25**

One of the big companies in eyecare is -

**Options :**

4058596115. JB Chemicals

4058596116. Alcon

4058596117. Novartis

4058596118. Big Pharma

**Question Number : 48 Question Id : 4058591891 Question Type : MCQ Option Shuffling : Yes Is  
Question Mandatory : No Calculator : None Response Time : N.A Think Time : N.A Minimum  
Instruction Time : 0**

**Correct Marks : 1 Wrong Marks : 0.25**

The sales and distribution of the medicine 'Voveran' is done by -

**Options :**

4058596119. Novartis

4058596120. JB Chemicals

4058596121. Alcon

4058596122. Dr. Reddy's

**Question Number : 49 Question Id : 4058591892 Question Type : MCQ Option Shuffling : Yes Is**

**Question Mandatory : No Calculator : None Response Time : N.A Think Time : N.A Minimum**

**Instruction Time : 0**

**Correct Marks : 1 Wrong Marks : 0.25**

Fill in the blank:

The volcano is expected to \_\_\_\_\_ clouds of steam and ash high into the air in a couple of days.

**Options :**

4058596123. divest

4058596124. spurt

4058596125. capitalise

4058596126. elicit

**Question Number : 50 Question Id : 4058591893 Question Type : MCQ Option Shuffling : Yes Is**

**Question Mandatory : No Calculator : None Response Time : N.A Think Time : N.A Minimum**

**Instruction Time : 0**

**Correct Marks : 1 Wrong Marks : 0.25**

The word closest in meaning to 'pruning' is

**Options :**

4058596127. adding

4058596128. trimming

4058596129. increasing

4058596130. sweetening

**Question Id : 4058591888 Question Type : COMPREHENSION Sub Question Shuffling Allowed :**

**Yes Group Comprehension Questions : No Question Pattern Type : NonMatrix Calculator :**

**None Response Time : N.A Think Time : N.A Minimum Instruction Time : 0**

**Question Numbers : (46 to 50)**

Question Label : Comprehension

Read the given passage and answer the questions that follow-

Drug major Novartis is planning to divest its Indian eyecare portfolio to Mumbai-based JB Chemicals, in a deal estimated to be around ₹ 1,000 crore.

The Novartis spin-off will join the list of several MNCs pruning their drug portfolios and reducing exposure to the Indian market, due to multiple reasons, including increased competition and tough business environment.

Sources say the move fits well with the MNC's strategy to capitalize its ophthalmic therapy, while for JB Chemicals it will offer an entry into a growing business segment.

Over last few months, global Big Pharma have been divesting their branded generic portfolio to domestic companies and rationalizing their portfolio by selling off key assets.

Further, large Indian players are doubling down on India as an attractive diversification from a US generics market beaten up heavily by price erosion. As a consequence, several deals were inked where Indian companies snapped up high-growth brands from MNCs and local sellers at attractive valuations.

The deal is expected to be announced over the next few days. Emails sent across to Novartis and JB Chemicals did not elicit a response.

Ageing population and increasing access to eyecare, especially in emerging markets, is a strong growth opportunity for drug companies. The demand for eyecare is expected to increase significantly as people spend more time in front of tablets and mobile devices.

Sources added that existing eyecare portfolio in India of Novartis is understood to be around ₹ 400-500 crore, including certain brands transferred from eyecare biggie Alcon, when it was spun off from Novartis. In 2019 under a global restructuring move, Novartis had spun off Alcon into a standalone business to focus on its core area of pharmaceuticals. Alcon is a global leader in eyecare, offering solutions to issues like cataracts, glaucoma, retinal diseases and refractive errors.

The stock market seems to have got a wind of the potential deal. Over the last few days, scrips of both Novartis India and JB Chem have witnessed a spurt. On December 7, JB Chem traded on a new 52-week high at ₹ 1555, while Novartis India stock closed ₹ 706 on Friday.

Further, Novartis had last year announced the transfer of sales & distribution of a few of its established medicines, including the Voveran and Calcium range to Dr.Reddy's.

### Sub questions

Question Number : 46 Question Id : 4058591889 Question Type : MCQ Option Shuffling : Yes Is

Question Mandatory : No Calculator : None Response Time : N.A Think Time : N.A Minimum

Instruction Time : 0

Correct Marks : 1 Wrong Marks : 0.25

Choose the correct statement:

Options :

4058596111. India presents a tough business environment to drug companies.

Over the last few months, global Big Pharma have been investing their branded  
4058596112. generic portfolio.

The deal between Novartis and JB Chemicals is expected to be announced over the  
4058596113. next few weeks.

The demand for spectacles is expected to increase significantly as people spend  
4058596114. more time in front of tablets and mobile devices.

**Question Number : 47 Question Id : 4058591890 Question Type : MCQ Option Shuffling : Yes Is  
Question Mandatory : No Calculator : None Response Time : N.A Think Time : N.A Minimum  
Instruction Time : 0**

**Correct Marks : 1 Wrong Marks : 0.25**

One of the big companies in eyecare is -

**Options :**

4058596115. JB Chemicals

4058596116. Alcon

4058596117. Novartis

4058596118. Big Pharma

**Question Number : 48 Question Id : 4058591891 Question Type : MCQ Option Shuffling : Yes Is  
Question Mandatory : No Calculator : None Response Time : N.A Think Time : N.A Minimum  
Instruction Time : 0**

**Correct Marks : 1 Wrong Marks : 0.25**

The sales and distribution of the medicine 'Voveran' is done by -

**Options :**

4058596119. Novartis

4058596120. JB Chemicals

4058596121. Alcon

4058596122. Dr. Reddy's

**Question Number : 49 Question Id : 4058591892 Question Type : MCQ Option Shuffling : Yes Is**

**Question Mandatory : No Calculator : None Response Time : N.A Think Time : N.A Minimum**

**Instruction Time : 0**

**Correct Marks : 1 Wrong Marks : 0.25**

Fill in the blank:

The volcano is expected to \_\_\_\_\_ clouds of steam and ash high into the air in a couple of days.

**Options :**

4058596123. divest

4058596124. spurt

4058596125. capitalise

4058596126. elicit

**Question Number : 50 Question Id : 4058591893 Question Type : MCQ Option Shuffling : Yes Is**

**Question Mandatory : No Calculator : None Response Time : N.A Think Time : N.A Minimum**

**Instruction Time : 0**

**Correct Marks : 1 Wrong Marks : 0.25**

The word closest in meaning to 'pruning' is

**Options :**

4058596127. adding



4058596128. trimming

4058596129. increasing

4058596130. sweetening

**Sub-Section Number :** 2  
**Sub-Section Id :** 405859126  
**Question Shuffling Allowed :** No  
**Is Section Default? :** null

**Question Id : 4058591894 Question Type : COMPREHENSION Sub Question Shuffling Allowed :  
Yes Group Comprehension Questions : No Question Pattern Type : NonMatrix Calculator :  
None Response Time : N.A Think Time : N.A Minimum Instruction Time : 0**

**Question Numbers : (51 to 55)**

Question Label : Comprehension

Read the given passage and answer the questions that follow-

Life Insurance Corporation of India (LIC) reported weak growth through H1FY24 but it witnessed a boost in embedded value (EV) due to equity market performance. But concerns regarding its stock include loss of market share as it is outpaced by private sector rivals, sticky operating expenses (reduced slightly year-on-year but up in Q2FY24 versus Q1FY24), and high sensitivity of embedded value to equity volatility.

Traders may also factor in the likelihood of another stake sale by the Government of India. These concerns are reflected in valuations. LIC trades at a big discount in price/EV terms (less than 1x) compared to private sector rivals (mostly 3x or more).

Growth is healthy on a sequential basis but weak on a Y-o-Y basis. The individual annualized premium equivalent (APE) in H1FY24 was flat Y-o-Y at ₹ 14,640 crore, whereas the group APE was down by 24.5 percent Y-o-Y to ₹ 7,990 crore. Policies that provide policyholders a share of the insurance company's profits as an annual dividend payout are also called par or with-profit policies.

The VNB (value of new business) margin was flat on a Y-o-Y basis despite the rise in share of non-par business, which is margin-positive. The VNB margin for H1FY24 was 14.61 percent against 14.58 percent in H1FY23. Though the rise in share of non-par products had a positive impact on the VNB margin, more benefits were given to policyholders, particularly for annuity, which pulled margins down again.

The product mix shift to non-par should push the VNB margin up in the long-term. But competitive intensity meant product pricing had to be low-margin and more benefits were offered to policyholders. The annuity rates have also been increased. The overall APE dropped 10.3 percent over the past year to ₹ 22,630 crore. The individual business accounted for 64.7 percent of the APE. The individual APE was flat Y-o-Y, whereas the group business dropped 24.5 percent.

The solvency ratio is adequate, and the movement to non-par is positive for margins. But further loss of market share would occur unless LIC pushes up growth rates to match rivals. It's hard to estimate EV trends. Valuations are cheap which leaves room for some upside.

### Sub questions

Question Number : 51 Question Id : 4058591895 Question Type : MCQ Option Shuffling : Yes Is

Question Mandatory : No Calculator : None Response Time : N.A Think Time : N.A Minimum

Instruction Time : 0

Correct Marks : 1 Wrong Marks : 0.25

The embedded value is very sensitive to

Options :

4058596131. loss of market share

4058596132. private sector rivals

4058596133. sticky operating expenses

4058596134. equity volatility

**Question Number : 52 Question Id : 4058591896 Question Type : MCQ Option Shuffling : Yes Is Question Mandatory : No Calculator : None Response Time : N.A Think Time : N.A Minimum Instruction Time : 0**

**Correct Marks : 1 Wrong Marks : 0.25**

The LIC policies that provide the policy holders a share in the company's profits as an annual dividend payout are known as -

**Options :**

4058596135. individual policies

4058596136. par policies

4058596137. APE policies

4058596138. non-par policies

**Question Number : 53 Question Id : 4058591897 Question Type : MCQ Option Shuffling : Yes Is Question Mandatory : No Calculator : None Response Time : N.A Think Time : N.A Minimum Instruction Time : 0**

**Correct Marks : 1 Wrong Marks : 0.25**

\_\_\_\_\_ was flat on a year-on-year basis despite the rise in share of non-par business.

**Options :**

4058596139. embedded value

4058596140. annualised premium equivalent

4058596141. annual dividend payout

4058596142. value of new business

**Question Number : 54 Question Id : 4058591898 Question Type : MCQ Option Shuffling : Yes Is Question Mandatory : No Calculator : None Response Time : N.A Think Time : N.A Minimum Instruction Time : 0**

**Correct Marks : 1 Wrong Marks : 0.25**

LIC may lose market share further -

**Options :**

4058596143. if the operating expenses remain sticky,

4058596144. unless LIC doesn't cut down its discounts in trades.

4058596145. unless it pushes up growth rate to match the rivals.

4058596146. if valuations are cheap and leave room for upside.

**Question Number : 55 Question Id : 4058591899 Question Type : MCQ Option Shuffling : Yes Is Question Mandatory : No Calculator : None Response Time : N.A Think Time : N.A Minimum Instruction Time : 0**

**Correct Marks : 1 Wrong Marks : 0.25**

Give one word for the given group of words-

'the state of not being in debt'

**Options :**

4058596147. equity

4058596148. solvency

4058596149. margin-positive

4058596150. annuity

**Question Id : 4058591894 Question Type : COMPREHENSION Sub Question Shuffling Allowed :**

**Yes Group Comprehension Questions : No Question Pattern Type : NonMatrix Calculator :**

**None Response Time : N.A Think Time : N.A Minimum Instruction Time : 0**

**Question Numbers : (51 to 55)**

Question Label : Comprehension

Read the given passage and answer the questions that follow-

Life Insurance Corporation of India (LIC) reported weak growth through H1FY24 but it witnessed a boost in embedded value (EV) due to equity market performance. But concerns regarding its stock include loss of market share as it is outpaced by private sector rivals, sticky operating expenses (reduced slightly year-on-year but up in Q2FY24 versus Q1FY24), and high sensitivity of embedded value to equity volatility.

Traders may also factor in the likelihood of another stake sale by the Government of India. These concerns are reflected in valuations. LIC trades at a big discount in price/EV terms (less than 1x) compared to private sector rivals (mostly 3x or more).

Growth is healthy on a sequential basis but weak on a Y-o-Y basis. The individual annualized premium equivalent (APE) in H1FY24 was flat Y-o-Y at ₹ 14,640 crore, whereas the group APE was down by 24.5 percent Y-o-Y to ₹ 7,990 crore. Policies that provide policyholders a share of the insurance company's profits as an annual dividend payout are also called par or with-profit policies.

The VNB (value of new business) margin was flat on a Y-o-Y basis despite the rise in share of non-par business, which is margin-positive. The VNB margin for H1FY24 was 14.61 percent against 14.58 percent in H1FY23. Though the rise in share of non-par products had a positive impact on the VNB margin, more benefits were given to policyholders, particularly for annuity, which pulled margins down again.

The product mix shift to non-par should push the VNB margin up in the long-term. But competitive intensity meant product pricing had to be low-margin and more benefits were offered to policyholders. The annuity rates have also been increased. The overall APE dropped 10.3 percent over the past year to ₹ 22,630 crore. The individual business accounted for 64.7 percent of the APE. The individual APE was flat Y-o-Y, whereas the group business dropped 24.5 percent.

The solvency ratio is adequate, and the movement to non-par is positive for margins. But further loss of market share would occur unless LIC pushes up growth rates to match rivals. It's hard to estimate EV trends. Valuations are cheap which leaves room for some upside.

### Sub questions

**Question Number : 51 Question Id : 4058591895 Question Type : MCQ Option Shuffling : Yes Is Question Mandatory : No Calculator : None Response Time : N.A Think Time : N.A Minimum Instruction Time : 0**

**Correct Marks : 1 Wrong Marks : 0.25**

The embedded value is very sensitive to

**Options :**

4058596131. loss of market share

4058596132. private sector rivals

4058596133. sticky operating expenses

4058596134. equity volatility

**Question Number : 52 Question Id : 4058591896 Question Type : MCQ Option Shuffling : Yes Is Question Mandatory : No Calculator : None Response Time : N.A Think Time : N.A Minimum Instruction Time : 0**

**Correct Marks : 1 Wrong Marks : 0.25**

The LIC policies that provide the policy holders a share in the company's profits as an annual dividend payout are known as -

**Options :**

4058596135. individual policies

4058596136. par policies

4058596137. APE policies

4058596138. non-par policies

**Question Number : 53 Question Id : 4058591897 Question Type : MCQ Option Shuffling : Yes Is Question Mandatory : No Calculator : None Response Time : N.A Think Time : N.A Minimum Instruction Time : 0**

**Correct Marks : 1 Wrong Marks : 0.25**

\_\_\_\_\_ was flat on a year-on-year basis despite the rise in share of non-par business.

**Options :**

4058596139. embedded value

4058596140. annualised premium equivalent

4058596141. annual dividend payout

4058596142. value of new business

**Question Number : 54 Question Id : 4058591898 Question Type : MCQ Option Shuffling : Yes Is Question Mandatory : No Calculator : None Response Time : N.A Think Time : N.A Minimum Instruction Time : 0**

**Correct Marks : 1 Wrong Marks : 0.25**

LIC may lose market share further -

**Options :**

4058596143. if the operating expenses remain sticky,

4058596144. unless LIC doesn't cut down its discounts in trades.

4058596145. unless it pushes up growth rate to match the rivals.

4058596146. if valuations are cheap and leave room for upside.

**Question Number : 55 Question Id : 4058591899 Question Type : MCQ Option Shuffling : Yes Is Question Mandatory : No Calculator : None Response Time : N.A Think Time : N.A Minimum Instruction Time : 0**

**Correct Marks : 1 Wrong Marks : 0.25**

Give one word for the given group of words-

'the state of not being in debt'

**Options :**

4058596147. equity

4058596148. solvency



4058596149. margin-positive

4058596150. annuity

**Sub-Section Number :** 3  
**Sub-Section Id :** 405859127  
**Question Shuffling Allowed :** No  
**Is Section Default? :** null

**Question Id : 4058591900 Question Type : COMPREHENSION Sub Question Shuffling Allowed :  
Yes Group Comprehension Questions : No Question Pattern Type : NonMatrix Calculator :  
None Response Time : N.A Think Time : N.A Minimum Instruction Time : 0**

**Question Numbers : (56 to 60)**

Question Label : Comprehension

Read the given passage and answer the questions that follow-

India didn't sign the Global Renewables and Energy Efficiency Pledge that aims to triple global renewable energy capacity and double the rate of energy efficiency by 2030. That's despite having successfully ensured a commitment to the aspiration by the G20 in the New Delhi Leaders' Declaration.

India has a domestic target of increasing its renewable energy capacity to 450GW from its current level of 130GW by 2030.

New Delhi's absence from the list of 118 countries that joined the pledge came as something of a surprise. Prime Minister Narendra Modi had highlighted India's role as G20 president in securing the agreement on renewable energy capacity and energy efficiency. All the G20 countries - barring India, China and Russia - have signed on to the pledge launched on Saturday by COP28 president Sultan Al Jaber. The pledge seeks to triple global installed renewable energy capacity to at least 11,000GW and double the global energy efficiency improvement rate to more than 4% by 2030.

As G20 president, India had pushed for the adoption of a numerical target for the tripling of renewable energy, without much success. "What is interesting is that as the G20 presidency, India pushed for not just the idea of tripling renewable energy capacities but also attempted to set a target, 11,000 GW by 2030. In its efforts, India was supported by only the European Union (EU) and its member states, " said a senior delegate privy to G20 negotiations on energy.

India's decision not to join the pledge can likely be attributed to the focus on coal and investments in it.

**Sub questions**

**Question Number : 56 Question Id : 4058591901 Question Type : MCQ Option Shuffling : Yes Is Question Mandatory : No Calculator : None Response Time : N.A Think Time : N.A Minimum Instruction Time : 0**

**Correct Marks : 1 Wrong Marks : 0.25**

Choose the statement that is incorrect as per the passage -

**Options :**

4058596151. The Global Renewables and Energy Efficiency Pledge aims to triple global renewable capacity.

4058596152. India's absence from the list of 118 countries that joined the pledge came as a surprise.

4058596153. As G20 President, India has pushed for adoption of a cardinal target for the tripling of renewable energy.

4058596154. In its efforts India was supported by only the European Union and its member states.

**Question Number : 57 Question Id : 4058591902 Question Type : MCQ Option Shuffling : Yes Is Question Mandatory : No Calculator : None Response Time : N.A Think Time : N.A Minimum Instruction Time : 0**

**Correct Marks : 1 Wrong Marks : 0.25**

The Global Renewables and Energy Efficiency Pledge is floated by

**Options :**

4058596155. G20

4058596156. India, China and Russia

4058596157. COP28

4058596158. EU

**Question Number : 58 Question Id : 4058591903 Question Type : MCQ Option Shuffling : Yes Is Question Mandatory : No Calculator : None Response Time : N.A Think Time : N.A Minimum Instruction Time : 0**

**Correct Marks : 1 Wrong Marks : 0.25**

India not signing The Global Renewables and Energy Efficiency Pledge comes as a surprise

**Options :**

- 4058596159. since India has a domestic target of increasing its renewable energy capacity.
- 4058596160. since India, China and Russia are the only G20 countries not to have done so.
- 4058596161. since the pledge seeks to double the global energy efficiency improvement rate.
- 4058596162. since India has pushed for the adoption of a numerical target for renewable energy as G20 President.

**Question Number : 59 Question Id : 4058591904 Question Type : MCQ Option Shuffling : Yes Is Question Mandatory : No Calculator : None Response Time : N.A Think Time : N.A Minimum Instruction Time : 0**

**Correct Marks : 1 Wrong Marks : 0.25**

India has not signed the pledge probably because -

**Options :**

- 4058596163. its requirements for renewable energy are way exceeding its target capacity.
- 4058596164. it was not supported by other nations except EU.
- 4058596165. it wants to invest in coal energy.
- 4058596166. China and Russia have also not signed it.

**Question Number : 60 Question Id : 4058591905 Question Type : MCQ Option Shuffling : Yes Is  
Question Mandatory : No Calculator : None Response Time : N.A Think Time : N.A Minimum  
Instruction Time : 0**

**Correct Marks : 1 Wrong Marks : 0.25**

Choose one word for the given group of words -

'a strong desire to have or do something'

**Options :**

4058596167. commitment

4058596168. aspiration

4058596169. pledge

4058596170. capacity

**Question Id : 4058591900 Question Type : COMPREHENSION Sub Question Shuffling Allowed :  
Yes Group Comprehension Questions : No Question Pattern Type : NonMatrix Calculator :  
None Response Time : N.A Think Time : N.A Minimum Instruction Time : 0**

**Question Numbers : (56 to 60)**

Question Label : Comprehension

Read the given passage and answer the questions that follow-

India didn't sign the Global Renewables and Energy Efficiency Pledge that aims to triple global renewable energy capacity and double the rate of energy efficiency by 2030. That's despite having successfully ensured a commitment to the aspiration by the G20 in the New Delhi Leaders' Declaration.

India has a domestic target of increasing its renewable energy capacity to 450GW from its current level of 130GW by 2030.

New Delhi's absence from the list of 118 countries that joined the pledge came as something of a surprise. Prime Minister Narendra Modi had highlighted India's role as G20 president in securing the agreement on renewable energy capacity and energy efficiency. All the G20 countries - barring India, China and Russia - have signed on to the pledge launched on Saturday by COP28 president Sultan Al Jaber. The pledge seeks to triple global installed renewable energy capacity to at least 11,000GW and double the global energy efficiency improvement rate to more than 4% by 2030.

As G20 president, India had pushed for the adoption of a numerical target for the tripling of renewable energy, without much success. "What is interesting is that as the G20 presidency, India pushed for not just the idea of tripling renewable energy capacities but also attempted to set a target, 11,000 GW by 2030. In its efforts, India was supported by only the European Union (EU) and its member states, " said a senior delegate privy to G20 negotiations on energy.

India's decision not to join the pledge can likely be attributed to the focus on coal and investments in it.

### Sub questions

Question Number : 56 Question Id : 4058591901 Question Type : MCQ Option Shuffling : Yes Is

Question Mandatory : No Calculator : None Response Time : N.A Think Time : N.A Minimum

Instruction Time : 0

Correct Marks : 1 Wrong Marks : 0.25

Choose the statement that is incorrect as per the passage -

Options :

4058596151. The Global Renewables and Energy Efficiency Pledge aims to triple global renewable capacity.

4058596152. India's absence from the list of 118 countries that joined the pledge came as a surprise.

4058596153. As G20 President, India has pushed for adoption of a cardinal target for the tripling of renewable energy.

4058596154.

In its efforts India was supported by only the European Union and its member states.

**Question Number : 57 Question Id : 4058591902 Question Type : MCQ Option Shuffling : Yes Is Question Mandatory : No Calculator : None Response Time : N.A Think Time : N.A Minimum Instruction Time : 0**

**Correct Marks : 1 Wrong Marks : 0.25**

The Global Renewables and Energy Efficiency Pledge is floated by

**Options :**

4058596155. G20

4058596156. India, China and Russia

4058596157. COP28

4058596158. EU

**Question Number : 58 Question Id : 4058591903 Question Type : MCQ Option Shuffling : Yes Is Question Mandatory : No Calculator : None Response Time : N.A Think Time : N.A Minimum Instruction Time : 0**

**Correct Marks : 1 Wrong Marks : 0.25**

India not signing The Global Renewables and Energy Efficiency Pledge comes as a surprise

**Options :**

4058596159. since India has a domestic target of increasing its renewable energy capacity.

4058596160. since India, China and Russia are the only G20 countries not to have done so.

4058596161. since the pledge seeks to double the global energy efficiency improvement rate.

since India has pushed for the adoption of a numerical target for renewable energy  
4058596162. as G20 President.

**Question Number : 59 Question Id : 4058591904 Question Type : MCQ Option Shuffling : Yes Is  
Question Mandatory : No Calculator : None Response Time : N.A Think Time : N.A Minimum  
Instruction Time : 0**

**Correct Marks : 1 Wrong Marks : 0.25**

India has not signed the pledge probably because -

**Options :**

4058596163. its requirements for renewable energy are way exceeding its target capacity.

4058596164. it was not supported by other nations except EU.

4058596165. it wants to invest in coal energy.

4058596166. China and Russia have also not signed it.

**Question Number : 60 Question Id : 4058591905 Question Type : MCQ Option Shuffling : Yes Is  
Question Mandatory : No Calculator : None Response Time : N.A Think Time : N.A Minimum  
Instruction Time : 0**

**Correct Marks : 1 Wrong Marks : 0.25**

Choose one word for the given group of words -

'a strong desire to have or do something'

**Options :**

4058596167. commitment

4058596168. aspiration

4058596169. pledge

4058596170. capacity

**Sub-Section Number :** 4  
**Sub-Section Id :** 405859128  
**Question Shuffling Allowed :** No  
**Is Section Default? :** null

**Question Id : 4058591906 Question Type : COMPREHENSION Sub Question Shuffling Allowed :**

**Yes Group Comprehension Questions : No Question Pattern Type : NonMatrix Calculator :**

**None Response Time : N.A Think Time : N.A Minimum Instruction Time : 0**

**Question Numbers : (61 to 65)**

Question Label : Comprehension

Read the given passage and answer the questions that follow-

Warning of a potential catastrophe in the Himalayas where the glaciers are melting at an alarming rate, UN chief Antonio Guterres on Saturday said the ongoing annual climate talks must respond to the needs of the developing nations, especially the vulnerable mountain countries that need urgent help.

Almost 240 million people depend on the glaciers and 10 major rivers, such as Indus, Ganga and Brahmaputra, originate in the Himalayas. Another billion people living downstream of these rivers across eight countries, including India, are also dependent on the glacier-fed rivers.

Addressing a meeting with mountain countries at this year's Conference of Parties (COP28), UN Secretary-General Guterres emphasized that nearly a third of Nepal's ice had vanished in just over 30 years, and it was directly linked to greenhouse gas pollution that heats up the planet.

Guterres, who visited Nepal, including the Everest region, in October last week, called for developed countries to clarify the delivery of \$100 billion and produce a plan to double adaptation finance to \$40 billion a year by 2025.

"But those sums are dwarfed by the scale of what's needed" he said and advocated for reform in International Financial Institutions (IFIs) and Multilateral Development Banks (MDBs) to better cater to the needs of developing countries like Nepal.

"So, we need the outcome of this COP to call for reform of the IFIs so that they reflect today's world and are far more responsive to the needs of developing countries and for reform of the business models of the MDBs so that they can leverage far more private finance at reasonable cost to the developing countries", he said. "Unless there is a change in course, a catastrophe can be unleashed. The glaciers could disappear altogether. That means massively reduced flows for major Himalayan rivers," he said.

**Sub questions**



**Question Number : 61 Question Id : 4058591907 Question Type : MCQ Option Shuffling : Yes Is Question Mandatory : No Calculator : None Response Time : N.A Think Time : N.A Minimum Instruction Time : 0**

**Correct Marks : 1 Wrong Marks : 0.25**

Choose the incorrect statement:

**Options :**

4058596171. The ongoing annual climate talks must respond to the needs of the developing nations.

4058596172. 10 major rivers depend upon the Himalayan Glaciers.

4058596173. Nearly half of Nepal's ice has vanished in just over 30 years.

4058596174. Guterres advocated for reform in IFIs and MBDs.

**Question Number : 62 Question Id : 4058591908 Question Type : MCQ Option Shuffling : Yes Is Question Mandatory : No Calculator : None Response Time : N.A Think Time : N.A Minimum Instruction Time : 0**

**Correct Marks : 1 Wrong Marks : 0.25**

The primary reason for melting of glaciers in the Himalayan region is:

**Options :**

4058596175. the needs of the developing nations.

4058596176. the people living down stream of the rivers fed by glaciers.

4058596177. greenhouse gas pollution.

4058596178. the business models of the MDBs.

**Question Number : 63 Question Id : 4058591909 Question Type : MCQ Option Shuffling : Yes Is Question Mandatory : No Calculator : None Response Time : N.A Think Time : N.A Minimum Instruction Time : 0**

**Correct Marks : 1 Wrong Marks : 0.25**

The UN Chief Antonio Guterres is called for:

**Options :**

4058596179. annual climate talks.

4058596180. reform in IFIs and MDBs to better cater to the needs of developing countries.

4058596181. more private finance at reasonable cost to Nepal.

4058596182. a change in course.

**Question Number : 64 Question Id : 4058591910 Question Type : MCQ Option Shuffling : Yes Is Question Mandatory : No Calculator : None Response Time : N.A Think Time : N.A Minimum Instruction Time : 0**

**Correct Marks : 1 Wrong Marks : 0.25**

The word closest in meaning to 'possible' is:

**Options :**

4058596183. ongoing

4058596184. delivery

4058596185. potential

4058596186. financial

**Question Number : 65 Question Id : 4058591911 Question Type : MCQ Option Shuffling : Yes Is**

**Question Mandatory : No Calculator : None Response Time : N.A Think Time : N.A Minimum**

**Instruction Time : 0**

**Correct Marks : 1 Wrong Marks : 0.25**

Give one word for the following group of words:

'Weak and easily hurt physically and emotionally'

**Options :**

4058596187. catastrophe

4058596188. vulnerable

4058596189. dependent

4058596190. dwarf

**Question Id : 4058591906 Question Type : COMPREHENSION Sub Question Shuffling Allowed :**

**Yes Group Comprehension Questions : No Question Pattern Type : NonMatrix Calculator :**

**None Response Time : N.A Think Time : N.A Minimum Instruction Time : 0**

**Question Numbers : (61 to 65)**

Question Label : Comprehension

Read the given passage and answer the questions that follow-

Warning of a potential catastrophe in the Himalayas where the glaciers are melting at an alarming rate, UN chief Antonio Guterres on Saturday said the ongoing annual climate talks must respond to the needs of the developing nations, especially the vulnerable mountain countries that need urgent help.

Almost 240 million people depend on the glaciers and 10 major rivers, such as Indus, Ganga and Brahmaputra, originate in the Himalayas. Another billion people living downstream of these rivers across eight countries, including India, are also dependent on the glacier-fed rivers.

Addressing a meeting with mountain countries at this year's Conference of Parties (COP28), UN Secretary-General Gutterres emphasized that nearly a third of Nepal's ice had vanished in just over 30 years, and it was directly linked to greenhouse gas pollution that heats up the planet.

Guterres, who visited Nepal, including the Everest region, in October last week, called for developed countries to clarify the delivery of \$100 billion and produce a plan to double adaptation finance to \$40 billion a year by 2025.

"But those sums are dwarfed by the scale of what's needed" he said and advocated for reform in International Financial Institutions (IFIs) and Multilateral Development Banks (MDBs) to better cater to the needs of developing countries like Nepal.

"So, we need the outcome of this COP to call for reform of the IFIs so that they reflect today's world and are far more responsive to the needs of developing countries and for reform of the business models of the MDBs so that they can leverage far more private finance at reasonable cost to the developing countries", he said. "Unless there is a change in course, a catastrophe can be unleashed. The glaciers could disappear altogether. That means massively reduced flows for major Himalayan rivers," he said.

### Sub questions

**Question Number : 61 Question Id : 4058591907 Question Type : MCQ Option Shuffling : Yes Is Question Mandatory : No Calculator : None Response Time : N.A Think Time : N.A Minimum Instruction Time : 0**

**Correct Marks : 1 Wrong Marks : 0.25**

Choose the incorrect statement:

**Options :**

4058596171. The ongoing annual climate talks must respond to the needs of the developing nations.

4058596172. 10 major rivers depend upon the Himalayan Glaciers.

4058596173. Nearly half of Nepal's ice has vanished in just over 30 years.

4058596174. Guterres advocated for reform in IFIs and MBDs.

**Question Number : 62 Question Id : 4058591908 Question Type : MCQ Option Shuffling : Yes Is Question Mandatory : No Calculator : None Response Time : N.A Think Time : N.A Minimum Instruction Time : 0**

**Correct Marks : 1 Wrong Marks : 0.25**

The primary reason for melting of glaciers in the Himalayan region is:

**Options :**

4058596175. the needs of the developing nations.

4058596176. the people living down stream of the rivers fed by glaciers.

4058596177. greenhouse gas pollution.

4058596178. the business models of the MDBs.

**Question Number : 63 Question Id : 4058591909 Question Type : MCQ Option Shuffling : Yes Is Question Mandatory : No Calculator : None Response Time : N.A Think Time : N.A Minimum Instruction Time : 0**

**Correct Marks : 1 Wrong Marks : 0.25**

The UN Chief Antonio Guterres is called for:

**Options :**

4058596179. annual climate talks.

4058596180. reform in IFIs and MDBs to better cater to the needs of developing countries.

4058596181. more private finance at reasonable cost to Nepal.

4058596182. a change in course.

**Question Number : 64 Question Id : 4058591910 Question Type : MCQ Option Shuffling : Yes Is Question Mandatory : No Calculator : None Response Time : N.A Think Time : N.A Minimum Instruction Time : 0**

**Correct Marks : 1 Wrong Marks : 0.25**

The word closest in meaning to 'possible' is:

**Options :**

4058596183. ongoing

4058596184. delivery

4058596185. potential

4058596186. financial

**Question Number : 65 Question Id : 4058591911 Question Type : MCQ Option Shuffling : Yes Is Question Mandatory : No Calculator : None Response Time : N.A Think Time : N.A Minimum Instruction Time : 0**

**Correct Marks : 1 Wrong Marks : 0.25**

Give one word for the following group of words:

'Weak and easily hurt physically and emotionally'

**Options :**

4058596187. catastrophe

4058596188. vulnerable

4058596189. dependent

4058596190. dwarf

**Sub-Section Number :** 5  
**Sub-Section Id :** 405859129  
**Question Shuffling Allowed :** No  
**Is Section Default? :** null

**Question Id : 4058591912 Question Type : COMPREHENSION Sub Question Shuffling Allowed :**

**Yes Group Comprehension Questions : No Question Pattern Type : NonMatrix Calculator :**

**None Response Time : N.A Think Time : N.A Minimum Instruction Time : 0**

**Question Numbers : (66 to 70)**

Question Label : Comprehension

Read the given passage and answer the questions that follow-

TV broadcasters and streaming platforms are concerned about the potential impact on their creative freedom from the ministry of information and ' broadcasting's (MIB) proposed legislation that would require them to get content certified by an evaluation committee before broadcasting it.

As part of its three-tier regulatory mechanism to regulate broadcasting content, the ministry has proposed that each broadcaster and broadcasting network operator should set up content evaluation committees (CECs) and only those programmes certified by CECs should be broadcast.

The committee's members would include eminent individuals representing different social groups, including women, child welfare, scheduled castes, scheduled tribes, and minorities. The central government may specify the number of members in the panel, the quorum required, and other details to assist the establishment and smooth operation of CEC. The proposal would not only impact creative freedom of the broadcasters and OTT platforms but also push up costs and may even prove unfeasible considering the amount of content created, industry experts said.

TMT Law Practice managing partner Abhishek Malhotra said the creative judgment of broadcasters and OTT platforms will be subjected to another review, which may not be acceptable to content creators.

"There will also be an issue of sharing content before it's proposed for public release -fear of disclosure," he said. An MIB official, on condition of anonymity, said the ministry wants to strengthen self regulation through this move, adding that the broadcasters will have freedom in running the CECs.

Industry experts called it a misnomer. While the CEC will be set up by the broadcasting companies, it will be as per the prescription of the central government, noted Siddharth Chopra, M&E practice lead advocate at Saikrishna & Associates. "This, to my mind, makes self-regulation a non-starter," he said, terming CECs as mini-certification boards.

The obligation of setting up CECs will apply to TV channels such as Star Plus, Colors, Zee TV, and Sony Entertainment Television (SET), streaming platforms such as Netflix, Amazon Prime Video, Disney + Hotstar, and JioCinema, and platform services provided by operators such as Tata Play, Dish TV, and Hathway Digital.

### Sub questions

Question Number : 66 Question Id : 4058591913 Question Type : MCQ Option Shuffling : Yes Is

Question Mandatory : No Calculator : None Response Time : N.A Think Time : N.A Minimum

Instruction Time : 0

Correct Marks : 1 Wrong Marks : 0.25

To regulate broadcasting content, the ministry has proposed that -

Options :

4058596191. each broadcaster should set up content evaluation committees.



4058596192. only certified programmes should be broadcast.

4058596193. broadcasting operator should set up content evaluation committee.

each broadcaster and broadcasting network operator should set up content evaluation committees and only those programmes certified by CECs should be broadcast.

**Question Number : 67 Question Id : 4058591914 Question Type : MCQ Option Shuffling : Yes Is Question Mandatory : No Calculator : None Response Time : N.A Think Time : N.A Minimum Instruction Time : 0**

**Correct Marks : 1 Wrong Marks : 0.25**

The meaning of the word 'EMINENT' given in this passage is:

**Options :**

4058596195. Famous and respected

4058596196. Honest

4058596197. Gentle

4058596198. Hardworking

**Question Number : 68 Question Id : 4058591915 Question Type : MCQ Option Shuffling : Yes Is Question Mandatory : No Calculator : None Response Time : N.A Think Time : N.A Minimum Instruction Time : 0**

**Correct Marks : 1 Wrong Marks : 0.25**

Who are the people or institutions who can specify the number of members in the panel and other details to assist the establishment and smooth operation of CEC?

**Options :**

4058596199. The broadcasters

4058596200. The committee's members

4058596201. The Central Government

4058596202. Ministry of Information and Broadcasting

**Question Number : 69 Question Id : 4058591916 Question Type : MCQ Option Shuffling : Yes Is**

**Question Mandatory : No Calculator : None Response Time : N.A Think Time : N.A Minimum**

**Instruction Time : 0**

**Correct Marks : 1 Wrong Marks : 0.25**

Choose the correct sentence:

**Options :**

4058596203. The proposal would impact creative freedom of the broadcasters and push up costs.

4058596204. The proposal would impact OTT platforms and may prove unfeasible considering the amount of content created.

4058596205. The proposal would not impact OTT platform.

4058596206. The proposal would not only impact creative freedom of the broadcaster and OTT platforms but also push up costs and may even prove unfeasible considering the amount of content created.

**Question Number : 70 Question Id : 4058591917 Question Type : MCQ Option Shuffling : Yes Is**

**Question Mandatory : No Calculator : None Response Time : N.A Think Time : N.A Minimum**

**Instruction Time : 0**

**Correct Marks : 1 Wrong Marks : 0.25**

Find out the synonym of 'commitment' from the passage:

**Options :**

4058596207. Anonymity

4058596208. Acceptable

4058596209. Obligation

4058596210. Eminent

**Question Id : 4058591912 Question Type : COMPREHENSION Sub Question Shuffling Allowed :**

**Yes Group Comprehension Questions : No Question Pattern Type : NonMatrix Calculator :**

**None Response Time : N.A Think Time : N.A Minimum Instruction Time : 0**

**Question Numbers : (66 to 70)**

Question Label : Comprehension

Read the given passage and answer the questions that follow-

TV broadcasters and streaming platforms are concerned about the potential impact on their creative freedom from the ministry of information and ' broadcasting's (MIB) proposed legislation that would require them to get content certified by an evaluation committee before broadcasting it.

As part of its three-tier regulatory mechanism to regulate broadcasting content, the ministry has proposed that each broadcaster and broadcasting network operator should set up content evaluation committees (CECs) and only those programmes certified by CECs should be broadcast.

The committee's members would include eminent individuals representing different social groups, including women, child welfare, scheduled castes, scheduled tribes, and minorities. The central government may specify the number of members in the panel, the quorum required, and other details to assist the establishment and smooth operation of CEC. The proposal would not only impact creative freedom of the broadcasters and OTT platforms but also push up costs and may even prove unfeasible considering the amount of content created, industry experts said.

TMT Law Practice managing partner Abhishek Malhotra said the creative judgment of broadcasters and OTT platforms will be subjected to another review, which may not be acceptable to content creators.

"There will also be an issue of sharing content before it's proposed for public release -fear of disclosure," he said. An MIB official, on condition of anonymity, said the ministry wants to strengthen self regulation through this move, adding that the broadcasters will have freedom in running the CECs.

Industry experts called it a misnomer. While the CEC will be set up by the broadcasting companies, it will be as per the prescription of the central government, noted Siddharth Chopra, M&E practice lead advocate at Saikrishna & Associates. "This, to my mind, makes self-regulation a non-starter," he said, terming CECs as mini-certification boards.

The obligation of setting up CECs will apply to TV channels such as Star Plus, Colors, Zee TV, and Sony Entertainment Television (SET), streaming platforms such as Netflix, Amazon Prime Video, Disney + Hotstar, and JioCinema, and platform services provided by operators such as Tata Play, Dish TV, and Hathway Digital.

### Sub questions

Question Number : 66 Question Id : 4058591913 Question Type : MCQ Option Shuffling : Yes Is

Question Mandatory : No Calculator : None Response Time : N.A Think Time : N.A Minimum

Instruction Time : 0

Correct Marks : 1 Wrong Marks : 0.25

To regulate broadcasting content, the ministry has proposed that -

Options :

4058596191. each broadcaster should set up content evaluation committees.

4058596192. only certified programmes should be broadcast.

4058596193. broadcasting operator should set up content evaluation committee.

each broadcaster and broadcasting network operator should set up content evaluation committees and only those programmes certified by CECs should be broadcast.

**Question Number : 67 Question Id : 4058591914 Question Type : MCQ Option Shuffling : Yes Is Question Mandatory : No Calculator : None Response Time : N.A Think Time : N.A Minimum Instruction Time : 0**

**Correct Marks : 1 Wrong Marks : 0.25**

The meaning of the word 'EMINENT' given in this passage is:

**Options :**

4058596195. Famous and respected

4058596196. Honest

4058596197. Gentle

4058596198. Hardworking

**Question Number : 68 Question Id : 4058591915 Question Type : MCQ Option Shuffling : Yes Is Question Mandatory : No Calculator : None Response Time : N.A Think Time : N.A Minimum Instruction Time : 0**

**Correct Marks : 1 Wrong Marks : 0.25**

Who are the people or institutions who can specify the number of members in the panel and other details to assist the establishment and smooth operation of CEC?

**Options :**

4058596199. The broadcasters

4058596200. The committee's members

4058596201. The Central Government

4058596202. Ministry of Information and Broadcasting

**Question Number : 69 Question Id : 4058591916 Question Type : MCQ Option Shuffling : Yes Is**

**Question Mandatory : No Calculator : None Response Time : N.A Think Time : N.A Minimum**

**Instruction Time : 0**

**Correct Marks : 1 Wrong Marks : 0.25**

Choose the correct sentence:

**Options :**

4058596203. The proposal would impact creative freedom of the broadcasters and push up costs.

4058596204. The proposal would impact OTT platforms and may prove unfeasible considering the amount of content created.

4058596205. The proposal would not impact OTT platform.

4058596206. The proposal would not only impact creative freedom of the broadcaster and OTT platforms but also push up costs and may even prove unfeasible considering the amount of content created.

**Question Number : 70 Question Id : 4058591917 Question Type : MCQ Option Shuffling : Yes Is**

**Question Mandatory : No Calculator : None Response Time : N.A Think Time : N.A Minimum**

**Instruction Time : 0**

**Correct Marks : 1 Wrong Marks : 0.25**

Find out the synonym of 'commitment' from the passage:

**Options :**

4058596207. Anonymity

4058596208. **Acceptable**

4058596209. **Obligation**

4058596210. **Eminent**

## Quantatitive Ability

<b>Section Id :</b>	405859110
<b>Section Number :</b>	3
<b>Section type :</b>	Online
<b>Mandatory or Optional :</b>	Mandatory
<b>Number of Questions :</b>	30
<b>Number of Questions to be attempted :</b>	30
<b>Section Marks :</b>	30
<b>Enable Mark as Answered Mark for Review and Clear Response :</b>	Yes
<b>Maximum Instruction Time :</b>	0
<b>Sub-Section Number :</b>	1
<b>Sub-Section Id :</b>	405859130
<b>Question Shuffling Allowed :</b>	Yes
<b>Is Section Default? :</b>	null

**Question Number : 71 Question Id : 4058591918 Question Type : MCQ Option Shuffling : Yes Is Question Mandatory : No Calculator : None Response Time : N.A Think Time : N.A Minimum Instruction Time : 0**

**Correct Marks : 1 Wrong Marks : 0.25**

**Three numbers are in the ratio 2 : 3 : 5 and their HCF is 6. The numbers are :**

**Options :**

4058596211. 12, 18, 30

4058596212. 8, 12, 20

4058596213. 16, 24, 40

4058596214. 4, 6, 10

**Question Number : 71 Question Id : 4058591918 Question Type : MCQ Option Shuffling : Yes Is Question Mandatory : No Calculator : None Response Time : N.A Think Time : N.A Minimum Instruction Time : 0**

**Correct Marks : 1 Wrong Marks : 0.25**

तीन संख्याएँ 2 : 3 : 5 के अनुपात में हैं और उनका महत्तम समापवर्तक 6 है। वे संख्याएँ हैं:

**Options :**

4058596211. 12, 18, 30

4058596212. 8, 12, 20

4058596213. 16, 24, 40

4058596214. 4, 6, 10

**Question Number : 72 Question Id : 4058591919 Question Type : MCQ Option Shuffling : Yes Is Question Mandatory : No Calculator : None Response Time : N.A Think Time : N.A Minimum Instruction Time : 0**

**Correct Marks : 1 Wrong Marks : 0.25**

In a class of 35 students the average weight of 21 students is 46 kg and the average weight of the remaining students is 41 kg. The average weight of all the students and a teacher is 44.75 kg. What is the weight of the teacher (in kg)?



**Options :**

4058596215. 70

4058596216. 71

4058596217. 71.9

4058596218. 72

**Question Number : 72 Question Id : 4058591919 Question Type : MCQ Option Shuffling : Yes Is Question Mandatory : No Calculator : None Response Time : N.A Think Time : N.A Minimum Instruction Time : 0**

**Correct Marks : 1 Wrong Marks : 0.25**

कुल 35 विद्यार्थियों की कक्षा में 21 विद्यार्थियों का औसत वजन 46 किलोग्राम है तथा शेष विद्यार्थियों का औसत वजन 41 किलोग्राम है। सभी विद्यार्थियों तथा एक शिक्षक का औसत वजन 44.75 किलोग्राम है। शिक्षक का वजन (किलोग्राम में) कितना है?

**Options :**

4058596215. 70

4058596216. 71

4058596217. 71.9

4058596218. 72

**Question Number : 73 Question Id : 4058591920 Question Type : MCQ Option Shuffling : Yes Is Question Mandatory : No Calculator : None Response Time : N.A Think Time : N.A Minimum Instruction Time : 0**

**Correct Marks : 1 Wrong Marks : 0.25**

If  $\frac{28.5}{5} - \frac{21.5}{15} - \frac{15.5}{30} = \frac{(x)^3}{4} - 3$ , then the value of  $x$ , is :

**Options :**

4058596219. 2

4058596220. 3

4058596221. 5

4058596222. 0

**Question Number : 73 Question Id : 4058591920 Question Type : MCQ Option Shuffling : Yes Is Question Mandatory : No Calculator : None Response Time : N.A Think Time : N.A Minimum Instruction Time : 0**

**Correct Marks : 1 Wrong Marks : 0.25**

यदि  $\frac{28.5}{5} - \frac{21.5}{15} - \frac{15.5}{30} = \frac{(x)^3}{4} - 3$ , तो  $x$  का मान है:

**Options :**

4058596219. 2

4058596220. 3

4058596221. 5

4058596222. 0

**Question Number : 74 Question Id : 4058591921 Question Type : MCQ Option Shuffling : Yes Is Question Mandatory : No Calculator : None Response Time : N.A Think Time : N.A Minimum Instruction Time : 0**

**Correct Marks : 1 Wrong Marks : 0.25**

By selling an item at a discount of 20%, the profit is 20%. The profit percentage, if the item is sold at a discount of 10%, is:

**Options :**

4058596223. 30%

4058596224. 32%

4058596225. 35%

4058596226. 38%

**Question Number : 74 Question Id : 4058591921 Question Type : MCQ Option Shuffling : Yes Is Question Mandatory : No Calculator : None Response Time : N.A Think Time : N.A Minimum Instruction Time : 0**

**Correct Marks : 1 Wrong Marks : 0.25**

किसी वस्तु को 20% छूट पर बेचने पर 20% का लाभ होता है। यदि वस्तु को 10% की छूट पर बेचा जाए तो लाभ प्रतिशत क्या होगा?

**Options :**

4058596223. 30%

4058596224. 32%

4058596225. 35%

4058596226. 38%

**Question Number : 75 Question Id : 4058591922 Question Type : MCQ Option Shuffling : Yes Is Question Mandatory : No Calculator : None Response Time : N.A Think Time : N.A Minimum Instruction Time : 0**

**Correct Marks : 1 Wrong Marks : 0.25**

Out of four numbers whose average is 75, the first number is one-fourth of the sum of the last three numbers. The first number is :

**Options :**

4058596227. 52

4058596228. 56

4058596229. 60

4058596230. 64

**Question Number : 75 Question Id : 4058591922 Question Type : MCQ Option Shuffling : Yes Is Question Mandatory : No Calculator : None Response Time : N.A Think Time : N.A Minimum Instruction Time : 0**

**Correct Marks : 1 Wrong Marks : 0.25**

चार संख्याओं का औसत 75 है, इनमें से पहली संख्या अन्तिम तीन संख्याओं के योग की एक चौथाई है। पहली संख्या है:

**Options :**

4058596227. 52

4058596228. 56

4058596229. 60

4058596230. 64

**Question Number : 76 Question Id : 4058591923 Question Type : MCQ Option Shuffling : Yes Is Question Mandatory : No Calculator : None Response Time : N.A Think Time : N.A Minimum Instruction Time : 0**

**Correct Marks : 1 Wrong Marks : 0.25**

$$\frac{0.963 \times 0.963 - 0.963 \times 0.037 + 0.037 \times 0.037}{0.963 \times 0.963 + 0.037 \times 0.037} =$$

**Options :**

4058596231. -1

4058596232. 0

4058596233. 1

4058596234. 2

**Question Number : 76 Question Id : 4058591923 Question Type : MCQ Option Shuffling : Yes Is Question Mandatory : No Calculator : None Response Time : N.A Think Time : N.A Minimum Instruction Time : 0**

**Correct Marks : 1 Wrong Marks : 0.25**

$$\frac{0.963 \times 0.963 - 0.963 \times 0.037 + 0.037 \times 0.037}{0.963 \times 0.963 \times 0.963 + 0.037 \times 0.037 \times 0.037} =$$

**Options :**

4058596231. -1

4058596232. 0

4058596233. 1

4058596234. 2

**Question Number : 77 Question Id : 4058591924 Question Type : MCQ Option Shuffling : Yes Is Question Mandatory : No Calculator : None Response Time : N.A Think Time : N.A Minimum Instruction Time : 0**

**Correct Marks : 1 Wrong Marks : 0.25**

If  $a^{\frac{1}{3}} + b^{\frac{1}{3}} = c^{\frac{1}{3}}$ , then  $(a + b - c)^3 + 27abc$  is equal to :

**Options :**

4058596235. 0

4058596236. 1

4058596237. -1

4058596238. 27

**Question Number : 77 Question Id : 4058591924 Question Type : MCQ Option Shuffling : Yes Is Question Mandatory : No Calculator : None Response Time : N.A Think Time : N.A Minimum Instruction Time : 0**

**Correct Marks : 1 Wrong Marks : 0.25**

यदि  $\frac{1}{a^3} + \frac{1}{b^3} = \frac{1}{c^3}$ , तो  $(a + b - c)^3 + 27abc$  बराबर है :

**Options :**

4058596235. 0

4058596236. 1

4058596237. -1

4058596238. 27

**Question Number : 78 Question Id : 4058591925 Question Type : MCQ Option Shuffling : Yes Is Question Mandatory : No Calculator : None Response Time : N.A Think Time : N.A Minimum Instruction Time : 0**

**Correct Marks : 1 Wrong Marks : 0.25**

The number 325325 is divisible by :

**Options :**

4058596239. 7 and 19

4058596240. 19 and 13

4058596241. 23 and 13

4058596242. 11 and 13

**Question Number : 78 Question Id : 4058591925 Question Type : MCQ Option Shuffling : Yes Is Question Mandatory : No Calculator : None Response Time : N.A Think Time : N.A Minimum Instruction Time : 0**

**Correct Marks : 1 Wrong Marks : 0.25**

325325 संख्या किसके द्वारा विभाज्य है?

**Options :**

4058596239. 7 और 19

4058596240. 19 और 13

4058596241. 23 और 13

4058596242. 11 और 13

**Question Number : 79 Question Id : 4058591926 Question Type : MCQ Option Shuffling : Yes Is Question Mandatory : No Calculator : None Response Time : N.A Think Time : N.A Minimum Instruction Time : 0**

**Correct Marks : 1 Wrong Marks : 0.25**

The single digit value of  $k$  satisfying algebraic relation  $k + 1k + 2k + k4 + k2 = 19k$ , is :

**Options :**

4058596243. 7

4058596244. 6

4058596245. 5

4058596246. 4

**Question Number : 79 Question Id : 4058591926 Question Type : MCQ Option Shuffling : Yes Is**

**Question Mandatory : No Calculator : None Response Time : N.A Think Time : N.A Minimum**

**Instruction Time : 0**

**Correct Marks : 1 Wrong Marks : 0.25**

बीजगणितीय सम्बन्ध  $k + 1k + 2k + k^4 + k^2 = 19k$  में  $k$  का एक अंकीय मान है:

**Options :**

4058596243. 7

4058596244. 6

4058596245. 5

4058596246. 4

**Question Number : 80 Question Id : 4058591927 Question Type : MCQ Option Shuffling : Yes Is**

**Question Mandatory : No Calculator : None Response Time : N.A Think Time : N.A Minimum**

**Instruction Time : 0**

**Correct Marks : 1 Wrong Marks : 0.25**

If the sum of two numbers is 12 and their difference is 8, then the product of the two numbers, is :

**Options :**

4058596247. 16



4058596248. 18

4058596249. 20

4058596250. 22

**Question Number : 80 Question Id : 4058591927 Question Type : MCQ Option Shuffling : Yes Is Question Mandatory : No Calculator : None Response Time : N.A Think Time : N.A Minimum Instruction Time : 0**

**Correct Marks : 1 Wrong Marks : 0.25**

यदि दो संख्याओं का योग 12 है और उनका अन्तर 8 है, तो इन दो संख्याओं का गुणनफल होगा:

**Options :**

4058596247. 16

4058596248. 18

4058596249. 20

4058596250. 22

**Question Number : 81 Question Id : 4058591928 Question Type : MCQ Option Shuffling : Yes Is Question Mandatory : No Calculator : None Response Time : N.A Think Time : N.A Minimum Instruction Time : 0**

**Correct Marks : 1 Wrong Marks : 0.25**

The L.C.M. of 33, 54, 108, 165 and 198 is :

**Options :**

4058596251. 4960

4058596252. 5010

4058596253. 5940

4058596254. 6010

**Question Number : 81 Question Id : 4058591928 Question Type : MCQ Option Shuffling : Yes Is Question Mandatory : No Calculator : None Response Time : N.A Think Time : N.A Minimum Instruction Time : 0**

**Correct Marks : 1 Wrong Marks : 0.25**

33, 54, 108, 165 और 198 का लघुत्तम समापवर्त्य है:

**Options :**

4058596251. 4960

4058596252. 5010

4058596253. 5940

4058596254. 6010

**Question Number : 82 Question Id : 4058591929 Question Type : MCQ Option Shuffling : Yes Is Question Mandatory : No Calculator : None Response Time : N.A Think Time : N.A Minimum Instruction Time : 0**

**Correct Marks : 1 Wrong Marks : 0.25**

A dishonest shopkeeper professes to sell grains with only 4% profit, but uses a faulty weight and gives only 800 gm in place of 1 kg. The actual profit percentage of the shopkeeper, is :

**Options :**

4058596255. 24%

4058596256. 26%

4058596257. 28%

4058596258. 30%

**Question Number : 82 Question Id : 4058591929 Question Type : MCQ Option Shuffling : Yes Is**

**Question Mandatory : No Calculator : None Response Time : N.A Think Time : N.A Minimum**

**Instruction Time : 0**

**Correct Marks : 1 Wrong Marks : 0.25**

एक बेईमान दुकानदार अनाज बेचकर केवल 4% मुनाफा कमाने का दावा करता है, परंतु वह दोषपूर्ण बाट का उपयोग करता है तथा 1 किलोग्राम की जगह 800 ग्राम अनाज देता है। दुकानदार द्वारा अर्जित वास्तविक मुनाफे का प्रतिशत है:

**Options :**

4058596255. 24%

4058596256. 26%

4058596257. 28%

4058596258. 30%

**Question Number : 83 Question Id : 4058591930 Question Type : MCQ Option Shuffling : Yes Is**

**Question Mandatory : No Calculator : None Response Time : N.A Think Time : N.A Minimum**

**Instruction Time : 0**

**Correct Marks : 1 Wrong Marks : 0.25**

$$\frac{2^{n+5} - 4(2^n)}{2(2^{n+4})} =$$

**Options :**

4058596259.

$$2^{n+1} - \frac{1}{4}$$

4058596260.  $2^n + 1$

4058596261.  $-2^n + 1$

4058596262.  $\frac{7}{8}$

**Question Number : 83 Question Id : 4058591930 Question Type : MCQ Option Shuffling : Yes Is Question Mandatory : No Calculator : None Response Time : N.A Think Time : N.A Minimum Instruction Time : 0**

**Correct Marks : 1 Wrong Marks : 0.25**

$$\frac{2^{n+5} - 4(2^n)}{2(2^{n+4})} =$$

**Options :**

4058596259.  $2^{n+1} - \frac{1}{4}$

4058596260.  $2^n + 1$

4058596261.  $-2^n + 1$

4058596262.  $\frac{7}{8}$

**Question Number : 84 Question Id : 4058591931 Question Type : MCQ Option Shuffling : Yes Is Question Mandatory : No Calculator : None Response Time : N.A Think Time : N.A Minimum Instruction Time : 0**

**Correct Marks : 1 Wrong Marks : 0.25**

Three partners A, B and C started a business. Twice A's investment is equal to thrice B's investment and B's investment is four times C's investment. Out of a total profit of ₹ 49500 at the end of the year, B's share in the profit is :

**Options :**

4058596263. ₹ 12,000

4058596264. ₹ 14,000

4058596265. ₹ 16,000

4058596266. ₹ 18,000

**Question Number : 84 Question Id : 4058591931 Question Type : MCQ Option Shuffling : Yes Is**

**Question Mandatory : No Calculator : None Response Time : N.A Think Time : N.A Minimum**

**Instruction Time : 0**

**Correct Marks : 1 Wrong Marks : 0.25**

तीन साझेदार A, B और C मिलकर एक व्यवसाय आरंभ करते हैं। A के निवेश का दुगुना B के निवेश के तिगुने के समान है तथा B का निवेश C के निवेश का चार गुना है। वर्ष के अंत में ₹ 49,500 के कुल लाभ में B का भाग है:

**Options :**

4058596263. ₹ 12,000

4058596264. ₹ 14,000

4058596265. ₹ 16,000

4058596266. ₹ 18,000

**Question Number : 85 Question Id : 4058591932 Question Type : MCQ Option Shuffling : Yes Is**

**Question Mandatory : No Calculator : None Response Time : N.A Think Time : N.A Minimum**

**Instruction Time : 0**

**Correct Marks : 1 Wrong Marks : 0.25**

In a certain election 92% of the total voters cast their votes and the winning candidate got elected with 75% of the votes polled. What percent of the number of total votes did he get?

**Options :**

4058596267. 57%

4058596268. 69%

4058596269. 67%

4058596270. 72%

**Question Number : 85 Question Id : 4058591932 Question Type : MCQ Option Shuffling : Yes Is**

**Question Mandatory : No Calculator : None Response Time : N.A Think Time : N.A Minimum**

**Instruction Time : 0**

**Correct Marks : 1 Wrong Marks : 0.25**

किसी चुनाव में 92% मतदाताओं ने मतदान किया तथा विजेता उम्मीदवार मतदान किये गये कुल मतों के 75% से निर्वाचित हुआ। उसे कुल मतों का कितना प्रतिशत प्राप्त हुआ?

**Options :**

4058596267. 57%

4058596268. 69%

4058596269. 67%

4058596270. 72%

**Question Number : 86 Question Id : 4058591933 Question Type : MCQ Option Shuffling : Yes Is**

**Question Mandatory : No Calculator : None Response Time : N.A Think Time : N.A Minimum**

**Instruction Time : 0**

**Correct Marks : 1 Wrong Marks : 0.25**

A boat can go three-quarter of a kilometer upstream in 11 minutes 15 seconds and also cover the same distance downstream in 7 minutes 30 seconds. The speed of boat in still water, is :

**Options :**

4058596271. 2 km/h

4058596272. 3 km/h

4058596273. 4 km/h

4058596274. 5 km/h

**Question Number : 86 Question Id : 4058591933 Question Type : MCQ Option Shuffling : Yes Is**

**Question Mandatory : No Calculator : None Response Time : N.A Think Time : N.A Minimum**

**Instruction Time : 0**

**Correct Marks : 1 Wrong Marks : 0.25**

एक नाव धारा की विपरीत दिशा में तीन चौथाई किलोमीटर 11 मिनट 15 सेकेण्ड में जा सकती है और समान दूरी को धारा की दिशा में 7 मिनट 30 सेकेण्ड में तय कर सकती है। शान्त जल में नाव की गति है:

**Options :**

4058596271. 2 किमी प्रति घण्टा

4058596272. 3 किमी प्रति घण्टा

4058596273. 4 किमी प्रति घण्टा

4058596274. 5 किमी प्रति घण्टा

**Question Number : 87 Question Id : 4058591934 Question Type : MCQ Option Shuffling : Yes Is Question Mandatory : No Calculator : None Response Time : N.A Think Time : N.A Minimum Instruction Time : 0**

**Correct Marks : 1 Wrong Marks : 0.25**

The incomes of A and B are in the ratio 9 : 4 and their expenditures are in the ratio 7 : 3. If A saves  $\frac{1}{5}$  of his income, then the ratio of their savings is :

**Options :**

4058596275. 63 : 32

4058596276. 69 : 35

4058596277. 9 : 5

4058596278. 36 : 23

**Question Number : 87 Question Id : 4058591934 Question Type : MCQ Option Shuffling : Yes Is Question Mandatory : No Calculator : None Response Time : N.A Think Time : N.A Minimum Instruction Time : 0**

**Correct Marks : 1 Wrong Marks : 0.25**

A तथा B की आय का अनुपात 9 : 4 है और उनके व्यय का अनुपात 7 : 3 है। यदि A अपनी आय का  $\frac{1}{5}$  भाग बचाता है, तो उनकी बचतों का अनुपात है:

**Options :**

4058596275. 63 : 32

4058596276. 69 : 35

4058596277. 9 : 5

4058596278. 36 : 23



**Question Number : 88 Question Id : 4058591935 Question Type : MCQ Option Shuffling : Yes Is Question Mandatory : No Calculator : None Response Time : N.A Think Time : N.A Minimum Instruction Time : 0**

**Correct Marks : 1 Wrong Marks : 0.25**

Jayant gave 20% of his savings to his elder son, 30% of the rest to his younger son and 10% of the still remaining as donation to a trust. He is left with ₹ 5040. Find his total savings.

**Options :**

4058596279. ₹ 25,000

4058596280. ₹ 20,000

4058596281. ₹ 15,000

4058596282. ₹ 10,000

**Question Number : 88 Question Id : 4058591935 Question Type : MCQ Option Shuffling : Yes Is Question Mandatory : No Calculator : None Response Time : N.A Think Time : N.A Minimum Instruction Time : 0**

**Correct Marks : 1 Wrong Marks : 0.25**

जयन्त ने अपनी बचत का 20% अपने बड़े बेटे को दे दिया, शेष का 30% अपने छोटे बेटे को और अभी भी शेष का 10% एक न्यास को दान के रूप में दे दिया। अब उसके पास ₹ 5,040 बचे हैं। उसकी कुल बचत है:

**Options :**

4058596279. ₹ 25,000

4058596280. ₹ 20,000

4058596281. ₹ 15,000

4058596282. ₹ 10,000

**Question Number : 89 Question Id : 4058591936 Question Type : MCQ Option Shuffling : Yes Is**

**Question Mandatory : No Calculator : None Response Time : N.A Think Time : N.A Minimum**

**Instruction Time : 0**

**Correct Marks : 1 Wrong Marks : 0.25**

The average age of 6 sons of a family is 8 years. The average age of the sons together with their parents is 22 years. If the father is 8 years older than the mother, then the age of father (in years) is :

**Options :**

4058596283. 70

4058596284. 68

4058596285. 66

4058596286. 65

**Question Number : 89 Question Id : 4058591936 Question Type : MCQ Option Shuffling : Yes Is**

**Question Mandatory : No Calculator : None Response Time : N.A Think Time : N.A Minimum**

**Instruction Time : 0**

**Correct Marks : 1 Wrong Marks : 0.25**

एक परिवार के 6 पुत्रों की औसत आयु 8 वर्ष है। पुत्रों तथा माता-पिता की औसत आयु 22 वर्ष है। यदि पिता, माता से 8 वर्ष बड़े हैं तो पिता की आयु (वर्षों में) है-

**Options :**

4058596283. 70

4058596284. 68

4058596285. 66

4058596286. 65

**Question Number : 90 Question Id : 4058591937 Question Type : MCQ Option Shuffling : Yes Is**

**Question Mandatory : No Calculator : None Response Time : N.A Think Time : N.A Minimum**

**Instruction Time : 0**

**Correct Marks : 1 Wrong Marks : 0.25**

Two mixtures A and B contain milk and water in the ratio 4 : 5 and 7 : 4, respectively. In what ratio the two mixtures be mixed to obtain a new mixture having 55% milk?

**Options :**

4058596287. 5 : 7

4058596288. 7 : 9

4058596289. 9 : 11

4058596290. 11 : 13

**Question Number : 90 Question Id : 4058591937 Question Type : MCQ Option Shuffling : Yes Is**

**Question Mandatory : No Calculator : None Response Time : N.A Think Time : N.A Minimum**

**Instruction Time : 0**

**Correct Marks : 1 Wrong Marks : 0.25**

दो मिश्रणों A और B में दूध तथा पानी का अनुपात क्रमशः 4 : 5 तथा 7 : 4 है। इन दोनों मिश्रणों को किस अनुपात में मिला दिया जाए कि नये मिश्रण में दूध 55% हो जाये ?

**Options :**

4058596287. 5 : 7

4058596288. 7 : 9

4058596289. 9 : 11

4058596290. 11 : 13

**Question Number : 91 Question Id : 4058591938 Question Type : MCQ Option Shuffling : Yes Is**

**Question Mandatory : No Calculator : None Response Time : N.A Think Time : N.A Minimum**

**Instruction Time : 0**

**Correct Marks : 1 Wrong Marks : 0.25**

A starts a business with ₹ 42,000 and is joined afterwards by B with ₹ 72,000.  
After how many months did B join if the profits at the end of the year are divided equally?

**Options :**

4058596291. 4

4058596292. 5

4058596293. 7

4058596294. 8

**Question Number : 91 Question Id : 4058591938 Question Type : MCQ Option Shuffling : Yes Is**

**Question Mandatory : No Calculator : None Response Time : N.A Think Time : N.A Minimum**

**Instruction Time : 0**

**Correct Marks : 1 Wrong Marks : 0.25**

A ने एक व्यापार ₹ 42,000 से आरंभ किया तथा कुछ महीनों बाद B ₹ 72,000 के साथ  
उसमें सम्मिलित हुआ। यदि वर्ष के अंत में लाभ को बराबर बाँटा गया तो B कितने महीनों  
के बाद जुड़ा?

**Options :**

4058596291. 4

4058596292. 5

4058596293. 7

4058596294. 8

**Question Number : 92 Question Id : 4058591939 Question Type : MCQ Option Shuffling : Yes Is Question Mandatory : No Calculator : None Response Time : N.A Think Time : N.A Minimum Instruction Time : 0**

**Correct Marks : 1 Wrong Marks : 0.25**

A room cooler is marked for ₹ 13,500 and is available at an off-season discount of 15%. The shopkeeper offers another discount to his friend and sells the cooler for ₹ 10,557. The percentage of second discount given to his friend, is :

**Options :**

4058596295. 6%

4058596296. 8%

4058596297. 10%

4058596298. 9%

**Question Number : 92 Question Id : 4058591939 Question Type : MCQ Option Shuffling : Yes Is Question Mandatory : No Calculator : None Response Time : N.A Think Time : N.A Minimum Instruction Time : 0**

**Correct Marks : 1 Wrong Marks : 0.25**

किसी रूम कूलर का अंकित मूल्य ₹ 13,500 है और यह मौसम बदलने पर 15% बट्टे पर उपलब्ध है। दुकानदार अपने मित्र को एक और बट्टा देकर ₹ 10,557 में बेचता है। अपने मित्र को दिये जाने वाले दूसरे बट्टे का प्रतिशत है:

**Options :**

4058596295. 6%

4058596296. 8%

4058596297. 10%

4058596298. 9%

**Question Number : 93 Question Id : 4058591940 Question Type : MCQ Option Shuffling : Yes Is Question Mandatory : No Calculator : None Response Time : N.A Think Time : N.A Minimum Instruction Time : 0**

**Correct Marks : 1 Wrong Marks : 0.25**

If  $16\%$  of  $250 + 115\%$  of  $480 = 10\%$  of  $N$ , then what is the value of  $N$ ?

**Options :**

4058596299. 5220

4058596300. 5880

4058596301. 5920

4058596302. 4980

**Question Number : 93 Question Id : 4058591940 Question Type : MCQ Option Shuffling : Yes Is Question Mandatory : No Calculator : None Response Time : N.A Think Time : N.A Minimum Instruction Time : 0**

**Correct Marks : 1 Wrong Marks : 0.25**

यदि  $250$  का  $16\% + 480$  का  $115\% = N$  का  $10\%$ , तो  $N$  का मान क्या होगा?

**Options :**

4058596299. 5220

4058596300. 5880

4058596301. 5920

4058596302. 4980

**Question Number : 94 Question Id : 4058591941 Question Type : MCQ Option Shuffling : Yes Is**

**Question Mandatory : No Calculator : None Response Time : N.A Think Time : N.A Minimum**

**Instruction Time : 0**

**Correct Marks : 1 Wrong Marks : 0.25**

A piece of work can be done by Ram in 10 days. If Mohan joined him and both together finished the work in 6 days, then the ratio of their one day work is :

**Options :**

4058596303. 1 : 3

4058596304. 2 : 3

4058596305. 3 : 2

4058596306. 3 : 1

**Question Number : 94 Question Id : 4058591941 Question Type : MCQ Option Shuffling : Yes Is**

**Question Mandatory : No Calculator : None Response Time : N.A Think Time : N.A Minimum**

**Instruction Time : 0**

**Correct Marks : 1 Wrong Marks : 0.25**

राम किसी काम को 10 दिनों में पूरा कर सकता है। यदि मोहन भी उसके साथ में जुड़ जाए तो दोनों साथ में मिलकर उस काम को 6 दिनों में पूरा कर लेते हैं। उनके एक दिन के काम का अनुपात है:

**Options :**

4058596303. 1 : 3

4058596304. 2 : 3

4058596305. 3 : 2

4058596306. 3 : 1

**Question Number : 95 Question Id : 4058591942 Question Type : MCQ Option Shuffling : Yes Is Question Mandatory : No Calculator : None Response Time : N.A Think Time : N.A Minimum Instruction Time : 0**

**Correct Marks : 1 Wrong Marks : 0.25**

A shopkeeper sold an item for ₹ 528 and suffered a loss of 4%. In order to get 10% profit, for how much should he have sold the item?

**Options :**

4058596307. ₹ 605

4058596308. ₹ 584

4058596309. ₹ 550

4058596310. ₹ 542

**Question Number : 95 Question Id : 4058591942 Question Type : MCQ Option Shuffling : Yes Is Question Mandatory : No Calculator : None Response Time : N.A Think Time : N.A Minimum Instruction Time : 0**

**Correct Marks : 1 Wrong Marks : 0.25**

एक दुकानदार ने किसी वस्तु को ₹ 528 में बेचा और उसे 4% की हानि हुई। 10% का लाभ प्राप्त करने के लिए उसे उस वस्तु को किस मूल्य पर बेचना चाहिए था?

**Options :**

4058596307. ₹ 605

4058596308. ₹ 584

4058596309. ₹ 550



Question Number : 96 Question Id : 4058591943 Question Type : MCQ Option Shuffling : Yes Is

Question Mandatory : No Calculator : None Response Time : N.A Think Time : N.A Minimum

Instruction Time : 0

Correct Marks : 1 Wrong Marks : 0.25

The value of  $\frac{1}{1+p^{(y-z)}+p^{(x-z)}} + \frac{1}{1+p^{(x-y)}+p^{(z-y)}} + \frac{1}{1+p^{(y-x)}+p^{(z-x)}}$  is

:

Options :

4058596311. 3

4058596312. 1

4058596313. 0

4058596314. -1

Question Number : 96 Question Id : 4058591943 Question Type : MCQ Option Shuffling : Yes Is

Question Mandatory : No Calculator : None Response Time : N.A Think Time : N.A Minimum

Instruction Time : 0

Correct Marks : 1 Wrong Marks : 0.25

$\frac{1}{1+p^{(y-z)}+p^{(x-z)}} + \frac{1}{1+p^{(x-y)}+p^{(z-y)}} + \frac{1}{1+p^{(y-x)}+p^{(z-x)}}$  का मान

है:

Options :

4058596311. 3

4058596312. 1

4058596313. 0

4058596314. -1

**Question Number : 97 Question Id : 4058591944 Question Type : MCQ Option Shuffling : Yes Is Question Mandatory : No Calculator : None Response Time : N.A Think Time : N.A Minimum Instruction Time : 0**

**Correct Marks : 1 Wrong Marks : 0.25**

A sum of money becomes double in  $R$  years at an annual rate of simple interest. What is the annual rate of interest?

**Options :**

4058596315. 9%

4058596316. 10%

4058596317. 12%

4058596318. 7%

**Question Number : 97 Question Id : 4058591944 Question Type : MCQ Option Shuffling : Yes Is Question Mandatory : No Calculator : None Response Time : N.A Think Time : N.A Minimum Instruction Time : 0**

**Correct Marks : 1 Wrong Marks : 0.25**

कोई धन राशि  $R$  वर्षों में साधारण ब्याज की वार्षिक दर पर दो गुनी हो जाती है। ब्याज की वार्षिक दर क्या है?

**Options :**

4058596315. 9%

4058596316. 10%

4058596317. 12%

4058596318. 7%

**Question Number : 98 Question Id : 4058591945 Question Type : MCQ Option Shuffling : Yes Is Question Mandatory : No Calculator : None Response Time : N.A Think Time : N.A Minimum Instruction Time : 0**

**Correct Marks : 1 Wrong Marks : 0.25**

A milkman has 3 vessels containing 67 litres, 139 litres and 187 litres, respectively of pure milk. A measuring jar, after a different number of exact measurements of milk in each vessel, leaves the same amount of milk unmeasured in each vessel. What is the volume of the largest such jar?

**Options :**

4058596319. 24 litres

4058596320. 18 litres

4058596321. 16 litres

4058596322. 12 litres

**Question Number : 98 Question Id : 4058591945 Question Type : MCQ Option Shuffling : Yes Is Question Mandatory : No Calculator : None Response Time : N.A Think Time : N.A Minimum Instruction Time : 0**

**Correct Marks : 1 Wrong Marks : 0.25**

किसी ग्वाले के पास तीन बर्तन क्रमशः 67 लीटर, 139 लीटर तथा 187 लीटर के हैं। प्रत्येक बर्तन में दूध के सटीक मापन की विभिन्न संख्या के बाद एक मापन जार प्रत्येक बर्तन में समान परिमाण में अमापित दूध छोड़ देता है। इस प्रकार के सबसे बड़े जार का आयतन क्या है?

**Options :**

4058596319. 24 लीटर

4058596320. 18 लीटर

4058596321. 16 लीटर

4058596322. 12 लीटर

**Question Number : 99 Question Id : 4058591946 Question Type : MCQ Option Shuffling : Yes Is Question Mandatory : No Calculator : None Response Time : N.A Think Time : N.A Minimum Instruction Time : 0**

**Correct Marks : 1 Wrong Marks : 0.25**

$$(\overline{0.12562} \times \overline{0.3179}) \div (\overline{0.9537}) \times (\overline{0.25124}) =$$

**Options :**

4058596323. 2/3

4058596324. 3/5

4058596325. 1/3

4058596326. 1/6

**Question Number : 99 Question Id : 4058591946 Question Type : MCQ Option Shuffling : Yes Is Question Mandatory : No Calculator : None Response Time : N.A Think Time : N.A Minimum Instruction Time : 0**

**Correct Marks : 1 Wrong Marks : 0.25**

$$(\overline{0.12562} \times \overline{0.3179}) \div (\overline{0.9537}) \times (\overline{0.25124}) =$$

**Options :**

4058596323. 2/3

4058596324. 3/5

4058596325. 1/3

4058596326. 1/6

**Question Number : 100 Question Id : 4058591947 Question Type : MCQ Option Shuffling : Yes**

**Is Question Mandatory : No Calculator : None Response Time : N.A Think Time : N.A**

**Minimum Instruction Time : 0**

**Correct Marks : 1 Wrong Marks : 0.25**

If  $\left(\frac{0.007}{0.049} + \frac{0.049}{0.007}\right)^2 = \frac{2500}{K-1}$ , then value of  $k$  is :

**Options :**

4058596327. 50

4058596328. 49

4058596329. 24

4058596330. 0.07

**Question Number : 100 Question Id : 4058591947 Question Type : MCQ Option Shuffling : Yes**

**Is Question Mandatory : No Calculator : None Response Time : N.A Think Time : N.A**

**Minimum Instruction Time : 0**

**Correct Marks : 1 Wrong Marks : 0.25**

यदि  $\left(\frac{0.007}{0.049} + \frac{0.049}{0.007}\right)^2 = \frac{2500}{K-1}$ , तो  $k$  का मान है:

**Options :**

4058596327. 50

4058596328. 49

4058596329. 24

4058596330. 0.07

## Analytical & Logical Ability

<b>Section Id :</b>	405859111
<b>Section Number :</b>	4
<b>Section type :</b>	Online
<b>Mandatory or Optional :</b>	Mandatory
<b>Number of Questions :</b>	25
<b>Number of Questions to be attempted :</b>	25
<b>Section Marks :</b>	25
<b>Enable Mark as Answered Mark for Review and Clear Response :</b>	Yes
<b>Maximum Instruction Time :</b>	0
<b>Sub-Section Number :</b>	1
<b>Sub-Section Id :</b>	405859131
<b>Question Shuffling Allowed :</b>	Yes
<b>Is Section Default? :</b>	null

**Question Number : 101 Question Id : 4058591948 Question Type : MCQ Option Shuffling : Yes**

**Is Question Mandatory : No Calculator : None Response Time : N.A Think Time : N.A**

**Minimum Instruction Time : 0**

**Correct Marks : 1 Wrong Marks : 0.25**

Two adjacent faces of a cube are coloured and cut into 64 identical small cubes.  
How many of these small cubes are not coloured at all?

**Options :**

4058596331. 42

4058596332. 48

4058596333. 24

4058596334. 36

**Question Number : 101 Question Id : 4058591948 Question Type : MCQ Option Shuffling : Yes**

**Is Question Mandatory : No Calculator : None Response Time : N.A Think Time : N.A**

**Minimum Instruction Time : 0**

**Correct Marks : 1 Wrong Marks : 0.25**

एक घन के दो निकटवर्ती फलक रंगीन हैं और 64 समान लघु घनों में कटे हुए हैं। इन छोटे घनों में से कितने बिल्कुल रंगीन नहीं हैं?

**Options :**

4058596331. 42

4058596332. 48

4058596333. 24

4058596334. 36

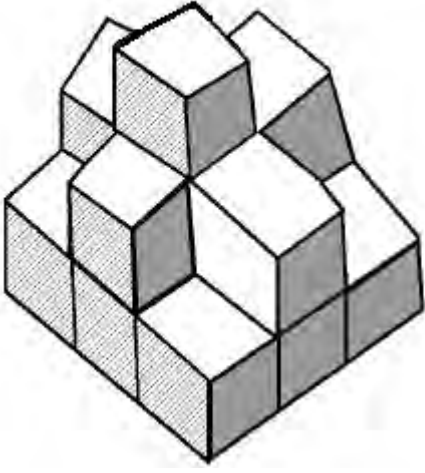
**Question Number : 102 Question Id : 4058591949 Question Type : MCQ Option Shuffling : Yes**

**Is Question Mandatory : No Calculator : None Response Time : N.A Think Time : N.A**

**Minimum Instruction Time : 0**

**Correct Marks : 1 Wrong Marks : 0.25**

Count the number of cubes in the given figure :



**Options :**

4058596335. 8

4058596336. 9

4058596337. 12

4058596338. 15

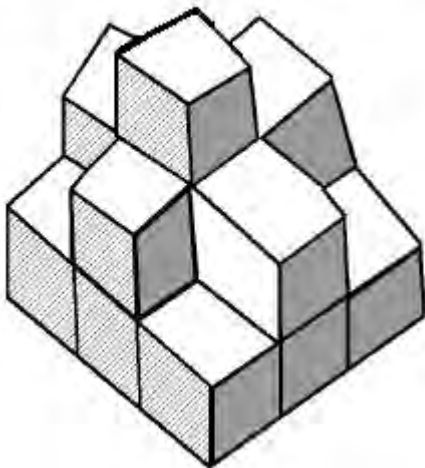
**Question Number : 102 Question Id : 4058591949 Question Type : MCQ Option Shuffling : Yes**

**Is Question Mandatory : No Calculator : None Response Time : N.A Think Time : N.A**

**Minimum Instruction Time : 0**

**Correct Marks : 1 Wrong Marks : 0.25**

दी गई आकृति में घनों की संख्या की गणना कीजिए:



**Options :**



4058596335. 8

4058596336. 9

4058596337. 12

4058596338. 15

**Question Number : 103 Question Id : 4058591950 Question Type : MCQ Option Shuffling : Yes**

**Is Question Mandatory : No Calculator : None Response Time : N.A Think Time : N.A**

**Minimum Instruction Time : 0**

**Correct Marks : 1 Wrong Marks : 0.25**

M, N, O, P, X, Y and Z are sitting around a circle facing the centre. Z is second to the left of O, who is to the immediate left of Y. M is third to the left of X. N is between P and X. Which of the following option is true?

**Options :**

4058596339. O is fourth to the left of N

4058596340. P is second to the left of X

4058596341. M is to the immediate right of Z

4058596342. N is second to the right of Z

**Question Number : 103 Question Id : 4058591950 Question Type : MCQ Option Shuffling : Yes**

**Is Question Mandatory : No Calculator : None Response Time : N.A Think Time : N.A**

**Minimum Instruction Time : 0**

**Correct Marks : 1 Wrong Marks : 0.25**

किसी वृत्त के चारों ओर केन्द्र की ओर अभिमुख होकर M, N, O, P, X, Y और Z बैठे हुए हैं। O, जो कि Y के निकटतम बायीं ओर है और O के बायीं ओर दूसरे स्थान पर Z है। M, X के बायीं ओर तीसरे स्थान पर है। P और X के मध्य N है तो निम्नलिखित में से कौन सा विकल्प सत्य है?

**Options :**

4058596339. N के बायीं ओर चौथे स्थान पर O है।

4058596340. X के बायीं ओर दूसरे स्थान पर P है।

4058596341. Z के निकटतम दायीं ओर M है।

4058596342. Z के दायीं ओर दूसरे स्थान पर N है।

**Question Number : 104 Question Id : 4058591951 Question Type : MCQ Option Shuffling : Yes**

**Is Question Mandatory : No Calculator : None Response Time : N.A Think Time : N.A**

**Minimum Instruction Time : 0**

**Correct Marks : 1 Wrong Marks : 0.25**

Seven soldiers are standing in a row facing North. B is standing left to C but right to A. F is standing right to G and left to A. Similarly D is standing right to C and left to E. Who are sitting between A and D?

**Options :**

4058596343. C and D

4058596344. B and C

4058596345. F and B

4058596346. B and E

**Question Number : 104 Question Id : 4058591951 Question Type : MCQ Option Shuffling : Yes**

**Is Question Mandatory : No Calculator : None Response Time : N.A Think Time : N.A**

**Minimum Instruction Time : 0**

**Correct Marks : 1 Wrong Marks : 0.25**

सात सैनिक एक पंक्ति में उत्तर दिशा की ओर मुख करके खड़े हैं। B, C के बायीं ओर है किंतु A के दायीं ओर है। F, G के दायीं ओर है और A के बायीं ओर है। इसी प्रकार D, C के दायीं ओर खड़ा है तथा E के बायीं ओर खड़ा है। A तथा D के मध्य कौन हैं?

**Options :**

4058596343. C और D

4058596344. B और C

4058596345. F और B

4058596346. B और E

**Question Number : 105 Question Id : 4058591952 Question Type : MCQ Option Shuffling : Yes**

**Is Question Mandatory : No Calculator : None Response Time : N.A Think Time : N.A**

**Minimum Instruction Time : 0**

**Correct Marks : 1 Wrong Marks : 0.25**

If  $A \times B$  means A is the brother of B.

$A \div B$  means A is the son of B

$A + B$  means A is the mother of B

$A - B$  means A is the husband of B

Which of the following would mean X is the father of Y?

**Options :**

4058596347.  $X \times Z - Y$

4058596348.  $X \div Y + Z$

4058596349.  $X - Z + Y$

4058596350.  $X + Z \div Y$

**Question Number : 105 Question Id : 4058591952 Question Type : MCQ Option Shuffling : Yes**

**Is Question Mandatory : No Calculator : None Response Time : N.A Think Time : N.A**

**Minimum Instruction Time : 0**

**Correct Marks : 1 Wrong Marks : 0.25**

यदि  $A \times B$  का अर्थ A, B का भाई है।

$A \div B$  का अर्थ A, B का बेटा है।

$A + B$  का अर्थ A, B की माता है।

$A - B$  का अर्थ A, B का पति है।

निम्नलिखित में से किस का अर्थ होगा कि Y के पिता X हैं?

**Options :**

4058596347.  $X \times Z - Y$

4058596348.  $X \div Y + Z$

4058596349.  $X - Z + Y$

4058596350.  $X + Z \div Y$

**Question Number : 106 Question Id : 4058591953 Question Type : MCQ Option Shuffling : Yes**

**Is Question Mandatory : No Calculator : None Response Time : N.A Think Time : N.A**

**Minimum Instruction Time : 0**

**Correct Marks : 1 Wrong Marks : 0.25**

Tejasva met Rakesh who is related to Tejasva because Tejasva is the father of Deepak who is married to Garima. Garima is the daughter of Rakesh. Garima has a daughter named Ishika. How is Tejasva related to Ishika?

**Options :**

4058596351. Father-in-law

4058596352. Uncle

4058596353. Grand father

4058596354. Brother

**Question Number : 106 Question Id : 4058591953 Question Type : MCQ Option Shuffling : Yes**

**Is Question Mandatory : No Calculator : None Response Time : N.A Think Time : N.A**

**Minimum Instruction Time : 0**

**Correct Marks : 1 Wrong Marks : 0.25**

तेजस्व राकेश से मिले जो तेजस्व के रिश्तेदार हैं क्योंकि तेजस्व दीपक के पिता हैं जो गरिमा से विवाहित है। गरिमा राकेश की पुत्री है। गरिमा की इशिका नाम की पुत्री है। तेजस्व का इशिका से क्या रिश्ता है?

**Options :**

4058596351. श्वसुर

4058596352. चाचा

4058596353. दादा

4058596354. भाई

**Question Number : 107 Question Id : 4058591954 Question Type : MCQ Option Shuffling : Yes**

**Is Question Mandatory : No Calculator : None Response Time : N.A Think Time : N.A**

**Minimum Instruction Time : 0**

**Correct Marks : 1 Wrong Marks : 0.25**

If 'X' stands for 'addition', '<' for 'subtraction', '÷' for 'division', '>' for 'multiplication', '=' for 'equal to', '≠' for 'greater than' and '≠' for 'less than' then state which of the following option is true?

**Options :**

4058596355.  $3 \times 4 > 2 - 9 + 3 < 3$

4058596356.  $5 \times 3 < 7 \div 8 + 4 \times 1$

4058596357.  $5 > 2 + 2 = 10 < 4 \times 8$

4058596358.  $3 \times 2 < 4 \div 16 > 2 + 4$

**Question Number : 107 Question Id : 4058591954 Question Type : MCQ Option Shuffling : Yes**

**Is Question Mandatory : No Calculator : None Response Time : N.A Think Time : N.A**

**Minimum Instruction Time : 0**

**Correct Marks : 1 Wrong Marks : 0.25**

यदि '×' का आशय 'योग' '<' का आशय 'घटाव', '÷' का 'भाग', '>' का 'गुणा', '=' का 'समान', '≠' का 'इससे बड़ा' तथा '≠' का 'इससे कम' है तो निम्नलिखित में से कौन सा विकल्प सही है?

**Options :**

4058596355.  $3 \times 4 > 2 - 9 + 3 < 3$

4058596356.  $5 \times 3 < 7 \div 8 + 4 \times 1$

4058596357.  $5 > 2 + 2 = 10 < 4 \times 8$

4058596358.  $3 \times 2 < 4 \div 16 > 2 + 4$

**Question Number : 108 Question Id : 4058591955 Question Type : MCQ Option Shuffling : Yes**

**Is Question Mandatory : No Calculator : None Response Time : N.A Think Time : N.A**

**Minimum Instruction Time : 0**

**Correct Marks : 1 Wrong Marks : 0.25**

In the following if signs '-' and '×' also numbers 4 and 8 are interchanged, then which of the following equations would be correct?

**Options :**

4058596359.  $8 - 4 \times 2 = 28$

4058596360.  $6 - 4 \times 8 = 40$

4058596361.  $4 - 8 \times 12 = 20$

4058596362.  $6 \times 4 - 8 = 30$

**Question Number : 108 Question Id : 4058591955 Question Type : MCQ Option Shuffling : Yes**

**Is Question Mandatory : No Calculator : None Response Time : N.A Think Time : N.A**

**Minimum Instruction Time : 0**

**Correct Marks : 1 Wrong Marks : 0.25**

निम्नलिखित में यदि चिह्न '-' और '×' को एक के स्थान पर दूसरे को और संख्याएँ 4 और 8 को भी एक के स्थान पर दूसरे को रख दिया जाए तो निम्नलिखित समीकरणों में से कौन सा सही होगा?

**Options :**

4058596359.  $8 - 4 \times 2 = 28$

4058596360.  $6 - 4 \times 8 = 40$

4058596361.  $4 - 8 \times 12 = 20$

4058596362.  $6 \times 4 - 8 = 30$

**Question Number : 109 Question Id : 4058591956 Question Type : MCQ Option Shuffling : Yes**

**Is Question Mandatory : No Calculator : None Response Time : N.A Think Time : N.A**

**Minimum Instruction Time : 0**

**Correct Marks : 1 Wrong Marks : 0.25**

Given question is based on the following arrangement of symbols, letters and numbers : Study carefully

↑ 9 B Q = \$ 2 5 R J @ L 3 @ Y M E 6 8 \* ÷ D F 4 β H 7 ©

How many such numbers are there in the arrangement each of which is immediately preceded by a symbol but not immediately followed by a letter?

**Options :**

4058596363. Nil

4058596364. One

4058596365. Two

4058596366. Three

**Question Number : 109 Question Id : 4058591956 Question Type : MCQ Option Shuffling : Yes**

**Is Question Mandatory : No Calculator : None Response Time : N.A Think Time : N.A**

**Minimum Instruction Time : 0**

**Correct Marks : 1 Wrong Marks : 0.25**

दिया गया प्रश्न-चिह्नों, वर्णों और संख्याओं की निम्नलिखित व्यवस्था पर आधारित है:  
ध्यानपूर्वक अध्ययन कीजिए

↑ 9 B Q = \$ 2 5 R J @ L 3 @ Y M E 6 8 \* ÷ D F 4 β H 7 ©

व्यवस्था में इस प्रकार की कितनी संख्याएँ हैं जिनके तुरंत पहले एक चिह्न है परन्तु तुरंत बाद एक वर्ण नहीं है?

**Options :**

4058596363. शून्य

4058596364. एक

4058596365. दो

4058596366. तीन



**Question Number : 110 Question Id : 4058591957 Question Type : MCQ Option Shuffling : Yes**

**Is Question Mandatory : No Calculator : None Response Time : N.A Think Time : N.A**

**Minimum Instruction Time : 0**

**Correct Marks : 1 Wrong Marks : 0.25**

Study the following arrangement carefully and answer the question below :

R E 5 D A P \$ 3 T I Q 7 9 B # 2 K % U 1 M W 4 \* J 8 N

Which of the following is exactly in the middle between 3 and 1 in the above arrangement?

**Options :**

4058596367. B

4058596368. K

4058596369. 9

4058596370. #

**Question Number : 110 Question Id : 4058591957 Question Type : MCQ Option Shuffling : Yes**

**Is Question Mandatory : No Calculator : None Response Time : N.A Think Time : N.A**

**Minimum Instruction Time : 0**

**Correct Marks : 1 Wrong Marks : 0.25**

निम्नलिखित संरूपण का ध्यानपूर्वक अध्ययन कीजिए और नीचे दिए गए प्रश्न का उत्तर दीजिए।

R E 5 D A P \$ 3 T I Q 7 9 B # 2 K % U 1 M W 4 \* J 8 N

उपर्युक्त व्यवस्था में 3 और 1 के ठीक मध्य में निम्नलिखित में से क्या है?

**Options :**

4058596367. B

4058596368. K

4058596369. 9

4058596370. #

**Question Number : 111 Question Id : 4058591958 Question Type : MCQ Option Shuffling : Yes**

**Is Question Mandatory : No Calculator : None Response Time : N.A Think Time : N.A**

**Minimum Instruction Time : 0**

**Correct Marks : 1 Wrong Marks : 0.25**

Mr. Khanna walked 40 meters towards East, took a right turn and walked 60 meters. Then he took a left turn and walked 40 meters. How far and in which direction is he now from the starting point?

**Options :**

4058596371. 80 meters, East

4058596372. 100 meters, South-East

4058596373. 80 meters, South-East

4058596374. 100 meters, South

**Question Number : 111 Question Id : 4058591958 Question Type : MCQ Option Shuffling : Yes**

**Is Question Mandatory : No Calculator : None Response Time : N.A Think Time : N.A**

**Minimum Instruction Time : 0**

**Correct Marks : 1 Wrong Marks : 0.25**

श्री. खन्ना पूर्व की ओर 40 मी. चलते हैं, वहाँ से वे दाहिनी ओर मुड़ते हैं और 60 मी. चलकर फिर वे बायीं ओर मुड़ते हैं और 40 मी. चलते हैं। अपने प्रारम्भ बिन्दु से वे अब कितनी दूर और किस दिशा में हैं?

**Options :**

4058596371.

80 मी., पूर्व

4058596372. 100 मी., दक्षिण-पूर्व

4058596373. 80 मी., दक्षिण-पूर्व

4058596374. 100 मी., दक्षिण

**Question Number : 112 Question Id : 4058591959 Question Type : MCQ Option Shuffling : Yes**

**Is Question Mandatory : No Calculator : None Response Time : N.A Think Time : N.A**

**Minimum Instruction Time : 0**

**Correct Marks : 1 Wrong Marks : 0.25**

A clock is so placed that at 12 noon its minute hand points towards North-East. In which direction does its hour hand point at 3 p.m. or 15 hrs.

**Options :**

4058596375. East

4058596376. South

4058596377. South-East

4058596378. North-East

**Question Number : 112 Question Id : 4058591959 Question Type : MCQ Option Shuffling : Yes**

**Is Question Mandatory : No Calculator : None Response Time : N.A Think Time : N.A**

**Minimum Instruction Time : 0**

**Correct Marks : 1 Wrong Marks : 0.25**

एक घड़ी इस तरह रखी हुई है कि ठीक बारह बजे इसकी मिनट वाली सूई उत्तर-पूर्व की ओर इंगित करती है। तीन बजे अपराहन या 15 बजे इसकी घंटे वाली सूई किस दिशा में होगी?

**Options :**

4058596375. पूर्व

4058596376. दक्षिण

4058596377. दक्षिण-पूर्व

4058596378. उत्तर-पूर्व

**Question Number : 113 Question Id : 4058591960 Question Type : MCQ Option Shuffling : Yes**

**Is Question Mandatory : No Calculator : None Response Time : N.A Think Time : N.A**

**Minimum Instruction Time : 0**

**Correct Marks : 1 Wrong Marks : 0.25**

Find the wrong term in the following number series :

5, 25, 125, 7, 49, 341, 9, 81, 729

**Options :**

4058596379. 125

4058596380. 81

4058596381. 341

4058596382. 49

**Question Number : 113 Question Id : 4058591960 Question Type : MCQ Option Shuffling : Yes**

**Is Question Mandatory : No Calculator : None Response Time : N.A Think Time : N.A**

**Minimum Instruction Time : 0**

**Correct Marks : 1 Wrong Marks : 0.25**

निम्नलिखित संख्या श्रृंखला में गलत संख्या का पता लगाइए:

5, 25, 125, 7, 49, 341, 9, 81, 729

**Options :**

4058596379. 125

4058596380. 81

4058596381. 341

4058596382. 49

**Question Number : 114 Question Id : 4058591961 Question Type : MCQ Option Shuffling : Yes**

**Is Question Mandatory : No Calculator : None Response Time : N.A Think Time : N.A**

**Minimum Instruction Time : 0**

**Correct Marks : 1 Wrong Marks : 0.25**

Find the missing term in the following number series :

5, 11, 12, 16, 21, 26, 32, \_\_\_\_ ? \_\_\_\_, 45, 61

**Options :**

4058596383. 41

4058596384. 40

4058596385. 38

4058596386. 37

**Question Number : 114 Question Id : 4058591961 Question Type : MCQ Option Shuffling : Yes**

**Is Question Mandatory : No Calculator : None Response Time : N.A Think Time : N.A**

**Minimum Instruction Time : 0**

**Correct Marks : 1 Wrong Marks : 0.25**

निम्नलिखित संख्या श्रृंखला में लुप्त संख्या का पता लगाइए:

5, 11, 12, 16, 21, 26, 32, \_\_\_\_?\_\_\_\_, 45, 61

**Options :**

4058596383. 41

4058596384. 40

4058596385. 38

4058596386. 37

**Question Number : 115 Question Id : 4058591962 Question Type : MCQ Option Shuffling : Yes**

**Is Question Mandatory : No Calculator : None Response Time : N.A Think Time : N.A**

**Minimum Instruction Time : 0**

**Correct Marks : 1 Wrong Marks : 0.25**

Find the missing terms (in order) in the following alphabet series :

a, d, c, f, \_\_\_\_?\_\_\_\_, h, g, \_\_\_\_?\_\_\_\_, i

**Options :**

4058596387. e, j

4058596388. e, k

4058596389. f, j

4058596390. l, k

**Question Number : 115 Question Id : 4058591962 Question Type : MCQ Option Shuffling : Yes**

**Is Question Mandatory : No Calculator : None Response Time : N.A Think Time : N.A**

**Minimum Instruction Time : 0**

**Correct Marks : 1 Wrong Marks : 0.25**

निम्नलिखित वर्णमाला श्रृंखला में लुप्त पदों (क्रमानुसार) को ज्ञात कीजिए:

a, d, c, f, \_\_?\_\_, h, g, \_\_?\_\_, i

**Options :**

4058596387. e, j

4058596388. e, k

4058596389. f, j

4058596390. l, k

**Question Number : 116 Question Id : 4058591963 Question Type : MCQ Option Shuffling : Yes**

**Is Question Mandatory : No Calculator : None Response Time : N.A Think Time : N.A**

**Minimum Instruction Time : 0**

**Correct Marks : 1 Wrong Marks : 0.25**

Find the odd term which does not fit into the series given below :

G4T, J10R, M20P, P43N, S90L, V185J

**Options :**

4058596391. G4T

4058596392. J10R

4058596393. M20P

4058596394. P43N

**Question Number : 116 Question Id : 4058591963 Question Type : MCQ Option Shuffling : Yes**

**Is Question Mandatory : No Calculator : None Response Time : N.A Think Time : N.A**

**Minimum Instruction Time : 0**

**Correct Marks : 1 Wrong Marks : 0.25**

वह भिन्न पद ज्ञात कीजिए जो नीचे दी गयी श्रृंखला में उपयुक्त नहीं है:

G4T, J10R, M20P, P43N, S90L, V185J

**Options :**

4058596391. G4T

4058596392. J10R

4058596393. M20P

4058596394. P43N

**Question Number : 117 Question Id : 4058591964 Question Type : MCQ Option Shuffling : Yes**

**Is Question Mandatory : No Calculator : None Response Time : N.A Think Time : N.A**

**Minimum Instruction Time : 0**

**Correct Marks : 1 Wrong Marks : 0.25**

In a certain code, STOVE is written as FNBLK, then how will VOTES be written in the same code?

**Options :**

4058596395. FLKBN

4058596396. LBNKF

4058596397. LKNBF

4058596398. LNBKF



**Question Number : 117 Question Id : 4058591964 Question Type : MCQ Option Shuffling : Yes**

**Is Question Mandatory : No Calculator : None Response Time : N.A Think Time : N.A**

**Minimum Instruction Time : 0**

**Correct Marks : 1 Wrong Marks : 0.25**

किसी निश्चित कूट में, STOVE को FNBLK के रूप में लिखा जाता है, तो उसी कूट में VOTES को किस रूप में लिखा जाएगा?

**Options :**

4058596395. FLKBN

4058596396. LBNKF

4058596397. LKNBF

4058596398. LNBKF

**Question Number : 118 Question Id : 4058591965 Question Type : MCQ Option Shuffling : Yes**

**Is Question Mandatory : No Calculator : None Response Time : N.A Think Time : N.A**

**Minimum Instruction Time : 0**

**Correct Marks : 1 Wrong Marks : 0.25**

In a certain code, O is written as E, A as C, M as I, P as N and C as S. How will COMPA be written in that code?

**Options :**

4058596399. SMINC

4058596400. SEIAC

4058596401. SEINC

4058596402. SEIMI

**Question Number : 118 Question Id : 4058591965 Question Type : MCQ Option Shuffling : Yes**

**Is Question Mandatory : No Calculator : None Response Time : N.A Think Time : N.A**

**Minimum Instruction Time : 0**

**Correct Marks : 1 Wrong Marks : 0.25**

किसी निश्चित कूट में, O को E के रूप में लिखा जाता है, A को C के रूप में, M को I के रूप में, P को N के रूप में तथा C को S के रूप में लिखा जाता है। उस कूट में COMPA को कैसे लिखा जाएगा?

**Options :**

4058596399. SMINC

4058596400. SEIAC

4058596401. SEINC

4058596402. SEIMI

**Question Number : 119 Question Id : 4058591966 Question Type : MCQ Option Shuffling : Yes**

**Is Question Mandatory : No Calculator : None Response Time : N.A Think Time : N.A**

**Minimum Instruction Time : 0**

**Correct Marks : 1 Wrong Marks : 0.25**

In the question given below, there are two statements labelled as Assertion (A) and Reason (R). Mark your answer as per the codes provided below :

**Assertion (A) :** A ship rises as it enters the sea from a river.

**Reason (R) :** The density of sea water is higher as compared to river water.

**Options :**

4058596403. Both (A) and (R) are true and (R) is the correct explanation of (A).

4058596404. Both (A) and (R) are true but (R) is not correct explanation of (A).

4058596405. (A) is true but (R) is false.

4058596406. (A) is false but (R) is true

**Question Number : 119 Question Id : 4058591966 Question Type : MCQ Option Shuffling : Yes**

**Is Question Mandatory : No Calculator : None Response Time : N.A Think Time : N.A**

**Minimum Instruction Time : 0**

**Correct Marks : 1 Wrong Marks : 0.25**

नीचे दिए गए प्रश्न में अभिकथन (A) और कारण (R) नाम से दो कथन दिए गए हैं।

अभिकथन (A) : नदी से समुद्र में प्रवेश करते हुए जहाज उपर उठता है।

कारण (R) : नदी जल की तुलना में समुद्री जल का घनत्व अधिक होता है।

नीचे दिए गए कूटों के अनुसार अपना उत्तर चिह्नित कीजिए:

**Options :**

4058596403. (A) और (R) दोनों सही हैं, तथा (R), (A) का सही स्पष्टीकरण है।

4058596404. (A) और (R) दोनों सही हैं, किंतु (R), (A) का सही स्पष्टीकरण नहीं है।

4058596405. (A) सत्य है किंतु (R) असत्य है।

4058596406. (A) असत्य है किंतु (R) सत्य है।

**Question Number : 120 Question Id : 4058591967 Question Type : MCQ Option Shuffling : Yes**

**Is Question Mandatory : No Calculator : None Response Time : N.A Think Time : N.A**

**Minimum Instruction Time : 0**

**Correct Marks : 1 Wrong Marks : 0.25**

A statement is followed by two conclusions numbered (I) and (II). Assume everything in the statement to be true. Consider the two conclusions together and decide which of them logically follow/s beyond or reasonable doubt from the information given in the statement.

Statement : Money is a huge motivator for people.

Conclusions : (I) People can be motivated by some other factors other than money.

(II) People get motivated only when they expect to get some money for doing or behaving in a certain way.

**Options :**

4058596407. If only conclusion I follows

4058596408. If only conclusion II follows

4058596409. If either I or II follows

4058596410. If neither I nor II follows

**Question Number : 120 Question Id : 4058591967 Question Type : MCQ Option Shuffling : Yes**

**Is Question Mandatory : No Calculator : None Response Time : N.A Think Time : N.A**

**Minimum Instruction Time : 0**

**Correct Marks : 1 Wrong Marks : 0.25**

एक कथन के पश्चात दो निष्कर्ष (I) और (II) दिए गए हैं। मान लीजिए कि कथन में दी गई सभी बातें सत्य हैं, दोनों निष्कर्षों पर एक साथ विचार करें और निर्णय करें कि कथन में दी गई सूचना से उनमें से कौन तर्कसंगत रूप से संदेह से परे है।

कथन : धन लोगों के लिए बहुत बड़ा प्रेरक है।

निष्कर्ष : (I) लोग धन से भिन्न कुछ अन्य कारकों से भी प्रेरित हो सकते हैं।

(II) लोग केवल तभी प्रेरित होते हैं जब उन्हें कुछ करने या कतिपय तरीके से व्यवहार करने के लिए कुछ धन मिलने की आशा होती है।

**Options :**

4058596407. यदि केवल निष्कर्ष (I) अनुवर्ती है।

4058596408. यदि केवल निष्कर्ष (II) अनुवर्ती है।

4058596409. यदि या तो निष्कर्ष (I) या निष्कर्ष (II) अनुवर्ती है।

4058596410. यदि न तो निष्कर्ष (I) न ही निष्कर्ष (II) अनुवर्ती है।

**Question Number : 121 Question Id : 4058591968 Question Type : MCQ Option Shuffling : Yes**

**Is Question Mandatory : No Calculator : None Response Time : N.A Think Time : N.A**

**Minimum Instruction Time : 0**

**Correct Marks : 1 Wrong Marks : 0.25**

In the question below are given three statements followed by three conclusions numbered I, II and III. You have to take the given statements to be true, even if they seem to be at variance from the commonly known facts. Read all the conclusions and then decide which of the given conclusions logically follow/s from the given statements disregarding commonly known facts.

Statements : Some mountains are hillocks. Some mountains are rivers. Some mountains are valleys.

Conclusions : I. All mountains are either hillocks or rivers or valleys.

II. No valley is river.

III. Some rivers are valleys.

**Options :**

4058596411. None follows

4058596412. Only I follows

4058596413. Only either II or III follows

4058596414. Only III follows

Question Number : 121 Question Id : 4058591968 Question Type : MCQ Option Shuffling : Yes

Is Question Mandatory : No Calculator : None Response Time : N.A Think Time : N.A

Minimum Instruction Time : 0

Correct Marks : 1 Wrong Marks : 0.25

नीचे दिए गए प्रश्न में तीन कथन दिए गए हैं। उनके आधार पर (I), (II) व (III) तीन निष्कर्ष निकाले गए हैं। सामान्य ज्ञात तथ्य के अनुसार भिन्न लगने की स्थिति में भी आप इन सभी कथनों को सत्य मानें। निष्कर्षों को पढ़ें और तय करें कि सामान्य ज्ञात तथ्य के अनुसार भिन्न लगने की स्थिति में भी, दिए गए कथनों में से कौन-सा निष्कर्ष तार्किक रूप से सही लगता है।

कथन : कुछ पहाड़ टीले हैं। कुछ पहाड़ नदियाँ हैं। कुछ पहाड़ घाटियाँ हैं।

निष्कर्ष : (I) सभी पहाड़ या तो टीले हैं या नदियाँ या घाटियाँ हैं।

(II) कोई घाटी नदी नहीं है।

(III) कुछ नदियाँ घाटियाँ हैं।

उत्तर दीजिए:

Options :

4058596411. कोई उचित नहीं है।

4058596412. केवल (I) उचित है।

4058596413. केवल (II) अथवा (III) उचित हैं।

4058596414. केवल (III) उचित है।

Question Number : 122 Question Id : 4058591969 Question Type : MCQ Option Shuffling : Yes

Is Question Mandatory : No Calculator : None Response Time : N.A Think Time : N.A

Minimum Instruction Time : 0

Correct Marks : 1 Wrong Marks : 0.25

In a certain year, 15 August is on Wednesday and my birthday falls on 4th Friday of the same month. What is the date of my birthday?

Options :

4058596415. 22 August

4058596416. 24 August

4058596417. 17 August

4058596418. 26 August

**Question Number : 122 Question Id : 4058591969 Question Type : MCQ Option Shuffling : Yes**

**Is Question Mandatory : No Calculator : None Response Time : N.A Think Time : N.A**

**Minimum Instruction Time : 0**

**Correct Marks : 1 Wrong Marks : 0.25**

किसी वर्ष में 15 अगस्त को बुधवार है और मेरा जन्म दिन उसी महीने के चौथे शुक्रवार को है। मेरे जन्म दिन की कौन-सी तारीख है?

**Options :**

4058596415. 22 अगस्त

4058596416. 24 अगस्त

4058596417. 17 अगस्त

4058596418. 26 अगस्त

**Question Number : 123 Question Id : 4058591970 Question Type : MCQ Option Shuffling : Yes**

**Is Question Mandatory : No Calculator : None Response Time : N.A Think Time : N.A**

**Minimum Instruction Time : 0**

**Correct Marks : 1 Wrong Marks : 0.25**

N ranks fifth in a class. S is eighth from the last. T is sixth after N and just in the middle of N and S. How many students are there in the class?

**Options :**

4058596419. 23

4058596420. 24

4058596421. 25

4058596422. 26

**Question Number : 123 Question Id : 4058591970 Question Type : MCQ Option Shuffling : Yes**

**Is Question Mandatory : No Calculator : None Response Time : N.A Think Time : N.A**

**Minimum Instruction Time : 0**

**Correct Marks : 1 Wrong Marks : 0.25**

कक्षा में N का पाँचवा स्थान है। S का स्थान अंतिम से आठवां है। N के बाद T छठे स्थान पर है तथा N और S के ठीक बीच में है। कक्षा में कुल कितने विद्यार्थी हैं?

**Options :**

4058596419. 23

4058596420. 24

4058596421. 25

4058596422. 26

**Question Number : 124 Question Id : 4058591971 Question Type : MCQ Option Shuffling : Yes**

**Is Question Mandatory : No Calculator : None Response Time : N.A Think Time : N.A**

**Minimum Instruction Time : 0**

**Correct Marks : 1 Wrong Marks : 0.25**



A statement is followed by two courses of action numbers I and II. Assume everything in the statement to be true and on the basis of the information given in the statement, decide which of the suggested courses of action logically follow(s) for pursuing.

Statement : There has been large number of cases of internet hacking in the recent months. Which has created panic among the internet users.

Courses of action :

(I) The Government should make all the efforts to catch those who are responsible and put them behind bars.

(II) The internet users should be advised not to use internet till the hackers are caught.

**Options :**

4058596423. If both (I) and (II) follow for pursuing

4058596424. If only (II) follows for pursuing

4058596425. If either (I) or (II) follows for pursuing

4058596426. If only (I) follows for pursuing

**Question Number : 124 Question Id : 4058591971 Question Type : MCQ Option Shuffling : Yes**

**Is Question Mandatory : No Calculator : None Response Time : N.A Think Time : N.A**

**Minimum Instruction Time : 0**

**Correct Marks : 1 Wrong Marks : 0.25**

एक कथन के पश्चात दो कार्यवाहियाँ (I) और (II) दी गई हैं। मान लीजिए इस कथन में दी गई प्रत्येक बात सत्य है और इस कथन में दी गई सूचना के आधार पर निर्णय करें कि बताई गई कार्यवाहियों में से कौन तर्कसंगत रूप से अनुपालन करने हेतु उचित हैं।

कथन : हाल के महीनों में बड़ी संख्या में इंटरनेट हैकिंग के मामले आए हैं जिसने इंटरनेट उपयोगकर्ताओं के बीच आतंक फैला दिया है।

कार्यवाहियाँ : (I) सरकार को इसके लिए जिम्मेदार लोगों को पकड़ने तथा उन्हें जेल में बंद करने के लिए सभी प्रयास करने चाहिए।

(II) इंटरनेट उपयोगकर्ताओं को यह सलाह देनी चाहिए कि जब तक हैकर नहीं पकड़े जाते वे इंटरनेट का प्रयोग नहीं करें।

**Options :**

4058596423. यदि दोनों (I) और (II) अनुपालन करने हेतु उचित हैं।

4058596424. यदि केवल (II) अनुपालन करने हेतु उचित हैं।

4058596425. यदि या तो (I) या (II) अनुपालन करने हेतु उचित हैं।

4058596426. यदि केवल (I) अनुपालन करने हेतु उचित हैं।

**Question Number : 125 Question Id : 4058591972 Question Type : MCQ Option Shuffling : Yes**

**Is Question Mandatory : No Calculator : None Response Time : N.A Think Time : N.A**

**Minimum Instruction Time : 0**

**Correct Marks : 1 Wrong Marks : 0.25**

If AT = 20

BAT = 40

Then CAT will be equal to :

**Options :**

4058596427. 30

4058596428. 50

4058596429. 60

4058596430. 70

**Question Number : 125 Question Id : 4058591972 Question Type : MCQ Option Shuffling : Yes**

**Is Question Mandatory : No Calculator : None Response Time : N.A Think Time : N.A**

**Minimum Instruction Time : 0**

**Correct Marks : 1 Wrong Marks : 0.25**

AT = 20

BAT = 40

तो CAT समान होगा:

**Options :**

4058596427. 30

4058596428. 50

4058596429. 60

4058596430. 70

## **General Knowledge And Current Affairs**

<b>Section Id :</b>	405859112
<b>Section Number :</b>	5
<b>Section type :</b>	Online
<b>Mandatory or Optional :</b>	Mandatory
<b>Number of Questions :</b>	25
<b>Number of Questions to be attempted :</b>	25
<b>Section Marks :</b>	25
<b>Enable Mark as Answered Mark for Review and Clear Response :</b>	Yes
<b>Maximum Instruction Time :</b>	0
<b>Sub-Section Number :</b>	1
<b>Sub-Section Id :</b>	405859132
<b>Question Shuffling Allowed :</b>	Yes
<b>Is Section Default? :</b>	null

**Question Number : 126 Question Id : 4058591973 Question Type : MCQ Option Shuffling : Yes**

**Is Question Mandatory : No Calculator : None Response Time : N.A Think Time : N.A**

**Minimum Instruction Time : 0**

**Correct Marks : 1 Wrong Marks : 0.25**

Who is the present Comptroller & Auditor General of India?

**Options :**

4058596431. Girish Chandra Murmu

4058596432. Manoj Soni

4058596433. Vinod Rai

4058596434. A. K. Bhalla

**Question Number : 126 Question Id : 4058591973 Question Type : MCQ Option Shuffling : Yes**

**Is Question Mandatory : No Calculator : None Response Time : N.A Think Time : N.A**

**Minimum Instruction Time : 0**

**Correct Marks : 1 Wrong Marks : 0.25**

भारत के वर्तमान नियंत्रक एवं महालेखा परीक्षक कौन हैं?

**Options :**

4058596431. गिरिश चंद्र मुर्मू

4058596432. मनोज सोनी

4058596433. विनोद राय

4058596434. ए. के. भल्ला

Question Number : 127 Question Id : 4058591974 Question Type : MCQ Option Shuffling : Yes

Is Question Mandatory : No Calculator : None Response Time : N.A Think Time : N.A

Minimum Instruction Time : 0

Correct Marks : 1 Wrong Marks : 0.25

Who won the silver medal in Javelin Throw in the Asian Games 2023?

Options :

4058596435. Kishor Kumar Jena

4058596436. Neeraj Chopra

4058596437. Tajinder Pal Singh

4058596438. Murali Sreeshankar

Question Number : 127 Question Id : 4058591974 Question Type : MCQ Option Shuffling : Yes

Is Question Mandatory : No Calculator : None Response Time : N.A Think Time : N.A

Minimum Instruction Time : 0

Correct Marks : 1 Wrong Marks : 0.25

एशियाई खेल-2023 में भाला फेंक प्रतियोगिता में रजत पदक के विजेता कौन हैं?

Options :

4058596435. किशोर कुमार जेना

4058596436. नीरज चोपड़ा

4058596437. तेजिन्दर पाल सिंह

4058596438. मुरली श्रीशंकर

Question Number : 128 Question Id : 4058591975 Question Type : MCQ Option Shuffling : Yes

Is Question Mandatory : No Calculator : None Response Time : N.A Think Time : N.A

Minimum Instruction Time : 0

Correct Marks : 1 Wrong Marks : 0.25

Which one of the following States did NOT have Assembly Elections whose results were declared in December 2023?

Options :

4058596439. Chhattisgarh

4058596440. Rajasthan

4058596441. Madhyapradesh

4058596442. Jharkhand

Question Number : 128 Question Id : 4058591975 Question Type : MCQ Option Shuffling : Yes

Is Question Mandatory : No Calculator : None Response Time : N.A Think Time : N.A

Minimum Instruction Time : 0

Correct Marks : 1 Wrong Marks : 0.25

निम्नलिखित राज्यों में से किस राज्य में विधान सभा चुनाव नहीं हुए जिसके परिणाम दिसम्बर 2023 में घोषित हुए थे?

Options :

4058596439. छत्तीसगढ़

4058596440. राजस्थान

4058596441. मध्य प्रदेश

4058596442. झारखंड

**Question Number : 129 Question Id : 4058591976 Question Type : MCQ Option Shuffling : Yes**

**Is Question Mandatory : No Calculator : None Response Time : N.A Think Time : N.A**

**Minimum Instruction Time : 0**

**Correct Marks : 1 Wrong Marks : 0.25**

It was built in 1924 to welcome King George-V and Queen Mary, represents a fine example of the Indo-Sarcene style of architecture in India.

**Options :**

4058596443. India Gate

4058596444. Aguada Fort

4058596445. Gateway of India

4058596446. Bom Jesus Basilica

**Question Number : 129 Question Id : 4058591976 Question Type : MCQ Option Shuffling : Yes**

**Is Question Mandatory : No Calculator : None Response Time : N.A Think Time : N.A**

**Minimum Instruction Time : 0**

**Correct Marks : 1 Wrong Marks : 0.25**

इसका निर्माण 1924 में किंग जॉर्ज -V तथा क्वीन मेरी का स्वागत करने के लिए किया गया था, यह भारत में इंडो-सारसिनी वास्तुकला का उत्कृष्ट उदाहरण दर्शाता है।

**Options :**

4058596443. इंडिया गेट

4058596444. अगोडा फोर्ट

4058596445. गेटवे ऑफ इंडिया

4058596446. बॉम जीसस बेसिलिका

**Question Number : 130 Question Id : 4058591977 Question Type : MCQ Option Shuffling : Yes**

**Is Question Mandatory : No Calculator : None Response Time : N.A Think Time : N.A**

**Minimum Instruction Time : 0**

**Correct Marks : 1 Wrong Marks : 0.25**

Which one of the following National Parks is wrongly matched with the State it is located in?

**Options :**

4058596447. Kanha National Park - Maharashtra

4058596448. Bandhavgarh National Park - Madhya Pradesh

4058596449. Sunderban National Park - West Bengal

4058596450. Indravati National Park - Chhattisgarh

**Question Number : 130 Question Id : 4058591977 Question Type : MCQ Option Shuffling : Yes**

**Is Question Mandatory : No Calculator : None Response Time : N.A Think Time : N.A**

**Minimum Instruction Time : 0**

**Correct Marks : 1 Wrong Marks : 0.25**

निम्न में से किन राष्ट्रीय पार्कों का उनके अवस्थित राज्यों के अनुसार सही मिलान नहीं किया गया है?

**Options :**

4058596447. कान्हा राष्ट्रीय उद्यान - महाराष्ट्र

4058596448. बाँधवगढ़ राष्ट्रीय उद्यान - मध्य प्रदेश

4058596449. सुंदरबन राष्ट्रीय उद्यान - पश्चिम बंगाल



4058596450. इंदरावती राष्ट्रीय उद्यान - छत्तीसगढ़

**Question Number : 131 Question Id : 4058591978 Question Type : MCQ Option Shuffling : Yes**

**Is Question Mandatory : No Calculator : None Response Time : N.A Think Time : N.A**

**Minimum Instruction Time : 0**

**Correct Marks : 1 Wrong Marks : 0.25**

In France, The Declaration of the Rights of Man and Citizen, painted by the artist Le Barbier in 1790. He used many symbols to express various rights. Identify, which symbol from the following represents symbol of royal power.

**Options :**

4058596451. Phrygian Cap

4058596452. Snake biting its tail to form a ring

4058596453. The winged woman

4058596454. Sceptre

**Question Number : 131 Question Id : 4058591978 Question Type : MCQ Option Shuffling : Yes**

**Is Question Mandatory : No Calculator : None Response Time : N.A Think Time : N.A**

**Minimum Instruction Time : 0**

**Correct Marks : 1 Wrong Marks : 0.25**

फ्रांस में वर्ष 1790 में चित्रकार ली बार्बियर ने पुरुष और नागरिकों के अधिकारों की घोषणा का चित्रांकन किया था। उन्होंने विभिन्न अधिकारों की अभिव्यक्ति के लिए बहुत से प्रतीक चिह्नों का प्रयोग किया था। निम्नांकित में से ज्ञात कीजिए कि किस प्रतीक चिह्न से 'राजसी शक्ति' का निरूपण होता है?

**Options :**

4058596451. फ्राइजियन कैप

4058596452. सर्प द्वारा अपनी पूंछ को दांत से काटते हुए वलय का निर्माण करना

4058596453. पंखयुक्त नारी

4058596454. स्केटर

Question Number : 132 Question Id : 4058591979 Question Type : MCQ Option Shuffling : Yes

Is Question Mandatory : No Calculator : None Response Time : N.A Think Time : N.A

Minimum Instruction Time : 0

Correct Marks : 1 Wrong Marks : 0.25

Match List I with List II

LIST I (Struggles by Gandhiji)		LIST II (Year)	
A.	Travelled to Champaran, Bihar to inspire the indigo peasants against plantation system.	I.	1930
B.	Satyagraha against the proposed Rowlatt Act	II.	1919
C.	Satyagraha movement amongst cotton mill workers	III.	1917
D.	Reached Dandi and violated the Salt Law	IV.	1918

Choose the correct answer from the options given below:

**Options :**

4058596455. A-III, B-II, C-I, D-IV

4058596456. A-III, B-I, C-IV, D-II

4058596457. A-IV, B-II, C-III, D-I

4058596458. A-III, B-II, C-IV, D-I

Question Number : 132 Question Id : 4058591979 Question Type : MCQ Option Shuffling : Yes

**Is Question Mandatory : No Calculator : None Response Time : N.A Think Time : N.A**

**Minimum Instruction Time : 0**

**Correct Marks : 1 Wrong Marks : 0.25**

सूची-I और सूची-II को सुमेलित कीजिए:

सूची-I (गांधीजी के संघर्ष)		सूची-II (वर्ष)	
A.	नील की खेती करने वाले किसानों को प्रेरित करने के लिए बिहार के चंपारण जिले में गए	I.	1930
B.	प्रस्तावित रॉलेट एक्ट के विरुद्ध सत्याग्रह	II.	1919
C.	सूतीवस्त्र मिल कर्मकारों के लिए सत्याग्रह आंदोलन	III.	1917
D.	दांडी यात्रा कर नमक कानून का उल्लंघन किया	IV.	1918

नीचे दिए गए विकल्पों में से सही उत्तर चुनिए:

**Options :**

4058596455. A-III, B-II, C-I, D-IV

4058596456. A-III, B-I, C-IV, D-II

4058596457. A-IV, B-II, C-III, D-I

4058596458. A-III, B-II, C-IV, D-I

**Question Number : 133 Question Id : 4058591980 Question Type : MCQ Option Shuffling : Yes**

**Is Question Mandatory : No Calculator : None Response Time : N.A Think Time : N.A**

**Minimum Instruction Time : 0**

**Correct Marks : 1 Wrong Marks : 0.25**

Who is the author of the book, 'The Mughals of India'?

**Options :**

4058596459. John F. Richards

4058596460. Shireen Moosvi

4058596461. Bamber GasGoigne

4058596462. Harbans Mukhia

**Question Number : 133 Question Id : 4058591980 Question Type : MCQ Option Shuffling : Yes**

**Is Question Mandatory : No Calculator : None Response Time : N.A Think Time : N.A**

**Minimum Instruction Time : 0**

**Correct Marks : 1 Wrong Marks : 0.25**

पुस्तक 'द मुगल्स ऑफ इंडिया' के रचयिता कौन हैं?

**Options :**

4058596459. जॉन एफ. रिचर्ड्स

4058596460. शिरीन मूसवी

4058596461. बेंबर गेसकॉइन

4058596462. हरबंस मुखिया

**Question Number : 134 Question Id : 4058591981 Question Type : MCQ Option Shuffling : Yes**

**Is Question Mandatory : No Calculator : None Response Time : N.A Think Time : N.A**

**Minimum Instruction Time : 0**

**Correct Marks : 1 Wrong Marks : 0.25**

Which of the following is wrongly matched?

Author/Editor - Book

**Options :**

4058596463. Urvashi Butalia - The Other Side of Silence

4058596464. Gyanendra Pandey - The Partitions of India

4058596465. Mushirul Hasan - India's Partition

4058596466. Alok Bhalla - Stories About The Partition of India

**Question Number : 134 Question Id : 4058591981 Question Type : MCQ Option Shuffling : Yes**

**Is Question Mandatory : No Calculator : None Response Time : N.A Think Time : N.A**

**Minimum Instruction Time : 0**

**Correct Marks : 1 Wrong Marks : 0.25**

निम्न में से क्या सुमेलित नहीं है?

रचयिता/संपादक - किताब

**Options :**

4058596463. उर्वशी बुटालिया - द अदर साइड ऑफ साइलेंस

4058596464. ज्ञानेन्द्र पांडे - द पार्टिशन ऑफ इंडिया

4058596465. मुशीरुल हसन - इंडियास पार्टिशन

4058596466. आलोक भल्ला - स्टोरिज़ अबाउट द पार्टिशन ऑफ इंडिया

**Question Number : 135 Question Id : 4058591982 Question Type : MCQ Option Shuffling : Yes**

**Is Question Mandatory : No Calculator : None Response Time : N.A Think Time : N.A**

**Minimum Instruction Time : 0**

**Correct Marks : 1 Wrong Marks : 0.25**

Granite is an example of \_\_\_\_\_.

**Options :**

4058596467. Intrusive igneous rocks

4058596468. Extrusive igneous rocks

4058596469. Sedimentary rocks

4058596470. Metamorphic rocks

**Question Number : 135 Question Id : 4058591982 Question Type : MCQ Option Shuffling : Yes**

**Is Question Mandatory : No Calculator : None Response Time : N.A Think Time : N.A**

**Minimum Instruction Time : 0**

**Correct Marks : 1 Wrong Marks : 0.25**

ग्रेनाइट (कणाश्म) \_\_\_\_\_ का एक उदाहरण हैं।

**Options :**

4058596467. अन्तर्वेधी, आग्नेय चट्टानों

4058596468. बहिर्वेधी, आग्नेय चट्टानों

4058596469. अवसादी चट्टानों

4058596470. रूपान्तरित चट्टानों

**Question Number : 136 Question Id : 4058591983 Question Type : MCQ Option Shuffling : Yes**

**Is Question Mandatory : No Calculator : None Response Time : N.A Think Time : N.A**

**Minimum Instruction Time : 0**

**Correct Marks : 1 Wrong Marks : 0.25**

The Standard Meridian of India ( $82^{\circ} 30' E$ ) passes through :

**Options :**

4058596471. Bhopal

4058596472. Mahendragiri

4058596473. Mirzapur

4058596474. Chhattisgarh

**Question Number : 136 Question Id : 4058591983 Question Type : MCQ Option Shuffling : Yes**

**Is Question Mandatory : No Calculator : None Response Time : N.A Think Time : N.A**

**Minimum Instruction Time : 0**

**Correct Marks : 1 Wrong Marks : 0.25**

भारत की मानक याम्योत्तर रेखा ( $82^{\circ} 30'$  पूर्व) \_\_\_\_\_ से होकर गुजरती है।

**Options :**

4058596471. भोपाल

4058596472. महेन्द्रगिरि

4058596473. मिर्ज़ापुर

4058596474. छत्तीसगढ़

**Question Number : 137 Question Id : 4058591984 Question Type : MCQ Option Shuffling : Yes**

**Is Question Mandatory : No Calculator : None Response Time : N.A Think Time : N.A**

**Minimum Instruction Time : 0**

**Correct Marks : 1 Wrong Marks : 0.25**

Which of the following is not a feature made by a river in a flood plain?

**Options :**

4058596475. Levees

4058596476. Ox bow lake

4058596477. Meander

4058596478. Glaciers

**Question Number : 137 Question Id : 4058591984 Question Type : MCQ Option Shuffling : Yes**

**Is Question Mandatory : No Calculator : None Response Time : N.A Think Time : N.A**

**Minimum Instruction Time : 0**

**Correct Marks : 1 Wrong Marks : 0.25**

बाढ़ वाले मैदानी क्षेत्र में नदी से निम्नांकित में से किसका निर्माण नहीं होता है?

**Options :**

4058596475. तटबंध

4058596476. ऑक्स बो लेक (विशाल धनुषाकार झील)

4058596477. विसर्पण

4058596478. ग्लेशियर (हिमनद)

**Question Number : 138 Question Id : 4058591985 Question Type : MCQ Option Shuffling : Yes**

**Is Question Mandatory : No Calculator : None Response Time : N.A Think Time : N.A**

**Minimum Instruction Time : 0**

**Correct Marks : 1 Wrong Marks : 0.25**

Odometer in vehicle measures :

**Options :**

4058596479. Odour



4058596480. Speed

4058596481. Fuel level

4058596482. Distance moved

**Question Number : 138 Question Id : 4058591985 Question Type : MCQ Option Shuffling : Yes**

**Is Question Mandatory : No Calculator : None Response Time : N.A Think Time : N.A**

**Minimum Instruction Time : 0**

**Correct Marks : 1 Wrong Marks : 0.25**

वाइन में 'ओडोमीटर' किसका मापक है?

**Options :**

4058596479. गंध

4058596480. चाल

4058596481. ईंधन का स्तर

4058596482. तय की गई दूरी

**Question Number : 139 Question Id : 4058591986 Question Type : MCQ Option Shuffling : Yes**

**Is Question Mandatory : No Calculator : None Response Time : N.A Think Time : N.A**

**Minimum Instruction Time : 0**

**Correct Marks : 1 Wrong Marks : 0.25**

Match the items given in Column I with those in Column II.

Column I		Column II	
A.	Autotrophs	I.	Animals
B.	Heterotrophs	II.	Fungi
C.	Parasite	III.	Plants
D.	Saprotrophs	IV.	Mosquito

Choose the correct answer from the options given below:

**Options :**

4058596483. A-I, B-II, C-III, D-IV

4058596484. A-III, B-II, C-IV, D-I

4058596485. A-III, B-I, C-IV, D-II

4058596486. A-III, B-II, C-IV, D-I

**Question Number : 139 Question Id : 4058591986 Question Type : MCQ Option Shuffling : Yes**

**Is Question Mandatory : No Calculator : None Response Time : N.A Think Time : N.A**

**Minimum Instruction Time : 0**

**Correct Marks : 1 Wrong Marks : 0.25**

स्तंभ I और स्तंभ II के मदों को सुमेलित कीजिए:

स्तंभ I		स्तंभ II	
A.	स्वपोषी	I.	जन्तु
B.	विषम पोषी	II.	कवक
C.	परजीवी	III.	पादप
D.	मृतपोषी	IV.	मच्छर

नीचे दिए गए विकल्पों में से सही उत्तर चुनिए:

**Options :**

4058596483. A-I, B-II, C-III, D-IV

4058596484. A-III, B-II, C-IV, D-I

4058596485. A-III, B-I, C-IV, D-II

4058596486. A-III, B-II, C-IV, D-I

**Question Number : 140 Question Id : 4058591987 Question Type : MCQ Option Shuffling : Yes**

**Is Question Mandatory : No Calculator : None Response Time : N.A Think Time : N.A**

**Minimum Instruction Time : 0**

**Correct Marks : 1 Wrong Marks : 0.25**

Tiny pores present on the surface of leaves through which carbon dioxide is taken in is called as :

**Options :**

4058596487. stomata

4058596488. guard cell

4058596489. chlorophyll

4058596490. cytoplasm

**Question Number : 140 Question Id : 4058591987 Question Type : MCQ Option Shuffling : Yes**

**Is Question Mandatory : No Calculator : None Response Time : N.A Think Time : N.A**

**Minimum Instruction Time : 0**

**Correct Marks : 1 Wrong Marks : 0.25**

पत्तियों के पृष्ठ पर छोटे (सूक्ष्म) रंध्र जिससे होकर कार्बनडाइऑक्साइड ग्रहण किया जाता है, कहलाता है:

**Options :**

4058596487. स्टोमैटा (रंध्रक)

4058596488. गार्डसेल (रक्षा कोशिका)

4058596489. हरित लवक (क्लोरोफिल)

4058596490. कोशिका द्रव्य (साइटोप्लाज्म)

**Question Number : 141 Question Id : 4058591988 Question Type : MCQ Option Shuffling : Yes**

**Is Question Mandatory : No Calculator : None Response Time : N.A Think Time : N.A**

**Minimum Instruction Time : 0**

**Correct Marks : 1 Wrong Marks : 0.25**

Consider the following statements in respect of MS word :

(A) To deselect text, one has to click on any area outside the selected area.

(B) To change the size of a word, one has to press the font style drop down arrow.

Which of the above statements is/are correct?

**Options :**

4058596491. Only (A) is correct.

4058596492. Only (B) is correct.

4058596493. Both (A) and (B) are correct.

4058596494. Neither (A) nor (B) is correct.

**Question Number : 141 Question Id : 4058591988 Question Type : MCQ Option Shuffling : Yes**

**Is Question Mandatory : No Calculator : None Response Time : N.A Think Time : N.A**

**Minimum Instruction Time : 0**

**Correct Marks : 1 Wrong Marks : 0.25**

एम. एस. वर्ड के संदर्भ में निम्नांकित कथनों पर विचार कीजिए:

(A) टेक्स्ट को डिसेलेक्ट करने के लिए सेलेक्ट किए गए क्षेत्र के बाहर किसी भी क्षेत्र में क्लिक किया जाता है।

(B) वर्ड का साइज बदलने के लिए फॉन्ट स्टाइल ड्रॉपडाउन ऐरो को प्रेस करना पड़ता है।

उपर्युक्त में से कौन सा/से कथन सही है/हैं?

**Options :**

4058596491. केवल (A) सही है।

4058596492. केवल (B) सही है।

4058596493. (A) और (B) दोनों सही हैं।

4058596494. न तो (A) सही न ही (B) सही है।

**Question Number : 142 Question Id : 4058591989 Question Type : MCQ Option Shuffling : Yes**

**Is Question Mandatory : No Calculator : None Response Time : N.A Think Time : N.A**

**Minimum Instruction Time : 0**

**Correct Marks : 1 Wrong Marks : 0.25**

Match the following column I with column II.

Column I		Column II	
A.	Hard disk	I.	Input device
B.	Monitor	II.	Processor
C.	Microphone	III.	Storage
D.	CPU	IV.	Output device

Choose the correct answer from the options given below:

**Options :**

4058596495. A-III, B-IV, C-II, D-I

4058596496. A-III, B-IV, C-I, D-II

4058596497. A-I, B-III, C-II, D-IV

4058596498. A-II, B-I, C-IV, D-III

**Question Number : 142 Question Id : 4058591989 Question Type : MCQ Option Shuffling : Yes**

**Is Question Mandatory : No Calculator : None Response Time : N.A Think Time : N.A**

**Minimum Instruction Time : 0**

**Correct Marks : 1 Wrong Marks : 0.25**

कॉलम I और कॉलम II को सुमेलित कीजिए:

कॉलम I		कॉलम II	
A.	हार्ड डिस्क	I.	इनपुट डिवाइस
B.	मॉनिटर	II.	प्रोसेसर
C.	माइक्रोफोन	III.	भंडारण
D.	सीपीयू	IV.	आउटपुट डिवाइस

**Options :**

4058596495. A-III, B-IV, C-II, D-I

4058596496. A-III, B-IV, C-I, D-II

4058596497. A-I, B-III, C-II, D-IV

4058596498. A-II, B-I, C-IV, D-III

**Question Number : 143 Question Id : 4058591990 Question Type : MCQ Option Shuffling : Yes**

**Is Question Mandatory : No Calculator : None Response Time : N.A Think Time : N.A**

**Minimum Instruction Time : 0**

**Correct Marks : 1 Wrong Marks : 0.25**

Federalism in the Constitution of India, refers to which of the following?

**Options :**

4058596499.

All adult (18 years and above) citizens of India have the right to vote irrespective of their social and economic backgrounds.

4058596500. India does not officially promote any one religion as the state religion.

4058596501. Existence of more than one level of government in India.

4058596502. Three organs of government in India are - the legislature, the executive and the judiciary.

**Question Number : 143 Question Id : 4058591990 Question Type : MCQ Option Shuffling : Yes**

**Is Question Mandatory : No Calculator : None Response Time : N.A Think Time : N.A**

**Minimum Instruction Time : 0**

**Correct Marks : 1 Wrong Marks : 0.25**

भारत के संविधान में संघवाद निम्नलिखित में से किसे संदर्भित करता है?

**Options :**

4058596499. किसी भी सामाजिक तथा आर्थिक पृष्ठभूमि से आने वाले भारत के सभी वयस्क (18 वर्ष और ऊपर) नागरिकों को मतदान का अधिकार प्राप्त है।

4058596500. भारत आधिकारिक रूप से किसी भी एक धर्म को राज्य के धर्म के रूप में बढ़ावा नहीं देता है।

4058596501. भारत में सरकार का एक से अधिक स्तर की सरकार विद्यमान है।

4058596502. भारत में सरकार के तीन अंग विधान मंडल कार्यपालिका और न्यायपालिका हैं।

**Question Number : 144 Question Id : 4058591991 Question Type : MCQ Option Shuffling : Yes**

**Is Question Mandatory : No Calculator : None Response Time : N.A Think Time : N.A**

**Minimum Instruction Time : 0**

**Correct Marks : 1 Wrong Marks : 0.25**

Which among the following statements is NOT correct about the Rajya Sabha?

- A. It is the representative of the States of India in the Parliament.
- B. A legislation cannot be initiated in the Rajya Sabha.
- C. 12 members to the Rajya Sabha are nominated by the President of India.
- D. The members of the Rajya Sabha are elected by the Judges of the Supreme Court of India and the State High Courts.

Choose the correct answer from the options given below :

**Options :**

4058596503. A and B only

4058596504. B and C only

4058596505. A and C only

4058596506. B and D only

**Question Number : 144 Question Id : 4058591991 Question Type : MCQ Option Shuffling : Yes**

**Is Question Mandatory : No Calculator : None Response Time : N.A Think Time : N.A**

**Minimum Instruction Time : 0**

**Correct Marks : 1 Wrong Marks : 0.25**

राज्य सभा के बारे में निम्नलिखित कथनों में से कौन-सा/से कथन सही नहीं हैं?

- A. यह संसद में भारत के राज्यों का प्रतिनिधि है।
- B. राज्य सभा में विधान-निर्माण प्रारम्भ नहीं किया जा सकता है।
- C. भारत के राष्ट्रपति द्वारा राज्य सभा के लिए 12 सदस्य मनोनीत किए जाते हैं।
- D. राज्य सभा के सदस्य उच्चतम न्यायालय और राज्य के उच्च न्यायालयों के द्वारा निर्वाचित किए जाते हैं।

निम्नलिखित विकल्पों में से सही उत्तर चुनिए:

**Options :**

4058596503. केवल A और B

4058596504. केवल B और C



4058596505. केवल A और C

4058596506. केवल B और D

**Question Number : 145 Question Id : 4058591992 Question Type : MCQ Option Shuffling : Yes**

**Is Question Mandatory : No Calculator : None Response Time : N.A Think Time : N.A**

**Minimum Instruction Time : 0**

**Correct Marks : 1 Wrong Marks : 0.25**

Which of the following was the first State in India to introduce the midday meal scheme in all government elementary schools to provide children with cooked lunch?

**Options :**

4058596507. Andhra Pradesh

4058596508. Tamil Nadu

4058596509. Kerala

4058596510. Karnataka

**Question Number : 145 Question Id : 4058591992 Question Type : MCQ Option Shuffling : Yes**

**Is Question Mandatory : No Calculator : None Response Time : N.A Think Time : N.A**

**Minimum Instruction Time : 0**

**Correct Marks : 1 Wrong Marks : 0.25**

निम्नलिखित में से/वह भारत का कौन सा राज्य है जिसने सभी सरकारी प्राथमिक विद्यालयों में बच्चों को पका हुआ मध्याह्न भोजन प्रदान करने के लिए मध्याह्न भोजन योजना का प्रारंभ किया था?

**Options :**

4058596507. आंध्र प्रदेश

4058596508. तमिलनाडु

4058596509. केरल

4058596510. कर्नाटक

**Question Number : 146 Question Id : 4058591993 Question Type : MCQ Option Shuffling : Yes**

**Is Question Mandatory : No Calculator : None Response Time : N.A Think Time : N.A**

**Minimum Instruction Time : 0**

**Correct Marks : 1 Wrong Marks : 0.25**

Chaudhary Devi Lal, led a movement called 'Nyaya Yudh' and formed which new party among the following?

**Options :**

4058596511. Nationalist Congress Party

4058596512. Bahujan Samaj Party

4058596513. Janta Dal

4058596514. Lok Dal

**Question Number : 146 Question Id : 4058591993 Question Type : MCQ Option Shuffling : Yes**

**Is Question Mandatory : No Calculator : None Response Time : N.A Think Time : N.A**

**Minimum Instruction Time : 0**

**Correct Marks : 1 Wrong Marks : 0.25**

चौधरी देवी लाल ने 'न्याय युद्ध' नामक एक आंदोलन चलाया और निम्नलिखित में से किस नई पार्टी का गठन किया?

**Options :**

4058596511. नेशनलिस्ट काँग्रेस पार्टी

4058596512. बहुजन समाज पार्टी

4058596513. जनता दल

4058596514. लोक दल

**Question Number : 147 Question Id : 4058591994 Question Type : MCQ Option Shuffling : Yes**

**Is Question Mandatory : No Calculator : None Response Time : N.A Think Time : N.A**

**Minimum Instruction Time : 0**

**Correct Marks : 1 Wrong Marks : 0.25**

When was the office memorandum, reserving 27 percent of the vacancies in civil posts and services under the Government of India for the socially and educationally backward classes (SEBC), issued by the Government of India?

**Options :**

4058596515. 1990

4058596516. 1992

4058596517. 1995

4058596518. 1998

**Question Number : 147 Question Id : 4058591994 Question Type : MCQ Option Shuffling : Yes**

**Is Question Mandatory : No Calculator : None Response Time : N.A Think Time : N.A**

**Minimum Instruction Time : 0**

**Correct Marks : 1 Wrong Marks : 0.25**

भारत सरकार ने सामाजिक और शैक्षणिक रूप से पिछड़े वर्गों (एसईबीसी) के लिए भारत सरकार के अंतर्गत सिविल पदों और सेवाओं में रिक्तियों का 27 प्रतिशत आरक्षित करने का कार्यालय ज्ञापन कब जारी किया?

**Options :**

4058596515. 1990

4058596516. 1992

4058596517. 1995

4058596518. 1998

**Question Number : 148 Question Id : 4058591995 Question Type : MCQ Option Shuffling : Yes**

**Is Question Mandatory : No Calculator : None Response Time : N.A Think Time : N.A**

**Minimum Instruction Time : 0**

**Correct Marks : 1 Wrong Marks : 0.25**

What is known as Fixed Capital?

**Options :**

4058596519. Land and other natural resources

4058596520. Tools, machines and buildings

4058596521. Raw material and money in hand

4058596522. Educated/uneducated workers

**Question Number : 148 Question Id : 4058591995 Question Type : MCQ Option Shuffling : Yes**

**Is Question Mandatory : No Calculator : None Response Time : N.A Think Time : N.A**

**Minimum Instruction Time : 0**

**Correct Marks : 1 Wrong Marks : 0.25**

नियत पूँजी के रूप में किसे जाना जाता है?

**Options :**

4058596519. भूमि एवं अन्य प्राकृतिक संसाधन

4058596520. उपकरण, यंत्र एवं भवन

4058596521. कच्चे माल और हस्तगत धन

4058596522. शिक्षित/अशिक्षित कामगार

**Question Number : 149 Question Id : 4058591996 Question Type : MCQ Option Shuffling : Yes**

**Is Question Mandatory : No Calculator : None Response Time : N.A Think Time : N.A**

**Minimum Instruction Time : 0**

**Correct Marks : 1 Wrong Marks : 0.25**

The Trade Policy Reforms are aimed at which of the following :

- A. Dismantling quantitative restrictions on import and exports
- B. Reduction of tariff rates
- C. Removal of licensing procedures for imports

Choose the correct answer from the options given below :

**Options :**

4058596523. A and B only

4058596524. B and C only

4058596525. A and C only

4058596526. A, B and C

Question Number : 149 Question Id : 4058591996 Question Type : MCQ Option Shuffling : Yes

Is Question Mandatory : No Calculator : None Response Time : N.A Think Time : N.A

Minimum Instruction Time : 0

Correct Marks : 1 Wrong Marks : 0.25

निम्नलिखित में से किस पर व्यापार नीति सुधार लक्षित किए जाते हैं?

- A. आयात एवं निर्यात पर मात्रात्मक प्रतिबन्धों का खण्डन
- B. प्रशुल्क दरों की कमी
- C. आयात हेतु अनुज्ञप्तिकरण प्रक्रियाओं का निष्कासन

दिए गए विकल्पों में से सही उत्तर चुनिए:

Options :

4058596523. केवल A और B

4058596524. केवल B और C

4058596525. केवल A और C

4058596526. A, B और C

Question Number : 150 Question Id : 4058591997 Question Type : MCQ Option Shuffling : Yes

Is Question Mandatory : No Calculator : None Response Time : N.A Think Time : N.A

Minimum Instruction Time : 0

Correct Marks : 1 Wrong Marks : 0.25

A 'Perspective Plan' spelling out some general goals as well as specific economic objectives to be achieved by the government, is for which of the following period of time?

Options :

4058596527. 1 year

4058596528. 5 years

4058596529. 20 years

4058596530. 25 years

**Question Number : 150 Question Id : 4058591997 Question Type : MCQ Option Shuffling : Yes**

**Is Question Mandatory : No Calculator : None Response Time : N.A Think Time : N.A**

**Minimum Instruction Time : 0**

**Correct Marks : 1 Wrong Marks : 0.25**

सरकार द्वारा कुछ साधारण लक्ष्य के साथ-साथ विशिष्ट आर्थिक उपलब्धियों को प्राप्त करने के उद्देश्य वाली परिप्रेक्ष्य योजना निम्नलिखित में से किस समयावधि हेतु होती है?

**Options :**

4058596527. 1 वर्ष

4058596528. 5 वर्ष

4058596529. 20 वर्ष

4058596530. 25 वर्ष